

Candidate Forename		Candidate Surname	
-------------------------------	--	------------------------------	--

Centre Number						Candidate Number				
--------------------------	--	--	--	--	--	-----------------------------	--	--	--	--

**OXFORD CAMBRIDGE AND RSA EXAMINATIONS
GENERAL CERTIFICATE OF SECONDARY EDUCATION**

B275A

**MATHEMATICS C
(GRADUATED ASSESSMENT)**

MODULE M5 – SECTION A

THURSDAY 21 JANUARY 2010: Afternoon

DURATION: 30 minutes

SUITABLE FOR VISUALLY IMPAIRED CANDIDATES

Candidates answer on the Question Paper

OCR SUPPLIED MATERIALS:

None

OTHER MATERIALS REQUIRED:

Geometrical instruments

Tracing paper (optional)

Pie chart scale (optional)

WARNING

**No calculator can be used for
Section A of this paper**

READ INSTRUCTIONS OVERLEAF

INSTRUCTIONS TO CANDIDATES

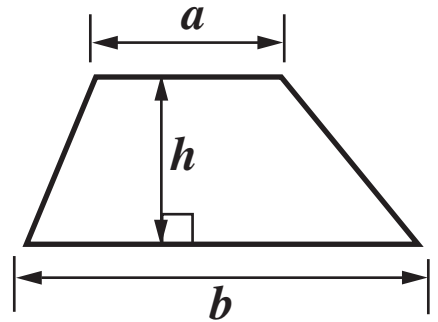
- **Write your name clearly in capital letters, your Centre Number and Candidate Number in the boxes on the first page.**
- **Use black ink. Pencil may be used for graphs and diagrams only.**
- **Read each question carefully and make sure that you know what you have to do before starting your answer.**
- **Show your working. Marks may be given for a correct method even if the answer is incorrect.**
- **Answer ALL the questions.**
- **Write your answer to each question in the space provided, however additional paper may be used if necessary.**

INFORMATION FOR CANDIDATES

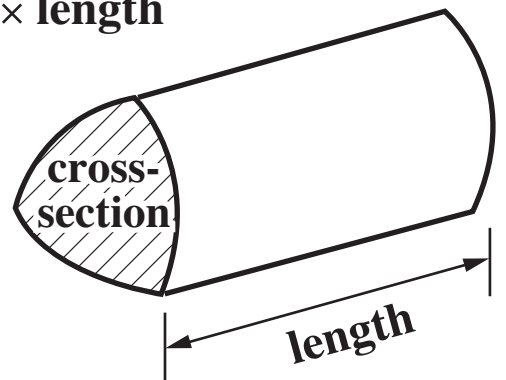
- **The number of marks is given in brackets [] at the end of each question or part question.**
- **The total number of marks for this Section is 25.**

Formulae Sheet

Area of trapezium = $\frac{1}{2} (a + b)h$



Volume of prism = (area of cross-section) \times length



1 Work out.

(a) 8^2
[1 mark]

(a) _____

(b) 2^3
[1 mark]

(b) _____

- 2 (a) Write $\frac{6}{5}$ as a mixed number.
[1 mark]

(a) _____

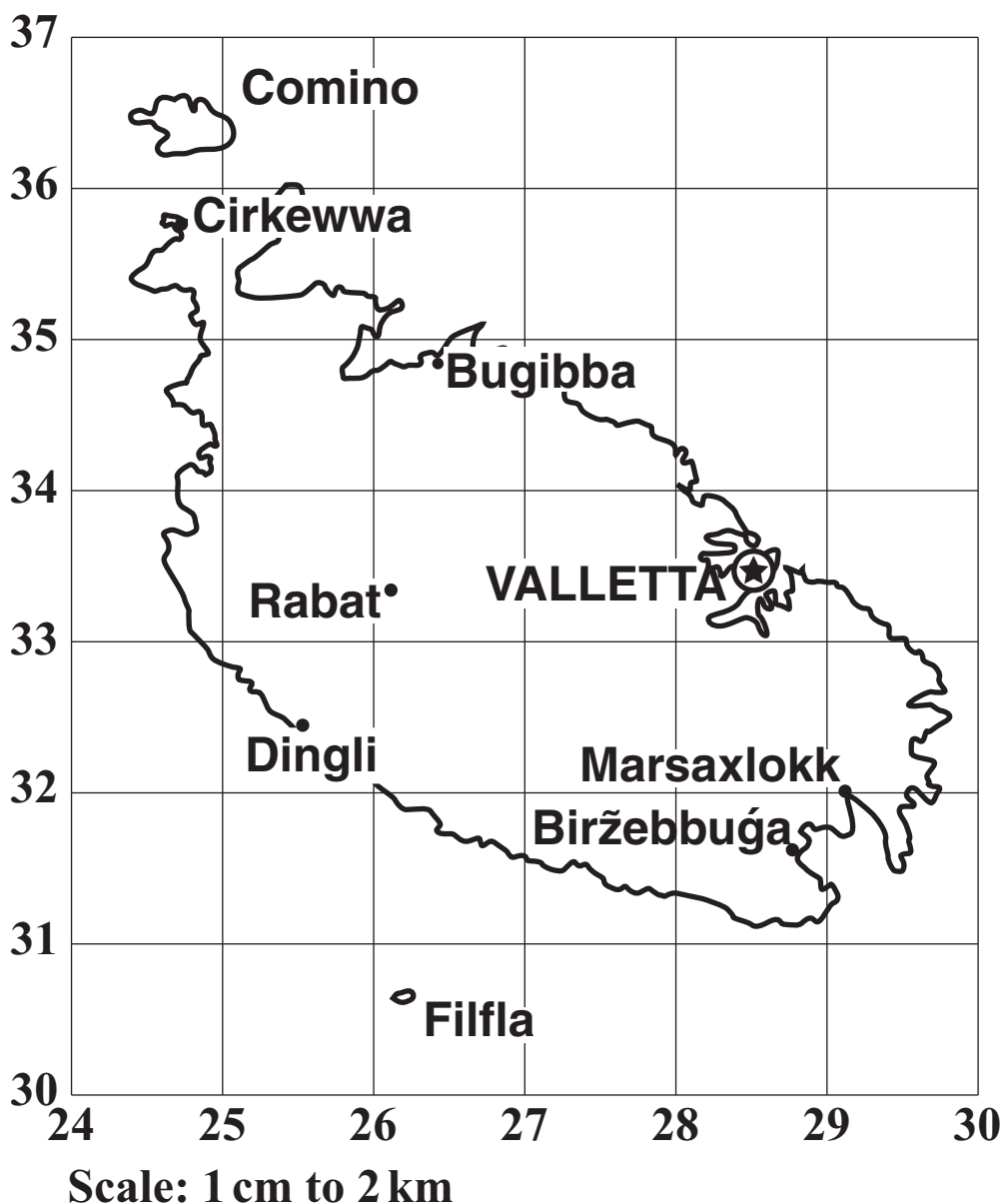
- (b) Work out.

$$\frac{3}{4} \times \frac{1}{5}$$

[1 mark]

(b) _____

- 3 (a) This is a map of Malta.
It is drawn to a scale of 1 cm to 2 km.



- (i) What is the name of the town in square 2532?
[1 mark]

(a)(i) _____

- (ii) In which square is the island of Filfla?
[1 mark]

(ii) _____

- (iii) What is the REAL direct distance from Valletta to Rabat?
[2 marks]

(iii) _____ km

- (b) The population of Malta is 401 880.

Write 401 880 to the nearest thousand.
[1 mark]

(b) _____


- (c) Malta has 196.8 km of coastline.

Write 196.8 to one significant figure.
[1 mark]

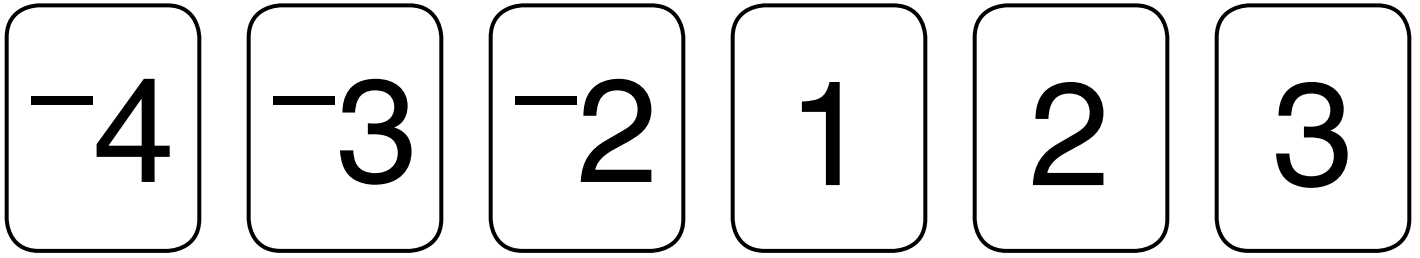
(c) _____

- (d) A Maltese cross has rotation symmetry of order 4 about its centre (●).

Complete this diagram to show a Maltese cross.
[2 marks]



4 Here are some number cards.



(a) Use some of the cards to complete these calculations.
[2 marks]

$$\boxed{-4} - \boxed{} = -6$$

$$\boxed{} + \boxed{} = 1$$

(b) Philip wants to make the highest possible answer to a multiplication using two of these cards.

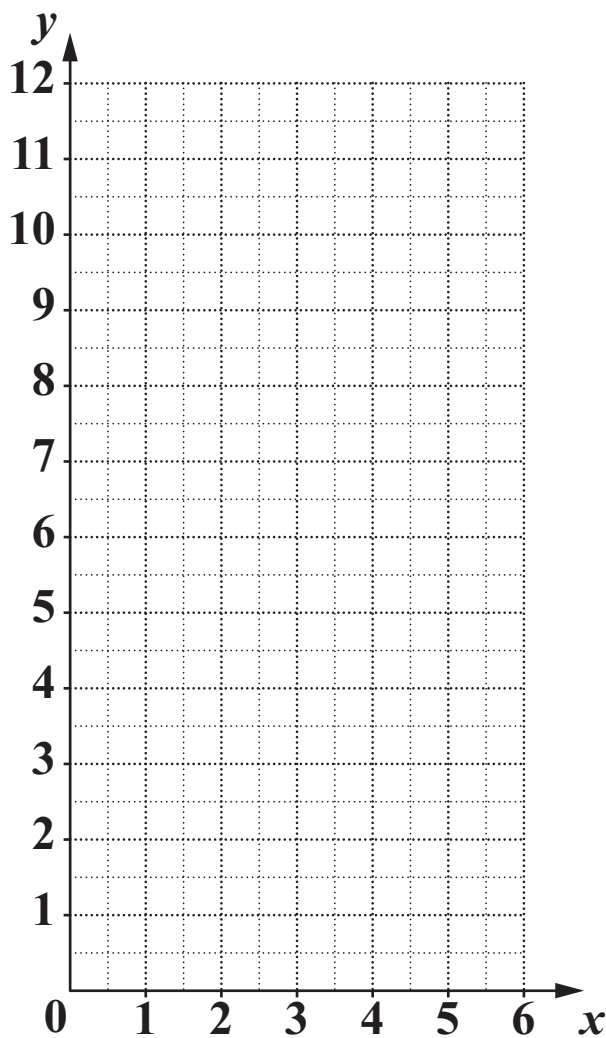
Complete the calculation to give the highest possible answer.
[2 marks]

$$\boxed{} \times \boxed{} = \underline{\hspace{2cm}}$$

- 5 (a) Complete this table for $y = 9 - 2x$.
[1 mark]

x	0	2	4
y	9		

- (b) Draw the graph of $y = 9 - 2x$.
[2 marks]

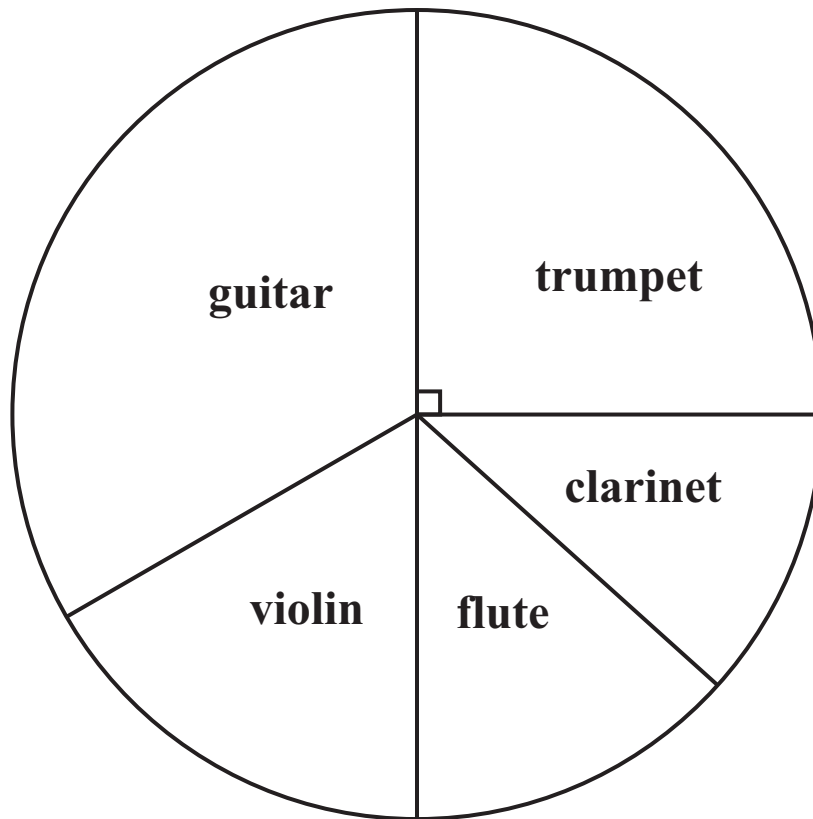


- (c) Use your graph to find the value of x when $y = 6$.
[1 mark]

(c) _____

6 Ciara asked each of a group of musicians which instrument they play best.

(a) This pie chart represents her results.



**(i) Which instrument was the most common answer?
[1 mark]**

(a)(i) _____

(ii) 15 of the group play the trumpet best.

**How many people did Ciara ask altogether?
[2 marks]**

(ii) _____

(b) Ciara states:

People who play wind instruments can hold their breath for longer than people who play string instruments.

Ciara tests the group of musicians to find the length of time they can hold their breath.

The table summarises her results.

Length of time (seconds) people held their breath			
	Mean	Median	Range
Wind players	46	47	28
String players	41	43	31

(i) Is Ciara's statement true?

Explain how you can tell from the information in the table.

[1 mark]

_____ because _____

- (ii) For which set of players are the times more spread out?
Explain how you know.
[1 mark]

*Write Wind
or String.*

_____ because _____



Copyright Information

OCR is committed to seeking permission to reproduce all third-party content that it uses in its assessment materials. OCR has attempted to identify and contact all copyright holders whose work is used in this paper. To avoid the issue of disclosure of answer-related information to candidates, all copyright acknowledgements are reproduced in the OCR Copyright Acknowledgements Booklet. This is produced for each series of examinations, is given to all schools that receive assessment material and is freely available to download from our public website (www.ocr.org.uk) after the live examination series.

If OCR has unwittingly failed to correctly acknowledge or clear any third-party content in this assessment material, OCR will be happy to correct its mistake at the earliest possible opportunity.

For queries or further information please contact the Copyright Team, First Floor, 9 Hills Road, Cambridge CB2 1GE.

OCR is part of the Cambridge Assessment Group; Cambridge Assessment is the brand name of University of Cambridge Local Examinations Syndicate (UCLES), which is itself a department of the University of Cambridge.