

**GENERAL CERTIFICATE OF SECONDARY EDUCATION**  
**MATHEMATICS C (GRADUATED ASSESSMENT)**  
MODULE M7 – SECTION B

**B277B**

Candidates answer on the Question Paper

**OCR Supplied Materials:**

None

**Other Materials Required:**

- Geometrical instruments
- Tracing paper (optional)
- Scientific or graphical calculator

**Thursday 21 January 2010**  
**Afternoon**

**Duration: 30 minutes**



Candidate Forename		Candidate Surname	
--------------------	--	-------------------	--

Centre Number						Candidate Number				
---------------	--	--	--	--	--	------------------	--	--	--	--

**MODIFIED LANGUAGE**

**INSTRUCTIONS TO CANDIDATES**

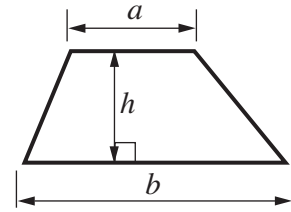
- Write your name clearly in capital letters, your Centre Number and Candidate Number in the boxes above.
- Use black ink. Pencil may be used for graphs and diagrams only.
- Read each question carefully and make sure that you know what you have to do before starting your answer.
- Show your working. Marks may be given for a correct method even if the answer is incorrect.
- Answer **all** the questions.
- Do **not** write in the bar codes.
- Write your answer to each question in the space provided, however additional paper may be used if necessary.

**INFORMATION FOR CANDIDATES**

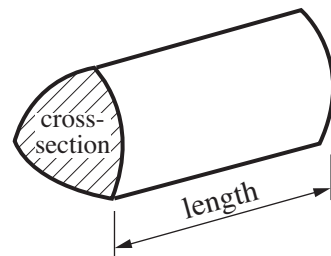
- The number of marks is given in brackets [ ] at the end of each question or part question.
- Section B starts with question 10.
- You are expected to use a calculator in Section B of this paper.
- Use the  $\pi$  button on your calculator or take  $\pi$  to be 3.142 unless the question says otherwise.
- The total number of marks for this Section is **25**.
- This document consists of **8** pages. Any blank pages are indicated.

## Formulae Sheet

**Area of trapezium** =  $\frac{1}{2} (a + b)h$



**Volume of prism** = (area of cross-section)  $\times$  length



**PLEASE DO NOT WRITE ON THIS PAGE**

10 (a) Solve.

$$3(2x + 7) = 15$$

(a) ..... [3]

(b) Expand.

$$(x + 5)(x - 3)$$

(b) ..... [2]

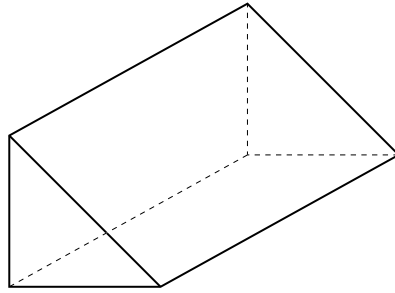
11 Holders of a leisure card can visit various attractions at a reduced price.

Complete this table.

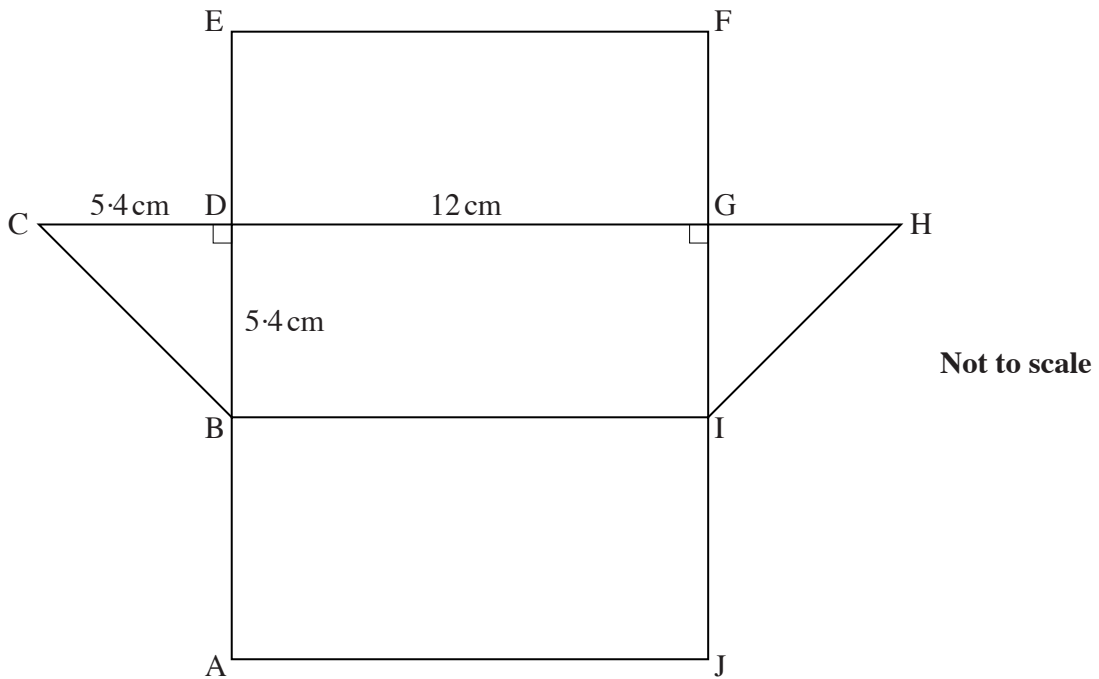
	Normal price	Reduced price	Percentage saving
Toy museum	£5.50	£4.40	20%
River cruise	£8.00	£ .....	35%
City tour	£6.00	£5.25	..... %

[6]

- 12 This container is a prism.  
The cross-section is a right-angled isosceles triangle.



This is a sketch of the net of the container.  
 $CD = 5.4\text{ cm}$ ,  $DB = 5.4\text{ cm}$  and  $DG = 12\text{ cm}$ .



- (a) Calculate the length BC.

(a) ..... cm [3]

(b) Calculate the volume of the container.

(b) .....cm<sup>3</sup> [3]

- 13** A clinic keeps a record of how long patients have to wait before the doctor sees them. These are the results for 75 patients.

Time in minutes	Frequency
Less than 10 minutes	15
10 to 20 minutes	35
More than 20 minutes	25

- (a) What is the probability that a patient, chosen at random, will wait more than 20 minutes?

(a) ..... [1]

- (b) One day 30 patients go to the clinic.

How many would you expect to have to wait for more than 20 minutes?

(b) ..... [2]

- 14 Eighty motorists were asked to estimate the distance they each drive in a year. The results are summarised in the table.

Distance in miles ( $m$ thousands)	Frequency
$0 < m \leq 5$	16
$5 < m \leq 10$	38
$10 < m \leq 15$	18
$15 < m \leq 20$	6
$20 < m \leq 25$	2

- (a) Calculate an estimate of the **mean** distance.

(a) ..... thousand miles [4]

- (b) Explain how you can use the table to justify this statement.

The median distance is in the interval  $5 < m \leq 10$ .

.....  
 ..... [1]

**PLEASE DO NOT WRITE ON THIS PAGE**



**Copyright Information**

OCR is committed to seeking permission to reproduce all third-party content that it uses in its assessment materials. OCR has attempted to identify and contact all copyright holders whose work is used in this paper. To avoid the issue of disclosure of answer-related information to candidates, all copyright acknowledgements are reproduced in the OCR Copyright Acknowledgements Booklet. This is produced for each series of examinations, is given to all schools that receive assessment material and is freely available to download from our public website ([www.ocr.org.uk](http://www.ocr.org.uk)) after the live examination series.

If OCR has unwittingly failed to correctly acknowledge or clear any third-party content in this assessment material, OCR will be happy to correct its mistake at the earliest possible opportunity.

For queries or further information please contact the Copyright Team, First Floor, 9 Hills Road, Cambridge CB2 1GE.

OCR is part of the Cambridge Assessment Group; Cambridge Assessment is the brand name of University of Cambridge Local Examinations Syndicate (UCLES), which is itself a department of the University of Cambridge.