

GENERAL CERTIFICATE OF SECONDARY EDUCATION
MATHEMATICS C (GRADUATED ASSESSMENT)
MODULE M1 – SECTION A

B271A

Candidates answer on the Question Paper

OCR Supplied Materials:

None

Other Materials Required:

- Geometrical instruments
- Tracing paper (optional)

Thursday 21 January 2010
Afternoon

Duration: 30 minutes



Candidate Forename		Candidate Surname	
--------------------	--	-------------------	--

Centre Number						Candidate Number				
---------------	--	--	--	--	--	------------------	--	--	--	--

MODIFIED LANGUAGE


INSTRUCTIONS TO CANDIDATES

- Write your name clearly in capital letters, your Centre Number and Candidate Number in the boxes above.
- Use black ink. Pencil may be used for graphs and diagrams only.
- Read each question carefully and make sure that you know what you have to do before starting your answer.
- Show your working. Marks may be given for a correct method even if the answer is incorrect.
- Answer **all** the questions.
- Do **not** write in the bar codes.
- Write your answer to each question in the space provided, however additional paper may be used if necessary.

INFORMATION FOR CANDIDATES

- The number of marks is given in brackets [] at the end of each question or part question.
- The total number of marks for this Section is **25**.
- This document consists of **12** pages. Any blank pages are indicated.

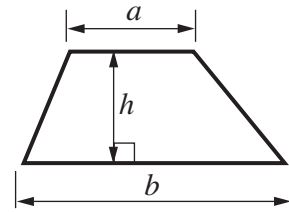
WARNING



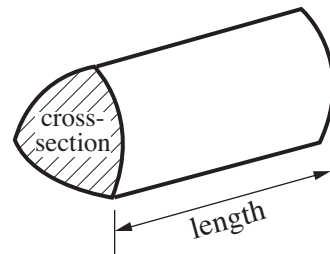
No calculator can be used for Section A of this paper

Formulae Sheet

$$\text{Area of trapezium} = \frac{1}{2} (a + b)h$$



$$\text{Volume of prism} = (\text{area of cross-section}) \times \text{length}$$



PLEASE DO NOT WRITE ON THIS PAGE

1 Work out.

(a) $52 + 15$

(a) [1]

(b) $71 - 23$

(b) [1]

(c) 7×5

(c) [1]

(d) $18 \div 3$

(d) [1]

2 Jenna has these three letter tiles.

N

B

I

Jenna puts these three tiles in a line.

- (a) Write down all the ways she can do this.
One has been done for you.

N	B	I

*You may not need all
the rows.*

[2]

(b) Look at these words.

likely unlikely certain evens impossible

Choose the best word to complete each of these sentences.

(i) Jenna is to make a line with **I** in it. [1]

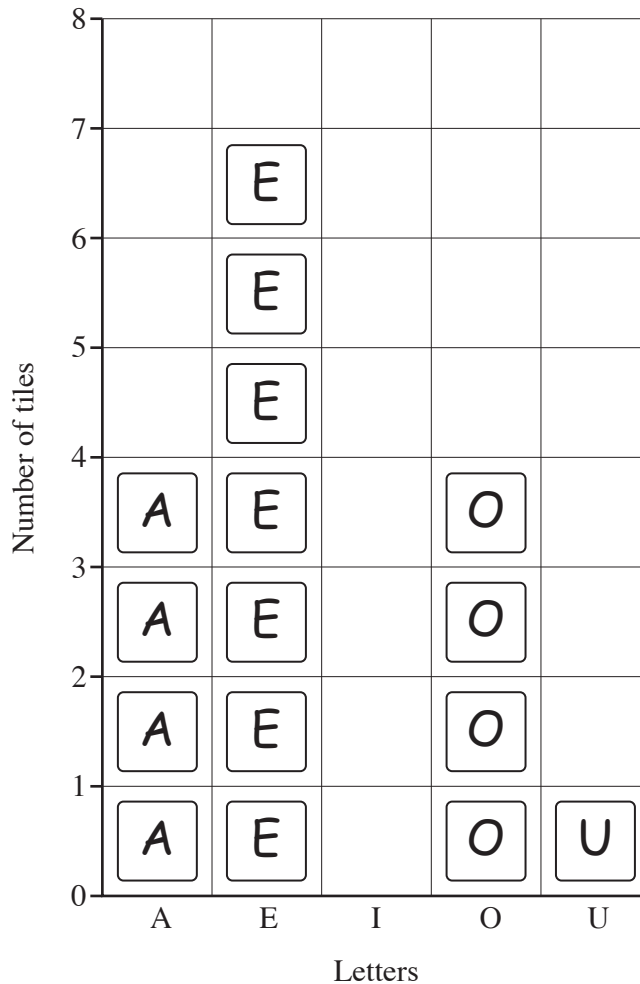
(ii) It is that Jenna's line is **C A T**. [1]

(iii) It is that Jenna's line starts with **B**. [1]

(c) Geoff has 19 tiles.

Each tile has one of the letters A, E, I, O or U on it.

He puts the tiles onto squared paper to make this graph.



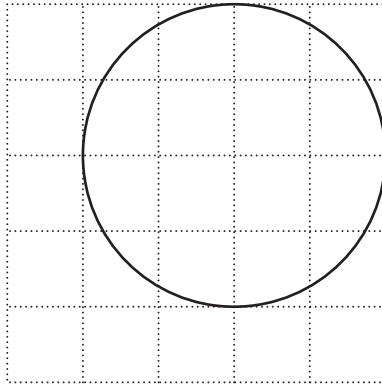
Geoff only has the **I** tiles left.

Complete the graph.

[2]

Turn over

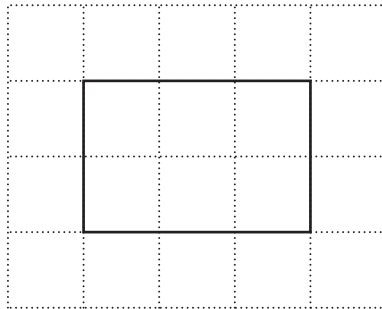
3 Here is a circle drawn on a grid of centimetre squares.



(a) What is the length of the radius of this circle?

(a) cm [1]

(b) Here is a rectangle drawn on a grid of centimetre squares.



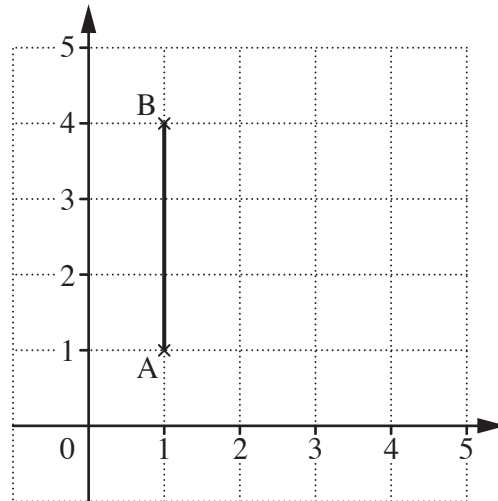
(i) What is the perimeter of this rectangle?

(b)(i) cm [1]

(ii) What is the area of this rectangle?

(ii) cm^2 [1]

(c)



(i) Write down the coordinates of point B.

(c)(i) (.....,) [1]

(ii) Plot a point at (3, 4).
Label it C.

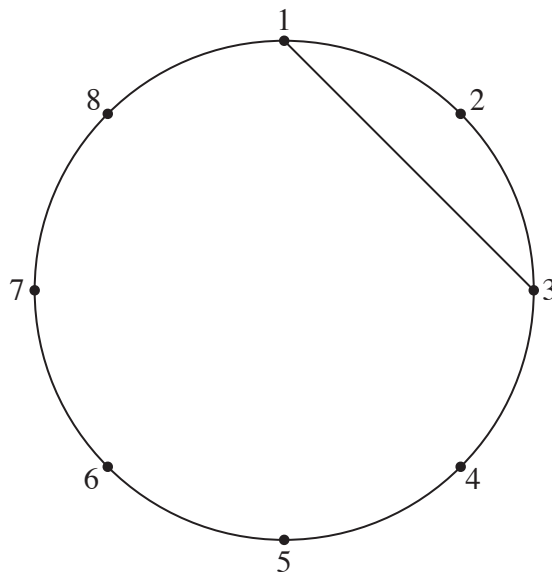
[1]

(iii) Draw the line from C to A and the line from C to B.

What shape is ABC?

(iii) [1]

- 4 (a) This diagram shows a children's playground with posts numbered from 1 to 8.



- (i) Jayne walks in straight lines from post 1 to post 3, then from 3 to 5, then from 5 to 7 and then from 7 to 1.

On the diagram, draw the lines Jayne walks along.
The first one has been drawn for you.

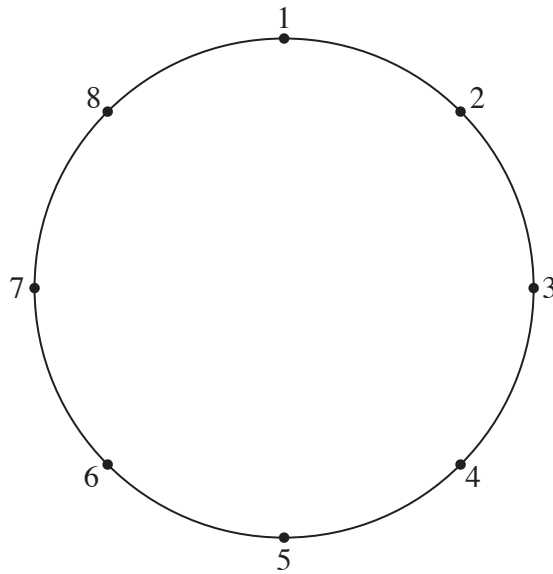
[1]

- (ii) What is the name of the shape you have drawn?

(a)(ii) [1]

- (b) Freddie is at post 1.
He wants to walk from post to post so that his path is a triangle with two sides the same length.

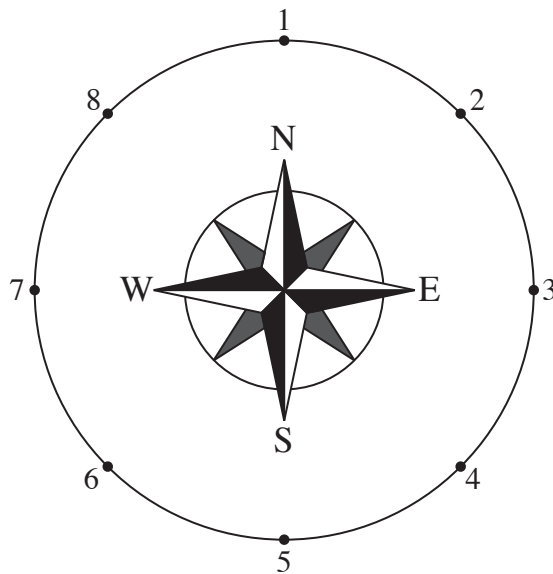
Draw a path for him.



[2]

- (c) The playground has a compass marked on the ground.
Aled walks in a straight line from post 2 to post 6.


In which direction does he walk?



(c) [1]

TURN OVER FOR QUESTION 5


5 Ruby gets to the station and looks at the station clock.



(a) What time does the station clock show?

(a) [1]

(b) Cameron tells her:



Ruby's train arrives at 14:40.

How long does she have to wait?

(b) minutes [2]

PLEASE DO NOT WRITE ON THIS PAGE

PLEASE DO NOT WRITE ON THIS PAGE



Copyright Information

OCR is committed to seeking permission to reproduce all third-party content that it uses in its assessment materials. OCR has attempted to identify and contact all copyright holders whose work is used in this paper. To avoid the issue of disclosure of answer-related information to candidates, all copyright acknowledgements are reproduced in the OCR Copyright Acknowledgements Booklet. This is produced for each series of examinations, is given to all schools that receive assessment material and is freely available to download from our public website (www.ocr.org.uk) after the live examination series.

If OCR has unwittingly failed to correctly acknowledge or clear any third-party content in this assessment material, OCR will be happy to correct its mistake at the earliest possible opportunity.

For queries or further information please contact the Copyright Team, First Floor, 9 Hills Road, Cambridge CB2 1GE.

OCR is part of the Cambridge Assessment Group; Cambridge Assessment is the brand name of University of Cambridge Local Examinations Syndicate (UCLES), which is itself a department of the University of Cambridge.