

GENERAL CERTIFICATE OF SECONDARY EDUCATION
MATHEMATICS C (GRADUATED ASSESSMENT)
MODULE M8 – SECTION B

B278B

Candidates answer on the question paper

OCR Supplied Materials:
None

- Other Materials Required:**
- Geometrical instruments
 - Tracing paper (optional)
 - Scientific or graphical calculator

Monday 9 March 2009
Morning

Duration: 30 minutes



Candidate Forename		Candidate Surname	
--------------------	--	-------------------	--

Centre Number						Candidate Number				
---------------	--	--	--	--	--	------------------	--	--	--	--

INSTRUCTIONS TO CANDIDATES

- Write your name clearly in capital letters, your Centre Number and Candidate Number in the boxes above.
- Use black ink. Pencil may be used for graphs and diagrams only.
- Read each question carefully and make sure that you know what you have to do before starting your answer.
- Show your working. Marks may be given for a correct method even if the answer is incorrect.
- Answer **all** the questions.
- Do **not** write in the bar codes.
- Write your answer to each question in the space provided, however additional paper may be used if necessary.

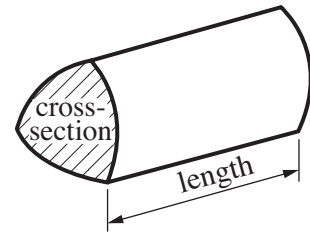
INFORMATION FOR CANDIDATES

- The number of marks is given in brackets [] at the end of each question or part question.
- Section B starts with question 7.
- You are expected to use a calculator in Section B of this paper.
- Use the π button on your calculator or take π to be 3.142 unless the question says otherwise.
- The total number of marks for this Section is **25**.
- This document consists of **8** pages. Any blank pages are indicated.

FOR EXAMINER'S USE	
SECTION B	

Formulae Sheet

Volume of prism = (area of cross-section) \times length

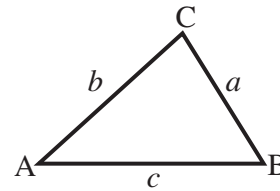


In any triangle ABC

Sine rule $\frac{a}{\sin A} = \frac{b}{\sin B} = \frac{c}{\sin C}$

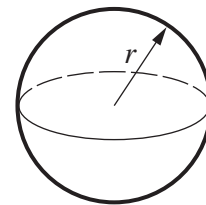
Cosine rule $a^2 = b^2 + c^2 - 2bc \cos A$

Area of triangle = $\frac{1}{2} ab \sin C$



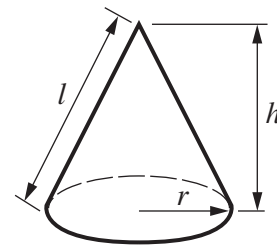
Volume of sphere = $\frac{4}{3} \pi r^3$

Surface area of sphere = $4\pi r^2$



Volume of cone = $\frac{1}{3} \pi r^2 h$

Curved surface area of cone = $\pi r l$



The Quadratic Equation

The solutions of $ax^2 + bx + c = 0$,
where $a \neq 0$, are given by

$$x = \frac{-b \pm \sqrt{b^2 - 4ac}}{2a}$$

PLEASE DO NOT WRITE ON THIS PAGE

7 (a) Solve.

$$3x = 4 + \frac{x}{2}$$

(a) [2]

(b) Rearrange these formulae to make x the subject.

(i) $3x + y = 5x$

(b)(i) [2]

(ii) $y = \frac{x^2}{9}$

(ii) [2]

8 The population of Pavham on 1 January 2009 was 12 667.
This was an increase of 6% on the population on 1 January 2008.

(a) Calculate the population on 1 January 2008.

(a) [3]

(b) It is assumed that the population will continue to increase by 6% a year.

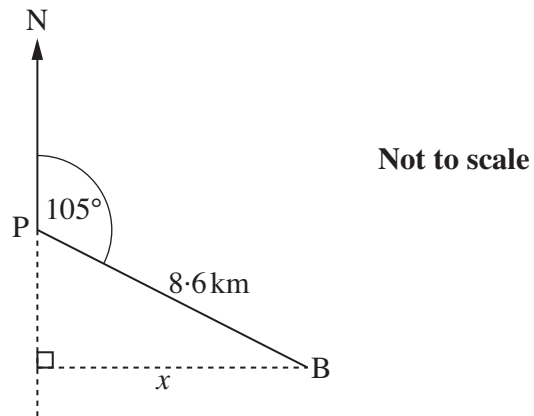
(i) Explain why $12\,667 \times 1.06^2$ gives the expected population on 1 January 2011.

.....
..... [2]

(ii) Calculate this expected population.

(b)(ii)..... [1]

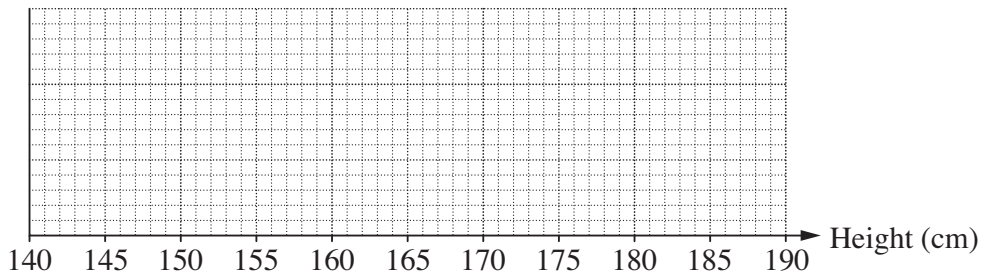
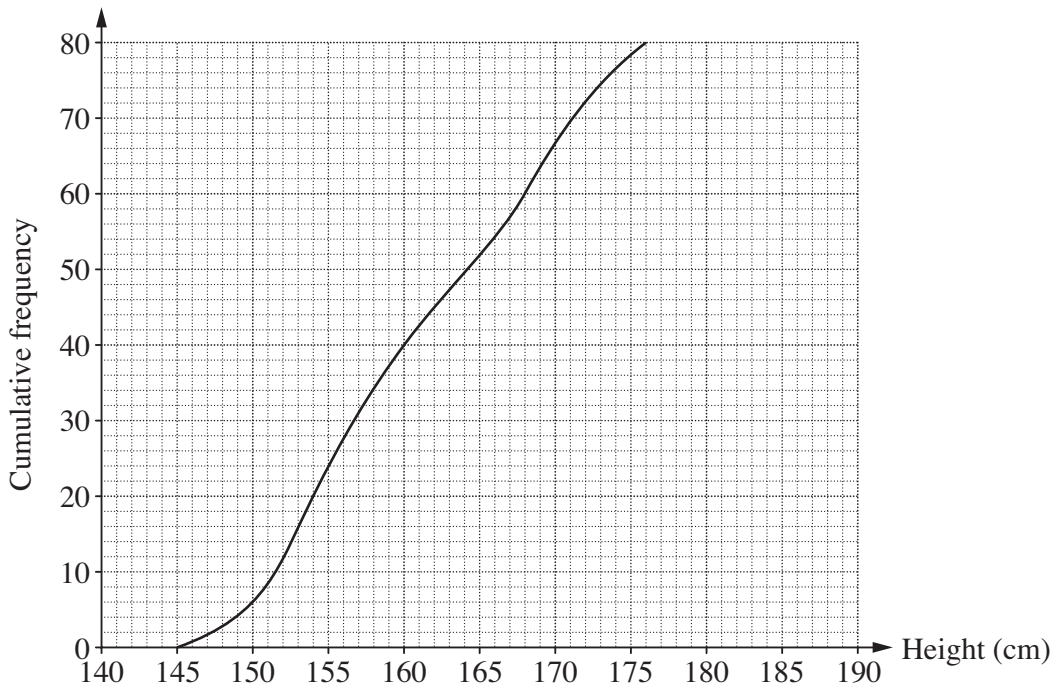
- 9 Bately (B) is 8.6 km from Pavham (P) on a bearing of 105° .



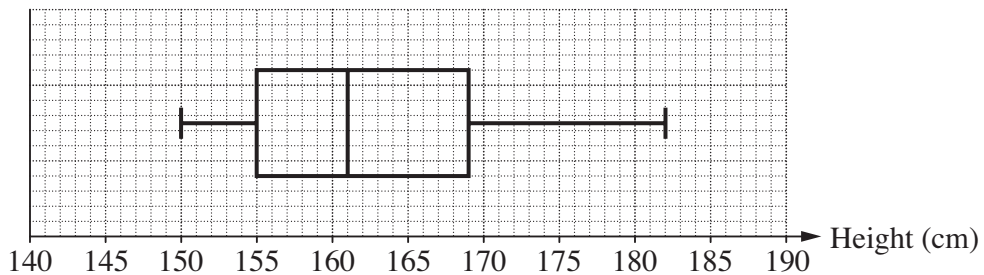
Calculate x , the distance that Bately is East of Pavham.
Give your answer to an appropriate degree of accuracy.

.....km [4]

- 10 This cumulative frequency graph represents the distribution of the heights of the girls in year 6 of Fairacres School.



- (a) On the grid above, construct a box plot to represent this distribution. [3]
- (b) This box plot represents the distribution of the heights of the boys in year 6.



Compare the average and spread of the two distributions.
Support your answers with numerical evidence.

.....

.....

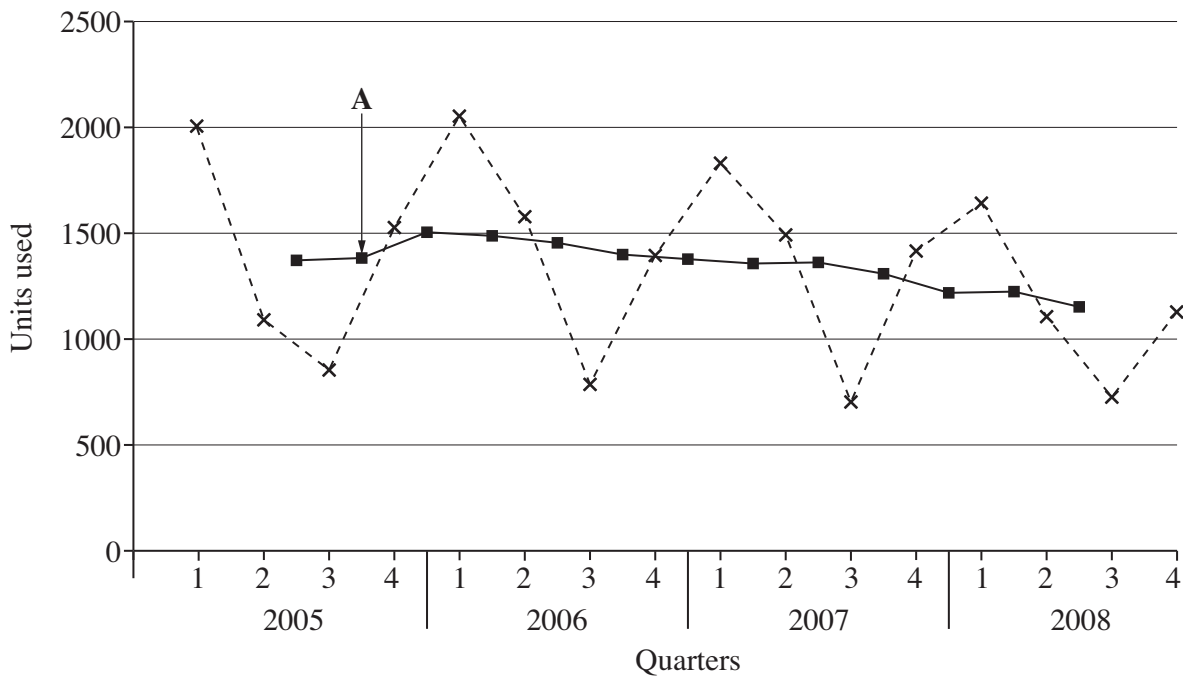
..... [3]

- 11 This table shows a family’s use of electricity from 2005 to 2008. The figures in the table show the numbers of units used each quarter.

Year	2005				2006			
Quarter	1	2	3	4	1	2	3	4
Units used	2006	1091	854	1527	2053	1578	786	1395

Year	2007				2008			
Quarter	1	2	3	4	1	2	3	4
Units used	1831	1492	703	1416	1642	1106	726	1128

The information has been plotted on this graph, together with the 4-point moving averages.



- (a) Calculate the moving average labelled A.

(a) units [2]

- (b) What do the moving averages on this graph show about the family’s use of electricity during these years?

.....
 [1]

PLEASE DO NOT WRITE ON THIS PAGE



Copyright Information

OCR is committed to seeking permission to reproduce all third-party content that it uses in its assessment materials. OCR has attempted to identify and contact all copyright holders whose work is used in this paper. To avoid the issue of disclosure of answer-related information to candidates, all copyright acknowledgements are reproduced in the OCR Copyright Acknowledgements Booklet. This is produced for each series of examinations, is given to all schools that receive assessment material and is freely available to download from our public website (www.ocr.org.uk) after the live examination series.

If OCR has unwittingly failed to correctly acknowledge or clear any third-party content in this assessment material, OCR will be happy to correct its mistake at the earliest possible opportunity.

For queries or further information please contact the Copyright Team, First Floor, 9 Hills Road, Cambridge CB2 1PB.

OCR is part of the Cambridge Assessment Group; Cambridge Assessment is the brand name of University of Cambridge Local Examinations Syndicate (UCLES), which is itself a department of the University of Cambridge.