

GENERAL CERTIFICATE OF SECONDARY EDUCATION
MATHEMATICS C (GRADUATED ASSESSMENT)
MODULE M4 – SECTION A

B274A

Candidates answer on the question paper

OCR Supplied Materials:

None

Other Materials Required:

- Geometrical instruments
- Tracing paper (optional)

Tuesday 23 June 2009
Morning

Duration: 30 minutes



Candidate Forename		Candidate Surname	
--------------------	--	-------------------	--

Centre Number						Candidate Number				
---------------	--	--	--	--	--	------------------	--	--	--	--


INSTRUCTIONS TO CANDIDATES

- Write your name clearly in capital letters, your Centre Number and Candidate Number in the boxes above.
- Use black ink. Pencil may be used for graphs and diagrams only.
- Show your working. Marks may be given for a correct method even if the answer is incorrect.
- Read each question carefully and make sure that you know what you have to do before starting your answer.
- Answer **all** the questions.
- Do **not** write in the bar codes.
- Write your answer to each question in the space provided, however additional paper may be used if necessary.

INFORMATION FOR CANDIDATES

- The number of marks is given in brackets [] at the end of each question or part question.
- The total number of marks for this Section is **25**.
- This document consists of **8** pages. Any blank pages are indicated.

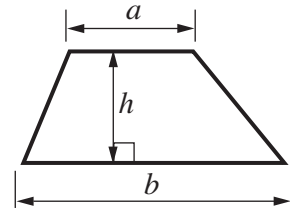
WARNING



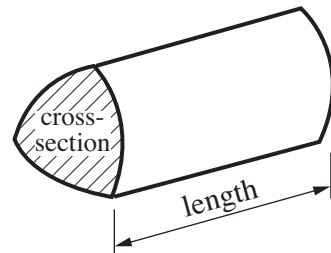
No calculator can be used for Section A of this paper

Formulae Sheet

$$\text{Area of trapezium} = \frac{1}{2} (a + b)h$$



$$\text{Volume of prism} = (\text{area of cross-section}) \times \text{length}$$



PLEASE DO NOT WRITE ON THIS PAGE

Copyright Information

OCR is committed to seeking permission to reproduce all third-party content that it uses in its assessment materials. OCR has attempted to identify and contact all copyright holders whose work is used in this paper. To avoid the issue of disclosure of answer-related information to candidates, all copyright acknowledgements are reproduced in the OCR Copyright Acknowledgements Booklet. This is produced for each series of examinations, is given to all schools that receive assessment material and is freely available to download from our public website (www.ocr.org.uk) after the live examination series.

If OCR has unwittingly failed to correctly acknowledge or clear any third-party content in this assessment material, OCR will be happy to correct its mistake at the earliest possible opportunity.

For queries or further information please contact the Copyright Team, First Floor, 9 Hills Road, Cambridge CB2 1PB.

OCR is part of the Cambridge Assessment Group; Cambridge Assessment is the brand name of University of Cambridge Local Examinations Syndicate (UCLES), which is itself a department of the University of Cambridge.

1 (a) Work out.

(i) $14.26 + 3.58$

(a)(i) [1]

(ii) 1.32×6

(ii) [1]

(b) Here are some decimals.

0.405

0.45

0.54

0.054

0.504

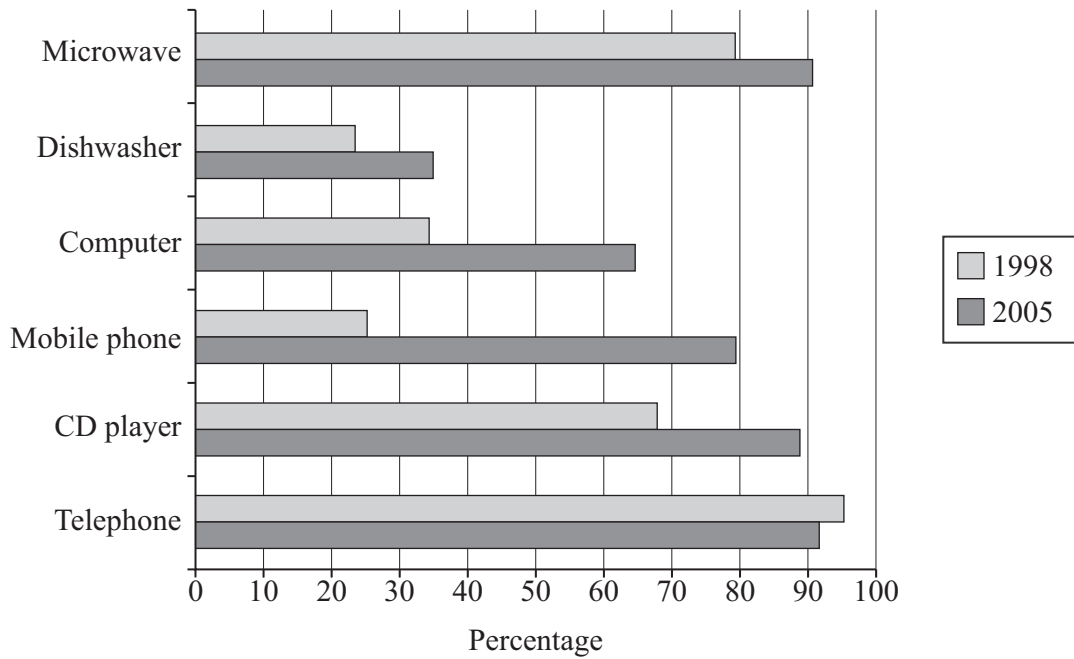
(i) Which is the largest of these decimals?

(b)(i) [1]

(ii) Which is the smallest of these decimals?

(ii) [1]

2 This graph shows the percentages of households owning certain items in 1998 and 2005.



(a) Use the graph to complete these sentences.

In 2005 less than 50% of households owned a [1]

The percentage of households owning a went down between 1998 and 2005. [1]

(b) The percentage of households owning computers approximately doubled between 1998 and 2005.


Explain how the graph shows this.

.....
 [1]

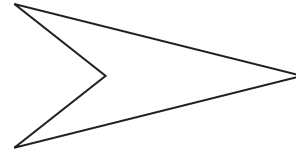
3 (a) Write the order of rotation symmetry under each of these quadrilaterals.




.....



.....



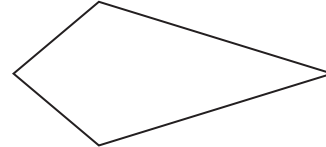
.....



.....



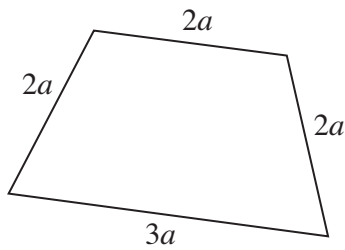
.....



.....

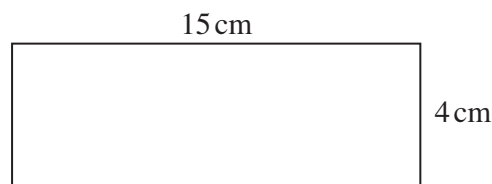
[3]

(b) Write a formula for the perimeter, P , of this quadrilateral.



(b) [2]

(c) Work out the area of this rectangle.



Not to scale

(c) cm^2 [2]

4 These patterns are made from sticks.

Pattern 1



Pattern 2



Pattern 3



(a) This table shows the number of sticks used in each pattern.

Complete the table.

Pattern	1	2	3	4	5
Number of sticks	5	9			

[2]

(b) Another pattern in the sequence is made from 33 sticks.

Which pattern is made from 33 sticks?

(b) Pattern [1]

5 (a) Write down **two** common factors of 20 and 30.

(a) and [1]

(b) Write down one prime number that lies between 20 and 30.

(b) [1]

(c) Ray says:

All multiples of 5 are odd.

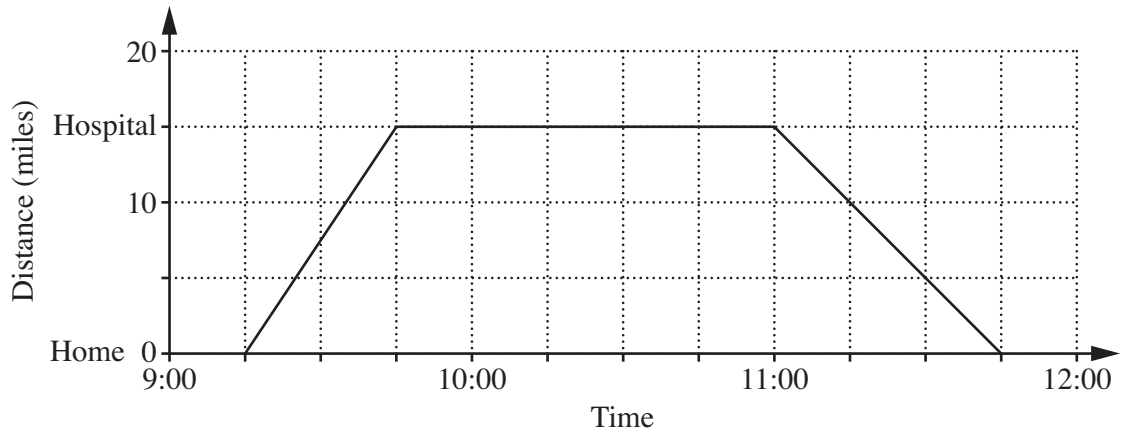
He is wrong.

Give an example to show that he is wrong.

.....
..... [1]

TURN OVER FOR QUESTION 6

- 6 Ella drove from home to the hospital and back.
The graph shows her journey.



- (a) (i) How far is the hospital from Ella's home?

(a)(i) miles [1]

- (ii) Work out Ella's speed, in miles per hour, driving from home to the hospital.

(ii) mph [2]

- (b) How long did Ella spend at the hospital?
Give your answer in hours and minutes.

(b) hour minutes [1]

- (c) At what time did Ella arrive home?

(c) [1]