

**GENERAL CERTIFICATE OF SECONDARY EDUCATION**  
**MATHEMATICS C (GRADUATED ASSESSMENT)**  
MODULE M1 – SECTION A

## B271A

Candidates answer on the question paper

**OCR Supplied Materials:**  
None

**Other Materials Required:**

- Geometrical instruments
- Tracing paper (optional)

**Tuesday 23 June 2009**  
**Morning**

**Duration: 30 minutes**



Candidate Forename		Candidate Surname	
--------------------	--	-------------------	--

Centre Number							Candidate Number				
---------------	--	--	--	--	--	--	------------------	--	--	--	--


**INSTRUCTIONS TO CANDIDATES**

- Write your name clearly in capital letters, your Centre Number and Candidate Number in the boxes above.
- Use black ink. Pencil may be used for graphs and diagrams only.
- Read each question carefully and make sure that you know what you have to do before starting your answer.
- Show your working. Marks may be given for a correct method even if the answer is incorrect.
- Answer **all** the questions.
- Do **not** write in the bar codes.
- Write your answer to each question in the space provided, however additional paper may be used if necessary.

**INFORMATION FOR CANDIDATES**

- The number of marks is given in brackets [ ] at the end of each question or part question.
- The total number of marks for this Section is **25**.
- This document consists of **8** pages. Any blank pages are indicated.

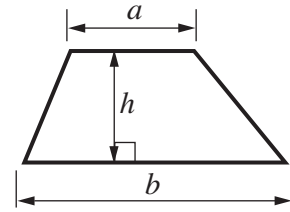
**WARNING**



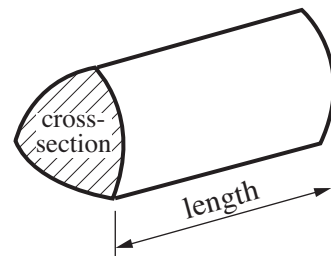
**No calculator can be used for Section A of this paper**

## Formulae Sheet

$$\text{Area of trapezium} = \frac{1}{2} (a + b)h$$



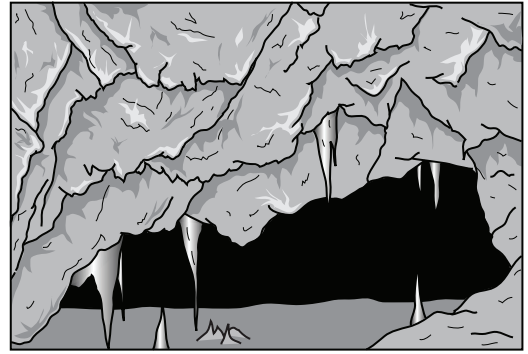
$$\text{Volume of prism} = (\text{area of cross-section}) \times \text{length}$$



**PLEASE DO NOT WRITE ON THIS PAGE**

1 (a) These are the six deepest caves in the world.

Cave	Depth (m)
Jean Bernard (France)	1602
Mirollda (France)	1733
Sarma (Georgia)	1543
Torca del Cerro (Spain)	1589
Voronja (Georgia)	2080
Vogelschacht (Austria)	1632



(i) Which is the deepest cave?

(a)(i) ..... [1]

(ii) The depth of the Jean Bernard cave is 1602 metres.

Write 1602 in words.

.....  
 ..... [1]

(iii) The depth of Mirollda cave is 1733 metres.

Round 1733 to the nearest 10.

(iii) ..... [1]

(b) The depth of Dowal Dale cave is 65 metres.  
 The Blue John cave is 25 metres deeper than this.

What is the depth of the Blue John cave?

(b) ..... m [2]

2 A family decides to visit a cave.

(a) They find this list of UK caves on the Internet.

- Blue John
- Cheddar
- Clearwell
- Ingleborough
- Kents
- Marble Arch
- showcaves centre for Wales
- Peak
- Pooles
- Speedwell
- Stump Cross
- Treak Cliff
- White Scar
- Wookey Hole

They live close enough to visit half of these caves.

How many caves is this?

(a) ..... [2]

(b) The family decides to visit Ingleborough caves.

### Ingleborough Caves Admission

**Adults      £6.00 each**

**Children    £3.00 each**

**Family tickets (2 adults + 2 children)    £15.00**

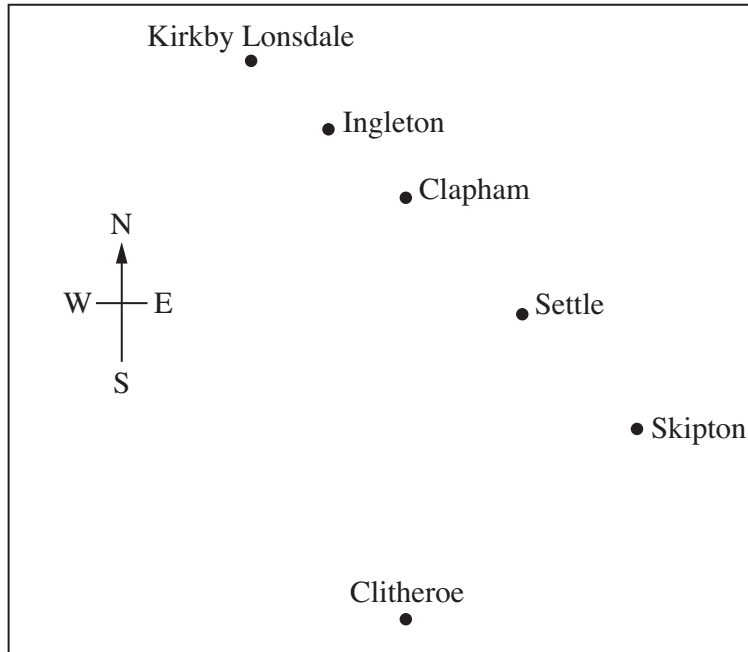
There are two adults and two children in the family.

How much will they save by buying a family ticket?



(b) £ ..... [3]

- (c) Ingleborough caves are close to Ingleton.  
Here is a map of some towns and villages near Ingleton.



Use the map to complete these sentences.

Clapham is North of .....

Settle is ..... of Skipton.

[2]

- (d) In places, the roof in Ingleborough caves is only 1400 millimetres high.

What is 1400 millimetres in centimetres?

(d) ..... cm [1]

- (e) There are tours round the caves.  
Each tour takes 50 minutes.  
The family starts the tour at this time.

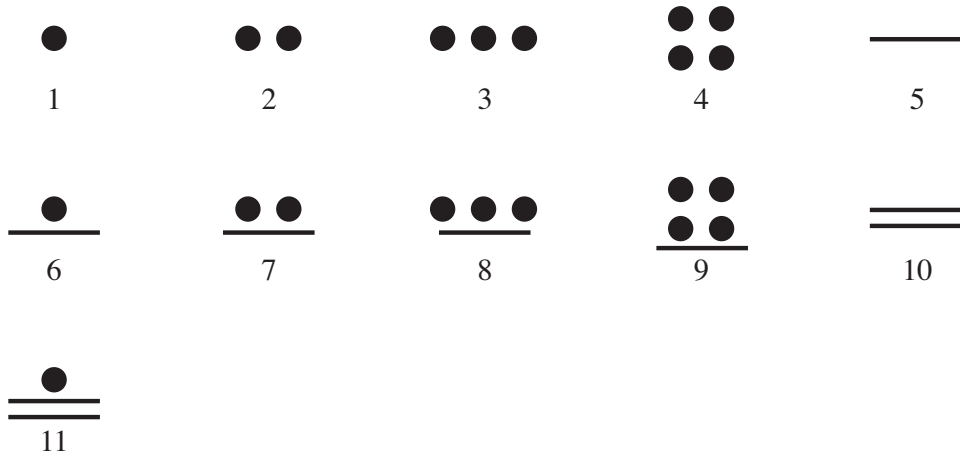


At what time does the tour finish?

(e) ..... [2]

3 The Mayans lived in Central America over 2000 years ago. They used symbols to represent numbers.

Here are some of their written numbers and their values.



(a) Write down the values of these Mayan numbers.

(i)



.....

[1]

(ii)



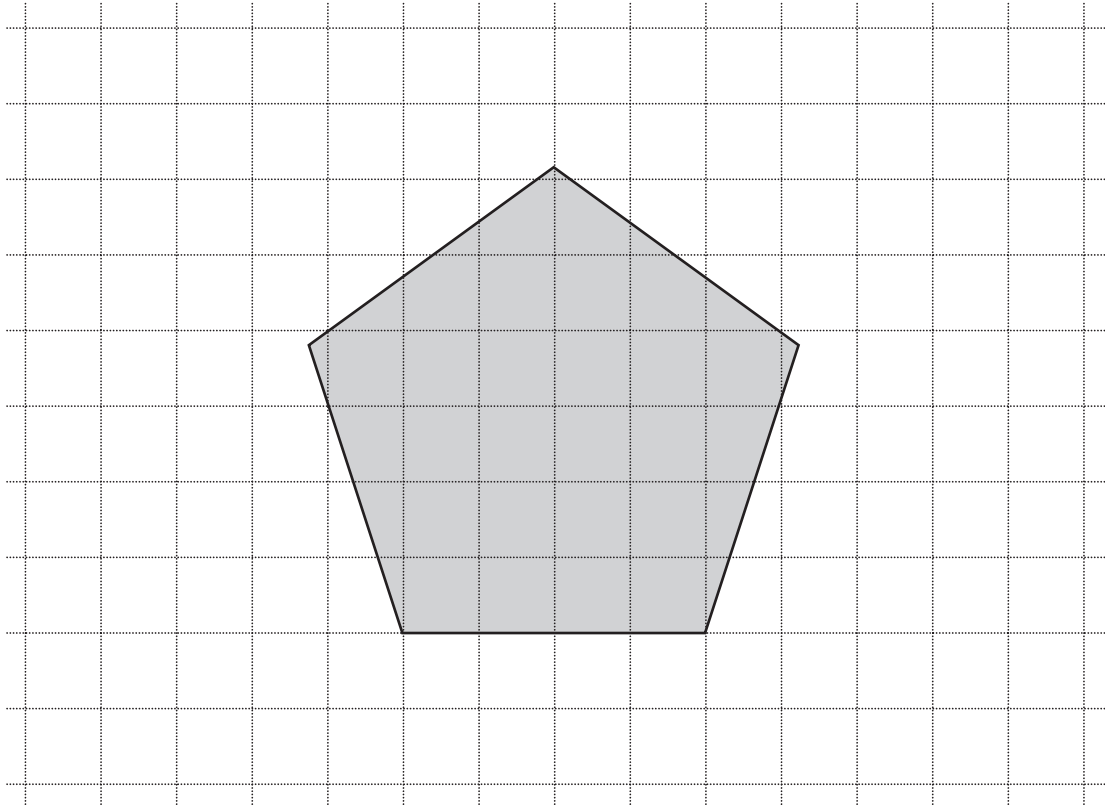
.....

[1]

(b) Write the number 18 in Mayan.

[1]

- 4 This grey shape is placed over a centimetre grid.  
The lengths of its sides are equal.



- (a) What is the name of the grey shape?  
Put a ring round the answer.

Triangle	Rectangle	Pentagon	Hexagon	Octagon
----------	-----------	----------	---------	---------

[1]

- (b) Work out the perimeter of the grey shape.  
Write down any measurements you use.

(b) ..... cm [2]

- (c) Estimate the area of the grey shape.

(c) ..... square centimetres [2]

**TURN OVER FOR QUESTION 5**

5 Work out.

(a)  $3 \times 7$

(a) ..... [1]

(b)  $24 \div 6$

(b) ..... [1]



**Copyright Information**

OCR is committed to seeking permission to reproduce all third-party content that it uses in its assessment materials. OCR has attempted to identify and contact all copyright holders whose work is used in this paper. To avoid the issue of disclosure of answer-related information to candidates, all copyright acknowledgements are reproduced in the OCR Copyright Acknowledgements Booklet. This is produced for each series of examinations, is given to all schools that receive assessment material and is freely available to download from our public website ([www.ocr.org.uk](http://www.ocr.org.uk)) after the live examination series.

If OCR has unwittingly failed to correctly acknowledge or clear any third-party content in this assessment material, OCR will be happy to correct its mistake at the earliest possible opportunity.

For queries or further information please contact the Copyright Team, First Floor, 9 Hills Road, Cambridge CB2 1PB.

OCR is part of the Cambridge Assessment Group; Cambridge Assessment is the brand name of University of Cambridge Local Examinations Syndicate (UCLES), which is itself a department of the University of Cambridge.