

Candidate Forename		Candidate Surname	
-------------------------------	--	------------------------------	--

Centre Number						Candidate Number				
--------------------------	--	--	--	--	--	-----------------------------	--	--	--	--

**OXFORD CAMBRIDGE AND RSA EXAMINATIONS
GENERAL CERTIFICATE OF SECONDARY EDUCATION**

B281A

**MATHEMATICS C
(GRADUATED ASSESSMENT)**

Terminal Paper – Section A (Foundation Tier)

MONDAY 1 JUNE 2009: Morning

DURATION: 1 hour

SUITABLE FOR VISUALLY IMPAIRED CANDIDATES

Candidates answer on the question paper

OCR SUPPLIED MATERIALS:

None

OTHER MATERIALS REQUIRED:

Geometrical instruments

Pie chart scale (optional)

Tracing paper (optional)

WARNING

**No calculator can be used for
Section A of this paper.**

READ INSTRUCTIONS OVERLEAF

INSTRUCTIONS TO CANDIDATES

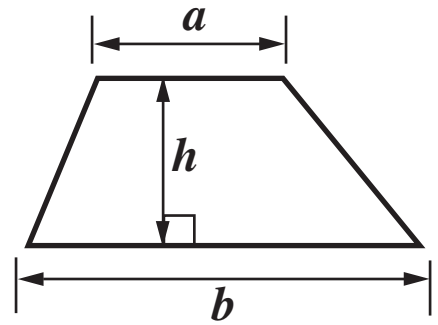
- **Write your name clearly in capital letters, your Centre Number and Candidate Number in the boxes on the first page.**
- **Use black ink. Pencil may be used for graphs and diagrams only.**
- **Read each question carefully and make sure that you know what you have to do before starting your answer.**
- **Show your working. Marks may be given for a correct method even if the answer is incorrect.**
- **Answer ALL the questions.**
- **Write your answer to each question in the space provided, however additional paper may be used if necessary.**

INFORMATION FOR CANDIDATES

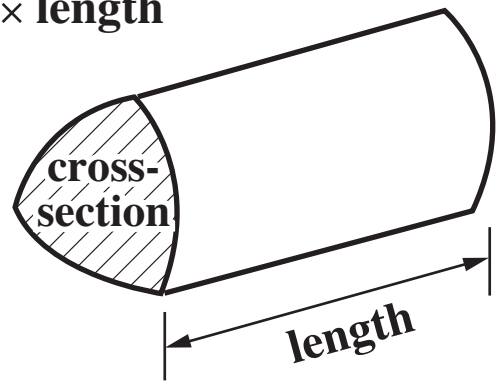
- **The number of marks is given in brackets [] at the end of each question or part question.**
- **The total number of marks for this Section is 50.**

Formulae Sheet

Area of trapezium = $\frac{1}{2} (a + b)h$



Volume of prism = (area of cross-section) \times length



1 Work out.

(a) $300 - 139$

[2 marks]

(b) $65 \div 5$

[1 mark]

(a) _____

(b) _____

- 2 At 9 am each day Andy records the temperature in his garden.
The table shows the temperatures for 5 days in January.**

Day	Temperature (°C)
Monday	2
Tuesday	-4
Wednesday	-2
Thursday	5
Friday	1

- (a) On which day was the temperature lowest?**

(a) _____

[1 mark]

- (b) How many degrees warmer was Thursday than Wednesday?**

(b) _____

[1 mark]

- (c) On Saturday the temperature was 4 degrees lower than on Friday.**

What was the temperature on Saturday?

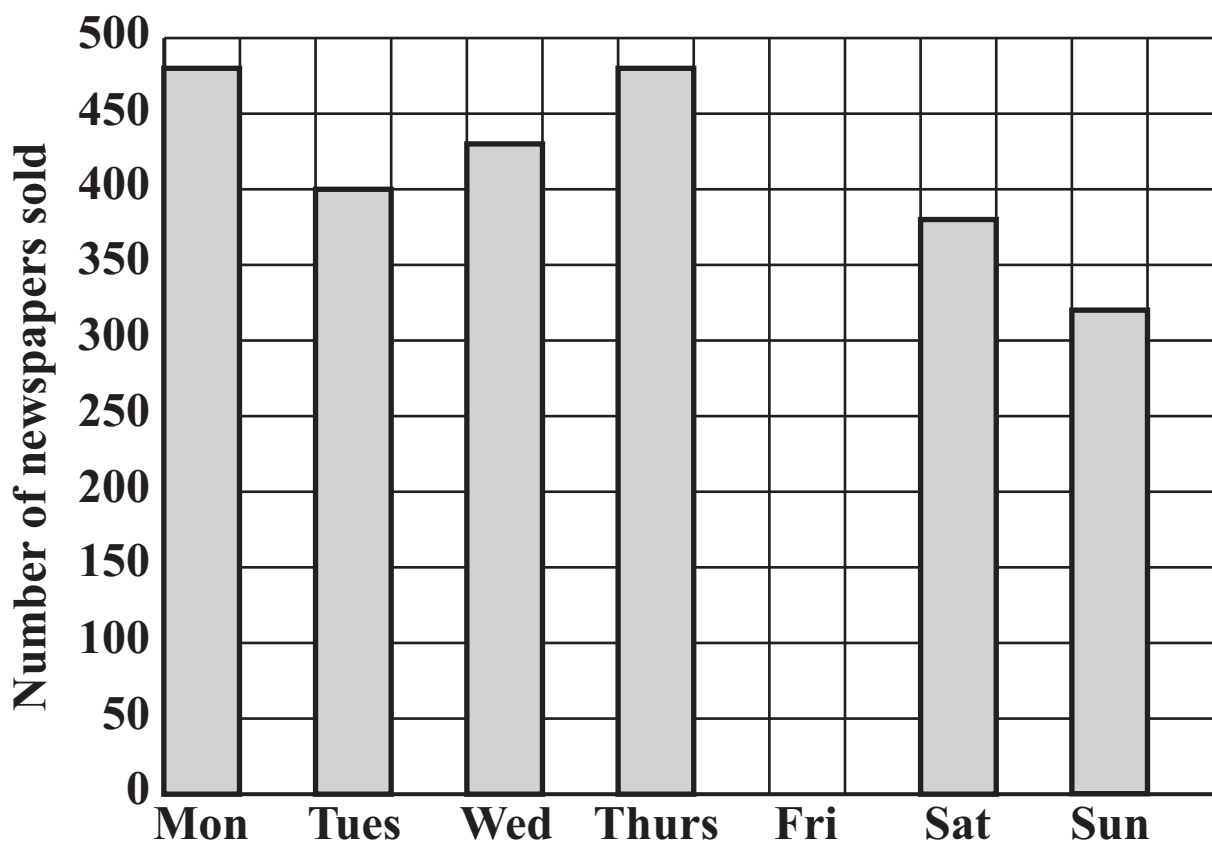
(c) _____ °C

[1 mark]

3 Work out the value of $5a + 3b$ when $a = 4$ and $b = 2$.

[2 marks]

4 (a) This bar chart shows the number of newspapers a shop sells on some days during one week.



(i) How many newspapers did the shop sell on Monday?

[1 mark]

(a)(i) _____

**(ii) On Friday the shop sold 440 newspapers.
Show this on the bar chart.
[1 mark]**

**(iii) How many MORE newspapers did the shop sell on
Saturday than on Sunday?**

[1 mark]

(iii) _____

- (b) This table shows the average daily sales of newspapers in the UK in July 2007.**

Newspaper	Average daily sales
Daily Express	735 307
Daily Mirror	1 496 572
Daily Star	811 988
Financial Times	130 007
The Daily Mail	2 205 172
The Daily Telegraph	833 430
The Guardian	311 768
The Independent	189 797
The Sun	2 916 821
The Times	595 172

- (i) Which newspaper had the lowest average daily sales?**

(b)(i) _____

[1 mark]

- (ii) Write 2 916 821 correct to the nearest million.**

(ii) _____

[1 mark]

- (iii) Write 833 430 correct to the nearest thousand.**

(iii) _____

[1 mark]

(c) These were the weekday prices, in pence, of the newspapers.

40 40 35 130 45 70 70 70 35 65

(i) Find the mode and the median of these prices.

(c)(i) mode _____ p

median _____ p

[3 marks]

(ii) Give a reason why the median is a better average to use than the mode for these newspaper prices.

[1 mark]

5 The cash price of a TV is £600.

The shop offers a ‘credit deal’.

Pay 25% deposit and then 12 payments of £49

(a) Work out 25% of £600.

[2 marks]

(a) £ _____

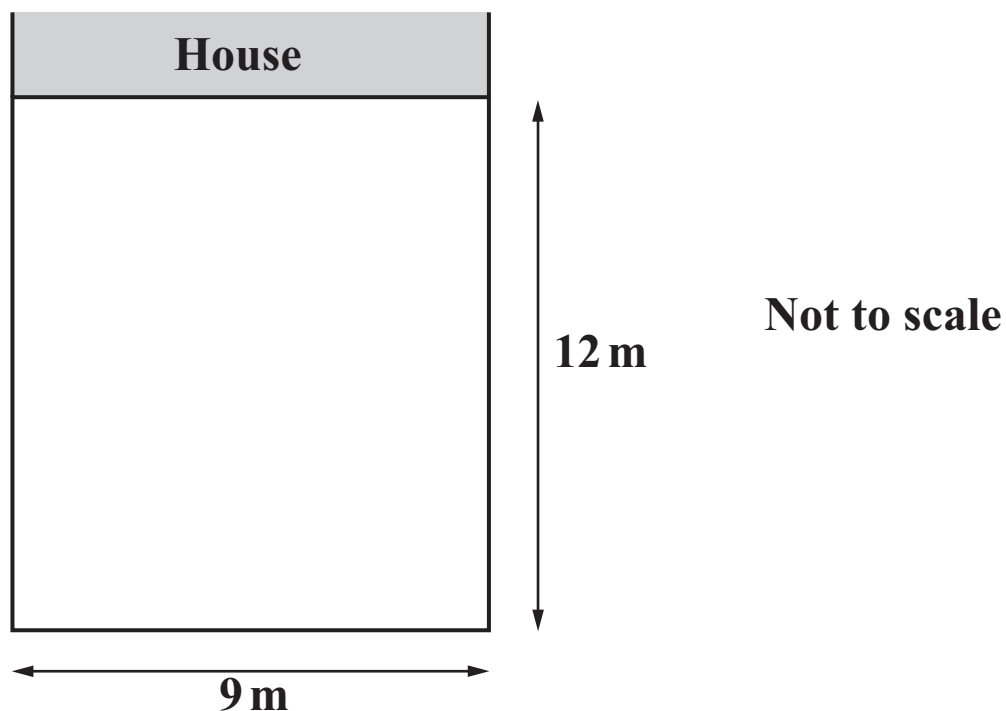
(b) John chooses the credit deal.

How much more does John pay than the cash price?

[4 marks]

(b) £ _____

6 This is a sketch of Mary's rectangular garden.



- (a) Mary is buying new fence panels for the two long sides and one short side of the garden.
Each fence panel is 1.5 m wide.**

Work out how many panels Mary needs to buy.

[2 marks]

(a) _____

(b) Mary decides to use $\frac{1}{3}$ of the garden for growing vegetables.

Work out the area for growing vegetables.

[3 marks]

(b) _____ m²

7 Solve these equations.

(a) $\frac{x}{4} = 5$

[1 mark]

(a) _____

(b) $2x - 5 = 21$

[2 marks]

(b) _____

8 Here are three consecutive integers.

$$n \qquad n + 1 \qquad n + 2$$

- (a) Find an expression for the sum of these three integers. Write your answer as simply as possible.**

(a) _____

[1 mark]

- (b) Explain how you can tell from the answer to part (a) that the sum of three consecutive integers is ALWAYS divisible by 3.**

[1 mark]

9 For a drink, Meera mixes lime cordial and lemonade in the ratio 1 : 4.

(a) How much lemonade does she need to use with 100 ml of lime cordial?

[1 mark]

(a) _____ ml

(b) Meera wants to make 800 ml of this drink.

Calculate how much lime cordial she needs.

[2 marks]

(b) _____ ml

(c) Meera drinks 480 ml of the 800 ml.

Write the ratio 480 : 800 as simply as possible.

[2 marks]

(c) _____ : _____

- 10 (a) Insert brackets in each of the following calculations so that they are correct.

$$2 + 5 \times -4 = -28$$

$$2 \times 5 + -4^2 = 2$$

$$2 \times 5 + -4^2 = 36$$

[3 marks]

- (b) Expand.

$$5(3x - 4)$$

[1 mark]

(b) _____

(c) Factorise fully.

$$6x + 3x^2$$

[2 marks]

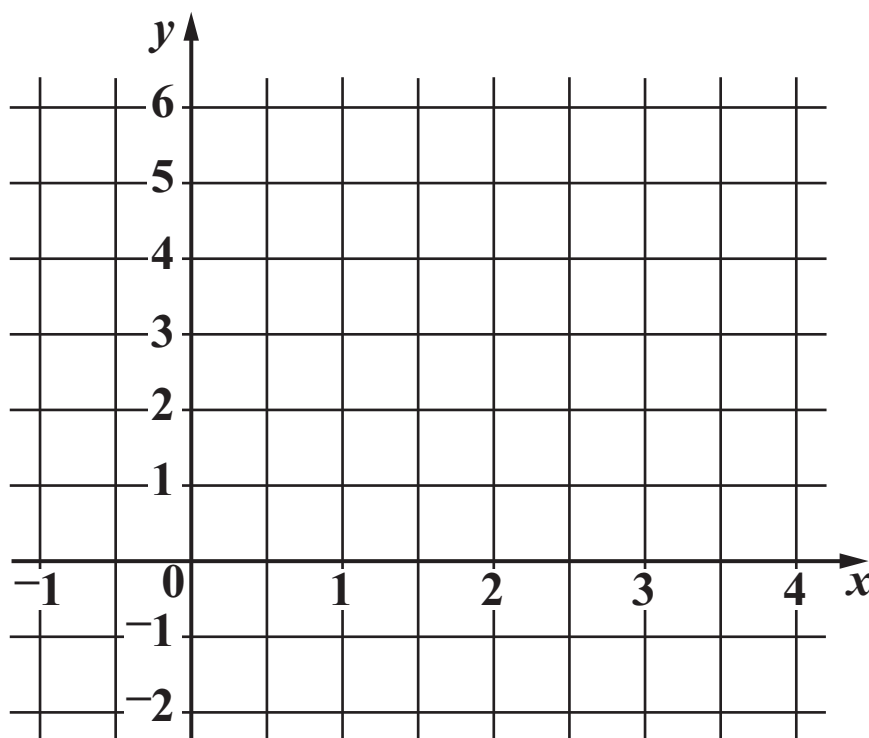
(c) _____

11 (a) Complete the table for $y = 3 + 3x - x^2$.

x	-1	0	1	2	3	4
y	-1	3			3	-1

[1 mark]

(b) Draw the graph of $y = 3 + 3x - x^2$.



[2 marks]

(c) Use your graph to find the values of x for which $3 + 3x - x^2 = 0$.

[2 marks]

(c) _____

BLANK PAGE

BLANK PAGE

BLANK PAGE



Copyright Information

OCR is committed to seeking permission to reproduce all third-party content that it uses in its assessment materials. OCR has attempted to identify and contact all copyright holders whose work is used in this paper. To avoid the issue of disclosure of answer-related information to candidates, all copyright acknowledgements are reproduced in the OCR Copyright Acknowledgements Booklet. This is produced for each series of examinations, is given to all schools that receive assessment material and is freely available to download from our public website (www.ocr.org.uk) after the live examination series.

If OCR has unwittingly failed to correctly acknowledge or clear any third-party content in this assessment material, OCR will be happy to correct its mistake at the earliest possible opportunity.

For queries or further information please contact the Copyright Team, First Floor, 9 Hills Road, Cambridge CB2 1PB.

OCR is part of the Cambridge Assessment Group; Cambridge Assessment is the brand name of University of Cambridge Local Examinations Syndicate (UCLES), which is itself a department of the University of Cambridge.