

Candidate forename		Candidate surname	
-----------------------	--	----------------------	--

Centre number						Candidate number				
------------------	--	--	--	--	--	---------------------	--	--	--	--

**OXFORD CAMBRIDGE AND RSA EXAMINATIONS
GENERAL CERTIFICATE OF SECONDARY EDUCATION**

A502/02

MATHEMATICS A

Unit B (Higher Tier)

MONDAY 17 JANUARY 2011: Afternoon

DURATION: 1 hour

SUITABLE FOR VISUALLY IMPAIRED CANDIDATES

Candidates answer on the question paper.

OCR SUPPLIED MATERIALS:

None

OTHER MATERIALS REQUIRED:

Geometrical instruments

Tracing paper (optional)

<p><u>WARNING</u> No calculator can be used for this paper.</p>

This paper has been pre modified for carrier language

READ INSTRUCTIONS OVERLEAF

INSTRUCTIONS TO CANDIDATES

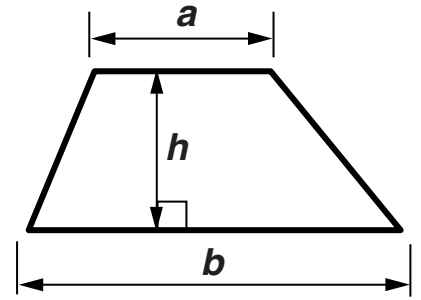
- **Write your name, centre number and candidate number in the boxes on the first page. Please write clearly and in capital letters.**
- **Use black ink. Pencil may be used for graphs and diagrams only.**
- **Read each question carefully. Make sure you know what you have to do before starting your answer.**
- **Your answers should be supported with appropriate working. Marks may be given for a correct method even if the answer is incorrect.**
- **Write your answer to each question in the space provided. Additional paper may be used if necessary but you must clearly show your candidate number, centre number and question number(s).**
- **Answer ALL the questions.**

INFORMATION FOR CANDIDATES

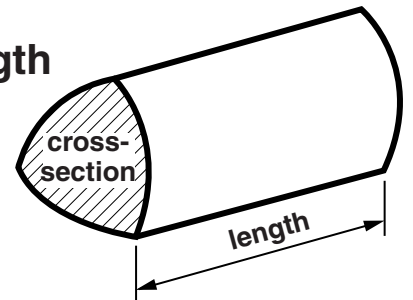
- **The number of marks is given in brackets [] at the end of each question or part question.**
- **Your Quality of Written Communication is assessed in questions marked with an asterisk (*).**
- **The total number of marks for this paper is 60.**

FORMULAE SHEET: HIGHER TIER

Area of trapezium = $\frac{1}{2}(a + b)h$



Volume of prism = (area of cross-section) \times length

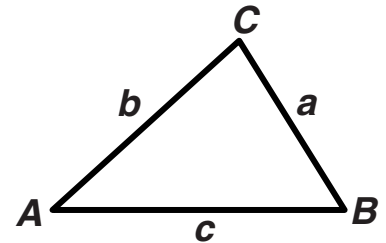


In any triangle ABC

Sine rule $\frac{a}{\sin A} = \frac{b}{\sin B} = \frac{c}{\sin C}$

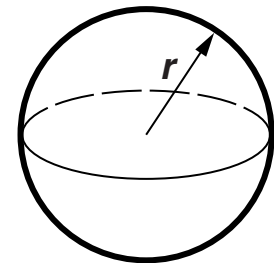
Cosine rule $a^2 = b^2 + c^2 - 2bc \cos A$

Area of triangle = $\frac{1}{2} ab \sin C$



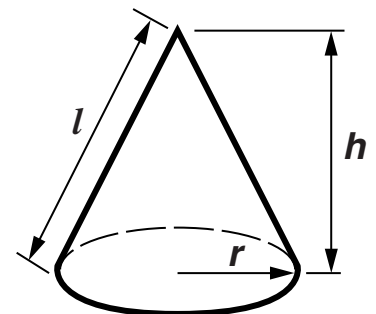
Volume of sphere = $\frac{4}{3} \pi r^3$

Surface area of sphere = $4\pi r^2$



Volume of cone = $\frac{1}{3} \pi r^2 h$

Curved surface area of cone = $\pi r l$

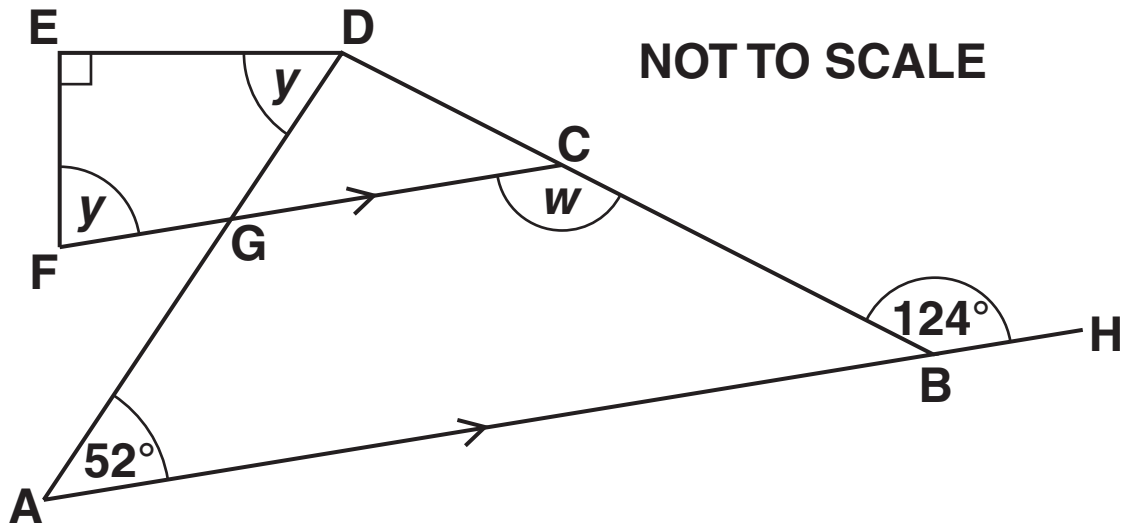


The Quadratic Equation

The solutions of $ax^2 + bx + c = 0$, where $a \neq 0$, are given by

$$x = \frac{-b \pm \sqrt{(b^2 - 4ac)}}{2a}$$

- 1 **ABH and FGC are parallel straight lines.**
Angle GFE = angle GDE = y .
Angle DEF = 90° .



- (a) (i) Write down the size of angle w .

(a)(i) _____[°] [1]

- (ii) Give a reason for your answer.

 _____ [1]

**(b) Work out the size of angle y .
Show your working clearly.**

(b) _____° [4]

2 (a) Work out $24 \div \frac{1}{3}$.

(a) _____ [1]

(b) Daffodil bulbs are sold in bags of 80.
Eddie and Caroline each bought one bag of bulbs.

(i) 32 of Eddie's bulbs did not grow.

What fraction of his 80 bulbs did not grow?
Write your answer in its simplest form.

(b)(i) _____ [2]

(ii) $\frac{3}{5}$ of Caroline's bulbs produced white flowers.

How many of Caroline's bulbs produced white flowers?

(ii) _____ [2]

(c) Write the following fractions in order of size, smallest first.
Show how you decide.

$$\frac{3}{5}$$

$$\frac{11}{15}$$

$$\frac{2}{3}$$

$$\frac{13}{20}$$

_____ *smallest*

[4]

- 3 The acceleration of a drag racing car, $a \text{ m/s}^2$, is calculated using this formula.

$$a = \frac{v - u}{T - t}$$

$u \text{ m/s}$ is the velocity after time t seconds and $v \text{ m/s}$ is the velocity after time T seconds.

A drag racing car accelerates along a straight course. After 1.3 seconds its velocity is 49.5 m/s, after 3.26 seconds its velocity is 124.1 m/s.

Work out an ESTIMATE of the acceleration of the drag racing car.

_____ m/s^2 [3]

4 Solve this inequality.

$$7x + 5 \leq 47$$

_____ **[2]**

- 5 Harpreet is doing an experiment. She attaches different weights to the end of a spring and then measures the length of the spring.

She records the length, L cm, of the spring for each weight, W g.

Her results are given in the table.

W	50	80	120	200	260
L	11	11.6	12.4	14	15.2

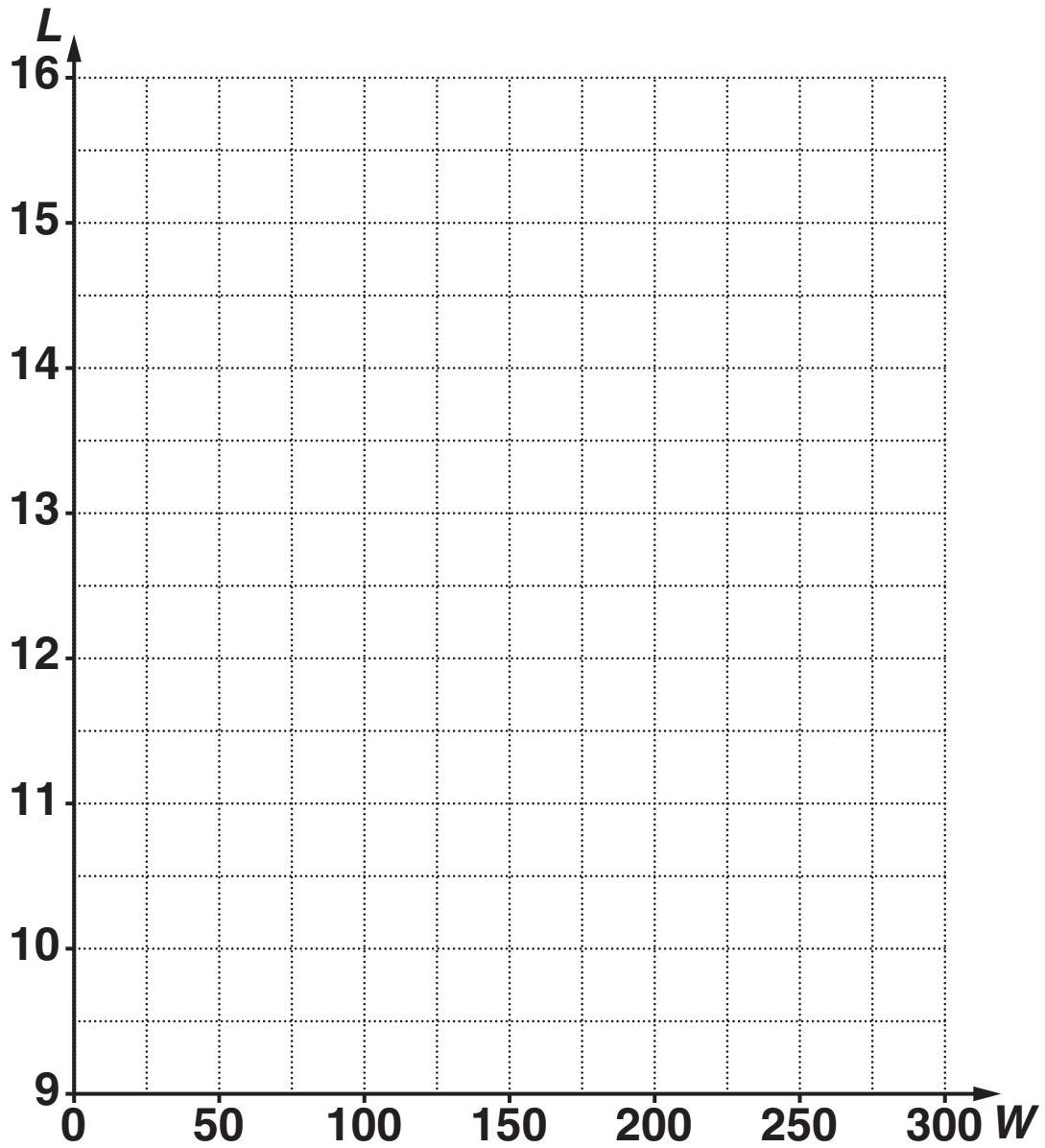
- (a) Use these values to draw the straight line graph of L against W , on the grid opposite. [3]

- (b) How long was the spring before Harpreet attached any weight to it?

(b) _____ cm [1]

- (c) Calculate the gradient of the graph in part (a).

(c) _____ [2]



(d) Write down the equation of your graph in the form $L = mW + c$.

(d) _____ [1]

- (e) Harpreet says that she can use the equation in part (d) to calculate the length of the spring if she attaches a 5 kg weight to it.**

Explain why she may be wrong.

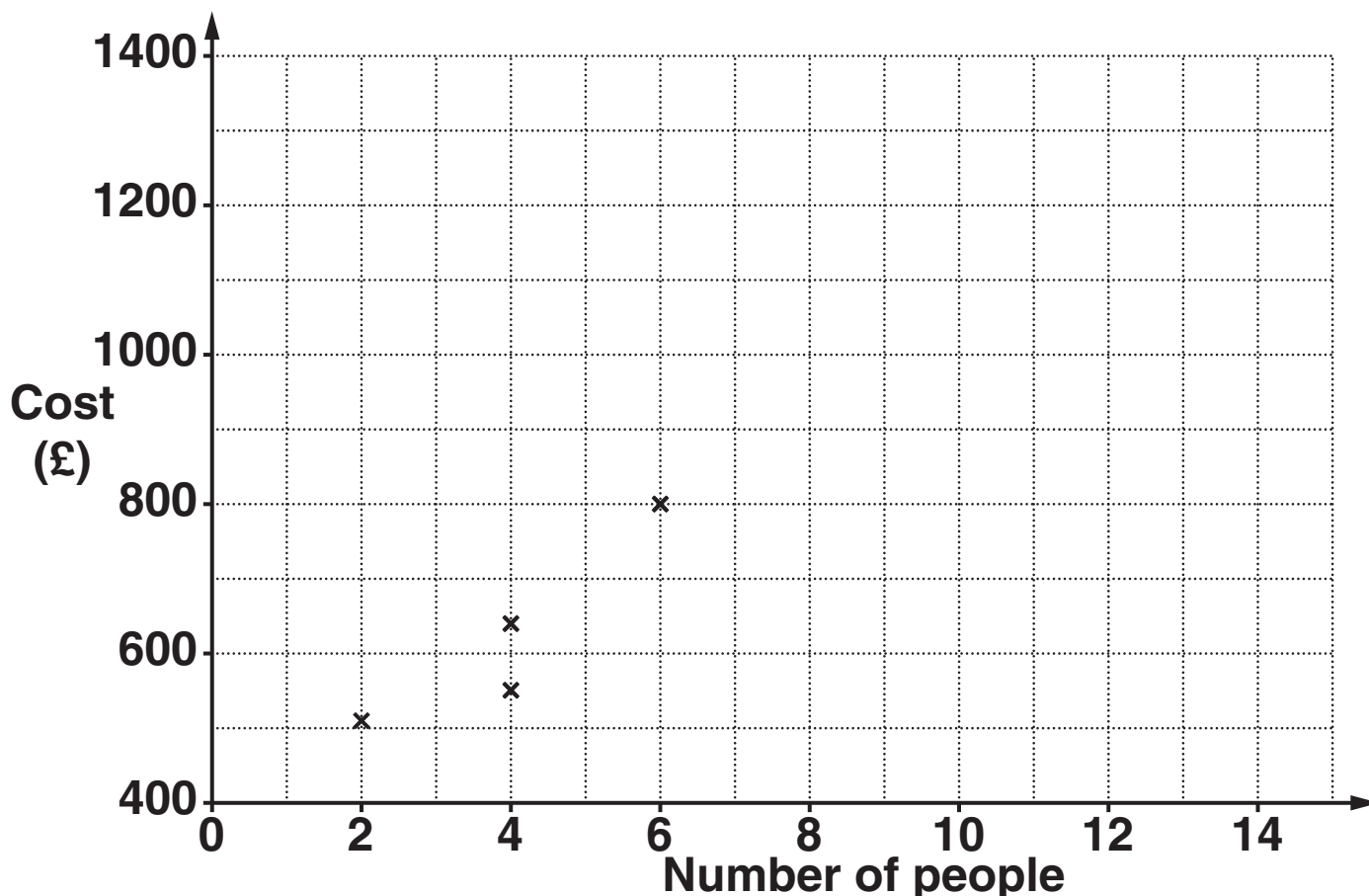
[1]

BLANK PAGE

6 *Island Holidays* has many cottages for rent in the Shetland Islands. They are for any number of people from 2 to 15. The table shows information for nine of their cottages. It shows the number of people each cottage can accommodate, and the cost of renting it for a week in July.

Number of people	2	4	4	6	7	8	8	9	12
Cost (£)	510	640	550	800	820	1040	1130	1110	1350

The results for the first four cottages are plotted on the scatter diagram.



(a) Complete the scatter diagram and draw a line of best fit. [3]

**(b)* Lizzie wants to rent a cottage for 10 people for a week in July.
She expects the food bill to be £400.
The cost of food and rent is to be shared equally between the 10 people.**

**Calculate how much each person should expect to pay.
Explain HOW you have worked out your answer.**

[4]

7 Solve algebraically these simultaneous equations.

$$3x + 4y = 17$$

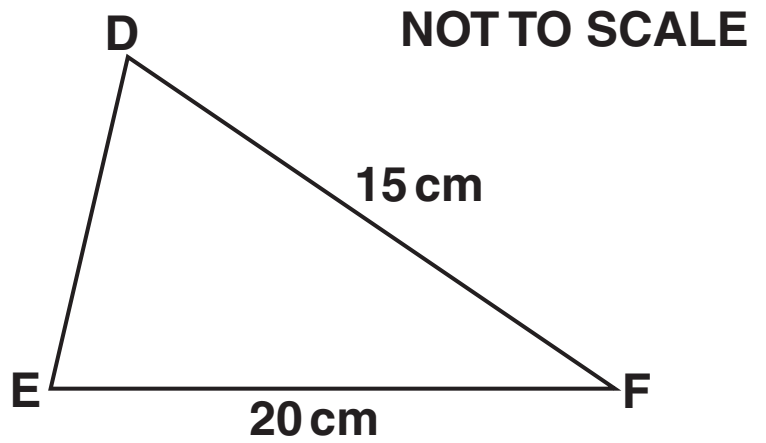
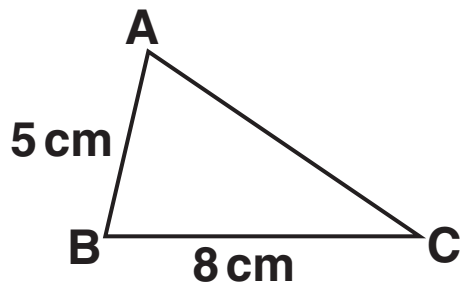
$$5x - 6y = 22$$

$$x = \underline{\hspace{10em}}$$

$$y = \underline{\hspace{10em}} \quad [4]$$

BLANK PAGE

8 Triangle ABC is similar to triangle DEF.



(a) Calculate DE.

(a) _____ cm [3]

(b) Calculate AC.

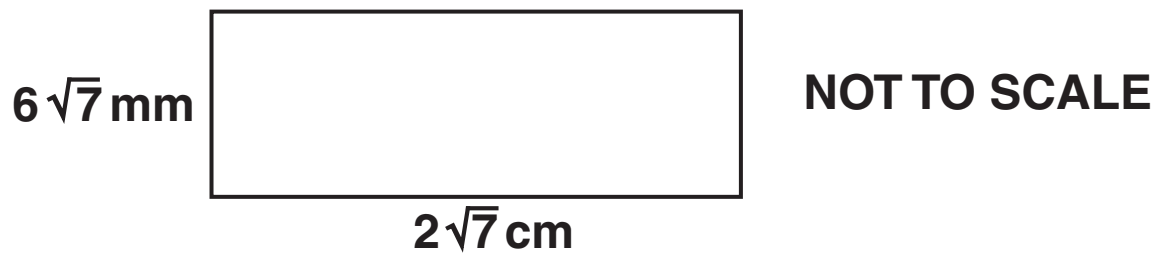
(b) _____ cm [2]

9 (a) Simplify.

$$(3 - \sqrt{5})(2 + \sqrt{5})$$

(a) _____ [3]

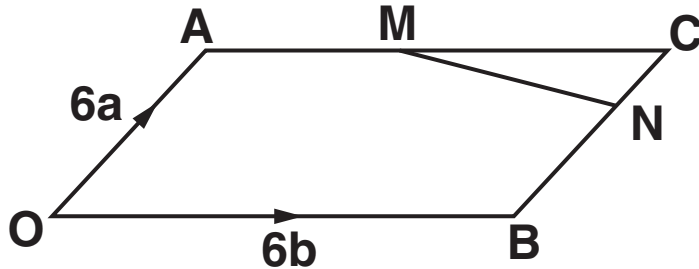
- (b) Find the area of this rectangle.
Give the units of your answer.



(b) _____ [3]

10 OACB is a parallelogram.

$\vec{OA} = 6a$, $\vec{OB} = 6b$, M is the midpoint of AC and
 $CN = \frac{1}{3}CB$.



Find, in terms of a and b, the vector that represents each of the following.
Give each answer in its simplest form.

(a) \vec{OC}

(a) _____ [1]

(b) \vec{AM}

(b) _____ [1]

(c) \vec{OM}

(c) _____ [1]

(d) \vec{MN}

(d) _____ [2]

11 (a) Find the value of

(i) 8^0 ,

(a)(i) _____ [1]

(ii) 8^{-2} .

(ii) _____ [2]

(b) Kepler's 3rd law of planetary motion can be given approximately as

$$T = \frac{1}{4}r^{\frac{3}{2}}$$

where T days is the time it takes a planet to orbit the Sun and r is the distance of the planet from the Sun in millions of kilometres.

The planet Venus is 100 million kilometres from the Sun.

How many days does it take Venus to orbit the Sun?

(b) _____ [2]

BLANK PAGE

BLANK PAGE

Copyright Information

OCR is committed to seeking permission to reproduce all third-party content that it uses in its assessment materials. OCR has attempted to identify and contact all copyright holders whose work is used in this paper. To avoid the issue of disclosure of answer-related information to candidates, all copyright acknowledgements are reproduced in the OCR Copyright Acknowledgements Booklet. This is produced for each series of examinations and is freely available to download from our public website (www.ocr.org.uk) after the live examination series.

If OCR has unwittingly failed to correctly acknowledge or clear any third-party content in this assessment material, OCR will be happy to correct its mistake at the earliest possible opportunity.

For queries or further information please contact the Copyright Team, First Floor, 9 Hills Road, Cambridge CB2 1GE.

OCR is part of the Cambridge Assessment Group; Cambridge Assessment is the brand name of University of Cambridge Local Examinations Syndicate (UCLES), which is itself a department of the University of Cambridge.