

**GENERAL CERTIFICATE OF SECONDARY EDUCATION
MATHEMATICS SYLLABUS A**

J512/02

Paper 2
(Foundation Tier)

**Monday 1 June 2009
Morning**

Duration: 2 hours


Candidates answer on the question paper

OCR Supplied Materials:

None

Other Materials Required:

- Electronic calculator
- Geometrical instruments
- Tracing paper (optional)



Candidate Forename		Candidate Surname	
--------------------	--	-------------------	--

Centre Number						Candidate Number				
---------------	--	--	--	--	--	------------------	--	--	--	--

INSTRUCTIONS TO CANDIDATES

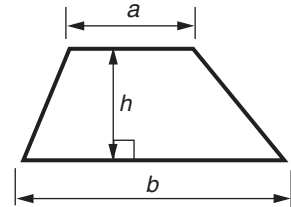
- Write your name clearly in capital letters, your Centre Number and Candidate Number in the boxes above.
- Use black ink. Pencil may be used for graphs and diagrams only.
- Read each question carefully and make sure that you know what you have to do before starting your answer.
- Show your working. Marks may be given for a correct method even if the answer is incorrect.
- Answer **all** the questions.
- Do **not** write in the bar codes.
- Write your answer to each question in the space provided, however additional paper may be used if necessary.

INFORMATION FOR CANDIDATES

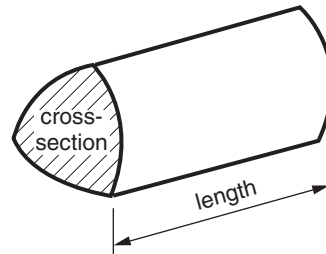
- The number of marks is given in brackets [] at the end of each question or part question.
- You are expected to use an electronic calculator for this paper.
- Use the π button on your calculator or take π to be 3.142 unless the question says otherwise.
- The total number of marks for this paper is **100**.
- This document consists of **20** pages. Any blank pages are indicated.

Formulae Sheet: Foundation Tier

Area of trapezium = $\frac{1}{2} (a + b)h$



Volume of prism = (area of cross-section) \times length



PLEASE DO NOT WRITE ON THIS PAGE

1

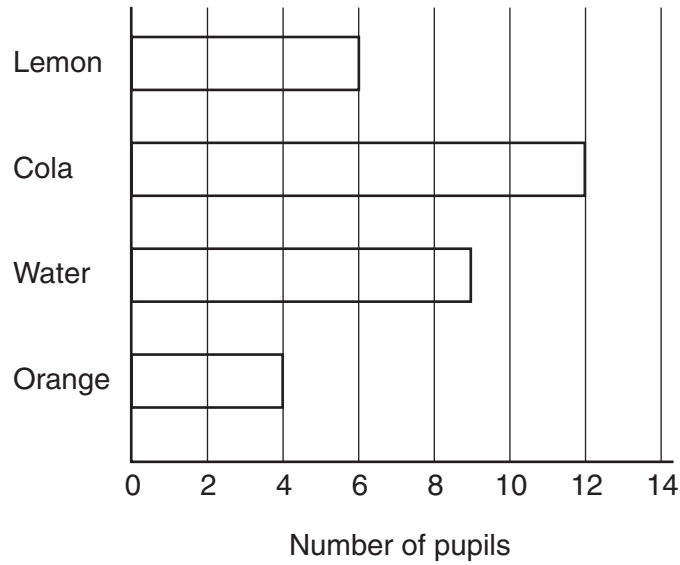
27	6	11	41	5
20	58	30	16	

From the numbers above write down

- (a) the smallest even number, (a) _____ [1]
- (b) the largest odd number, (b) _____ [1]
- (c) two numbers with a total of 31, (c) _____ [1]
- (d) two numbers with a difference of 30, (d) _____ [1]
- (e) a multiple of 10, (e) _____ [1]
- (f) a factor of 32, (f) _____ [1]
- (g) a prime number, (g) _____ [1]
- (h) a cube number. (h) _____ [1]

.....
.....
.....

2 Pupils from class 5B went on a school trip. They each chose a drink to take with them. The bar chart shows their choices.



(a) (i) How many pupils chose Cola?

(a)(i) _____ [1]

(ii) How many pupils chose Water?

(ii) _____ [1]

When everyone is present, there are 33 pupils in class 5B.

(b) How many pupils from class 5B did not go on the trip?

.....

(b) _____ [2]

- 3 Complete the table so that the fractions, decimals and percentages in each row are equivalent to each other.

Fraction	Decimal	Percentage
$\frac{37}{100}$	0.37	37%
	0.53	53%
$\frac{3}{4}$	0.75	
		9%

[4]


- 4 Complete these sentences with the correct **metric** unit.
Here is an example.

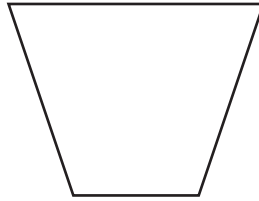
A new pencil is about 16 centimetres long.

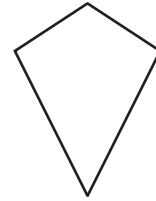
- (a) The distance from London to Brighton is about 80 _____ . [1]
- (b) The weight of a banana is about 150 _____ . [1]
- (c) The capacity of a teacup is about 200 _____ . [1]
- (d) The weight of a small dog is about 8 _____ . [1]

- 5 (a) From this list pick the correct name for each shape.
Write each answer below the shape.

rhombus rectangle kite trapezium square parallelogram









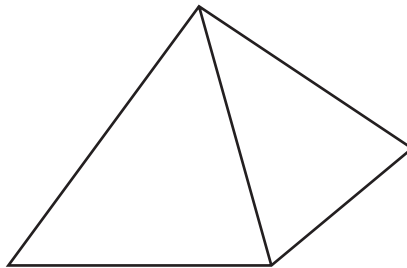
[3]

- (b) From this list pick the correct name for each solid shape.
Write each answer below the shape.

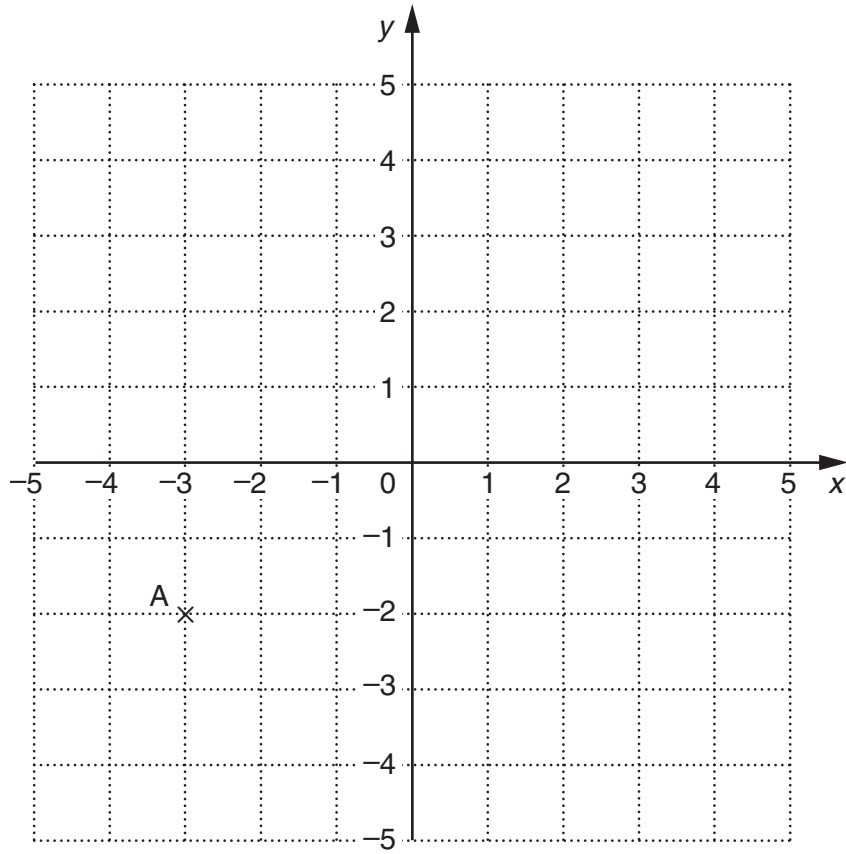
cylinder sphere cube pyramid cone cuboid







[3]



(a) Write down the coordinates of the point A.

(a) (_____ , _____) [1]

(b) Plot and label the points B(2 , 4), C(0 , 3) and D(1.5 , 2).

[3]

7 Use your calculator to work these out.

(a) 2.11^2

(a) _____ [1]

(b) $\sqrt{2.89}$

(b) _____ [1]

(c) $\frac{3}{5}$ of 220

.....

(c) _____ [2]

8 (a) Fill in the boxes in this pattern.

$$2^2 = 1 + 3$$

$$\boxed{} = 1 + 3 + 5$$

$$4^2 = 1 + 3 + 5 + 7$$

$$5^2 = \boxed{}$$

$$6^2 = 1 + 3 + 5 + 7 + 9 + 11$$

$$\boxed{} = \boxed{}$$

[4]

(b) Write down the next two numbers in this sequence.

22 21 18 13 _____ _____

..... [2]

9 Two fair dice are rolled together.

(a) Complete the table to show the possible totals.

		Number on second dice					
		1	2	3	4	5	6
Number on first dice	1	2	3	4	5	6	7
	2	3					
	3	4			7	8	9
	4	5			8	9	10
	5	6	7		9	10	11
	6	7	8	9	10	11	12

[1]

(b) Find the probability that the total is 8.

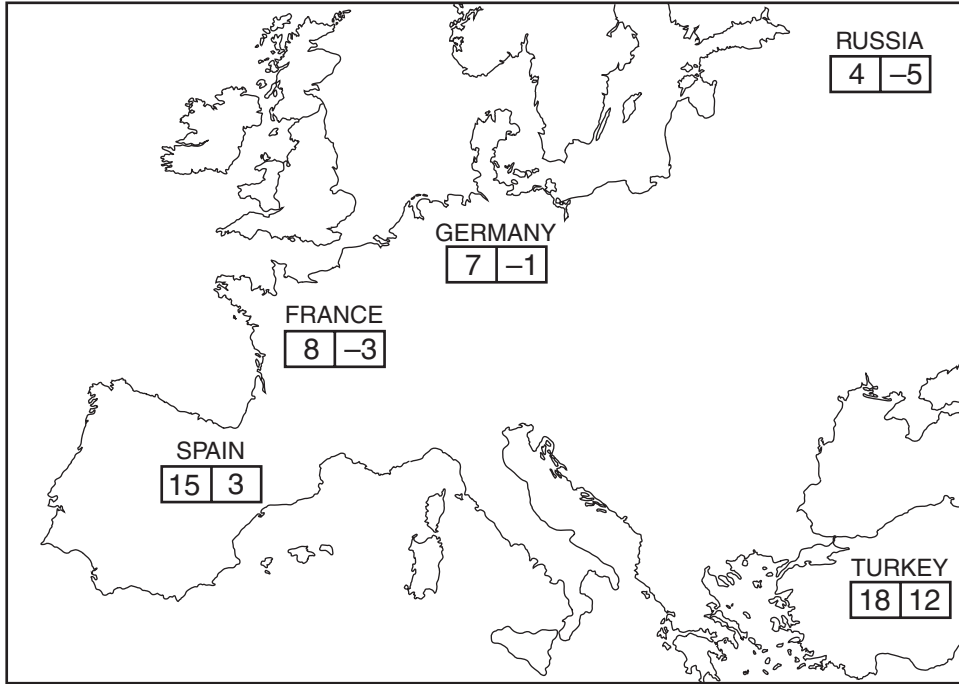
.....

(b) _____ [2]

(c) Find the probability that the total is **greater than** 10.

.....

(c) _____ [1]



The numbers on the map show the highest and lowest temperatures, in °C, in 5 countries one day last year.

(a) In which country was the difference between the highest and lowest temperatures equal to 8 °C?

.....
 (a) _____ [1]

(b) Which country had the lowest temperature overall?

(b) _____ [1]

(c) Which country's lowest temperature was 6 °C below Spain's lowest temperature?

(c) _____ [1]

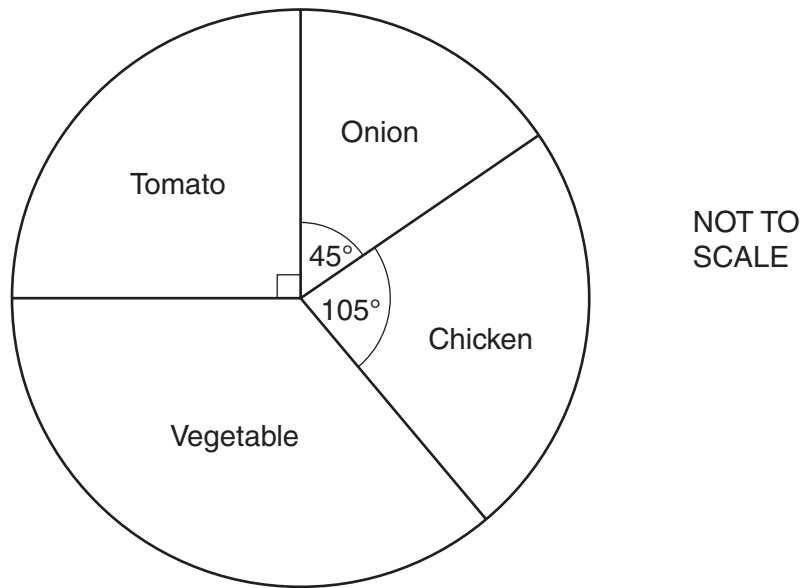
(d) The next day, Russia's lowest temperature went up by 3 °C.

What was Russia's lowest temperature on that day?

.....

 (d) _____ °C [1]

- 11 24 pupils were asked to name their favourite soup.
The pie chart represents the results.



- (a) Work out the size of the angle for Vegetable.

.....

(a) _____ ° [2]

- (b) How many of the 24 pupils chose Onion?

.....

(b) _____ [2]

- 12 Aftab has 600 marbles.
He gives a quarter of them to Anna.
He gives a third of them to Winston.

What fraction of the 600 marbles does he have left?

.....

.....

.....

.....

.....

.....

_____ [4]

13 (a) Solve.

(i) $y - 7 = 3$

.....
 (a)(i) _____ [1]

(ii) $3r = 12$

.....
 (ii) _____ [1]

(iii) $\frac{t}{4} = 5$

.....
 (iii) _____ [1]

(iv) $12 = 5x + 2$

.....

 (iv) _____ [2]

(b) Tony is x years old.

(i) Alan is 3 years older than Tony.

Write down an expression for Alan's age.

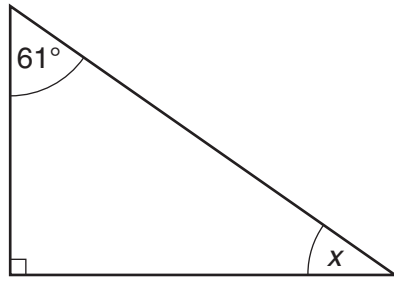
.....
 (b)(i) _____ [1]

(ii) Ayesha is 4 times as old as Tony.

Write down an expression for Ayesha's age.

.....
 (ii) _____ [1]

14 (a) Work out the size of angle x .



NOT TO SCALE

.....

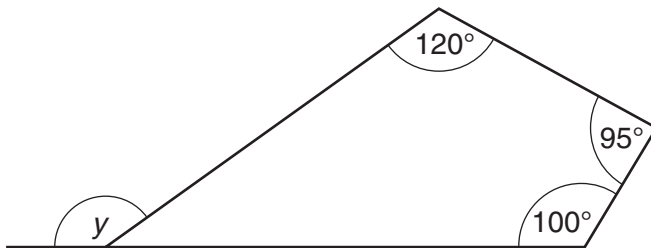
.....

(a) $x =$ _____ °

Give, in words, a reason for your answer.

_____ [3]

(b) Work out the size of angle y .



NOT TO SCALE

.....

.....

.....

(b) $y =$ _____ °

Give, in words, reasons for your answer.

_____ [5]

- 15** Joan has a recipe for making chocolate buns.
The recipe uses 150g of flour and 25g of cocoa powder to make 12 buns.

(a) How much flour should Joan use to make 18 buns?

.....
.....

(a) _____ g [2]

(b) What is 25g out of 175g expressed as a percentage?

.....

(b) _____ % [2]

16 Calculate.

(a) $\frac{22.4}{3.6 + 2.8}$

.....

(a) _____ [1]

(b) $\sqrt{36 + (4.5)^2}$

.....
.....

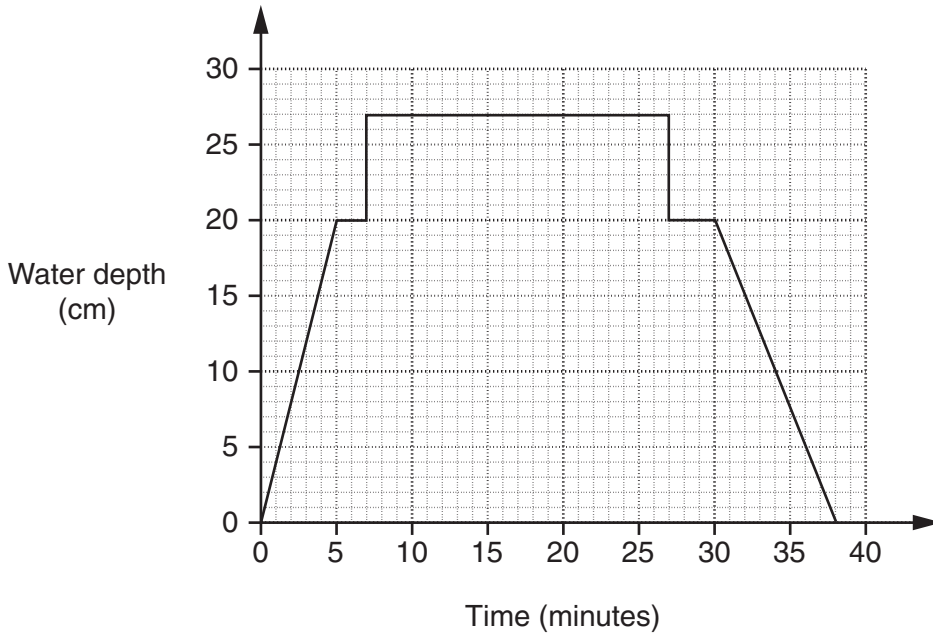
(b) _____ [2]

(c) The reciprocal of 0.16.

.....

(c) _____ [1]

- 17 Rachael decides to bath her dog, Oscar. She runs water into the bath, puts Oscar in the bath, baths Oscar, takes him out and then empties the bath. The graph shows the depth of water in the bath.



- (a) Which is quicker, running water into the bath or emptying it?
Explain how you can tell.

_____ [1]

- (b) By how much does the depth of the water increase in one minute as water runs into the bath?

.....
(b) _____ cm [1]

- (c) For how long was Oscar in the bath?

.....
(c) _____ minutes [1]

- (d) The volume of the bath water was 119600cm^3 .

Change 119600cm^3 into litres.

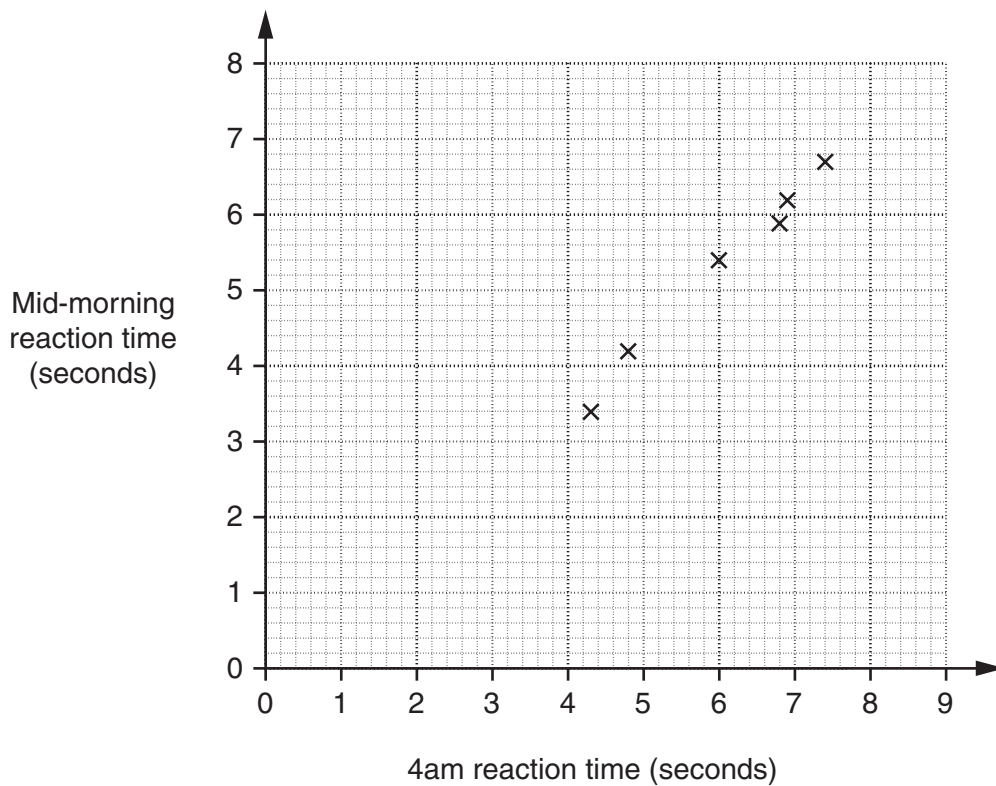
.....
(d) _____ litres [1]

- 18** Sally conducted an experiment on reaction times. One day ten students were woken at 4 am and their reaction times were measured. Another day their reaction times were measured mid-morning after a full night's sleep.

The reaction times, in seconds, are shown in the table.

Student	A	B	C	D	E	F	G	H	I	J
4 am reaction time	4.3	6.8	6.9	7.4	6.0	4.8	5.6	4.0	8.5	3.6
Mid-morning reaction time	3.4	5.9	6.2	6.7	5.4	4.2	4.4	3.0	7.5	2.8

The scatter graph shows the reaction times for students A to F.




- (a) Complete the scatter graph. [2]
- (b) Describe the correlation shown. [1]
- (c) Draw a line of best fit on your graph. [1]
- (d) Another student, John, has a mid-morning reaction time of 5.0 seconds.

Use your line of best fit to estimate John's reaction time if he was woken at 4 am.

(d) _____ s [1]

19 This logo is made using two semicircles, each with a radius of 6 cm.



Work out the **perimeter** of the logo.
Give the units of your answer.

.....

_____ [4]

20 The capacity of a tank is 8 gallons.
 The empty tank was filled with petrol.
 The petrol cost 123.9 pence per litre.
 1 litre is approximately equal to 0.22 gallons.

Calculate how much it cost to fill the tank with petrol.
 Give your answer to an appropriate degree of accuracy.

.....

£ _____ [4]

21 Use trial and improvement to solve this equation.

$$x^3 - x = 10$$

Give your answer to one decimal place.
Show all your trials and their outcomes.

.....

.....

.....

.....

.....

.....

.....

.....

.....

.....

.....

.....

.....

.....

.....

_____ [4]

PLEASE DO NOT WRITE ON THIS PAGE



Copyright Information

OCR is committed to seeking permission to reproduce all third-party content that it uses in its assessment materials. OCR has attempted to identify and contact all copyright holders whose work is used in this paper. To avoid the issue of disclosure of answer-related information to candidates, all copyright acknowledgements are reproduced in the OCR Copyright Acknowledgements Booklet. This is produced for each series of examinations, is given to all schools that receive assessment material and is freely available to download from our public website (www.ocr.org.uk) after the live examination series.

If OCR has unwittingly failed to correctly acknowledge or clear any third-party content in this assessment material, OCR will be happy to correct its mistake at the earliest possible opportunity.

For queries or further information please contact the Copyright Team, First Floor, 9 Hills Road, Cambridge CB2 1PB.

OCR is part of the Cambridge Assessment Group; Cambridge Assessment is the brand name of University of Cambridge Local Examinations Syndicate (UCLES), which is itself a department of the University of Cambridge.