

Write your name here

Surname

Other names

**Pearson**  
**Edexcel GCSE**

Centre Number

--	--	--	--	--

Candidate Number

--	--	--	--	--

# Methods in Mathematics

## Unit 1: Methods 1

*For Approved Pilot Centres ONLY*

**Higher Tier**

Tuesday 13 June 2017 – Morning

**Time: 1 hour 45 minutes**

Paper Reference

**5MM1H/01**

**You must have:** Ruler graduated in centimetres and millimetres, protractor, pair of compasses, pen, HB pencil, eraser. Tracing paper may be used.

Total Marks



### Instructions

- Use **black** ink or ball-point pen.
- **Fill in the boxes** at the top of this page with your name, centre number and candidate number.
- Answer **all** questions.
- Answer the questions in the spaces provided – *there may be more space than you need.*
- **Calculators must not be used.**

### Information

- The total mark for this paper is 100
- The marks for **each** question are shown in brackets – *use this as a guide as to how much time to spend on each question.*
- Questions labelled with an **asterisk** (\*) are ones where the quality of your written communication will be assessed.

### Advice

- Read each question carefully before you start to answer it.
- Keep an eye on the time.
- Try to answer every question.
- Check your answers if you have time at the end.

Turn over ►

P53504A

©2017 Pearson Education Ltd.

6/6/15/



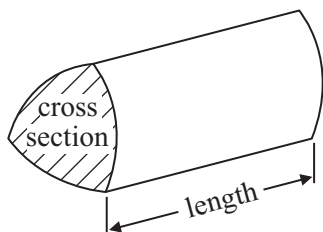
  
**Pearson**

# GCSE Mathematics 2MM01

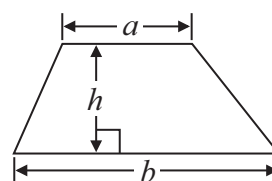
Formulae: Higher Tier

**You must not write on this formulae page.  
Anything you write on this formulae page will gain NO credit.**

**Volume of prism** = area of cross section  $\times$  length



**Area of trapezium** =  $\frac{1}{2} (a + b)h$

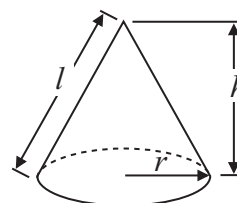
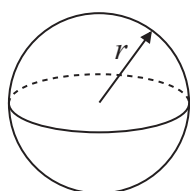


**Volume of sphere** =  $\frac{4}{3} \pi r^3$

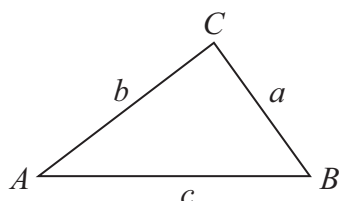
**Volume of cone** =  $\frac{1}{3} \pi r^2 h$

**Surface area of sphere** =  $4\pi r^2$

**Curved surface area of cone** =  $\pi r l$



**In any triangle ABC**



**The Quadratic Equation**

The solutions of  $ax^2 + bx + c = 0$  where  $a \neq 0$ , are given by

$$x = \frac{-b \pm \sqrt{b^2 - 4ac}}{2a}$$

**Sine Rule**  $\frac{a}{\sin A} = \frac{b}{\sin B} = \frac{c}{\sin C}$

**Cosine Rule**  $a^2 = b^2 + c^2 - 2bc \cos A$

**Area of triangle** =  $\frac{1}{2} ab \sin C$

DO NOT WRITE IN THIS AREA

DO NOT WRITE IN THIS AREA

DO NOT WRITE IN THIS AREA



DO NOT WRITE IN THIS AREA

DO NOT WRITE IN THIS AREA

DO NOT WRITE IN THIS AREA

**Answer ALL questions.**

**Write your answers in the spaces provided.**

**You must write down all stages in your working.**

**You must NOT use a calculator.**

**1** There are 20 counters in a box.

6 of the counters are red.

5 of the counters are green.

The rest of the counters are blue.

Lethna takes at random one of the counters from the box.

Find the probability that she takes

(i) a blue counter,

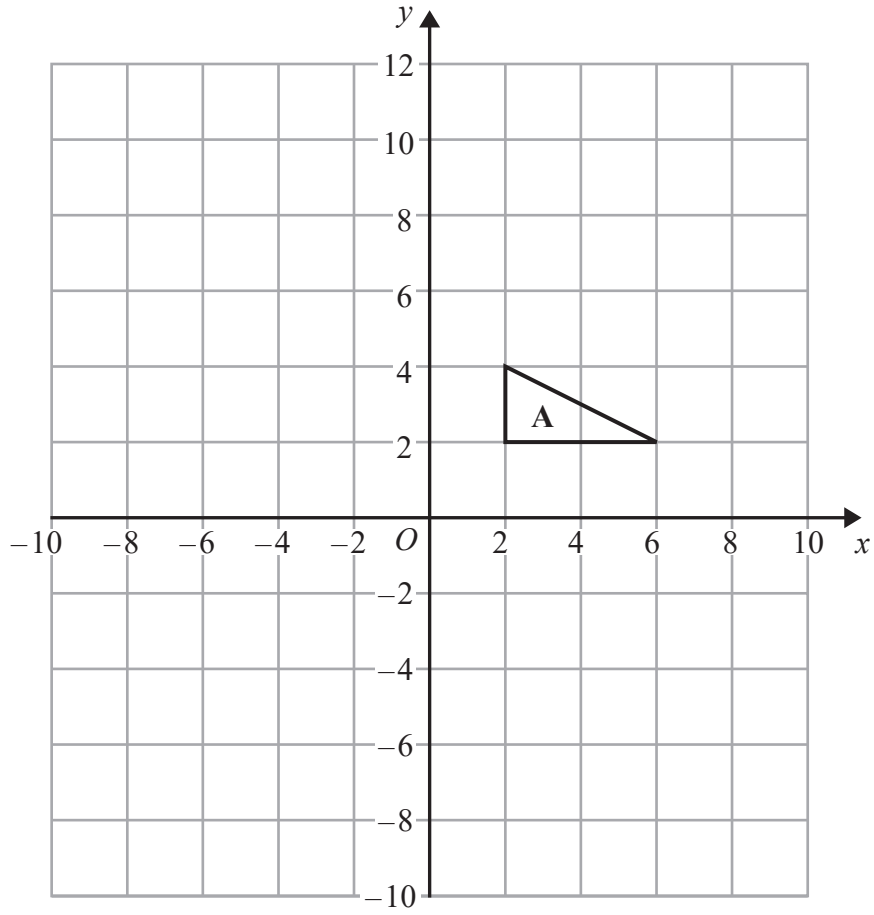
.....

(ii) a counter that is **not** green.

.....

**(Total for Question 1 is 4 marks)**

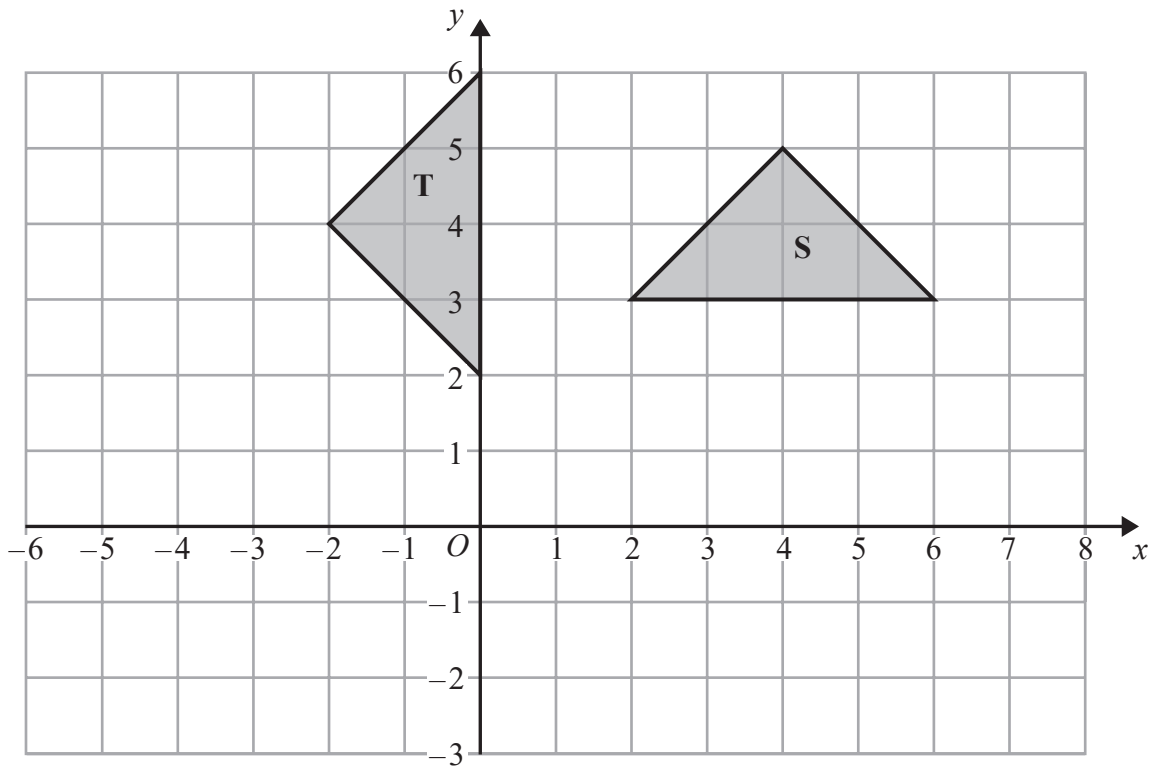




(a) Enlarge triangle A with scale factor 2 and centre (2, 2).

(2)





Shape **S** can be transformed to shape **T** by the translation  $\begin{pmatrix} 0 \\ -3 \end{pmatrix}$  followed by a rotation.

(b) Describe the rotation.

(3)

(Total for Question 2 is 5 marks)



3

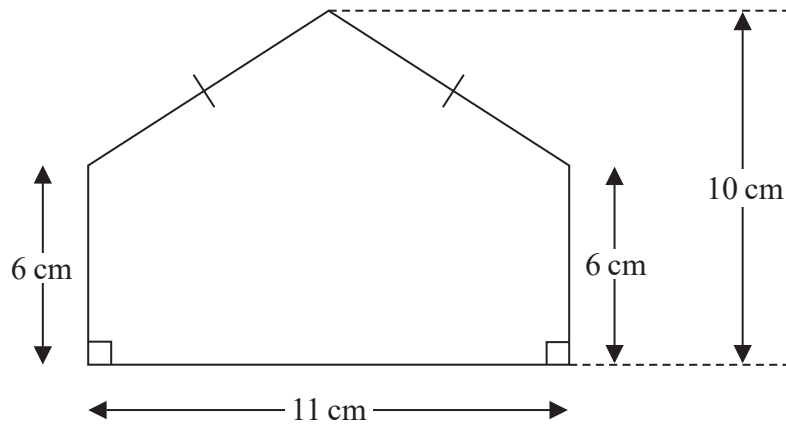


Diagram **NOT** accurately drawn

Work out the area of the shape.

DO NOT WRITE IN THIS AREA

DO NOT WRITE IN THIS AREA

DO NOT WRITE IN THIS AREA

(Total for Question 3 is 5 marks)

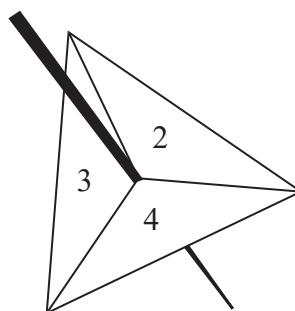
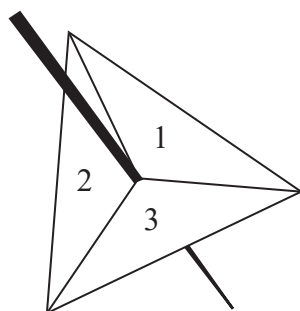


DO NOT WRITE IN THIS AREA

DO NOT WRITE IN THIS AREA

DO NOT WRITE IN THIS AREA

4 Michelle has two fair 3-sided spinners.



Michelle spins each spinner once.  
Each spinner lands on a number.

Michelle multiplies these two numbers together to get her score.

(i) Work out the probability that Michelle's score is 4

.....

(ii) Work out the probability that Michelle's score is at least 8

.....

**(Total for Question 4 is 5 marks)**



\*5

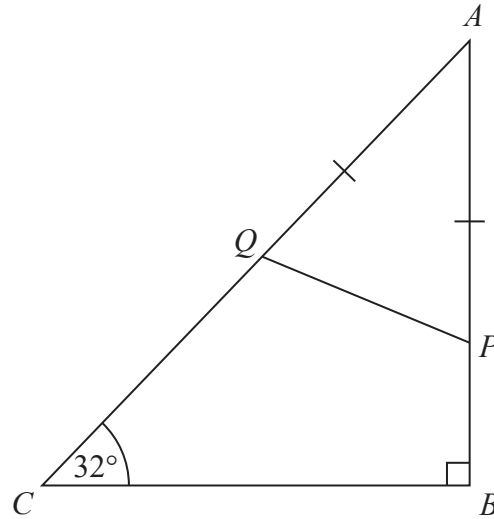


Diagram **NOT**  
accurately drawn

$ABC$  is a right-angled triangle.  
Angle  $ABC = 90^\circ$   
Angle  $ACB = 32^\circ$

$P$  is a point on  $AB$ .  
 $Q$  is a point on  $AC$ .  
 $AP = AQ$

Work out the size of angle  $APQ$ .  
Give reasons for each stage of your working.

DO NOT WRITE IN THIS AREA

DO NOT WRITE IN THIS AREA

DO NOT WRITE IN THIS AREA

(Total for Question 5 is 5 marks)





DO NOT WRITE IN THIS AREA

DO NOT WRITE IN THIS AREA

DO NOT WRITE IN THIS AREA

6 Given that  $372 \times 68 = 25\,296$

find the value of

(a)  $3720 \times 68$

.....  
(1)

(b)  $3.72 \times 0.68$

.....  
(1)

(c)  $252.96 \div 34$

.....  
(2)

(Total for Question 6 is 4 marks)



7 Here is a rectangle.

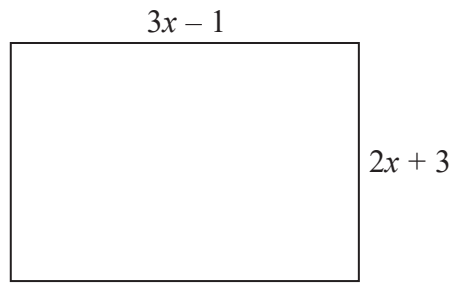


Diagram **NOT** accurately drawn

All measurements are in centimetres.

The perimeter of the rectangle is 39 cm.

Work out the area of the rectangle.

You must show all your working.

..... cm<sup>2</sup>

**(Total for Question 7 is 5 marks)**

DO NOT WRITE IN THIS AREA

DO NOT WRITE IN THIS AREA

DO NOT WRITE IN THIS AREA

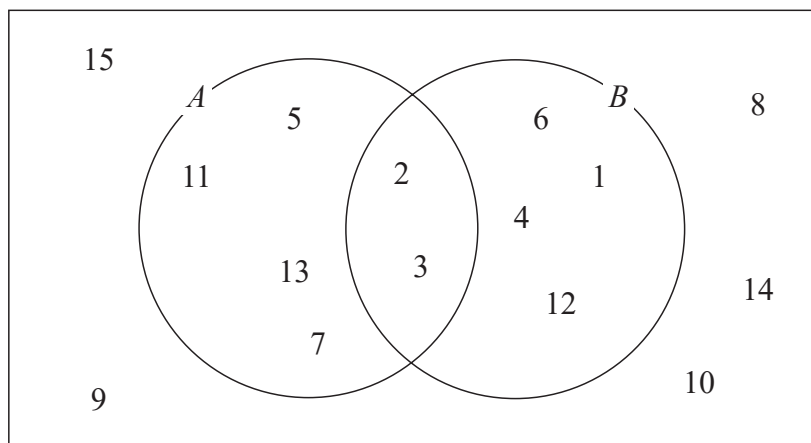


DO NOT WRITE IN THIS AREA

DO NOT WRITE IN THIS AREA

DO NOT WRITE IN THIS AREA

8 The Venn diagram shows the numbers from 1 to 15



(i) Find  $P(A \cap B)$

.....

(ii) Find  $P(A \cup B)$

.....

(iii) Find  $P(B')$

.....

(Total for Question 8 is 5 marks)



9 Work out  $4\frac{3}{8} \div 5\frac{1}{4}$

Give your answer as a fraction in its simplest form.

.....  
(Total for Question 9 is 3 marks)

DO NOT WRITE IN THIS AREA

DO NOT WRITE IN THIS AREA

DO NOT WRITE IN THIS AREA




DO NOT WRITE IN THIS AREA

DO NOT WRITE IN THIS AREA

DO NOT WRITE IN THIS AREA

10 On the grid, draw the graph of  $y = 3x + 2$  for values of  $x$  from  $-2$  to  $2$



(Total for Question 10 is 4 marks)



11 (a) Write 140 as a product of its prime factors.

.....  
(2)

(b) Find the Highest Common Factor (HCF) of 140 and 110

.....  
(2)

(c) Find the Lowest Common Multiple (LCM) of 140 and 110

.....  
(2)

**(Total for Question 11 is 6 marks)**

DO NOT WRITE IN THIS AREA

DO NOT WRITE IN THIS AREA

DO NOT WRITE IN THIS AREA



DO NOT WRITE IN THIS AREA

DO NOT WRITE IN THIS AREA

DO NOT WRITE IN THIS AREA

12 The  $n$ th term of a quadratic sequence is  $n^2 - 4n + 5$

(a) Find the third term of this sequence.

.....  
(2)

Here are the first five terms of a different quadratic sequence.

5      11      21      35      53

(b) Find, in terms of  $n$ , an expression for the  $n$ th term of this sequence.

.....  
(3)

**(Total for Question 12 is 5 marks)**

13 (a) Write the number 28 000 000 in standard form.

.....  
(1)

(b) Write  $8.32 \times 10^{-4}$  as an ordinary number.

.....  
(1)

(c) Work out  $(1.2 \times 10^4) + (2.5 \times 10^3)$   
Give your answer in standard form.

.....  
(2)

**(Total for Question 13 is 4 marks)**



14

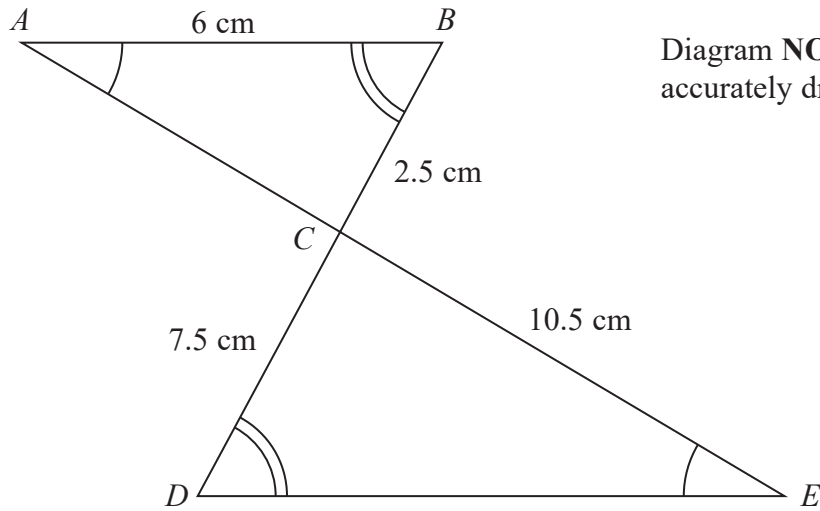


Diagram **NOT** accurately drawn

Triangles  $ABC$  and  $EDC$  are similar.

$ACE$  and  $BCD$  are straight lines.

Angle  $BAC =$  angle  $DEC$

Angle  $CBA =$  angle  $CDE$

$AB = 6$  cm,  $BC = 2.5$  cm,  $CD = 7.5$  cm and  $CE = 10.5$  cm.

(a) Work out the length of  $DE$ .

.....cm  
(2)

(b) Work out the length of  $AE$ .

.....cm  
(2)

(Total for Question 14 is 4 marks)

DO NOT WRITE IN THIS AREA

DO NOT WRITE IN THIS AREA

DO NOT WRITE IN THIS AREA





DO NOT WRITE IN THIS AREA

DO NOT WRITE IN THIS AREA

DO NOT WRITE IN THIS AREA

15 (a) Solve  $9 = 4(c - 2)$

$c = \dots\dots\dots$   
(3)

(b) Solve  $x^2 - x - 12 = 0$

$\dots\dots\dots$   
(3)

(Total for Question 15 is 6 marks)

16 (a) Find the value of  $36^{\frac{1}{2}}$

$\dots\dots\dots$   
(1)

(b) Find the value of  $4^{-2}$

$\dots\dots\dots$   
(1)

(c) Write down the value of  $10^0$

$\dots\dots\dots$   
(1)

(Total for Question 16 is 3 marks)



17 (a) Factorise  $9p^2 - 1$

.....  
(1)

(b) Factorise fully  $4(x + y)^2 - 2(x + y)$

.....  
(2)

(c) Expand and simplify  $(3a - 5b)(2a + 3b)$

.....  
(2)

(d) Simplify fully  $\frac{2w - 1}{2w^2 - 9w + 4}$

.....  
(2)

(Total for Question 17 is 7 marks)



\*18

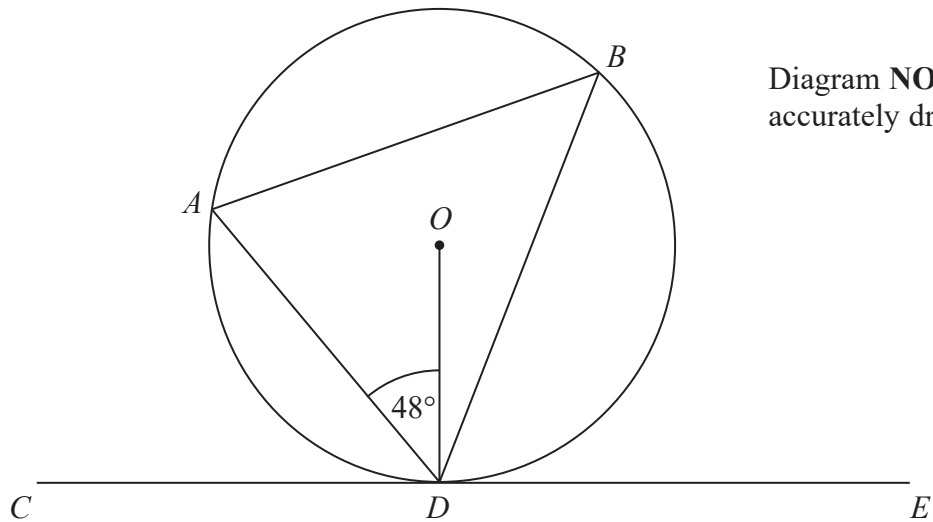


Diagram NOT  
accurately drawn

$A$ ,  $B$  and  $D$  are points on a circle, centre  $O$ .  
 $CDE$  is a tangent to the circle.  
Angle  $ADO = 48^\circ$

Work out the size of angle  $ABD$ .  
Give reasons for your answer.

(Total for Question 18 is 4 marks)



P 5 3 5 0 4 A 0 1 9 2 4

\*19 Given that  $p$  and  $r$  are two consecutive even numbers, prove algebraically that

$$\frac{p^2 + r^2}{2} \text{ is always 1 more than } \left(\frac{p + r}{2}\right)^2$$

DO NOT WRITE IN THIS AREA

DO NOT WRITE IN THIS AREA

DO NOT WRITE IN THIS AREA

(Total for Question 19 is 5 marks)



DO NOT WRITE IN THIS AREA

DO NOT WRITE IN THIS AREA

DO NOT WRITE IN THIS AREA

20 There are only 5 black counters, 4 red counters and 2 white counters in a bag.

Charlie takes at random two counters from the bag.

Work out the probability that Charlie takes at least one red counter.

.....  
(Total for Question 20 is 4 marks)



21 Write  $\frac{1}{1-x} - \frac{2}{1+x}$

as a single fraction in its simplest form.

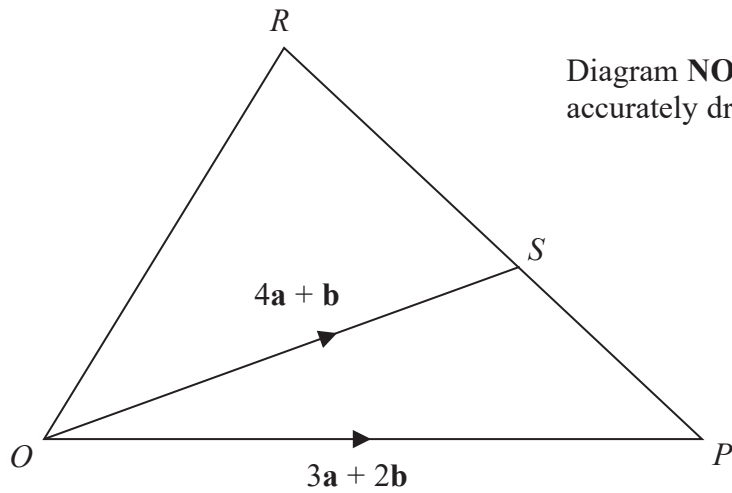
DO NOT WRITE IN THIS AREA

DO NOT WRITE IN THIS AREA

DO NOT WRITE IN THIS AREA

.....  
(Total for Question 21 is 3 marks)





$OPR$  is a triangle.  
 $PSR$  is a straight line.

$$\vec{OP} = 3\mathbf{a} + 2\mathbf{b}$$

$$\vec{OS} = 4\mathbf{a} + \mathbf{b}$$

(a) Show that  $\vec{SP} = \mathbf{b} - \mathbf{a}$

(1)

$$\vec{OR} = 7\mathbf{a} - 2\mathbf{b}$$

(b) Find the ratio  $RS : SP$  in its simplest form.

(3)

(Total for Question 22 is 4 marks)

TOTAL FOR PAPER IS 100 MARKS

END



DO NOT WRITE IN THIS AREA

DO NOT WRITE IN THIS AREA

DO NOT WRITE IN THIS AREA

**BLANK PAGE**

