

Centre No.						Paper Reference					Surname	Initial(s)			
Candidate No.						5	3	8	3	H	/	1	0	Signature	

Paper Reference(s)

**5383H/10**

**Edexcel GCSE**

**Mathematics (Modular) – 2381**

Paper 10 (Calculator)

**Higher Tier**

Unit 2 Stage 2

Thursday 12 June 2008 – Afternoon

Time: 30 minutes



Examiner's use only

--	--	--

Team Leader's use only

--	--	--

**Materials required for examination**

Ruler graduated in centimetres and millimetres, protractor, compasses, pen, HB pencil, eraser, calculator. Tracing paper may be used.

**Items included with question papers**

Nil

**Instructions to Candidates**

In the boxes above, write your centre number, candidate number, your surname, initials and signature. Check that you have the correct question paper.

Answer ALL the questions. Write your answers in the spaces provided in this question paper.

**You must NOT write on the formulae page.**

**Anything you write on the formulae page will gain NO credit.**

If you need more space to complete your answer to any question, use additional answer sheets.

**Information for Candidates**

The marks for individual questions and the parts of questions are shown in round brackets: e.g. (2).

There are 9 questions in this question paper. The total mark for this paper is 25.

There are 8 pages in this question paper. Any blank pages are indicated.

**Calculators may be used.**

If your calculator does not have a  $\pi$  button, take the value of  $\pi$  to be 3.142 unless the question instructs otherwise.

**Advice to Candidates**

Show all stages in any calculations.

Work steadily through the paper. Do not spend too long on one question.

If you cannot answer a question, leave it and attempt the next one.

Return at the end to those you have left out.

This publication may be reproduced only in accordance with Edexcel Limited copyright policy. ©2008 Edexcel Limited.

Printer's Log. No.  
**N33055A**

W850/R5383H/57570 6/6/6



*Turn over*

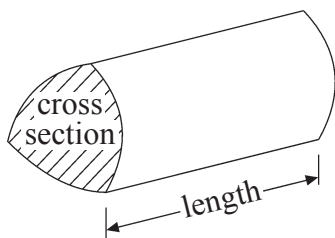
**edexcel**  
advancing learning, changing lives

**GCSE Mathematics**

Formulae: Higher Tier

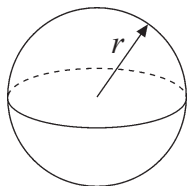
**You must not write on this formulae page.  
Anything you write on this formulae page will gain NO credit.**

**Volume of a prism** = area of cross section  $\times$  length



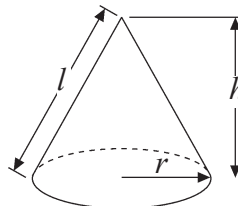
**Volume of sphere** =  $\frac{4}{3}\pi r^3$

**Surface area of sphere** =  $4\pi r^2$

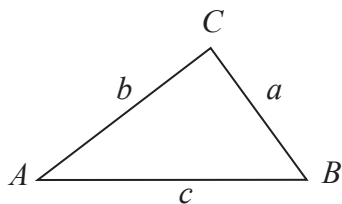


**Volume of cone** =  $\frac{1}{3}\pi r^2 h$

**Curved surface area of cone** =  $\pi r l$



**In any triangle ABC**



**The Quadratic Equation**

The solutions of  $ax^2 + bx + c = 0$

where  $a \neq 0$ , are given by

$$x = \frac{-b \pm \sqrt{b^2 - 4ac}}{2a}$$

**Sine Rule**  $\frac{a}{\sin A} = \frac{b}{\sin B} = \frac{c}{\sin C}$

**Cosine Rule**  $a^2 = b^2 + c^2 - 2bc \cos A$

**Area of triangle** =  $\frac{1}{2}ab \sin C$



Leave blank

Answer ALL NINE questions.

Write your answers in the spaces provided.

You must write down all stages in your working.

1. Use your calculator to work out

$$(3.4 + 2.1)^2 \times 5.7$$

Write down all the figures on your calculator display.

Q1

(Total 2 marks)

2.

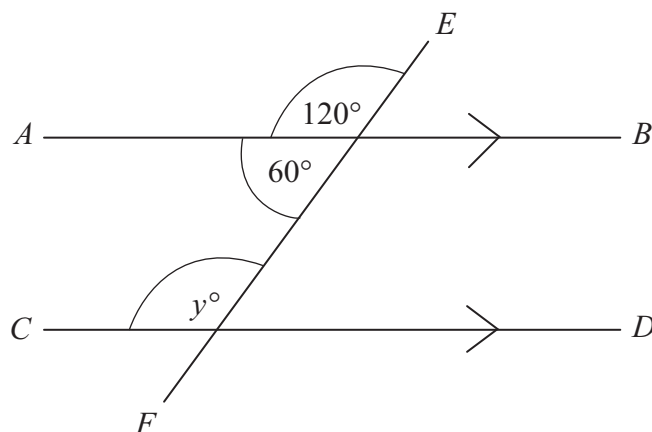


Diagram NOT accurately drawn

$AB$  is parallel to  $CD$ .  
 $EF$  is a straight line.

- (i) Write down the value of  $y$ .

$y = \dots\dots\dots$

- (ii) Give a reason for your answer.

.....

Q2

(Total 2 marks)



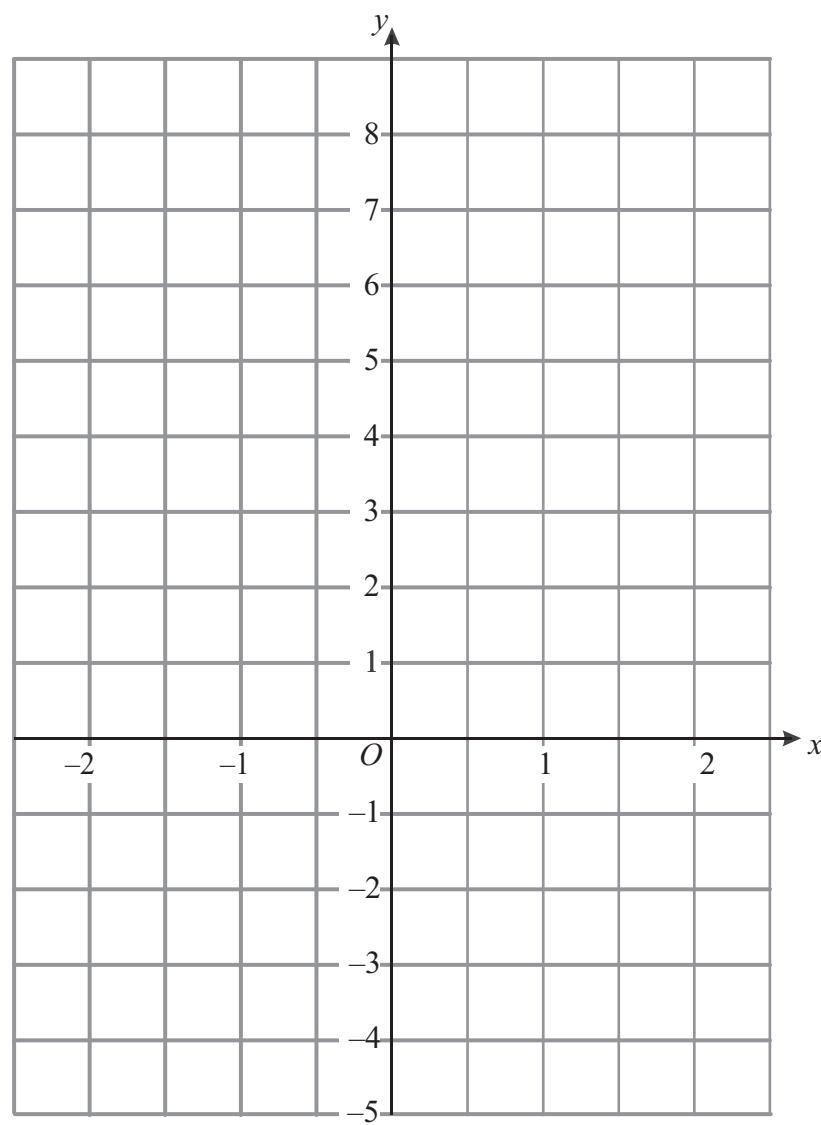
Leave blank

3. (a) Complete the table of values for  $y = 3x + 2$

$x$	-2	-1	0	1	2
$y$		-1		5	

(2)

(b) On the grid, draw the graph of  $y = 3x + 2$



(2)

Q3

(Total 4 marks)



Leave  
blank

4. Ahmed is planning a holiday.  
The holiday costs £450  
Ahmed pays a deposit of 30% of the cost of the holiday.

Work out how much deposit Ahmed pays.

£ .....

(Total 2 marks)

Q4

5. (a) Expand  $3(x - 2)$

.....  
(1)

- (b) Simplify  $9x - 8y + 2x - 5y$

.....  
(2)

- (c) Simplify  $\frac{3(x+2)}{(x+2)^2}$

.....  
(1)

(Total 4 marks)

Q5



Leave blank

6.

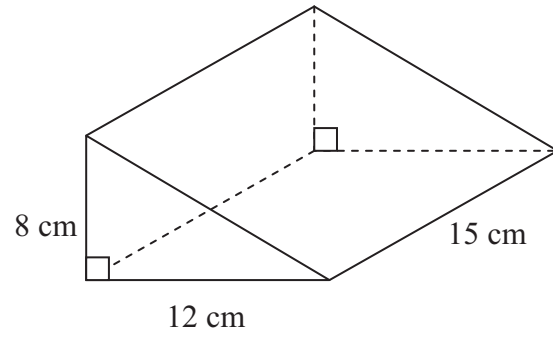


Diagram **NOT** accurately drawn

The diagram shows a solid triangular prism.

The prism is made of wood.  
The wood has a density of 0.85 grams per  $\text{cm}^3$ .

Work out the mass of the prism.

..... grams

**(Total 3 marks)**

**Q6**

7. Work out the value of  $(3 \times 10^9) \div (6 \times 10^{11})$   
Give your answer in standard form.

.....

**(Total 2 marks)**

**Q7**



Leave  
blank

8.

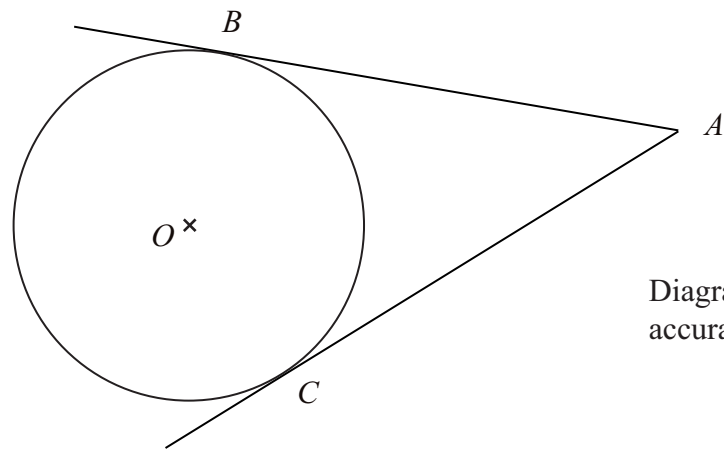


Diagram **NOT**  
accurately drawn

$B$  and  $C$  are points on a circle, centre  $O$ .  
 $AB$  and  $AC$  are tangents to the circle.  
Angle  $BOC = 130^\circ$ .

Work out the size of angle  $BAO$ .

.....<sup>o</sup>

(Total 3 marks)

Q8

9. Simplify fully  $\frac{6x^2 + 3x}{4x^2 - 1}$

.....

(Total 3 marks)

Q9

**TOTAL FOR PAPER: 25 MARKS**

**END**



**BLANK PAGE**

