

Centre No.						Paper Reference						Surname	Initial(s)	
Candidate No.						5	5	3	4	/	1	4	Signature	

Paper Reference(s)

5534/14

Edexcel GCSE

Mathematics B – 1388

Paper 14 (Non-Calculator)

Foundation Tier



Tuesday 6 November 2007 – Morning

Time: 1 hour

Examiner's use only

--	--	--

Team Leader's use only

--	--	--

Materials required for examination

Ruler graduated in centimetres and millimetres, protractor, compasses, pen, HB pencil, eraser.
Tracing paper may be used.

Items included with question papers

Nil

Instructions to Candidates

In the boxes above, write your centre number, candidate number, your surname, initials and signature. Check that you have the correct question paper.

Answer ALL the questions. Write your answers in the spaces provided in this question paper.

You must NOT write on the formulae page. Anything you write on the formulae page will gain NO credit.

If you need more space to complete your answer to any question, use additional answer sheets.

Information for Candidates

The marks for individual questions and the parts of questions are shown in round brackets: e.g. (2).

There are 19 questions in this question paper. The total mark for this paper is 62.

There are 16 pages in this question paper. Any blank pages are indicated.

Calculators must not be used.

Advice to Candidates

Show all stages in any calculations.

Work steadily through the paper. Do not spend too long on one question.

If you cannot answer a question, leave it and attempt the next one.

Return at the end to those you have left out.

This publication may be reproduced only in accordance with Edexcel Limited copyright policy.
©2007 Edexcel Limited.

Printer's Log. No.
H31117A

W850/R5534/57570 6/6/3



Turn over

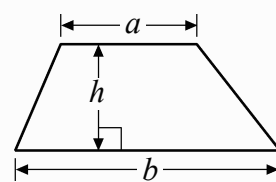
edexcel
advancing learning, changing lives

GCSE Mathematics 1387/8

Formulae: Foundation Tier

**You must not write on this formulae page.
Anything you write on this formulae page will gain NO credit.**

Area of trapezium = $\frac{1}{2}(a+b)h$



Leave
blank

Answer ALL NINETEEN questions.

Write your answers in the spaces provided.

You must write down all stages in your working.

You must NOT use a calculator.

1. (a) Write the number 5250 in words.

..... (1)

- (b) Write 23 250 to the nearest thousand.

..... (1)

- (c) Write down the value of the 3 in the number 42 350

..... (1)

- (d) Write **six thousand three hundred and seventy four** in figures.

..... (1)

(Total 4 marks)

Q1

2. (a) Work out $500 - 107$

..... (2)

- (b) Work out 327×4

..... (2)

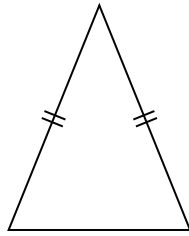
(Total 4 marks)

Q2



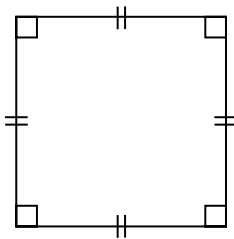
Leave blank

3. (a) Here is a triangle.
What type of triangle is it?



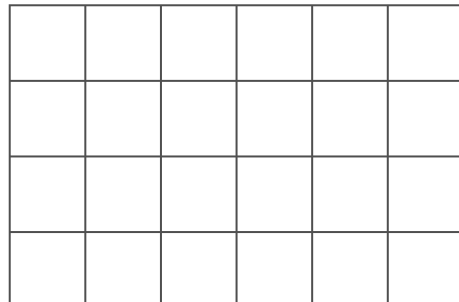
.....
(1)

- (b) Here is a quadrilateral.
What type of quadrilateral is it?



.....
(1)

- (c) On the grid below, draw a trapezium.



(1)

Q3

(Total 3 marks)



Leave blank

4. Jennie asked each of her friends to write down their favourite vegetable.

Here are her results.

Peas	Potatoes	Carrots	Parsnips	Onions
Carrots	Carrots	Parsnips	Peas	Peas
Onions	Potatoes	Onions	Peas	Carrots
Peas	Peas	Carrots	Onions	Parsnips

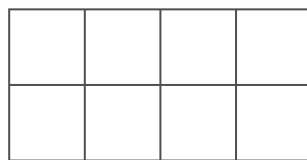
Complete the frequency table to show her results.

Favourite vegetable	Tally	Frequency
Peas		6
Potatoes		
Carrots		
Parsnips		
Onions		

(Total 2 marks)

Q4

5. (a) Shade $\frac{3}{4}$ of this shape.



(1)

(b) Change 0.3 into a fraction.

.....
(1)

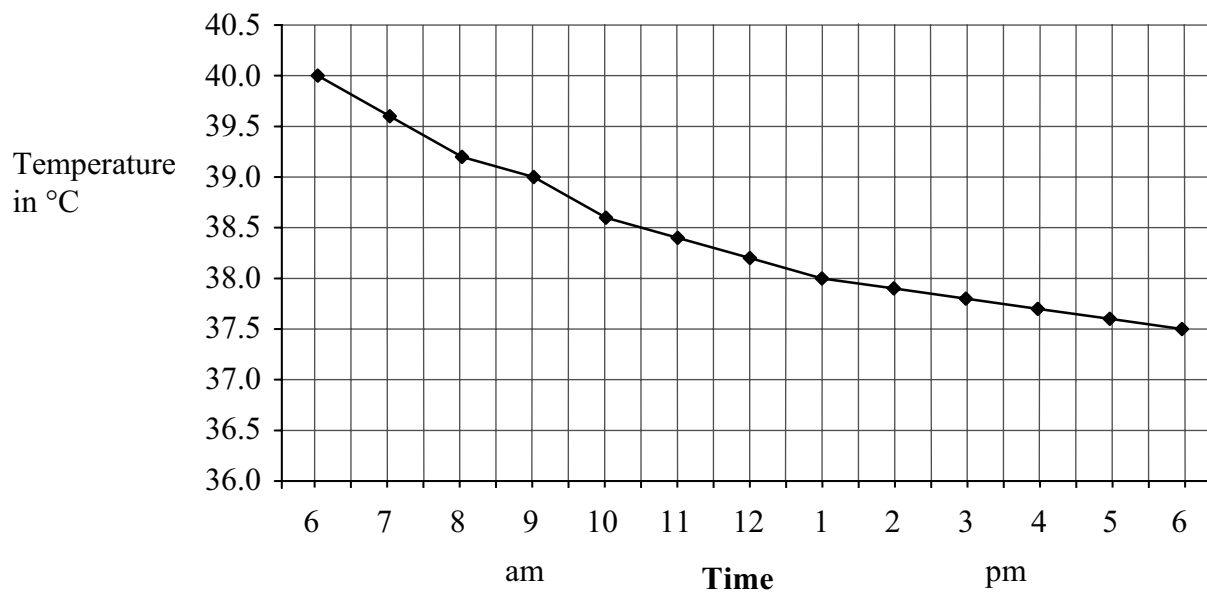
(Total 2 marks)

Q5



Leave blank

6. José is in hospital.
Here is his temperature chart during one day.



- (a) At what time was José's temperature 39.0 °C?

.....
(1)

- (b) What can you say about José's temperature from 6 am to 6 pm?

.....
(1)

(Total 2 marks)

Q6

7. Joe uses this formula to work out the cost of apples.

$$\text{Cost, in pence} = \text{Number of apples} \times 30$$

Work out the cost of 8 apples.

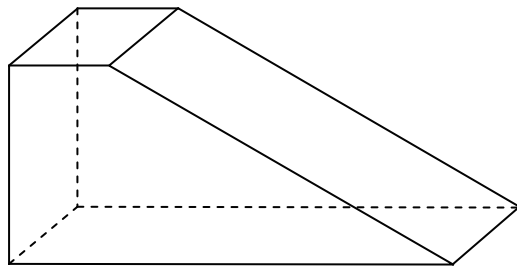
.....
(Total 2 marks)

Q7



Leave blank

8. Here is a diagram of a 3-D prism.



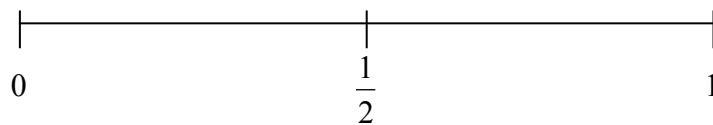
Write down the number of

(i) faces,
(ii) edges,
(iii) vertices.

(Total 3 marks)

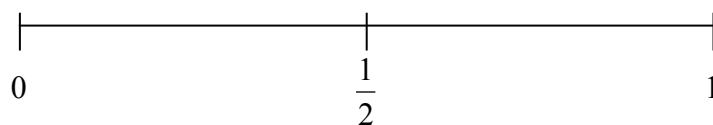
Q8

9. (a) On the probability scale below, mark with a cross (×) the probability that it will rain on at least one day in London in 2008.



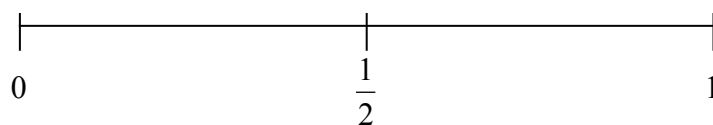
(1)

(b) On the probability scale below, mark with a cross (×) the probability that you will get a 10 when you roll an ordinary 6-sided dice.



(1)

(c) On the probability scale below, mark with a cross (×) the probability that you will get a head when you throw a coin.



(1)

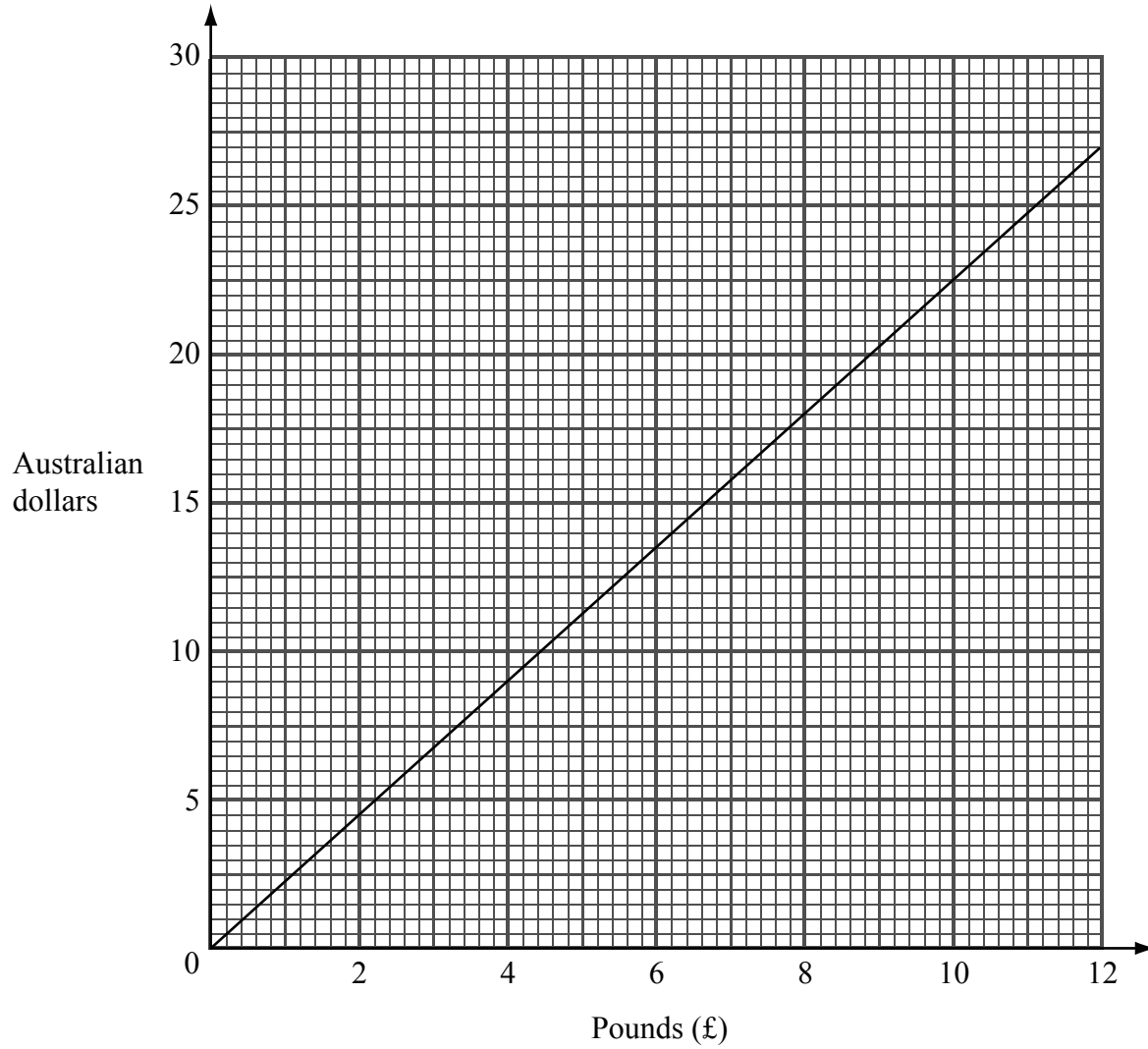
(Total 3 marks)

Q9



Leave blank

10. Here is a conversion graph between pounds (£) and Australian dollars.



(a) Change 20 Australian dollars to pounds.

£
(1)

(b) Change £7 to Australian dollars.

..... Australian dollars
(1)

(Total 2 marks)

Q10

11. Work out the value of

(i) 4^2

.....

(ii) $\sqrt{64}$

.....

(iii) 3×2^3

.....

(Total 3 marks)

Q11



12. Work out $£3.75 \times 24$

Leave
blank

£

(Total 3 marks)

Q12

13. The two-way table shows some information about the colours of Ford cars and of Toyota cars in a garage.

	white	blue	red	Total
Ford	5			21
Toyota		7		
Total	9	16		40

(a) Write down the total number of white cars.

.....
(1)

(b) Complete the two-way table.

(3)

One of these 40 cars is to be picked at random.

(c) Work out the probability that this car will be blue.

.....
(1)
(Total 5 marks)

Q13



14.

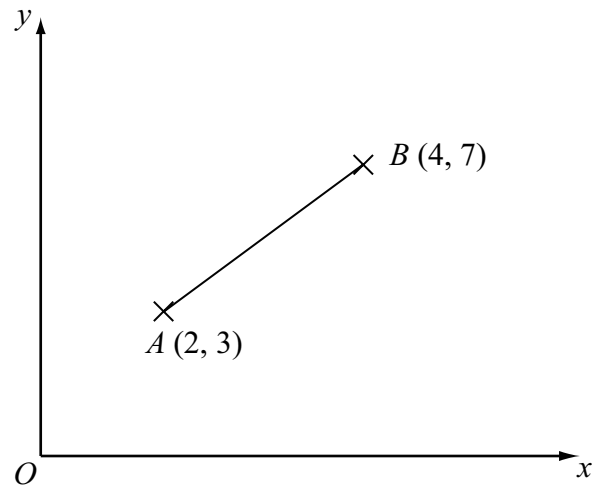


Diagram **NOT** accurately drawn

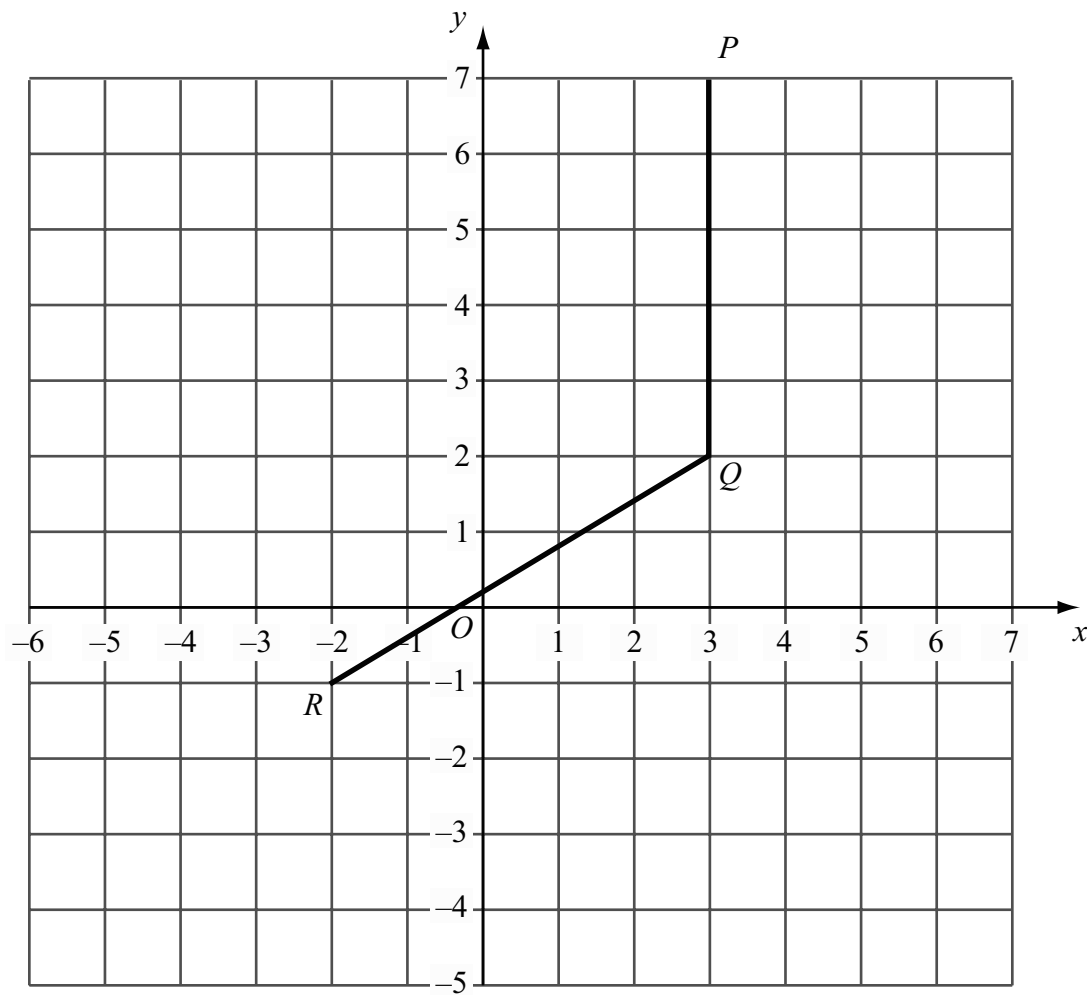
A is the point with coordinates $(2, 3)$.
 B is the point with coordinates $(4, 7)$.

(a) Work out the coordinates of the midpoint of AB .

(.....,)
(2)



Leave blank



P , Q and R are three vertices of a parallelogram.

(b) Write down the coordinates of the fourth vertex of this parallelogram.

(.....,)
(2)

(Total 4 marks)

Q14



15.

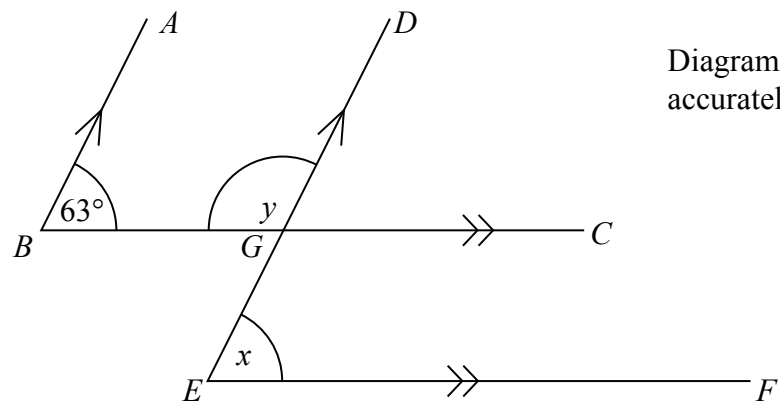


Diagram **NOT** accurately drawn

BA is parallel to *ED*.
BC is parallel to *EF*.
 Angle *ABC* = 63° .

(a) (i) Find the size of angle *x*.

.....^o

(ii) Give a reason for your answer.

.....

(2)

(b) Work out the size of angle *y*.

.....^o

(1)

(Total 3 marks)

Q15

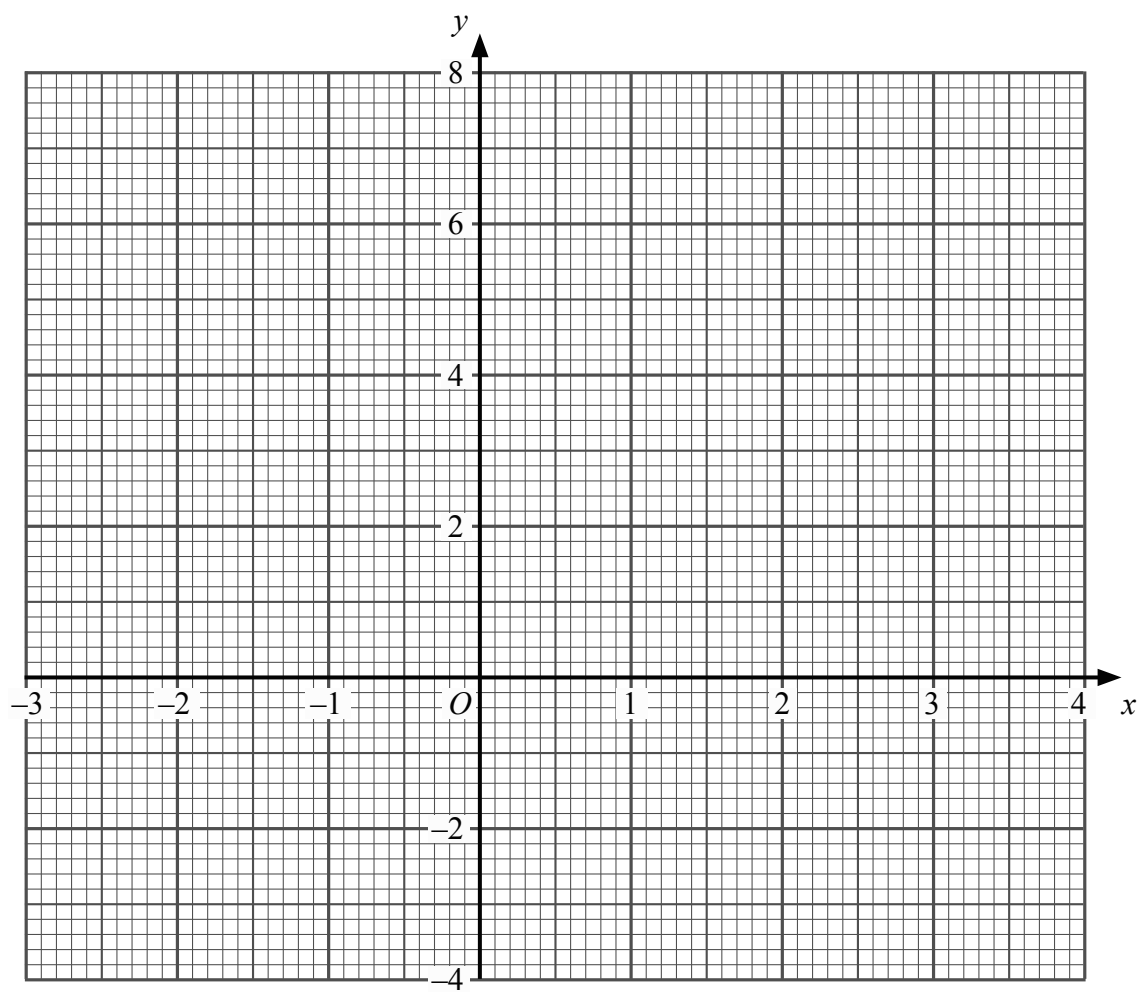


Leave blank

16. (a) Complete this table of values for $y = 2x - 1$

x	-1	0	1	2	3	4
y		-1		3	5	

(2)



(b) On the grid, draw the graph of $y = 2x - 1$

(2)

(c) Use your graph to write down the value of x when $y = 4$

(1)

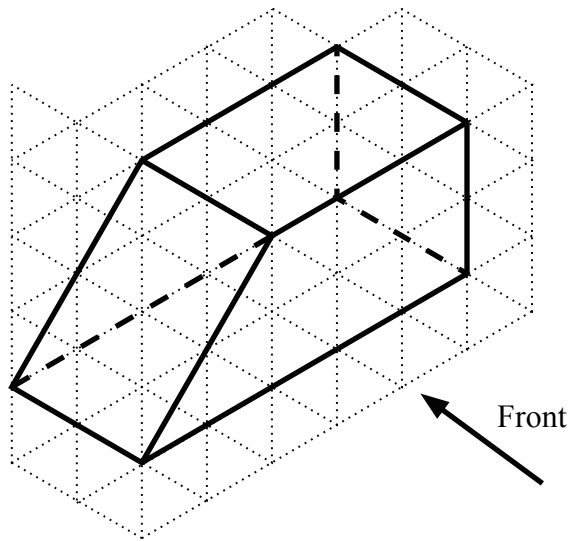
(Total 5 marks)

Q16




Leave blank

17. The diagram shows a prism drawn on a centimetre isometric grid.




(a) On the centimetre grid, draw the front elevation of the prism from the direction marked by the arrow.



(2)

(b) On the centimetre grid draw a plan of the prism.



(2)

(Total 4 marks)

Q17



<p>18. Factorise $x^2 - 5x$</p> <p>.....</p> <p style="text-align: right;">(Total 2 marks)</p>	<p>Leave blank</p> <p>Q18</p> <input type="text"/>
<p>19. A hotel has 56 guests. 35 of the guests are male.</p> <p>(a) Work out 35 out of 56 as a percentage.</p> <p>..... %</p> <p style="text-align: right;">(2)</p> <p>40% of the 35 male guests wear glasses.</p> <p>(b) Write the number of male guests who wear glasses as a fraction of the 56 guests. Give your answer in its simplest form.</p> <p>.....</p> <p style="text-align: right;">(4)</p> <p style="text-align: right;">(Total 6 marks)</p>	<p>Q19</p> <input type="text"/>
<p>TOTAL FOR PAPER: 62 MARKS</p> <p>END</p>	



BLANK PAGE

