

Centre No.							Paper Reference						Surname	Initial(s)	
Candidate No.							5	5	0	3	/	0	3	Signature	

Paper Reference(s)

**5503/03**

**Edexcel GCSE**

**Mathematics A – 1387**

Paper 3 (Non – Calculator)

**Intermediate Tier**

Tuesday 8 June 2004 – Afternoon

Time: 2 hours

Examiner's use only

--	--	--

Team Leader's use only

--	--	--



**Materials required for examination**

Ruler graduated in centimetres and millimetres, protractor, compasses, pen, HB pencil, eraser.  
Tracing paper may be used.

**Items included with question papers**

Nil

**Instructions to Candidates**

In the boxes above, write your centre number, candidate number, your surname, initials and signature. Check that you have the correct question paper.

Answer **ALL** the questions in the spaces provided in this question paper.

**You must NOT write on the formulae page or any blank pages. Anything you write on these pages will gain NO credit.**

If you need more space to complete your answer to any question, use additional answer sheets.

**Information for Candidates**

The total mark for this paper is 100. This paper has 25 questions. There is one blank page.

The marks for individual questions and parts of questions are shown in round brackets: e.g. (2).

**Calculators must not be used.**

**Advice to Candidates**

Show all stages in any calculations.

Work steadily through the paper. Do not spend too long on one question.

If you cannot answer a question, leave it and attempt the next one.

Return at the end to those you have left out.

This publication may only be reproduced in accordance with London Qualifications Limited copyright policy.  
©2004 London Qualifications Limited.

Printer's Log. No.

**N17248A**

W850/R1387/57570 6/6/6/6/6/3/



N 1 7 2 4 8 A

*Turn over*

**Edexcel**

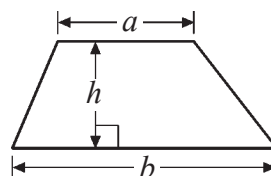
*Success through qualifications*

## GCSE Mathematics 1387/8

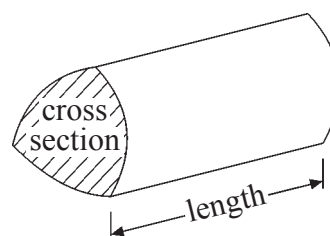
## Intermediate Tier Formulae

**You must not write on this page.  
Anything you write on this page will gain NO credit**

**Area of trapezium** =  $\frac{1}{2}(a + b)h$



**Volume of prism** = area of cross section  $\times$  length



**Answer ALL TWENTY FIVE questions.**

**Write your answers in the spaces provided.**

**You must write down all stages in your working.**

**You must NOT use a calculator.**

1. The diagram shows a rectangular carpet.

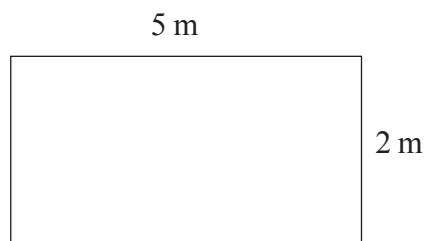


Diagram **NOT** accurately drawn

Work out the area of the carpet.

.....m<sup>2</sup>  
(1)

2. (a) Simplify

(i)  $e + f + e + f + e$

.....

(ii)  $p^2 + p^2 + p^2$

.....

(2)

- (b) Work out the value of  $5x + 1$  when  $x = -3$

.....

(2)

**Page Total**

3. Nick takes 26 boxes out of his van.  
The weight of each box is 32.9 kg.

Work out the **total** weight of the 26 boxes.

..... kg  
(3)

4. 60 British students each visited one foreign country last week.  
The two-way table shows some information about these students.

	France	Germany	Spain	Total
Female			9	34
Male	15			
Total		25	18	60

- (a) Complete the two-way table.

(3)

One of these students is picked at random.

- (b) Write down the probability that the student visited Germany last week.

.....  
(1)

5. There are 800 students at Prestfield School.

45% of these 800 students are girls.

(a) Work out 45% of 800

.....  
(2)

There are 176 students in Year 10.

(b) Write 176 out of 800 as a percentage.

.....%  
(2)

6. (a) Work out  $\frac{11}{12} - \frac{5}{6}$

.....  
(2)

(b) Estimate the value of  $\frac{68 \times 401}{198}$

.....  
(2)

Do not write here

Page Total

--	--

7.

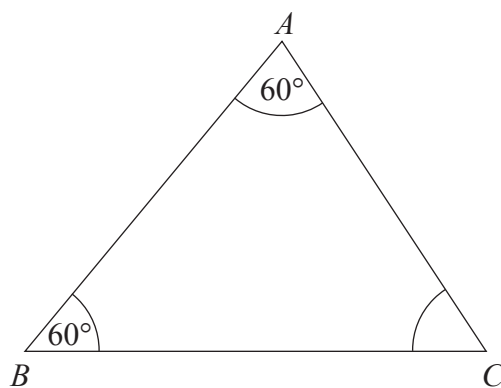


Diagram **NOT** accurately drawn

(a) (i) Find the size of angle C.

.....  
°

(ii) Triangle *ABC* is equilateral.  
Explain why.

.....  
(2)

(b)

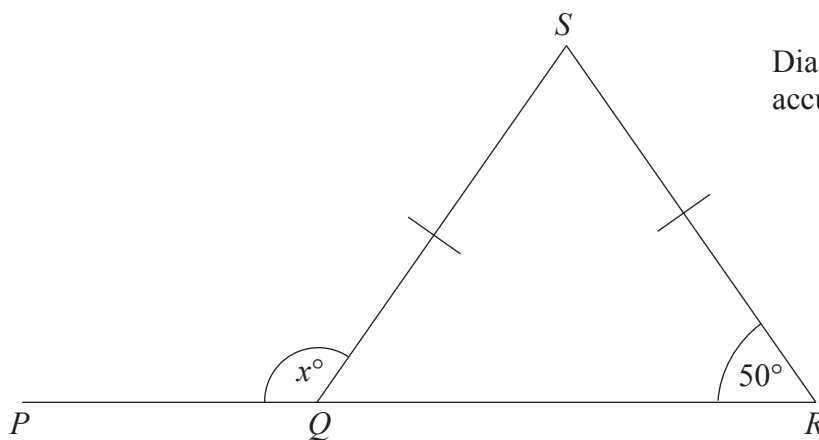


Diagram **NOT** accurately drawn

*PQR* is a straight line.  
 $SQ = SR$ .

(i) Work out the size of the angle marked  $x^\circ$ .

.....  
°

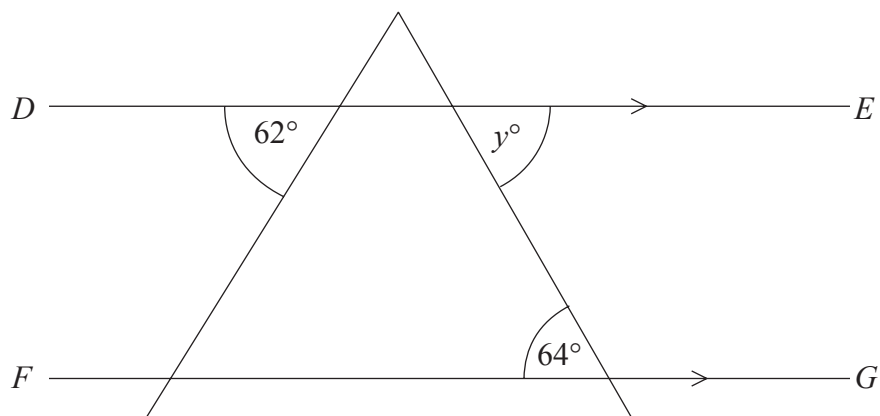
(ii) Give reasons for your answer.

.....  
.....

(3)

(c)

Diagram **NOT** accurately drawn



$DE$  is parallel to  $FG$ .  
Find the size of the angle marked  $y^\circ$ .

.....  
(1)

8. 20 students scored goals for the school hockey team last month.  
The table gives information about the number of goals they scored.

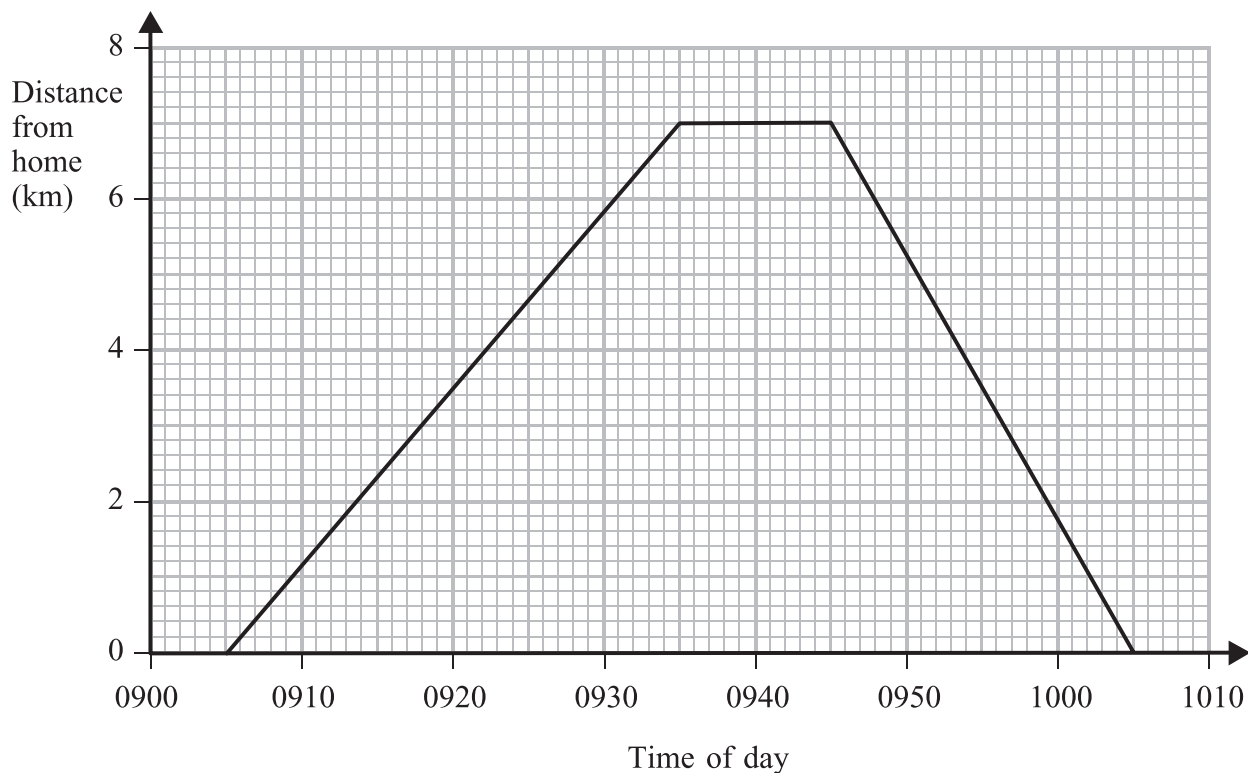
Goals scored	Number of students	
1	9	
2	3	
3	5	
4	3	

Work out the mean number of goals scored.

.....  
(3)

Do not write here

9. Anil cycled from his home to the park.  
 Anil waited in the park.  
 Then he cycled back home.  
 Here is a distance-time graph for Anil's complete journey.



(a) At what time did Anil leave home?

.....  
**(1)**

(b) What is the distance from Anil's home to the park?

..... km  
**(1)**

(c) How many minutes did Anil wait in the park?

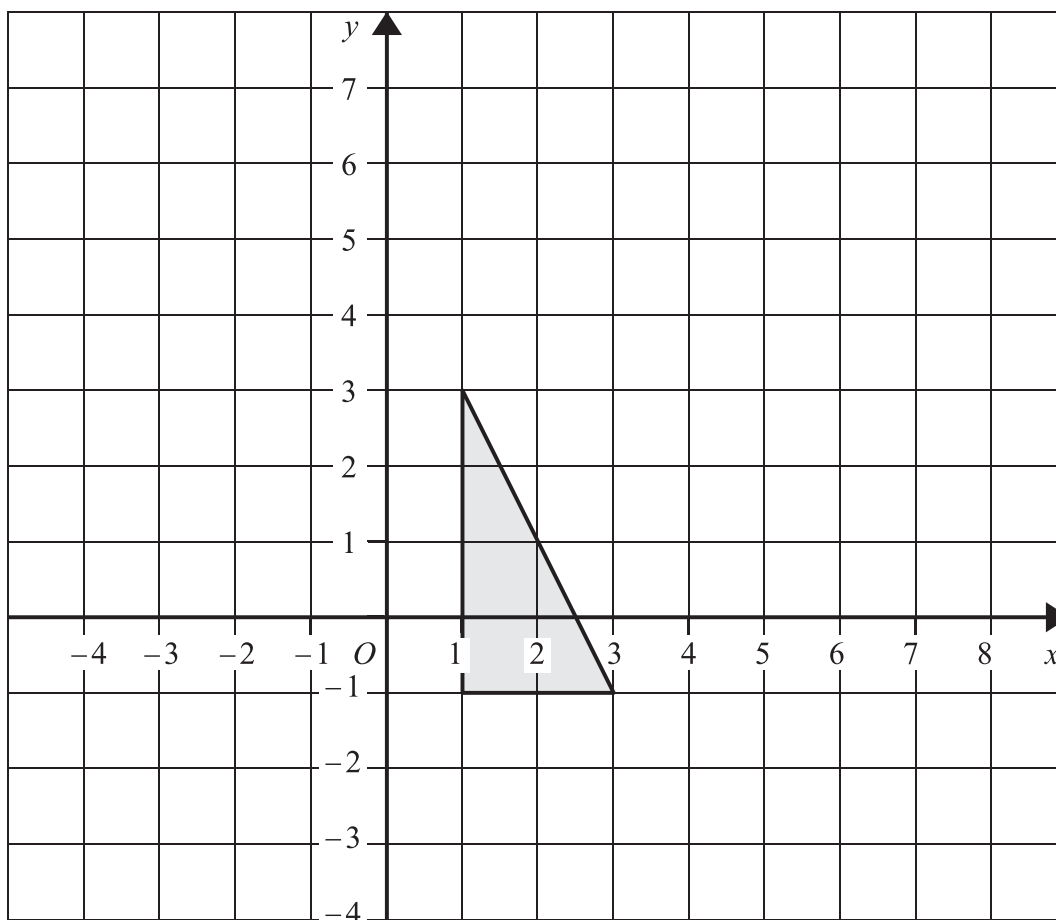
.....  
**(1)**

(d) Work out Anil's average speed on his journey home.  
 Give your answer in kilometres per hour.

..... kilometres per hour  
**(3)**



10.



Enlarge the shaded triangle by a scale factor 2, centre  $O$ .

(3)

11. John says “For all prime numbers,  $n$ , the value of  $n^2 + 3$  is always an even number”.  
Give an example to show that John is **not** correct.

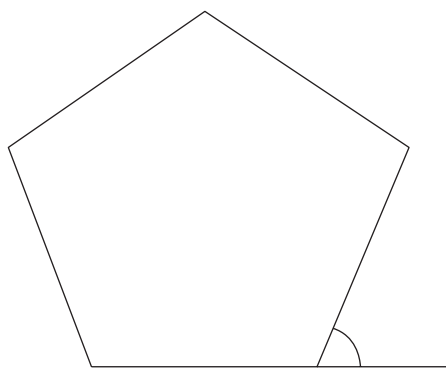
(2)

Do not write here

Page Total

12.

Diagram **NOT** accurately drawn



(a) Work out the size of an exterior angle of a regular pentagon.

.....  
 (2)

The area of the pentagon is  $8560 \text{ mm}^2$ .

(b) Change  $8560 \text{ mm}^2$  to  $\text{cm}^2$ .

.....  $\text{cm}^2$   
 (2)

Each side of another regular pentagon has a length of 101 mm, correct to the nearest millimetre.

(c) (i) Write down the **least** possible length of each side.

..... mm

(ii) Write down the **greatest** possible length of each side.

..... mm  
 (2)

Do not write here

13.

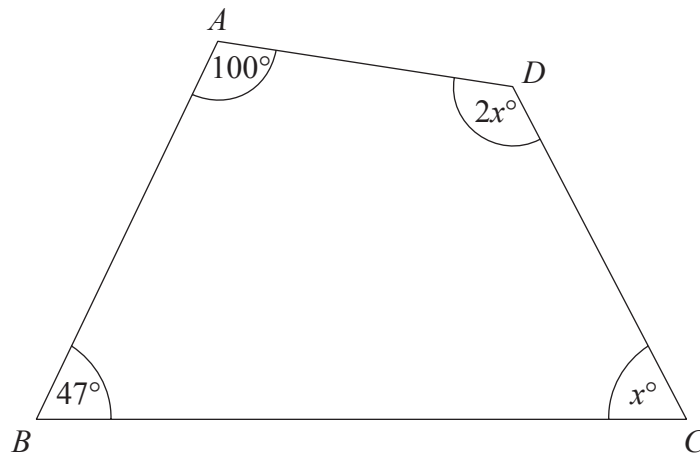


Diagram **NOT** accurately drawn

$ABCD$  is a quadrilateral.

Work out the size of the largest angle in the quadrilateral.

.....  
 (4)

Do not write here

Page Total

14. (a) Use the information that

$$13 \times 17 = 221$$

to write down the value of

(i)  $1.3 \times 1.7$

.....

(ii)  $22.1 \div 1700$

.....

(2)

(b) Use the information that

$$13 \times 17 = 221$$

to find the Lowest Common Multiple (LCM) of 39 and 17

.....

(2)

15. The table shows some expressions.

The letters  $a$ ,  $b$ ,  $c$  and  $d$  represent lengths.

$\pi$  and 2 are numbers that have no dimensions.

**Three** of the expressions could represent areas.

Tick (✓) the boxes underneath the **three** expressions which could represent areas.

$\frac{\pi abc}{2d}$	$\pi a^3$	$2a^2$	$\pi a^2 + b$	$\pi(a + b)$	$2(c^2 + d^2)$	$2ad^2$

(3)

16. The probability that a biased dice will land on a four is 0.2

Pam is going to roll the dice 200 times.

Work out an estimate for the number of times the dice will land on a four.

.....

(2)

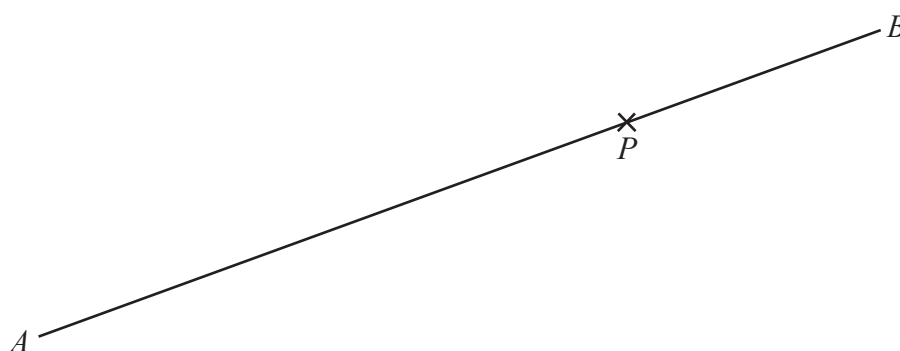
17. (a) Express 108 as the product of powers of its prime factors.

.....  
(3)

(b) Find the Highest Common Factor (HCF) of 108 and 24.

.....  
(1)

18. Use ruler and compasses to **construct** the perpendicular to the line segment  $AB$  that passes through the point  $P$ .  
You must show all construction lines.



(2)

Page Total

19. The diagram shows a wedge in the shape of a triangular prism.

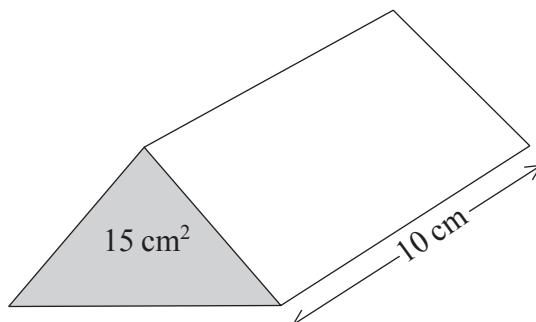


Diagram **NOT** accurately drawn

The cross section of the prism is shown as a shaded triangle.

The area of the triangle is  $15 \text{ cm}^2$ .

The length of the prism is  $10 \text{ cm}$ .

Work out the volume of the prism.

.....  
(3)

20.

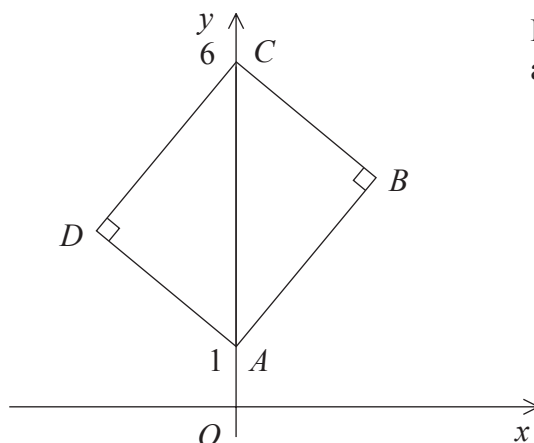


Diagram **NOT** accurately drawn

$ABCD$  is a rectangle.

$A$  is the point  $(0, 1)$ .

$C$  is the point  $(0, 6)$ .


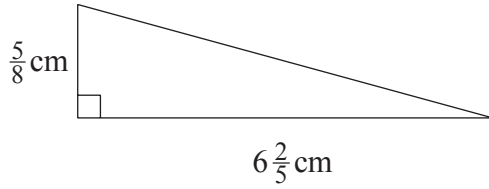
The equation of the straight line through  $A$  and  $B$  is  $y = 2x + 1$

Find the equation of the straight line through  $D$  and  $C$ .

.....  
(2)

21.

Diagrams NOT accurately drawn



The area of the square is 18 times the area of the triangle.

Work out the **perimeter** of the square.

..... cm  
(5)

Do not write here

Page Total

22. (a) Factorise  $x^2 - 3x$

.....  
(2)

(b) Simplify  $k^5 \div k^2$

.....  
(1)

(c) Expand and simplify

(i)  $4(x + 5) + 3(x - 7)$

.....

(ii)  $(x + 3y)(x + 2y)$

.....  
(4)

(d) Factorise  $(p + q)^2 + 5(p + q)$

.....  
(1)

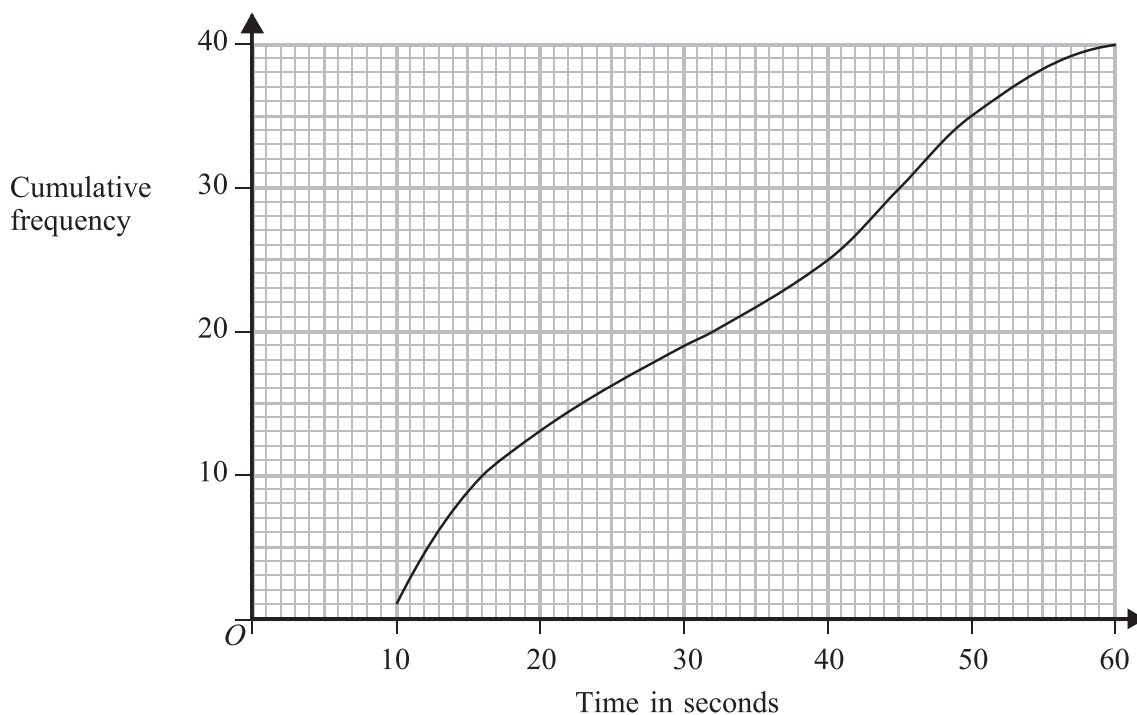
23. 40 boys each completed a puzzle.

The cumulative frequency graph opposite gives information about the times it took them to complete the puzzle.

(a) Use the graph to find an estimate for the median time.

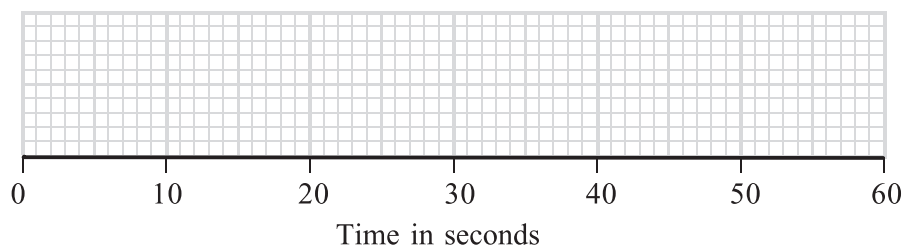
..... seconds  
(1)





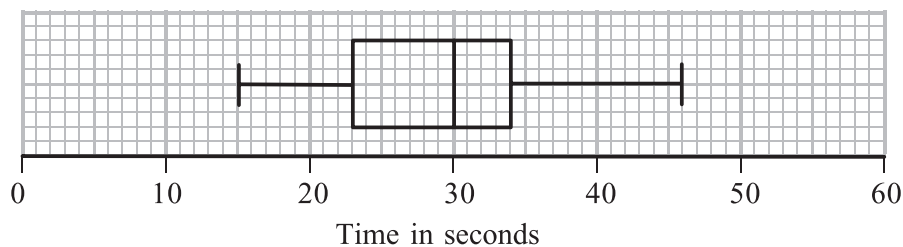
For the boys  
 the minimum time to complete the puzzle was 9 seconds  
 and the maximum time to complete the puzzle was 57 seconds.

- (b) Use this information and the cumulative frequency graph to draw a box plot showing information about the boys' times.



(3)

The box plot below shows information about the times taken by 40 girls to complete the same puzzle.



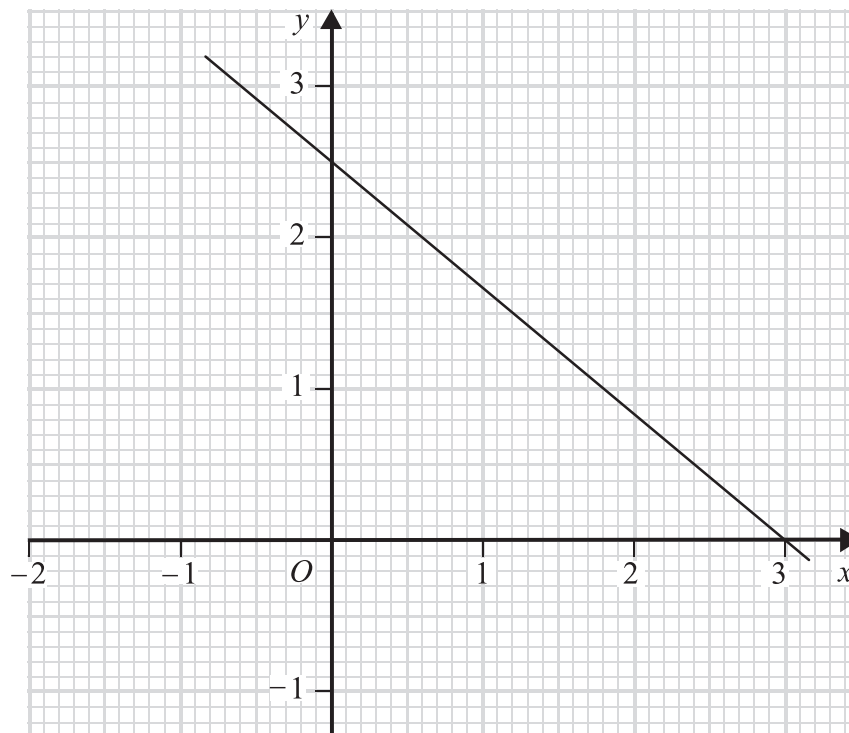
- (c) Make **two** comparisons between the boys' times and the girls' times.

.....

.....

(2)

24.



The line with equation  $6y + 5x = 15$  is drawn on the grid above.

(a) Rearrange the equation  $6y + 5x = 15$  to make  $y$  the subject.

$$y = \dots\dots\dots \quad (2)$$

(b) The point  $(-21, k)$  lies on the line.  
Find the value of  $k$ .

$$k = \dots\dots\dots \quad (2)$$

(c) (i) On the grid, shade the region of points whose coordinates satisfy the four inequalities

$$y > 0, \quad x > 0, \quad 2x < 3, \quad 6y + 5x < 15$$

Label this region **R**.

$P$  is a point in the region **R**. The coordinates of  $P$  are both integers.

(ii) Write down the coordinates of  $P$ .

$$(\dots\dots\dots, \dots\dots\dots) \quad (3)$$

25.

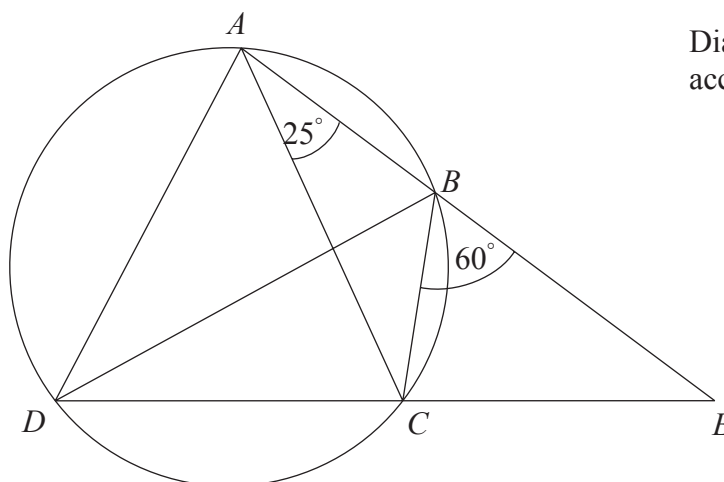


Diagram NOT accurately drawn

$A, B, C$  and  $D$  are four points on the circumference of a circle.  
 $ABE$  and  $DCE$  are straight lines.

Angle  $BAC = 25^\circ$ .  
 Angle  $EBC = 60^\circ$ .

(a) Find the size of angle  $ADC$ .

.....  
 (1)

(b) Find the size of angle  $ADB$ .

.....  
 (2)

Angle  $CAD = 65^\circ$ .  
 Ben says that  $BD$  is a diameter of the circle.

(c) Is Ben correct? You must explain your answer.

.....  
 .....

(1)

**TOTAL FOR PAPER: 100 MARKS**

**END**

Page Total

**BLANK PAGE**