



Rewarding Learning

General Certificate of Secondary Education
2013

--	--	--	--	--

Candidate Number

--	--	--	--

StudentBounty.com

Mathematics

Unit T3

(With calculator)



Higher Tier



[GMT31]

GMT31

TUESDAY 11 JUNE 9.15 am–11.15 am

TIME

2 hours.

INSTRUCTIONS TO CANDIDATES

Write your Centre Number and Candidate Number in the spaces provided at the top of this page.

You must answer the questions in the spaces provided. Do not write outside the box, around each page, on blank pages or tracing paper.

Complete in blue or black ink only. **Do not write with a gel pen.**

Answer **all twenty-six** questions.

Any working should be clearly shown in the spaces provided since marks may be awarded for partially correct solutions.

You **may** use a calculator for this paper.

INFORMATION FOR CANDIDATES

The total mark for this paper is 100.

Figures in brackets printed down the right-hand side of pages indicate the marks awarded to each question or part question.

Functional Elements will be assessed in this paper.

Quality of written communication will be assessed in **questions 17 and 26.**

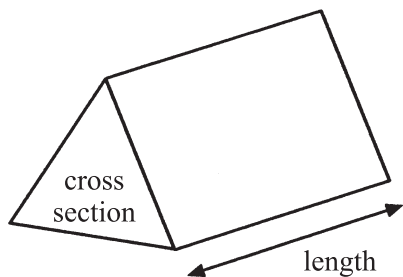
You should have a calculator, ruler, compasses and a protractor.

The Formula Sheet is on page 2.

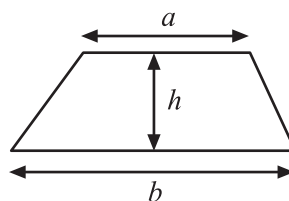


Formula Sheet

Volume of prism = area of cross section \times length

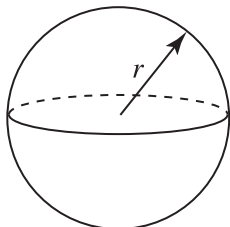


Area of trapezium = $\frac{1}{2}(a + b)h$



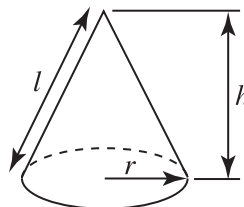
Volume of sphere = $\frac{4}{3}\pi r^3$

Surface area of sphere = $4\pi r^2$



Volume of cone = $\frac{1}{3}\pi r^2 h$

Curved surface area of cone = $\pi r l$

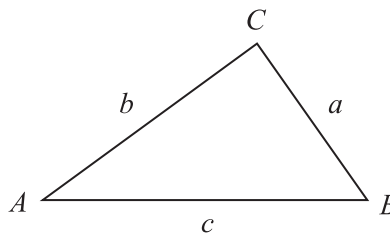


Quadratic Equation

The solutions of $ax^2 + bx + c = 0$
where $a \neq 0$, are given by

$$x = \frac{-b \pm \sqrt{b^2 - 4ac}}{2a}$$

In any triangle ABC




Sine Rule: $\frac{a}{\sin A} = \frac{b}{\sin B} = \frac{c}{\sin C}$

Cosine Rule: $a^2 = b^2 + c^2 - 2bc \cos A$


Area of triangle = $\frac{1}{2} ab \sin C$




1



1



2



3

Bag 1 contains m marbles.

Bag 2 contains 5 less marbles than Bag 1

(a) Write down an expression in terms of m for the number of marbles in Bag 2

Answer _____ [1]

Bag 3 contains twice as many as in Bag 1 **plus** the number of marbles that are in Bag 2

(b) Write down an expression in terms of m for the number of marbles in Bag 3

Give your answer in its simplest form.

Answer _____ [2]

The total number of marbles in Bag 3 is 22

(c) Set up and solve an equation to help find how many marbles are in Bag 2

Answer In Bag 2 there are _____ marbles [3]

Examiner Only

Marks Remark

Total Question 1

[Turn over



2 (a) Solve $6x + 9 = 11 - 2x$

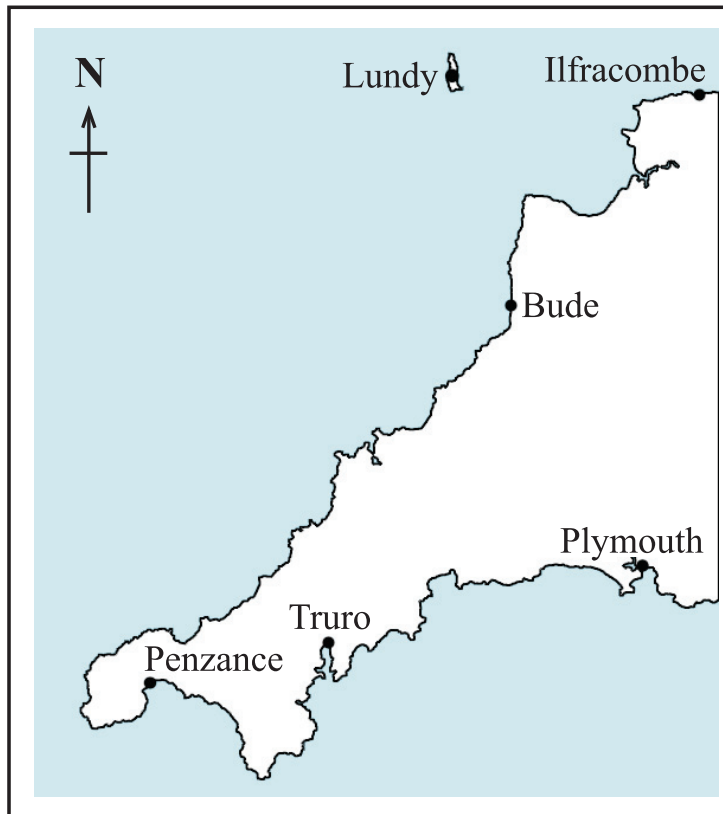
Answer _____ [3]

(b) Simplify $\frac{x}{3} - \frac{x}{5}$

Answer _____ [2]

Examiner Only	
Marks	Remark
Total Question 2	

3



© Graded examples in Mathematics: Geometry & Trigonometry, by M R Heylings, page 24, published by Schofield & Sims, 1984. ISBN 0721722314

Boscastle is on a bearing of 218° from Bude.
 Boscastle is on a bearing of 310° from Plymouth.

Locate the position of Boscastle on the map above. Indicate Boscastle with a point marked B. [3]

Total Question 3	



4 (a) Show how to work out the answer to the following without using a calculator.

$$\frac{3}{8} \div \frac{3}{4}$$

[2]

(b) What percentage is £24 of £320?

Answer _____ % [2]

Examiner Only

Marks Remark

Total Question 4

5 The correlation in a scatter graph may be described as one of the following:

no correlation positive correlation negative correlation

Write down the type of correlation you would expect to find in scatter graphs which show the following information:

(a) average daily temperature and cold drinks sales,

Answer _____ [1]

(b) marks in a test and distance travelled to school,

Answer _____ [1]

(c) number in family and average weekly amount spent on food,

Answer _____ [1]

(d) average speed for journey to school and average time for journey to school.

Answer _____ [1]

Total Question 5

[Turn over



Primus Energy Gas Tariff

Standing charge is 7.93p per day

Gas used is 4.433p per unit

Marie's gas meter was read on 1st March.

The reading was

0	1	9	5	7
---	---	---	---	---

The meter was read again on 1st June.

The reading was

0	4	1	0	8
---	---	---	---	---

Calculate the total gas bill that Marie will have to pay for the 92 days from 1st March, if VAT is charged at 5% on the total.

Answer £ _____ [5]

Examiner Only

Marks	Remark
Total Question 7	

[Turn over



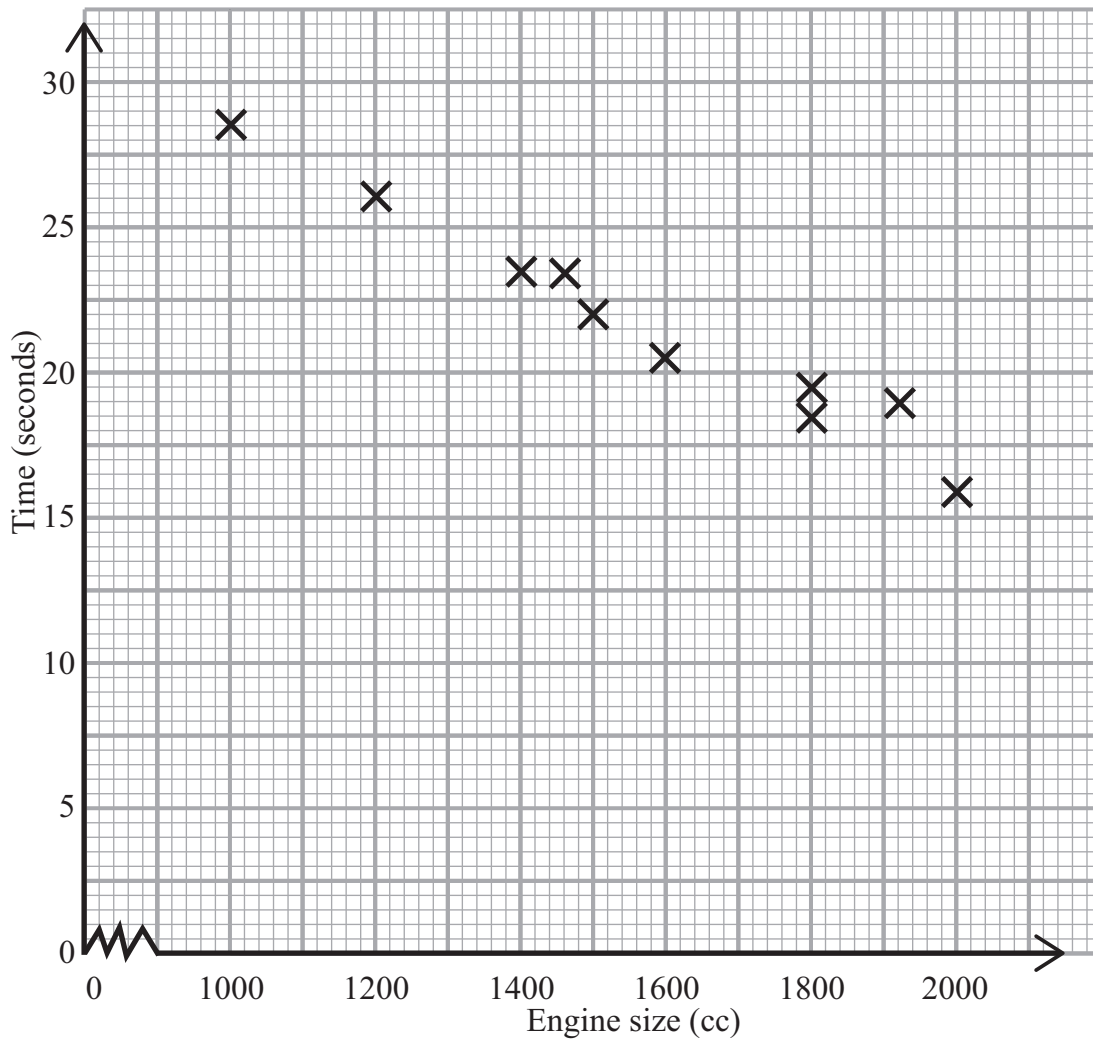
9 Convert $62\,000\text{ cm}^2$ into m^2 .

Answer _____ m^2 [2]

Examiner Only

Marks	Remark
Total Question 9	

10 Ten models of car were tested to find how long it took each car to travel 500 metres. The times and engine sizes are plotted below.



(a) Draw a line of best fit. [1]

(b) Use your line to predict the time for a car with engine size 1700 cc to travel 500 metres.

Answer: _____ seconds [1]

Total Question 10	

[Turn over



11 Solve $\frac{2x}{5} - 3 = 7$

Answer $x = \underline{\hspace{2cm}}$ [2]

Examiner Only	
Marks	Remark
Total Question 11	

12 Derek is trying to find a number x such that $x^2 + \sqrt{x} = 90$

He knows the answer is between 9 and 10

Use trial and improvement to find Derek's number to **2 decimal places**.

Show your work.

Answer Derek's number is $\underline{\hspace{2cm}}$ [4]

Total Question 12	



13 Expand $y(4 - 2y)$

Answer _____ [2]

Examiner Only

Marks Remark

Total Question 13


[Turn over



- 14 The number of items that 80 students had in their sports bags was recorded. The numbers were grouped as shown in the table.

Number (n)	Frequency
$2 < n \leq 4$	8
$4 < n \leq 6$	24
$6 < n \leq 8$	18
$8 < n \leq 10$	17
$10 < n \leq 12$	9
$12 < n \leq 14$	4

- (a) Show this information on a frequency polygon.



[3]

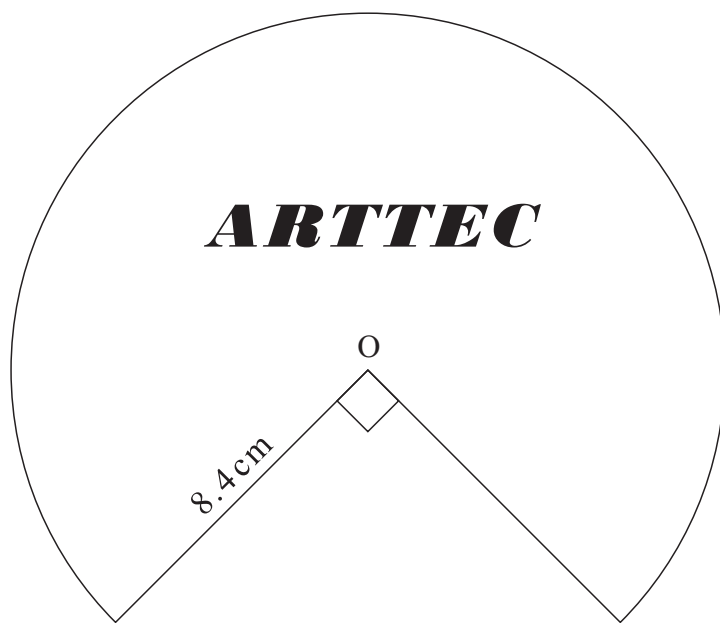
- (b) Which class interval contains the median number?

Answer _____ [1]

Examiner Only	
Marks	Remark
Total Question 14	



15 A company logo is shown below. It is $\frac{3}{4}$ of a circle centre O.



Calculate the perimeter of the logo.

Answer _____ cm [3]

Examiner Only

Marks Remark

Total Question 15

[Turn over



18 (a) Calculate the exact value of $4\frac{1}{6} - 2\frac{5}{8}$ without using a calculator.
Show your work.

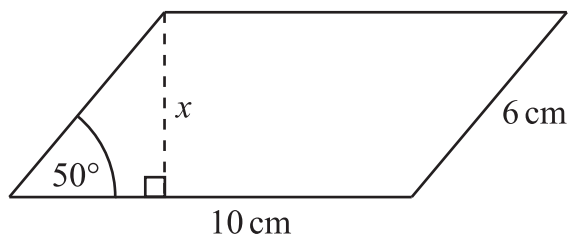
[3]

(b) Conor bought a new car for £23 000
 Each year the value of the car depreciated by 15%.
 Work out the value of the car at the end of 3 years, giving your answer
 to the nearest pound.

Answer £ _____ [4]

Total Question 18

19 A parallelogram has sides of 6 cm and 10 cm, with an angle of 50° between
 the sides.
 Calculate the height x of the parallelogram.



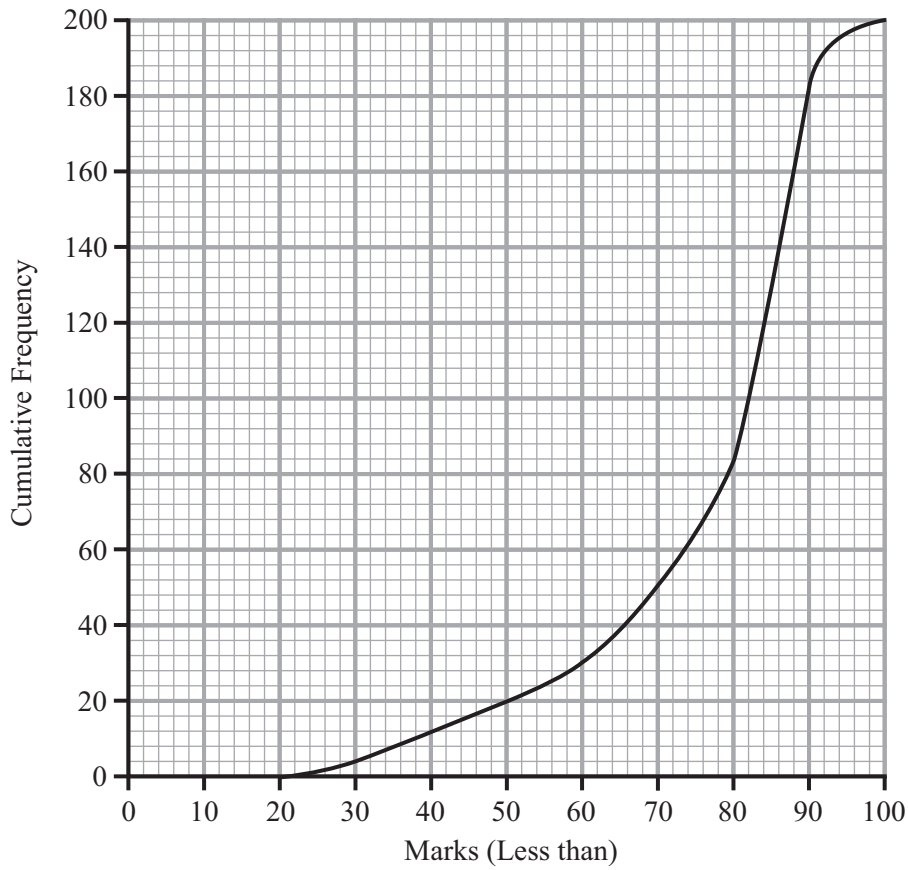
Answer x _____ cm [3]

Total Question 19

[Turn over



20 The graph below shows the cumulative frequency of marks obtained in a spelling test.



(a) Use the graph to estimate the median.

Answer _____ [1]

(b) The pass mark is 75
Estimate how many passed the spelling test.

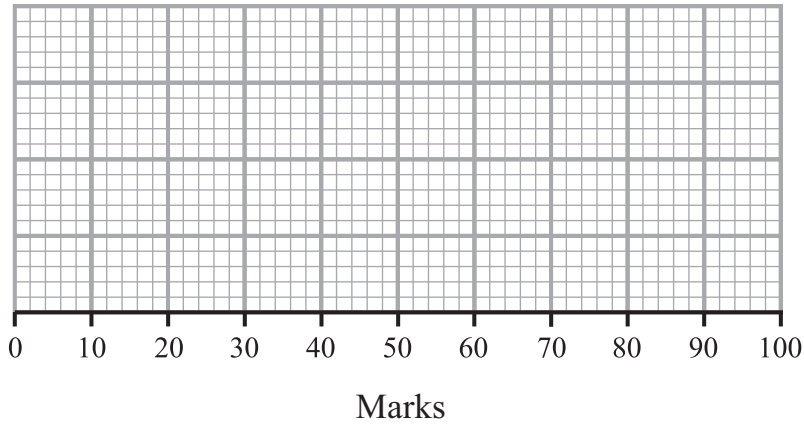
Answer _____ [2]



Examiner Only	
Marks	Remark



(c) From the graph opposite draw a box plot.



[3]

Examiner Only

Marks	Remark
Total Question 20	
Total Question 21	

21 (a) Solve the simultaneous equations

$$\begin{aligned} 5x - y &= 9 \\ -2x + y &= 3 \end{aligned}$$

Show your working clearly.

Answer $x =$ _____ $y =$ _____ [2]

(b) Solve $\frac{2}{3}(1 - x) - \frac{1}{4}(3x - 1) = 8$

Answer $x =$ _____ [4]

Total Question 21

[Turn over



22 Factorise

(a) $15xy - 5y^2$

Answer _____ [2]

(b) $x^2 - 9x - 36$

Answer _____ [2]

Examiner Only	
Marks	Remark
Total Question 22	

23 What is the Highest Common Factor (HCF) of 210 and 252?

Answer _____ [2]

Total Question 23	

24 Tony opened a savings account with the Western Bank.
After one year, the bank paid 6% per annum interest into his account.
The total amount in his account was then £710.20
Work out the amount of money with which Tony opened the account.

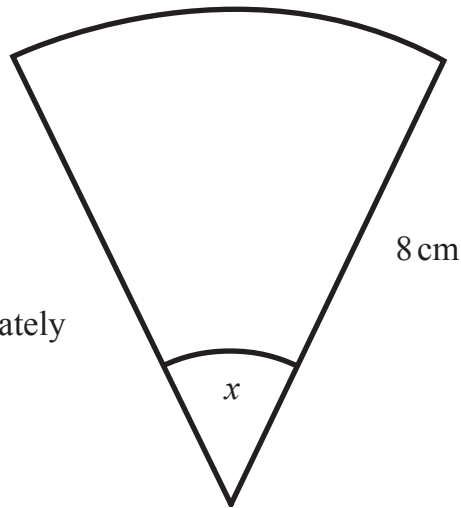
Answer £ _____ [3]

Total Question 24	



- 25 The area of the sector is 20.11 cm^2
Calculate the angle x .

diagram not
drawn accurately



Answer _____ $^\circ$ [4]

Examiner Only

Marks	Remark
Total Question 25	

Quality of written communication will be assessed in this question.

- 26 A football pitch is 105 metres long and 68 metres wide.
The length is measured to the nearest 5 metres.
The width is measured to the nearest metre.
Work out the maximum area of the pitch.
Show your working.

Answer _____ m^2 [3]

Total Question 26	



DO NOT WRITE ON THIS PAGE

For Examiner's use only	
Question Number	Marks
1	
2	
3	
4	
5	
6	
7	
8	
9	
10	
11	
12	
13	
14	
15	
16	
17	
18	
19	
20	
21	
22	
23	
24	
25	
26	

Total Marks	
--------------------	--

Examiner Number

Permission to reproduce all copyright material has been applied for.
In some cases, efforts to contact copyright holders may have been unsuccessful and CCEA
will be happy to rectify any omissions of acknowledgement in future if notified.

