

Surname						Other Names					
Centre Number						Candidate Number					
Candidate Signature											

For Examiner's Use

General Certificate of Secondary Education
June 2007



MATHEMATICS (SPECIFICATION A)
Intermediate Tier
Paper 2 Calculator

3301/2I

Monday 11 June 2007 9.00 am to 11.00 am

<p>For this paper you must have:</p> <ul style="list-style-type: none"> • a calculator • mathematical instruments. 	
---------------------------------------------------------------------------------------------------------------------------------------------------	--

For Examiner's Use	
Pages	Mark
3	
4–5	
6–7	
8–9	
10–11	
12–13	
14–15	
16–17	
18–19	
20–21	
TOTAL	
Examiner's Initials	

Time allowed: 2 hours

Instructions

- Use blue or black ink or ball-point pen. Draw diagrams in pencil.
- Fill in the boxes at the top of this page.
- Answer **all** questions.
- Answer the questions in the spaces provided.
- Use a calculator where appropriate.
- Do all rough work in this book.
- If your calculator does not have a π button, take the value of π to be 3.14 unless another value is given in the question.

Information

- The maximum mark for this paper is 100.
- The marks for questions are shown in brackets.
- You may ask for more answer paper, graph paper and tracing paper. They must be tagged securely to this answer book.

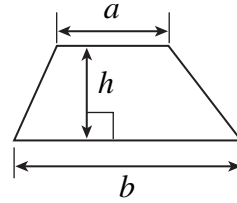
Advice

- In all calculations, show clearly how you work out your answer.

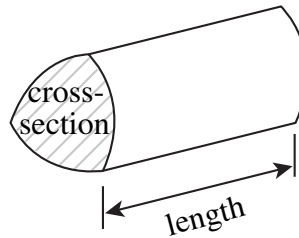
Formulae Sheet: Intermediate Tier

You may need to use the following formulae:

Area of trapezium = $\frac{1}{2}(a+b)h$



Volume of prism = area of cross-section \times length



Answer **all** questions in the spaces provided.

- 1 (a) Calculate the cube of 8.7

.....

Answer (1 mark)

- (b) Calculate $\sqrt{\frac{7}{2.3}}$

.....

Answer (1 mark)

- (c) Calculate $\frac{(8.7 + 4.2)}{1.75}$

.....

Answer (1 mark)

- 2 Jack buys 1.5 kilograms of oranges at 98 pence per kilogram.
He also buys some bananas at 85 pence per kilogram.
His total bill is £2.49
What is the weight of the bananas that he buys?

.....

.....

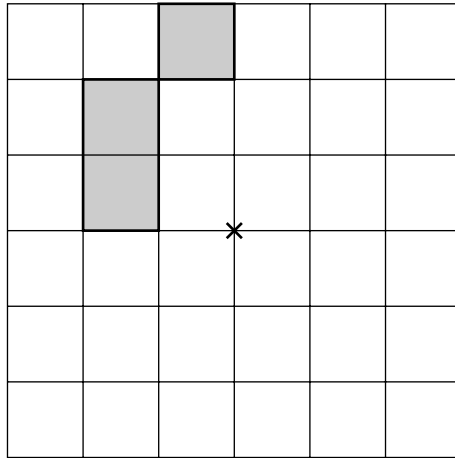
.....

.....

Answer kg (4 marks)

Turn over ►

- 3 Shade 9 more squares so that the grid has rotational symmetry of order 4 about centre \times .



(3 marks)

- 4 A quadrilateral and a triangle are drawn on separate seven-point triangular grids.



Explain why the areas of the two shapes are the same.

.....

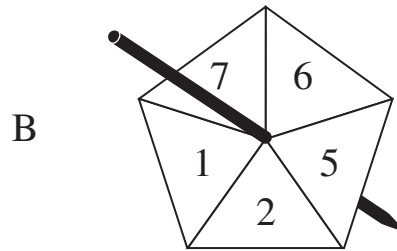
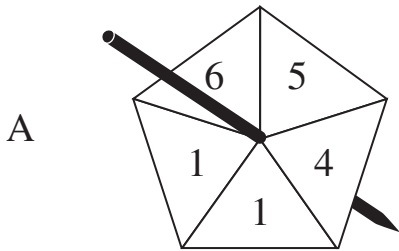
.....

.....

.....

(2 marks)

5 Two fair spinners A and B are shown.



James plays a game using the two spinners.
His score is the sum of the two numbers on spinner A and spinner B.
He wins if his score is even.

James plays the game many times.

Is he likely to win more times than he loses?
You **must** show your working.
You may use this table if you wish.

Spinner A

+	1	1	4	5	6
1					
2					
5					
6					
7					

Spinner B

.....

.....

.....

.....

.....

.....

(4 marks)

Turn over ►

6 (a) Solve the equations

(i) $\frac{v}{4} = 8$

.....

.....

Answer $v =$ (1 mark)

(ii) $4w + 3 = 13$

.....

.....

.....

Answer $w =$ (2 marks)

(b) Find the value of $5x + 2y$ when $x = 4$ and $y = -3$

.....

.....

Answer (2 marks)

(c) Multiply out $4(x - 3)$

.....

Answer (1 mark)

(d) Factorise

(i) $6a + 9$

.....

Answer (1 mark)

(ii) $x^2 + 5x$

.....

Answer (1 mark)

7 Here is part of a railway timetable.

	Departure Times			
Newcastle	0840	0935	1040	1122
York	0943	1034	1144	1225
Leeds	1010	–	1210	–
Derby	1124	1157	1324	1355
Birmingham	1215	1315	1415	1515

(a) A train leaves Newcastle at 1040.

How long is the journey to Birmingham for this train?
Give your answer in hours and minutes.

.....

.....

.....

.....

Answer hours minutes (3 marks)

(b) The 1225 train from York takes 1 hour 30 minutes to reach Derby.
The distance from York to Derby is 96 miles.

Calculate the average speed of the train in miles per hour.

.....

.....

.....

Answer mph (3 marks)

Turn over ►

8



A golf ball is travelling towards a hole.

The distance of the ball from the hole, s feet, after time t seconds, is given by

$$s = t^2 - 6t + 9$$

The ball drops into the hole after 3 seconds.

By working out s when $t = 3$, show that this is correct.

.....

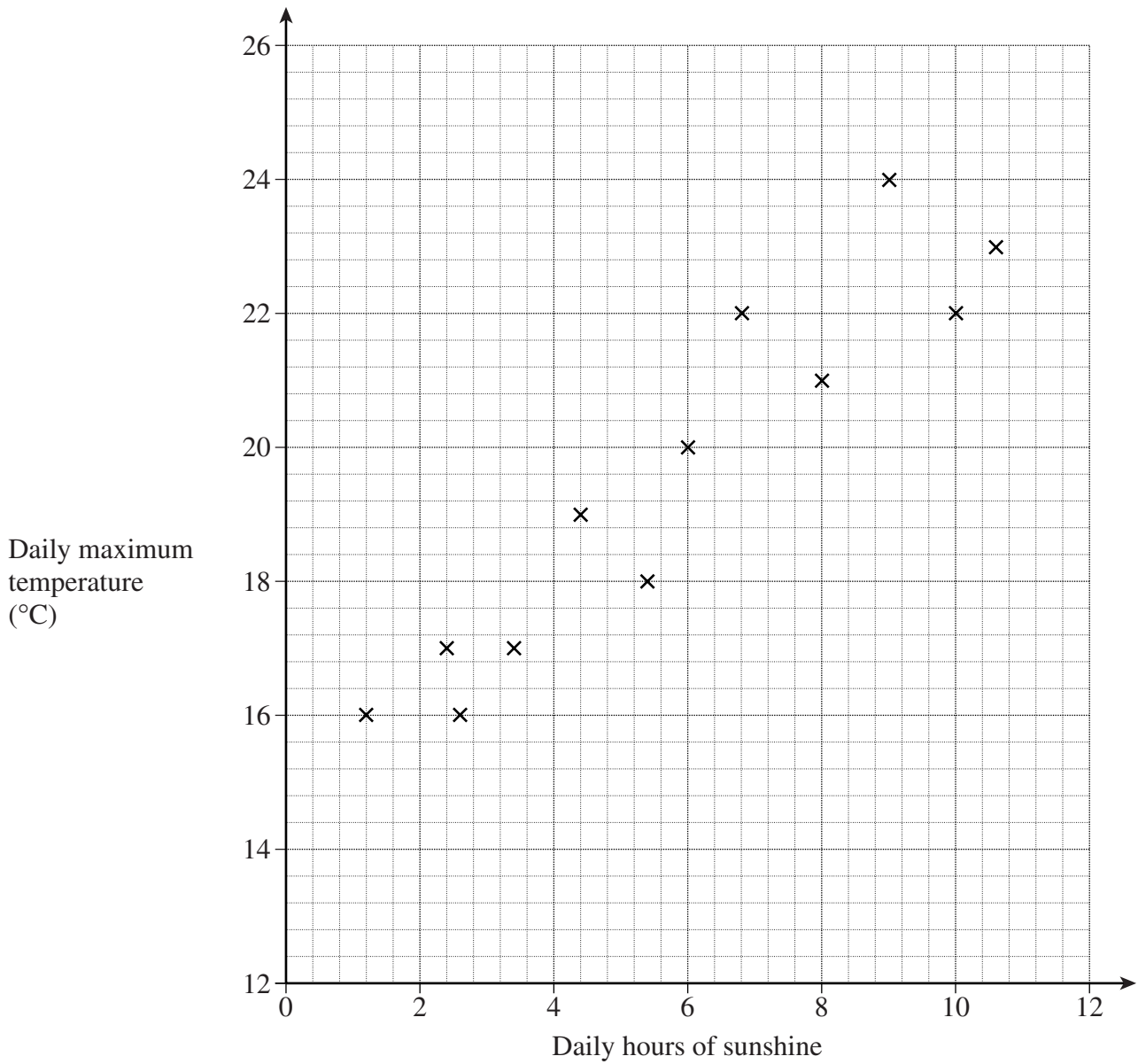
.....

.....

.....

(3 marks)

- 9 A newspaper records the daily maximum temperature of twelve seaside resorts in Britain. It also records the daily hours of sunshine. The scatter graph shows the data collected for a day last July.



(a) Draw a line of best fit. (1 mark)

(b) What is the connection between daily hours of sunshine and daily maximum temperature for these resorts?

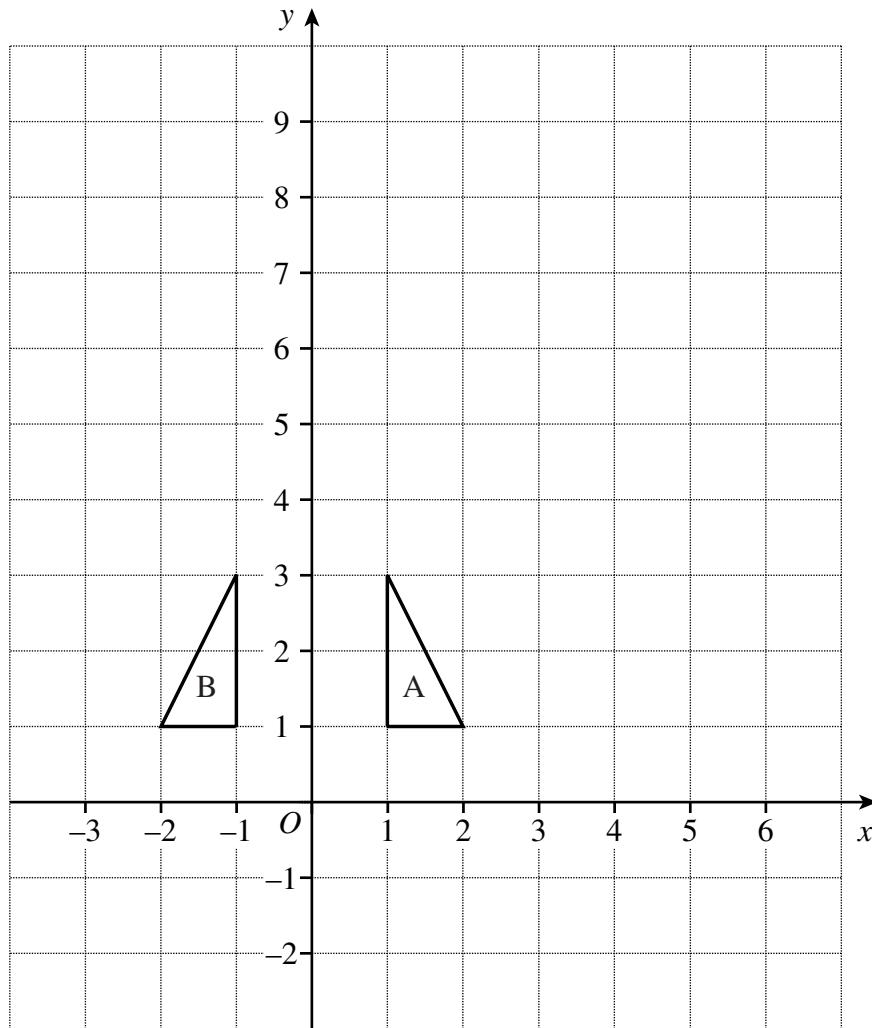
.....

.....

(1 mark)

Turn over ►

10 This question is about transformations of triangle A.



- (a) Describe fully the single transformation that takes triangle A onto triangle B.

.....

 (2 marks)

- (b) Translate triangle A, 2 units to the left and 3 units down.
 Label the new triangle C.

(1 mark)

- (c) Enlarge triangle A by a scale factor of 3, centre (0, 1).
 Label the new triangle D.

(3 marks)

- 11** Amir works in a sports shop.
He can have a discount of 40% on anything he buys for himself.

How much will Amir pay for a pair of trainers priced at £65 ?

.....

.....

.....

.....

Answer £ (3 marks)

- 12** The table shows the amounts needed to make 24 biscuits.

Ingredient	Amount for 24 biscuits	Amount for 36 biscuits
Sugar	80 g	
Flour	280 g	
Butter	190 g	

Calculate the amounts needed to make 36 biscuits.
Write your answers in the table.

.....

.....

.....

(3 marks)

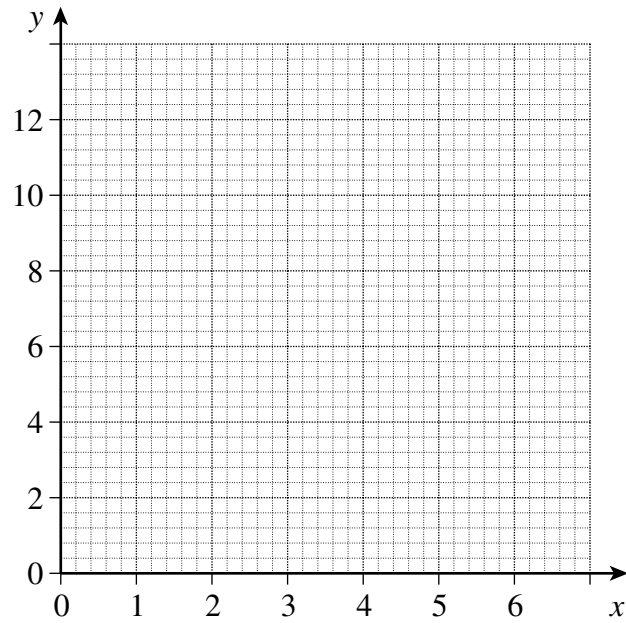
- 13 (a) On the grid draw the graph of $y = 10 - 2x$ for values of x from 0 to 5.

.....

.....

.....

.....

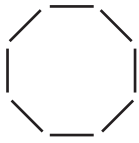


(3 marks)

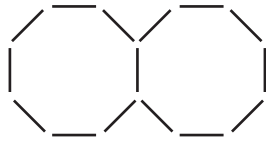
- (b) On the grid draw the line $y = 7$

(1 mark)

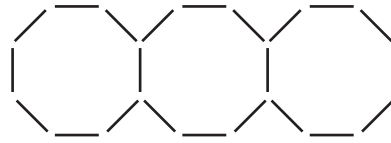
14 A sequence of patterns is made using octagons.
Each octagon is made of sticks.



Pattern 1
8 sticks



Pattern 2
15 sticks



Pattern 3
22 sticks

(a) (i) How many sticks are needed for Pattern 5 ?

.....

Answer (1 mark)

(ii) Explain how you worked out your answer.

.....

..... (1 mark)

(b) Write down an expression for the number of sticks in Pattern n .

.....

Answer (2 marks)

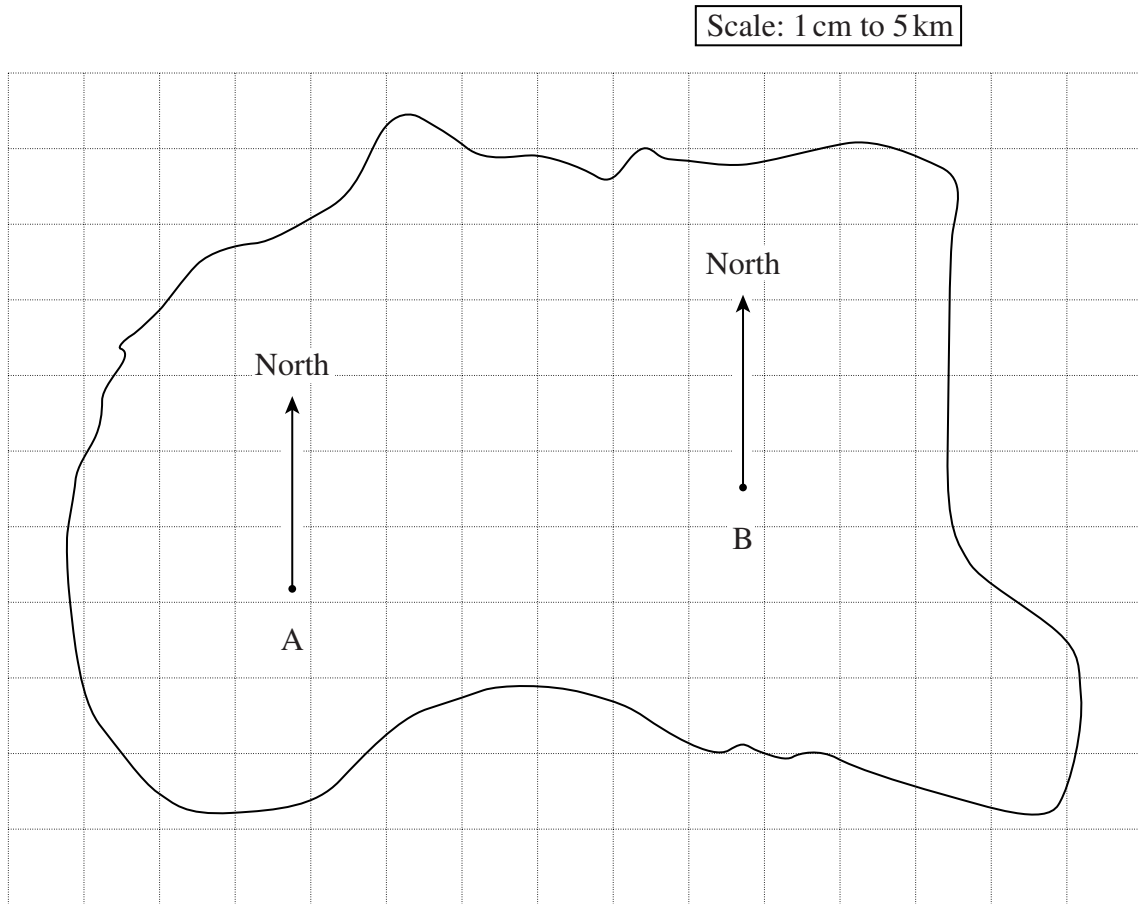
(c) Which pattern uses 358 sticks ?

.....

.....

Answer (2 marks)

15 The diagram shows an island with North lines drawn at points A and B.



- (a) Treasure is buried on a bearing of 037° from A and 290° from B. Mark, with a \times , the position of the treasure.

(3 marks)

- (b) Find the real distance between the points A and B.

.....

Answer km (3 marks)

16 Paul and Kelly each buy a can of drink.



Volume 500 ml
Sugar per can 35 g

Volume 330 ml
Sugar per can 28 g

Paul drinks 100 ml of the Blackcurrant juice.

Kelly drinks 100 ml of the Fizzy orange.

Who drinks more sugar ?

You **must** show your working.

.....
.....
.....
.....
.....

Answer (3 marks)

Turn over for the next question

Turn over ►

17 The table shows the heights of 30 students in a class.

Height, h , (cm)	Number of students
$140 < h \leq 144$	4
$144 < h \leq 148$	5
$148 < h \leq 152$	8
$152 < h \leq 156$	7
$156 < h \leq 160$	5
$160 < h \leq 164$	1

By using the midpoints of each group, calculate an estimate for the mean height of the students.

.....

.....

.....

.....

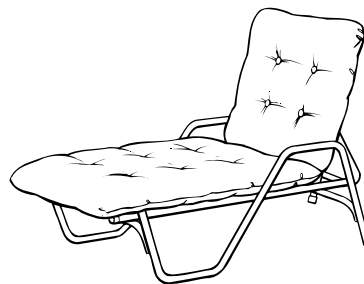
.....

.....

Answer cm (3 marks)

18

Sale!
12% off
Garden Seat
Save £15



What is the normal price of the garden seat?

.....

.....

.....

.....

.....

Answer £ (3 marks)

- 19 (a) Write down whether each of the following is an expression (X), an identity (I), an equation (E) or a formula (F).

	X, I, E or F
$v = u + at$	
$3n + 2n \equiv 5n$	
$3x + 2 = 7$	
$4x^2 + 2x - 3$	

(3 marks)

- (b) Show clearly that $(a + b)(a - b) \equiv a^2 - b^2$

.....

.....

.....

.....

(2 marks)

- 20 The following information is from a table on the side of a packet of biscuits.

NUTRITION INFORMATION		
AVERAGE VALUES	PER BISCUIT	PER 100 g
PROTEIN	0.7 g	5.5 g

Use this information to work out the weight of one biscuit.
Give your answer to an appropriate degree of accuracy.

.....

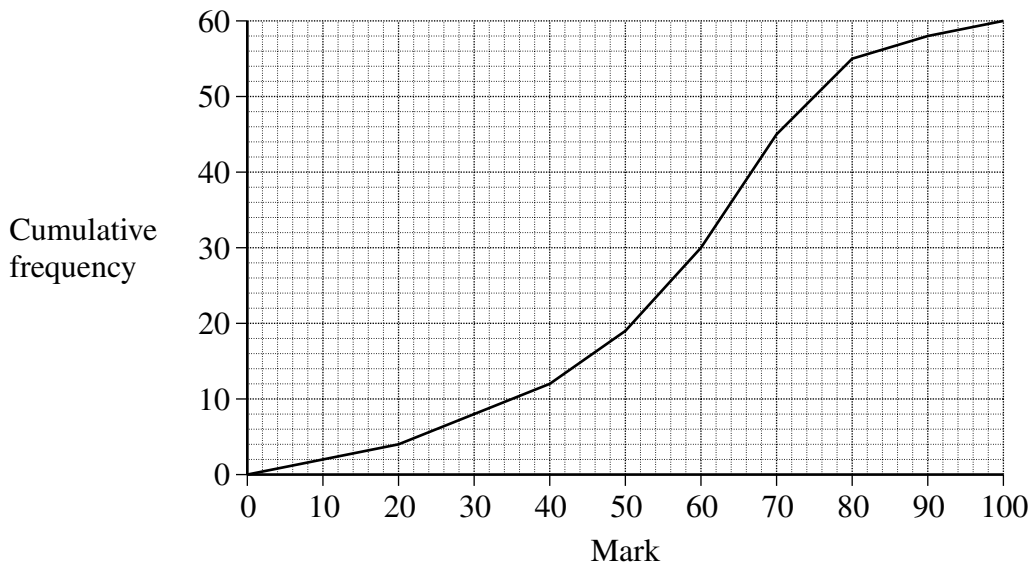
.....

.....

.....

Answer g (3 marks)

21 The cumulative frequency diagram shows the distribution of marks for 60 students in a science examination.



(a) Estimate

(i) the median mark

.....

Answer (1 mark)

(ii) the interquartile range of the marks.

.....

.....

Answer (2 marks)

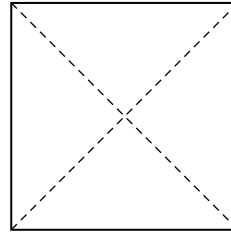
(b) The pass mark for the examination is 55 marks.
How many students passed the examination ?

.....

.....

Answer (2 marks)

- 22 A square has diagonals of length 15 cm.
Calculate the area of the square.



Not drawn accurately

.....

.....

.....

.....

.....

.....

Answer cm² (3 marks)

- 23 This table shows some corresponding values of x and y .

x	-2	-1	0
y	1	2	3

This table shows some relationships between x and y .

Relationship	True/False
$y = x + 3$	
$y = (x + 2)^3 + 1$	

Put True in the last column if the relationship is true for all three pairs of values.
Put False in the last column if the relationship is **not** true for all three pairs of values.

.....

.....

.....

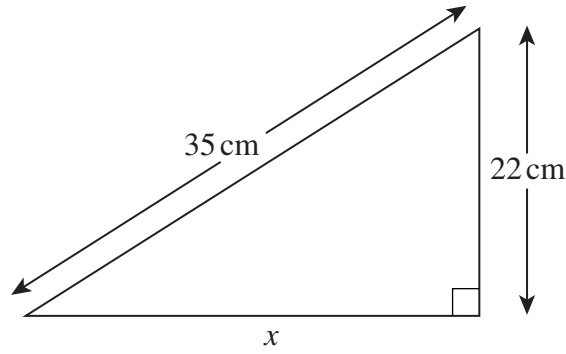
.....

.....

(2 marks)

Turn over ►

24 (a)



Not drawn accurately

Calculate the length x .

.....

.....

.....

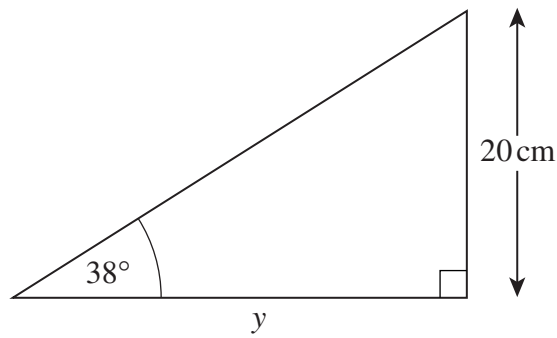
.....

.....

.....

Answer cm (3 marks)

(b)



Not drawn accurately

Calculate the length y .

.....

.....

.....

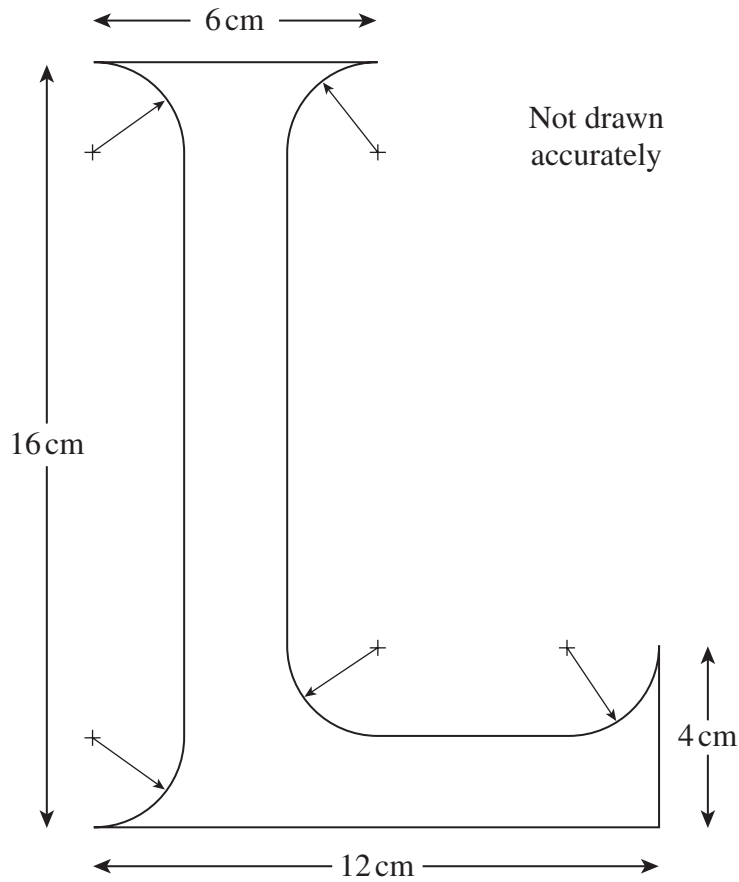
.....

.....

.....

Answer cm (3 marks)

- 25 A sign maker designs a letter L.
All arcs are quarter circles of radius 2 cm.



Calculate the area of the L.

.....

.....

.....

.....

.....

.....

.....

.....

Answer cm² (4 marks)

END OF QUESTIONS

There are no questions printed on this page

There are no questions printed on this page

There are no questions printed on this page