

Surname						Other Names					
Centre Number						Candidate Number					
Candidate Signature											

For Examiner's Use

General Certificate of Secondary Education
November 2007



**MATHEMATICS (MODULAR) (SPECIFICATION B)
Module 1 Intermediate Tier Section A**

33001/IA

Monday 12 November 2007 1.30 pm to 1.55 pm

<p>For this paper you must have:</p> <ul style="list-style-type: none"> • a calculator • mathematical instruments • a treasury tag. 	
---	--

For Examiner's Use			
Section A		Section B	
Question	Mark	Question	Mark
1		7	
2		8	
3		9	
4		10	
5			
6			
Total Section A			
Total Section B			
TOTAL			
Examiner's Initials			

Time allowed for Section A: 25 minutes

Instructions

- Use blue or black ink or ball-point pen. Draw diagrams in pencil.
- Fill in the boxes at the top of this page.
- Answer **all** questions.
- Answer the questions in the spaces provided.
- Use a calculator where appropriate.
- Do all rough work in this book.
- This paper is divided into two sections: Section A and Section B.
- After the 25 minutes allowed for Section A, you must put your calculator on the floor under your seat. You will then be given Section B.
- When you have answered Section B you may work again on Section A but you may **not** use your calculator. It must remain on the floor under your seat.
- At the end of the examination tag Section A and Section B together with Section A on top.

Information

- The maximum mark for Section A is 20.
- The marks for questions are shown in brackets.
- You may ask for more answer paper and graph paper. These must be tagged securely to this answer book.

Advice

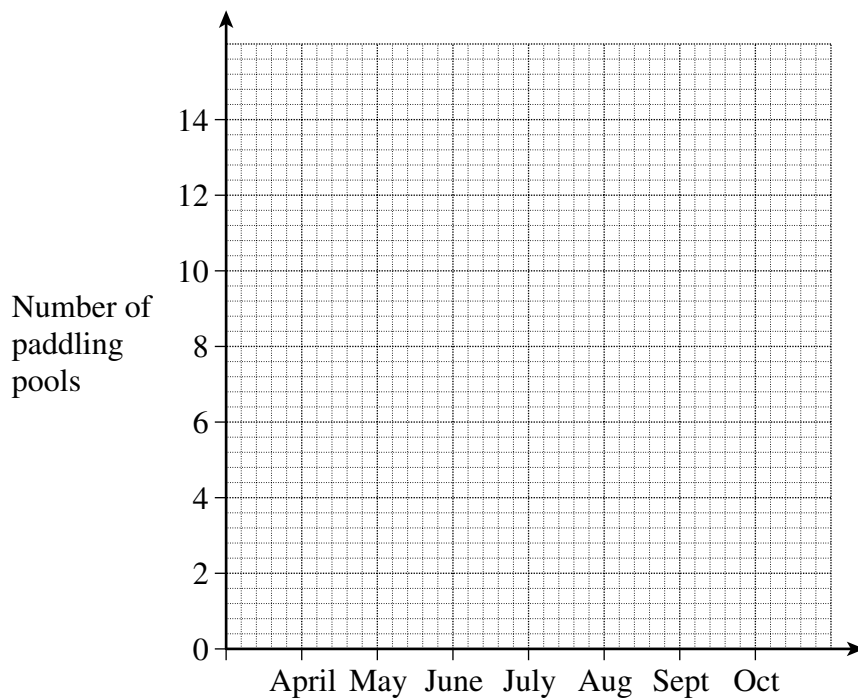
- In all calculations, show clearly how you work out your answer.

Answer **all** questions in the spaces provided.

- 1 A toy shop sells paddling pools.
The table shows the number sold each month.

Month	April	May	June	July	Aug	Sept	Oct
Number of paddling pools	4	5	9	12	7	4	3

- (a) Draw a time-series graph for this data.



(2 marks)

- (b) Describe the sales pattern shown by the graph.

.....

.....

.....

(1 mark)

2 The table shows the number of each type of house on an estate.

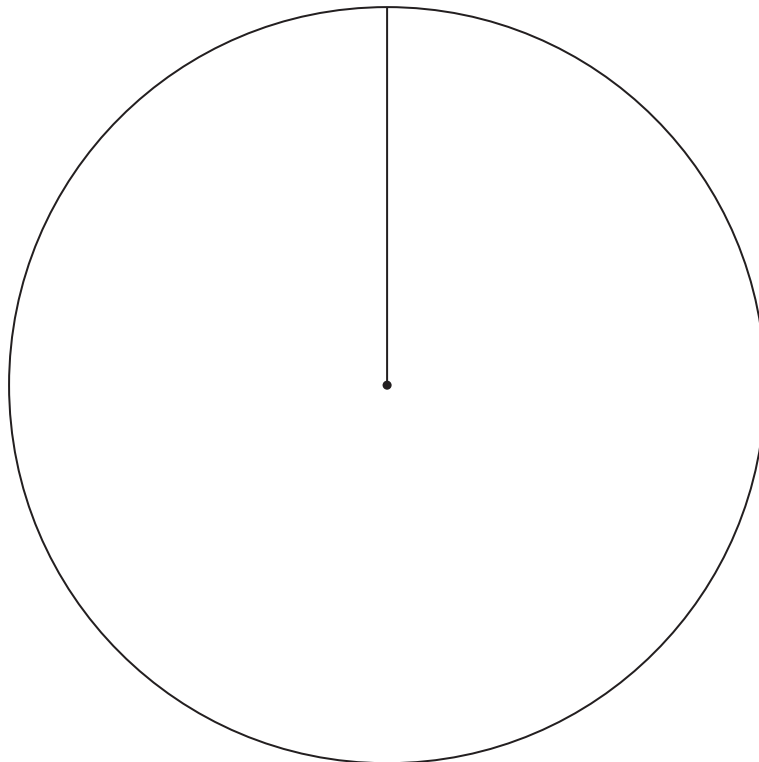
Type of house	Frequency
Terraced (T)	114
Semi-detached (S)	92
Detached (D)	24
Bungalow (B)	10
Total	240

Draw and label a pie chart to show this information.

.....

.....

.....



(4 marks)

4

Turn over ►

3 The number of visitors to a park is recorded each day for two weeks.

121 118 128 144 100 111 129

146 137 123 118 109 135 132

Draw an ordered stem-and-leaf diagram to represent this information.
Remember to complete the key.

.....


.....

.....

.....

.....

Key | represents visitors



(3 marks)

- 4 (a) Louis wants to find out how many CDs children buy.
This is his question and response section.

Question: How many CDs do you buy?

Response: Tick one box.

<input type="checkbox"/>	<input type="checkbox"/>	<input type="checkbox"/>
1-2	3-4	5-6

Write down **one** criticism of the question and **one** criticism of the response section.

Criticism of question

.....

Criticism of response section

.....

(2 marks)

- (b) Wynn wants to know how much money children spend on CDs.
He asks a large group of Year 11 boys and girls.

Give a reason why this may give him a biased set of results.

.....

.....

(1 mark)

3

- 5 Rosie and Josh want to estimate the number of blue beads in a bag of 400 beads. A trial consists of taking a bead at random, recording the colour and replacing the bead in the bag. The results of their trials are shown in the table.

	Number of trials	Number of blue beads chosen
Rosie	25	7
Josh	100	19

- (a) (i) Write down the relative frequency of Rosie taking a blue bead from the bag.

Answer (1 mark)

- (ii) Write down the relative frequency of Josh taking a blue bead from the bag.

Answer (1 mark)

- (b) Whose experiment gives the more reliable estimate of the number of blue beads in the bag?
Give a reason for your answer.

Answer

Reason

.....
(1 mark)

- 6 A youth club is open on Monday, Wednesday and Friday evenings each week. The table shows the number of people at the youth club each evening over two weeks. One of the values in the table is missing.

Week 1			Week 2		
Monday	Wednesday	Friday	Monday	Wednesday	Friday
42	37	62	39		66

- (a) Show that the first three-point moving average is 47.

.....

(1 mark)

- (b) The third three-point moving average is 51.

Calculate the number of people at the youth club on Wednesday of Week 2.

.....

Answer (3 marks)

END OF SECTION A

There are no questions printed on this page

Surname						Other Names					
Centre Number						Candidate Number					
Candidate Signature											

General Certificate of Secondary Education
November 2007



MATHEMATICS (MODULAR) (SPECIFICATION B)
Module 1 Intermediate Tier Section B

33001/IB

Monday 12 November 2007 2.00 pm to 2.25 pm

<p>For this paper you must have:</p> <ul style="list-style-type: none"> mathematical instruments. <p>You must not use a calculator.</p>	
--	--

Time allowed for Section B: 25 minutes

Instructions

- Use blue or black ink or ball-point pen. Draw diagrams in pencil.
- Fill in the boxes at the top of this page.
- Answer **all** questions.
- Answer the questions in the spaces provided.
- Do all rough work in this book.
- You may **not** use your calculator in Section B. Your calculator must remain on the floor under your seat.
- When you have answered Section B you may work again on Section A but you may **not** use your calculator. It must remain on the floor under your seat.
- At the end of the examination tag Section A and Section B together with Section A on top.

Information

- The maximum mark for Section B is 20.
- The marks for questions are shown in brackets.
- You may ask for more answer paper and graph paper. These must be tagged securely to this answer booklet.

Advice

- In all calculations, show clearly how you work out your answer.

Answer **all** questions in the spaces provided.

- 7 A bag contains 12 discs.
Each disc is labelled with a different number from 1 to 12.
A disc is chosen from the bag at random.

(a) Write down the probability that the chosen disc is

(i) the number 7

Answer (1 mark)

(ii) a number greater than eight

.....

Answer (2 marks)

(iii) a square number.

.....

Answer (2 marks)

(b) Write down an event, for this bag of discs, that would have a probability of $\frac{1}{2}$

.....
(1 mark)

- 8 200 pupils from a school were asked how they travel to school.
An equal number of boys and girls were asked.
Altogether 70 pupils take the bus to school.
The number of girls who travel by car is double the number of boys who travel by car.

The two-way table shows some of the information.

	walk	car	bus	cycle
boys	42		38	6
girls		28		1

- (a) Complete the two-way table.

.....

.....

.....

(4 marks)

- (b) There are 1000 pupils in the school.

Estimate the total number of pupils who take the bus to school.

.....

.....

Answer (2 marks)

6

Turn over for the next question

Turn over ►

- 9 One hundred people were asked how many times they had visited the theatre in the last year. The table shows the results.

Number of visits	Frequency	Midpoint	
1 to 3	53		
4 to 6	30		
7 to 9	11		
10 to 12	6		

- (a) Write down the modal class.

Answer (1 mark)

- (b) Use midpoints to calculate an estimate of the mean number of visits.

.....

.....

.....

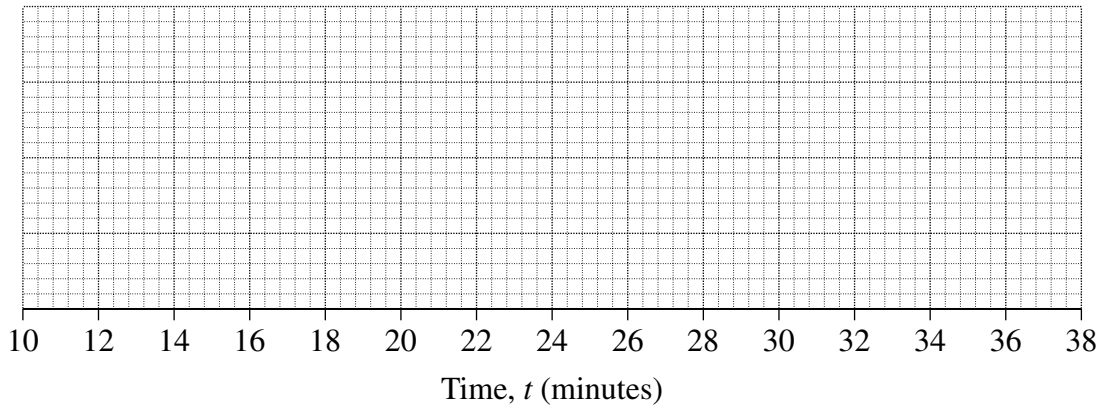
.....

Answer visits (3 marks)

- 10 A group of students completed a cross-country run.
The table gives some information about the times taken, in minutes, to complete the run.

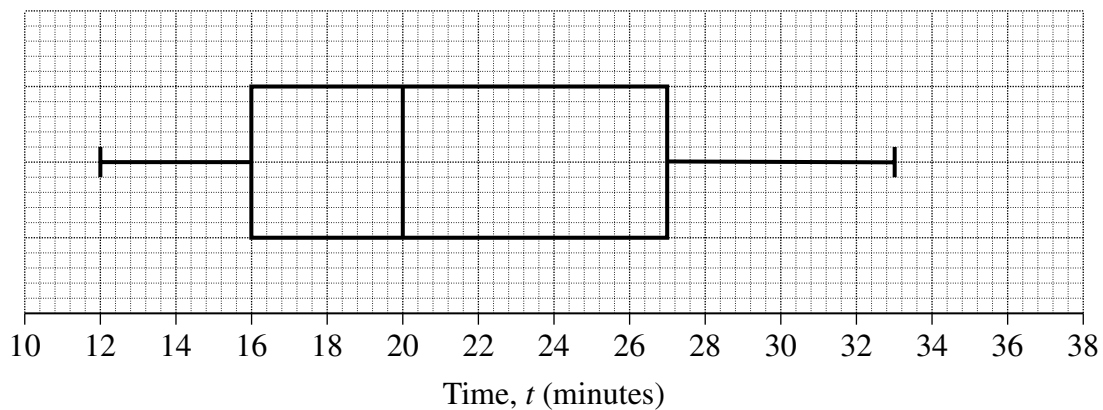
Quickest time	Lower quartile	Median	Upper quartile	Slowest time
14	18	24	29	35

- (a) Draw a box plot on the grid below to represent this information.



(2 marks)

- (b) The students did some training.
They then completed the run again.
The box plot shows information about the times for the second run.



Compare the performances of the group on the first and the second run.

Comparison 1

.....

Comparison 2

.....

(2 marks)

END OF QUESTIONS

There are no questions printed on this page

There are no questions printed on this page

There are no questions printed on this page