

Surname						Other Names					
Centre Number						Candidate Number					
Candidate Signature											

For Examiner's Use

General Certificate of Secondary Education
November 2008



MATHEMATICS (MODULAR) (SPECIFICATION B)
Module 5 Foundation Tier
Paper 2 Calculator

43005/2F

F

Wednesday 12 November 2008 9.00 am to 10.15 am

<p>For this paper you must have:</p> <ul style="list-style-type: none"> • a calculator • mathematical instruments. 	
---	--

For Examiner's Use	
Pages	Mark
3	
4–5	
6–7	
8–9	
10–11	
12–13	
14–15	
16–17	
18	
TOTAL	
Examiner's Initials	

Time allowed: 1 hour 15 minutes

Instructions

- Use black ink or black ball-point pen. Draw diagrams in pencil.
- Fill in the boxes at the top of this page.
- Answer **all** questions.
- You must answer the questions in the spaces provided. Answers written in margins or on blank pages will not be marked.
- Use a calculator where appropriate.
- Do all rough work in this book.
- If your calculator does not have a π button, take the value of π to be 3.14 unless another value is given in the question.

Information

- The maximum mark for this paper is 70.
- The marks for questions are shown in brackets.
- You may ask for more answer paper, graph paper and tracing paper. This must be tagged securely to this answer book.

Advice

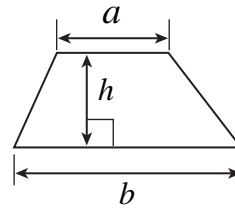
- In all calculations, show clearly how you work out your answer.



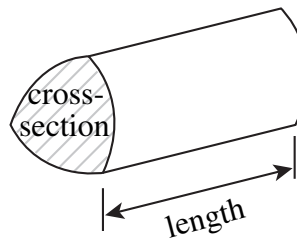
N 0 V 0 8 4 3 0 0 5 2 F 0 1

Formulae Sheet: Foundation Tier

Area of trapezium = $\frac{1}{2}(a+b)h$



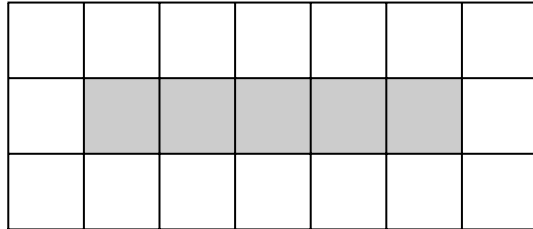
Volume of prism = area of cross-section \times length



Answer **all** questions in the spaces provided.

1 The grids in this question are made from centimetre squares.

1 (a)

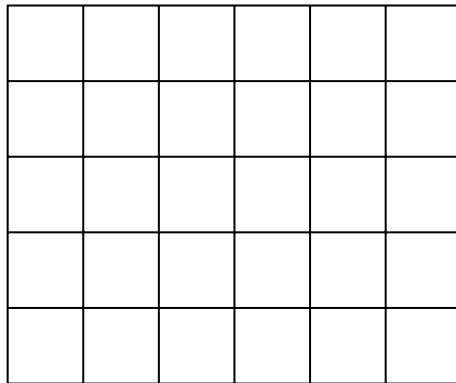


Work out the perimeter of the shaded rectangle.

.....

Answer cm (1 mark)

1 (b)



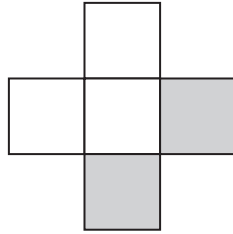
On the grid, draw and shade a different rectangle which has the same perimeter.

.....

(2 marks)

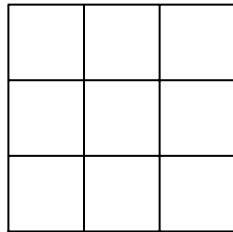


- 2 (a) What fraction of this shape is shaded?



Answer (1 mark)

- 2 (b) Shade $\frac{2}{3}$ of this square.



(1 mark)

- 2 (c) Which **two** of these fractions are **not** equal to $\frac{2}{3}$?

$$\frac{4}{6} \quad \frac{8}{9} \quad \frac{14}{21} \quad \frac{22}{32} \quad \frac{30}{45}$$

.....
.....

Answer and (2 marks)



3 From the following lists of numbers

3 (a) circle **two** factors of 70

3 7 11 12 20 28 35

(2 marks)

3 (b) circle **three** multiples of 4

3 7 11 12 20 28 35

(2 marks)

3 (c) circle a number which is one less than a cube number.

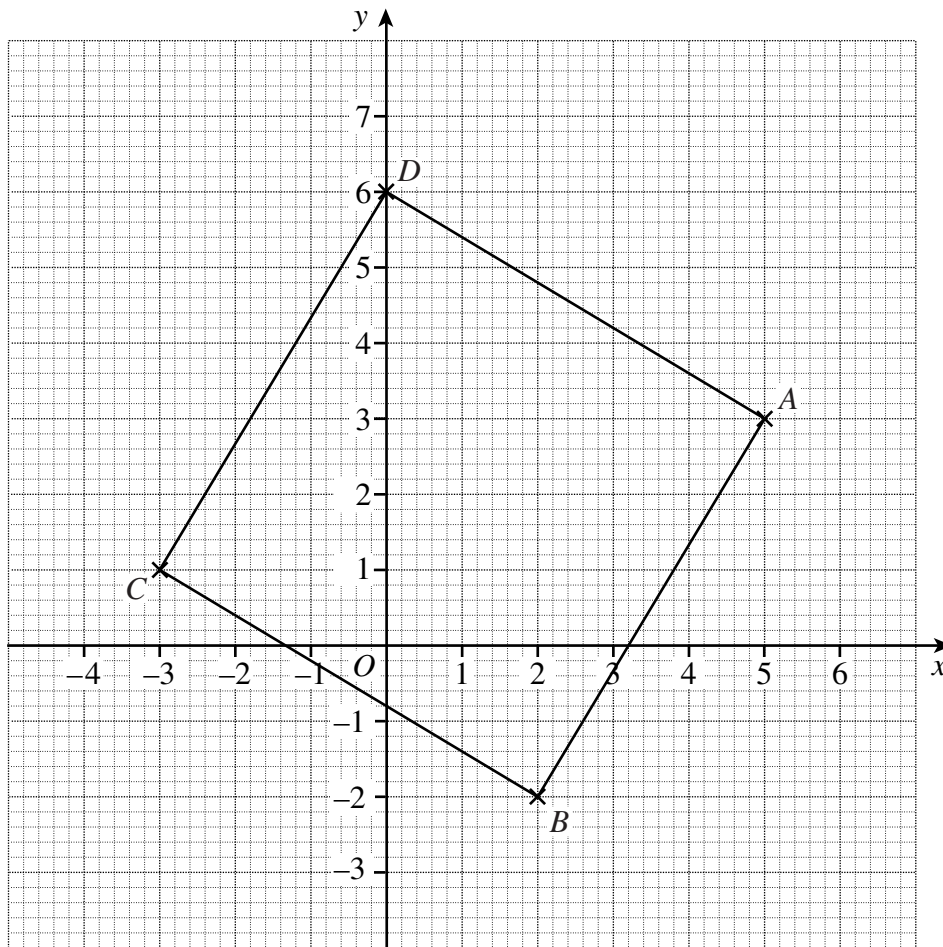
3 7 11 12 20 28 35

(1 mark)

Turn over for the next question



4 Quadrilateral $ABCD$ is drawn on the grid.



4 (a) Write down the coordinates of A .

Answer (..... ,) (1 mark)

4 (b) Write down the coordinates of C .

Answer (..... ,) (1 mark)

4 (c) (i) Draw the line AC .
Mark the midpoint of AC and label it M .

(1 mark)

4 (c) (ii) Write down the coordinates of M .

Answer (..... ,) (1 mark)

4 (d) Write down **two** facts that show $ABCD$ is a square.

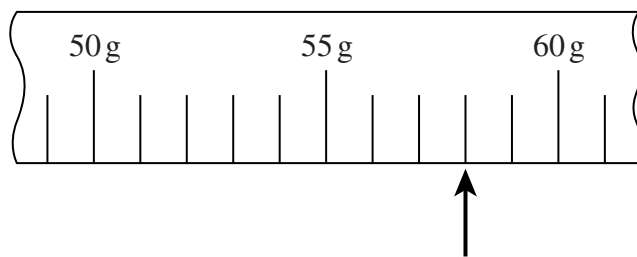
Fact 1

Fact 2

(2 marks)

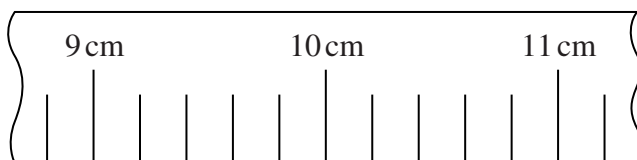


- 5 (a) What value is shown by the arrow on this diagram?



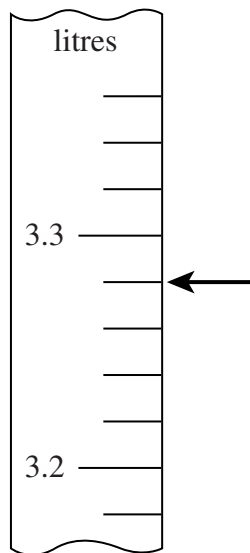
Answer g (1 mark)

- 5 (b) Draw an arrow on this diagram to show 9.3 cm.



(1 mark)

- 5 (c) Ethan says that this arrow shows 3.29 litres.



Ethan is **not** correct.

What mistake has Ethan made?

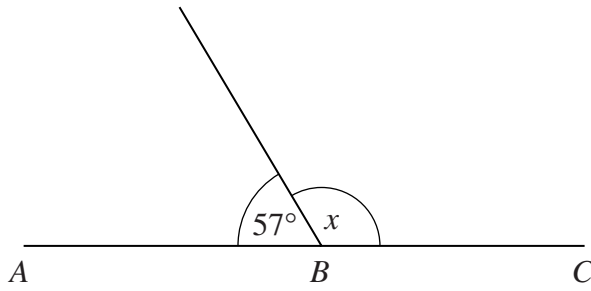
.....

(1 mark)

Turn over ►



6 (a) ABC is a straight line.



Not drawn accurately

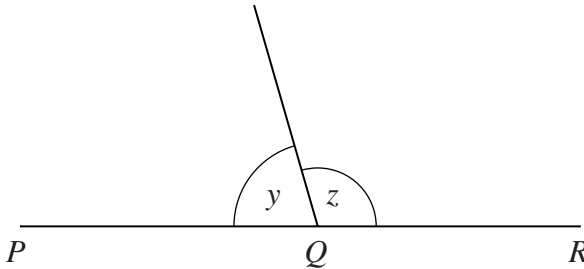
Work out the value of x .

.....

.....

Answer degrees (1 mark)

6 (b) PQR is a straight line.



Not drawn accurately

6 (b) (i) Complete the statement.

An acute angle is an angle which is (1 mark)

6 (b) (ii) Angle y is an acute angle.

Explain why angle z cannot also be acute.

.....

.....

(1 mark)



7 Here is an approximate rule for changing Celsius, C , to Fahrenheit, F .

double C and add on 30

7 (a) Work out the value of F when $C = 27$

.....
.....

Answer $F =$ (2 marks)

7 (b) Work out the value of C when $F = 52$

.....
.....

Answer $C =$ (2 marks)

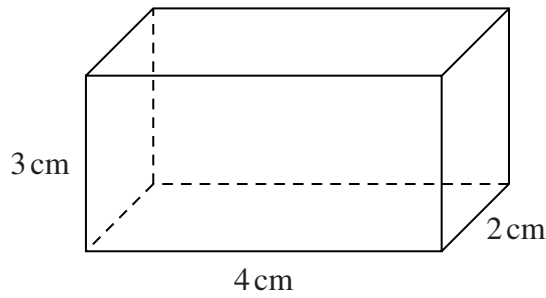
Turn over for the next question

7

Turn over ►



8 The diagram shows a cuboid of length 4 cm, width 2 cm and height 3 cm.



Not drawn
accurately

8 (a) (i) How many faces does a cuboid have?

Answer (1 mark)

8 (a) (ii) How many edges does a cuboid have?

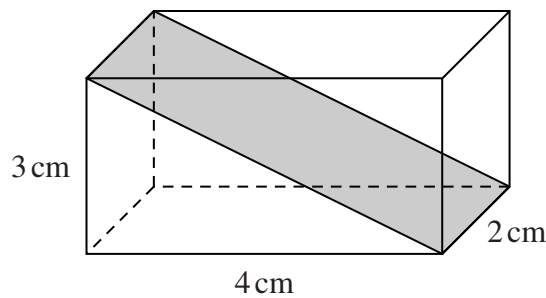
Answer (1 mark)

8 (a) (iii) Calculate the volume of this cuboid.

.....

Answer cm³ (2 marks)

8 (b) The cuboid is cut along the shaded plane to make triangular prisms.



Not drawn
accurately

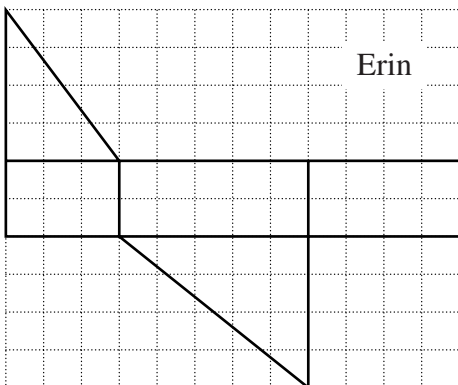
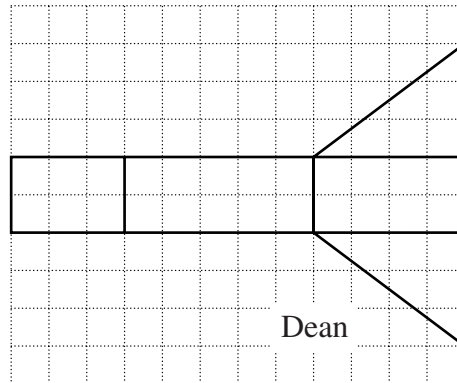
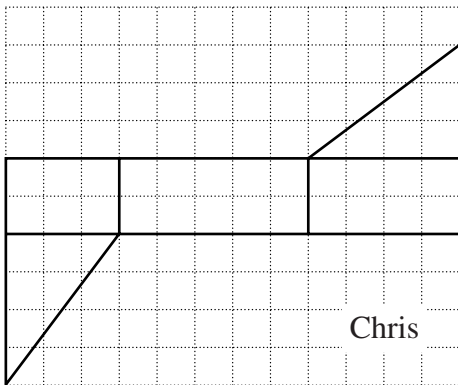
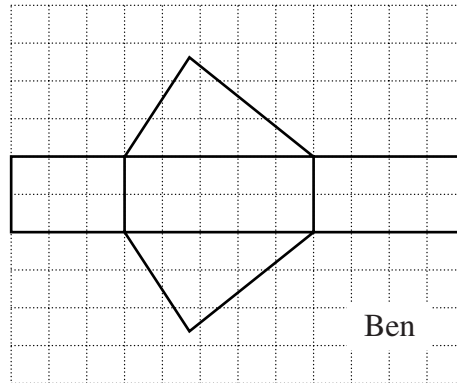
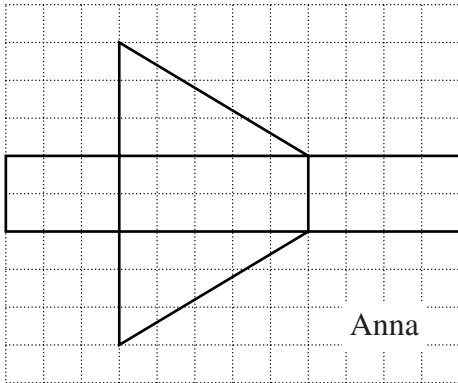
What is the volume of one of the triangular prisms?

.....

Answer cm³ (1 mark)



8 (c) Five students have tried to draw a net of the triangular prism.



Put a tick in the table against each student whose net is correct.
Put a cross if the net is **not** correct.

Anna	Ben	Chris	Dean	Erin

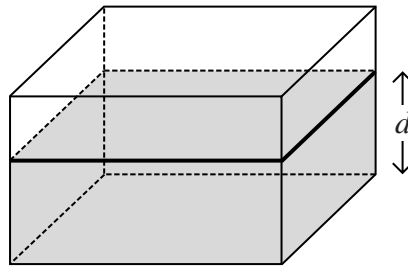
(3 marks)

8

Turn over ►



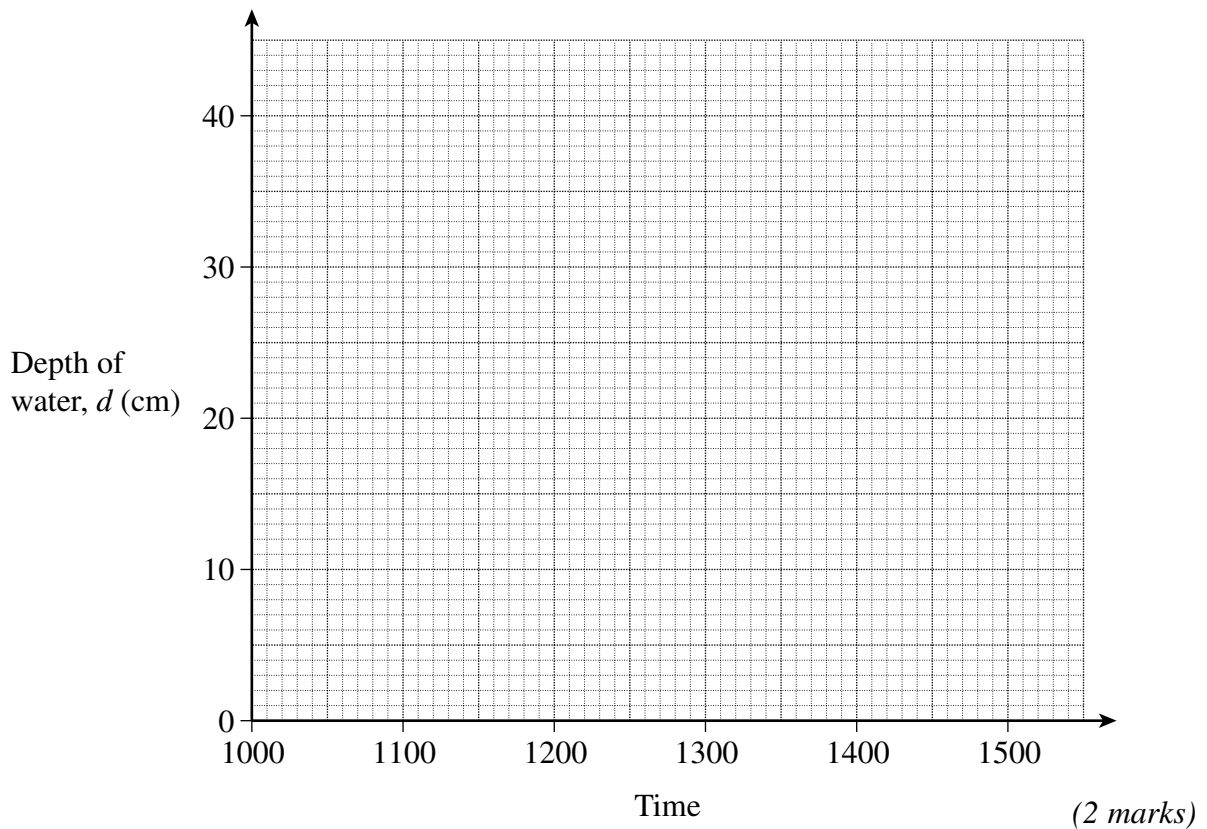
9 Water is leaking from a tank.



The water level is checked three times during the day. Here are the results.

Time	1000	1100	1230
Depth of water, d (cm)	35	27	15

9 (a) Plot these results on the grid and join them with a straight line.



9 (b) Use your graph to find the depth of the water at 1036.

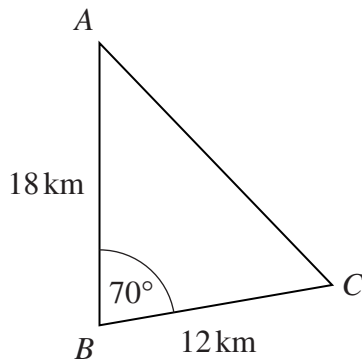
Answer cm (1 mark)

9 (c) If the water continues to leak at the same rate, when will the tank be empty?

Answer (1 mark)

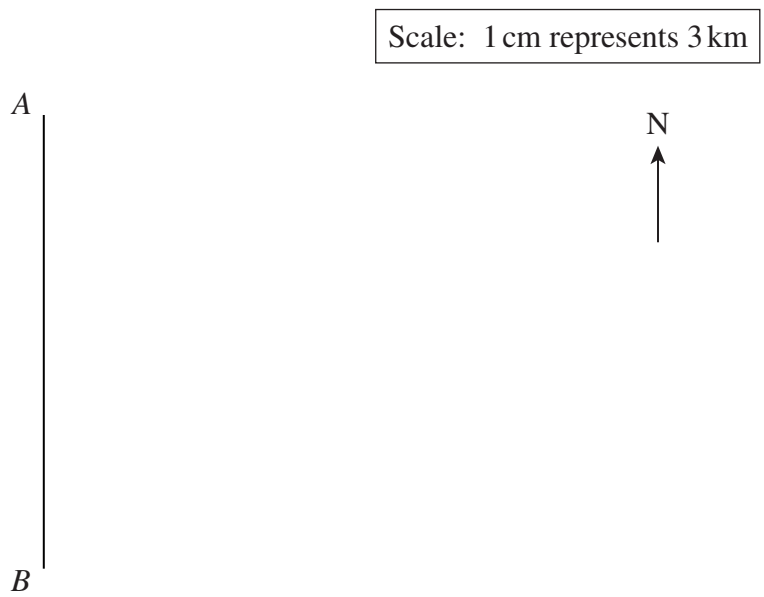


- 10 The diagram shows the positions of three towns, A , B and C .
 A is 18 kilometres due north of B .
 C is 12 kilometres from B on a bearing of 070° .



- 10 (a) A scale of 1 cm to represent 3 km has been used to show the positions of towns A and B .

Complete the diagram to show the position of town C .



(2 marks)

- 10 (b) Use measurements from your drawing to work out the three-figure bearing of C from A .

.....

.....

Answer degrees (2 marks)

8

Turn over ►



11 (a) Work out 1.8^3

Answer (1 mark)

11 (b) Work out $\frac{1}{5.7}$

11 (b) (i) Write down your full calculator display.

Answer (1 mark)

11 (b) (ii) Write your answer to 2 decimal places.

Answer (1 mark)



12 (a) Factorise $6x - 10$

.....

Answer (1 mark)

12 (b) Solve the equation $4y + 3 = 8$

.....

.....

Answer $y =$ (2 marks)

12 (c) Solve the equation $2(t + 5) = 8$

.....

.....

.....

Answer $t =$ (3 marks)

12 (d) List all the integer solutions of the inequality $-6 \leq 3n < 5$

.....

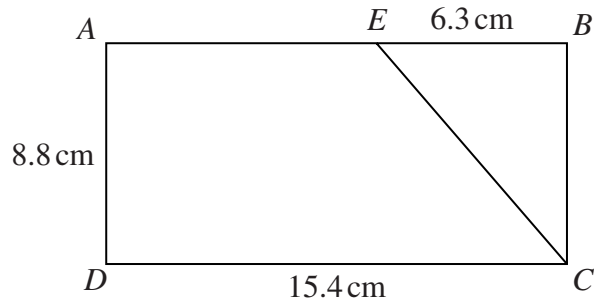
.....

.....

Answer (3 marks)



- 13** The diagram shows a rectangle $ABCD$.
 $AD = 8.8$ cm and $DC = 15.4$ cm
 Triangle BCE is cut off the rectangle, where $EB = 6.3$ cm



Not drawn accurately

Calculate the area of trapezium $AECD$.

.....

.....

.....

.....

.....

.....

Answer cm^2 (3 marks)

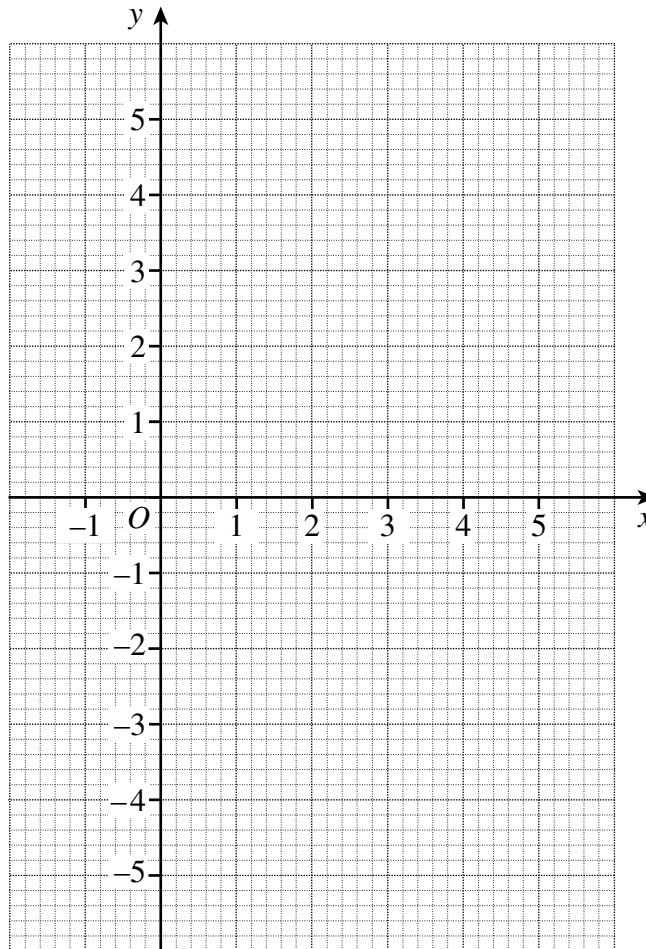


14 (a) Complete the table of values for $y = x^2 - 4x$

x	-1	0	1	2	3	4	5
y		0	-3	-4		0	5

.....
(2 marks)

14 (b) On the grid, draw the graph of $y = x^2 - 4x$ for values x from -1 to 5 .



(2 marks)

14 (c) Use your graph to find the solutions of the equation $x^2 - 4x = 2$

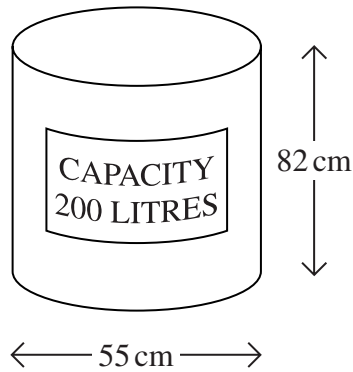
Answer and (2 marks)

14 (d) Explain why you cannot find solutions of the equation $x^2 - 4x = -5$

.....
.....
(1 mark)



- 15** The diameter of a cylindrical water-butt is 55 cm.
The height is 82 cm.



Not drawn accurately

One litre = 1000 cm³

The label states that the capacity of the water-butt is 200 litres.

Is this accurate?

You **must** show your working.

.....

.....

.....

.....

.....

.....

.....

(4 marks)

END OF QUESTIONS

4



There are no questions printed on this page

**DO NOT WRITE ON THIS PAGE
ANSWER IN THE SPACES PROVIDED**



There are no questions printed on this page

**DO NOT WRITE ON THIS PAGE
ANSWER IN THE SPACES PROVIDED**

Copyright © 2008 AQA and its licensors. All rights reserved.

