

Centre Number									Candidate Number								
Surname																	
Other Names																	
Candidate Signature																	

For Examiner's Use	
Examiner's Initials	
Pages	Mark
3	
4 – 5	
6 – 7	
8 – 9	
10 – 11	
12 – 13	
14 – 15	
16 – 17	
18 – 19	
20 – 21	
22	
TOTAL	



General Certificate of Secondary Education
Foundation Tier
June 2012

Mathematics

43603F

Unit 3

Wednesday 13 June 2012 9.00 am to 10.30 am

F

<p>For this paper you must have:</p> <ul style="list-style-type: none"> • a calculator • mathematical instruments. 	
---	--

Time allowed

- 1 hour 30 minutes

Instructions

- Use black ink or black ball-point pen. Draw diagrams in pencil.
- Fill in the boxes at the top of this page.
- Answer **all** questions.
- You must answer the questions in the spaces provided. Do not write outside the box around each page or on blank pages.
- Do all rough work in this book.
- If your calculator does not have a π button, take the value of π to be 3.14 unless another value is given in the question.

Information

- The marks for questions are shown in brackets.
- The maximum mark for this paper is 80.
- The quality of your written communication is specifically assessed in Questions 8 and 11. These questions are indicated with an asterisk (*).
- You may ask for more answer paper, graph paper and tracing paper. These must be tagged securely to this answer booklet.

Advice

- In all calculations, show clearly how you work out your answer.

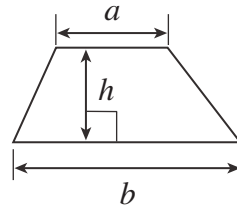


J U N 1 2 4 3 6 0 3 F 0 1

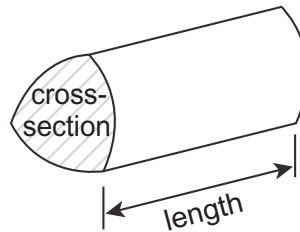
Formulae Sheet: Foundation Tier

You may need to use the following formulae:

Area of trapezium = $\frac{1}{2}(a+b)h$

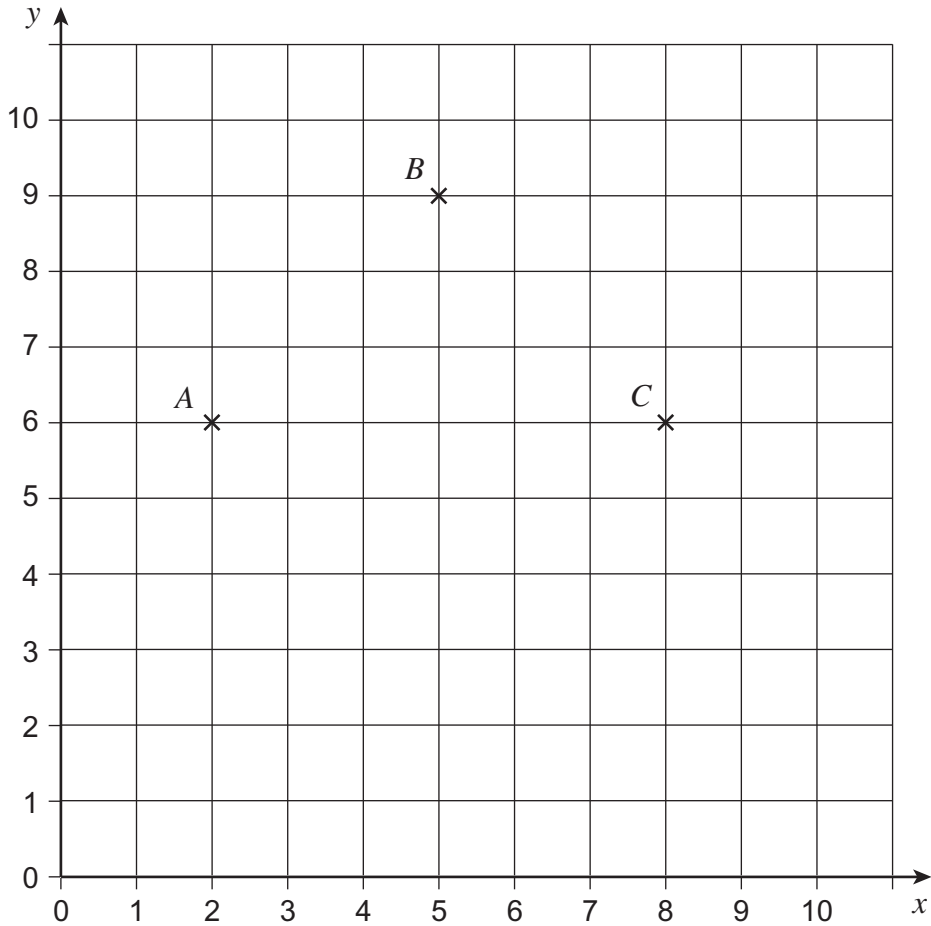


Volume of prism = area of cross-section \times length



Answer **all** questions in the spaces provided.

- 1** Here is a centimetre–square grid with points A , B and C plotted.



- 1 (a)** Write down the coordinates of A .

Answer (..... ,)

(1 mark)

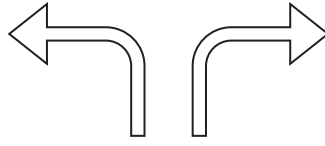
- 1 (b)** Plot the point D so that $ABCD$ is a square.

(1 mark)



2 In each part, decide whether the diagram shows a reflection, a rotation or a translation.
Circle your answer.

2 (a)



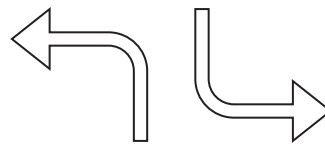
Reflection

Rotation

Translation

(1 mark)

2 (b)



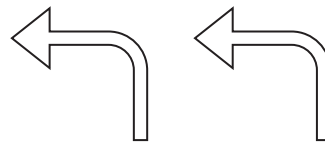
Reflection

Rotation

Translation

(1 mark)

2 (c)



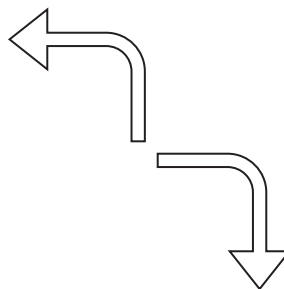
Reflection

Rotation

Translation

(1 mark)

2 (d)



Reflection

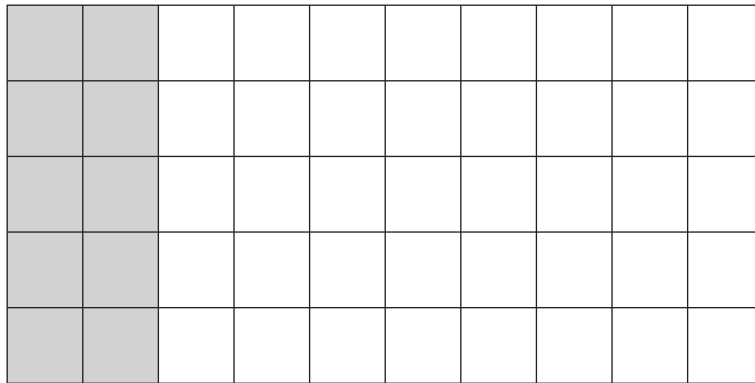
Rotation

Translation

(1 mark)



3



3 (a) What fraction of the grid is shaded?
Give your answer in its simplest form.

.....
.....

Answer (2 marks)

3 (b) How many **more** squares need to be shaded so that 60% of the grid is shaded?

.....
.....
.....
.....

Answer (3 marks)



4 (a) Measure the length of line AB .



Answer cm (1 mark)

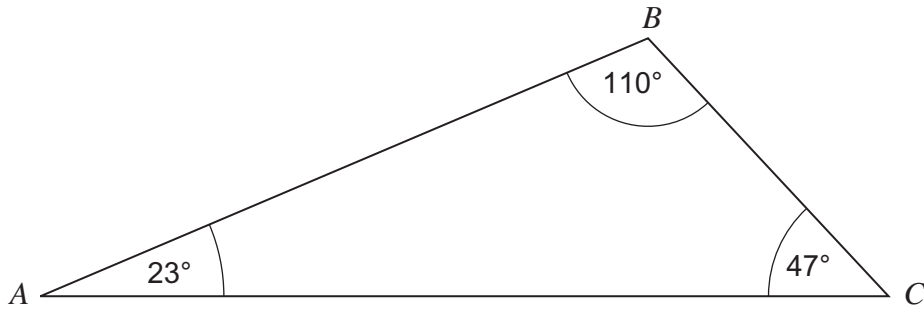
4 (b) Mark the midpoint of line CD with a cross (\times).



(1 mark)



- 5 The diagram shows a triangle ABC .



- 5 (a) Circle the correct word to describe triangle ABC .

Scalene

Isosceles

Equilateral

(1 mark)

- 5 (b) Circle the correct word to describe angle B .

Acute

Obtuse

Reflex

(1 mark)

Turn over for the next question



6 (a) One cubic metre (m^3) of concrete weighs 2.4 tonnes.
A base for a shed uses $3.8 m^3$ of concrete.

Work out how much this concrete weighs.

.....
.....

Answer tonnes (2 marks)

6 (b) A base for a garage uses 12.5 tonnes of concrete.
A lorry delivers ready-mixed concrete in loads of 14 tonnes.

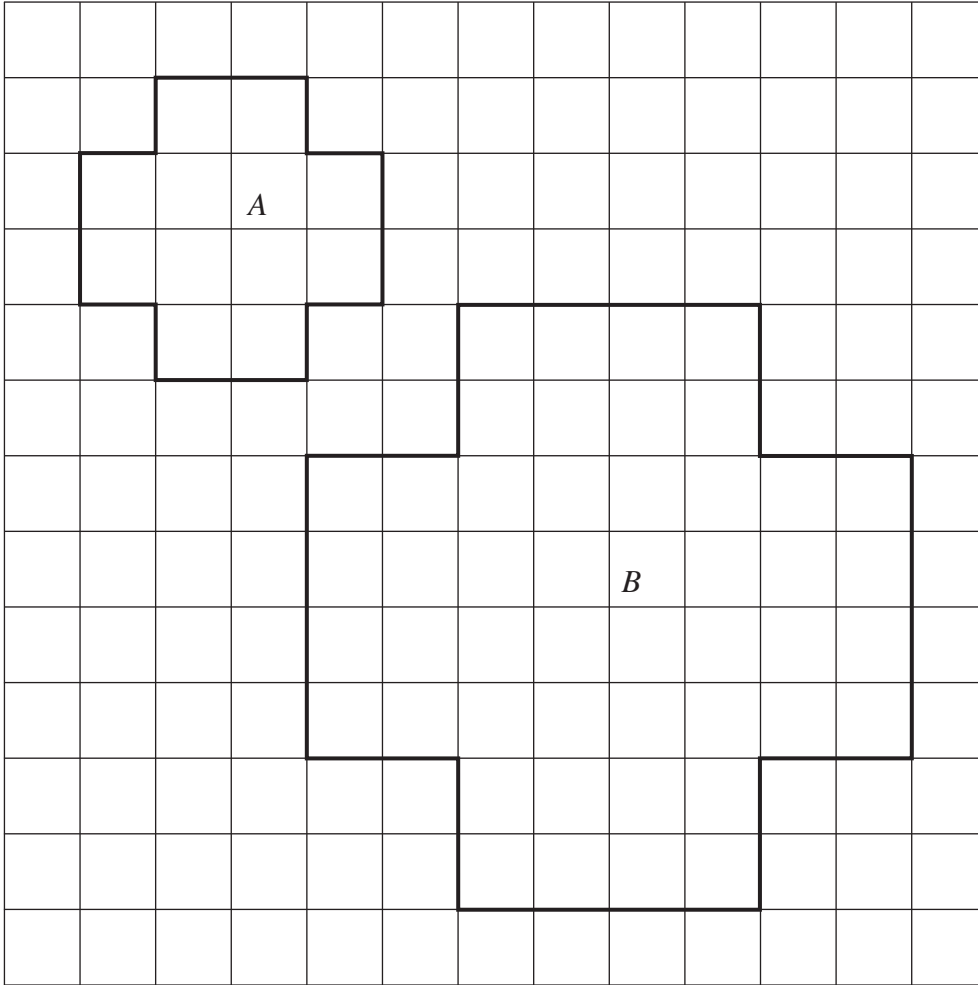
How many of these bases can be built with 10 loads of concrete?

.....
.....
.....

Answer (3 marks)



7 Shape *A* and shape *B* are drawn on a centimetre grid.



7 (a) Work out the area of shape *A*.
State the units of your answer.

.....

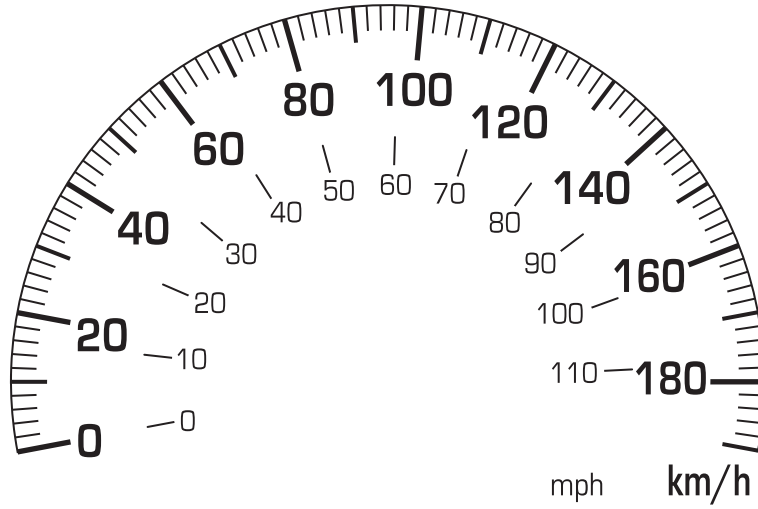
Answer (2 marks)

7 (b) Shape *B* is an enlargement of shape *A*.
Write down the scale factor of the enlargement.

Answer (1 mark)



***8** The diagram shows a speedometer on a car bought in France.



8 (a) The speed limit on a road in France is 110 kilometres per hour (km/h).
Use the speedometer to estimate this speed in miles per hour (mph).

Answer mph (1 mark)

8 (b) The speed limit on a road in England is 30 mph.
Use the speedometer to estimate this speed in km/h.

Answer km/h (1 mark)



8 (c) Marie has 56 litres of diesel in her car.
The car uses 1 litre of diesel for every 19 kilometres travelled.

She wants to drive to Paris, a distance of 1100 kilometres.

Does she have enough diesel for the journey?

.....

.....

.....

.....

(3 marks)

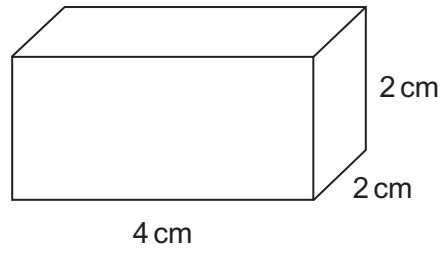
Turn over for the next question

5

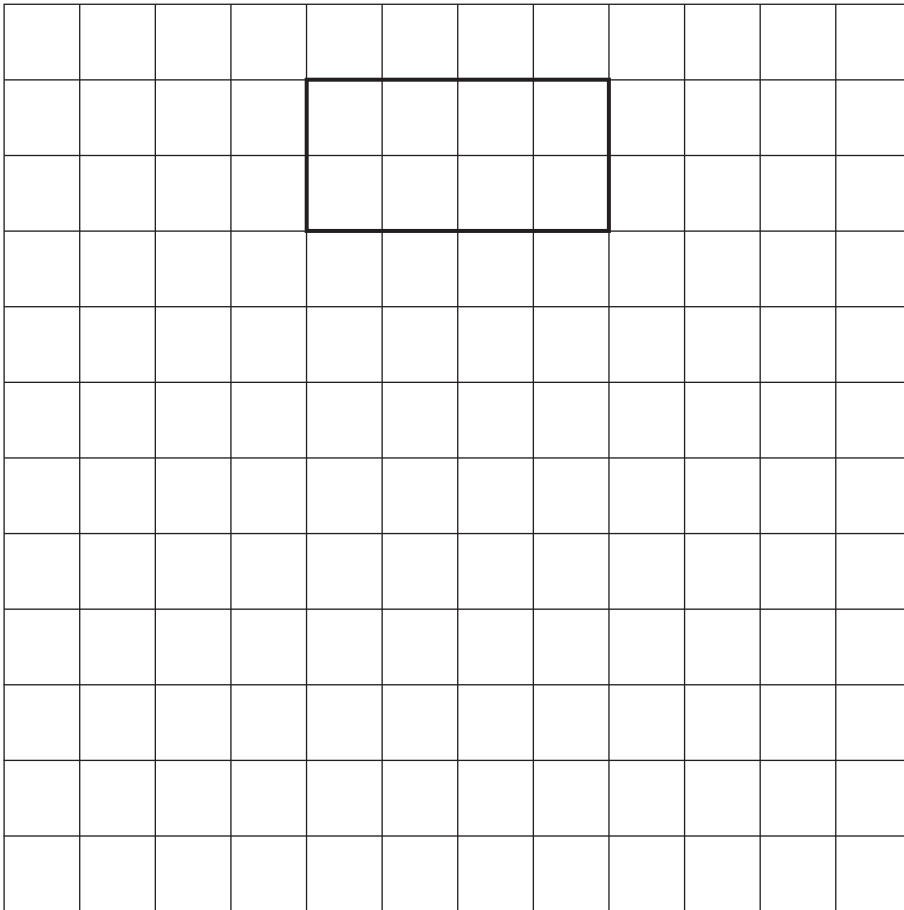
Turn over ►



- 9 The diagram shows a cuboid.



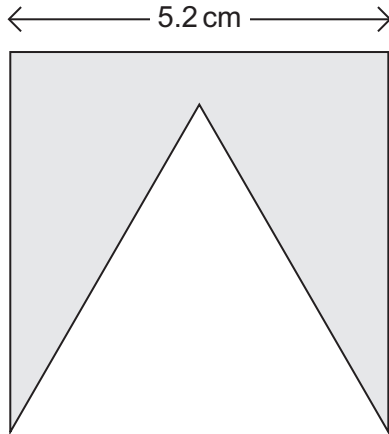
On the centimetre grid, complete a possible net for the cuboid.
One face has been drawn for you.



(3 marks)



10 This shape is made by cutting out an equilateral triangle from a square.



Not drawn
accurately

Work out the perimeter of the shape.

.....
.....

Answer cm (2 marks)

Turn over for the next question




***11** The diagram shows two different sweets and their weights.



8 grams

A



12 grams

B

The sweets are sold in bags.
Each bag contains 120 grams of sweets.

11 (a) How many of sweet A are needed to fill one bag?

.....

Answer (2 marks)

11 (b) A 120-gram bag is filled with the same number of each sweet.

How many of each sweet are in the bag?

.....
.....
.....
.....

Answer (3 marks)



11 (c) The 120-gram bags are put into boxes.
The total weight of the bags in each box is 6 kilograms.

How many bags are in each box?

.....
.....
.....
.....
.....

Answer (3 marks)

11 (d) The 120-gram bags are sold for £1.99 each.
The sweets are also sold loose at 100 grams for £1.59

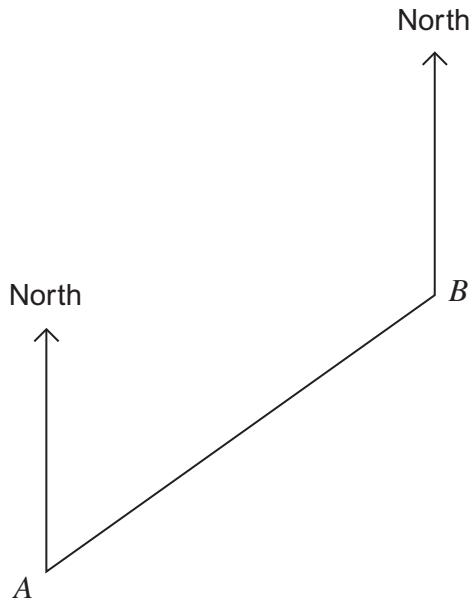
Which is better value?
You **must** show your working.

.....
.....
.....
.....
.....
.....
.....

(3 marks)



12 A and B are two towns.



12 (a) Measure the bearing of B from A.

Answer° (1 mark)

12 (b) Natasha says, "To work out a bearing in the opposite direction,
add 180° to the original bearing."

Use your answer to part (a) and Natasha's method to work out the bearing of A from B.

.....
.....

Answer° (2 marks)

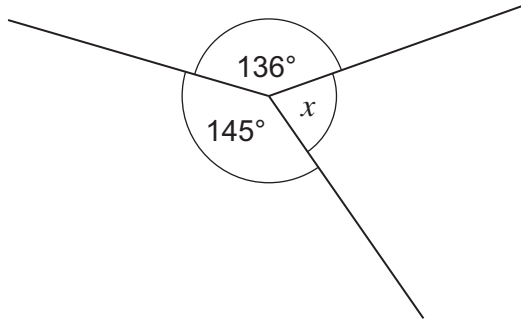
12 (c) Give a reason why Natasha's method can only be used for bearings up to 180°.

.....
.....

(1 mark)



13 (a) The diagram shows three angles at a point.



Not drawn accurately

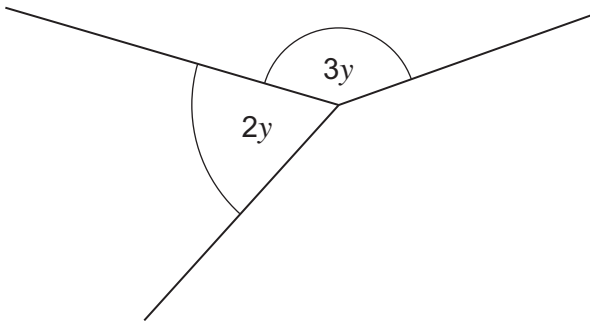
Work out the value of x .

.....

.....

Answer degrees (2 marks)

13 (b) This diagram also shows three angles at a point.



Not drawn accurately

Work out the missing angle in terms of y .
Give your answer in its simplest form.

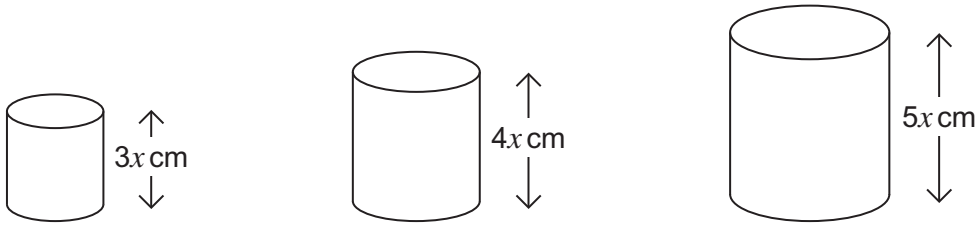
.....

.....

Answer degrees (2 marks)



14 Three cylinders are shown.



The sum of the three heights is 48 cm.

Work out the height of the tallest cylinder.

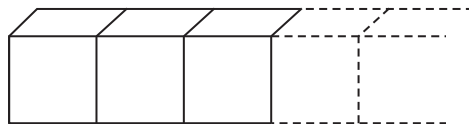
.....

.....

.....

Answer cm (4 marks)

15 A shape is made by joining centimetre cubes together in a row as shown.



The surface area of the shape is 34 cm^2 .

Work out the number of cubes used to make the shape.

.....

.....

.....

Answer (3 marks)

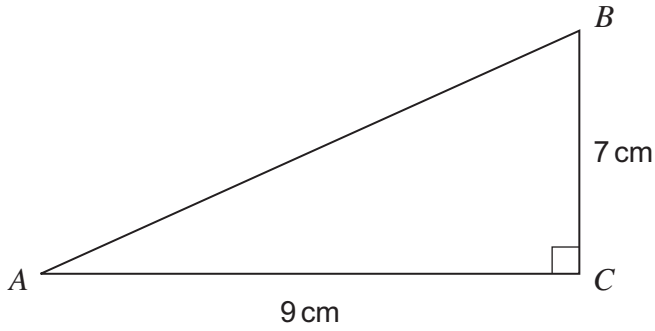


16 Work out the area of a circle of radius 6 m.

.....
.....
.....

Answer m² (2 marks)

17 Work out length *AB* as a decimal.



Not drawn
accurately

.....
.....
.....

Answer cm (3 marks)

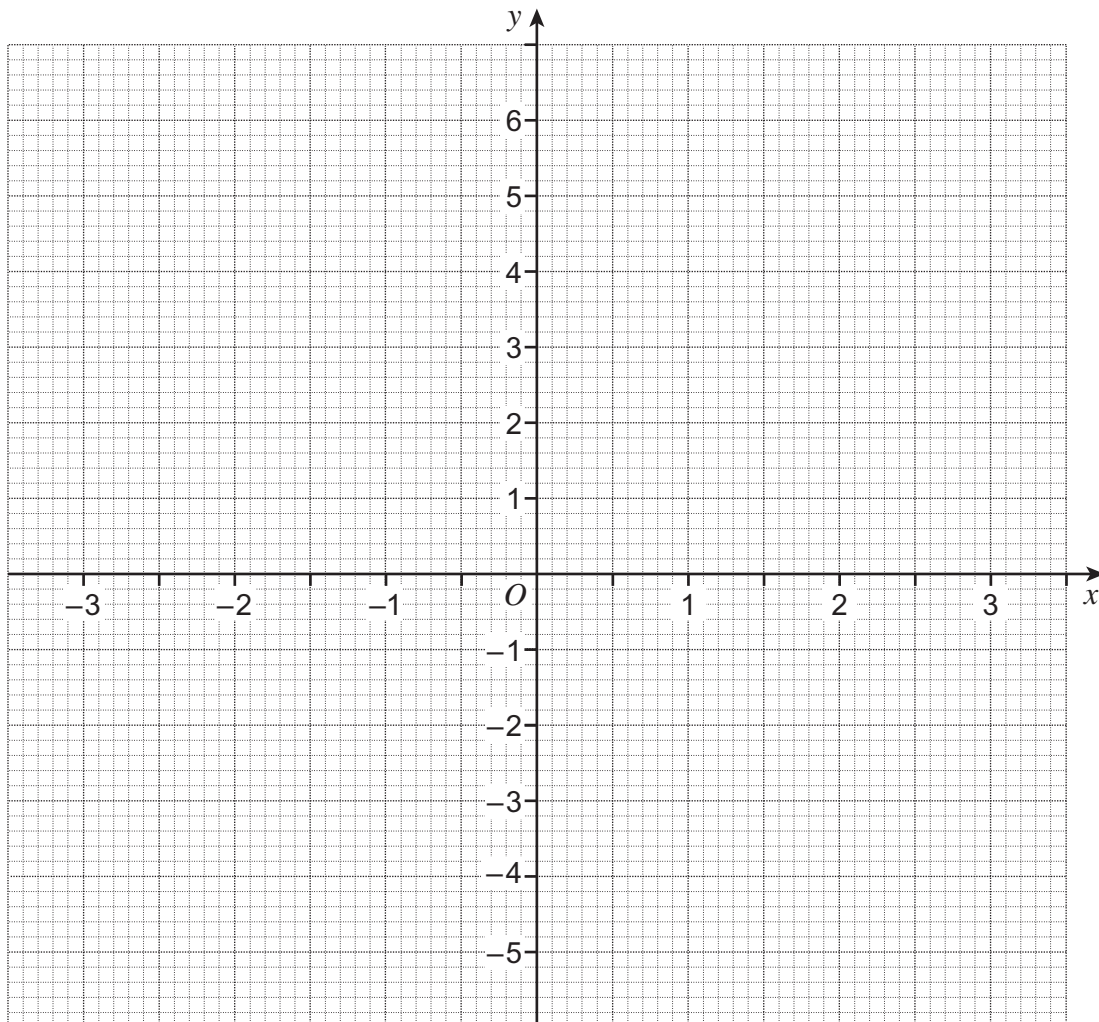


18 (a) Complete the table of values for $y = x^2 - 4$

x	-3	-2	-1	0	1	2	3
y	5	0	-3			0	

(2 marks)

18 (b) Draw the graph of $y = x^2 - 4$ for values of x from -3 to 3 .



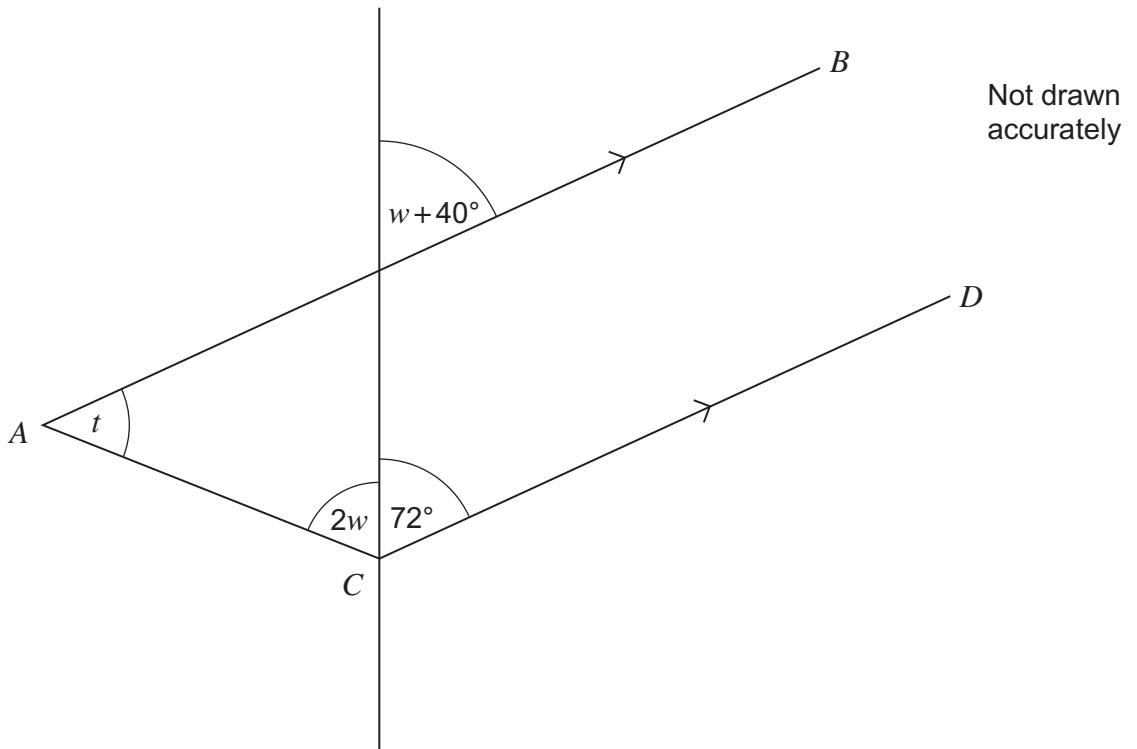
(3 marks)



18 (c) Draw the graph of $y = 2$ on the grid opposite for values of x from -3 to 3 . (1 mark)

18 (d) Write down the x -coordinates of the points of intersection of the two graphs.
Answer and (2 marks)

19 AB is parallel to CD .



Work out the value of t .

.....

.....

.....

.....

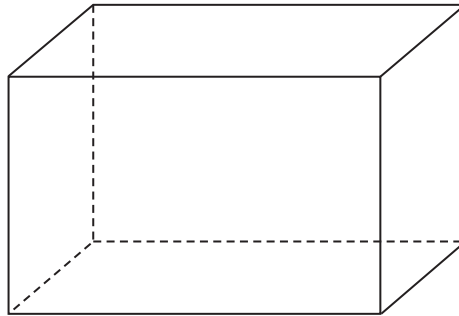
.....

Answer degrees (5 marks)



20

The total length of the 12 edges of a cuboid is 52 cm.
The length, width and height are all different.



Work out possible dimensions of the cuboid.

.....

.....

.....

.....

.....

Length = cm

Width = cm

Height = cm (3 marks)

END OF QUESTIONS



There are no questions printed on this page

**DO NOT WRITE ON THIS PAGE
ANSWER IN THE SPACES PROVIDED**



There are no questions printed on this page

**DO NOT WRITE ON THIS PAGE
ANSWER IN THE SPACES PROVIDED**

