

Write your name here

Surname

Other names

Centre Number

Candidate Number

**Edexcel GCSE**

**Manufacturing (Double Award)  
Engineering (Double Award)**

**Unit 3: Application of Technology in Engineering and Manufacturing  
Paper D: Engineering Fabrication**

Monday 14 May 2012 – Afternoon  
**Time: 1 hour 30 minutes**

Paper Reference

**5EM03/3D**

**You must have:**

Notes and sketches collected during your pre-release research.  
Ruler, pen, pencil, rubber.

Total Marks

### Instructions

- Use **black** ink or ball-point pen.
- **Fill in the boxes** at the top of this page with your name, centre number and candidate number.
- Answer **all** the questions.
- Answer the questions in the spaces provided  
– *there may be more space than you need.*

### Information

- The total mark for this paper is 110.
- The marks for **each** question are shown in brackets  
– *use this as a guide as to how much time to spend on each question.*
- Questions labelled with an **asterisk** (\*) are ones where the quality of your written communication will be assessed  
– *you should take particular care on these questions with your spelling, punctuation and grammar as well as the clarity of expression.*

### Advice

- Read each question carefully before you start to answer it.
- Keep an eye on the time.
- Try to answer every question.
- Check your answers if you have time at the end.

Turn over ►

P40525A

©2012 Pearson Education Ltd.

6/4/6/4/3



**PEARSON**

## SECTION A

Answer ALL questions.

Some questions must be answered with a cross . If you change your mind about an answer, put a line through the box  and then mark your new answer with a cross .

1 All of the products listed below belong to a manufacturing sector.

(a) Put a cross  in the **two** boxes below where the products belong to the **engineering fabrication** sector.

(2)

MP3 player	<input type="checkbox"/>
Shower gel	<input type="checkbox"/>
Trampoline frame	<input type="checkbox"/>
Swimwear	<input type="checkbox"/>
Adjustable spanner	<input type="checkbox"/>
Smartphone	<input type="checkbox"/>

(b) Put a cross  in the **two** boxes below where the products belong to the **engineering fabrication** sector.

(2)

Padlock	<input type="checkbox"/>
Nail varnish	<input type="checkbox"/>
Photographs	<input type="checkbox"/>
Scriber	<input type="checkbox"/>
Laptop computer	<input type="checkbox"/>
Logbook	<input type="checkbox"/>

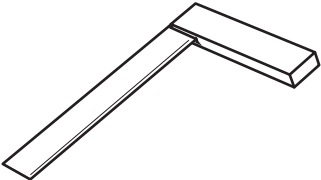

(Total for Question 1 = 4 marks)



2 The tables below show some tools/equipment used during the manufacture of engineering fabrication products.

(a) Complete Table 1 by naming each tool/equipment.


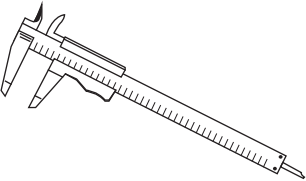
(2)

Tool/equipment	Tool/equipment name	Use
		To gauge right angles and mark out material.
		To make round holes of a known size in metal.

**Table 1**

(b) Complete Table 2 by explaining what each tool/equipment is used for.

(4)

Tool/equipment	Tool/equipment name	Use
	Flat file	
	Verner calipers	

**Table 2**

**(Total for Question 2 = 6 marks)**



**3** Draw a straight line to link each **Term** listed below to the most appropriate **Key Area**.

Each Key Area can be used more than once.

**Term**

**Key Area**

Programmable logic  
controllers (PLCs)

Anodised aluminium

Databases

Pick and place robots

Glass reinforced plastic (GRP)

Word processing

Acrylic

Modern materials

Control technology

Information and  
communication technology  
(ICT)

**(Total for Question 3 = 7 marks)**



4 (a) Lawn sprinklers belong to the engineering fabrication sector and use a variety of modern materials in their manufacture.

(i) Name **two other** products from this sector that use a polymer in their manufacture.

(2)

Product 1

---

Product 2

---

(ii) Name a polymer used in **Product 1**.

(1)

---

(iii) Explain **two** different reasons why this polymer is used in **Product 1**.

(4)

1 .....

---

---

---

---

2 .....

---

---

---

---



(b) Systems and control technology is used in the engineering fabrication sector.

- (i) Name **one** stage in the manufacture of engineering fabrication products where systems and control technology is used.

(1)

- (ii) Explain **one** advantage to a **manufacturer** of using systems and control technology at this stage.

(2)

---

**(Total for Question 4 = 10 marks)**

---



5 Computer-aided design (CAD) and computer-aided manufacture (CAM) are both used by manufacturers of engineering fabrication products.

(a) Describe **three** ways that CAD contributes to the efficiency of new product development.

(6)

1 .....

.....

.....

.....

2 .....

.....

.....

.....

3 .....

.....

.....

.....

(b) Explain why a **manufacturer** would use CAM rather than traditional methods.

(2)

.....

.....

.....

.....

**(Total for Question 5 = 8 marks)**



6 Communication technology is widely used by manufacturers.

(a) (i) Describe the term 'electronic mail' (email).

(2)

.....

.....

.....

(ii) Explain **one disadvantage** to a **manufacturer** of using email.

(2)

.....

.....

.....

(b) Video conferencing is also an example of communication technology.

(i) Name the traditional method it has replaced.

(1)

.....

(ii) Explain **two advantages** to a **manufacturer** of using video conferencing.

(4)

1 .....

.....

.....

.....

2 .....

.....

.....

.....

**(Total for Question 6 = 9 marks)**





**7** Handling information and data is an essential feature in engineering fabrication companies.

(a) Explain **one** benefit information and data handling systems have on production efficiency.

(2)

.....

.....

.....

.....

(b) Explain **two** benefits information and data handling systems have on packaging and dispatch.

(4)

1 .....

.....

.....

.....

2 .....

.....

.....

.....

**(Total for Question 7 = 6 marks)**

---

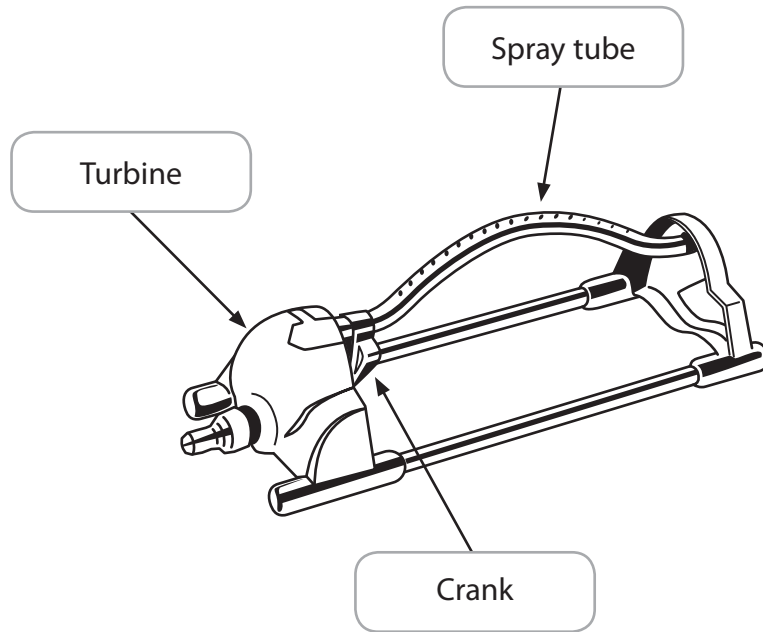
**TOTAL FOR SECTION A = 50 MARKS**



## SECTION B

Answer ALL questions in section B with reference to the manufacture of mass produced lawn sprinklers.

The diagram below shows a **lawn sprinkler**.



8 Describe, using notes and sketches:

(a) the function of the turbine

(3)

Turbine

(b) the function of the spray tube

(3)

Spray tube



(c) the function of the crank

(3)

Crank

---

**(Total for Question 8 = 9 marks)**



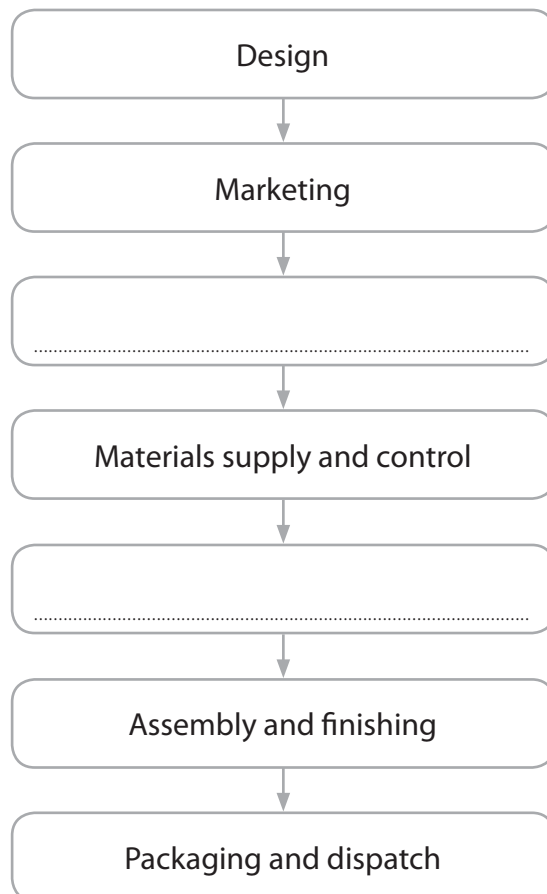
**BLANK PAGE**



9 (a) The incomplete flow diagram below indicates some of the main stages in manufacturing lawn sprinklers.

(i) Complete the flow diagram by adding the **two** missing main stages in manufacturing lawn sprinklers.

(2)



(ii) State the stage where the lawn sprinklers would be put together.

(1)

Stage

---



(b) Describe the following **two** stages in the manufacture of lawn sprinklers.

(i) Marketing

(3)

.....

.....

.....

.....

.....

.....

(ii) Materials supply and control

(3)

.....

.....

.....

.....

.....

.....

**(Total for Question 9 = 9 marks)**



10 (a) State a specific metal commonly used for the spray tube of the lawn sprinkler. (1)

(b) Injection moulding is a process used to produce some parts of the lawn sprinkler.

(i) State **three** production processes, other than injection moulding, used during the manufacture of lawn sprinklers. (3)

Process 1

Process 2

Process 3

(ii) Explain why injection moulding is a suitable process for making the turbine. (3)





(c) Explain how the development of modern materials has helped the manufacturer of lawn sprinklers improve their products.

(3)

.....

.....

.....

.....

.....

.....

.....

**(Total for Question 10 = 10 marks)**



11 Quality control and automation are used in the manufacture of lawn sprinklers.

(a) (i) Describe **two** examples of quality control used at the packaging and dispatch stage during the manufacture of lawn sprinklers.

(4)

1 .....

.....

.....

.....

2 .....

.....

.....

.....

(ii) Describe **two** examples of automation used at the packaging and dispatch stage during the manufacture of lawn sprinklers.

(4)

1 .....

.....

.....

.....

2 .....

.....

.....

.....



(b) Explain **one** advantage to the **manufacturer** of applying quality control during automated stages of manufacture.

(2)

.....

.....

.....

.....

**(Total for Question 11 = 10 marks)**



**12 (a)** A manufacturer of lawn sprinklers has changed their working environment from traditional to modern technology as a result of high product demand.

Explain the impact of these changes for:

(i) employees

**(3)**

.....

.....

.....

.....

.....

.....

.....

(ii) the global environment

**(3)**

.....

.....

.....

.....

.....

.....

.....



(b) Information and communication technology (ICT) plays an important role in the manufacture of lawn sprinklers.

(i) State **two** uses of ICT at the marketing stage.

(2)

1 .....

2 .....

(ii) Describe **one** use of ICT at the assembly and finishing stage.

(2)

.....  
.....  
.....

(iii) Explain **one** benefit of using ICT to the distributor of lawn sprinklers.

(2)

.....  
.....  
.....

**(Total for Question 12 = 12 marks)**



**13** Control technology is an essential feature in the manufacture of lawn sprinklers.

Explain the impact of control technology on safety when manufacturing.

.....

.....

.....

.....

.....

.....

.....

.....

.....

.....

.....

.....

.....

.....

**(Total for Question 13 = 4 marks)**

---





**BLANK PAGE**

