

**GENERAL CERTIFICATE OF SECONDARY EDUCATION
INFORMATION AND COMMUNICATION
TECHNOLOGY**

2357/02

Paper 1 (Higher Tier)

Candidates answer on the Question Paper

OCR Supplied Materials:

None

Other Materials Required:

None

**Monday 11 January 2010
Afternoon**

Duration: 1 hour 15 minutes



Candidate Forename		Candidate Surname	
--------------------	--	-------------------	--

Centre Number						Candidate Number				
---------------	--	--	--	--	--	------------------	--	--	--	--

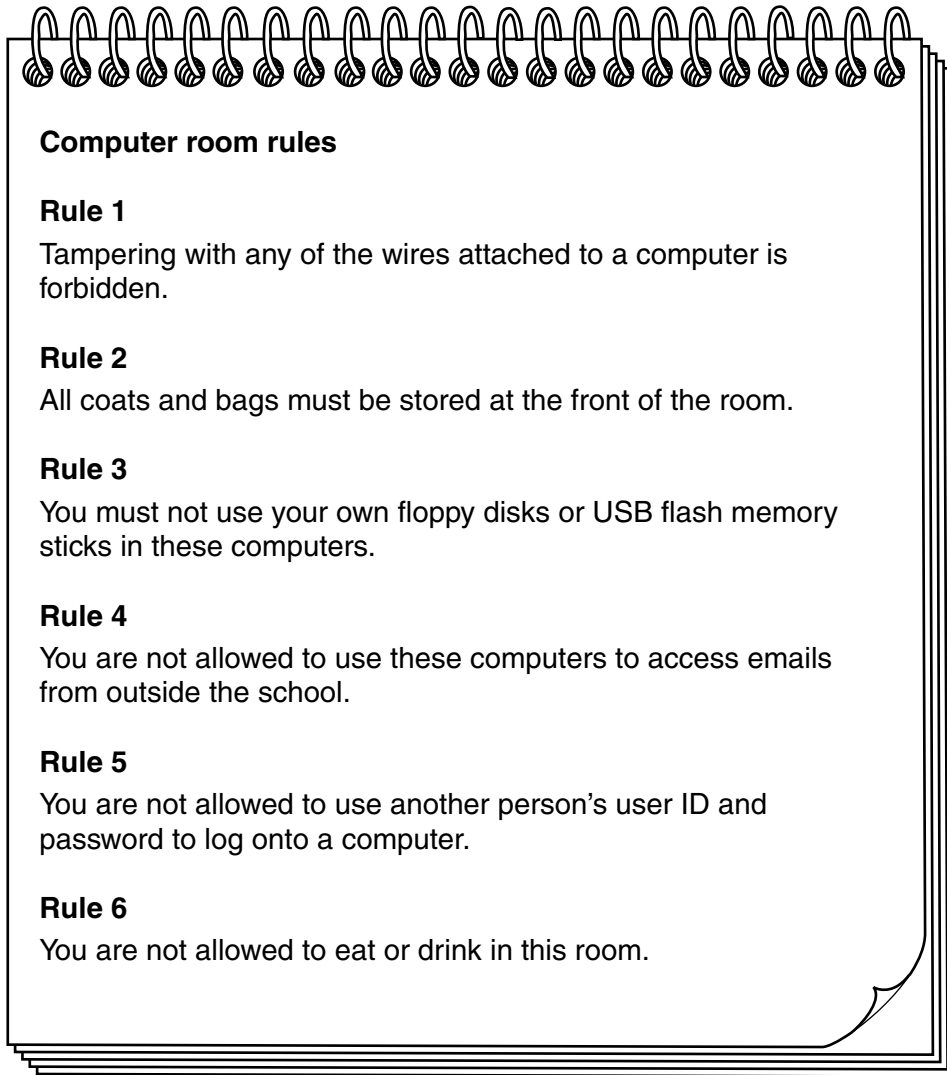
INSTRUCTIONS TO CANDIDATES

- Write your name clearly in capital letters, your Centre Number and Candidate Number in the boxes above.
- Use black ink. Pencil may be used for graphs and diagrams only.
- Read each question carefully and make sure that you know what you have to do before starting your answer.
- Answer **all** the questions.
- Do **not** write in the bar codes.
- Write your answer to each question in the space provided.

INFORMATION FOR CANDIDATES

- The number of marks is given in brackets [] at the end of each question or part question.
- The total number of marks for this paper is **60**.
- No marks will be awarded for using brand names of software packages or hardware.
- This document consists of **12** pages. Any blank pages are indicated.

1 A teacher has written down some of the rules for a school computer room.



For each of rules 1 to 5, give **one** reason why it should be obeyed by users of the computers in the room. Your reason must be different for each rule.

Rule 1

.....

Rule 2.....

.....

Rule 3.....

.....

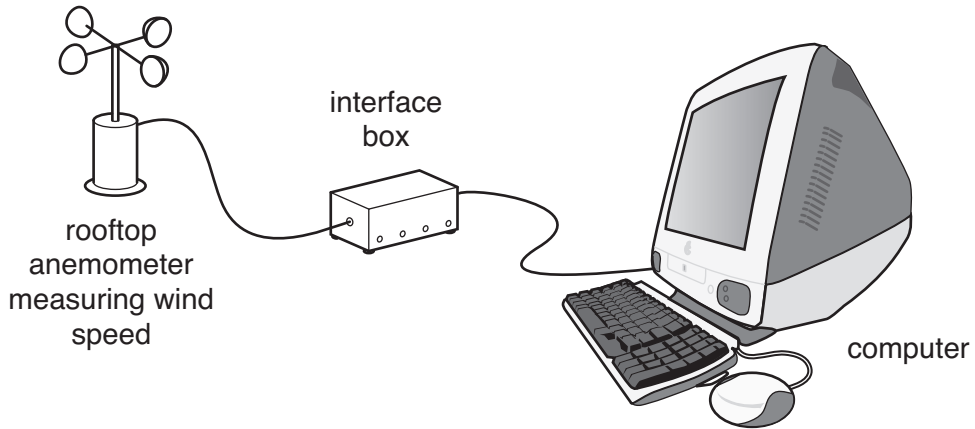
Rule 4.....

.....

Rule 5.....

..... [5]

- 2 At 12 o'clock each day, a computer system records the wind speed measured by a rooftop anemometer.



- (a) Give **one** advantage of using a computer system in this way rather than collecting the data manually.

.....
..... [1]

- (b) The anemometer has to be connected to an interface box rather than directly to the computer.

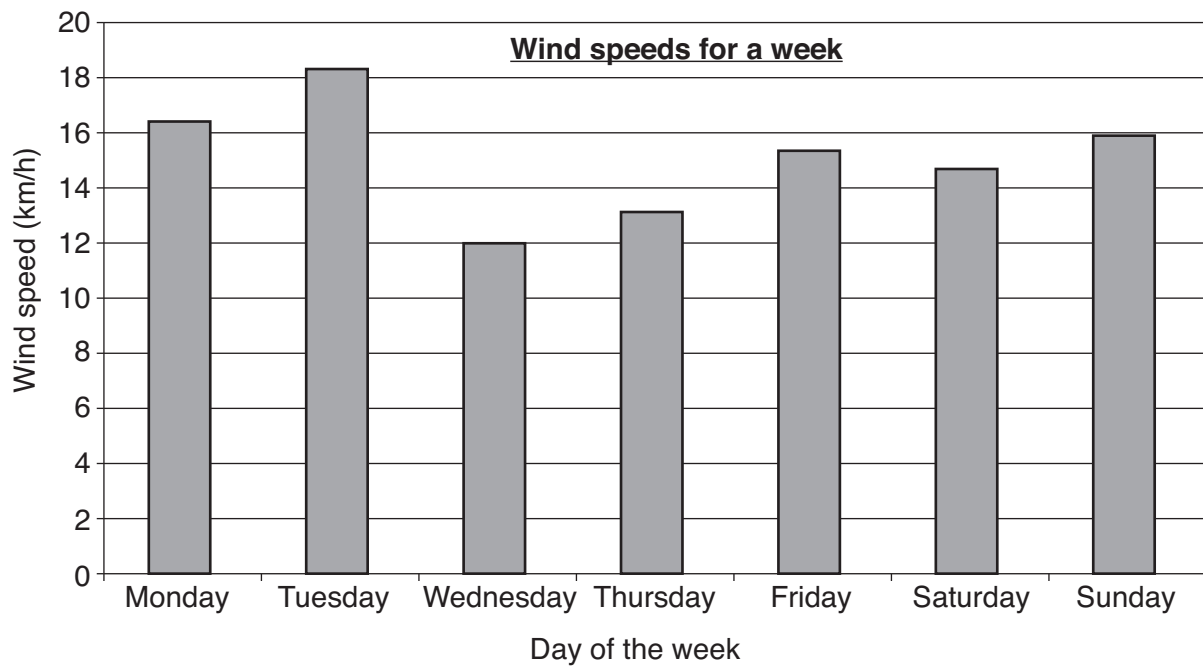
Why is this necessary?

.....
.....
.....
..... [2]

The results of one week's monitoring are imported into this spreadsheet.

	A	B	C
1	Day of the week	Wind speed (Km/h)	
2	Monday	16.4	
3	Tuesday	18.3	
4	Wednesday	12.1	
5	Thursday	13.2	
6	Friday	15.4	
7	Saturday	14.7	
8	Sunday	15.9	
9			
10	Average (Km/h)		
11			
12			

The following chart has been made from the data in the spreadsheet.



(c) Describe how spreadsheet software could have been used to make this chart from the data.

.....
.....
.....
.....
.....
.....
.....
..... [4]

3 Rinzen uses her laptop rather than her desktop computer for her school work.

(a) Give **one** advantage of using her laptop.

.....
..... [1]

(b) Give **two** disadvantages of using her laptop.

Disadvantage 1

Disadvantage 2

..... [2]

4 Graham is creating a slide show presentation of photographs of his family.

Give **one** hardware device Graham could use to import a photograph into his computer and how he could use it.

Device

How the image could be imported into his computer.

.....

.....

.....

.....

.....

.....

.....

..... [4]

5 Email messages are cheaper to send and can arrive at the recipient quicker than ordinary post.

(a) State **four** other advantages of using email.

Advantage 1

.....

Advantage 2

.....

Advantage 3

.....

Advantage 4

..... [4]

(b) State **one** disadvantage of using email.

.....

..... [1]

6 Many young people use chat rooms on the internet.

Give **four** precautions that young people should take when using a chat room.

Precaution 1

.....

Precaution 2

.....

Precaution 3

.....

Precaution 4

..... [4]

7 Tracey wants to use the internet to find information about mobile phones that have cameras and can play music files.

Explain how Tracey could use a search engine on the internet to find this information.

.....

.....

.....

.....

.....

.....

.....

..... [4]

8 A company allows its employees to work away from their main office.

(a) Explain how ICT has made this possible.

.....
.....
.....
.....
.....
.....
.....
.....
.....
.....
.....
.....
.....
.....
.....
.....
.....
.....
.....
..... [6]

(b) Describe **two** disadvantages to the company of allowing its employees to work away from the main office.

Disadvantage 1
.....
Disadvantage 2
..... [4]

- 9 Students in a school have been issued with electronic identity cards. Each card holds the student's details on a microchip and can be used to pay for meals in the school canteen.

Describe the advantages to the school and students of the use of the cards in the canteen.

.....

.....

.....

.....

.....

.....

.....

.....

..... [4]

Turn over for next question

10 A company selling mobile phones in the UK has its customer support centre in another country.

(a) Describe the advantages to the **company** of having the support centre in a different country.

.....
.....
.....
.....
.....
.....
.....
..... [4]

(b) Discuss the implications to the **customer** of having the support centre in a different country.

.....
.....
.....
.....
.....
.....
.....
.....
.....
..... [5]

PLEASE DO NOT WRITE ON THIS PAGE



Copyright Information

OCR is committed to seeking permission to reproduce all third-party content that it uses in its assessment materials. OCR has attempted to identify and contact all copyright holders whose work is used in this paper. To avoid the issue of disclosure of answer-related information to candidates, all copyright acknowledgements are reproduced in the OCR Copyright Acknowledgements Booklet. This is produced for each series of examinations, is given to all schools that receive assessment material and is freely available to download from our public website (www.ocr.org.uk) after the live examination series.

If OCR has unwittingly failed to correctly acknowledge or clear any third-party content in this assessment material, OCR will be happy to correct its mistake at the earliest possible opportunity.

For queries or further information please contact the Copyright Team, First Floor, 9 Hills Road, Cambridge CB2 1GE.

OCR is part of the Cambridge Assessment Group; Cambridge Assessment is the brand name of University of Cambridge Local Examinations Syndicate (UCLES), which is itself a department of the University of Cambridge.