

**GENERAL CERTIFICATE OF SECONDARY EDUCATION
INFORMATION AND COMMUNICATION
TECHNOLOGY**

2359/01

Paper 3
(Foundation Tier)


**Wednesday 14 January 2009
Morning**

Duration: 1 hour

Candidates answer on the question paper

OCR Supplied Materials:
None

Other Materials Required:
None



| | | | |
|--------------------|--|-------------------|--|
| Candidate Forename | | Candidate Surname | |
|--------------------|--|-------------------|--|

| | | | | | | | | | | |
|---------------|--|--|--|--|--|------------------|--|--|--|--|
| Centre Number | | | | | | Candidate Number | | | | |
|---------------|--|--|--|--|--|------------------|--|--|--|--|

INSTRUCTIONS TO CANDIDATES

- Write your name clearly in capital letters, your Centre Number and Candidate Number in the boxes above.
- Use black ink. Pencil may be used for graphs and diagrams only.
- Read each question carefully and make sure that you know what you have to do before starting your answer.
- Answer **all** the questions.
- Do **not** write in the bar codes.
- Write your answer to each question in the space provided, however additional paper may be used if necessary.

INFORMATION FOR CANDIDATES

- The number of marks is given in brackets [] at the end of each question or part question.
- The total number of marks for this paper is **60**.
- This document consists of **8** pages. Any blank pages are indicated.

1 Tick **one** box in each row to show whether the statement is true or false.

| Statement | True (✓) | False (✓) |
|--|-------------|--------------|
| A CAD package is used to create a database | | |
| A graphics tablet is an output device | | |
| A spreadsheet is used to control a patient's temperature in hospital | | |
| A web browser is used to view pages on the internet | | |
| A word processor is used to produce letters | | |

[5]

2 Circle **two** storage media.

DVD

floppy disk

keyboard

plotter

printer

scanner

[2]

3 Draw **five** lines to match each task below to the most suitable data collection method.

| Task |
|--|
| choose from a set of options at a POS terminal |
| input data from bank cheques |
| input multiple-choice responses from an exam paper |
| read data from the label of a tin of fruit |
| scan text for use in a word processor |

| Data collection method |
|------------------------|
| Bar-code reader |
| MICR |
| OCR |
| OMR |
| Touch screen |

[5]

- 4 Tick **one** box in each row to show whether the task is part of the Analysis phase or the Design phase of the systems life cycle.

| Task | Analysis (✓) | Design (✓) |
|--|-----------------|---------------|
| Choosing any validation or verification required | | |
| Identifying the problem | | |
| Outlining the user requirements | | |
| Specifying report layouts for the new system | | |

[4]

- 5 Tick **three** applications which use on-line processing.

| | |
|---------------------------------------|---|
| | ✓ |
| A computerised theatre booking system | |
| Printing payslips | |
| Processing cheques at a bank | |
| Processing electricity bills | |
| Purchasing an item at a POS terminal | |
| Withdrawing money from an ATM | |

[3]

6 Complete each sentence below using **one** item from the list.

Buying on the internet

The Computer Misuse Act

The Data Protection Act

Encryption

A firewall

..... makes the spreading of viruses illegal.

..... prevents unauthorised access to computer systems.

..... allows you to look at any data that an organisation might be keeping about you.

..... changes data so that it is unintelligible to unauthorised users.

..... has caused some high street shops to close.

[5]

7 When a book is borrowed from a library the librarian needs to input details from the borrower's card.

(i) Identify an input device, other than a keyboard, which would be most suitable for entering these details.

..... [1]

(ii) Give **two** reasons why this method is most suitable.

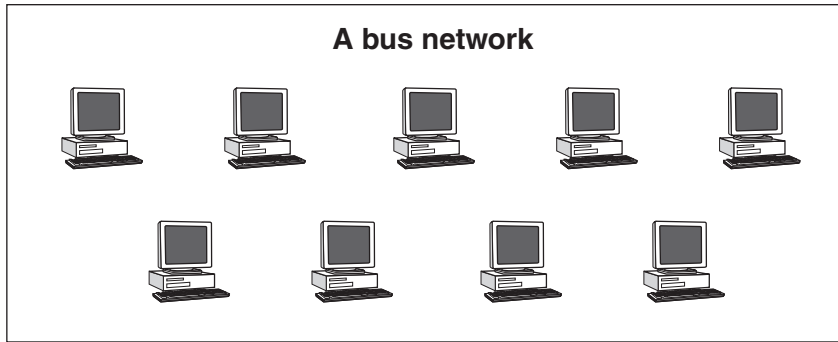
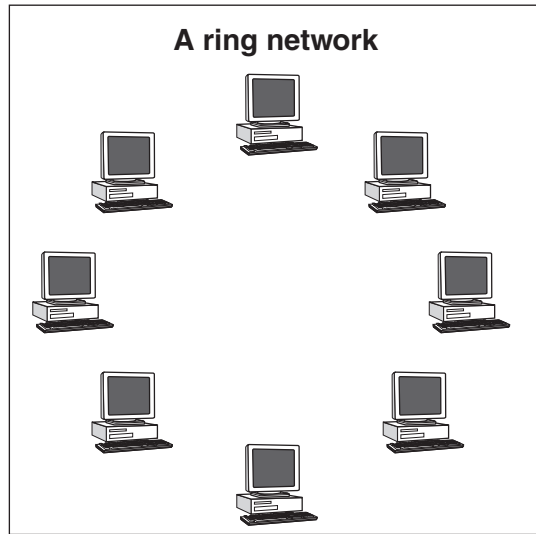
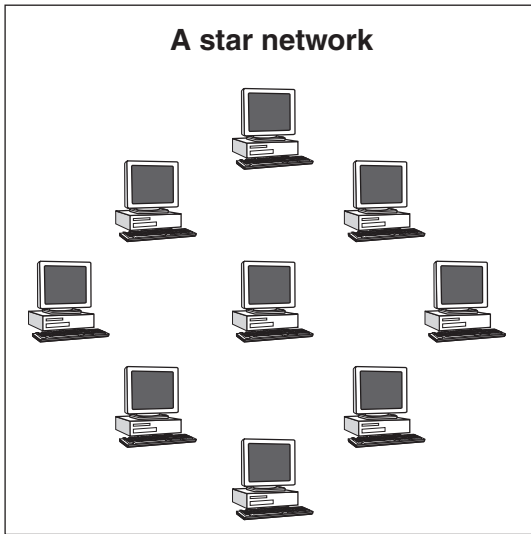
Reason 1

.....

Reason 2

..... [2]

8 (a) Draw in the lines in the following diagrams to show



[3]

(b) Identify the device which is essential to the operation of a star network.

..... [1]

9 A doctor uses an expert system to help with the diagnosis of illnesses.

Identify **two** other applications which make use of expert systems.

Application 1

.....

Application 2

..... [2]

13 A car manufacturer has introduced the use of robots on its production lines.

(a) Describe **four** ways the workers have been affected by the use of robots.

1

.....

2

.....

3

.....

4

..... [4]

(b) Identify **two** tasks that the robots might carry out.

Task 1

.....

Task 2

..... [2]

(c) Give **one** advantage and **one** disadvantage to the company of using robots on its production lines.

Advantage

.....

Disadvantage

..... [2]

14 Explain why a club might use mailmerge to produce letters to send to its members rather than typing each letter individually.

.....

.....

.....

..... [2]

15 An ICT system is to be introduced to deal with examination marks. Before the system is implemented it has to be tested.

Explain what is meant by normal test data, abnormal test data and extreme test data, using examples for an examination marked out of 60.

Normal test data

.....

.....

.....

Abnormal test data

.....

.....

.....

Extreme test data

.....

.....

..... [6]



Permission to reproduce items where third-party owned material protected by copyright is included has been sought and cleared where possible. Every reasonable effort has been made by the publisher (OCR) to trace copyright holders, but if any items requiring clearance have unwittingly been included, the publisher will be pleased to make amends at the earliest possible opportunity.

OCR is part of the Cambridge Assessment Group. Cambridge Assessment is the brand name of University of Cambridge Local Examinations Syndicate (UCLES), which is itself a department of the University of Cambridge.