

Surname		Other Names	
Centre Number		Candidate Number	
Candidate Signature			

Leave blank
-------------

General Certificate of Secondary Education  
June 2004



**BIOLOGY (HUMAN)  
FOUNDATION TIER**

**3415/F**

Monday 7 June 2004 1.30 pm to 3.45 pm

**F**

**In addition to this paper you will require:**  
a ruler.  
You may use a calculator.

Time allowed: 2 hours 15 minutes

**Instructions**

- Use blue or black ink or ball-point pen.
- Fill in the boxes at the top of this page.
- Answer **all** questions in the spaces provided.
- Do all rough work in this book. Cross through any work you do not want marked.

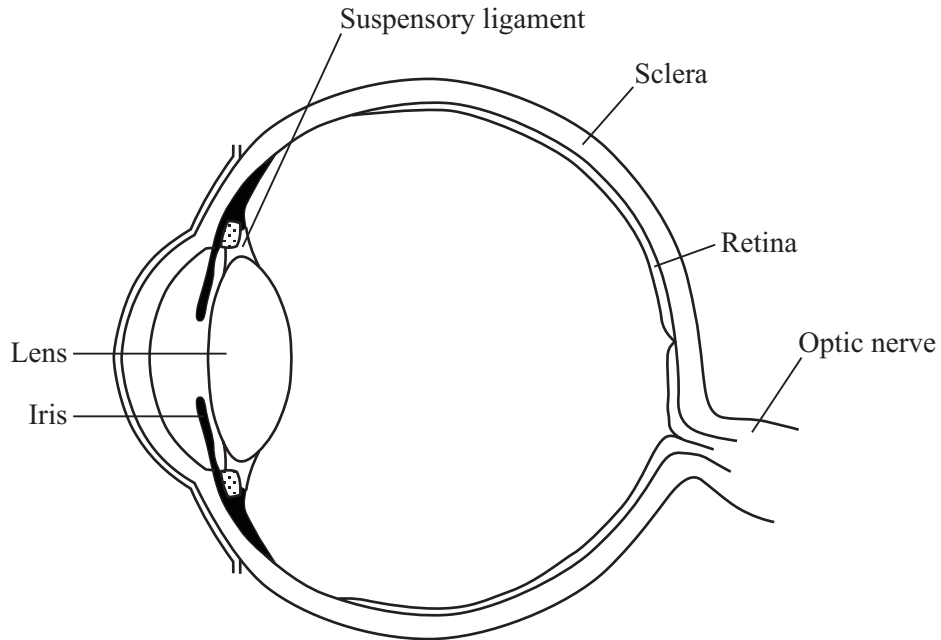
**Information**

- The maximum mark for this paper is 135.
- Mark allocations are shown in brackets.
- You are reminded of the need for good English and clear presentation in your answers.

For Examiner's Use			
Number	Mark	Number	Mark
1		15	
2		16	
3		17	
4		18	
5		19	
6		20	
7		21	
8		22	
9		23	
10		24	
11			
12			
13			
14			
Total (Column 1)	→		
Total (Column 2)	→		
TOTAL			
Examiner's Initials			

Answer **all** questions in the spaces provided.

1 The diagram shows the structure of the eye.



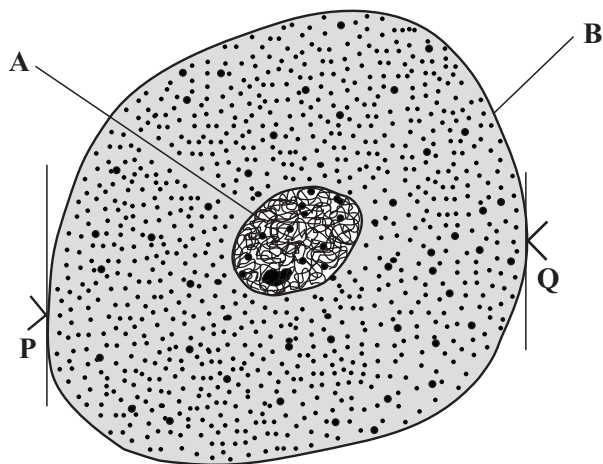
Complete the table by writing in the correct parts of the eye. Choose your answers from the labels on the diagram.

Function	Part of the eye
Contains receptor cells for light	
Carries impulses to the brain	
Controls the amount of light reaching the back of the eye	
Forms a tough outer covering for the eye	
Attaches the lens to the ciliary muscles	

(5 marks)

5

2 The diagram shows an animal cell.



(a) (i) Name structures **A** and **B** by choosing the correct words from the box.

cell membrane	cell wall	cytoplasm	nucleus	vacuole
---------------	-----------	-----------	---------	---------

Structure **A** .....

Structure **B** .....

(2 marks)

(ii) Which structure named in the box controls the passage of substances in and out of the cell?

.....

(1 mark)

(b) Distance **P** to **Q** on the diagram is the diameter of the cell. This distance was measured on three cells using a microscope. The results were as follows:

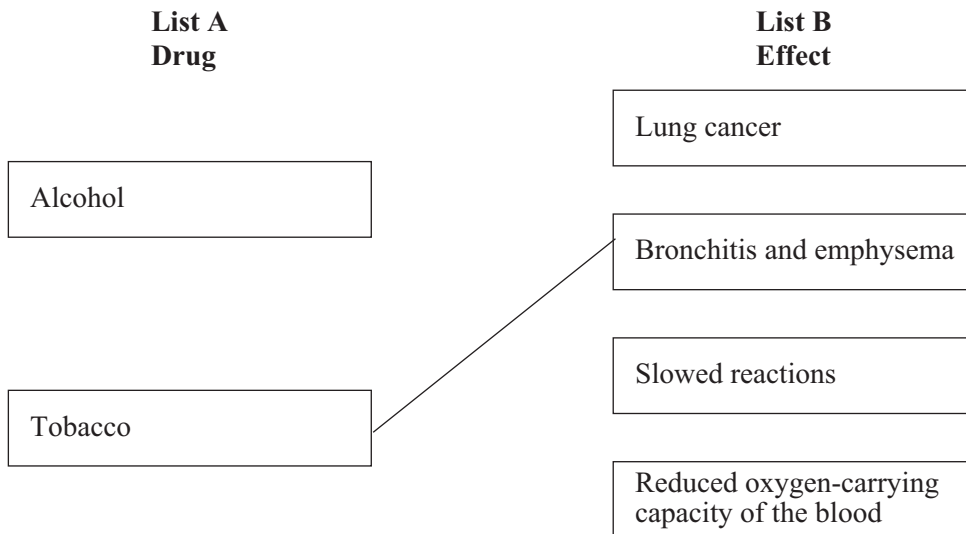
- cell 1: 63 micrometres
- cell 2: 78 micrometres
- cell 3: 69 micrometres

Calculate the average diameter of these cells. Show clearly how you work out your final answer.

.....  
.....

Average diameter = ..... micrometres  
(2 marks)

- 3 (a) List A gives the names of two drugs, alcohol and tobacco. List B gives four effects of these drugs. Draw straight lines to link the drugs with the effects that they cause. (An example line has already been drawn for you.)



(3 marks)

- (b) The smoking of tobacco is addictive. Name the addictive substance found in tobacco.

.....  
(1 mark)

- (c) The table shows the death rates among 40 – 60 year old cigarette smokers compared with non-smokers in the same age group.

Age at which smoking started in years	Death rate compared with non-smokers
Non-smokers	1.0
Under 15	2.3
15 – 19	2.2
20 – 24	1.6
25+	1.4

Using information in the table, what is the effect of smoking from an early age on the death rate among 40 – 60 year olds?

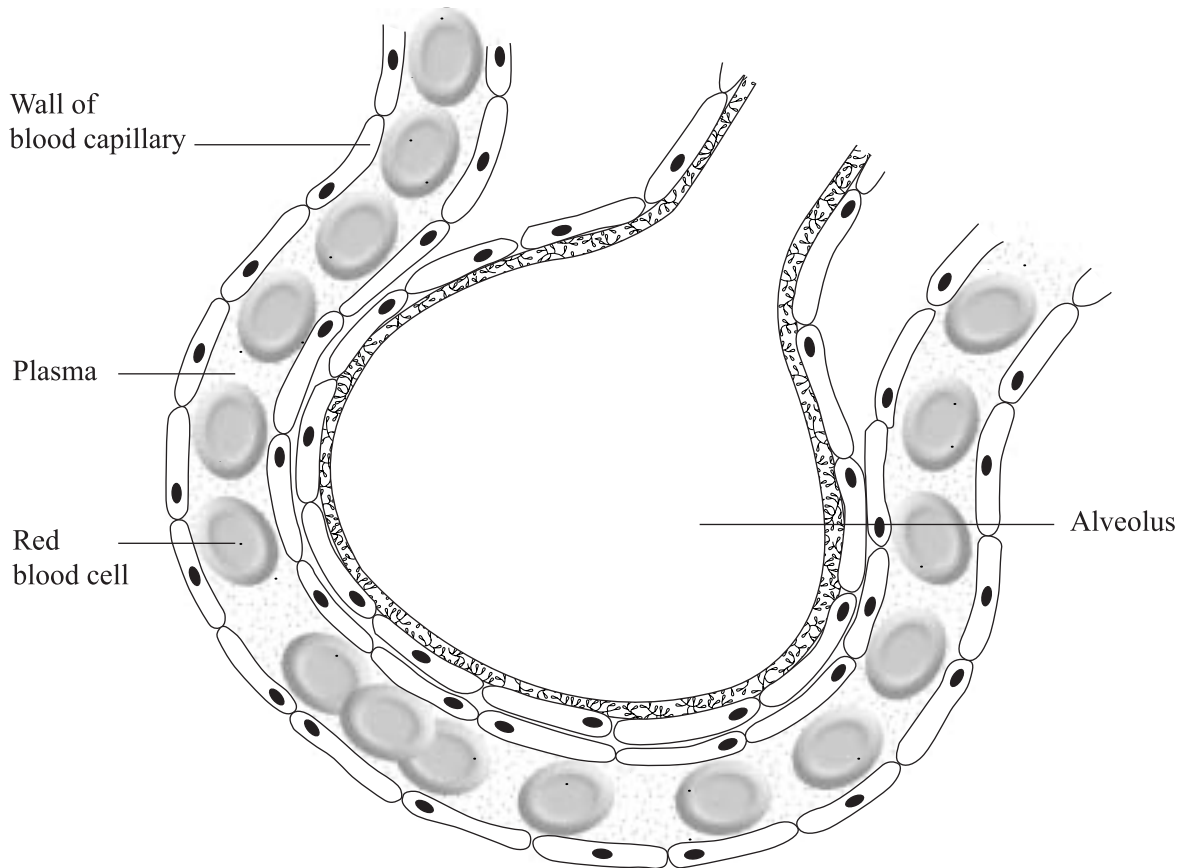
.....  
.....

(1 mark)

4 (a) Complete this sentence. You should put only **one** word in each space.

To make air move into the lungs, the ribcage moves ..... and the diaphragm moves ..... (2 marks)

(b) The diagram shows an alveolus and a blood capillary in the lung.



(i) During gaseous exchange, oxygen and carbon dioxide are exchanged across the wall of the alveolus. **On the diagram**, carefully draw **two** arrows to show the paths taken by oxygen and by carbon dioxide during this process. **Label each arrow.** (3 marks)

(ii) Name the process by which oxygen moves across the wall of the alveolus.

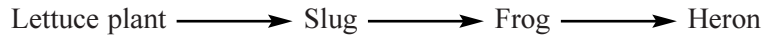
..... (1 mark)

(iii) Each lung contains about 350 million alveoli. How does this help gaseous exchange?

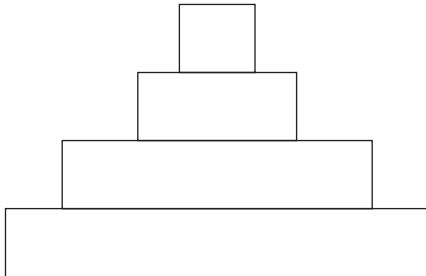
.....  
..... (1 mark)

Turn over ►

5 This is a simple food chain.



The diagram shows a pyramid of biomass for this food chain.



.....  
 .....  
 .....  
 .....

(a) Write the names of the organisms in the food chain on the correct lines next to the pyramid of biomass. *(1 mark)*

(b) (i) The slug obtains its energy from the lettuce plant. What is the source of energy for the lettuce plant?

.....  
*(1 mark)*

(ii) What is the function of chlorophyll in a lettuce plant?

.....  
*(1 mark)*

(iii) The slugs ate some lettuce plants which contained 1620 kJ of energy. Only 10 per cent of this energy is used by the slugs for growth. Use the formula to calculate how much energy can be used by the slugs for growth. Show clearly how you work out your final answer.

$$\text{Amount of energy} = \frac{(\text{Percentage of energy used by slugs}) \times (\text{Amount of energy in lettuce})}{100}$$

.....  
 .....  
 .....

Amount of energy = ..... kJ  
*(2 marks)*

6 Complete each sentence by choosing the correct words from the box.

<b>dark</b>	<b>enzymes</b>	<b>gravity</b>	<b>hormones</b>	<b>inhibits</b>
<b>less</b>	<b>light</b>	<b>moisture</b>	<b>more</b>	<b>stimulates</b>

Plants are sensitive to light, moisture and gravity. Plant shoots grow towards .....  
and against ..... . The roots grow towards gravity and .....

To coordinate growth, the plants use special chemicals called ..... . For example,  
when the shoot responds to light from one side only, more of one of these chemicals is found  
on the ..... side of the shoot and this causes ..... growth on  
that side. (6 marks)

6

**TURN OVER FOR THE NEXT QUESTION**

**Turn over** ►

- 7 Each week, an athlete trains on 5 days (training days) but does not train on the other 2 days (rest days).

The table shows how water losses from the athlete's body are different on a rest day from those on a training day.

Method	Volume of water lost in cm <sup>3</sup>	
	Rest day	Training day
Urine	1500	900
Sweating	625	2400
Breathing	450	1500
Faeces	125	120
<b>Total</b>	2700	

- (a) Complete the table to show the total volume of water lost by the athlete on a training day. (1 mark)

- (b) Explain why the athlete sweats more on a training day.

.....

.....

.....

.....

(2 marks)

- (c) On a training day, the athlete needs to take in more water.

Explain why the athlete needs to take in more water on a training day.

.....

.....

.....

.....

(2 marks)



8 A selective herbicide (a type of pesticide) can be used to kill weeds growing among crop plants.

The table shows the result of adding different amounts of a selective herbicide to a rice crop.

Herbicide added in kg per hectare	Amount of rice produced in tonnes per hectare	Percentage cover of weeds
0.0	50	85
1.7	70	32
3.4	76	24

(a) As more herbicide is applied, what happens to:

(i) the amount of rice produced;

.....  
(1 mark)

(ii) the percentage cover of weeds?

.....  
(1 mark)

(b) Suggest **two** reasons why rice does not grow well when there are a lot of weeds present.

1 .....

.....

2 .....

.....  
(2 marks)

(c) Suggest **one** possible danger of spraying crops with pesticides.

.....

.....  
(1 mark)

9 The photographs show two varieties of moths, X and Y. The moths belong to the same species. The moths are resting on a tree trunk in open countryside.



Moth X



Moth Y

(a) Which variety of moth, X or Y, is more likely to be killed by insect-eating birds? Give a reason for your answer.

Variety of moth: .....

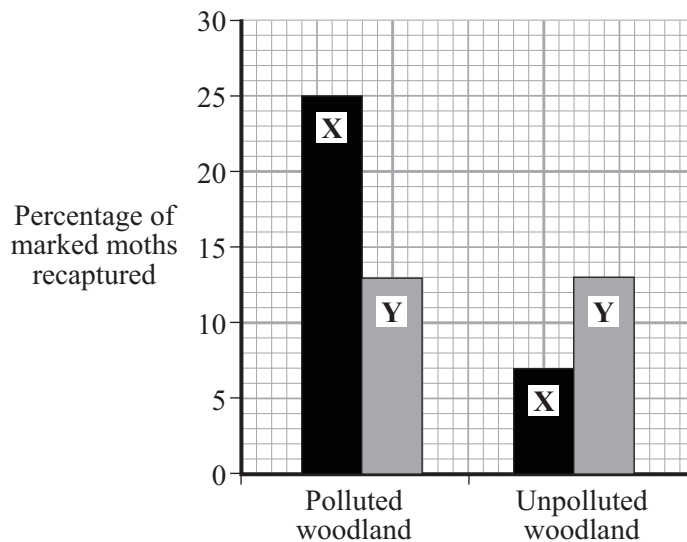
Reason: .....

.....  
(1 mark)

(b) In an experiment, large numbers of each variety of moth were caught in a trap.

- They were marked with a spot of paint on the underside of one wing and then released.
- A few days later, moths were again trapped and the number of marked moths was counted.
- The experiment was carried out in a woodland polluted by smoke and soot, and also in an unpolluted woodland.

The results are shown in the bar graph.



(i) When the moths were being marked, suggest why the paint was put on the underside of the wing and not on the top.

.....  
(1 mark)

(ii) What percentage of moths of type X was recaptured in:  
the polluted woodland;.....  
the unpolluted woodland? .....

(2 marks)

(iii) In each woodland, only a small number of marked moths of both varieties were recaptured. Suggest **one** reason for this.

.....  
.....  
(1 mark)

(c) (i) The colour of the moths is controlled by a gene. The dark form was first produced by a mutation in the gene.

What chemical, found in a gene, is changed by a mutation? Draw a ring around your answer.

**carbohydrate**      **DNA**      **fat**      **protein**      (1 mark)

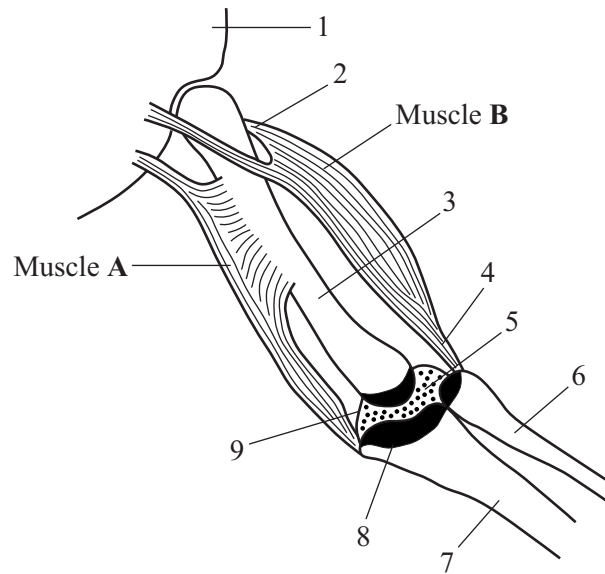
(ii) Some of the offspring from the original dark moth were also dark. What caused this?  
.....  
.....  
(1 mark)

7

**TURN OVER FOR THE NEXT QUESTION**

**Turn over** ►

10 (a) The diagram shows the elbow joint.



(i) Which number on the diagram labels a synovial membrane?

.....  
(1 mark)

(ii) The ligaments of the synovial joint have not been shown.

Which **two** numbered structures shown on the diagram are held together by ligaments?

.....  
(1 mark)

(iii) The arm is bent by the action of muscle **B**. Why is muscle **A** unable to bend this joint?  
Place a tick in the correct box to show your answer.

Muscle **A** is not large enough

Muscle **A** is not attached to the bone

Muscles cannot push bones

The wrong sort of fibres are in muscle **A**

(1 mark)

(b) The diagrams show two different standing postures.



Posture A



Posture B

Posture A is suitable for standing comfortably for a long time. Posture B shows a poor standing position.

Use information in the diagrams to explain three reasons why posture A is better than posture B.

- 1 .....
- .....
- 2 .....
- .....
- 3 .....
- .....

(3 marks)

6

**TURN OVER FOR THE NEXT QUESTION**

**Turn over** ►

- 11 (a) During a pregnancy an embryo is surrounded by a membrane which encloses a fluid. Place a tick in the correct box to show the name of this membrane.

Amnion

Chorion

Umbilical cord

(1 mark)

- (b) Complete the following sentence.

The membrane in a placenta is very thin so that .....

.....

.....

(1 mark)

- (c) The membrane in a placenta prevents the blood of the mother mixing with the blood of the embryo.

Describe **one** reason for this.

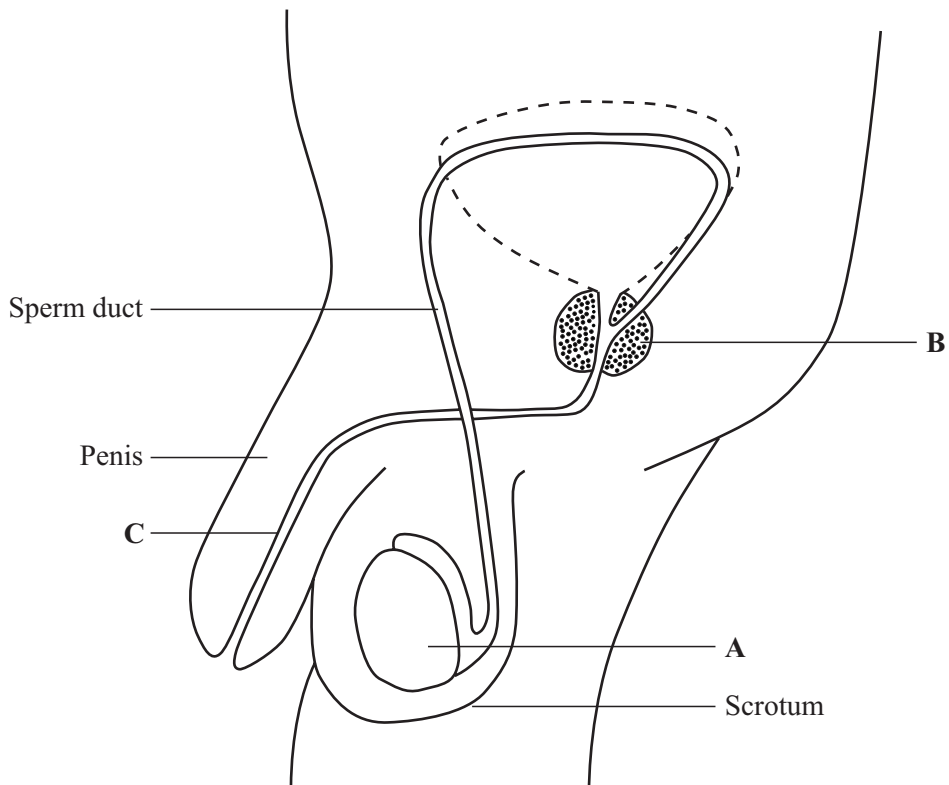
.....

.....

(1 mark)

3

12 The diagram shows the male reproductive system.



(a) What is the function of the part labelled **A**?

.....  
(1 mark)

(b) Describe **one** function of each of the parts labelled **B** and **C** for reproduction.

Part **B**.....  
.....

Part **C**.....  
.....

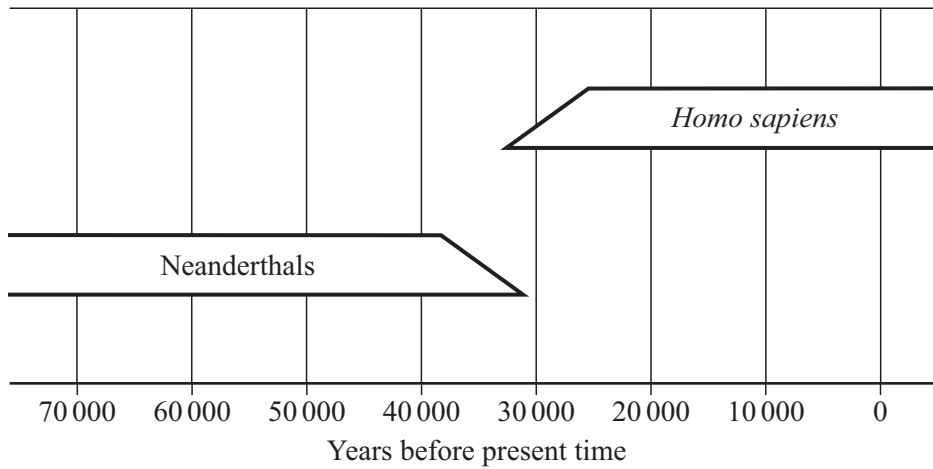
(2 marks)

3

Turn over ►

13 The Neanderthals and *Homo sapiens* both lived in Europe.

(a) The chart shows when the Neanderthals lived and when *Homo sapiens* arrived in Europe.



What evidence is there in the chart that these two types of human existed together for a time?

.....  
(1 mark)

(b) When the Neanderthals lived in Europe the climate was very cold.

Describe **two** ways which helped them to survive in this climate.

1 .....

.....

2 .....

.....  
(2 marks)



- (c) It is thought that the Neanderthals were unable to compete successfully with *Homo sapiens*. *Homo sapiens* developed much better speech and started to live in large groups.

Explain how these features enabled them to be more successful in obtaining food.

.....  
.....  
.....  
.....

(2 marks)

- (d) The Neanderthals had a much heavier body with larger muscles than *Homo sapiens*.

Explain how this could be a disadvantage to the Neanderthals.

.....  
.....

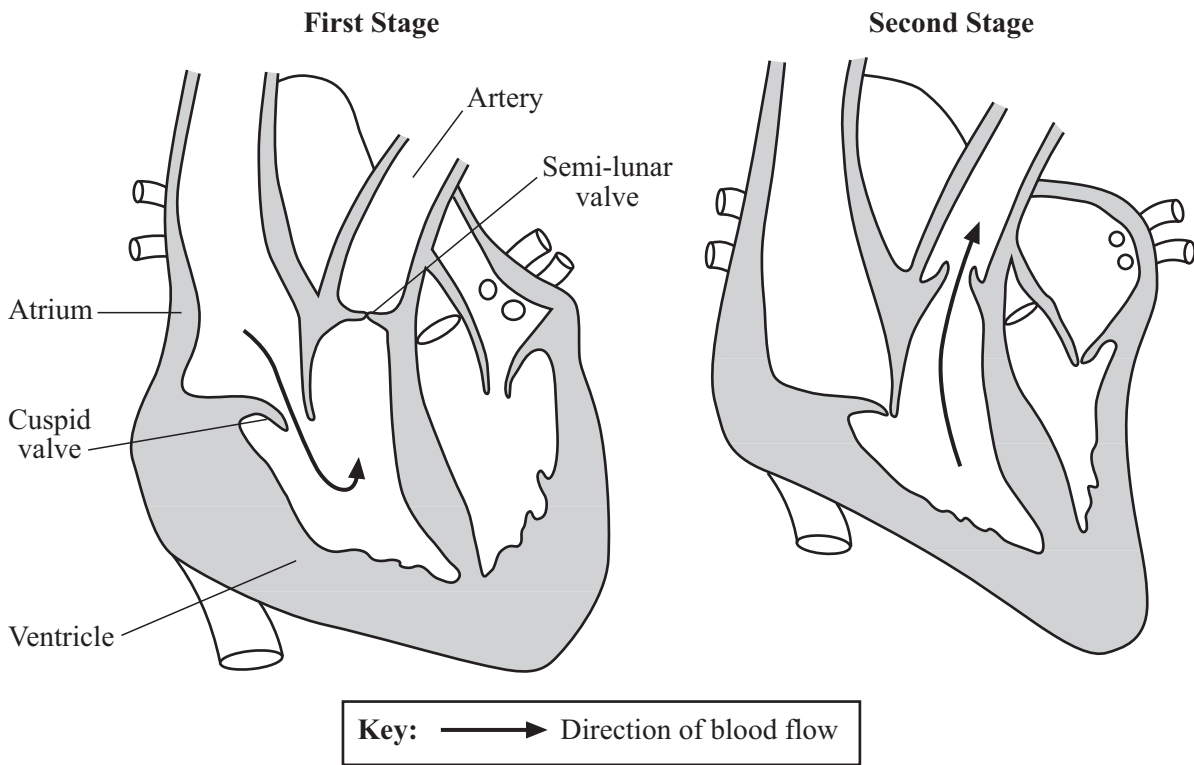
(1 mark)



**TURN OVER FOR THE NEXT QUESTION**

**Turn over** ►

14 Two different stages in the heart beat cycle are shown in the diagrams.



- (a) Use information in the diagrams to help you describe **three** events which cause blood to pass through the heart in the direction of the arrows.

*To gain full marks in this question you should write your ideas in good English. Put them into a sensible order and use the correct scientific words.*

.....

.....

.....

.....

.....

.....

.....

.....

(3 marks)

(b) Regular exercise can strengthen the heart muscles and so make the heart fitter.

Explain how a fitter heart can help the leg muscles of a person running fast.

.....

.....

.....

.....

.....

.....

.....

(3 marks)

$\frac{\quad}{6}$

**TURN OVER FOR THE NEXT QUESTION**

**Turn over** ►

- 15 (a) (i) What name is given to an enzyme which catalyses the breakdown of protein?

.....  
(1 mark)

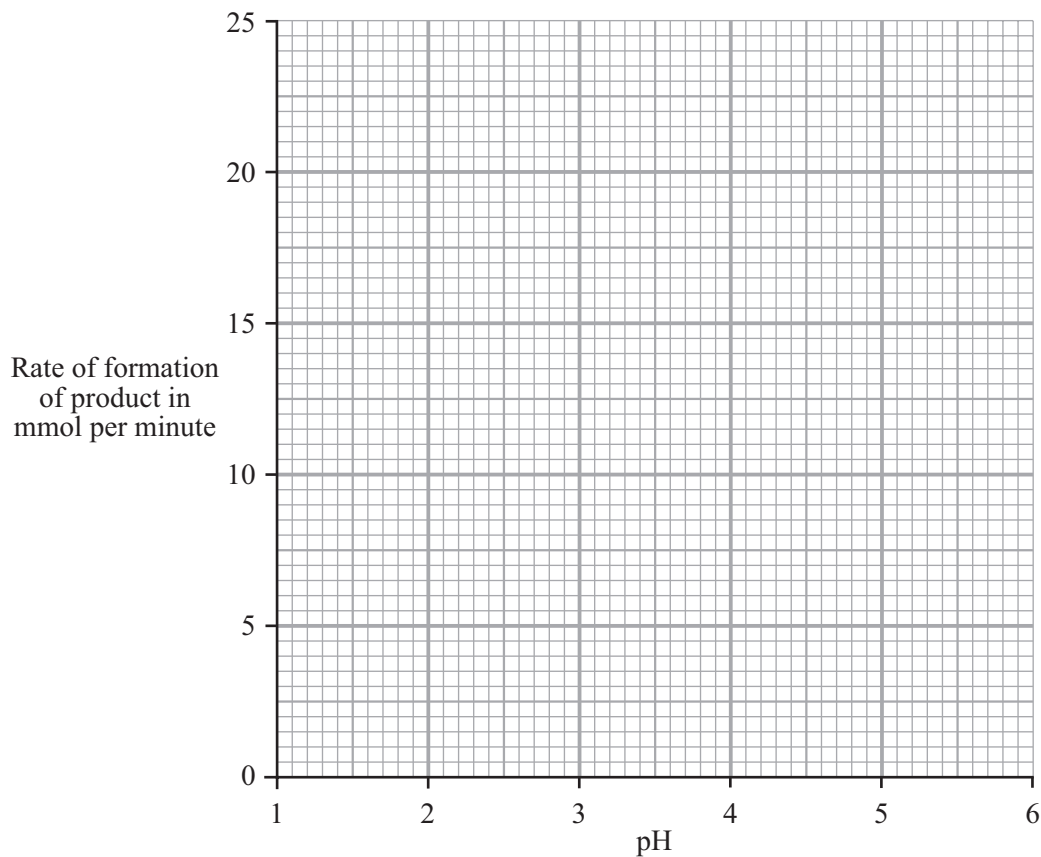
- (ii) What product is formed when protein is broken down by the enzyme?

.....  
(1 mark)

The table shows the effect of pH on the activity of an enzyme which catalyses the breakdown of protein.

<b>pH</b>	1.0	2.0	3.0	4.0	5.0
<b>Rate of formation of product in mmol per minute</b>	10.5	23.0	10.5	2.5	0.0

- (b) Draw a graph of the data in the table.



(3 marks)

(c) The enzyme is produced by the human digestive system.

(i) At what pH does this enzyme work best? .....  
(1 mark)

(ii) Suggest which part of the digestive system produces this enzyme.  
.....  
(1 mark)

(d) Why is it necessary to break down proteins in the digestive system?

.....  
.....  
.....  
.....  
.....  
.....  
.....  
(3 marks)

10

**TURN OVER FOR THE NEXT QUESTION**

**Turn over** ►

**16** Hormones are sometimes used to regulate human reproduction.

(a) (i) What is a hormone?

.....  
.....  
*(1 mark)*

(ii) How are hormones transported around the body?

.....  
.....  
*(1 mark)*

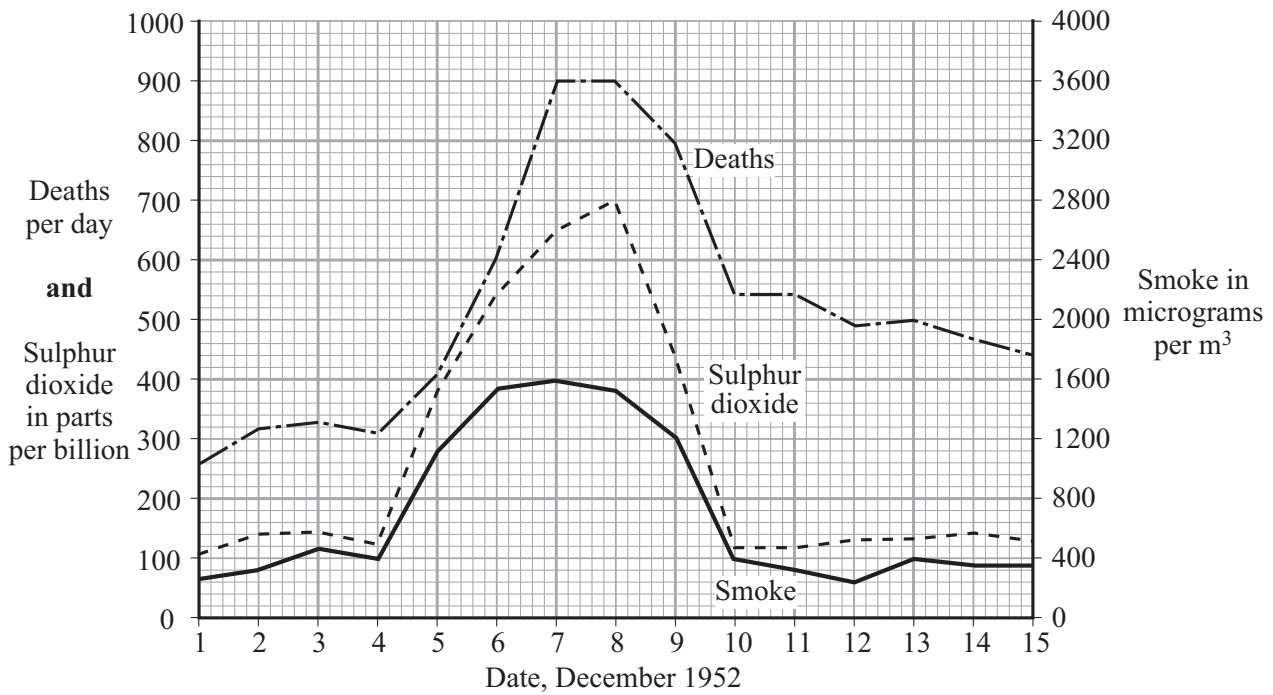
(b) Describe the benefits and possible problems that may result from the use of hormones to regulate human reproduction. You should refer to fertility drugs and contraceptives in your answer.

*To gain full marks in this question you should write your ideas in good English. Put them into a sensible order and use the correct scientific words.*

.....  
.....  
.....  
.....  
.....  
.....  
.....  
.....  
.....  
*(4 marks)*

6

17 In December 1952, there was a thick fog in London. The graph shows changes in the amounts of sulphur dioxide and smoke in the air and the number of people dying during this period.



(a) Describe **one** human activity which releases sulphur dioxide into the air.

.....  
(1 mark)

(b) Human deaths during this period were caused mainly by lung diseases.

(i) Why were the lungs particularly affected?

.....  
(1 mark)

(ii) Give evidence from the graph which suggests that sulphur dioxide might have caused these deaths.

.....  
.....  
(1 mark)

(iii) Does the graph prove that sulphur dioxide caused these deaths? Explain your answer.

.....  
.....  
(1 mark)

18 Hepatitis B is a liver disease caused by a virus. The virus is found in body fluids such as blood, saliva and urine. Diagram 1 shows the structure of the virus in cross section.

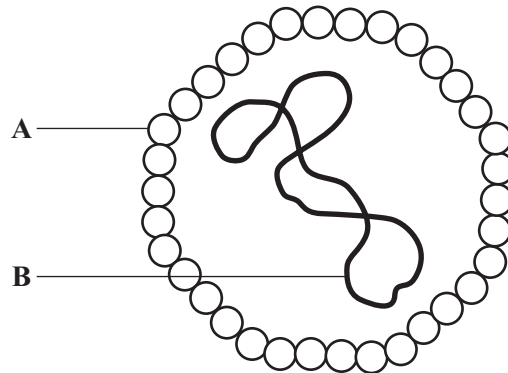


Diagram 1

(a) Name structures A and B.

A: .....

B: .....

(2 marks)

(b) The human body has several natural defences against viruses. Some of these prevent viruses from entering the body. Others act once the viruses have entered.

(i) Give **two** ways in which the body stops viruses from entering.

1.....

2.....

(2 marks)

(ii) Diagram 2 shows a white blood cell attacking a group of viruses.

Complete diagram 2 by drawing the 2nd stage.




Diagram 2

(1 mark)



(iii) What type of chemical is released by some white blood cells to attack viruses?

.....  
(1 mark)

(c) Hepatitis B is more likely to be spread among people who share needles when they inject drugs. Use information given at the beginning of this question to explain why this is so.

.....  
.....  
.....  
.....  
(2 marks)

8

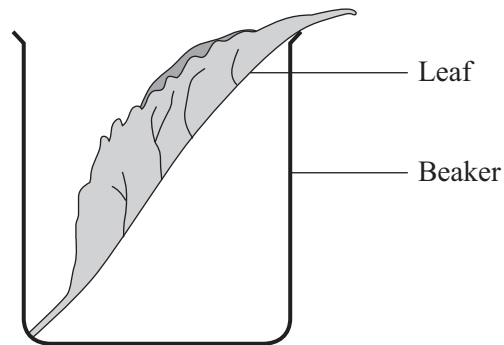
**TURN OVER FOR THE NEXT QUESTION**

**Turn over** ►

- 19** Four leaves were removed from the same plant. Petroleum jelly (a waterproofing agent) was spread onto some of the leaves, as follows:

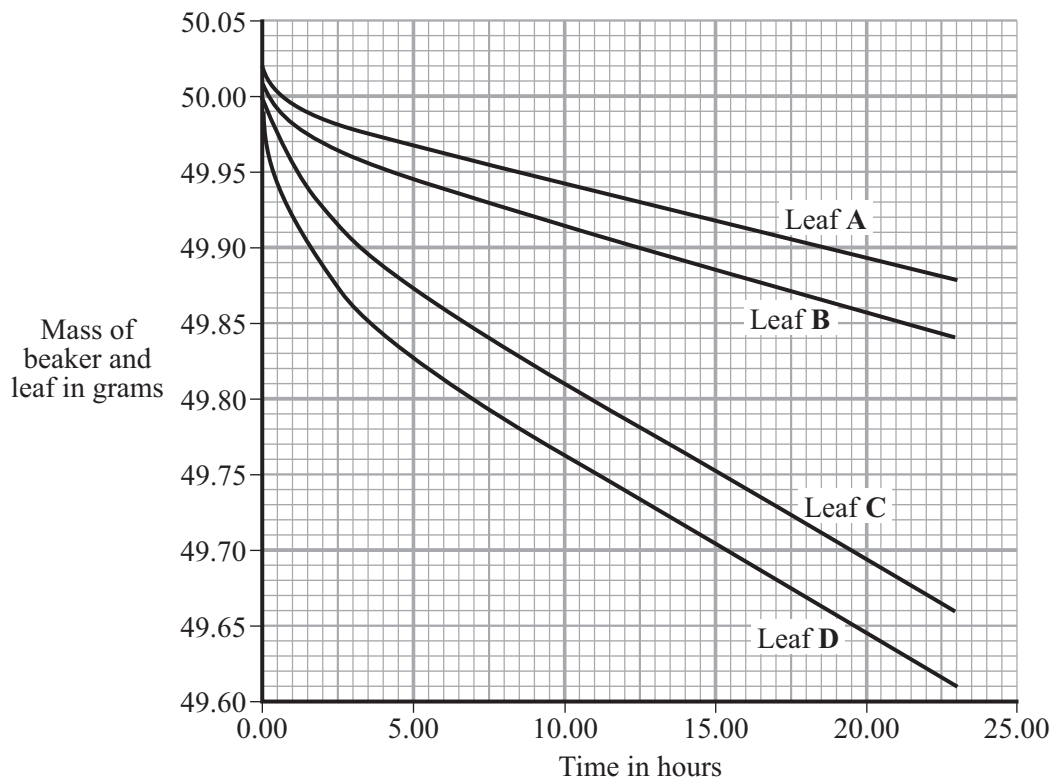
- Leaf **A**: on both surfaces  
 Leaf **B**: on the lower surface only  
 Leaf **C**: on the upper surface only  
 Leaf **D**: none applied

Each leaf was then placed in a separate beaker, as shown in diagram 1.



**Diagram 1**

Each beaker was weighed at intervals. The results are shown in the graph.



(a) Give evidence from the graph in answering the following questions.

(i) Which surface (upper or lower) loses water most rapidly?.....

Evidence.....

.....  
(1 mark)

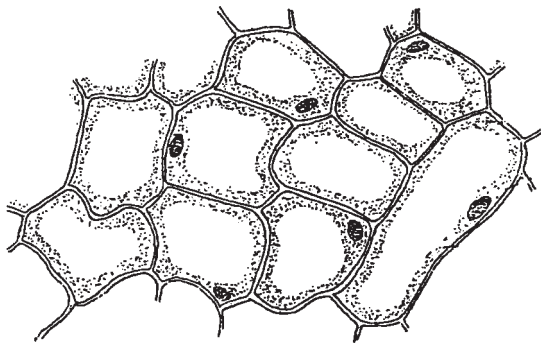
(ii) Is water lost from both surfaces of the leaf? .....

Evidence.....

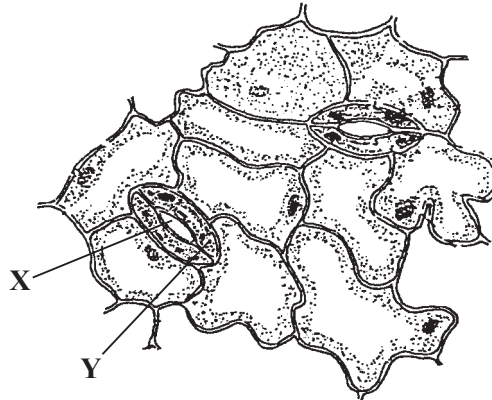
.....  
(1 mark)

(b) Diagram 2 shows the appearance of each surface of the leaf as seen through a microscope.

**Upper Surface of Leaf**



**Lower Surface of Leaf**



**Diagram 2**

(i) Name space X and cell Y.

X:.....

Y:.....

(2 marks)

(ii) Use information in diagram 2 to explain why the results are different for leaves B and C.

.....  
.....  
.....  
.....

(2 marks)



Turn over ►

- 20 (a) Osteoporosis can make bones fragile and brittle. A balanced diet can help reduce the possibility of osteoporosis developing in a person.

Choose **two** nutrients from the box which could help prevent osteoporosis. For each explain how it could help prevent osteoporosis.

<b>calcium</b>	<b>carbohydrates</b>	<b>iron</b>	<b>vitamin D</b>
----------------	----------------------	-------------	------------------

Nutrient 1.....

Explanation.....

.....

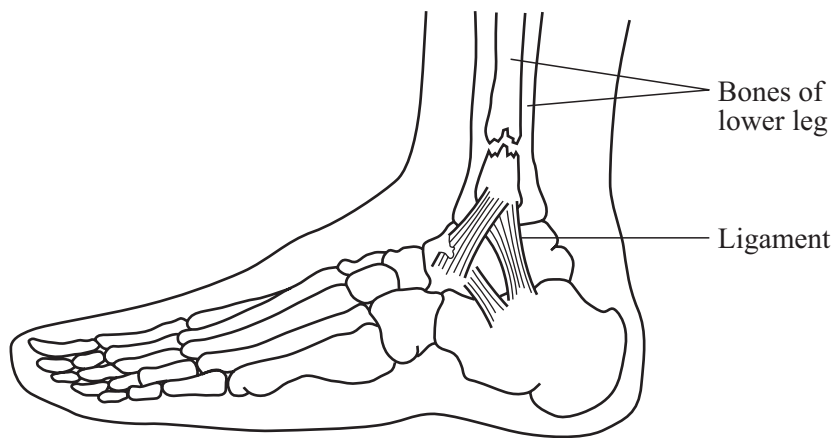
Nutrient 2.....

Explanation.....

.....

(2 marks)

- (b) The diagram shows the skeleton of the foot.



Describe how this diagram shows that a sprain has occurred.

.....

.....

(1 mark)

(c) Describe **two** reasons why using a wrist with a sprain may be painful or difficult.

1 .....

.....

2 .....

.....

*(2 marks)*



**TURN OVER FOR THE NEXT QUESTION**

**Turn over** ►

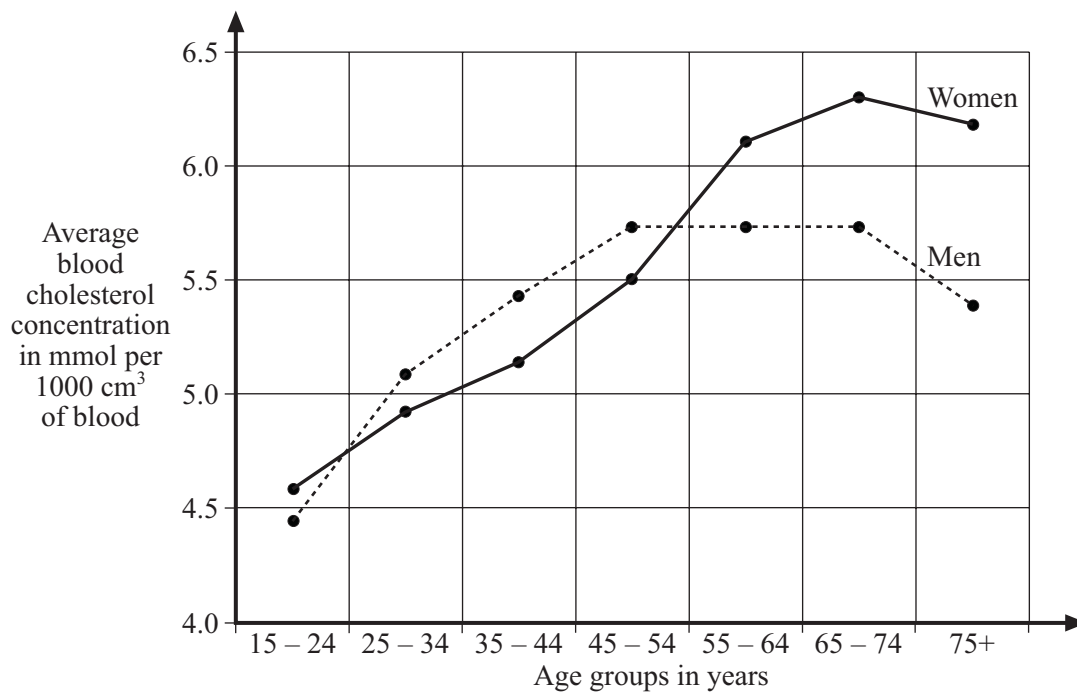
- 21 (a) (i) If there is too much cholesterol in the blood it can be deposited on the walls of blood vessels. This makes them narrower.  
What is the name of this condition?

.....  
(1 mark)

- (ii) When cholesterol is deposited on the walls of the coronary arteries the blood flow becomes less. Explain how this can cause a heart attack.

.....  
.....  
.....  
.....  
(2 marks)

- (b) The graph shows the average blood cholesterol in various age groups.



- (i) The data for the graph were obtained by measuring the blood of a large number of people to find the averages.

Why were a large number of people used?

.....  
.....

(1 mark)

- (ii) A man aged 62 has a son aged 33. Why is it wrong to think that the father is certainly more likely to have a heart attack than his son?

.....  
.....

(1 mark)

- (iii) From information in the graph, accurately state which group shows the greatest risk of heart attack.

.....

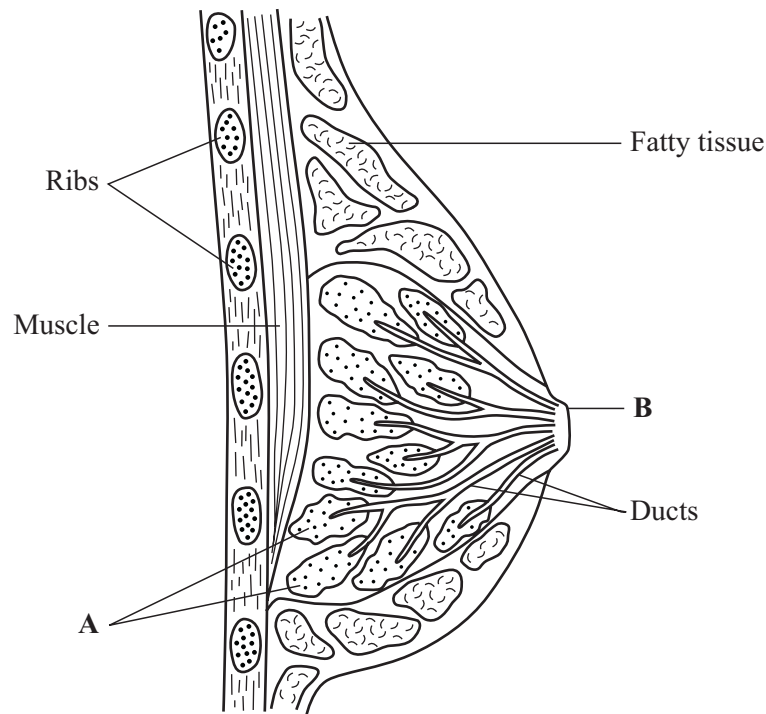
(1 mark)

6

**TURN OVER FOR THE NEXT QUESTION**

**Turn over** ►

- 22 (a) The diagram shows a section through a breast.



- (i) Describe how the parts labelled **A** and **B** enable a young baby to be fed on milk.

.....

.....

.....

.....

(2 marks)

- (ii) The table shows a comparison of human and cow's milk.

Nutrients	Amount per 100 cm <sup>3</sup> milk	
	Human	Cow's
Protein	2.0 g	6.5 g
Carbohydrates	7.0 g	4.8 g
Fat	3.8 g	3.7 g
Vitamin C	4.4 mg	1.5 mg



If a mother is unable to breast-feed her baby, cow's milk can be used instead. Suggest **two** important ways in which this cow's milk should be modified to make it suitable for a baby.

.....

.....

.....

.....

(2 marks)

(b) The diagram shows a mother gently using her finger to touch her new born baby's face.



Describe the baby's reaction. In your answer explain the importance of this response to the baby.

.....

.....

.....

.....

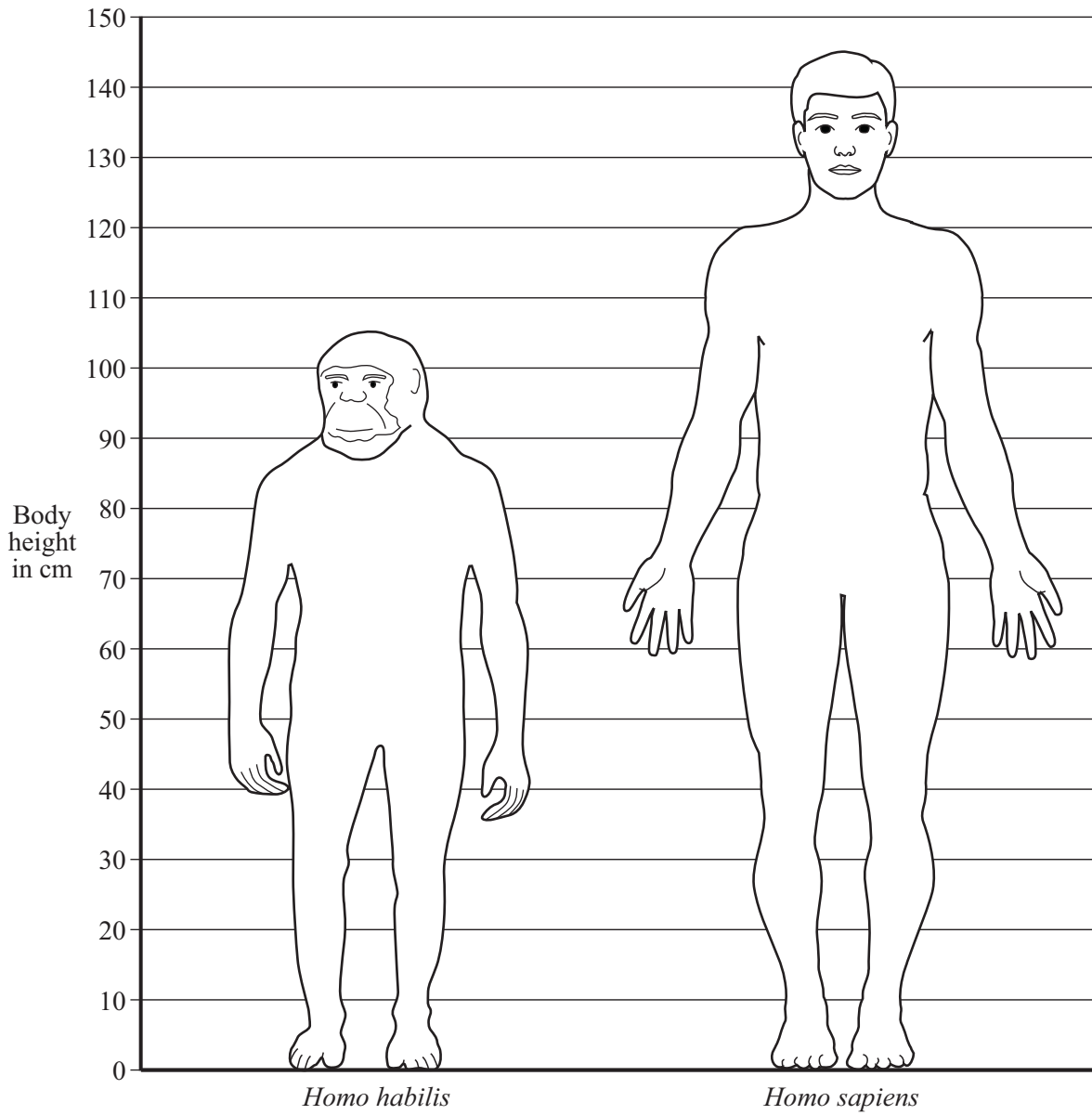
(2 marks)

6

**TURN OVER FOR THE NEXT QUESTION**

**Turn over** ►

23 The diagram shows average examples of adult *Homo habilis* and *Homo sapiens*.



- (a) Calculate the percentage difference in height of *Homo sapiens* compared to *Homo habilis*. Show clearly how you work out your final answer.

.....  
.....  
.....  
.....

Percentage difference in height.....%  
(2 marks)

- (b) *Homo habilis* was thought to have been the first true human. They showed some important differences when compared with other primates such as the Australopithecines.

Describe **two** of these differences.

1 .....

.....

2 .....

.....

(2 marks)



**TURN OVER FOR THE NEXT QUESTION**

**Turn over** ►

24 Each autumn, many trees lose their leaves.

- (a) Describe how carbon compounds in the leaves can be recycled so that they can be used again by the trees.

*To gain full marks in this question you should write your ideas in good English. Put them into a sensible order and use the correct scientific words.*

.....

.....

.....

.....

.....

.....

.....

.....

.....

.....

.....

(4 marks)

- (b) Give **two** environmental conditions which speed up the processes that you have described in part (a).

1 .....

2 .....

(2 marks)

**END OF QUESTIONS**

6