

GENERAL CERTIFICATE OF SECONDARY EDUCATION

HOME ECONOMICS

Child Development

Principles of Child Development

B013

Candidates answer on the question paper.

OCR supplied materials:
None

Other materials required:
None

Friday 10 June 2011
Afternoon

Duration: 1 hour 30 minutes



Candidate forename		Candidate surname	
-----------------------	--	----------------------	--

Centre number						Candidate number				
---------------	--	--	--	--	--	------------------	--	--	--	--

MODIFIED LANGUAGE

INSTRUCTIONS TO CANDIDATES

- Write your name, centre number and candidate number in the boxes above. Please write clearly and in capital letters.
- Use black ink. Pencil may be used for graphs and diagrams only.
- Read each question carefully. Make sure you know what you have to do before starting your answer.
- Write your answer to each question in the space provided. Additional paper may be used if necessary but you must clearly show your candidate number, centre number and question number(s).
- Answer **all** the questions.
- Do **not** write in the bar codes.

INFORMATION FOR CANDIDATES

- The number of marks is given in brackets [] at the end of each question or part question.
- The total number of marks for this paper is **80**.
- Your quality of written communication is assessed in the questions marked with an asterisk (*).
- This document consists of **16** pages. Any blank pages are indicated.

1 (a) Gross motor skills use large muscles in the body.

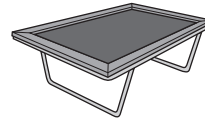
Look at the pictures of toys below.



slide



books




trampoline




paint box



climbing frame



tricycle



mobile



football



skipping rope



seesaw

Identify **four** toys from the pictures above, that could help the development of large muscles in the body.

- 1
- 2
- 3
- 4 [4]

(b) Childhood is a time of rapid development.

What term is used for the development of the body?

..... [1]

(ii) Give **three** advantages of both parents sharing responsibilities within the family.

- 1
-
- 2
-
- 3
- [3]

(e) Sibling rivalry sometimes occurs in a family.

What is meant by sibling rivalry?

-
-
-
- [2]

[Total: 20]

5
BLANK PAGE

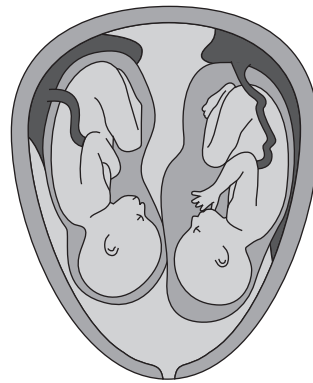
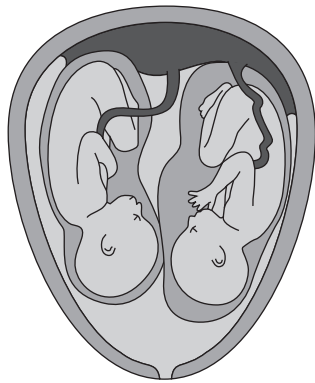
PLEASE DO NOT WRITE ON THIS PAGE

(ii) Give **two** treatments for infertility.

- 1
-
- 2
- [2]

(c) Some fertility treatments may result in a multiple birth.

State the different types of twins shown in the diagrams below.



[2]

(d) Identify **one** health professional who supports a mother after the birth of her baby.

..... [1]

[Total: 15]

..... [15]

**TURN OVER FOR EXTRA WRITING SPACE
OR GO TO PAGE 12 FOR QUESTION 4**

[Total: 15]

Turn over

A series of 25 horizontal dotted lines spanning the width of the page, intended for writing.

4 (a) Voluntary services can give help to children and families.

What is meant by a voluntary service?

.....
 [1]

(b) Look at the voluntary organisations shown in the list below.

Complete the table below. Match each organisation to the type of help.

Gingerbread Citizens Advice Bureau ChildLine

Type of help	Organisation
Gives advice to families about many issues including debt management and benefits.	
Gives confidential support to children.	
Offers help and advice for lone parent families.	

[3]

(c) What is meant by informal care?

.....
 [1]

(d) Day nurseries and childminders are two types of day care provision.

Look at the table below which shows the number of day care places in 1975 and 2000.

Day care provision	1975	2000
Day Nurseries	53 000	247 000
Childminders	83 500	337 700

(i) How many children went to childminders in 1975?

..... [1]

(ii) Give one reason why there were fewer childminders in 1975 than 2000.

..... [1]

(iii) Which day care provision offered the most places in 2000?

..... [1]

(iv) How did the number of day nursery placements change between 1975 and 2000?

..... [1]

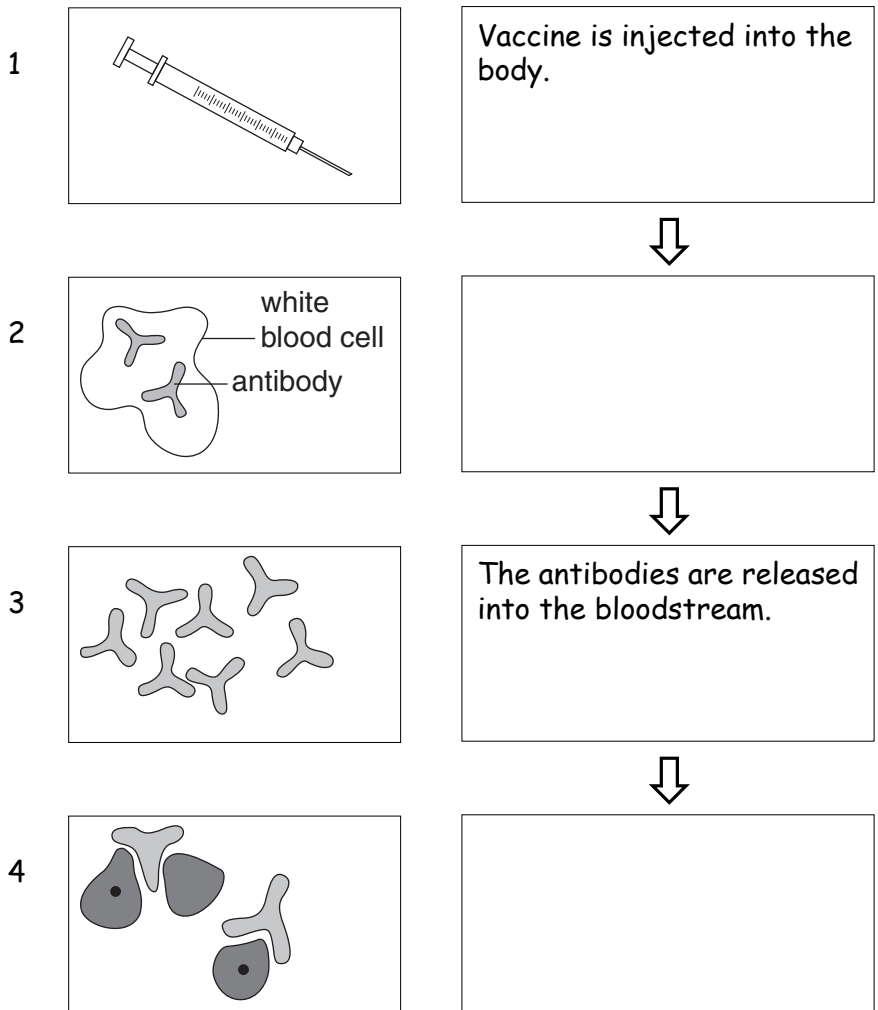
5 (a) (i) Children are vaccinated to prevent infectious diseases.

Give the **three** infectious diseases that the MMR vaccination protects against.

- 1
- 2
- 3 [3]

(ii) Complete the boxes below to describe how a vaccination protects against an infectious disease.

Two have been done for you.



[4]

(b) Identify **two** ways infectious diseases are spread.

1

.....

2

..... [2]

(c) What term describes the time between a child being infected and the first symptoms appearing?

..... [1]

(d) State **two** clear signs that could show a child has meningitis.

1

.....

2

..... [2]

(e) Give **three** rules a parent/carer should follow when giving medicines to a child.

1

.....

2

.....

3

..... [3]

[Total: 15]

PLEASE DO NOT WRITE ON THIS PAGE



Copyright Information

OCR is committed to seeking permission to reproduce all third-party content that it uses in its assessment materials. OCR has attempted to identify and contact all copyright holders whose work is used in this paper. To avoid the issue of disclosure of answer-related information to candidates, all copyright acknowledgements are reproduced in the OCR Copyright Acknowledgements Booklet. This is produced for each series of examinations and is freely available to download from our public website (www.ocr.org.uk) after the live examination series. If OCR has unwittingly failed to correctly acknowledge or clear any third-party content in this assessment material, OCR will be happy to correct its mistake at the earliest possible opportunity.

For queries or further information please contact the Copyright Team, First Floor, 9 Hills Road, Cambridge CB2 1GE.

OCR is part of the Cambridge Assessment Group; Cambridge Assessment is the brand name of University of Cambridge Local Examinations Syndicate (UCLES), which is itself a department of the University of Cambridge.