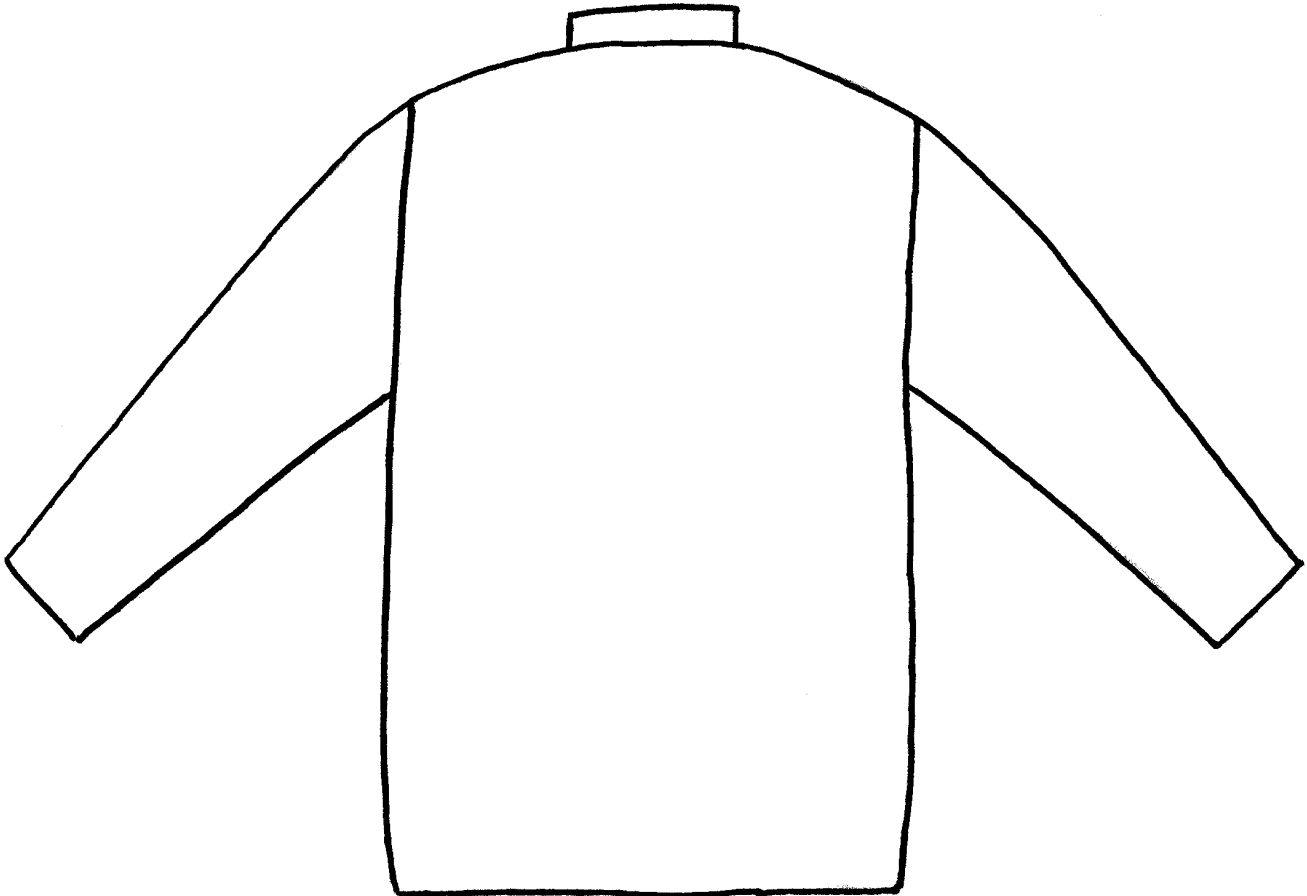


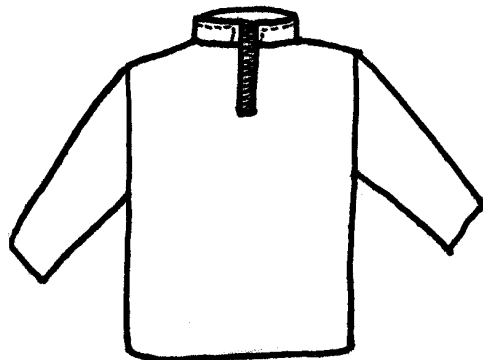
Question 1 is about making a top for a child.

- 1 A polyester fleece top is being made for a child (2-5 years old).
A decorative appliqué is to be put on the **back**.
- (a) Show your design for the appliqué on the outline of the back view of the fleece top below.
The design is to be based on a toy suitable for a child of 2-5 years old.



Back View

(5 marks)



Front View

(d) The top must be made to a high standard.

(i) Explain **two** points to be considered when sewing in the sleeves.

1

.....

2

.....

(4 marks)

(ii) Explain **two** points to be considered when making and attaching the collar.

1

.....

2

.....

(4 marks)

(e) The top will need a hem.

(i) Explain **two** points to be considered when choosing a method for making the hem.

1

.....

2

.....

(4 marks)

(ii) Use notes and diagrams to show the steps in making a hem for the top.

.....
.....
.....
.....
.....
.....
.....
.....
.....
.....
.....
.....

(5 marks)

(f) (i) Discuss the **advantages** of making the top at home instead of buying it ready-made.

.....
.....
.....
.....
.....
.....
.....

(5 marks)

(ii) Discuss the **disadvantages** of making the top at home.

.....
.....
.....
.....
.....
.....
.....

(5 marks)

Question 2 is about fabrics and components for the top.

- 2 (a) The top is being made from a polyester fleece fabric. Explain **three** reasons why this fabric is suitable.

1

.....

2

.....

3

.....

(6 marks)


- (b) The care label below is attached to the fabric.




Explain the meaning of each of the symbols.

- (i) 
-


(2 marks)

- (ii) 

(1 mark)

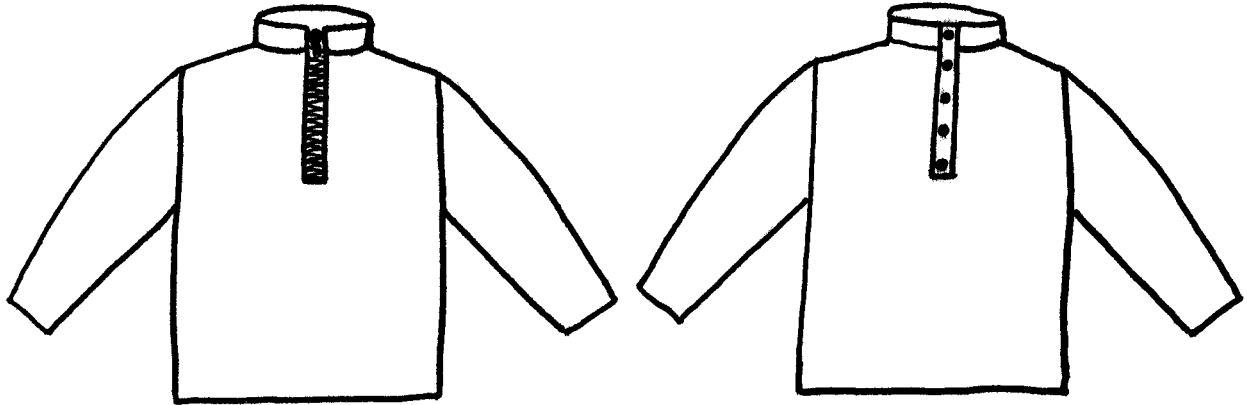
- (iii) 
-

(2 marks)

- (iv) 

(1 mark)

- (c) The top is to have a fastening at the front.
A zip or poppers will be used.



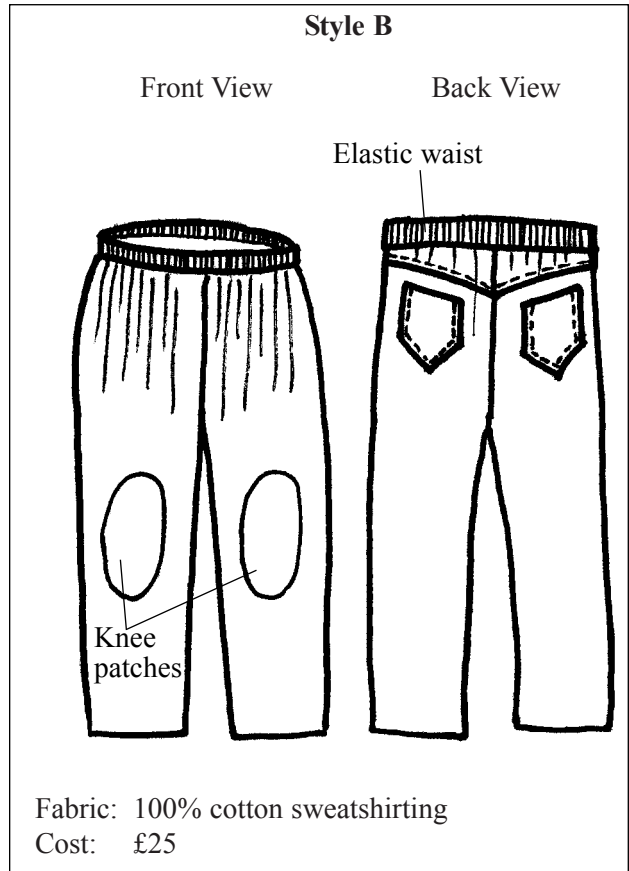
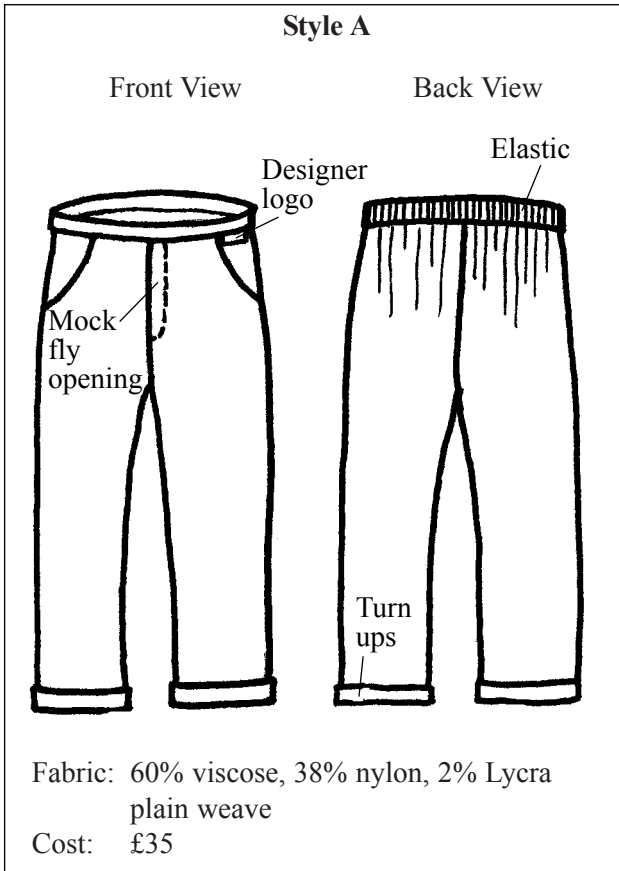
Give **two** advantages and **one** disadvantage of using these fastenings on this top.
Fill in the table below.

	Advantages	Disadvantage
Zip	1	1
	2
Poppers	1	1
	2

(6 marks)

Question 3 is about buying a pair of trousers.

- 3 A pair of trousers is to be bought for a child to wear at nursery school. Study the two styles shown below.



- (a) Compare the **style** features of the two pairs of trousers.

.....

.....

.....

.....

.....

.....

(4 marks)

- (b) (i) Describe the properties of the fabric used for **Style A** trousers.

.....

.....

.....

.....

(4 marks)

(ii) Describe the properties of the fabric used for **Style B** trousers.

.....
.....
.....
.....

(4 marks)

(c) Which pair of trousers do you consider will give best value for money?
Give reasons.

.....
.....
.....
.....
.....
.....
.....
.....

(6 marks)

(d) The label shown below is attached to the **Style A** trousers.

(i) Explain what it means.



.....
.....

(2 marks)

(ii) Why is it necessary to put this label in the trousers?

.....
.....

(2 marks)

Question 4 is about the consumer.

- 4 A consumer magazine has tested some irons. The results are shown in the chart below. Use the information to answer the questions which follow.

	Iron A	Iron B	Iron C	Iron D
Price (£)	64.50	34.50	25	44
Weight (kg)	1.7	1.5	1.4	1.2
Cord length (metres)	2.95	2.40	2.50	3
Shot of steam	✓	✓	✗	✓
Vertical steaming ▲	✓	✗	✗	✗
Spray button	✓	✓	✓	✓
Durability ▲ ▲	●●●	●●	●●●	●●
Overall performance	●●●	●●	●	●●
Overall safety ▲ ▲ ▲	●●●	●	●●	●●●

Key ● is the worst performance.
●●● is the best performance.

- ▲ The iron can be used vertically – e.g. for ironing curtains – as well as horizontally.
▲ ▲ The average amount of time the iron lasted before it stopped working.
▲ ▲ ▲ The condition of the iron after being dropped.

- (a) Which iron is the cheapest?

.....
(1 mark)

- (b) Which iron is the heaviest?

.....
(1 mark)

- (c) Which iron had the best overall performance?

.....
(1 mark)

- (d) Which iron had the worst safety performance?

.....
(1 mark)

- (e) What does the following symbol mean?

▲
(1 mark)

(f) How were the irons tested for safety?

.....
(1 mark)

(g) Recommend **one** of the irons from the chart for the following people.
Give reasons.

(i) An elderly person who does little ironing and has limited money to spend.

I recommend **Iron**

Reasons.....

.....
.....
.....

(4 marks)

(ii) Someone who does a lot of sewing at home. They need a reliable iron for pressing and ironing family clothes.

I recommend **Iron**

Reasons.....

.....
.....
.....

(4 marks)

(h) List **four** rules for the safe use and storage of irons.

1

2

3

4

(4 marks)

END OF QUESTIONS

THERE ARE NO QUESTIONS PRINTED ON THIS PAGE