

Surname	Centre Number	Candidate Number
Other Names		0



GCSE

4723/01

HEALTH AND SOCIAL CARE

Unit 3

P.M. TUESDAY, 21 June 2011

1¼ hours

For Examiner's use only		
Section A	1	
	2	
	3	
	4	
	5	
Section B	6	
	7	
	8	
Total		

INSTRUCTIONS TO CANDIDATES

Use black ink or black ball-point pen. Do not use pencil or gel pen. Do not use correction fluid.

Write your name, centre number and candidate number in the spaces at the top of this page.

Answer **all** questions.

Write your answers in the spaces provided.

INFORMATION FOR CANDIDATES

Section A: 30 marks

Section B: 50 marks

The number of marks is given in brackets at the end of each question or part-question.

You are reminded of the necessity for good English and orderly presentation in your answers.



J U N 1 1 4 7 2 3 0 1 0 1

SECTION A (30 marks)*Answer all questions from this section.*

1. (a) In the table below identify the meaning of the initials PPE.

[1]

Tick (✓) the correct answer.


The meaning of PPE	Tick ✓
Personal Proactive Equipment	
People's Protective Equipment	
Personal Protective Equipment	

- (b) State whether the law of self defence considers the following actions to be **reasonable** or **unreasonable** force.

Tick (✓) the correct answer.

[1, 1]

	Reasonable	Unreasonable
(i) Whilst defending herself, Siân inflicts a minor cut on her attacker.		
(ii) Ken plans to harm the individual who burgled his house.		



(c) Katrina has a 3 year old daughter.

List **three** factors Katrina must consider when buying a child car seat. [3]

(i)

(ii)

(iii)

2. (a) Basheer is a first aider.

When treating a casualty he must at first check three important factors. [3]

Identify the **three** factors.

(i)

(ii)

(iii)

(b) Molly smokes 20 cigarettes a day and wants to give up smoking.


Suggest **three** ways Molly can help herself to give up smoking. [3]

(i)




(ii)

(iii)

4723-01/0003



3. Describe how the mechanical aids shown in the table below assist the individual and the carer.

Mechanical aid	How it assists the individual	How it assists the carer
 <p>A turntable</p>	<p>(a)</p> <p>.....</p> <p>.....</p> <p>.....</p> <p>[1]</p>	<p>(b)</p> <p>.....</p> <p>.....</p> <p>.....</p> <p>[1]</p>
 <p>Sliding sheet</p>	<p>(c)</p> <p>.....</p> <p>.....</p> <p>.....</p> <p>[1]</p>	<p>(d)</p> <p>.....</p> <p>.....</p> <p>.....</p> <p>[1]</p>
 <p>Poles and horizontal bars</p>	<p>(e)</p> <p>.....</p> <p>.....</p> <p>.....</p> <p>[1]</p>	<p>(f)</p> <p>.....</p> <p>.....</p> <p>.....</p> <p>[1]</p>

4. Olivia likes to go out for a meal with friends. They order a bottle of wine with the meal.

(a) State the number of units in a small glass of wine. [1]

.....

(b) Identify **three** factors that influence an individual's tolerance to alcohol. [3]

(i)

(ii)

(iii)



5. Matthew is a care worker and has just completed a food safety course.

(a) Describe **four** ways that a food handler could contaminate food with bacteria. [4]

(i)

.....

(ii)

.....

(iii)

.....

(iv)

.....

(b) Describe **four** ways that a food handler could prevent bacteria contaminating food. [4]

(i)

.....

(ii)

.....


(iii)

.....

(iv)

.....

4723
01/0005



SECTION B (50 marks)

Answer all questions from this section.

6. Martha and her husband, Aron, are both 52 years old.
They like to look after their health.
They have made an appointment with their General Practitioner's (GP's) at the local health centre.

(a) Describe the general health check that both Martha and Aron will be given. [4]

.....

.....

.....

.....

.....

.....

.....

.....

.....

.....

.....

.....

.....

.....

.....

.....

.....

.....

.....

.....

.....

.....

Martha has been referred to the well woman clinic.

(b) Outline what additional advice she may be given. [2]

.....

.....

.....

.....

.....

.....

.....

.....

.....

.....



(c) Martha has received an appointment for breast screening.
It will take place in the mobile breast screening van which will be in her area in four weeks.

(i) Identify the current age range for the national breast screening programme. [1]

.....

(ii) Describe the type of screening test that is performed to detect breast cancer. [2]

.....

.....

.....

.....

.....

(iii) Explain the purpose of a breast screening test. [2]

.....

.....

.....

.....

.....

(iv) Describe the way that Martha can monitor her breasts and what she will be looking for. [4]

.....

.....

.....

.....

.....

.....

.....

.....

.....

.....

.....

4773
01/0007



