

Candidate forename		Candidate surname	
-------------------------------	--	------------------------------	--

Centre number						Candidate number				
--------------------------	--	--	--	--	--	-----------------------------	--	--	--	--

**OXFORD CAMBRIDGE AND RSA EXAMINATIONS
GENERAL CERTIFICATE OF SECONDARY EDUCATION**

A914

HEALTH AND SOCIAL CARE

Safeguarding and Protecting Individuals

TUESDAY 25 JANUARY 2011: Afternoon

DURATION: 1 hour

SUITABLE FOR VISUALLY IMPAIRED CANDIDATES

Candidates answer on the question paper.

OCR SUPPLIED MATERIALS:

None

OTHER MATERIALS REQUIRED:

None

READ INSTRUCTIONS OVERLEAF

INSTRUCTIONS TO CANDIDATES

- **Write your name, centre number and candidate number in the boxes on the first page. Please write clearly and in capital letters.**
- **Use black ink. Pencil may be used for graphs and diagrams only.**
- **Read each question carefully. Make sure you know what you have to do before starting your answer.**
- **Write your answer to each question in the space provided. If additional space is required, you should use the lined pages at the end of this booklet. The question number(s) must be clearly shown.**
- **Answer ALL the questions.**

INFORMATION FOR CANDIDATES

- **The number of marks is given in brackets [] at the end of each question or part question.**
- **The total number of marks for this paper is 60.**

BLANK PAGE

1 Name ONE piece of legislation that helps to protect people with disabilities.

_____ [1]

2 Identify THREE different types of situations when individuals need to be safeguarded.

1 _____

2 _____

3 _____ [3]

4 Explain TWO reasons why staff at a residential unit might ill-treat residents.

1 _____

2 _____

_____ **[4]**

5 Describe the correct method of storing raw meat in a refrigerator.

_____ **[2]**

10 Dave, a first aider, arrives at the scene of an accident. Identify and explain two of his responsibilities.

1 _____

2 _____

_____ **[4]**

11 (a) Identify TWO possible causes of a blocked airway.

1 _____

2 _____ **[2]**

(b) Describe the first aid procedure to follow for an individual with a blocked airway.

_____ **[2]**

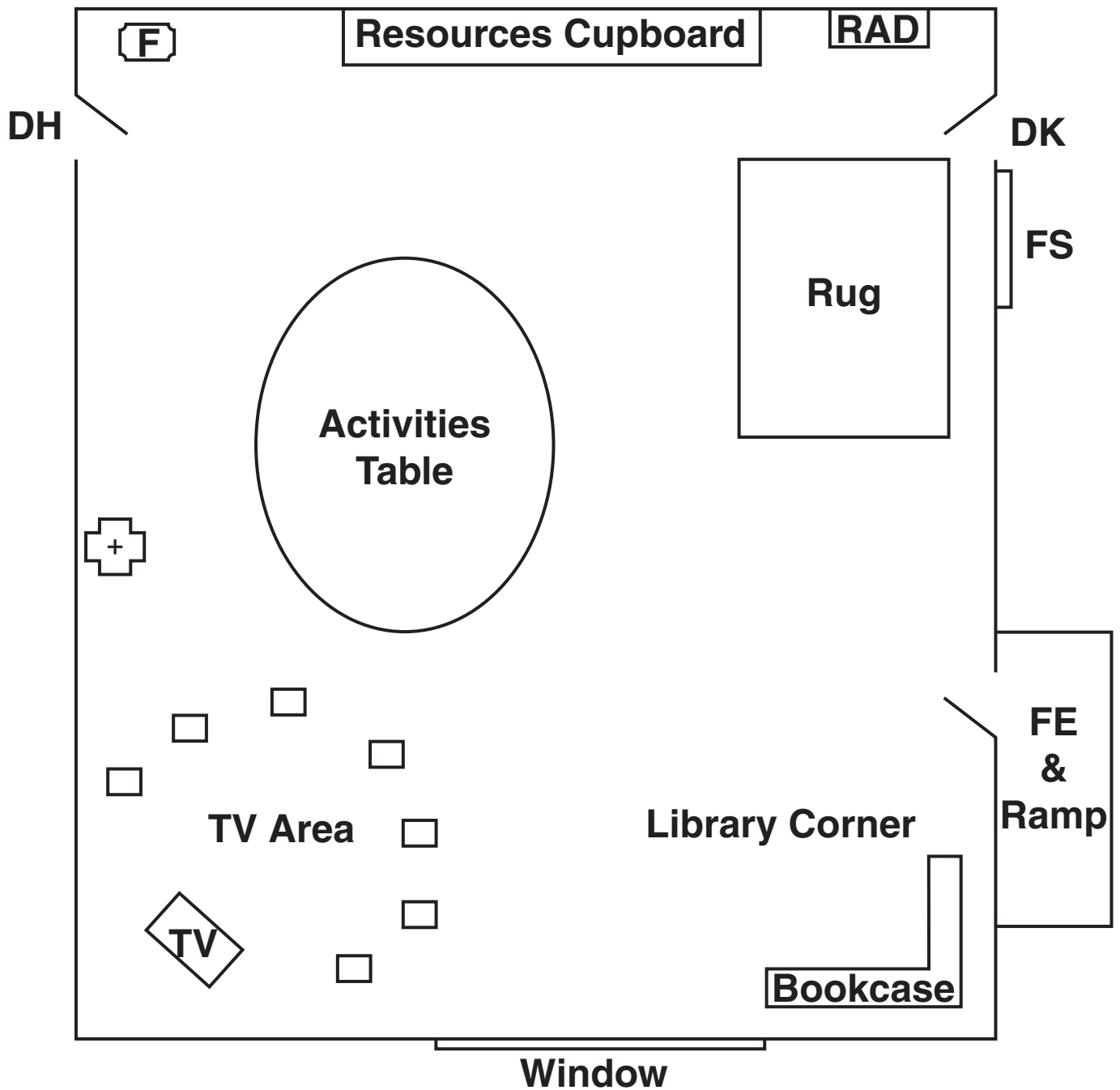
16 Name TWO Regulations that have been formed from the Health and Safety at Work Act 1974.







1 _____

2 _____ **[2]**

BLANK PAGE

PLAN OF SITTING AREA AT BROOKLANDS, A RESIDENTIAL HOME FOR OLDER PEOPLE



- | | | | |
|---|--------------------------|---|-----------------------------|
|  | First Aid Box | FE | Fire Exit |
|  | Door | FS | Food Service Counter |
|  | Fire Extinguisher | DH | Door to Hall |
|  | Radiator | DK | Door to Kitchen |
|  | Chair |  | Television |

[8]

