

WELSH JOINT EDUCATION COMMITTEE AND
OXFORD CAMBRIDGE AND RSA EXAMINATIONS

GENERAL CERTIFICATE OF SECONDARY EDUCATION
GEOGRAPHY SPECIFICATION (Avery Hill)
RESOURCE BOOKLET FOR PAPERS 1 AND 2
MONDAY 4 JUNE 2007

1987/1,2/RB

Morning

Time: 1 hour 30 minutes



*
C
U
P
/
T
3
8
2
1
4
*

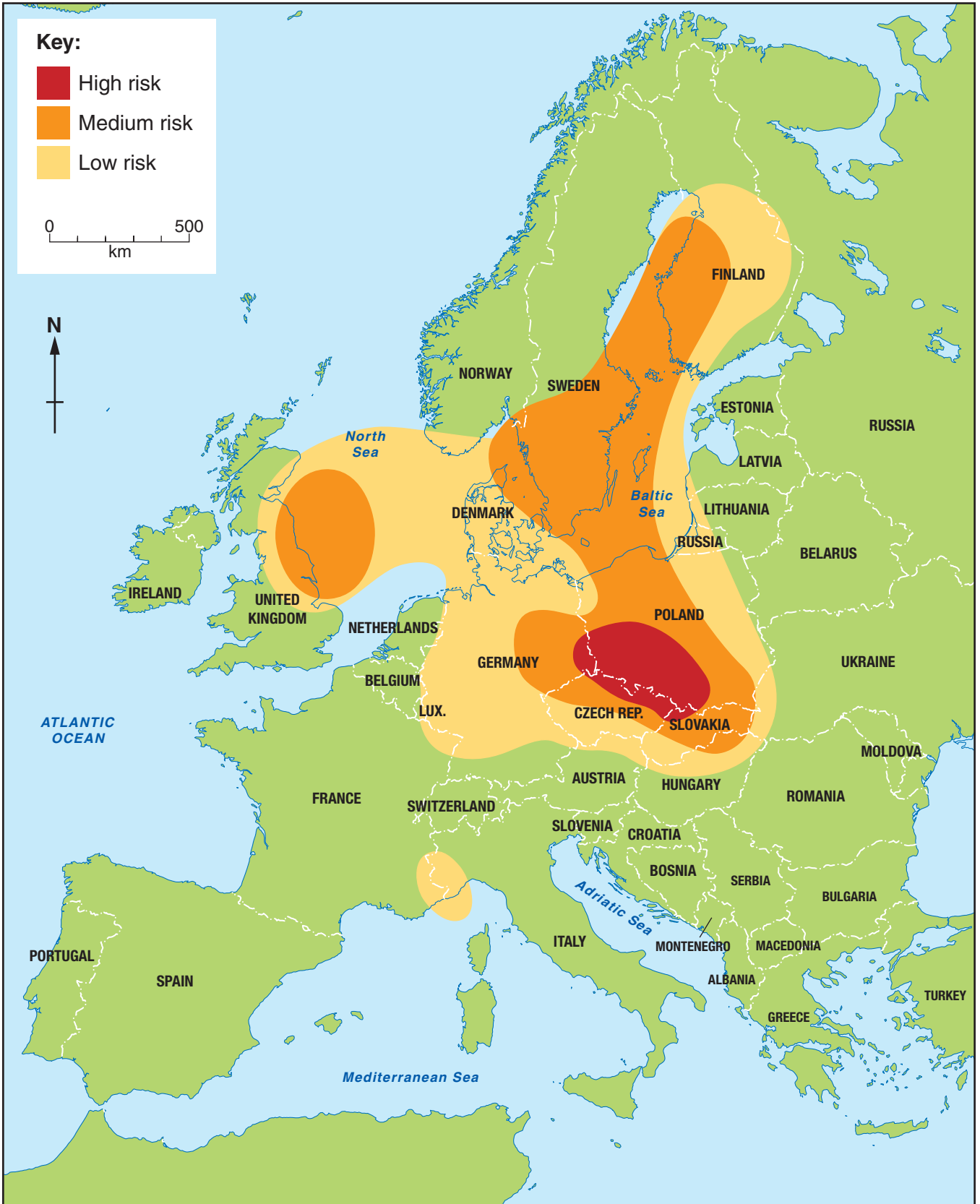
INFORMATION FOR CANDIDATES

- This Resource Booklet contains resources for GCSE Specification B (1987). The questions tell you which resources you need to use.

This document consists of **8** printed pages.

MAP 1 for Question A1

Europe: Acid Rain



© UNEP/GRID-Arendal




Copyright Acknowledgements:

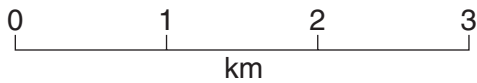
- Map 1 Acid rain in Europe, Jan 1998 © UNEP/GRID-Arendal, www.grida.no
Map 2 Zafarraya 18-43 (1.040) © Servicio Geográfico Del Ejército, Cartografía Militar de España
Photo 1 © geogphotos / Alamy
Photo 2 © geogphotos / Alamy
Map 3 Data: *Human Development Index*, Human Development Report 2005 © United Nations Development Programme
Map 4 Data: www.autointell.com. Reprinted with permission from Automotive Intelligence © Automotive Intelligence®, Frankfurt, Germany

Permission to reproduce items where third-party owned material protected by copyright is included has been sought and cleared where possible. Every reasonable effort has been made by the publisher (OCR) to trace copyright holders, but if any items requiring clearance have unwittingly been included, the publisher will be pleased to make amends at the earliest possible opportunity.

OCR is part of the Cambridge Assessment Group. Cambridge Assessment is the brand name of University of Cambridge Local Examinations Syndicate (UCLES), which is itself a department of the University of Cambridge.

Key:

-  scrubland and cork oak
-  woods
-  settlements
-  roads
-  contours
-  spot heights



scale = 1:50 000



**A fold-out map has been removed
due to copyright restrictions**

Details:
a map of southern Spain, scale 1:50,000,
showing a square area that stretches from
a reservoir at top right (Embalse de los
Bermejales; 3°51'10" E 37°00'04" N) to
mountains at bottom left (including
Majada de Retameros and
Cerro de los Mejanos)

Question B3

**A fold-out map has been removed
due to copyright restrictions**

Details:

a map of southern Spain, scale 1:50,000,
showing a square area that stretches from
a reservoir at top right (Embalse de los
Bermejales; 3°51'10" E 37°00'04" N) to
mountains at bottom left (including
Majada de Retameros and
Cerro de los Mejanos)

PHOTOGRAPH 1 for Question B4



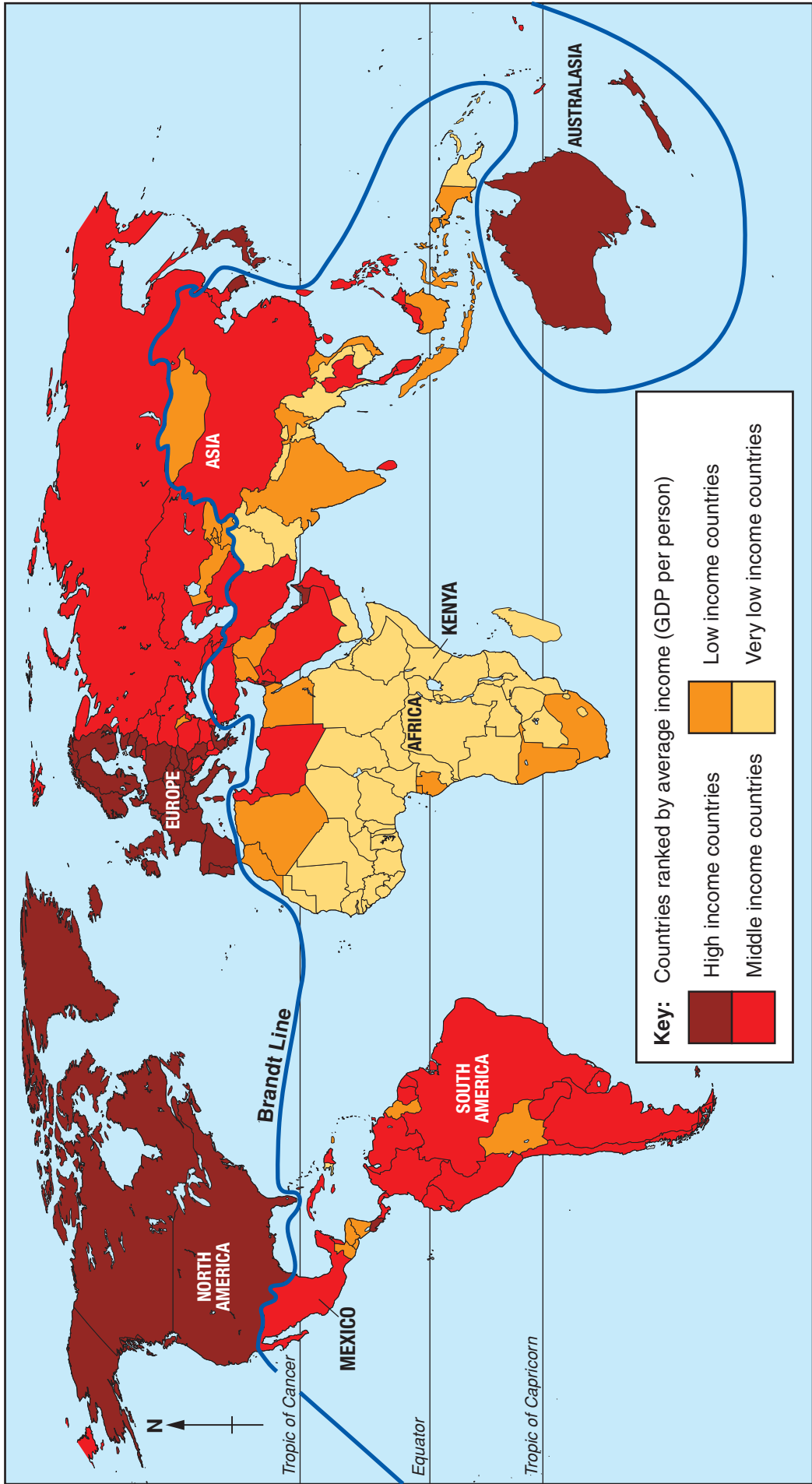
© geogphotos / Alamy

PHOTOGRAPH 2 for Question B4

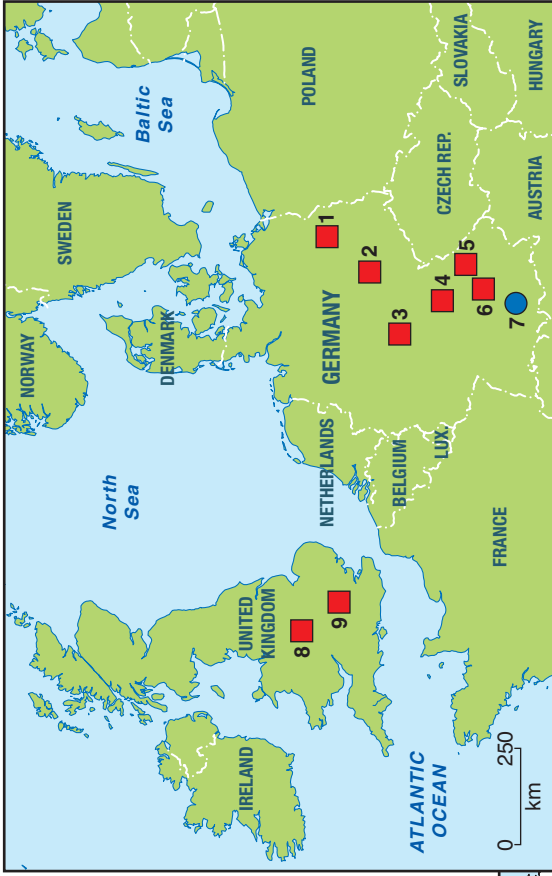


© geogphotos / Alamy

MAP 3 for Question C5

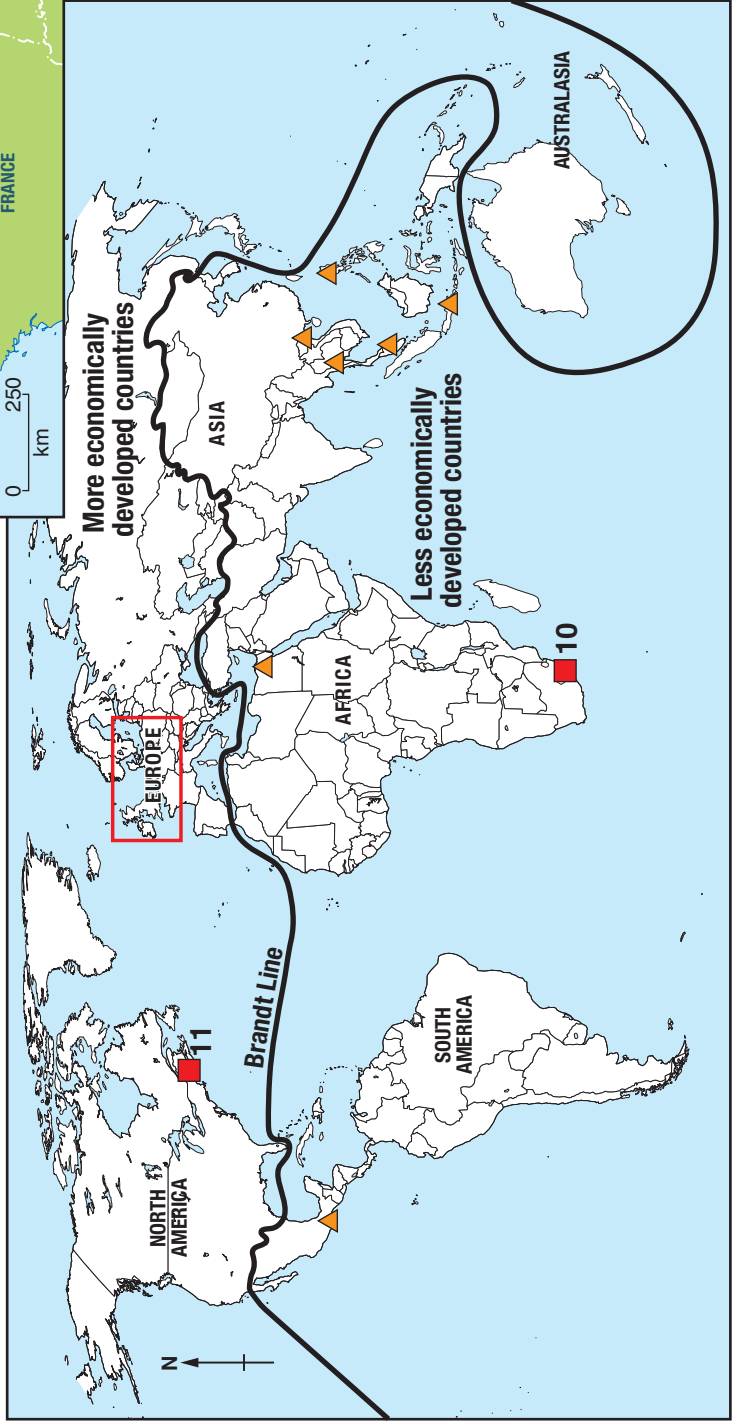


MAP 4 for Question C6



Key:

- Munich headquarters
- Car production factories (make whole cars from start to finish)
- ▲ Car assembly factories (put together large parts of cars which have been made somewhere else)



Car Production Factories

Location	N° of workers
1 Berlin	500
2 Leipzig	5500
3 Eisenach	220
4 Regensburg	10000
5 Dingolfing	23000
6 Landshut	3100
7 Munich	9300
8 Hams Hall	650
9 Oxford	3500
10 Rosslyn (South Africa)	3200
11 Spartanburg (USA)	4500