

**GENERAL CERTIFICATE OF SECONDARY EDUCATION  
GEOGRAPHY A**

**A671/01**

Extreme Environments (Foundation Tier)

Candidates answer on the question paper.

**OCR supplied materials:**

- An insert (A671/01/02/1 – inserted)

**Other materials required:**

None

**Monday 13 June 2011  
Morning**

**Duration: 1 hour**



Candidate forename		Candidate surname	
-----------------------	--	----------------------	--

Centre number						Candidate number				
---------------	--	--	--	--	--	------------------	--	--	--	--

**MODIFIED LANGUAGE**

**INSTRUCTIONS TO CANDIDATES**

- The insert will be found in the centre of this document.
- Write your name, centre number and candidate number in the boxes above. Please write clearly and in capital letters.
- Use black ink. Pencil may be used for graphs and diagrams only.
- Read each question carefully. Make sure you know what you have to do before starting your answer.
- Write your answer to each question in the space provided. If additional space is required, you should use the lined pages at the end of this booklet. The question number(s) must be clearly shown.
- Answer **all** the questions.
- Do **not** write in the bar codes.

**INFORMATION FOR CANDIDATES**

- The number of marks is given in brackets [ ] at the end of each question or part question.
- The total number of marks for this paper is **50**.
- You will be awarded marks in questions 1(c) and 3(c) for the quality of written communication of your answer.
- This document consists of **16** pages. Any blank pages are indicated.

**Section A – Hot Deserts and Extreme Environments generally**

Answer **all** questions.

- 1 (a) Which **two** of the following statements describe an extreme environment?

Underline the statements which you think describe an extreme environment.

An area where it is difficult for people to survive.

An area which is polluted.

An area where the tourist industry is important.

An area with a harsh climate and landscape.

An area which is untouched by people.

[2]

- (b) Some environments in the UK may be considered extreme.

Study Fig. 1A below and Fig. 1B in the separate Insert.

- (i) Mingulay became uninhabited in 1912.

Suggest **two** reasons why people found it difficult to live on Mingulay.

1 .....

2 ..... [2]

- (ii) Give **two** ways in which Mingulay is used by people today.

1 .....

2 ..... [2]

Mingulay is an uninhabited island off the north west coast of Scotland. The last residents left in 1912 when they found that they were unable to make a living in the harsh conditions. Only the ruins of the village are left in a sheltered bay which provides the only landing place.

The National Trust for Scotland has owned the island since 2000. It is now used for grazing sheep. The cliffs have become very popular with rock climbers. It is well known for its seabirds. They nest in the cliffs which are amongst the highest in the British Isles – black, jagged and battered by some of the worst storms in Scotland.

**Fig. 1A Extract about Mingulay**



2 (a) Complete the sentences to describe the location of areas of hot deserts.

Choose your answers from this list.

<b>Equator</b>	<b>Arctic</b>	<b>Tropics</b>	<b>rivers</b>
<b>eastern</b>	<b>southern</b>	<b>western</b>	

Hot deserts are located on or close to the ..... of Cancer and Capricorn.

Some hot deserts are a long distance from the ocean but others are on the

..... side of continents.

[2]

(b) Study Fig. 2, a poem written about a hot desert.

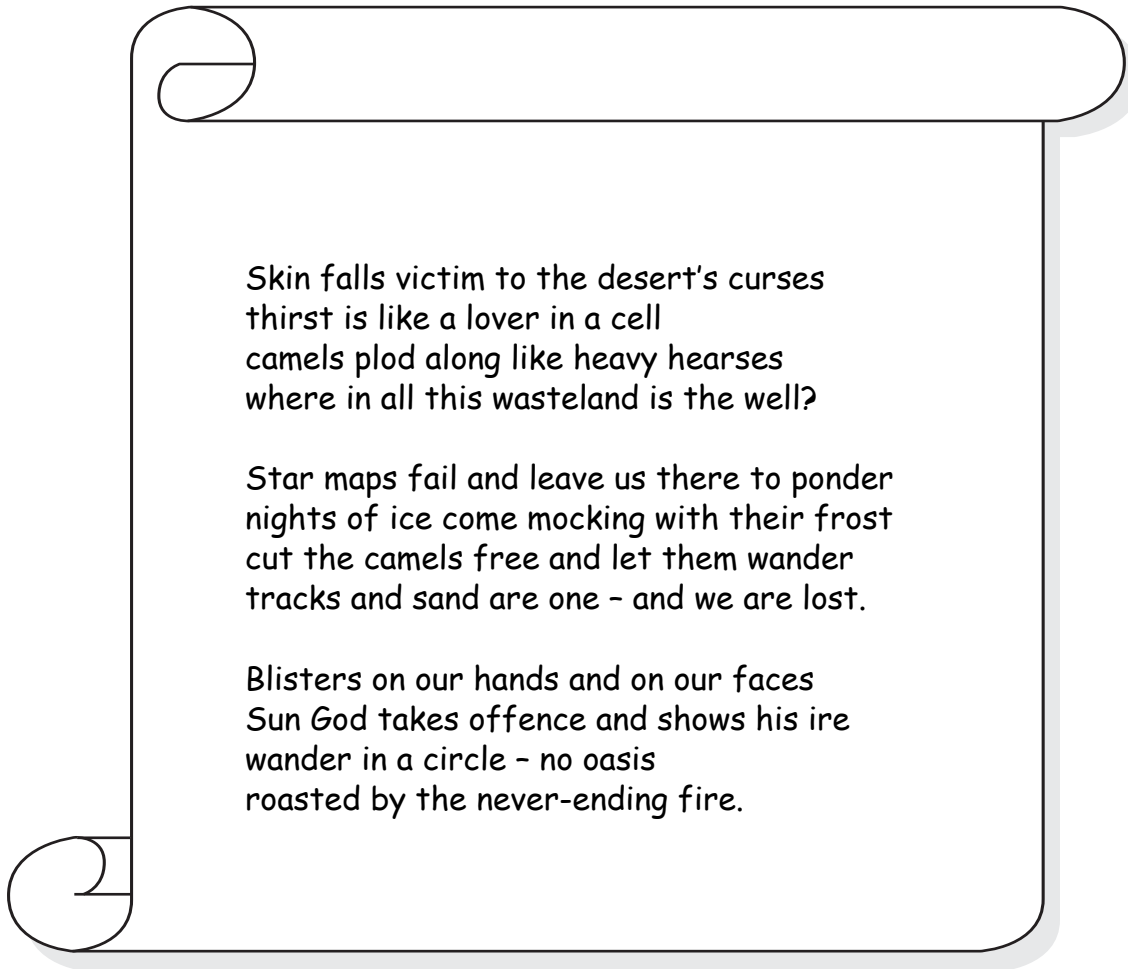


Fig. 2

Give **two** pieces of evidence from the poem which suggest that a hot desert environment is an extreme environment.

1 .....

.....

2 .....

..... [2]

(c) Study Photographs A and B in the separate Insert.

(i) Identify the landforms shown in Photographs A and B.

Choose from this list:

- |                  |                      |                |
|------------------|----------------------|----------------|
| <b>sand dune</b> | <b>wadi</b>          | <b>yardang</b> |
| <b>zeugen</b>    | <b>rock pedestal</b> |                |

Photograph A .....

Photograph B ..... [2]

(ii) Describe **two** features of the landform shown in Photograph A.

1 .....  
.....


2 .....  
..... [2]

(iii) The landform in Photograph A was created by running water.

Explain why there are landforms such as the one in Photograph A in some hot deserts.

.....  
.....  
.....  
..... [2]

(iv) Fully label the diagram below to show how the landform in Photograph B was formed.



[3]

[Total: 13]

[Section A Total: 25]

**Section B – Your chosen extreme environment**

Answer **all** questions. Your answers in this section must refer to your chosen extreme environment.  
**Circle** the extreme environment which you have studied:

Mountain

Polar

**3 (a)** Study Figs 3A and 3B in the separate Insert. These are paintings of extreme environments.

**(i)** Which painting, Fig. 3A or Fig. 3B, shows the type of extreme environment which you have studied?

Painting chosen Fig. .... [1]

**(ii)** Describe **two** features of the extreme environment shown in the painting.

1 .....  
.....  
2 .....  
..... [2]

**(b)** Some films are set in polar or mountain environments.

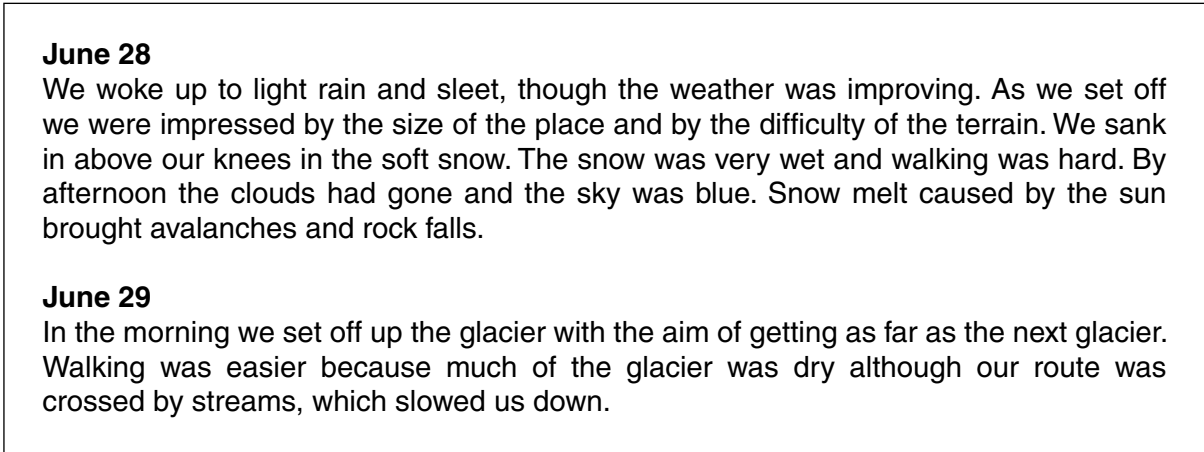
Suggest advantages of your chosen extreme environment for making a film.

.....  
.....  
.....  
.....  
..... [3]





4 (a) Study Fig. 4.



**Fig. 4 Diary page from an expedition to an area in Greenland**

(i) People face challenges in polar and mountain areas.

Identify **two** challenges faced by people in this expedition to Greenland.

1 .....

.....

2 .....

..... [2]

(ii) Suggest **four** items that were needed on this expedition to Greenland.

For each item explain why it was needed.

Item 1 .....

Reason .....

Item 2 .....

Reason .....

Item 3 .....

Reason .....

Item 4 .....

Reason ..... [4]

(b) (i) Write the name of the polar or mountain area you have studied.

Describe **three** different ways people have used this area.

Name of polar or mountain area .....

1 .....

.....

2 .....

.....

3 .....

..... [3]

(ii) Explain how the natural environment of this area may be damaged by the way it has been used.

.....

.....

.....

.....

.....

.....

.....

..... [4]

[Total: 13]

[Section B Total: 25]





14  
BLANK PAGE

PLEASE DO NOT WRITE ON THIS PAGE

15  
BLANK PAGE

PLEASE DO NOT WRITE ON THIS PAGE

**PLEASE DO NOT WRITE ON THIS PAGE**



**Copyright Information**

OCR is committed to seeking permission to reproduce all third-party content that it uses in its assessment materials. OCR has attempted to identify and contact all copyright holders whose work is used in this paper. To avoid the issue of disclosure of answer-related information to candidates, all copyright acknowledgements are reproduced in the OCR Copyright Acknowledgements Booklet. This is produced for each series of examinations and is freely available to download from our public website ([www.ocr.org.uk](http://www.ocr.org.uk)) after the live examination series.

If OCR has unwittingly failed to correctly acknowledge or clear any third-party content in this assessment material, OCR will be happy to correct its mistake at the earliest possible opportunity.

For queries or further information please contact the Copyright Team, First Floor, 9 Hills Road, Cambridge CB2 1GE.

OCR is part of the Cambridge Assessment Group; Cambridge Assessment is the brand name of University of Cambridge Local Examinations Syndicate (UCLES), which is itself a department of the University of Cambridge.