



Rewarding Learning

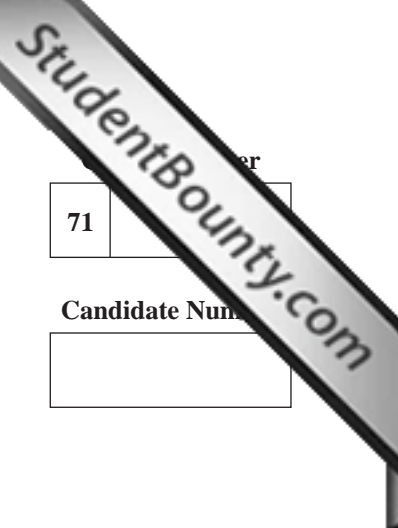
General Certificate of Secondary Education  
2010

# Geography

Paper 2  
Higher Tier

[G3604]

THURSDAY 17 JUNE, AFTERNOON



71	er
Candidate Number	
<input type="text"/>	

### TIME

1 hour 30 minutes.

### INSTRUCTIONS TO CANDIDATES

Write your Centre Number and Candidate Number in the spaces provided at the top of this page.  
 Write your answers in the spaces provided in this question paper.  
 Answer **all three** questions  
 You are provided with an O.S. map for use with **Question 3**.  
 Do not write your answer on this map.

### INFORMATION FOR CANDIDATES

The total mark for this paper is 126, including a maximum of 6 marks for quality of written communication.  
 Figures in brackets printed down the right-hand side of pages indicate the marks awarded to each question or part question.  
 A ruler is needed for use with Question 3.



6277

For Examiner's use only	
Question Number	Marks
1	
2	
3	
QWC	

<b>Total Marks</b>	
--------------------	--

## Theme D: Population and Resources

Examiner Only

Marks    Remark

- 1 (a) Study **Table 1**, which shows the population age structures of various countries in 2007. Answer the questions that follow.

**Table 1**

Level of Development	Country	% of people aged 0–14	% of people aged 15–64	% of people aged over 65
LEDC	Ethiopia	50	48	2
LEDC	Nigeria	45	52	3
MEDC	Germany	15	69	
MEDC	Japan	10	70	20

*Source: Principal Examiner*

- (i) State the name of the country with the highest percentage of youth dependents.

\_\_\_\_\_ [1]

- (ii) Complete **Table 1** to show the % of people aged over 65 in Germany. [1]

- (iii) State the meaning of the term **population structure**.

\_\_\_\_\_

\_\_\_\_\_

\_\_\_\_\_

\_\_\_\_\_ [2]

(iv) Using examples from **Table 1**, show how the level of development influences both the youth and aged dependent populations.

---

---

---

---

---

---

---

---

---

---

---

---

---

---

---

---

---

---

---

---

---

---

---

[6]

(v) Describe the shape of a population pyramid that shows evidence of **in-migration**.

---

---

---

---

---

[2]

Examiner Only

Marks Remark

Marks	Remark

(b) Study **Fig. 1**, which shows some predictions about future population growth. Answer the questions which follow:

Key predictions on global population growth.
Global population rises to 9.3 billion by 2050.
MEDC's population remains the same at 1.2 billion by 2050.
The Earth's resources will be placed under even greater pressure by 2050.

Source: Principal Examiner

**Fig. 1**

(i) Underline the correct population total for LEDCs by 2050.

**6.1 billion**                      **8.1 billion**                      **9.3 billion**                      [1]

(ii) State fully **one** reason why the population of MEDCs is likely to remain the same by 2050.

---

---

---

---

---

---

---

---

[3]

(iii) State the term which means that the **number of people in an area is low compared to the available resources.**

---

[1]

Examiner Only	
Marks	Remark

(iv) Using a case study of population change in a LEDC that you have studied, describe how the **birth rate and death rate** have changed over time.

LEDC \_\_\_\_\_

Change in birth rate and death rate

\_\_\_\_\_

\_\_\_\_\_

\_\_\_\_\_

\_\_\_\_\_

\_\_\_\_\_

\_\_\_\_\_

\_\_\_\_\_

\_\_\_\_\_

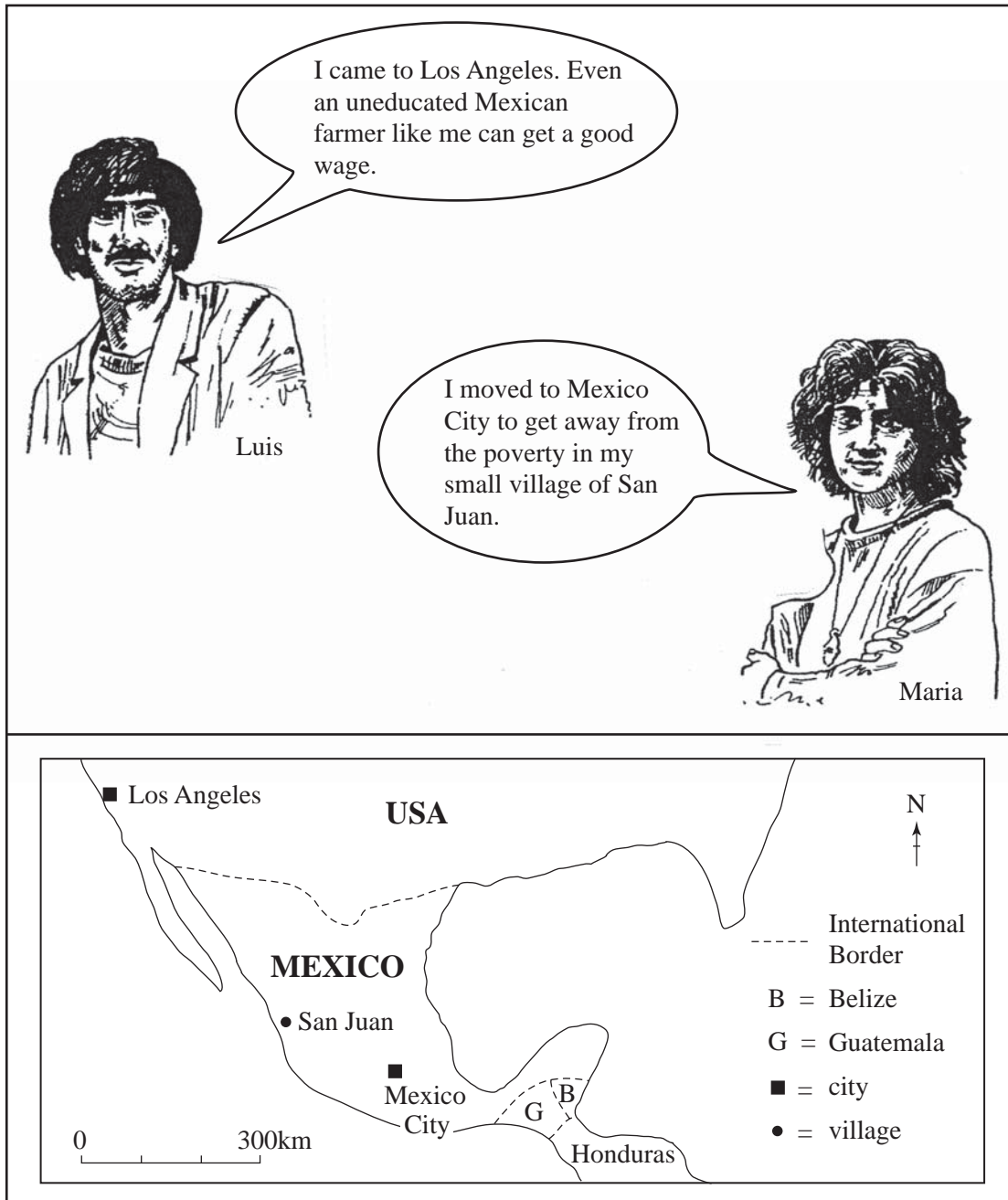
\_\_\_\_\_

\_\_\_\_\_ [4]

Examiner Only	
Marks	Remark

(c) Study **Fig. 2** which shows the views of people migrating. Answer the questions which follow.

Examiner Only	
Marks	Remark



Source: Principal Examiner

**Fig. 2**

(i) State the direction Los Angeles is from Mexico City.

\_\_\_\_\_ [1]

(ii) Name the person who is NOT an international migrant.

\_\_\_\_\_ [1]

**(iii)** Migration can bring many impacts to an area. State fully **one negative** impact it can bring.

---

---

---

---

---

---

---

[3]

**(d)** Using a case study of population density in an E.U. country (other than the British Isles) state fully how **one** physical and **one** economic factor affects an area of low density within that country.

Name of E.U. country \_\_\_\_\_

---

---

---

---

---

---

---

---

---

---

---

---

---

---

---

---

---

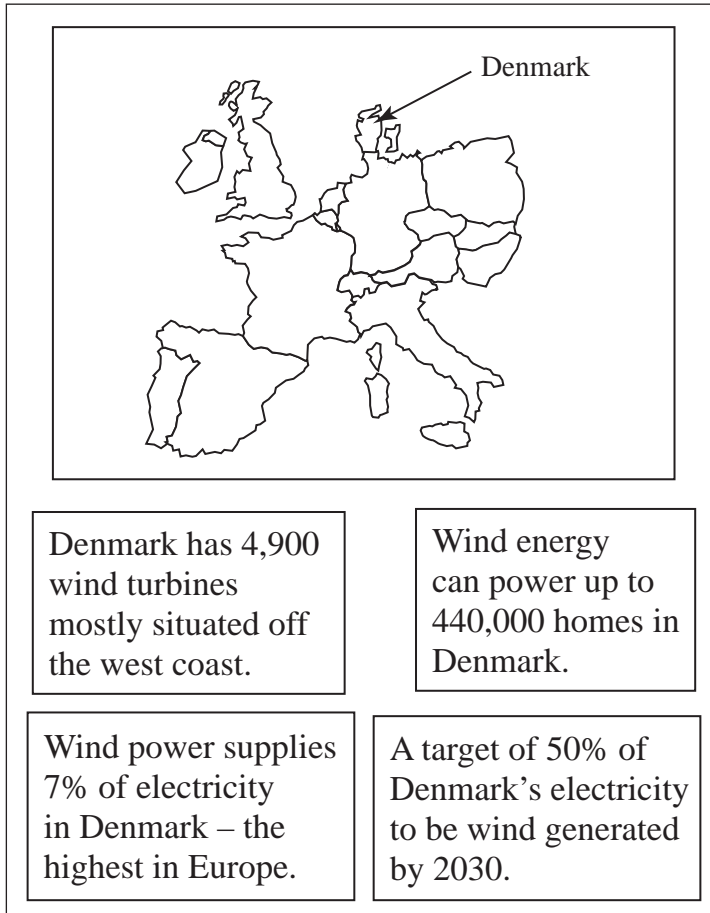
---

---

[6]

Examiner Only	
Marks	Remark

(e) Study **Fig. 3** which shows statements on how renewable energy is being used in Denmark. Answer the questions that follow.



**Fig. 3**

Source: Principal Examiner

(i) Name **one** renewable resource other than wind power.

\_\_\_\_\_ [1]

(ii) State the meaning of the term **resource depletion**.

\_\_\_\_\_  
\_\_\_\_\_  
\_\_\_\_\_  
\_\_\_\_\_ [2]

Examiner Only	
Marks	Remark



(iii) Using Fig. 3, describe and explain how Denmark is promoting a sustainable approach to energy use.

---

---

---

---

---

---

---

---

---

---

---

---

---

---

---

---

---

---

---

---

---

---

---

---

[5]

Examiner Only	
Marks	Remark

[Turn over



(iii) State fully **one** advantage Fair trade can bring to LEDCs.

---

---

---

---

---

---

---

---

[3]

(b) Study **Fig. 5** which names some types of aid available to LEDCs.  
Answer the questions which follow.

- Bilateral Aid
- Aid from Voluntary Organisations
- Tied Aid
- Multilateral Aid

Fig. 5

(i) Choose **two** types of aid from **Fig. 5** and describe how each operates.

1. \_\_\_\_\_

---

---

---

---

---

---

---

---

---

---

2. \_\_\_\_\_

---

---

---

---

---

---

---

---

---

---

[6]

Examiner Only	
Marks	Remark

(ii) State fully **one** reason why MEDCs give aid to LEDCs.

---

---

---

---

---

---

---

---

---

---

[3]

(iii) State **three** disadvantages aid can cause in LEDCs

1. 

---

---

2. 

---

---

3. 

---

---

---

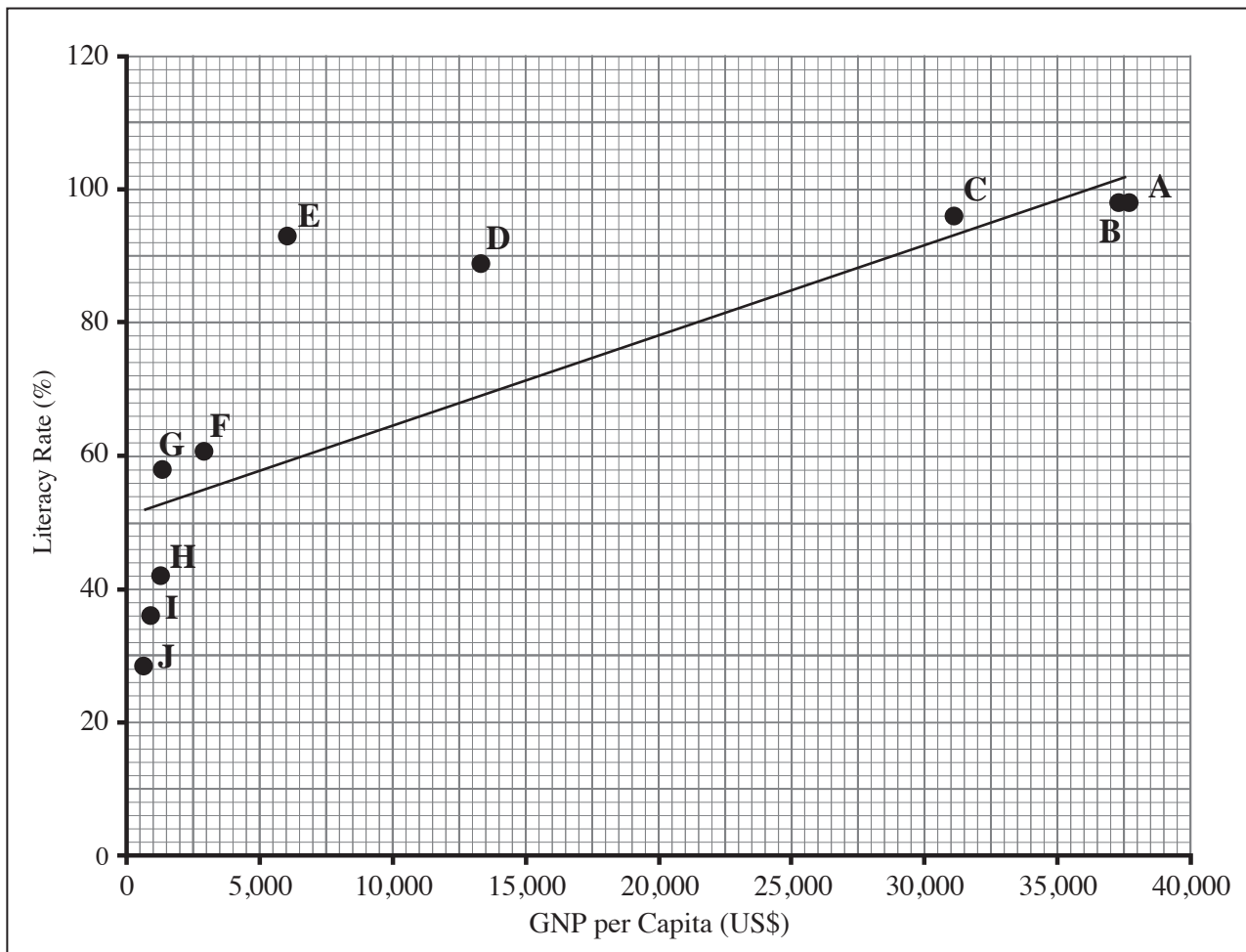
[3]

Examiner Only	
Marks	Remark

**BLANK PAGE**

**(Questions continue overleaf)**

(c) Study **Fig. 6** and **Table 2** which show a scatter graph and table comparing GNP with Literacy rate for ten countries which are named in the table. Answer the questions which follow.



Source: Principal Examiner

**Fig. 6**

**Table 2**

<p>□ Literacy rate shows the percentage of people in the country who can read and write.</p> <p>□ GNP per capita gives an indication of the average annual earnings of people in a country.</p>	<b>Letter on graph</b>	<b>Country</b>
	A	Austria
	B	Ireland
	C	Spain
	D	Turkey
	E	China
	F	India
	G	Ghana
	H	Gambia
	I	Ethiopia
J	Niger	

(i) State the name of country in Fig. 6 with the lowest literacy rate.

\_\_\_\_\_ [1]

(ii) Describe the relationship shown in Fig. 6 between GNP and Literacy Rate.

\_\_\_\_\_  
\_\_\_\_\_  
\_\_\_\_\_  
\_\_\_\_\_  
\_\_\_\_\_  
\_\_\_\_\_  
\_\_\_\_\_  
\_\_\_\_\_ [4]

(iii) Classify the two indicators from Fig. 6 as economic or social.

GNP = \_\_\_\_\_ indicator

Literacy rate = \_\_\_\_\_ indicator [2]

(iv) Explain why it is important to use both social and economic indicators when measuring development.

\_\_\_\_\_  
\_\_\_\_\_  
\_\_\_\_\_  
\_\_\_\_\_  
\_\_\_\_\_  
\_\_\_\_\_ [3]

Examiner Only	
Marks	Remark

(d) Study **Fig. 7** which shows an area called Silicon Glen, where many hi-tech industries choose to locate in the U.K. Answer the questions which follow.

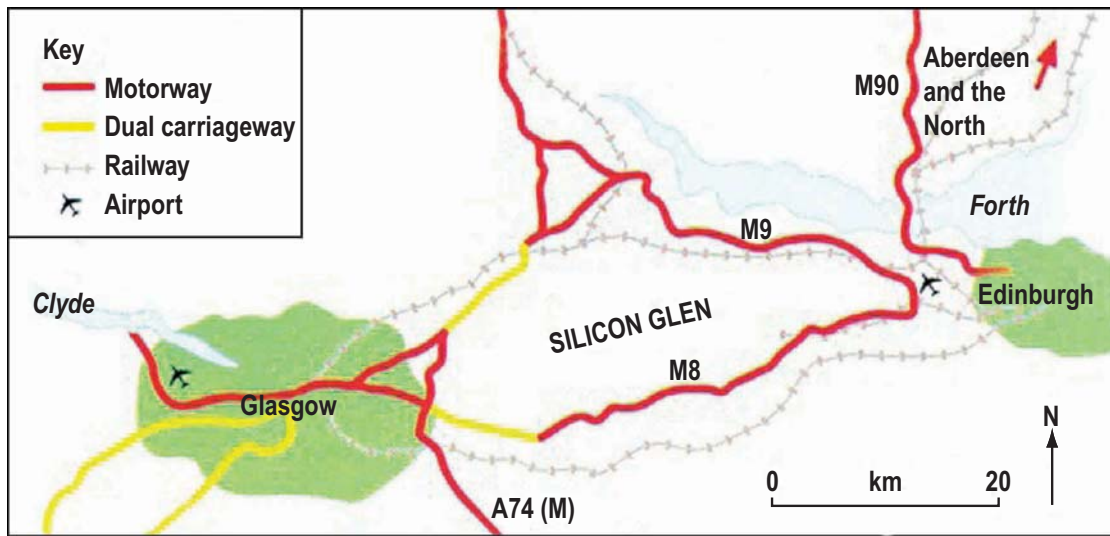


Figure from Complete Geography by Simon Chapman et al (OUP, 1998). Copyright © Oxford University Press 1998, reprinted by permission of Oxford University Press

**Fig. 7**

(i) Name the motorway which goes north out of Edinburgh

\_\_\_\_\_ [1]

(ii) State fully **one** reason why Silicon Glen might attract hi-tech industries.

\_\_\_\_\_  
 \_\_\_\_\_  
 \_\_\_\_\_  
 \_\_\_\_\_  
 \_\_\_\_\_  
 \_\_\_\_\_  
 \_\_\_\_\_ [3]

Examiner Only	
Marks	Remark



(iii) State the meaning of the term **hi-tech industry**.

---

---

---

---

[2]

(e) Name **one** transnational corporation (TNC) you have studied and state fully **two** reasons why it changed the location of its factories from a MEDC to a LEDC.

Name of TNC \_\_\_\_\_

Reasons for moving

---

---

---

---

---

---

---

---

---

---

---

---

---

---

---

---

---

---

[6]

Examiner Only	
Marks	Remark

**BLANK PAGE**

## Theme F: Settlements and Change

Examiner Only

Marks Remark

3 (a) Study the Ordnance Survey extract of Durham in England and answer the questions which follow.

(i) State and explain **one** factor which may have influenced the original choice of this site for Durham (GR 2742).

Factor \_\_\_\_\_ [1]

---

---

---

---

---

---

---

---

(ii) State the straight line distance from the Park and Ride terminus at 307446 to the bus and coach station in the centre of Durham at 269426.

\_\_\_\_\_ km [2]

(iii) Suggest **one** reason why GR 3044 is a good location for a Park and Ride facility.

---

---

---

---

---

(b) Study **Fig. 8** which gives information about the Park and Ride facilities in Durham. Answer the question which follows.

Examiner Only	
Marks	Remark



Belmont  
Park and Ride  
(GR 3044)

Three successful Park and Ride sites were built on the outskirts of Durham in 2005.

1.2 million people used the service in the first 2 years and numbers are increasing all the time.

There are 1000 parking spaces at the sites and frequent buses take people into the city centre 6 days per week.

There are now more short term expensive car-parks in the city centre.

Durham City Council are planning to extend the size of the Park and Ride car-parks to hold more cars and also to build 2 new Park and Ride facilities for other areas of the city.

Transport in Durham is now more sustainable because of Park and Ride.

© Oliver Dixon <http://geograph.org.uk/photo/373392>

**Fig. 8**

**(i)** Explain how the Park and Ride facilities help ease traffic in the centre of Durham.

---

---

---

---

---

---

---

---

[3]

**(ii)** Explain how the Park and Ride facilities help Durham become a more sustainable city.

---

---

---

---

---

---

---

---

[3]

Examiner Only	
Marks	Remark

[Turn over

(iii) Arrange the following settlements in order of size beginning with the largest.

Durham (GR 2742)                      Sherburn (GR 3142)  
 Edmondsley (GR 2349)                Sacriston (GR 2447)

**Table 3**

Rank Order	Settlement
1	
2	
3	
4	

[4]

(iv) State the term used to describe the arrangement of settlements in order of importance in a given area.

\_\_\_\_\_ [1]

(v) Complete **Table 4** to show which services are available in Sacriston (GR 2447).

**Table 4**

Settlement	Post Office	Church	Public house	2 or more roads	Bus Station	School	Hospital
Durham	✓	✓	✓	✓	✓	✓	✓
Sacriston	✓			✓			
Edmondsley	✓		✓	✓			

[3]

Examiner Only	
Marks	Remark

(vi) State fully why there is a variation in the number and variety of services in the settlements in **Table 4**.

---

---

---

---

---

---

---

---

---

---

---

---

---

---

---

[5]

Examiner Only	
Marks	Remark

[Turn over

(c) Study **Table 5** which shows the urban population as a percentage of the total population in different areas. Answer the questions which follow.

**Table 5**

<b>Urban Population as a Percentage of the Total Population</b>			
	<b>1950</b>	<b>1990</b>	<b>2030 (estimated)</b>
MEDCs	55	73	84
LEDCs	18	33	56

*© Tables from Geog GCSE by Anna King et al (OUP, 2006), copyright © Oxford University Press 2006, reprinted by permission of Oxford University Press.*

(i) Compare how urbanisation is changing over time as shown in **Table 5**.

---

---

---

---

---

---

---

---

[4]

(ii) State fully **one** reason for urbanisation in LEDCs.

---

---

---

---

---

---

---

---

[3]

Examiner Only	
Marks	Remark



(d) Many inner city areas have been redeveloped and improved. Evaluate **two** measures used to improve an inner city area you have studied.

Name of Inner City Area \_\_\_\_\_

---



---



---



---



---



---



---



---



---



---



---



---



---



---



---



---



---



---



---



---



---

[6]

Examiner Only	
Marks	Remark
Quality of Written Communication	

---

**THIS IS THE END OF THE QUESTION PAPER**

---

Permission to reproduce all copyright material has been applied for.  
In some cases, efforts to contact copyright holders may have been unsuccessful and CCEA  
will be happy to rectify any omissions of acknowledgement in future if notified.