

GEOGRAPHY (SPECIFICATION B)
Unit 3 Investigating the Shrinking World
Higher Tier

H

For this paper you must have:

- the insert (enclosed)
- a ruler

You may use a calculator.

Time allowed: 1 hour

Instructions

- Use black ink or black ball-point pen.
- Fill in the boxes at the top of this page.
- Answer **either** Section A **or** Section B.
- You must answer the questions in the spaces provided. Answers written in margins or on blank pages will not be marked.
- Do all rough work in this book. Cross through any work you do not want to be marked.

Information

- The maximum mark for this paper is 50.
- The marks for questions are shown in brackets.
- You will be marked on your ability to:
 - use an appropriate form and style of writing
 - organise relevant information clearly and coherently
 - use specialist vocabulary where appropriate.

For Examiner's Use			
Question	Mark	Question	Mark
1			
2			
TOTAL			
Examiner's Initials			



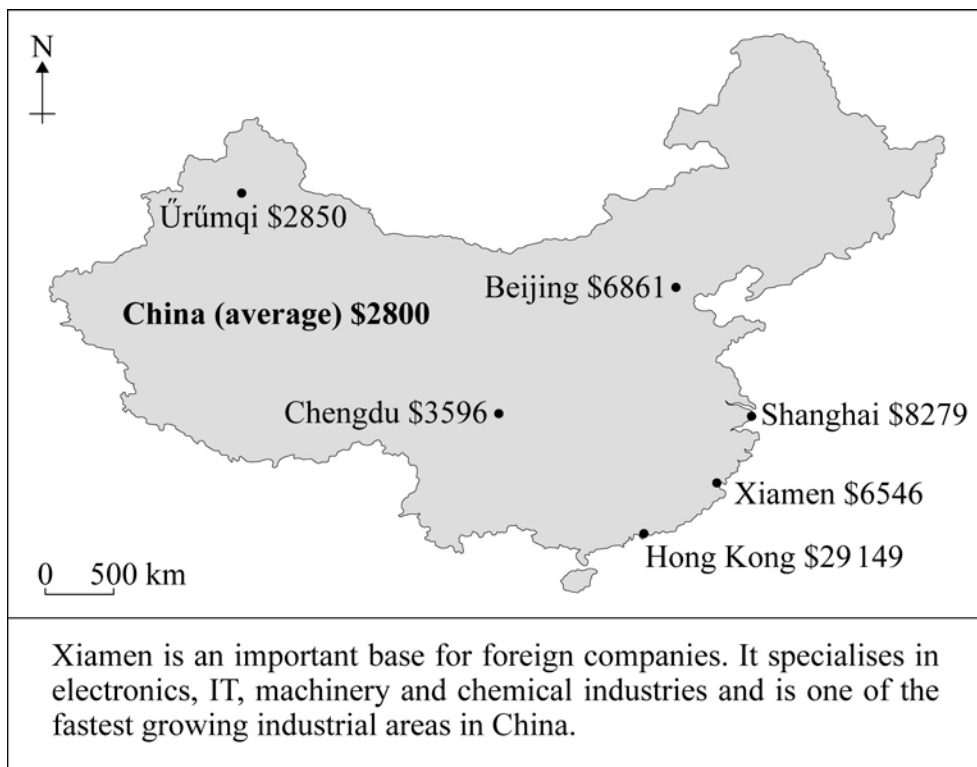
SECTION A – INVESTIGATING THE GLOBALISATION OF INDUSTRY

Answer **either** Section A **or** Section B.

Total for this question: 50 marks

- 1 (a) Study **Figure 1**, a map of China showing the location of some major cities and their GNI (Gross National Income) per person per year in US dollars.

Figure 1



- 1 (a) (i) Describe the location of Xiamen.

.....

.....

.....

.....

.....

(2 marks)



Barcode

1 (a) (ii) Compare the GNI of Xiamen with the other cities shown on **Figure 1.**

.....

.....

.....

.....

.....

.....

.....

.....

.....

.....

(4 marks)

(Extra space)

.....

.....

.....

Question 1 continues on the next page



1 (a) (iii) GNI is one way in which development can be measured.

How effective do you think GNI is as a way of measuring the level of development of a country?

.....

.....

.....

.....

.....

.....

.....

.....

.....

(4 marks)

(Extra space)

.....

.....

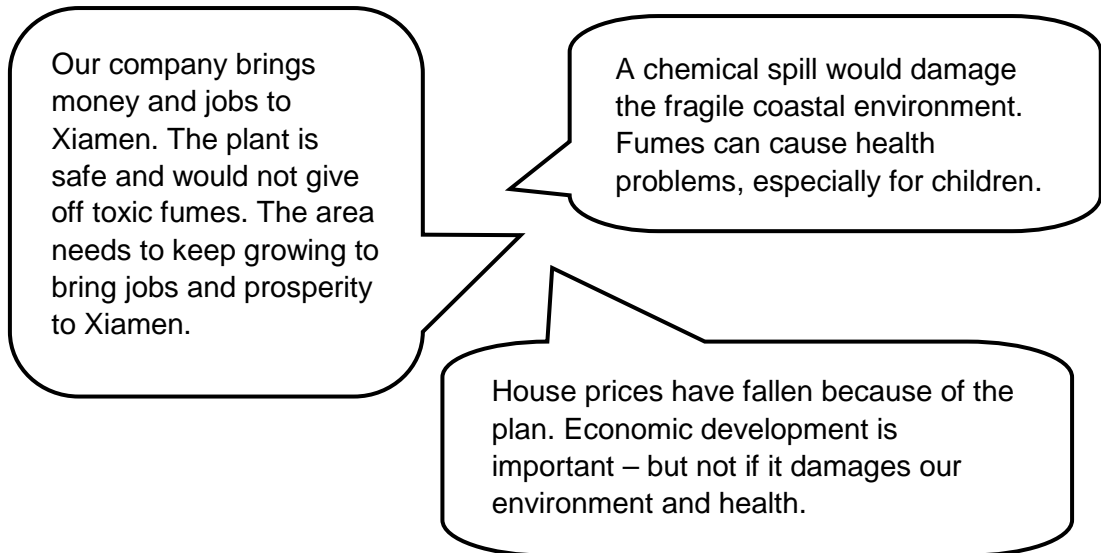
.....



- 1 (b) A new chemical plant is planned for Xiamen.

Study **Figure 2** which shows some opinions about the new plant.

Figure 2



- 1 (b) (i) Use **Figure 2** to help you complete the following table to show some of the possible impacts of the new plant on Xiamen.

Economic Impact		Other companies might come to Xiamen because of the new chemical plant
Social Impact		
Environmental Impact	The new plant would be an eyesore	

(4 marks)



1 (b) (ii) Do you think that the new chemical plant should be built in Xiamen?

Explain the reasons for your decision.

Decision: **Yes** **No** (Circle your choice)

Explanation:

.....

.....

.....

.....

.....

.....

.....

.....

.....

.....

.....

(6 marks)

(Extra space)

.....

.....

.....

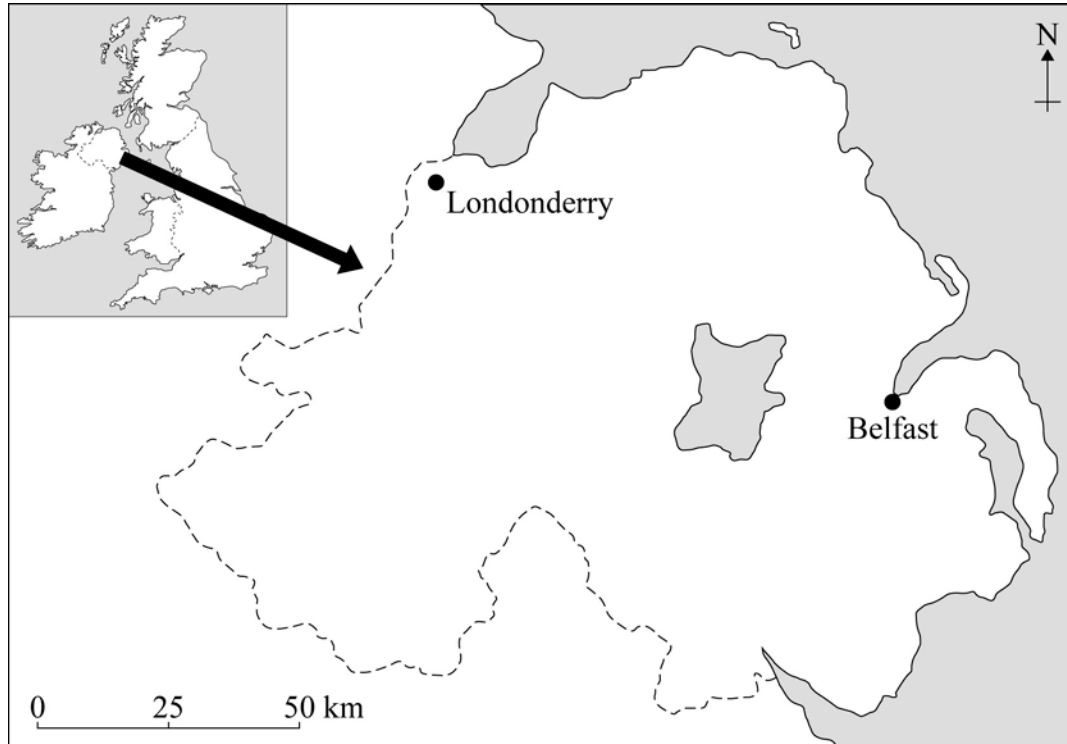
.....



Barcode

- 1 (c) Study **Figure 3**, a map of the North of Ireland.

Figure 3



- 1 (c) (i) What direction is Londonderry from Belfast?

.....
(1 mark)

- 1 (c) (ii) Give the straight line distance in kilometres from Belfast to Londonderry.

.....
(1 mark)

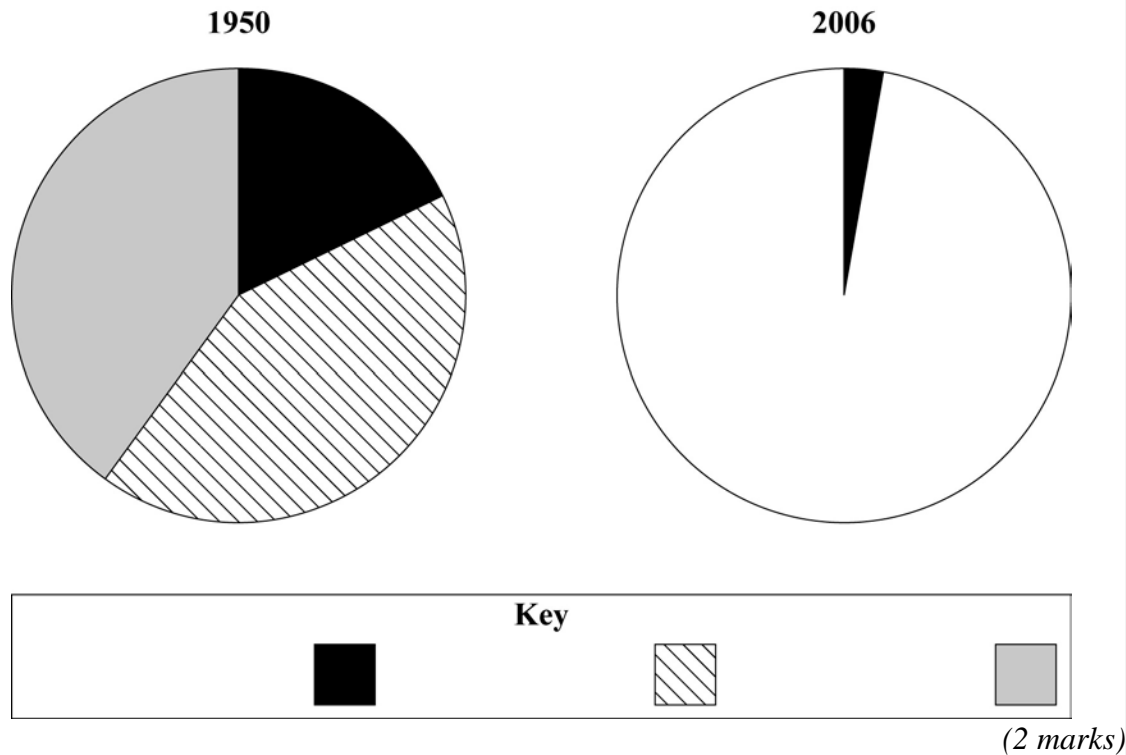
Question 1 continues on the next page

- 1 (d) Study **Figure 4** which shows the employment structure in the North of Ireland in 1950 and 2006.

Figure 4

Employment Structure	1950	2006
Primary industry	18%	3%
Secondary industry	42%	24%
Tertiary industry	40%	73%

- 1 (d) (i) Use **Figure 4** to complete the pie chart for 2006 and the key below.



1 (d) (ii) Using **Figure 4** and the graphs, describe how the employment structure of the North of Ireland has changed between 1950 and 2006.

.....

.....

.....

.....

.....

.....

.....

.....

.....

.....

(4 marks)

(Extra space)

.....

.....

.....

Question 1 continues on the next page

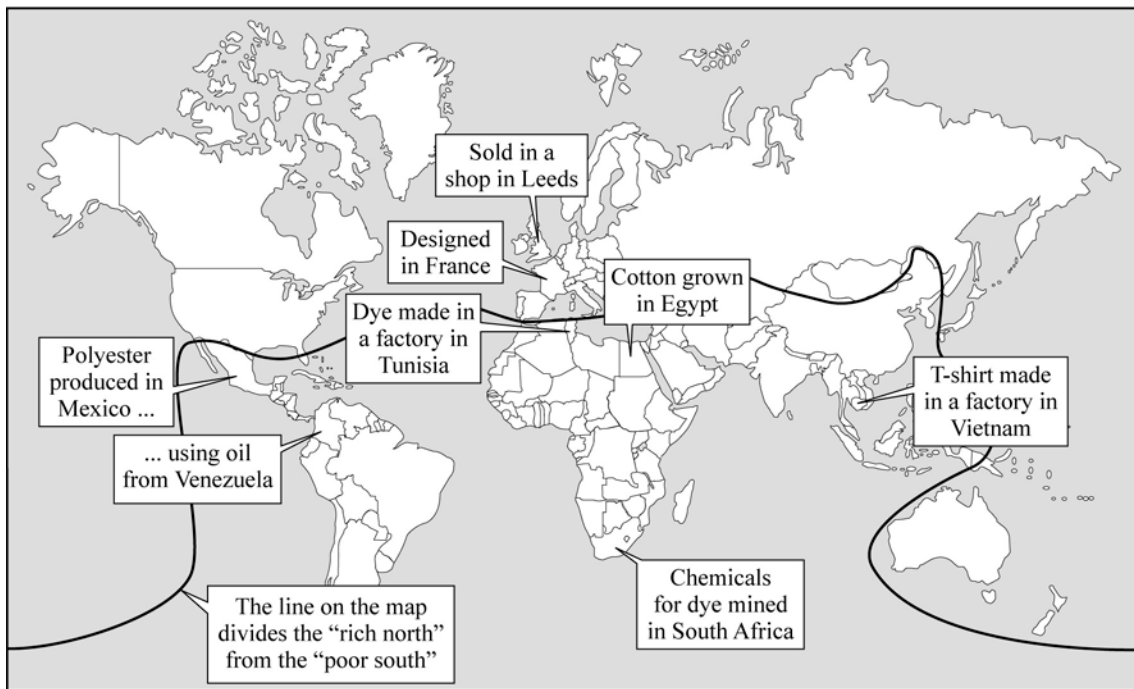


1 (e) **Figure 5** shows information about a T-shirt bought in a shop in Leeds.

Figure 5



T-shirt
 90% cotton
 10% polyester
Made in Vietnam



Describe the distribution of the different processes shown in **Figure 5**.

.....

.....

.....

.....

.....

.....

.....



.....

.....

.....

.....

.....

(6 marks)

(Extra space)

.....

.....

.....

Question 1 continues on the next page



Barcode

- 1 (f) Study **Figure 6**, a newspaper article describing the closure of a shirt making factory in Londonderry, a city in the North of Ireland.

Figure 6

Shirt Factory Jobs Blow for City

85 jobs are to be lost at a shirt factory in the Waterside area of Londonderry. The workforce at Glenadden Shirts on the city's Trench Road is to be reduced from 115 to 30.

The company, which makes high quality shirts for shops in London and New York, said the job losses were due to competition from other companies, especially in the developing world.

- 1 (f) (i) Suggest **two** impacts that the closure of the factory might have on the local area.

1.

.....

2.

.....

(2 marks)

- 1 (f) (ii) The company says that the jobs have been lost because of competition from other companies, especially in the developing world.

Using examples you have investigated, explain why some companies operate in the developing world.

.....

.....

.....

.....

.....

.....

.....



Barcode

.....
.....
.....
.....
.....

(8 marks)

(Extra space)

.....
.....
.....
.....

1 (f) (iii) Suggest **two** ways that the government of the North of Ireland could encourage new companies to set up in Londonderry.

1.
.....
2.
.....

(2 marks)

Question 1 continues on the next page



Barcode

1 (f) (iv) You have investigated how large companies are organised.

Explain how developments in technology have made it easier for large companies to operate on a global scale.

.....

.....

.....

.....

.....

.....

.....

.....

.....

(4 marks)

(Extra space)

.....

.....

.....

50

END OF SECTION A



Barcode

SECTION B – INVESTIGATING GLOBAL TOURISMAnswer **either** Section A **or** Section B.**Total for this question: 50 marks**

2 (a) Study **Figure 7** on the insert which shows the area around the town of Southwold, a popular seaside resort on the east coast of England.

2 (a) (i) What do the symbols represent at:

491783

487737

(2 marks)

2 (a) (ii) Give the straight line distance from the road junction north of Blythburgh (452767) to Jay's Farm (501792).

.....
(2 marks)

Question 2 continues on the next page



2 (a) (iii) Using map evidence, describe why tourists might want to visit the area shown on the map extract.

.....

.....

.....

.....

.....

.....

.....

.....

.....

(4 marks)

(Extra space)

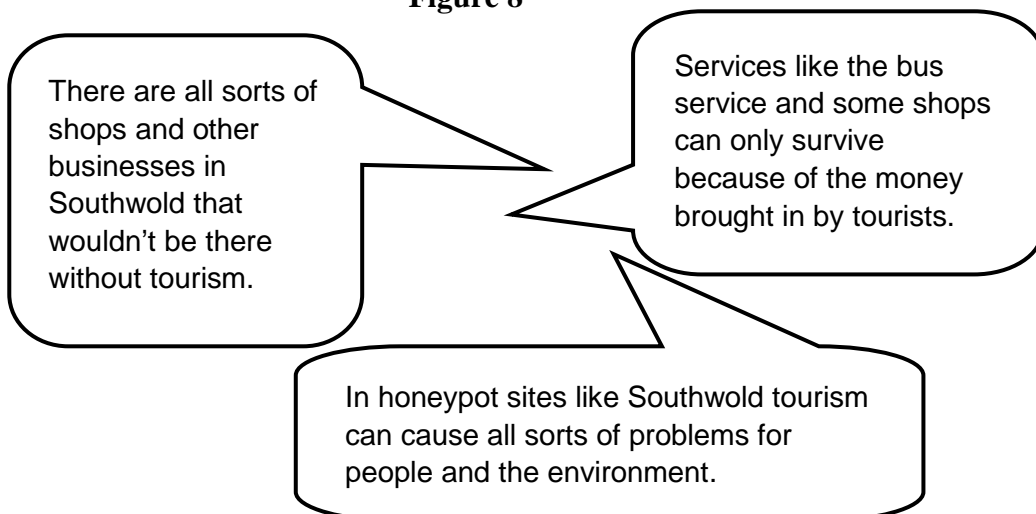
.....

.....

.....

2 (b) Study **Figure 8** which shows some opinions about tourism in Southwold.

Figure 8



Barcode

2 (b) (i) What do you understand by the term ‘honeypot sites’?

.....
.....
.....
.....

(2 marks)

2 (b) (ii) Explain how tourism can benefit the economy of places such as Southwold.

.....
.....
.....
.....
.....
.....
.....
.....
.....

(4 marks)

(Extra space)

.....
.....
.....

Question 2 continues on the next page



Barcode

2 (c) Tourism can cause problems and create conflicts in places such as Southwold. These problems can be managed.

2 (c) (i) You have investigated the problems and conflicts caused by tourists visiting areas.

Name a place you have studied where tourism creates problems. Explain how the problems are being managed.

Name of place:

Explanation:

.....
.....
.....
.....
.....
.....
.....
.....
.....
.....
.....
.....
.....
.....
.....
.....
.....
.....
.....
.....
.....

(6 marks)

(Extra space)

.....
.....
.....
.....
.....



2 (c) (ii) Evaluate how effective the management of tourism has been in the place you have investigated.

.....

.....

.....

.....

.....

.....

.....

.....

.....

.....

(4 marks)

(Extra space)

.....

.....

.....



Barcode

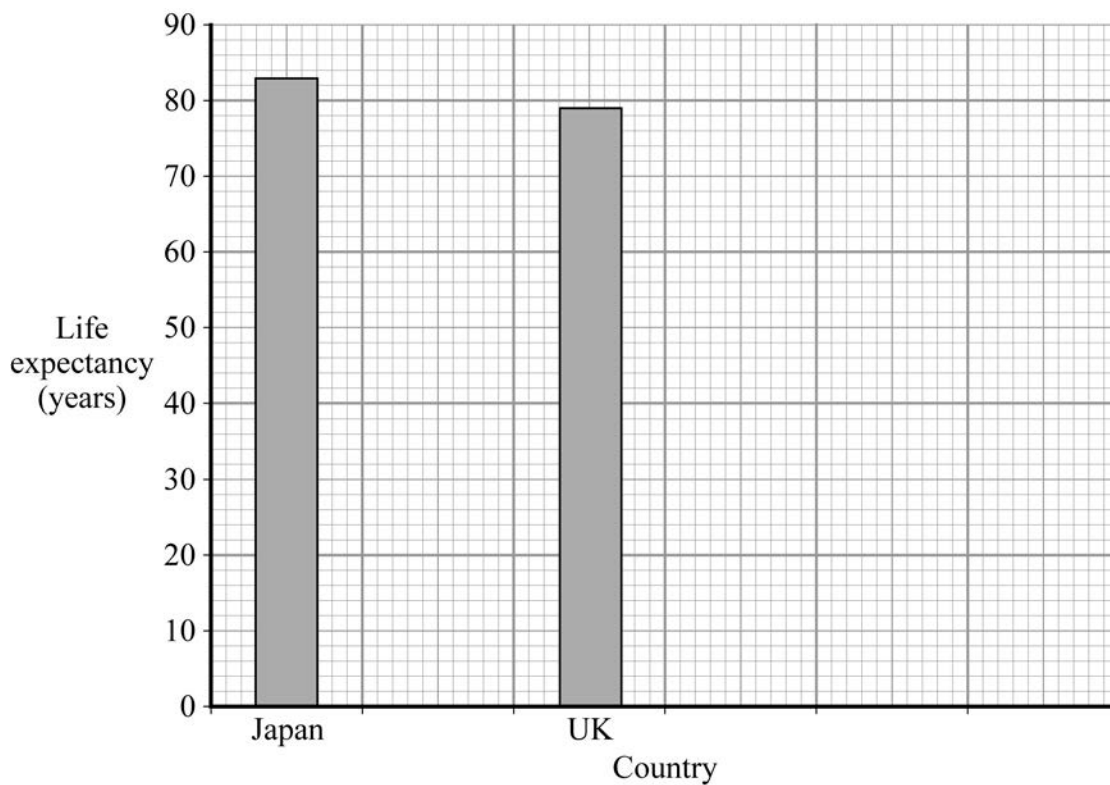
- 2 (d) Tourism can help countries to develop.

Study **Figure 9** which shows indicators of the quality of life in six countries.

Figure 9

	USA	Brazil	United Kingdom	Egypt	India	Japan
GNI per person (US \$ per year)	44,710	4,710	40,560	1,360	820	38,630
Life expectancy (in years)	78	72	79	71	65	83
Adult literacy (%)	99	89	99	71	61	99

- 2 (d) (i) Complete the graph below to show, in rank order, the life expectancy for the countries in **Figure 9**.



(4 marks)



Barcode

2 (d) (ii) Which of the countries shown in **Figure 9** appears to have the poorest quality of life?

Country:

Reasons:

.....
.....
.....
.....
.....
.....
.....
.....

(4 marks)

(Extra space)

.....
.....
.....



Barcode

- 2 (e) Study **Figure 10** which shows an area in which a large-scale tourist development is planned.

Figure 10

There is much to see and do in the state of Bahia. With beautiful beaches and an average temperature of 27°C it is an ideal place for a relaxing holiday.



- 2 (e) (i) Describe the location of Recife.

.....

.....

.....

.....

(2 marks)

- 2 (e) (ii) Brazil is an example of a long haul destination.

What does “long haul” mean?

.....

.....

.....

.....

(2 marks)



Barcode

- 2 (e) (ii) The number of tourists from Europe and North America who visit Brazil has increased in recent years. Suggest reasons why this increase might have occurred.

.....
.....
.....
.....
.....
.....
.....
.....
.....
.....

(6 marks)

(Extra space)
.....
.....
.....

Question 2 continues on the next page



Barcode

- 2 (f) **Figure 11** shows part of the area in which the large-scale tourist development is planned.

Annotate **Figure 11** to explain some of the possible impacts on the natural environment of a large-scale tourist development in the area.

Figure 11



(8 marks)

50

END OF QUESTIONS

ACKNOWLEDGEMENT OF COPYRIGHT-HOLDERS AND PUBLISHERS

Permission to reproduce all copyright material has been applied for. In some cases, efforts to contact copyright-holders have been unsuccessful and AQA will be happy to rectify any omissions of acknowledgements in future papers if notified.

- Question 1 Figure 4 Department of Enterprise, Trade and Investment. Reproduced under the terms of the Click-Use Licence.
- Question 1 Figure 6 © *The Derry Journal*, 18 January 2008.
- Question 2 Figure 7 Reproduced by permission of Ordnance Survey on behalf of HMSO. © Crown Copyright (2008). All rights reserved. Ordnance Survey Licence number 41328.

Copyright © 2012 AQA and its licensors. All rights reserved.



Barcode