

GEOGRAPHY (SPECIFICATION B)
Unit 3 Investigating the Shrinking World
Foundation Tier

F

For this paper you must have:

- the insert (enclosed)
- a ruler

You may use a calculator.

Time allowed: 1 hour

Instructions

- Use black ink or black ball-point pen.
- Fill in the boxes at the top of this page.
- Answer **either** Section A **or** Section B.
- You must answer the questions in the spaces provided. Answers written in margins or on blank pages will not be marked.
- Do all rough work in this book. Cross through any work you do not want to be marked.

Information

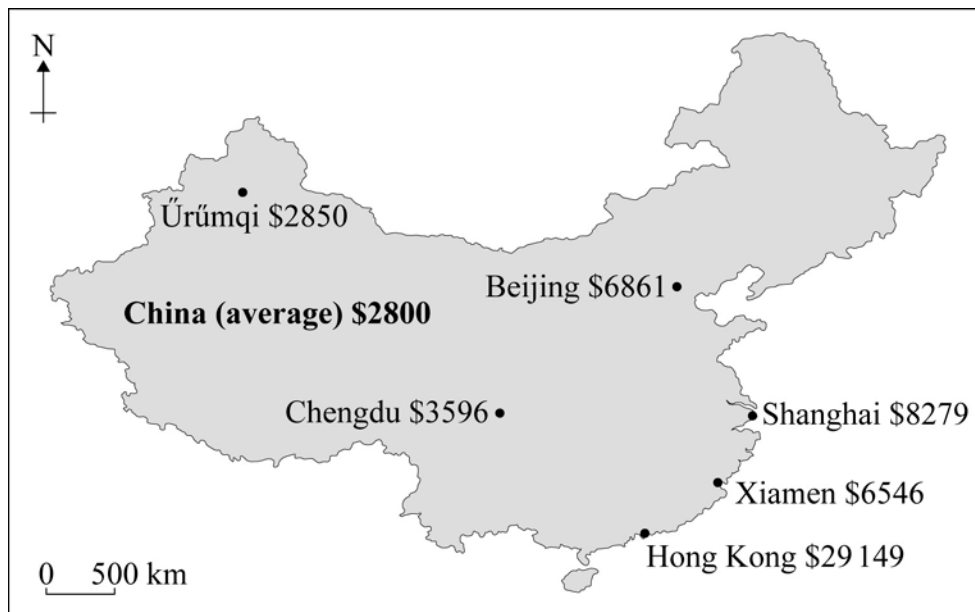
- The maximum mark for this paper is 50.
- The marks for questions are shown in brackets.
- You will be marked on your ability to:
 - use an appropriate form and style of writing
 - organise relevant information clearly and coherently
 - use specialist vocabulary where appropriate.

For Examiner's Use			
Question	Mark	Question	Mark
1			
2			
TOTAL			
Examiner's Initials			



SECTION A – INVESTIGATING THE GLOBALISATION OF INDUSTRYAnswer **either** Section A **or** Section B.**Total for this question: 50 marks**

- 1 (a) Study **Figure 1**, a map of China showing the location of some major cities and their GNI (Gross National Income) per person per year in US dollars.

Figure 1

Xiamen is an important base for foreign companies. It specialises in electronics, IT, machinery and chemical industries and is one of the fastest growing industrial areas in China.

- 1 (a) (i) Use **Figure 1** to complete the following sentences:

Xiamen has a GNI of \$

One of the important industries in Xiamen is

(2 marks)

Barcode

- 1 (a) (ii) Circle the correct answers in the passage below to describe the location of Xiamen.

Xiamen is a city in **India / China / Japan**.

It is in the **north / south-east / south-west** of the country on the coast between Shanghai and **Ürümqi / Chengdu / Hong Kong**.

Xiamen is **1000 / 1500 / 2000** kilometres south of Beijing.

(4 marks)

- 1 (a) (iii) GNI is one development indicator.

What does the GNI of a country measure?

.....

.....

.....

.....

(2 marks)

- 1 (a) (iv) Name **two** other ways of measuring how developed a country is.

1.

.....

2.

.....

(2 marks)

- 1 (a) (v) Using the information in **Figure 1**, tick **two** correct answers from the statements below.

Statement	Tick (✓)
Xiamen is the richest city in China	
Electronics is an important industry in Xiamen	
China is a very rich country	
There are lots of foreign companies in Xiamen	

(2 marks)

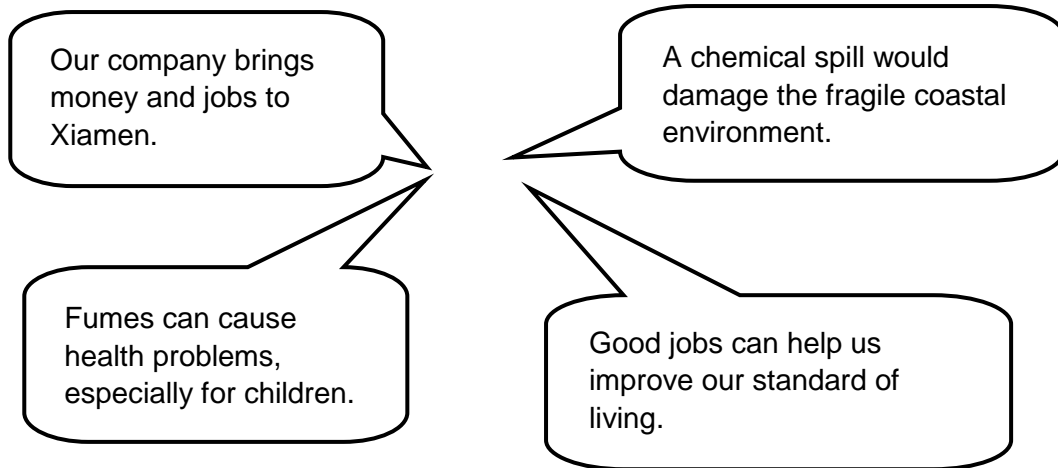


Barcode

- 1 (b) A new chemical plant is planned for Xiamen.

Study **Figure 2** which shows some opinions about the new plant.

Figure 2



- 1 (b) (i) Use **Figure 2** to help you complete the following table to show some of the possible impacts of the new plant on Xiamen.

Economic Impact		Other companies might come to Xiamen because of the new chemical plant
Social Impact		
Environmental Impact	The new plant would be an eyesore	

(4 marks)



Barcode

1 (b) (ii) Do you think that the new chemical plant should be built in Xiamen?
Explain the reasons for your decision.

Decision: **Yes** **No** (Circle your choice)

Explanation:

.....

.....

.....

.....

.....

.....

.....

.....

.....

(6 marks)

(Extra space)

.....

.....

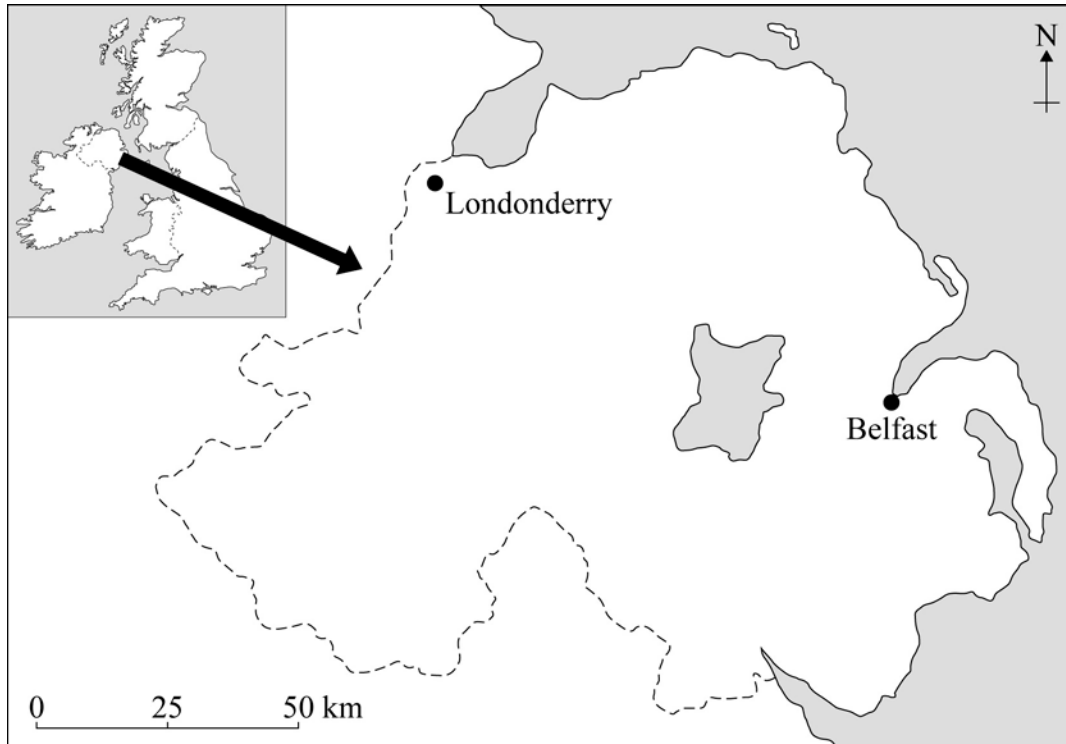
.....

Question 1 continues on the next page



- 1 (c) Study **Figure 3**, a map of the North of Ireland.

Figure 3



- 1 (c) (i) What direction is Londonderry from Belfast?

.....
(1 mark)

- 1 (c) (ii) Which of the following is the straight line distance between Belfast and Londonderry?

Circle the correct answer.

65km

80km

95km

(1 mark)



Question 1 continues on the next page



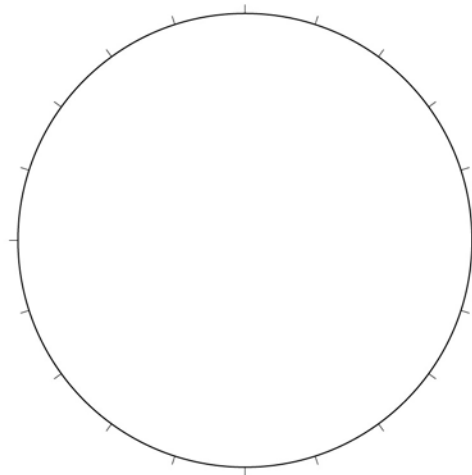
- 1 (d) Study **Figure 4** which shows the employment structure in the North of Ireland in 1950 and 2006.

Figure 4

Employment Structure	1950	2006
Primary industry	18%	3%
Secondary industry	42%	24%
Tertiary industry	40%	73%

- 1 (d) (i) Use **Figure 4** to complete the pie chart for **2006** and the key below.

2006



Key

<input type="checkbox"/>	<input type="checkbox"/>	<input type="checkbox"/>
--------------------------	--------------------------	--------------------------

(3 marks)



- 1 (d) (ii) Using **Figure 4**, complete the following passage to describe the changes in the employment structure of the North of Ireland between 1950 and 2006.

Choose words from the box below.

increased	secondary	3%
tertiary	18%	decreased

In 1950 primary industry jobs made up% of the workforce. By 2006 this had fallen to a sixth of that level.

Secondary jobs from 42% to 24%. The only type of job which increased between 1950 and 2006 was in the sector.

(3 marks)

- 1 (d) (iii) Complete the table below to match the definitions to the type of industry.

Choose your answers from the list below.

Primary	Secondary	Tertiary
Type of industry	Definition	
	Concerned with the collection of raw materials.	
	Providing services.	
	The processing of raw materials to make products.	

(2 marks)

Question 1 continues on the next page

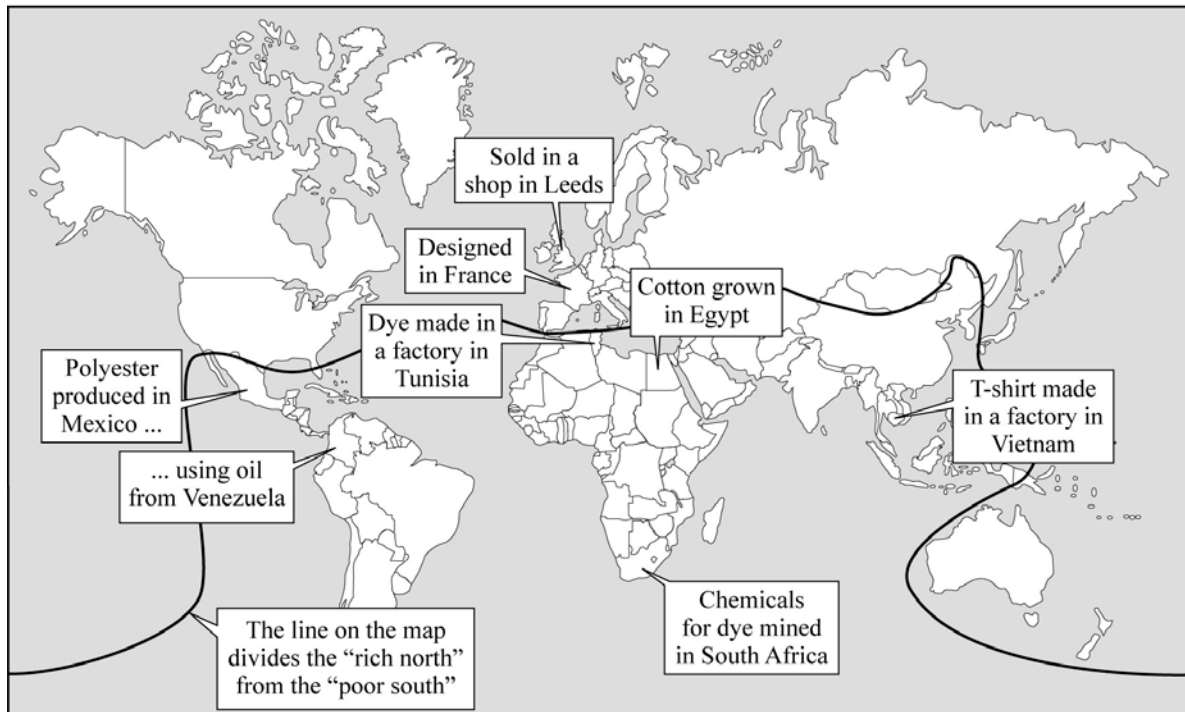


- 1 (e) **Figure 5** shows information about a T-shirt bought in a shop in Leeds.

Figure 5



T-shirt
90% cotton
10% polyester
Made in Vietnam



- 1 (e) (i) In which country was the T-shirt manufactured?

.....
(1 mark)



1 (e) (ii) Describe the ways in which countries from around the world have helped to produce the T-shirt shown in **Figure 5**.

.....

.....

.....

.....

.....

.....

.....

.....

.....

.....

.....

(5 marks)

(Extra space)

.....

.....

.....

Question 1 continues on the next page



- 1 (f) Study **Figure 6**, a newspaper article describing the closure of a shirt making factory in Londonderry, a city in the North of Ireland.

Figure 6

Shirt Factory Jobs Blow for City

85 jobs are to be lost at a shirt factory in the Waterside area of Londonderry. The workforce at Glenadden Shirts on the city's Trench Road is to be reduced from 115 to 30.

The company, which makes high quality shirts for shops in London and New York, said the job losses were due to competition from other companies, especially in poorer countries in the developing world.

- 1 (f) (i) Suggest **two** impacts that the closure of the factory might have on the local area.

- 1.
- 2.

(2 marks)

- 1 (f) (ii) The company says that the jobs have been lost because of competition from other companies, especially in poorer countries.

Suggest and explain **two** reasons why some companies set up factories in poorer countries.

- 1.
- 2.

(4 marks)



Barcode

(Extra space)

.....

.....

.....

1 (f) (iii) Suggest **one** way that the government of the North of Ireland could encourage new companies to set up in Londonderry

.....

.....

(1 mark)

1 (f) (iv) You have investigated how large companies are organised.

Explain how developments in technology have made it easier for large companies to operate on a global scale.

.....

.....

.....

.....

.....

.....

.....

.....

.....

.....

(5 marks)

(Extra space)

.....

.....

.....

END OF SECTION A



SECTION B – INVESTIGATING GLOBAL TOURISMAnswer **either** Section A **or** Section B.**Total for this question: 50 marks**

- 2 (a) Study **Figure 7** on the insert which shows the area around the town of Southwold, a popular seaside resort on the east coast of England.

- 2 (a) (i) What direction is Wangford (4679) from Walberswick (4974)?

.....
(1 mark)

- 2 (a) (ii) Complete the following table by finding **two** other pieces of map evidence which suggest that the area on the map is used by tourists.

4 Figure Grid Reference	Meaning
5075	Camp and Caravan Site

(2 marks)

- 2 (a) (iii) Which of the following is the straight line distance, to the nearest kilometre, from the road junction north of Blythburgh (452767) to Jay's Farm (501792)?

Circle the correct answer.

4km**6km****7km**

(1 mark)



Barcode

- 2 (a) (iv) Circle the correct answers in the passage below.

Southwold is **on the coast / inland / on a river**. It has a **narrow beach / wide beach / areas of flat rock** and a pier which is a popular tourist attraction. There are three museums and a **garden / golf course / viewpoint** in Southwold. The main road linking Southwold to Blythburgh is the **B1126 / M25 / A1095**.

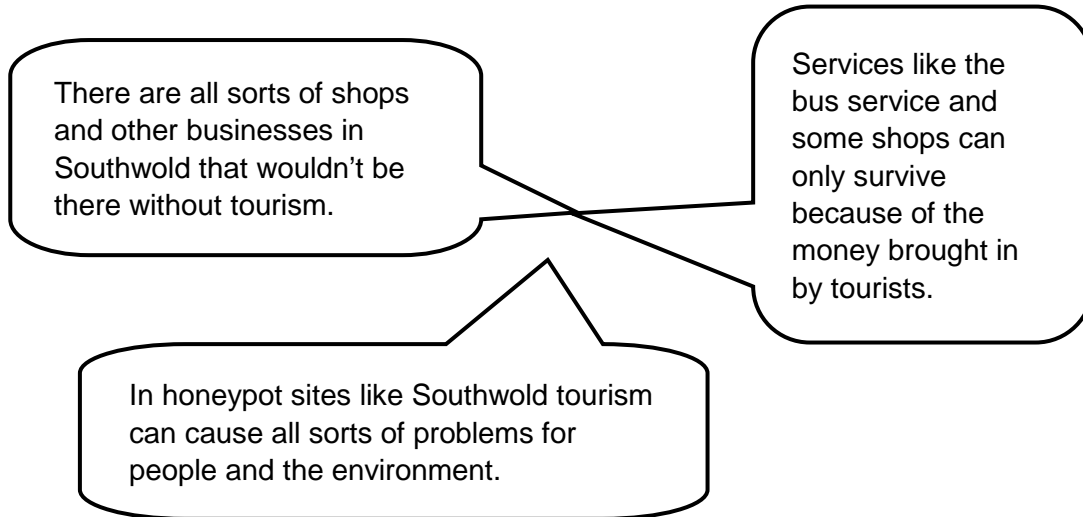
(4 marks)

Question 2 continues on the next page



- 2 (b) Study **Figure 8** which shows some opinions about tourism in Southwold.

Figure 8



- 2 (b) (i) Complete the table by putting the correct word next to each definition.

Honeypot site

Conflict

Short break

	When groups of people don't agree on something.
	A holiday lasting only a few days.
	A very popular tourist site.

(2 marks)



Barcode

2 (b) (ii) Describe **two** ways that tourism can provide opportunities for people living in places such as Southwold.

1.

.....

.....

2.

.....

.....

(4 marks)

(Extra space)

.....

.....

.....

2 (c) Tourism can cause problems in places such as Southwold. These problems can be managed.

2 (c) (i) Give **two** examples of problems which might be caused by tourism in places like Southwold.

1.

.....

2.

.....

(2 marks)

Question 2 continues on the next page



Barcode

2 (c) (ii) You have investigated the problems caused by tourists visiting areas.

Name a place you have studied where tourism creates problems. Explain how the problems are being managed.

Name of place:

Explanation:

.....

.....

.....

.....

.....

.....

.....

(5 marks)

(Extra space)

.....

.....

.....



Barcode

Question 2 continues on the next page



- 2 (d) Tourism can help countries to develop.

Study **Figure 9** which shows indicators of the quality of life in six countries.

Figure 9

	USA	Brazil	United Kingdom	Egypt	India	Japan
GNI per person (US \$ per year)	44,710	4,710	40,560	1,360	820	38,630
Life expectancy (in years)	78	72	79	71	65	83
Adult literacy (%)	99	89	99	71	61	99

- 2 (d) (i) Which country has the lowest GNI per person?

.....
(1 mark)

- 2 (d) (ii) Read through the following statements carefully.

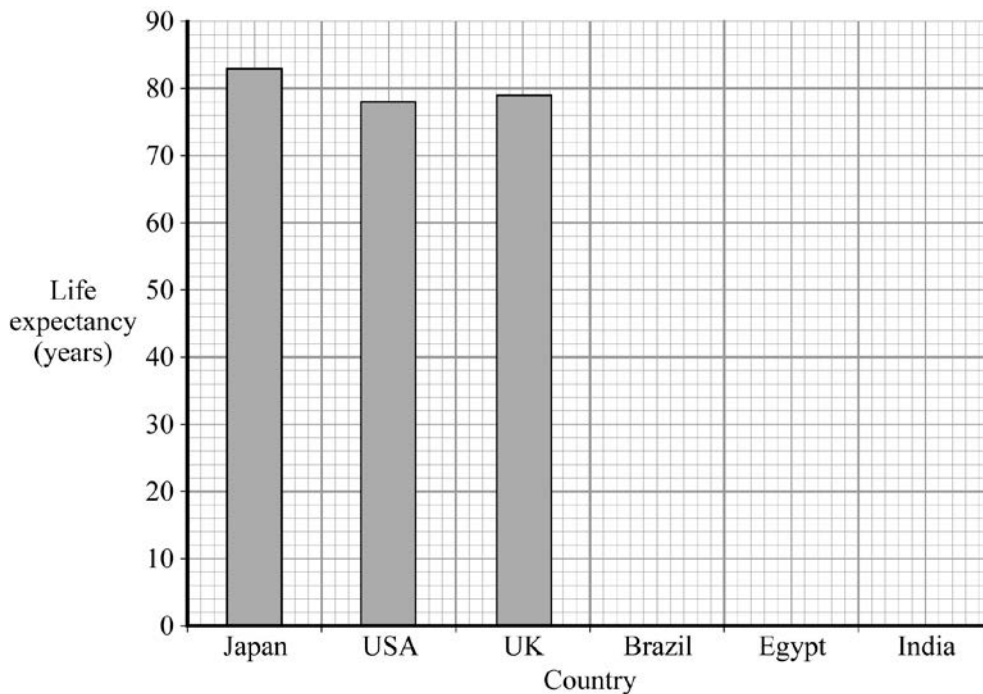
Tick the correct box to show if each statement is **True** or **False**.

	True	False
The life expectancy is the percentage of people who can read and write.	<input type="checkbox"/>	<input type="checkbox"/>
GNI per person measures how rich people are on average.	<input type="checkbox"/>	<input type="checkbox"/>
Countries with a high GNI per person usually have a high life expectancy.	<input type="checkbox"/>	<input type="checkbox"/>

(3 marks)



2 (d) (iii) Using **Figure 9**, complete the graph below to show life expectancy.



(3 marks)

2 (d) (iv) Which of the countries from **Figure 9** do you think has the poorest quality of life?

.....

.....

.....

.....

.....

.....

.....

.....

.....

.....

.....

(5 marks)



- 2 (e) Study **Figure 10** which shows an area in Brazil in which a large-scale tourist development is planned.

Figure 10

There is much to see and do in the state of Bahia. With beautiful beaches and an average temperature of 27°C it is an ideal place for a relaxing holiday.



- 2 (e) (i) Complete the following passage using words from the box below.

Western	Salvador	Natal
32°C	North East	27°C

Recife is in Brazil. The nearest airport to Recife is in the city of The average temperature in Recife is which helps makes it an ideal place for a relaxing holiday. (3 marks)

- 2 (e) (ii) Brazil is an example of a long haul destination.

What does “*long haul*” mean?

.....

.....

(1 mark)



2 (e) (iii) The number of tourists from Europe and North America who visit Brazil has gone up in recent years.

Give **three** reasons why this increase may have happened.

- 1.
.....
- 2.
.....
- 3.
.....

(3 marks)

2 (e) (iv) You have investigated how the growth of tourism can benefit countries.

Explain **one** way in which Brazil might benefit from the large-scale tourist development which is planned.

Benefit:
.....

Explanation:
.....
.....
.....
.....

(3 marks)

Question 2 continues on the next page



Barcode

2 (f) **Figure 11** shows part of the area in which the large-scale tourist development is planned.

2 (f) (i) Give one activity that tourists might do in the area shown on **Figure 11**

.....
(1 mark)

2 (f) (ii) Label **Figure 11** to show some of the possible impacts on the natural environment of a large-scale tourist development in the area.

Figure 11



(6 marks)

50

END OF QUESTIONS

ACKNOWLEDGEMENT OF COPYRIGHT-HOLDERS AND PUBLISHERS

Permission to reproduce all copyright material has been applied for. In some cases, efforts to contact copyright-holders have been unsuccessful and AQA will be happy to rectify any omissions of acknowledgements in future papers if notified.

Question 1 Figure 4 Department of Enterprise, Trade and Investment. Reproduced under the terms of the Click-Use Licence.

Question 1 Figure 6 © *The Derry Journal*, 18 January 2008.

Question 2 Figure 7 Reproduced by permission of Ordnance Survey on behalf of HMSO. © Crown Copyright (2008). All rights reserved. Ordnance Survey Licence number 41328.

Copyright © 2012 AQA and its licensors. All rights reserved.



Barcode