

Surname					Other Names				
Centre Number					Candidate Number				
Candidate Signature									

Leave blank

General Certificate of Secondary Education
June 2005



**GEOGRAPHY C
(SHORT COURSE SPECIFICATION)
Foundation Tier
Written Paper**

3038/F

Monday 6 June 2005 9.00 am to 10.15 am

<p>No additional materials are required. You may use a calculator.</p>

For Examiner's Use			
Number	Mark	Number	Mark
1			
2			
3			
Total (Column 1)	→		
Total (Column 2)	→		
TOTAL			
Examiner's Initials			

Time allowed: 1 hour and 15 minutes

Instructions

- Use blue or black ink or ball-point pen.
- Fill in the boxes at the top of this page.
- Answer **all** questions in the spaces provided.
- Do all rough work in this book. Cross through any work you do not want marked.

Information

- The maximum mark for this paper is 60.
- Mark allocations are shown in brackets.
- You will be assessed on your ability to use an appropriate form and style of writing, to organise relevant information clearly and coherently, and to use specialist vocabulary, where appropriate.
- An LEDC is a Less Economically Developed Country
- An MEDC is a More Economically Developed Country

Answer **all** questions in the spaces provided.

1

Total for this question: 36 marks

MANAGING CHANGE IN THE HUMAN ENVIRONMENT

(a) Study **Figure 1** which shows rural and urban population change in Brazil (LEDC).

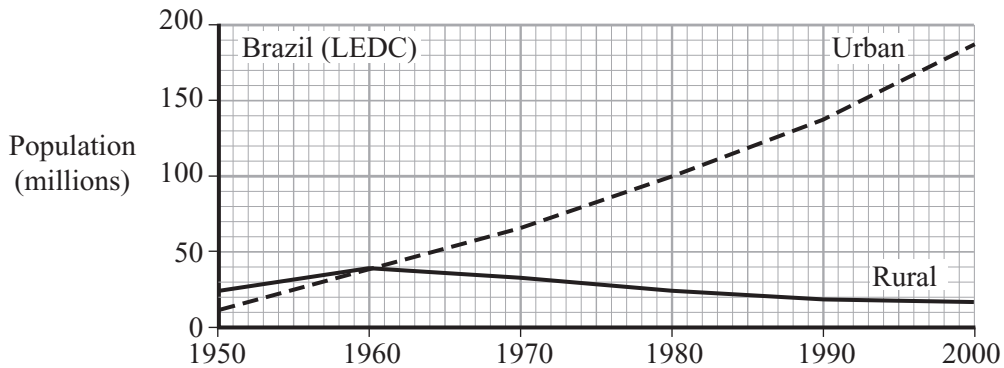


Figure 1

Using **Figure 1**,

(i) In which year was the urban population the same as the rural population in Brazil?

.....
(1 mark)

(ii) How many people lived in urban areas in Brazil in 1980?

.....
(1 mark)

(iii) Describe the changes in urban and rural population in Brazil between 1950–2000 using the following headings.

Urban change:
.....
.....
.....

Rural change:
.....
.....
.....

(4 marks)

- (b) (i) Rural-urban migration in LEDCs is the result of push and pull factors. Using an example in each case, explain what is meant by

PUSH FACTORS

.....
.....
.....
.....

PULL FACTORS

.....
.....
.....
.....

(4 marks)

- (ii) ‘The quality of life for many people who live in LEDC cities is very poor.’ Describe the living conditions of the urban poor in LEDC cities.

.....
.....
.....
.....
.....
.....
.....
.....
.....
.....

(4 marks)

QUESTION 1 CONTINUES ON THE NEXT PAGE

Turn over ►

- (iii) Improving the conditions in rural areas in LEDCs might stop people moving away from these areas.
How could conditions in rural areas be improved?

.....

.....

.....

.....

.....

.....

.....

.....

.....

(4 marks)

- (c) Study **Figure 2**, which shows part of an area near the centre of a city in the United Kingdom.

Photograph of part of a rundown area of an inner city
- not reproduced here due to third-party copyright constraints.

- (i) Using **Figure 2** describe the characteristics of declining areas in MEDC cities.

.....
.....
.....
.....
.....
.....
.....
.....
.....

(4 marks)

- (ii) Suggest **two** reasons why the area shown in **Figure 2** has declined.

1.
.....
2.

(2 marks)

Turn over ►

(iii) Explain how redevelopment could help to improve the central areas of towns or cities in MEDCs.

.....

.....

.....

.....

.....

.....

.....

.....

.....

(4 marks)

(d) (i) What is meant by the ‘rural-urban fringe’ (R.U.F.)?

.....

.....

.....

.....

(2 marks)

(ii) Many new houses are being built within the rural-urban fringe. Describe **two** other types of development that have taken place within the rural-urban fringe.

1.

.....

2.

.....

(2 marks)

(iii) Suggest reasons why increasing numbers of people choose to live in rural-urban fringe areas in MEDCs.

.....

.....

.....

.....

.....

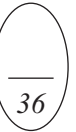
.....

.....

.....

.....

(4 marks)



TURN OVER FOR THE NEXT QUESTION

Turn over ►

2

Total for this question: 12 marks

MANAGING THE PHYSICAL ENVIRONMENT

Study **Figure 3** 'Tourism in National Parks – Is it worth the trouble?'

TOURISM IN NATIONAL PARKS - Is it worth the trouble?

As the number of people visiting National Parks increases it is clear that there are different opinions about the effects of visitors.

The following are opinions of local residents in The Lake District National Park.




Figure 3

(a) (i) What evidence is there that tourism creates a lot of jobs in the Lake District?

.....
(1 mark)

(ii) Complete the table by putting the correct term next to each definition.

CONSERVATION HOLIDAY HOME HONEYPOT EROSION

TERM	DEFINITION
	The wearing away of the landscape
	A place that attracts a lot of visitors
	A house only used for part of the year
	The protection of natural environments

(3 marks)

(iii) With the help of **Figure 3** explain how tourism helps to develop employment for local people.

.....
.....
.....
.....
.....
.....
.....
.....
.....

(4 marks)

QUESTION 2 CONTINUES ON THE NEXT PAGE

Turn over ►

(b) Study **Figure 4** 'Managing Transport in National Parks'.

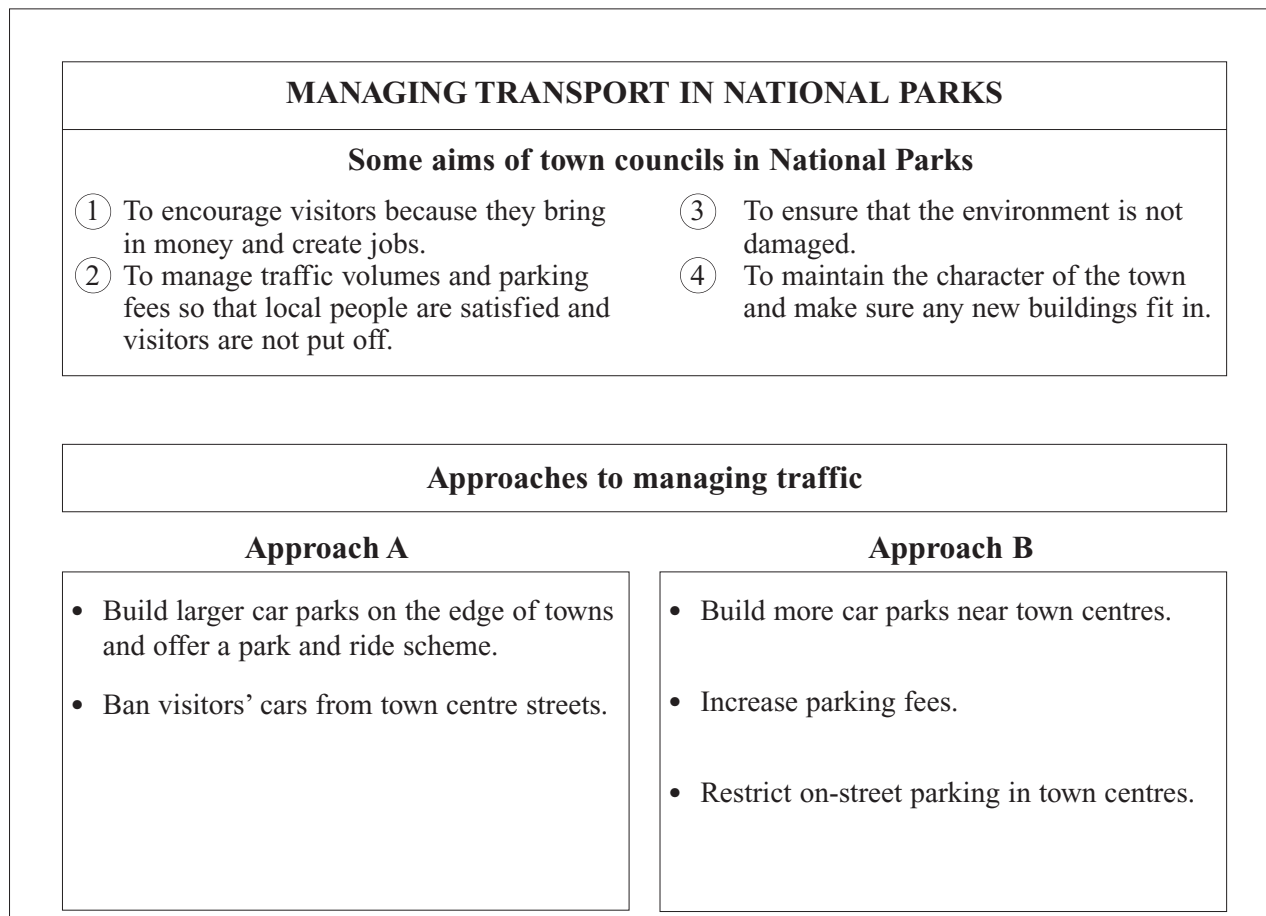


Figure 4

Traffic management is one of the problems in towns within National Parks.
Figure 4 outlines some of the aims of town councils in National Parks and describes **two** approaches to managing traffic in towns within National Parks.

Choose the approach **A** or **B** that you feel would be most suitable in relation to the aims of town councils in National Parks.

CHOSEN APPROACH	
------------------------	--

Give reasons for your choice.

.....

.....

.....

.....

.....

.....

.....

.....

(4 marks)

12

TURN OVER FOR THE NEXT QUESTION

Turn over ►

3

Total for this question: 12 marks

MANAGING ECONOMIC DEVELOPMENT

Study Figure 5 which shows the process of global warming.

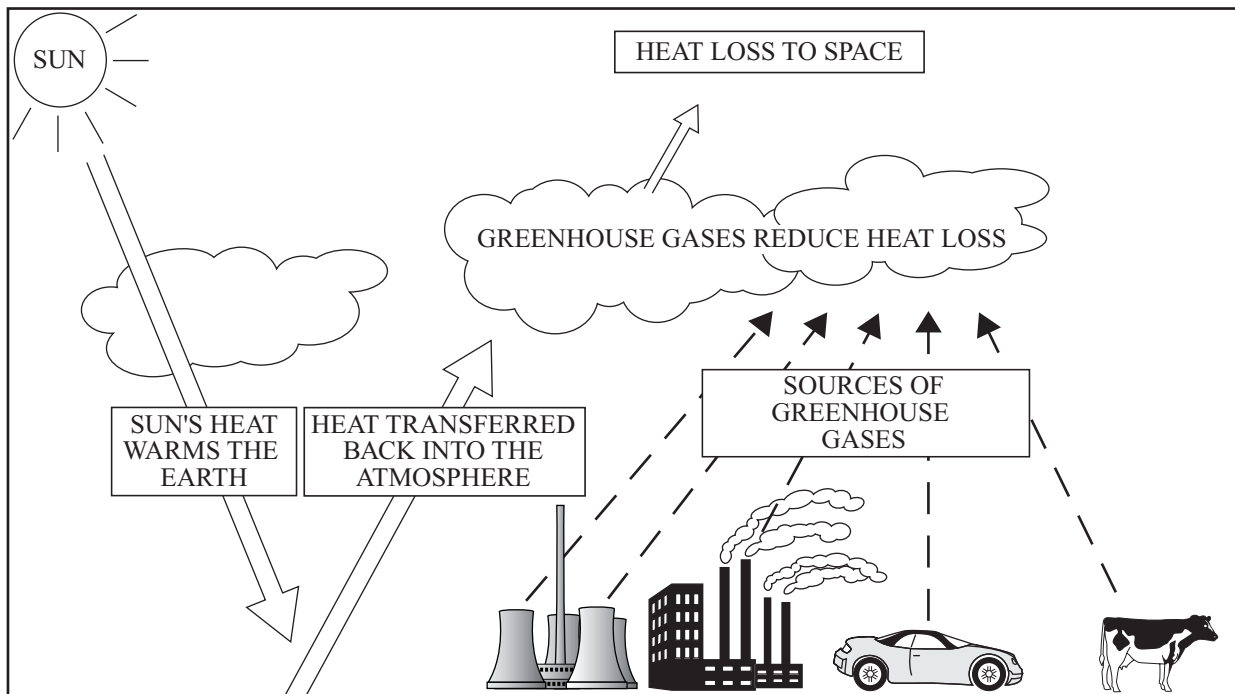


Figure 5

(a) Identify **two** sources of greenhouse gases.

- 1.
- 2.

(2 marks)

(b) Suggest why economic development might increase the rate of global warming.

.....

.....

.....

.....

(2 marks)

(c) Complete the following table by putting the correct term next to each definition.

Acid rain	Deforestation	Sustainable development
Ecosystem	Ozone depletion	
TERM	DEFINITION	
	The removal of trees	
	Inter-relationships between plants, animals and their environment	
	Projects that limit damage to the environment	
	Precipitation that contains corrosive chemicals	

(4 marks)

(d) How might global warming affect people in the future?

.....

.....

.....

.....

.....

.....

.....

.....

.....

(4 marks)

END OF QUESTIONS

ACKNOWLEDGEMENT OF COPYRIGHT OWNERS AND PUBLISHERS

Permission to reproduce all copyright material has been applied for. In some cases, efforts to contact copyright owners have been unsuccessful and AQA will be happy to rectify any omissions of acknowledgement in future if notified.

Question 1 Figure 2 © Rex.

THERE ARE NO QUESTIONS PRINTED ON THIS PAGE

THERE ARE NO QUESTIONS PRINTED ON THIS PAGE

THERE ARE NO QUESTIONS PRINTED ON THIS PAGE