

Surname					Other Names				
Centre Number					Candidate Number				
Candidate Signature									

Leave blank

General Certificate of Secondary Education
June 2005



GEOGRAPHY (SPECIFICATION C)
Foundation Tier
Paper 1

3033/1F

Monday 6 June 2005 9.00 am to 10.30 am

F

In addition to this paper you will require:
a resource booklet (enclosed).
You may use a calculator.

For Examiner's Use			
Number	Mark	Number	Mark
1			
2			
3			
4			
5			
Total (Column 1)		→	
Total (Column 2)		→	
TOTAL			
Examiner's Initials			

Time allowed: 1 hour 30 minutes

Instructions

- Use blue or black ink or ball-point pen. You may use pencil for maps, diagrams and graphs.
- Fill in the boxes at the top of this page.
- Answer **all** questions in the spaces provided.
- Do all rough work in this book. Cross through any work you do not want marked.

Information

- The maximum mark for this paper is 60.
- Mark allocations are shown in brackets.
- You will be assessed on your ability to use an appropriate form and style of writing, to organise relevant information clearly and coherently, and to use specialist vocabulary, where appropriate.
- LEDC is a Less Economically Developed Country
- MEDC is a More Economically Developed Country

Answer **all** questions in the spaces provided.

1

Total for this question: 11 marks

Study **Figure 1**, ‘The growth of recreation and tourism’.

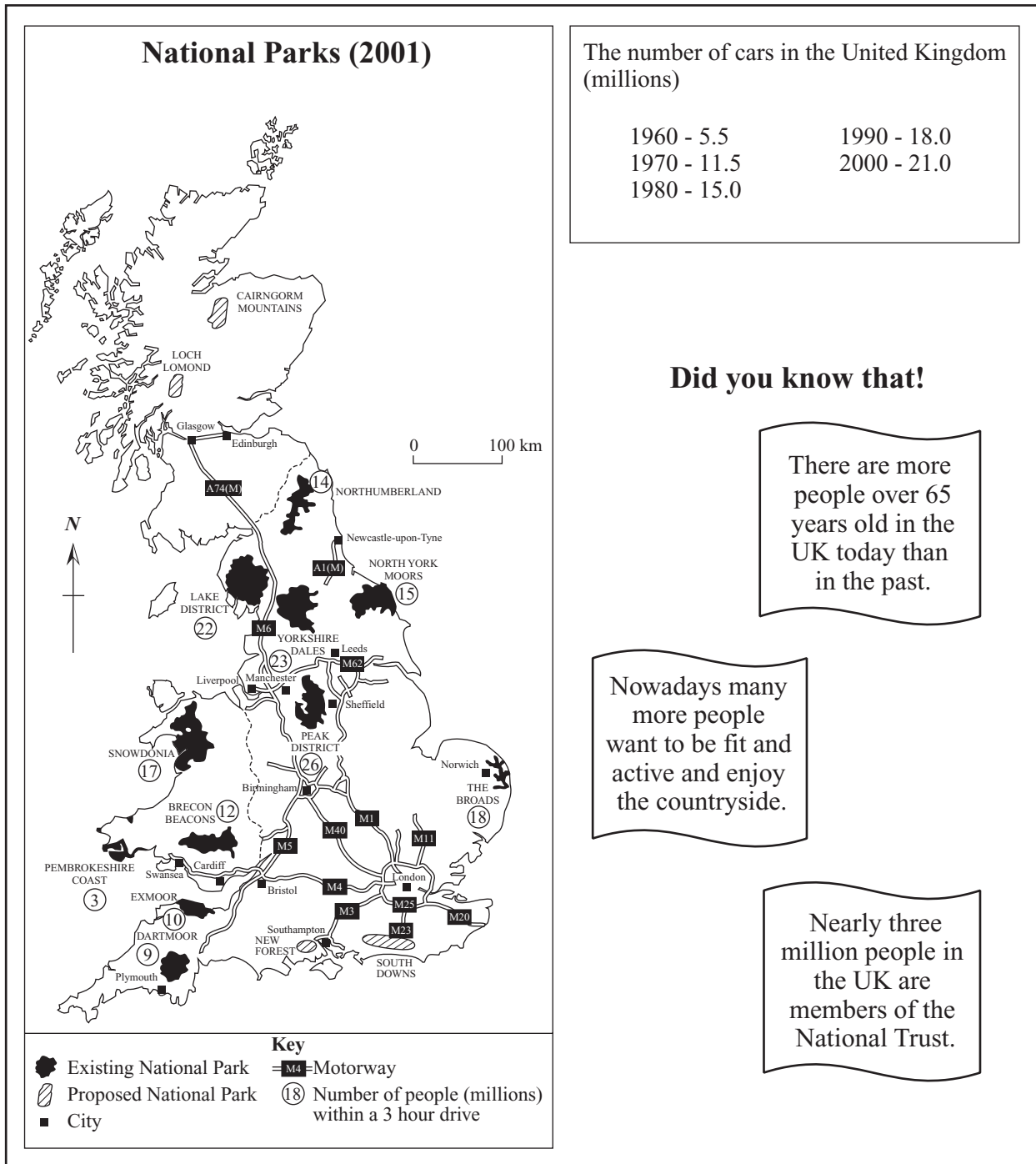


Figure 1

(a) (i) Which National Park in 2001 had:

The greatest number of people within a three hour drive?

.....

The lowest number of people within a three hour drive?

.....

(2 marks)

(ii) Use **Figure 1** to complete the following sentences.

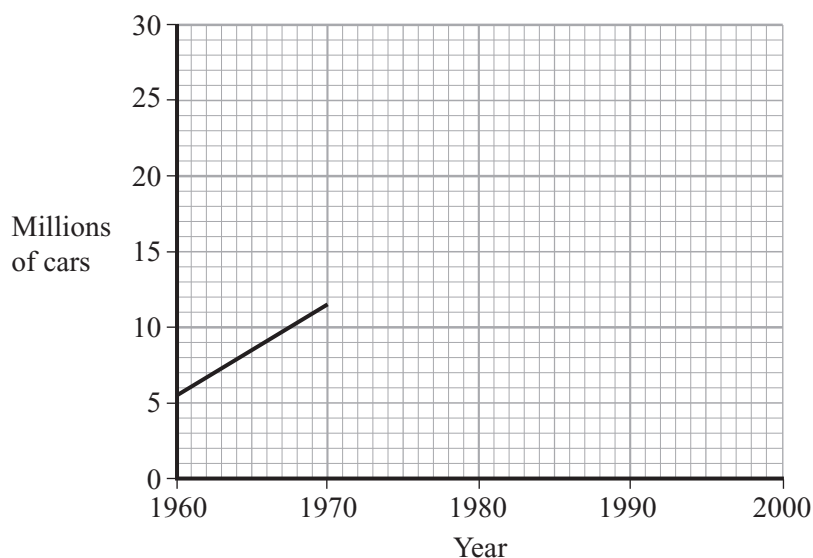
Cross out the word that does **not** complete each sentence correctly.

A. The proposed National Park at Loch Lomond is in **Scotland/Wales**.

B. The nearest city to Dartmoor National Park is **Southampton/Plymouth**.

(2 marks)

(b) Use the information in **Figure 1** to complete the line graph below to show the number of cars in the United Kingdom.



(3 marks)

QUESTION 1 CONTINUES ON THE NEXT PAGE

Turn over ►

(c) Using **Figure 1** to help you, suggest why the number of people visiting National Parks has increased.

.....

.....

.....

.....

.....

.....

.....

.....

.....

(4 marks)



2

Total for this question: 8 marks

Study **Figure 2**, in the Resource Booklet, which shows photographs taken in the Lake District National Park.

(a) What tourist activities are likely to take place in the area shown on **Figure 2A**?

.....
.....
.....
.....
.....
.....
.....
.....

(4 marks)

(b) Many people visit areas like those shown on photographs **A** and **B** in **Figure 2**. Why might there be conflicts between different tourist activities in these areas?

.....
.....
.....
.....
.....
.....
.....
.....

(4 marks)

8

Turn over ►

3

Total for this question: 12 marks


Study **Figure 3**, 'Tourism in National Parks – Is it worth the trouble?'

Figure 3

(a) Complete the following table by putting the correct term next to each definition.

CONSERVATION	HOLIDAY HOME	HONEYPOT	EROSION
TERM	DEFINITION		
	The wearing away of the landscape		
	A dwelling only used for part of the year		
	The protection of natural environments		

(3 marks)

(b) (i) What percentage of jobs in the Lake District is directly related to tourism?

.....
(1 mark)

(ii) Describe **two** ways that the growth of tourism might improve local employment opportunities.

1.

2.

(4 marks)

(c) **Figure 3** shows different opinions about tourism in National Parks. How do the opinions show that tourism can bring disadvantages to local communities?

.....

(4 marks)

TURN OVER FOR THE NEXT QUESTION

Turn over ►

4

Total for this question: 19 marksStudy **Figures 4** and **5** in the Resource Booklet.(a) Use **Figure 4**, the Ordnance Survey map extract, to answer part (a).

- (i) Complete the following table by locating and identifying three other pieces of map evidence which suggest that this area is used by tourists.

Four figure grid reference	Evidence
1450	Hotel

(3 marks)

- (ii) Give the
- six figure**
- grid reference for the place of worship with a tower in the village of Tissington, in the south east of the map extract.

.....
(1 mark)

- (iii) Name
- two**
- ways that height is shown on the Ordnance Survey map extract.

1.
2.
(2 marks)

- (iv) Which of the following is the straight-line distance, to the nearest km, from Uppermoor Farm (1757) to the centre of Alstonefield (1355)?

5km 7km 9km
(1 mark)

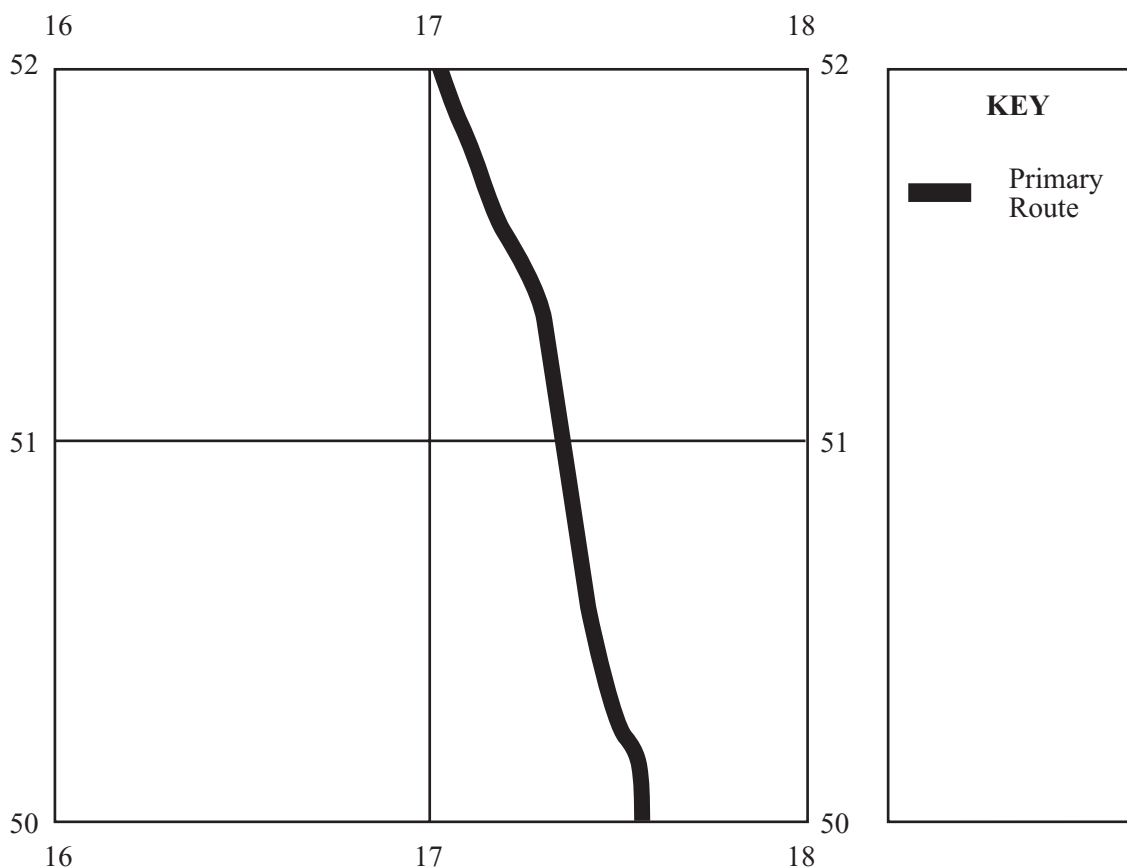
- (v) What is the direction from Alstonefield to Uppermoor Farm?

.....
(1 mark)

(vi) Using the Ordnance Survey map extract, add the following features to the grid below.

The cycle track The caravan site Bentley Hall

Complete the key.



(4 marks)

(b) Using the newspaper articles in **Figure 5**

(i) How many visitors does the Peak District National Park attract each year?

..... (1 mark)

(ii) Which day of the week is the busiest in the Peak District National Park?

..... (1 mark)

(iii) How many people live within the boundaries of the Peak District National Park?

..... (1 mark)

QUESTION 4 CONTINUES ON THE NEXT PAGE

Turn over ►

(iv) What are the effects of visitor pressure on the environment in the Peak District National Park?

.....

.....

.....

.....

.....

.....

.....

.....

.....

.....

(4 marks)

19

5

Total for this question: 10 marks

Study **Figure 6** ‘Managing Transport in National Parks’.

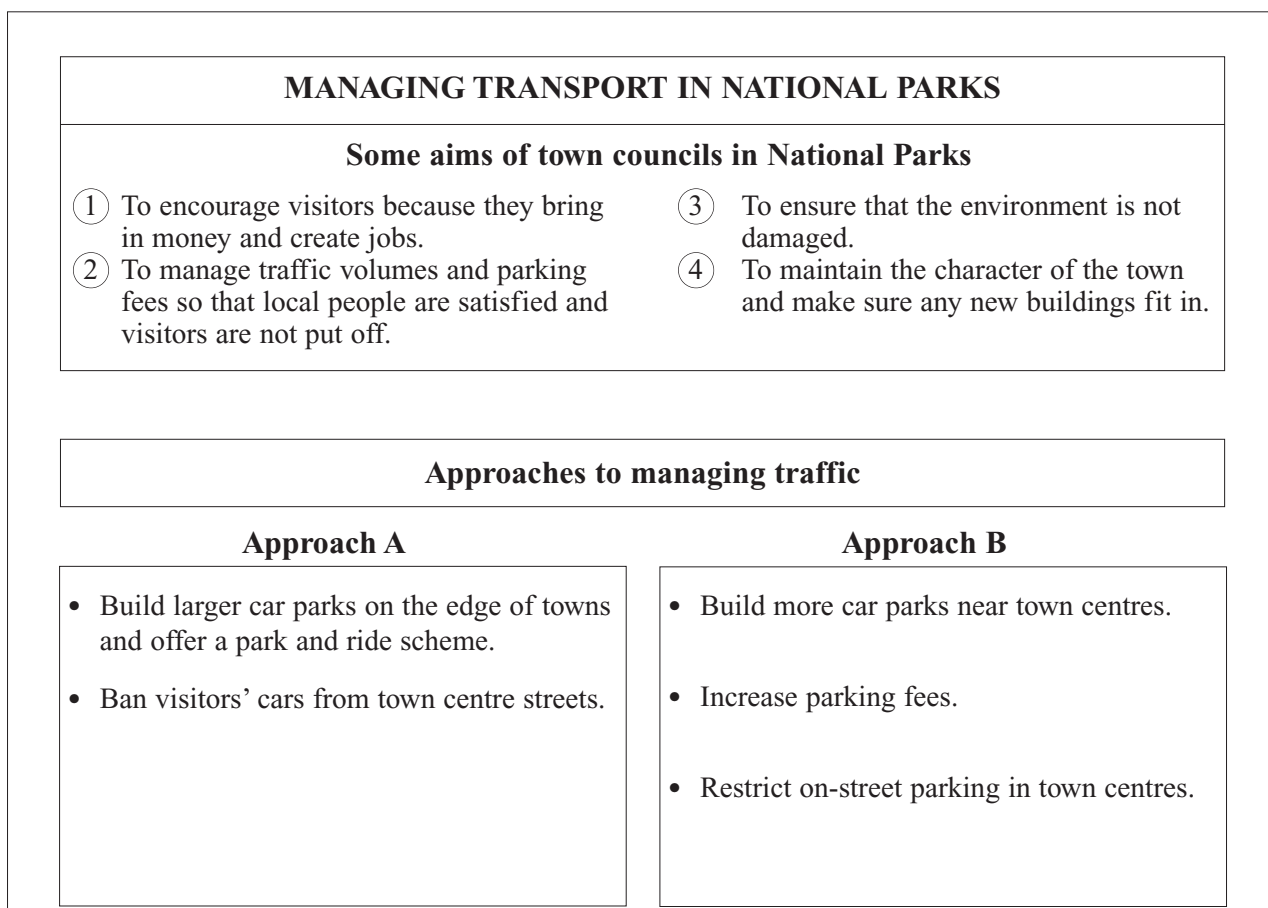


Figure 6

THERE ARE NO QUESTIONS PRINTED ON THIS PAGE

ACKNOWLEDGEMENT OF COPYRIGHT OWNERS AND PUBLISHERS

Permission to reproduce all copyright material has been applied for. In some cases, efforts to contact copyright owners have been unsuccessful and AQA will be happy to rectify any omissions of acknowledgement in future if notified.

Figure 2 Photograph A © Centre Parcs.

Figure 2 Photograph B Reprinted by permission of HarperCollins Publishers Ltd © Robert Prosser, 1994.

Figure 5 Photograph Reprinted by permission of HarperCollins Publishers Ltd © Robert Prosser, 1994.

Copyright © 2005 AQA and its licensors. All rights reserved.

M/S05/3033/1F