

Candidate forename		Candidate surname	
-----------------------	--	----------------------	--

Centre number						Candidate number				
------------------	--	--	--	--	--	---------------------	--	--	--	--

**OXFORD CAMBRIDGE AND RSA EXAMINATIONS
GENERAL CERTIFICATE OF SECONDARY EDUCATION**

B491/02

**ENVIRONMENTAL AND
LAND-BASED SCIENCE**

**Plant Cultivation
(Higher Tier)**

**TUESDAY 28 JUNE 2011: Morning
DURATION: 45 minutes**

SUITABLE FOR VISUALLY IMPAIRED CANDIDATES

Candidates answer on the question paper.

OCR SUPPLIED MATERIALS:

None

OTHER MATERIALS REQUIRED:

Electronic calculator

Pencil

Ruler (cm/mm)

READ INSTRUCTIONS OVERLEAF

INSTRUCTIONS TO CANDIDATES

- **Write your name, centre number and candidate number in the boxes on the first page. Please write clearly and in capital letters.**
- **Use black ink. Pencil may be used for graphs and diagrams only.**
- **Read each question carefully. Make sure you know what you have to do before starting your answer.**
- **Write your answer to each question in the space provided. Additional paper may be used if necessary but you must clearly show your candidate number, centre number and question number(s).**
- **Answer ALL the questions.**

INFORMATION FOR CANDIDATES

- **The number of marks is given in brackets [] at the end of each question or part question.**
- **The total number of marks for this paper is 36.**

Answer ALL the questions.

- 1 To keep a plant healthy it must be grown in the correct conditions.**

The conditions can be monitored using sensors.

PHOSPHATE SENSOR

LIGHT SENSOR

OXYGEN SENSOR

CARBON DIOXIDE PROBE

SOIL MOISTURE PROBE

A grower notices problems with some plants.

The sensors may be faulty.

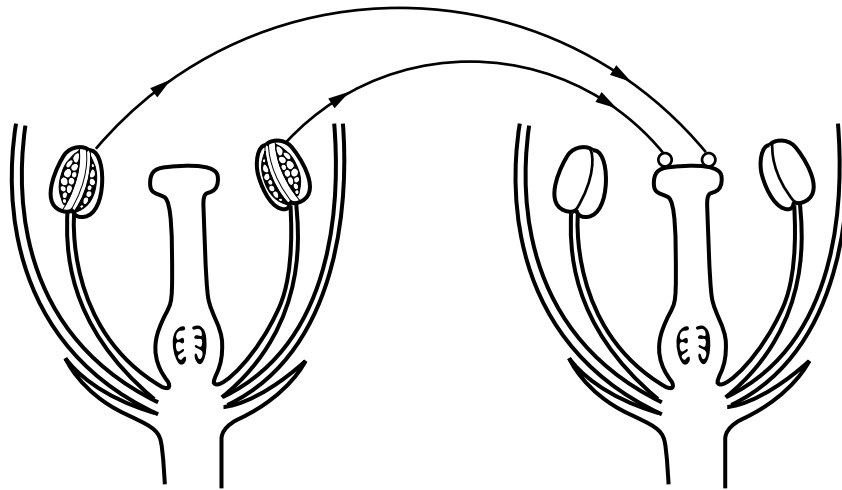
For each of the following PROBLEMS, which SENSOR might be faulty?

Choose from the list to complete the table.

PROBLEM	SENSOR
the plants are wilting	
the plants have purplish leaves	
the plants are tall and leggy (etiolated)	

[3]

2 The diagram shows pollination in a flowering plant.



Which ONE of the following statements about pollination is correct?

Put a tick (✓) in the box next to the correct statement.

Pollen is transferred from:

the stigma of one flower to the anther of another flower of the same species

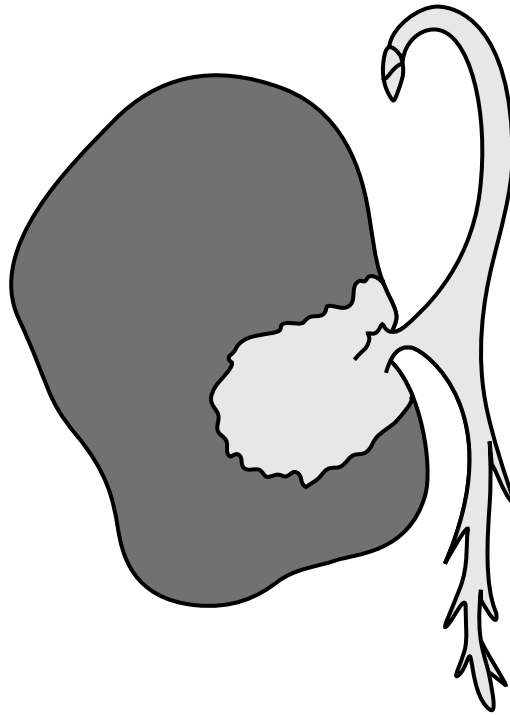
the anther of one flower to the stigma of another flower of the same species

the stigma of one flower to the anther of another flower of a different species

the anther of one flower to the stigma of another flower of a different species

[1]

3 The diagram shows a germinating seed.



On the diagram,

- **label the plumule with the letter **P****
- **label the radicle with the letter **R****

Make sure the letters can be clearly seen.

[2]

4 Which ONE of the following, A, B, C or D, best describes the term phenotype?

A the organism produced from a genetic cross

B the genes in an organism

C the appearance of an organism

D the stronger characteristics in an organism

Answer A, B, C or D _____ [1]

5 A spider plant has produced a runner with daughter plantlets at the end.

Which ONE of the following statements about the daughter plantlets, A, B, C or D, is true?

A It will be better adapted to its environment than the parent plant.

B It will never need to grow roots because it always gets its nutrients from the parent plant.

C It will be more disease resistant than the parent plant.

D It will have the same characteristics as the parent plant.

Answer A, B, C or D _____ [1]

6 This question is about the breeding of flowering plants.

The following Punnet squares show different genetic crosses.

A

	W	W
R	RW	RW
r	rW	rW

B

	w	w
R	Rw	Rw
r	rw	rw

D

	r	r
R	Rr	Rr
r	rr	rr

C

	R	R
R	RR	RR
r	rR	rR

A heterozygous (hybrid) red flowered plant was crossed with a homozygous (pure breeding) white flowered plant.

Which Punnet square, A, B, C or D, shows the correct way of representing this cross?

Answer A, B, C or D _____ [1]

- 7 Some students were investigating the germination of clover seeds.

The students wanted to find out the effect of watering the seeds with tea.

	CLOVER		
	NUMBER OF SEEDS SOWN	NUMBER OF SEEDS WHICH GERMINATED	% GERMINATION
WATER	97	44	45
TEA	77	11	(a)

- (a) Complete the table to show the percentage (%) germination when the seeds were watered with tea.

Give your answer to the nearest whole number.

Answer _____ % [1]

(b) The tea contains a chemical called tannin.

The students concluded that tannin reduced germination success.

Suggest how tannins might prevent seed germination.

[1]

- 8 The table shows the effect of adding different nutrients to potato and wheat crops.

PLOT	FERTILISER ADDED (kg/HECTARE)			CROP YIELD (TONNES/HECTARE)	
	N	P	K	WHEAT	POTATOES
A	0	0	0	1.7	9.5
B	96	0	0	3.7	8.3
C	0	77	107	2.0	16.7
D	96	77	107	6.6	38.6

- (a) Which plot, A, B, C or D, was used as a control?

Explain your answer.

PLOT _____

EXPLANATION _____

_____ [2]

(b) Look at the crop yield for WHEAT.

Using data from the table, describe the effect of adding P and K

WITHOUT N _____

WITH N _____

_____ [2]

(c) A farmer pays £100 per hectare for N fertilizer on plot B.

He sells his wheat for £100 a tonne.

How much profit does the farmer make?

Put a ring around the correct answer.

£170 £370 £270 £0 [1]

(d) The farmer used NPK fertilizer on plot D.

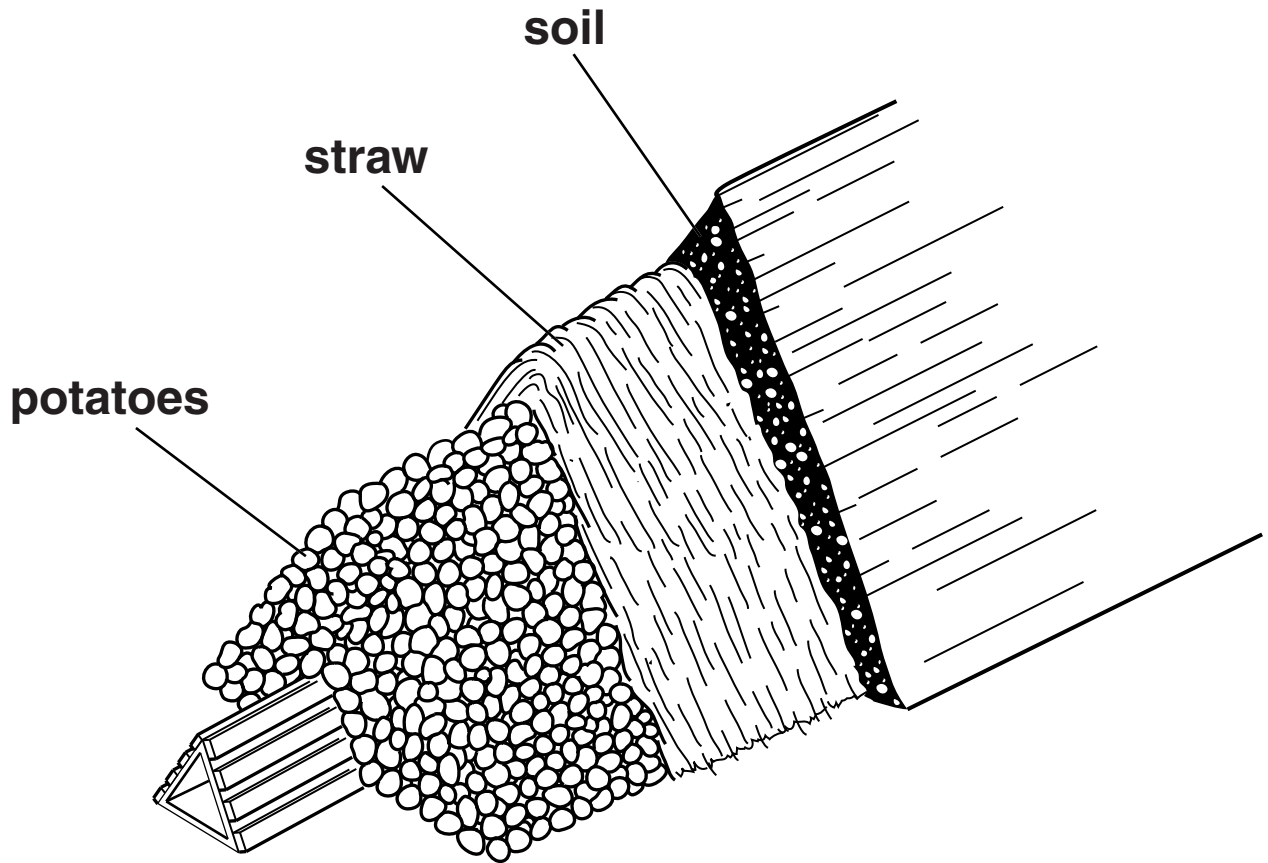
The NPK fertilizer costs £150 a tonne.

He sells his wheat for £660.

How much EXTRA profit does the farmer make compared with plot B?

_____ [1]

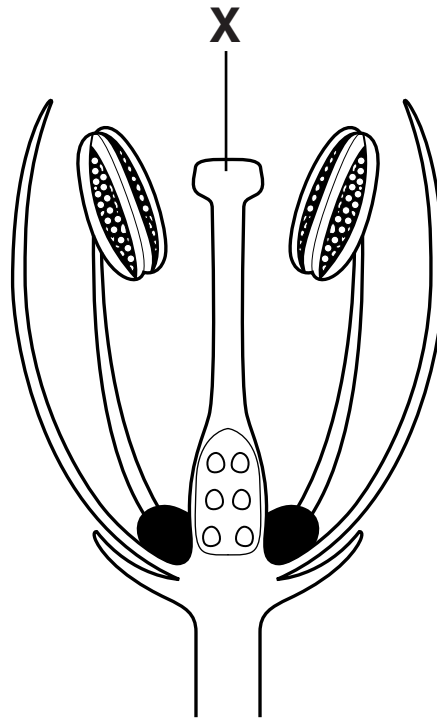
9 The diagram shows potatoes being stored in a clamp.



Suggest ONE reason why keeping potatoes in a clamp extends storage life.

[1]

10 The diagram shows a cross-section of a flower.



The structure labelled X has been damaged.

Give TWO effects this will have on reproduction in this plant.

[2]

11 The table shows the effect of adding nitrate fertiliser to a field of wheat.

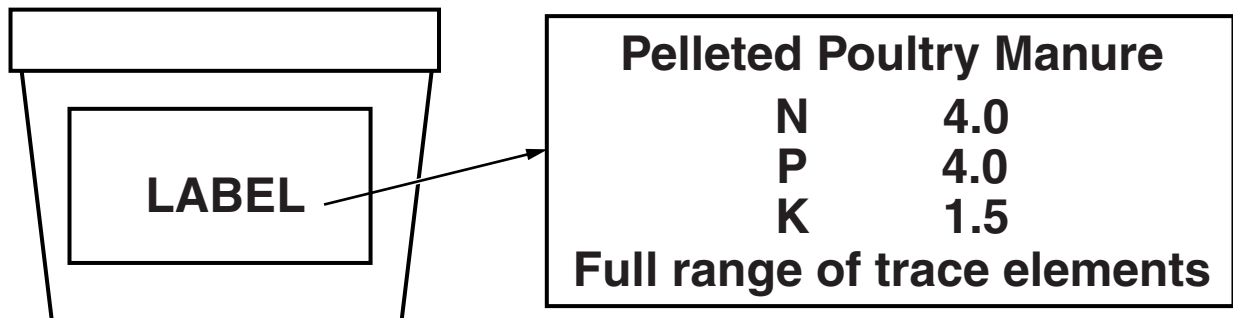
NITRATE FERTILISER APPLIED (kg/HECTARE)	YIELD (TONNES/HECTARE)
0	3.0
50	3.5
100	4.0
150	4.5
200	3.7

Suggest a reason for the result when applying EXCESS nitrate fertiliser at 200 kg/hectare.

[1]

12 The diagram shows a container containing pellets of poultry manure.

This is used as an ORGANIC fertiliser.



Samantha wants to apply some of this fertiliser to her allotment.

She buys it from the local garden centre because it is cheap and readily available.

State TWO other reasons why Samantha should use THIS organic fertiliser rather than an inorganic fertiliser.

1 _____

2 _____

_____ [2]

13 Bearded iris plants can be propagated asexually from rhizomes.

Commercial growers often propagate plants from rhizomes because it is quick, cheap and relatively easy to do.

State one other ADVANTAGE and one DISADVANTAGE of propagating plants using rhizomes.

advantage _____

disadvantage _____

_____ [2]

14 A farmer is growing oil seed rape.

The farmer has noticed that in recent years the field has produced smaller and smaller yields.

The soil has become WATERLOGGED.

Based on this observation suggest, with reasons, what the farmer could do to increase crop yield.

[3]

15 Sap sucking insects can sometimes be found on the stems of crop plants.

These insects can reduce crop yield.

Suggest TWO reasons why.

[2]

16 Describe and explain the processes that occur AFTER POLLINATION which result in seed and fruit production.

[3]

17 Plants need water and fertiliser to produce a good yield.

Many gardeners dissolve fertiliser in a watering can so that they can water and feed their plants at the same time.

Write about TWO other ways that plants can be provided with the correct levels of water and fertiliser.

You may write about garden plants or field crops in your answer.

[3]

END OF QUESTION PAPER



Copyright Information

OCR is committed to seeking permission to reproduce all third-party content that it uses in its assessment materials. OCR has attempted to identify and contact all copyright holders whose work is used in this paper. To avoid the issue of disclosure of answer-related information to candidates, all copyright acknowledgements are reproduced in the OCR Copyright Acknowledgements Booklet. This is produced for each series of examinations and is freely available to download from our public website (www.ocr.org.uk) after the live examination series.

If OCR has unwittingly failed to correctly acknowledge or clear any third-party content in this assessment material, OCR will be happy to correct its mistake at the earliest possible opportunity.

For queries or further information please contact the Copyright Team, First Floor, 9 Hills Road, Cambridge CB2 1GE.

OCR is part of the Cambridge Assessment Group; Cambridge Assessment is the brand name of University of Cambridge Local Examinations Syndicate (UCLES), which is itself a department of the University of Cambridge.