

Candidate Name	Centre Number	Candidate Number

WELSH JOINT EDUCATION COMMITTEE
General Certificate of Secondary Education



CYD-BWYLLGOR ADDYSG CYMRU
Tystysgrif Gyffredinol Addysg Uwchradd

274/02

**GCSE
DESIGN AND TECHNOLOGY**

SHORT COURSE

FOCUS AREA: TEXTILES TECHNOLOGY

(Higher Tier - Grades D to A*)

P.M. TUESDAY, 5 June 2007

(1 Hour)

	Leave Blank
Question 1	
Question 2	
Question 3	
Question 4	
TOTAL MARK	

ADDITIONAL MATERIALS

In addition to this examination paper you will need coloured pencils.

INSTRUCTIONS TO CANDIDATES

Write your name, centre number and candidate number in the spaces at the top of this page.

Answer **all** questions.

Write your answers in the spaces provided in this booklet. Where the space is not sufficient for your answer, continue the answer at the back of the book, taking care to number the continuation correctly.

INFORMATION FOR CANDIDATES

The number of marks is given in brackets at the end of each question or part-question.

No certificate will be awarded to a candidate detected in any unfair practice during the examination.

Answer all questions in the spaces provided.

1. (a) A designer needs to carry out research before designing a new toy for a three-year-old child.



Some research activities are shown in the table below. Complete the table by stating what important information can be found from these activities. *One example has been done for you.* 3 × [2]

Research Activity	Outcomes of research
Talk to a three-year-old child	<i>To establish the types of activities that are popular with three-year-olds.</i>
Look at anthropometric data
Read a book on child development
Look at a materials properties website

(b) Give **three** safety concerns that a parent may have when buying a toy. 3 × [1]

Concern 1:

.....



Concern 2:

.....

Concern 3:

.....

2. Sales of the breakfast cereal shown below are falling.



Ingredients: Rice, rye, oats, honey, sugar, salt.			
	Guideline daily amount	Each serving with milk	% guideline daily amount
Calories	2000kcal	170kcal	8%
Sugar	90g	27.8g	30%
Salt	6g	0.8g	14%
Saturated fat	20g	2.4g	12%
Fat	70g	4.0g	6%

- (a) Study the pictures shown and give **two** reasons why you think sales of this cereal have fallen. 2 × [2]




Reason 1:

.....

Reason 2:

.....

(b) The pictures below show three kettles.

			
Kettle	A	B	C
Cost	£4.99	£19.99	£37.99
Materials	White Plastic	Stainless Steel	Thermochromic Plastic
Where made	China	Europe	UK
Water capacity	1.5 Litres	1 Litre	2.3 Litres

- (i) Even though it is expensive, some people would decide to buy kettle C. Give **one** reason for this. [2]

.....
.....

- (ii) Give **two** reasons why kettle A can be sold at this price. $2 \times [2]$

Reason 1:

.....

Reason 2:

.....

- (iii) Kettle C uses a thermochromic plastic. Give **two** benefits of using this material. $2 \times [2]$

Benefit 1:

.....

Benefit 2:

.....

- 3. (a) One part of the design process is called *development*. One development activity might be to consider a range of possible colours for a product. List **three** other activities that are part of development. 3 × [1]

Activity 1:

Activity 2:

Activity 3:

- (b) Name a specific ICT/CAD package and explain how it could be used to help with the development of a new product.

Name of package [1]

Use in development [2]

.....
.....
.....

- (c) For a product of your choice, describe **two** benefits of using CAM (computer aided manufacturing) to make the product. 2 × [1]

Product

Benefit 1:

Benefit 2:

- (d) Describe **two** environmental issues that should be taken into account when *designing* products. 2 × [2]

Issue 1:

.....

Issue 2:

.....

BLANK PAGE

4. Skate boarding is a popular activity. Design a two-piece co-ordinated outfit that reflects a skate boarding theme.

(a) **Sketch** your designs for a two-piece co-ordinated outfit using the silhouettes provided on the opposite page.

Your design must:

- be suitable for both males and females;
- reflect the skate boarding theme;
- show labelling of accurate style details;
- have a co-ordinated colour scheme;
- be made of suitable comfortable and durable materials.

Marks will be awarded for:

- (i) good graphical communication of the front and back views; [6]
- (ii) clear labelling to show:
 - the names of **two** specific suitable materials; [2]
 - **four** specific style details; [4]
- (iii) a creative interpretation of the skate boarding theme; [5]
- (iv) a co-ordinated colour scheme. [4]

(b) Explain why your design is suitable for both male and female skate boarders. [2]

.....

.....

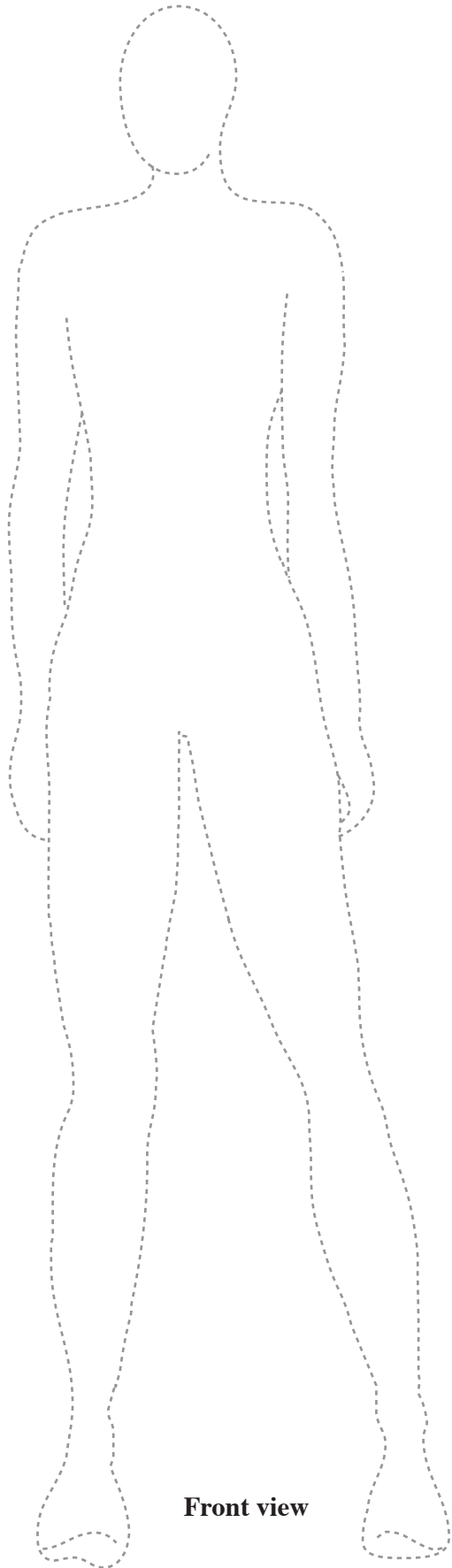
.....

.....

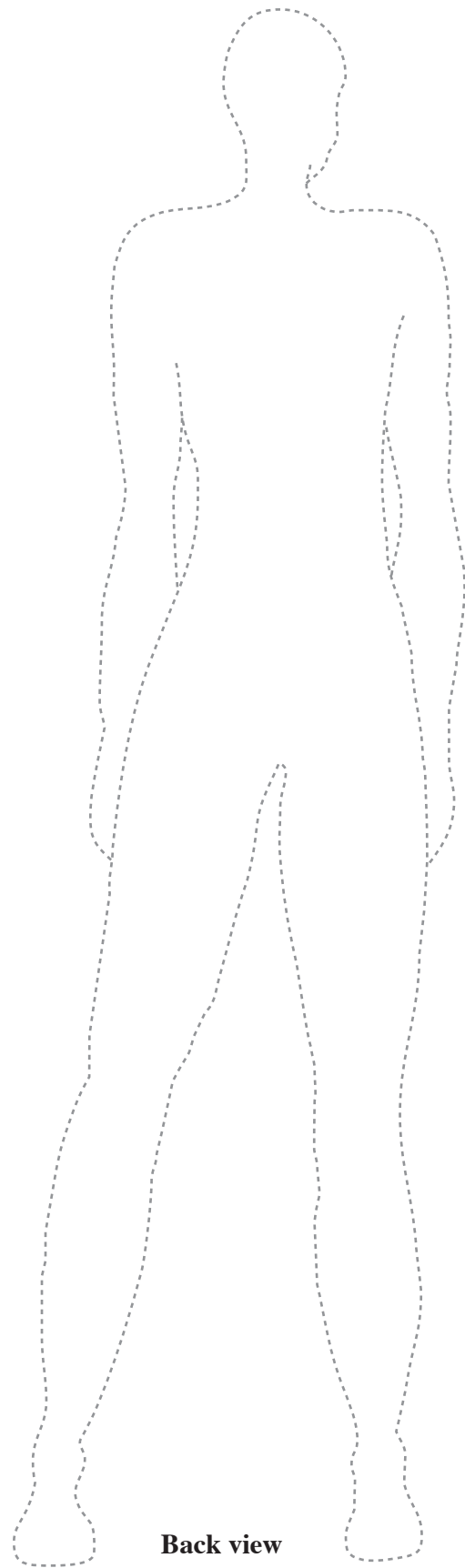
(c) Explain how your design is influenced by the skate boarding theme. [2]

.....

.....



Front view



Back view

