

GENERAL CERTIFICATE OF SECONDARY EDUCATION
DESIGN AND TECHNOLOGY
Resistant Materials
Sustainable Design

A562

Candidates answer on the question paper.

OCR supplied materials:
None

Other materials required:
None

Wednesday 25 May 2011
Afternoon
Duration: 1 hour



Candidate forename		Candidate surname	
--------------------	--	-------------------	--

Centre number						Candidate number				
---------------	--	--	--	--	--	------------------	--	--	--	--

MODIFIED LANGUAGE

INSTRUCTIONS TO CANDIDATES

- Write your name, centre number and candidate number in the boxes above. Please write clearly and in capital letters.
- Use black ink. Pencil may be used for graphs and diagrams only.
- Read each question carefully. Make sure you know what you have to do before starting your answer.
- Write your answer to each question in the space provided. Additional paper may be used if necessary but you must clearly show your candidate number, centre number and question number(s).
- Answer **all** the questions in Section A **and** Section B.
- Do **not** write in the bar codes.

INFORMATION FOR CANDIDATES

- The number of marks is given in brackets [] at the end of each question or part question.
- The total number of marks for this paper is **60**.
- Your quality of written communication is assessed in questions marked with an asterisk (*).
- This document consists of **12** pages. Any blank pages are indicated.

Section A

Answer **all** questions.

You are advised to spend 15 minutes on this section.

On questions 1–5 **circle** your answer.

- 1** One of the aims of the British Standards Institute is to make sure:
- (a) Products are safe and fit for purpose
 - (b) That products can be recycled
 - (c) Products are not too expensive
 - (d) That workers are paid enough [1]
- 2** Carbon footprint is a measure of:
- (a) Energy used by a company
 - (b) Waste produced by a household
 - (c) The impact of human activities on the environment
 - (d) The size of an adult foot [1]
- 3** Eco-design is the process of designing a product to be:
- (a) As cheap as possible
 - (b) Made as fast as possible
 - (c) As profitable as possible
 - (d) As environmentally friendly as possible [1]
- 4** The CE (Conformité Européenne) is a symbol that makes sure a product:
- (a) Meets a safety standard
 - (b) Meets a durability standard
 - (c) Is made in Europe
 - (d) Can be connected to an electricity supply [1]

5 Which of the following is **not** a renewable energy resource?

- (a) Biomass
- (b) Wave
- (c) Wind
- (d) Gas

[1]

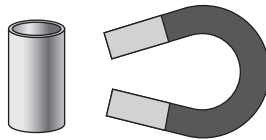
6 State what is meant when a product is 'repaired'.

..... [1]

7 Give **one** advantage to the manufacturer of planned obsolescence.

..... [1]

8 State the meaning of the symbol shown.



..... [1]

9 State the meaning of 'biodegradable'.

..... [1]

10 State why CFCs (chlorofluorocarbons) are no longer used in many products.

..... [1]

Decide whether each of the following is **True** or **False**.

Tick (✓) the box to show your answer.

	True	False	
11 The second-hand use of a product is known as secondary recycling	<input type="checkbox"/>	<input type="checkbox"/>	[1]
12 Air-born particles are one of the hazards regulated by COSHH	<input type="checkbox"/>	<input type="checkbox"/>	[1]
13 The life cycle of a product is the stages from conception to decomposition	<input type="checkbox"/>	<input type="checkbox"/>	[1]
14 Chemicals that can cause harm to people and animals are called bio products	<input type="checkbox"/>	<input type="checkbox"/>	[1]
15 Sorting plastic into different types of plastic is a major problem in recycling centres	<input type="checkbox"/>	<input type="checkbox"/>	[1]
			Total [15]

5
BLANK PAGE

PLEASE DO NOT WRITE ON THIS PAGE

Section B

Answer **all** questions.

You are advised to spend 45 minutes on this section.

16 Fig. 1 shows a lamp shade made from polypropylene sheet.




Fig. 1

(a) Manufacturers must make sure that products are safe for the user.

State **two** possible safety concerns that the manufacturer of the lamp shade would need to consider.

1

2

[2]

(b) The lamp shade is supplied in flat pack form for assembly by the user.

Give **two** reasons why supplying the lamp shade in flat pack form may help the environment.

1

.....

.....

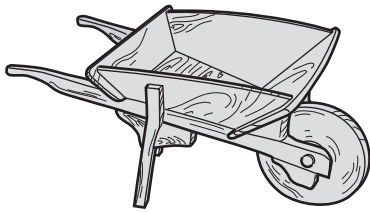
2

.....


.....

[4]

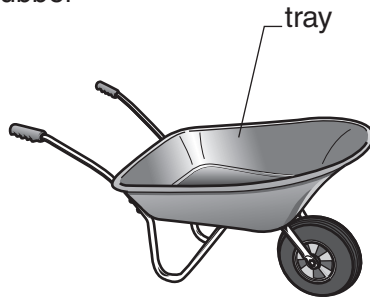
17 Fig. 2 shows three wheelbarrows.



Wheelbarrow **A**
made from wood



Wheelbarrow **B** made
from metal and rubber



Wheelbarrow **C** made
from metal and plastic



Fig. 2

(a) Give **two** reasons why wheelbarrow **B** evolved from wheelbarrow **A**.

Reason 1

.....

.....

.....

Reason 2

.....

.....

.....

(b) Give **two** reasons why wheelbarrow **C** evolved from wheelbarrow **B**.

Reason 1

.....

.....

.....

Reason 2

.....

.....

.....

[4]

(c) Describe **two** ways in which wheelbarrow **C** has better ergonomic qualities than wheelbarrow **A**.

.....

.....

.....

.....

[2]

(d) Give **one** reason, other than cost, why a designer may refuse to use a tropical hardwood for a wheelbarrow.

.....

.....

[2]

(e) Give **one** reason why a designer may choose injection moulding rather than vacuum forming for the tray of wheelbarrow **C**.

.....

.....

[1]

(f) (i) State **one** piece of anthropometric data that would have been used in the design of the wheelbarrow.

Anthropometric data [1]

(ii) Name the part of the wheelbarrow where the anthropometric data would have been used.

Part of wheelbarrow

..... [1]

Total [15]

Turn over

18 Fig. 3 shows a pendant made from a tropical hardwood.



Fig. 3

(a) Explain what is meant by cultural influences on a product referring to the tropical hardwood pendant.

.....
.....
..... [3]

(b) The pendant is aesthetically pleasing.

List **three** properties of a product which can add to its aesthetic appeal.

1
2
3 [3]

The Ethical Trading Initiative (ETI) requires that the working conditions of employees must meet minimum standards.

(c) State **four** examples of working conditions which supporters of ETI must meet.

1
2
3
4 [4]

(d) Risk assessment is important when planning the manufacture of a product.

State the **two** key components of risk assessment.

1

2

[2]

(e) Some products are marked with the symbol shown in Fig. 4.



Fig. 4

(i) Name the symbol shown in Fig. 4.

..... [1]

(ii) Explain why consumers may wish to purchase products displaying the symbol shown in Fig. 4.

.....

.....

..... [2]

Total [15]

PLEASE DO NOT WRITE ON THIS PAGE



Copyright Information

OCR is committed to seeking permission to reproduce all third-party content that it uses in its assessment materials. OCR has attempted to identify and contact all copyright holders whose work is used in this paper. To avoid the issue of disclosure of answer-related information to candidates, all copyright acknowledgements are reproduced in the OCR Copyright Acknowledgements Booklet. This is produced for each series of examinations and is freely available to download from our public website (www.ocr.org.uk) after the live examination series.

If OCR has unwittingly failed to correctly acknowledge or clear any third-party content in this assessment material, OCR will be happy to correct its mistake at the earliest possible opportunity.

For queries or further information please contact the Copyright Team, First Floor, 9 Hills Road, Cambridge CB2 1GE.

OCR is part of the Cambridge Assessment Group; Cambridge Assessment is the brand name of University of Cambridge Local Examinations Syndicate (UCLES), which is itself a department of the University of Cambridge.