



Centre Number

71

Candidate Number

General Certificate of Secondary Education
2012

Home Economics (Child Development)

Unit 2

Child Development 0–5 years

[GHC21]

THURSDAY 31 MAY, AFTERNOON



TIME

1 hour.

INSTRUCTIONS TO CANDIDATES

Write your Centre Number and Candidate Number in the spaces provided at the top of this page.

Write your answers in the spaces provided in this question paper.
Answer **all six** questions.

INFORMATION FOR CANDIDATES

The total mark for this paper is 60.

Figures in brackets printed down the right-hand side of pages indicate the marks awarded to each question or part question. Quality of written communication will be assessed in questions **5** and **6**.

For Examiner's
use only

Question Number	Marks
1	
2	
3	
4	
5	
6	

Total
Marks

Answer **all six** questions.

Examiner Only	
Marks	Remark

1 (a) Describe the following:

(i) vernix

_____ [1]

(ii) fontanelle

_____ [1]

(iii) grasp reflex

_____ [1]

(iv) falling/moro reflex

_____ [1]

(b) Amy has a newborn baby.

(i) Write down **three** advantages of Amy and her baby attending the local baby clinic.

1. _____ [1]

2. _____ [1]

3. _____ [1]

(ii) Write down **three** safety points Amy should follow when bathing her baby.

1. _____ [1]

2. _____ [1]

3. _____ [1]

2 (a) Write down **two** ways to treat headlice in young children.

1. _____ [1]

2. _____ [1]

(b) Write down **two** reasons for the immunisation of babies and young children.

1. _____ [1]

2. _____ [1]

(c) Explain **two** points to consider when choosing shoes for one-year-old Max.

1. _____

2. _____

_____ [4]

(d) Explain **two** ways the National Childminding Association can help parents when choosing childcare.

1. _____

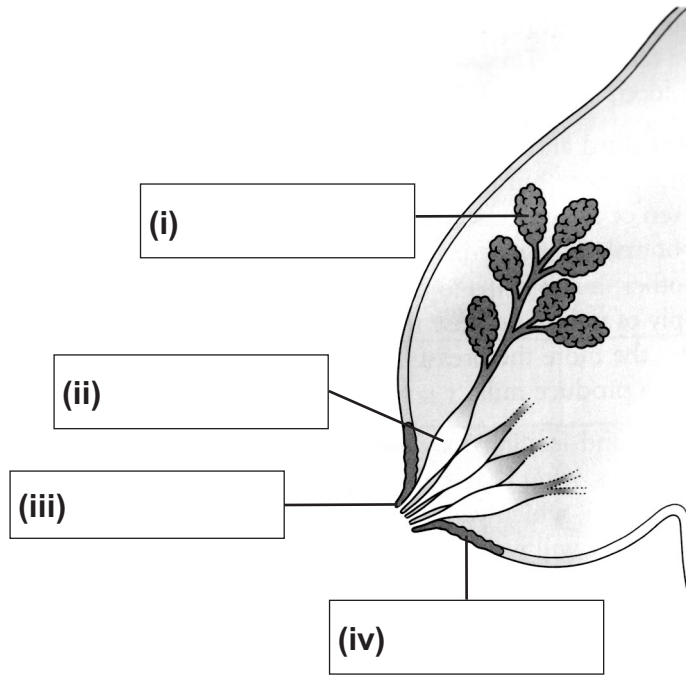
2. _____

_____ [4]

Examiner Only

Marks Remark

3 (a) Label the diagram of the breast.



[4]

© Child Care and Development, 5th edition by Pamela Minett, page 86, published by Hodder Education, 2005. ISBN 9780340889152. "Reproduced by permission of Hodder Education"

(b) Evaluate the decision to breastfeed a baby.

1. _____

2. _____

3. _____

[6]

Examiner Only	
Marks	Remark

4 (a) Explain **two** ways parents can encourage a child when toilet training.

1. _____

2. _____

_____ [4]

(b) Describe **three** stages of social play.

1. _____





2. _____

3. _____

_____ [6]

Examiner Only	
Marks	Remark

5 Evaluate the nutritional content of this lunch for four-year-old James.

<p>Chicken salad wrap</p> 	<p>Strawberry yoghurt</p> 
<p>Packet of crisps</p> 	<p>Bottle of water</p> 

Examiner Only	
Marks	Remark

[9]

Examiner Only	
Marks	Remark

THIS IS THE END OF THE QUESTION PAPER

Permission to reproduce all copyright material has been applied for.
In some cases, efforts to contact copyright holders may have been unsuccessful and CCEA
will be happy to rectify any omissions of acknowledgement in future if notified.