

Thursday 20 June 2013 – Afternoon

**GCSE TWENTY FIRST CENTURY SCIENCE
CHEMISTRY A**

A173/01 Module C7 (Foundation Tier)

Candidates answer on the Question Paper.
A calculator may be used for this paper.

OCR supplied materials:
None

Other materials required:

- Pencil
- Ruler (cm/mm)

Duration: 1 hour



Candidate forename		Candidate surname	
-----------------------	--	----------------------	--

Centre number						Candidate number				
---------------	--	--	--	--	--	------------------	--	--	--	--

INSTRUCTIONS TO CANDIDATES

- Write your name, centre number and candidate number in the boxes above. Please write clearly and in capital letters.
- Use black ink. HB pencil may be used for graphs and diagrams only.
- Answer **all** the questions.
- Read each question carefully. Make sure you know what you have to do before starting your answer.
- Write your answer to each question in the space provided. Additional paper may be used if necessary but you must clearly show your candidate number, centre number and question number(s).
- Do **not** write in the bar codes.

INFORMATION FOR CANDIDATES

- Your quality of written communication is assessed in questions marked with a pencil (✎).
- The number of marks is given in brackets [] at the end of each question or part question.
- The total number of marks for this paper is **60**.
- This document consists of **20** pages. Any blank pages are indicated.
- The Periodic Table is printed on the back page.

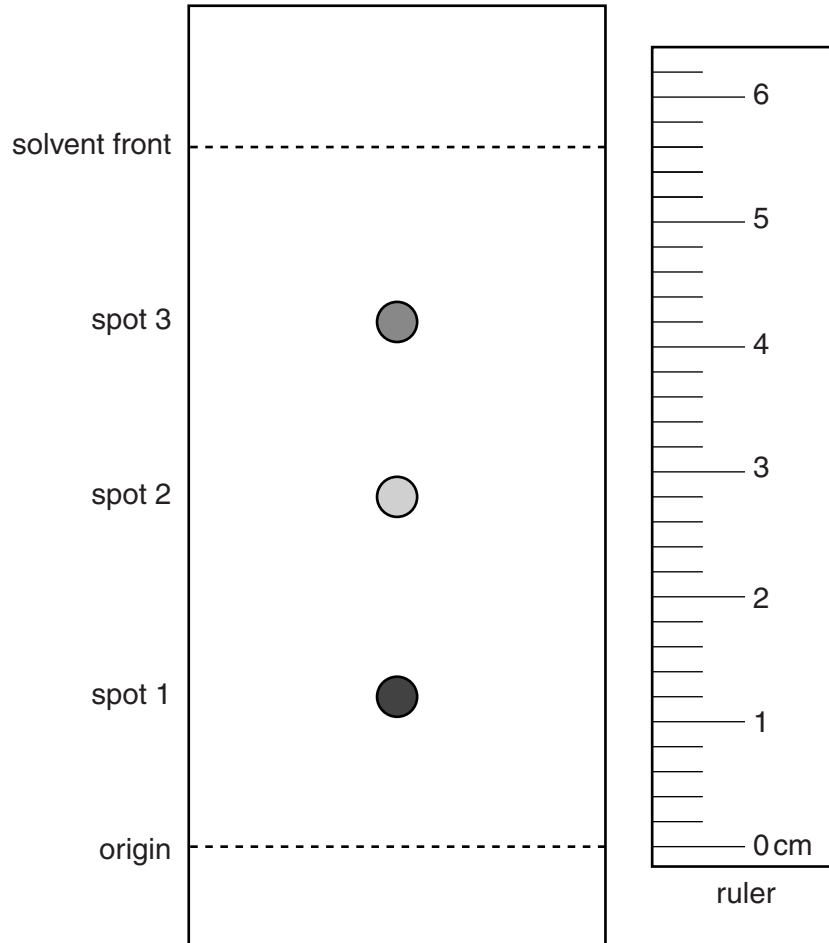
Answer **all** the questions.

1 Peter is testing the food colourings in soft drinks made by different companies.

He wants to find out if any of these drinks contain banned food colourings.

Peter uses chromatography.

Here is a diagram of the chromatogram from soft drink **A**.



(a) Use the ruler on the diagram.

Work out the R_f value for **spot 3** on this chromatogram.

Use the formula in the box.

$$R_f = \frac{\text{distance travelled by spot}}{\text{distance travelled by solvent}}$$

Show your working.

R_f value for spot 3 = [2]

(b) Peter tests five soft drinks.

Write your Rf value for spot 3 of soft drink **A** in the table with the others.

Soft drink	Rf value spot 1	Rf value spot 2	Rf value spot 3
A	0.21	0.50	
B	0.38	0.65	0.72
C	0.38	0.72	0.88
D	0.29	0.65	0.82
E	0.38	0.44	0.65

Peter does a chromatogram of the banned food colouring.

He finds that it gives two spots, with Rf values 0.38 **and** 0.65.

Which of the soft drinks contain the banned food colouring?

answer [2]

(c) Peter does another chromatogram of the banned food colouring.

This time he uses alcohol instead of water as the solvent.

The table shows his results.

Solvent	Rf values for spots
water	0.38 and 0.65
alcohol	0.25 and 0.90

He writes this conclusion.

Both of the dyes in the food colouring move further when alcohol is used.

Do you think Peter's conclusion is correct? Explain your reasoning.

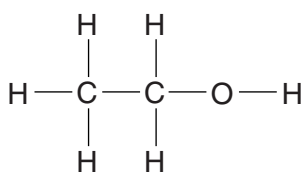
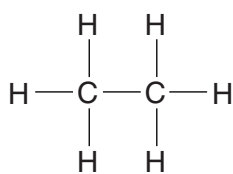
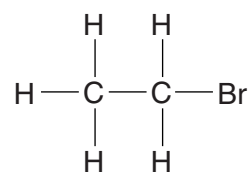
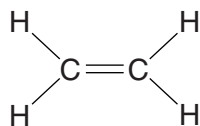
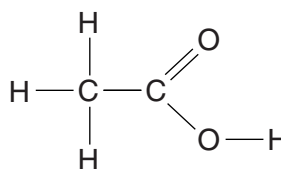
.....

[2]

[Total: 6]

Turn over

2 Look at the formulae of these five organic compounds.

**A****B****C****D****E**

Use the letters **A**, **B**, **C**, **D** and **E** to answer the questions.

(a) Which compound is a saturated hydrocarbon? answer [1]

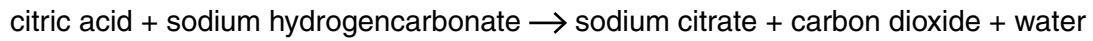
(b) Which compound is an unsaturated hydrocarbon? answer [1]

(c) Which two compounds react with each other to make an ester?
answer and [2]

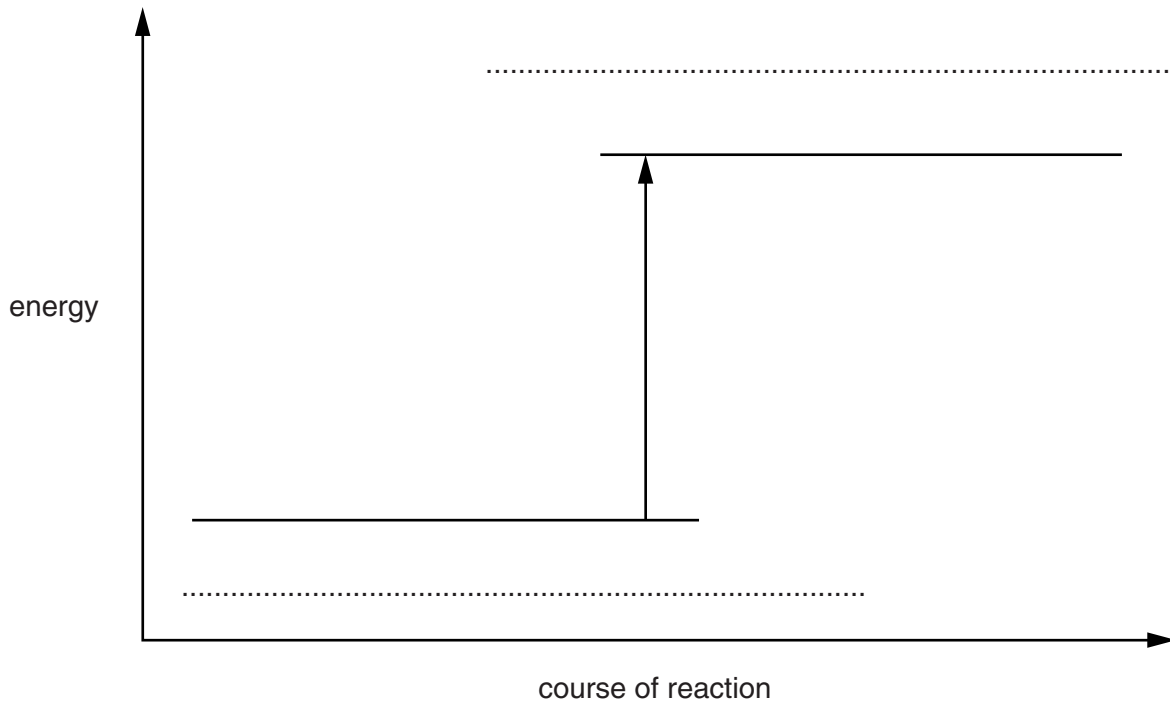
(d) Which compound is a weak acid? answer [1]

[Total: 5]

- 4 Citric acid reacts with sodium hydrogencarbonate.



The diagram shows the energy change that takes place in this reaction.



- (a) Write the names of the reactants and the products of the reaction in the correct places on this diagram. [2]
- (b) Finish these sentences to describe what happens in the reaction.

Use words or phrases from the list.

endothermic

exothermic

gained from

less

lost to

more

The reactants have energy than the products, so during the reaction, energy is the surroundings.

The reaction is

[3]

(c) A solution of citric acid is added to a solution of sodium hydrogencarbonate in a test tube.

Sam says that the solution will bubble and the tube will get hot.

Sally says that there will be no bubbles and the tube will get cold.

Both are wrong. Explain why.

.....

.....

..... [2]

[Total: 7]

- (ii) How can the uncertainty in a set of repeated titration results be assessed?

.....

 [2]

- (b) Emma works for a company making indigestion tablets.

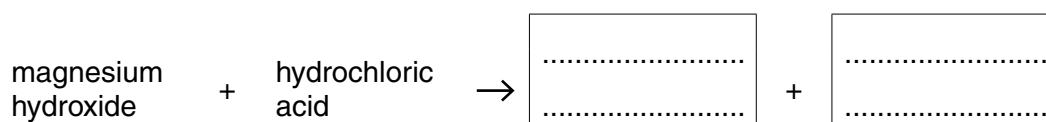
Her job is to test tablets from each batch.

- (i) The tablets contain magnesium hydroxide.

Emma titrates each tablet with hydrochloric acid.

This reaction makes a salt and water.

Finish this word equation for the reaction.



[1]

- (ii) Work out the relative formula mass (RFM) of magnesium hydroxide, $\text{Mg}(\text{OH})_2$.

Show your working.

(Relative atomic masses: H = 1; Mg = 24; O = 16)

RFM of magnesium hydroxide = [1]

- (iii) Emma uses hydrochloric acid with 73.0g of hydrogen chloride in each 1.0dm³ of the acid solution.

It takes 15.1 cm³ of this hydrochloric acid to react with the tablet.

Look at the formula in the box.

$$\text{mass of hydrogen chloride} = \text{volume in cm}^3 \times \frac{\text{mass in 1.0 dm}^3}{1000}$$

Use the formula to work out the mass of hydrogen chloride in 15.1 cm³ of this hydrochloric acid.

Give your answer to the nearest 0.1 g.

Show your working.

mass of hydrogen chloride in 15.1 cm³ solution = g [2]

- (iv) Look at the formula in the box below.

$$\text{mass of Mg(OH)}_2 = \text{mass of hydrogen chloride in 15.1 cm}^3 \text{ solution} \times \frac{\text{RFM Mg(OH)}_2}{73}$$

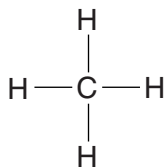
Use this formula, and your answers to (ii) and (iii), to work out the mass of magnesium hydroxide in the tablet.

Show your working.

mass of magnesium hydroxide in the tablet = g [2]

6 Methanol has the formula CH₃OH.

(a) (i) This is the structural (displayed) formula for methane, CH₄.



Draw the structural (displayed) formula for methanol, CH₃OH.

[1]

(ii) To which type of organic compound does methanol belong?

Put a **ring** around the correct answer.

alcohol

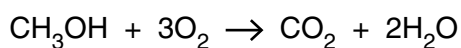
alkane

carboxylic acid

ester

[1]

(b) Methanol burns to make carbon dioxide and water.



Finish this table to show the number of **molecules** of each chemical in the equation.

	methanol	oxygen	carbon dioxide	water
number of molecules in the equation				

[2]

(c) Give a use of methanol.

..... [1]

[Total: 5]

(b) Fermentation makes a solution containing less than 20% of ethanol.

(i) Which of these statements explains why it is not possible to make a more concentrated solution?

Put a tick (✓) in the box next to the best statement.

- Yeast stops making ethanol when it runs out of sugar.
- The reaction is too slow at 30 °C.
- Yeast is killed by a high concentration of ethanol.
- Too much carbon dioxide is made.

[1]

(ii) What process is used to concentrate the ethanol solution?

Put a **ring** around the correct answer.

- crystallisation** **distillation** **filtration** **reduction** [1]

(c) The reaction of ethene with steam is carried out at about 300 °C.

Fermentation is carried out at about 30 °C.

Suggest reasons for this difference.

.....

.....

.....

.....

.....

..... [2]

[Total: 10]

END OF QUESTION PAPER

16
BLANK PAGE

PLEASE DO NOT WRITE ON THIS PAGE

17
BLANK PAGE

PLEASE DO NOT WRITE ON THIS PAGE

18
BLANK PAGE

PLEASE DO NOT WRITE ON THIS PAGE

PLEASE DO NOT WRITE ON THIS PAGE



Copyright Information

OCR is committed to seeking permission to reproduce all third-party content that it uses in its assessment materials. OCR has attempted to identify and contact all copyright holders whose work is used in this paper. To avoid the issue of disclosure of answer-related information to candidates, all copyright acknowledgements are reproduced in the OCR Copyright Acknowledgements Booklet. This is produced for each series of examinations and is freely available to download from our public website (www.ocr.org.uk) after the live examination series.

If OCR has unwittingly failed to correctly acknowledge or clear any third-party content in this assessment material, OCR will be happy to correct its mistake at the earliest possible opportunity.

For queries or further information please contact the Copyright Team, First Floor, 9 Hills Road, Cambridge CB2 1GE.

OCR is part of the Cambridge Assessment Group; Cambridge Assessment is the brand name of University of Cambridge Local Examinations Syndicate (UCLES), which is itself a department of the University of Cambridge.

