

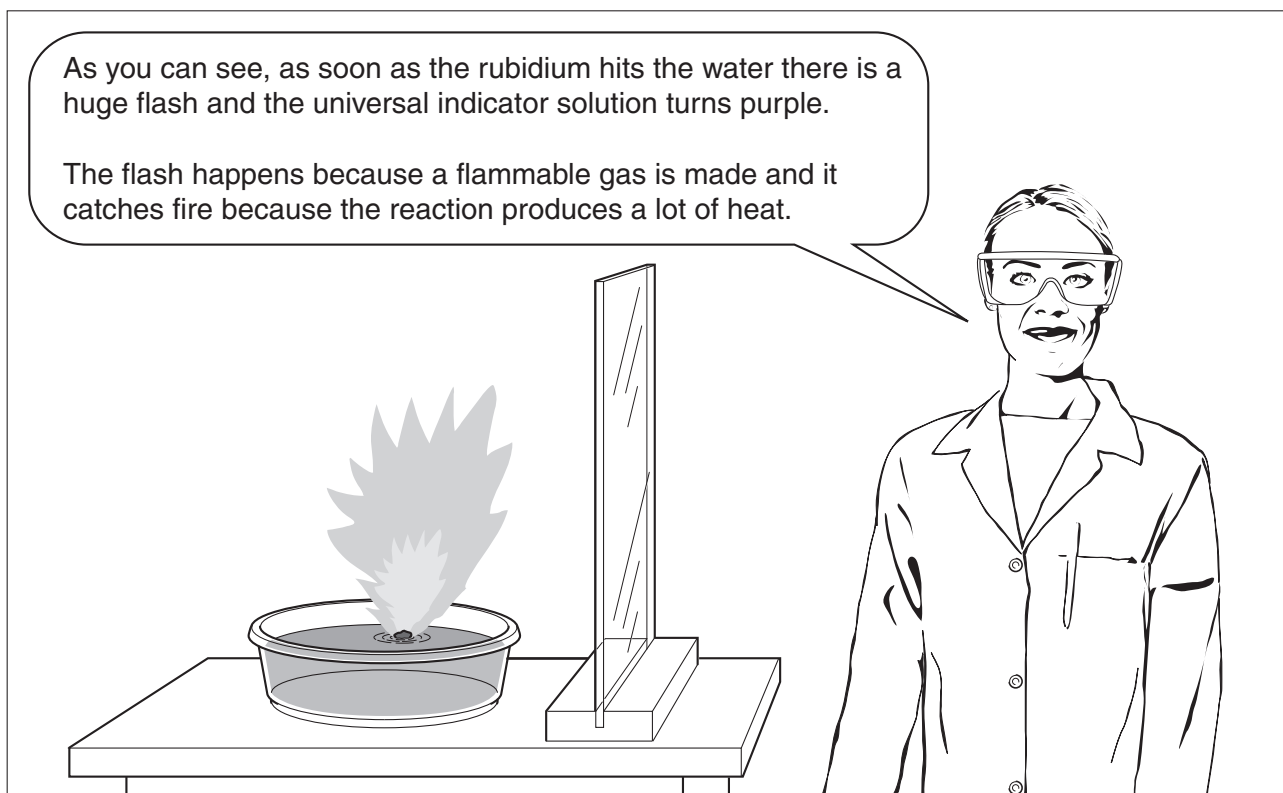
Answer **all** the questions.

1 Gemma makes science films for schools.

She is making a film about the reactions of Group 1 elements with water.

(a) She adds universal indicator solution to a bowl of water.

The film shows what happens when she drops a small piece of rubidium into the water.



(i) What is the name and formula of the gas that is made in the reaction?

name

formula

[2]

- (ii) One of the chemicals made in the reaction causes the universal indicator solution to turn purple.

What is the name of this chemical?

Put a tick (✓) in the box next to the correct answer.

rubidium oxide

sodium hydroxide

rubidium hydride

rubidium hydroxide

[1]

- (b) Gemma makes another film. This time she adds caesium to the water instead of rubidium.

When the caesium hits the water, there is an explosion and the glass bowl breaks.

Why is this reaction more violent than the reaction using rubidium?

Put ticks (✓) in the boxes next to the **two** correct answers.

The reaction takes in a larger amount of heat from the air.

Elements further down the group are more reactive.

The reaction releases more energy.

Caesium loses more electrons than rubidium.

A more reactive gas is made.

[2]

(c) Gemma then adds a small piece of potassium to a bowl of water that contains universal indicator solution.

(i) Describe what she will see.

Your answer should include

- how the reaction is similar to the reaction of the other Group 1 elements
- any differences between the reaction of potassium and the other Group 1 elements.

.....

.....

.....

..... [3]

(ii) Gemma used a safety screen when she was carrying out these experiments.

Explain why this was necessary.

.....

.....

..... [2]

[Total: 10]

2 Scientists study the light given off by the Sun.

Light from the Sun can be split to show a spectrum.



Scientists use the lines on the spectrum to identify elements in the Sun.

(a) How do these lines help scientists identify elements?

Put ticks (✓) in the boxes next to the **two** correct statements.

The position of each line shows the amount of each element.

Every line stands for a different element.

Each element has a different pattern of lines.

The lines can be compared to lines from known elements.

The position of each line depends on the reactivity of the element.

[2]

(b) One of the elements present in the Sun is lithium.

The Sun is so hot that lithium atoms (Li) form lithium ions (Li⁺).

Which of the statements about lithium ions are true and which are false?

Put one tick (✓) in each row to show whether the statement is **true** or **false**.

	true	false
Lithium atoms gain a proton when they form lithium ions.		
Lithium ions have a greater mass than lithium atoms.		
Lithium ions have fewer electrons than lithium atoms.		
Lithium atoms lose neutrons when they form lithium ions.		

[2]

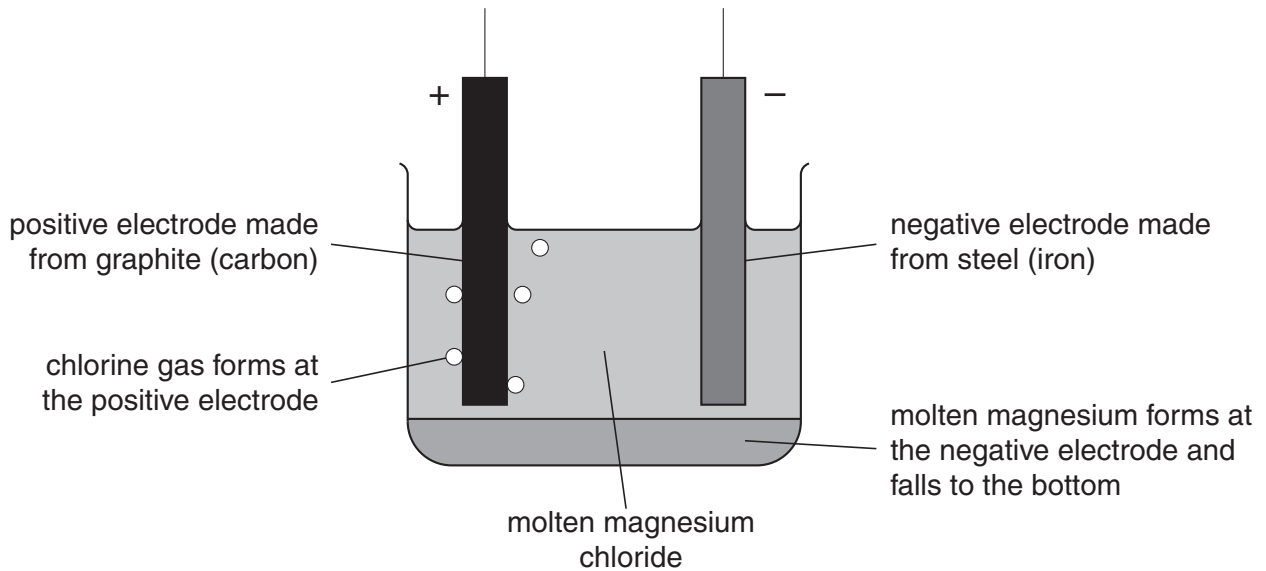
[Total: 4]

3 Read this information about the extraction of magnesium metal.

Magnesium metal is used to make alloys for aircraft.

It is extracted from molten magnesium chloride at 700 °C by electrolysis.

The diagram shows the key features of this process.



- (a) During electrolysis at 700 °C, molten magnesium chloride forms molten magnesium and chlorine gas.

Complete the equation for this process, including state symbols.



[2]

- (b) Which of the statements about the process are true?

Put ticks (✓) in the boxes next to the **two** correct statements.

The magnesium ions gain electrons.

Pairs of magnesium atoms join to make magnesium molecules.

The magnesium ions give electrons to the electrode.

Two elements react to make a compound.

A non-metal is made.

[2]

(c) The relative formula mass of magnesium chloride (MgCl_2) is **95**.

relative atomic mass of chlorine, Cl	= 35.5
---	--------

relative atomic mass of magnesium, Mg	= 24
--	------

(i) What mass of chlorine could be extracted from 190 g of magnesium chloride?

Put a **ring** around the correct answer.

2 g

17 g

35.5 g

71 g

142 g

190 g

[1]

(ii) What mass of magnesium could be extracted from 47.5 tonnes of magnesium chloride?

Put a **ring** around the correct answer.

1 tonne

6 tonnes

12 tonnes

23.75 tonnes

24 tonnes

[1]

(d) During electrolysis, the molten magnesium chloride and the steel electrode both conduct electricity.

(i) Molten magnesium chloride conducts electricity because it is an ionic compound.

Explain how an ionic compound conducts electricity.

.....

..... [2]

(ii) Steel conducts electricity because it contains a lot of iron, which is a metal.

Explain how a metal conducts electricity.

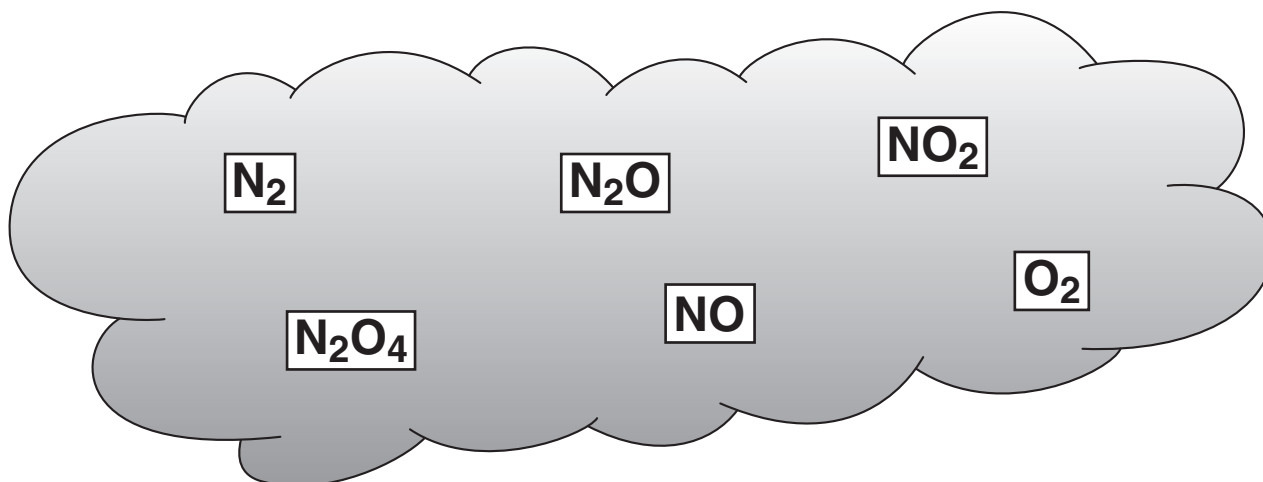
.....

..... [2]

[Total: 10]

- 4 Some gases in air contain nitrogen and oxygen atoms.

The formulae of these gases are shown in the boxes.



- (a) Which of the statements about these gases are true and which are false?

Put one tick (✓) in each row to show whether the statement is **true** or **false**.

	true	false
Some of these gases have a giant structure.		
Molecules of these gases contain covalent bonds.		
These gases conduct electricity.		
These gases only contain atoms of non-metallic elements.		

[2]

- (b) Put a (ring) around the correct word to complete each of the following sentences.

The melting points of these gases are **above** / **below** room temperature.

Their boiling points are **above** / **below** room temperature.

Gases in the air have **molecular** / **ionic** structures.

They have **strong** / **weak** forces between their molecules.

[2]

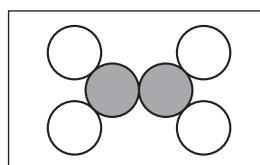
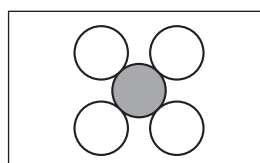
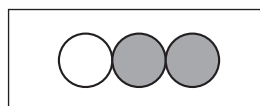
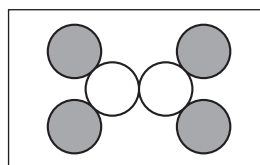
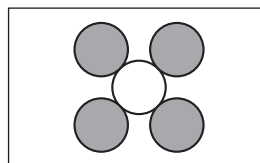
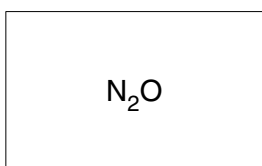
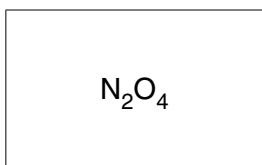
(c) Look at this diagram of a molecule of NO_2 .



Draw straight lines to join each **formula** to the correct **diagram**.

formula

diagram



[2]

[Total: 6]

5 Joe carries out an investigation to find the acid content of vinegar.

He takes samples of vinegar from different places.

Some of the samples contain a brown food colouring.

(a) Joe uses a pH probe to measure the pH of each vinegar.

Why is a pH probe the **best** way of measuring the pH of these vinegar samples?

Put a tick (✓) in the box next to the correct answer.

Using a pH probe is the only method that gives numbered pH values.

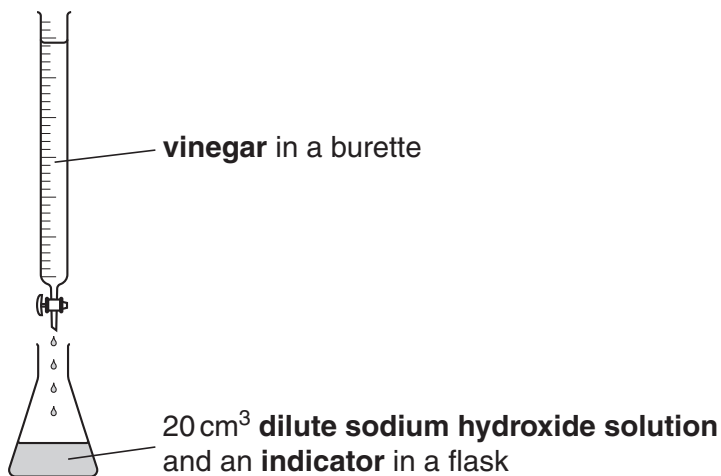
pH probes are always more accurate than other methods.

pH probes do not rely on colour to measure pH.

Food acids do not give results with other indicators.

[1]

(b) Joe sets up a titration experiment to find the concentration of acid in a colourless sample of vinegar.



Joe does the titration. He records the volume of vinegar needed to neutralise the dilute sodium hydroxide solution.

Explain what Joe should do to make sure that his titration result is as **accurate** as possible.

.....

.....

.....

.....

.....

[3]

- (c) Joe uses the same dilute sodium hydroxide solution and the same titration method to test four different vinegars.

The acid in vinegar is ethanoic acid, **CH₃COOH**.

Joe calculates the concentration of ethanoic acid in each vinegar.

The first step in Joe's calculation is to work out the relative formula masses of sodium hydroxide and ethanoic acid.

- (i) What is the relative formula mass of sodium hydroxide (NaOH)?

Use the Periodic Table to find the relative atomic masses you need to use in your calculation.

Put a **ring** around the correct answer.

3 23 31 39 40

[1]

- (ii) What is the relative formula mass of ethanoic acid, CH₃COOH?

Use the Periodic Table to find the relative atomic masses you need to use in your calculation.

answer = [1]

- (d) Joe writes down his titration results.

	chip shop vinegar	supermarket vinegar	cafe vinegar	canteen vinegar
volume of vinegar that reacts with 20 cm ³ dilute sodium hydroxide solution	15 cm ³	21 cm ³	19 cm ³	25 cm ³

What other information does Joe need to work out the concentration of the acid in the vinegar?

Put ticks (✓) in the boxes next to the **two** correct answers.

an equation for the reaction

the cost of each bottle of vinegar

the concentration of alkali used

the temperature of the room

the rate of the reaction

[1]

Turn over

(e) Joe calculates that exactly 1.0g of ethanoic acid reacts with 20 cm³ dilute sodium hydroxide.

He then calculates the concentration of ethanoic acid in each vinegar.

The table shows the results of the titration and some of Joe's calculations.

	chip shop vinegar	supermarket vinegar	cafe vinegar	canteen vinegar
volume of vinegar that reacts with 20 cm ³ dilute sodium hydroxide solution	15 cm ³	21 cm ³	19 cm ³	25 cm ³
concentration of ethanoic acid in vinegar sample	$\frac{1.0}{15} \times 1000$ = 67 g/dm ³	$\frac{1.0}{21} \times 1000$ = 48 g/dm ³	$\frac{1.0}{19} \times 1000$ = 35 g/dm ³	$\frac{1.0}{25} \times 1000$ = 40 g/dm ³

(i) Joe has made a mistake in one of his calculations.

For which vinegar is his calculation **incorrect**?

Put a **ring** around the answer.

**chip shop
vinegar**

**supermarket
vinegar**

**cafe
vinegar**

**canteen
vinegar**

[1]

(ii) Joe does another titration using vinegar from a jar of pickled onions.

His titration value for the pickled onions vinegar is 20 cm³.

What is the concentration of ethanoic acid in this vinegar?

Put a **ring** around the correct answer.

0.02 g/dm³

0.05 g/dm³

2 g/dm³

46 g/dm³

50 g/dm³

[1]

[Total: 9]

- 6 Old copper coins are often covered with a layer of corrosion.



The corrosion contains copper carbonate.

Sulfuric acid can be used to clean the coin.

- (a) Sulfuric acid reacts with copper carbonate to form a salt and two other products.

- (i) What is the **name** of the salt that is formed when sulfuric acid reacts with copper carbonate?

..... [1]

- (ii) What are the formulae of the two **other** products of the reaction?

Put a **ring** around each of the **two** correct answers.



[1]

- (b) Eve uses sulfuric acid to remove copper carbonate from old coins.

The rate of reaction increases when she increases the concentration of the acid.

Why does a more concentrated acid react faster?

Put a tick (✓) in the box next to the statement that correctly explains why.

The particles move faster in more concentrated acid.

Particles collide less often in more dilute solution.

The acid particles are closer together in more concentrated acid.

Particles need more space to carry out successful reactions.

[1]

[Total: 3]

END OF QUESTION PAPER

14
BLANK PAGE

PLEASE DO NOT WRITE ON THIS PAGE

PLEASE DO NOT WRITE ON THIS PAGE



Copyright Information

OCR is committed to seeking permission to reproduce all third-party content that it uses in its assessment materials. OCR has attempted to identify and contact all copyright holders whose work is used in this paper. To avoid the issue of disclosure of answer-related information to candidates, all copyright acknowledgements are reproduced in the OCR Copyright Acknowledgements Booklet. This is produced for each series of examinations and is freely available to download from our public website (www.ocr.org.uk) after the live examination series.

If OCR has unwittingly failed to correctly acknowledge or clear any third-party content in this assessment material, OCR will be happy to correct its mistake at the earliest possible opportunity.

For queries or further information please contact the Copyright Team, First Floor, 9 Hills Road, Cambridge CB2 1GE.

OCR is part of the Cambridge Assessment Group; Cambridge Assessment is the brand name of University of Cambridge Local Examinations Syndicate (UCLES), which is itself a department of the University of Cambridge.

