

Candidate forename						Candidate surname					
Centre number						Candidate number					

**OXFORD CAMBRIDGE AND RSA EXAMINATIONS**  
**GCSE**

**A321/02**

**TWENTY FIRST CENTURY SCIENCE**  
**CHEMISTRY A**

**Unit 1: Modules C1 C2 C3**  
**(Higher Tier)**

**FRIDAY 15 JUNE 2012: Afternoon**

**DURATION: 40 minutes**  
**plus your additional time allowance**

**MODIFIED ENLARGED**

**Candidates answer on the Question Paper.**  
**A calculator may be used for this paper.**

**OCR SUPPLIED MATERIALS:**

**None**

**OTHER MATERIALS REQUIRED:**

**Pencil**

**Ruler (cm/mm)**

**READ INSTRUCTIONS OVERLEAF**

## **INSTRUCTIONS TO CANDIDATES**

- **Write your name, centre number and candidate number in the boxes on the first page. Please write clearly and in capital letters.**
- **Use black ink. HB pencil may be used for graphs and diagrams only.**
- **Answer ALL the questions.**
- **Read each question carefully. Make sure you know what you have to do before starting your answer.**
- **Write your answer to each question in the space provided. Additional paper may be used if necessary but you must clearly show your candidate number, centre number and question number(s).**

## **INFORMATION FOR CANDIDATES**

- **The number of marks is given in brackets [ ] at the end of each question or part question.**
- **The total number of marks for this paper is 42.**

**BLANK PAGE**



**Answer ALL the questions.**

**1 This question is about gases in the air.**

**(a) The table opposite shows information about gases in the air.**

**Complete the table by filling in the empty boxes.**

**Use the key below the table to help you. [4]**

NAME	PERCENTAGE IN AIR	FORMULA	DIAGRAM
	1%		
carbon dioxide	very low		
	78%		
oxygen		O <sub>2</sub>	

Key



carbon



nitrogen



oxygen



argon

- (b) Carbon dioxide is released into the air when hydrocarbons burn. Water is also made.**

**Pentane is a hydrocarbon.**

**Complete the table opposite to balance the equation and show the atoms and molecules involved in the complete combustion of one molecule of pentane,  $C_5H_{12}$ .**

**[2]**

- (c) Burning fossil fuels adds other pollutant gases to the air, as well as carbon dioxide.**

**One of these pollutant gases is sulfur dioxide.**

**Name two other pollutant gases that are made when fossil fuels burn.**

**1** \_\_\_\_\_

**2** \_\_\_\_\_

**[2]**

**[Total: 8]**

	<b>C<sub>5</sub>H<sub>12</sub> PENTANE</b>	<b>+</b>	<b>_____O<sub>2</sub> OXYGEN</b>	<b>→</b>	<b>5CO<sub>2</sub> CARBON DIOXIDE</b>	<b>+</b>	<b>_____H<sub>2</sub>O WATER</b>
<b>NUMBER OF MOLECULES</b>	<b>1</b>		<b>8</b>		<b>5</b>		<b>_____</b>
<b>NUMBER OF CARBON ATOMS</b>	<b>5</b>		<b>_____</b>		<b>5</b>		<b>_____</b>
<b>NUMBER OF HYDROGEN ATOMS</b>	<b>12</b>		<b>_____</b>		<b>0</b>		<b>_____</b>
<b>NUMBER OF OXYGEN ATOMS</b>	<b>0</b>		<b>_____</b>		<b>10</b>		<b>_____</b>

- 2 Scientists want to know if there is a link between the concentration of sulfur dioxide in the air and the pH of rain water.**

**They measure the sulfur dioxide concentration in the air several times just before it rains on a number of days. On the same days they also collect some rain water and measure its pH.**

**They use these measurements to work out the mean values for sulfur dioxide concentration in the air and the pH of rain water.**

**They plot their results on a scatter graph (opposite).**

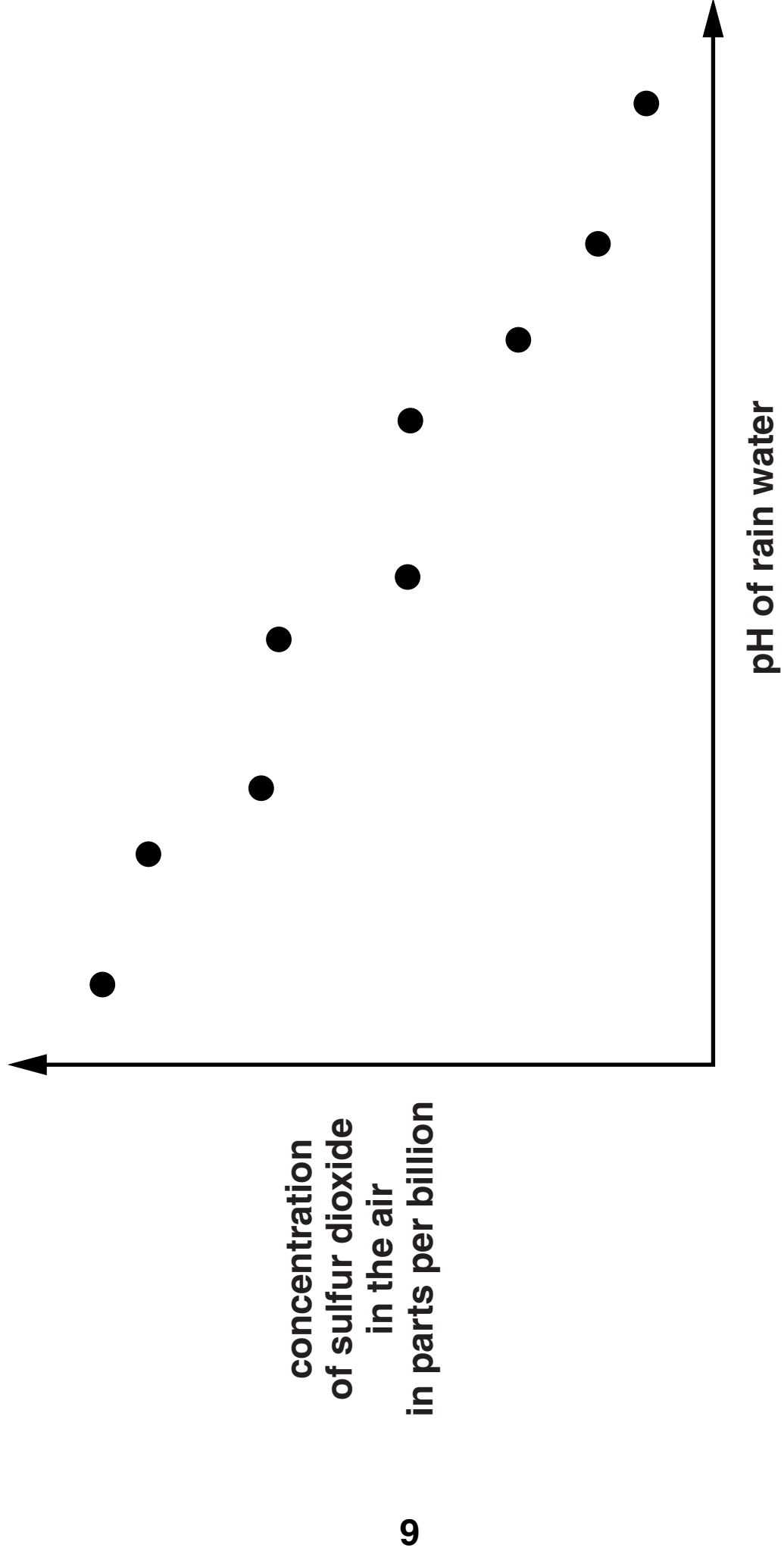
**(a) Describe the relationship shown by the data.**

---

---

[1]





- (b) On each day the scientists take several measurements of sulfur dioxide concentration and pH.**

**The measurements taken on one day are shown in the table (opposite).**

**They were all taken in the same place at the same time.**

- (i) Work out a best estimate for the pH.**

**best estimate for the pH = \_\_\_\_\_ [3]**

- (ii) Measurements taken at the same place but one hour later were different.**

**Suggest reasons why.**

---

---

---

---

**[2]**

**[Total: 6]**

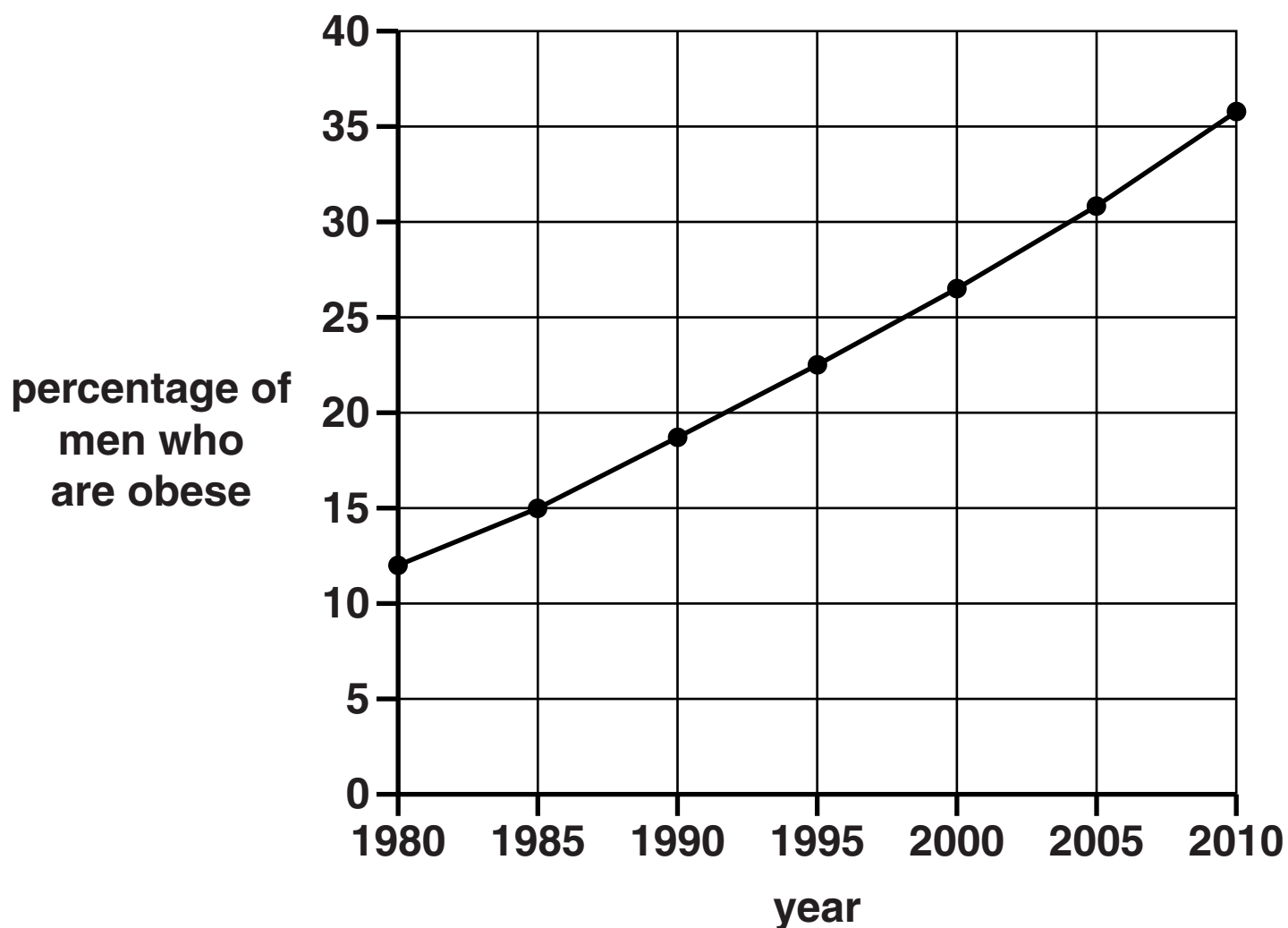
	SAMPLE 1	SAMPLE 2	SAMPLE 3	SAMPLE 4	SAMPLE 5	SAMPLE 6	BEST ESTIMATE
CONCENTRATION OF SULFUR DIOXIDE IN PARTS PER BILLION	35	32	31	33	33	34	33
pH	5.3	5.4	5.0	5.1	3.4	5.2	

### **3 There are two types of diabetes, called type 1 and type 2.**

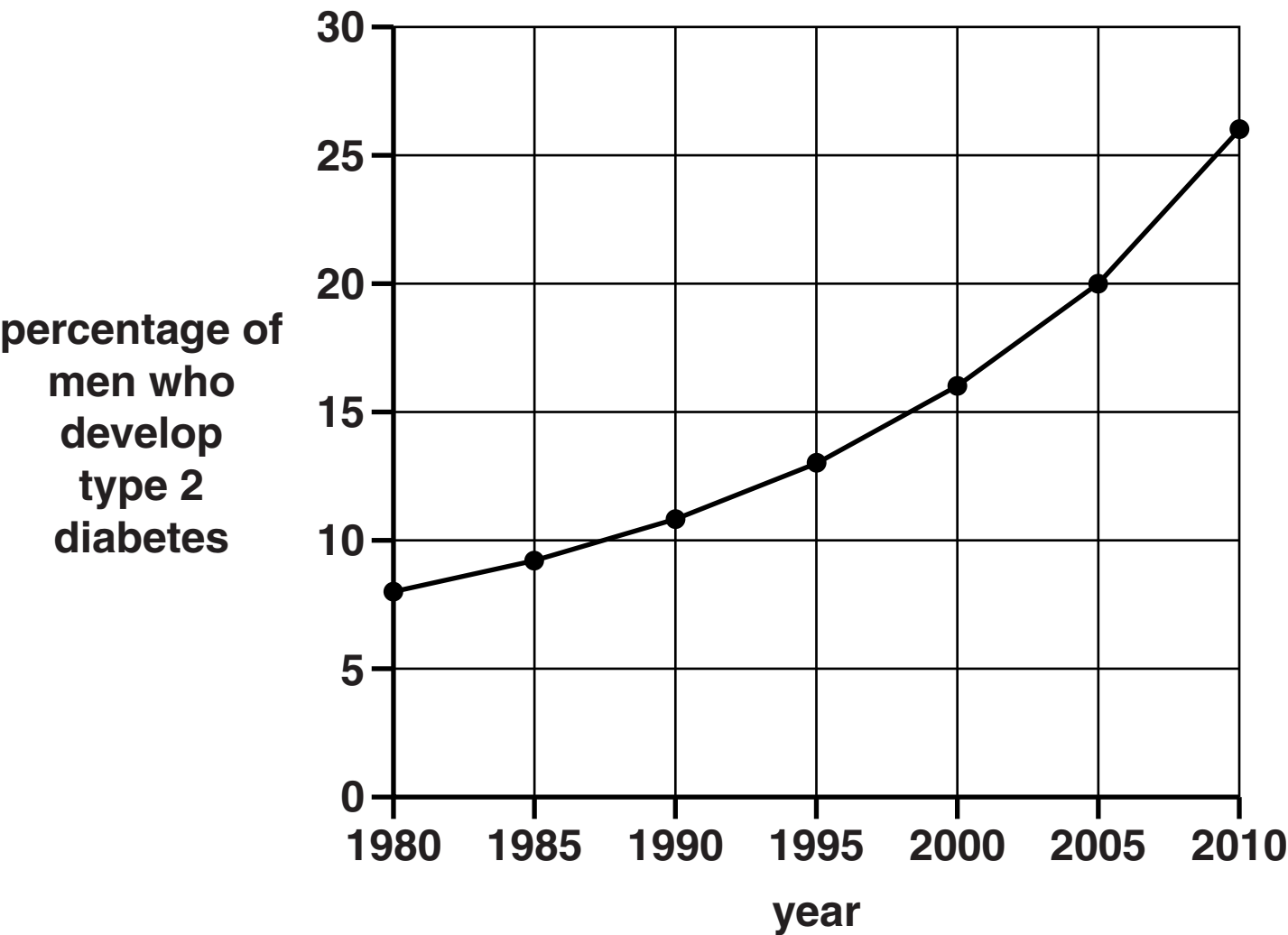
**Scientists investigate obesity and type 2 diabetes.**

**They look at data from a city for the period 1980 to 2010.**

**They look at the percentage of men who are obese.**



**They also look at the percentage of men who develop type 2 diabetes.**



**(a) What can the scientists conclude from these data?**

**Put ticks (✓) in the boxes next to the TWO correct statements.**

**Type 2 diabetes is caused by obesity.**

☐

**There is a correlation between the percentage of men who are obese and the percentage of men who develop type 2 diabetes.**

☐

**There is no connection between obesity and type 2 diabetes.**

☐

**As the percentage of men who are obese increases the percentage of men with type 2 diabetes increases.**

☐

**[1]**

**(b) A newspaper has this headline.**

**Obesity is a risk factor for type 2 diabetes**

**What does this statement mean?**

---

---

---

**[2]**

- (c) Obesity commonly results from poor diet and lack of exercise.**

**People can choose whether or not to follow the sort of lifestyle that may lead to obesity.**

**When making this choice a person may take into account information about type 2 diabetes.**

**What sort of information ABOUT TYPE 2 DIABETES should be considered when making this choice?**

**Put ticks (✓) in the boxes next to the TWO best statements.**

**The foods that are most likely to lead to obesity.**

☐

**The chance of an obese person developing type 2 diabetes.**

☐

**The other factors that may lead to the development of type 2 diabetes.**

☐

**The likely effects of type 2 diabetes on a person's health and lifespan.**

☐

**Other health issues that may arise from a person being obese.**

☐

**How the percentage of people with type 2 diabetes compares with those with type 1 diabetes.**

☐

**[2]**

- (d) Despite knowing that obesity is a risk factor in the development of type 2 diabetes, many people become obese.**

**Which of these statements give an explanation for this?**

**Put ticks (✓) in the boxes next to the TWO best explanations.**

**Some people may not be able to afford a healthy diet.** ☐

**The fact that obesity is a risk factor for diabetes has not been publicised enough.** ☐

**Type 2 diabetes is not a serious illness.** ☐

**Some people know the risk but choose to ignore it.** ☐

**The connection between lifestyle and obesity is not certain.** ☐

**[2]**

**[Total: 7]**



- 4 Both polythene and glass are materials which can be used for making bottles to contain milk.

Scientists carry out Life Cycle Assessments to decide which type of material is better.

Table 1 shows part of the Life Cycle Assessment for the bottles.

It gives the mass of pollutant gases released into the air as each bottle is made.

**TABLE 1**

<b>POLLUTANT GAS</b>		<b>MASS OF POLLUTANT PRODUCED AS BOTTLES ARE MADE IN g</b>	
		<b>POLYTHENE</b>	<b>GLASS</b>
<b>carbon dioxide</b>	<b>CO<sub>2</sub></b>	<b>1792</b>	<b>490</b>
<b>nitrogen oxides</b>	<b>NO<sub>x</sub></b>	<b>1.091</b>	<b>1.586</b>
<b>sulfur dioxide</b>	<b>SO<sub>2</sub></b>	<b>0.987</b>	<b>2.652</b>
<b>carbon monoxide</b>	<b>CO</b>	<b>0.670</b>	<b>0.057</b>

- (a) Use this data to compare the environmental impact of manufacturing bottles from these two materials.

---

---

---

---

[2]

- (b) Glass bottles are collected, washed and refilled.

Polythene bottles are used only once.

Table 2 shows the energy used in making, filling and delivering bottles.

**TABLE 2**

	<b>POLYTHENE</b>	<b>GLASS</b>
<b>Energy used to make a one litre bottle in MJ</b>	<b>4.7</b>	<b>7.2</b>
<b>Energy used to fill and deliver a one litre bottle in MJ</b>	<b>2.2</b>	<b>2.5</b>

- (i) The dairy delivers one bottle of milk every day for five days.

By reusing a glass bottle they can save about 15 MJ compared to using polythene bottles.

Show, with a calculation, that this is correct.

[3]

- (ii) What do your calculations suggest about the sustainability of using these two types of bottle?

---

---

---

---

[2]

**(iii) Which parts of a Life Cycle Assessment can be looked at using the data in Table 2?**

**Put ticks (✓) in the boxes next to the TWO correct statements.**

**The environmental impact of making the material.** ☐

**The energy input for making the material.** ☐

**The cost of disposal of the product.** ☐

**The energy input for making the product.** ☐

**The environmental impact of using the product.** ☐

**The energy input for using the product.** ☐

**[2]**

**[Total: 9]**

- 5 A company wants to replace the old plastic they use for making chairs with a new plastic.**

**Scientists test both the old plastic and the new plastic to see how well they can withstand the compression force put on a chair leg.**

**They place samples of plastic in a machine that pushes down with increasing force. Each sample measures 30 cm × 4 cm × 4 cm.**

- (a) The scientists used the same length and thickness of plastic for each sample.**

**Which statements explain why they did this?**

**Put ticks (✓) in the boxes next to the TWO best reasons.**

**All chair legs are made with this length and thickness.**

☐

**To see if the factor being investigated has an effect on the outcome, all other factors must be kept constant.**

☐

**They wanted to vary each factor in turn to see which has the most effect on the outcome.**

☐

**The machine could only accept plastic samples of this size.**

☐

**If another factor is varied this could change the results so that the effect of two types of plastic cannot be compared.**

☐

**Using samples of another size would have changed all of the results.**

☐

**[2]**

(b) The table shows the force needed to make each sample bend.

	FORCE NEEDED TO MAKE SAMPLE BEND IN kN						
	SAMPLE 1	SAMPLE 2	SAMPLE 3	SAMPLE 4	SAMPLE 5	SAMPLE 6	BEST ESTIMATE
old plastic	543	526	533	521	552	541	536
new plastic	565	572	584	590	582	575	578

The scientists decide that there is a **REAL DIFFERENCE** between the strength of the old plastic and new plastic.

Which statements support this conclusion?

Put ticks (✓) in the boxes next to the **THREE** correct statements.

The range of the results for the old plastic does not overlap with the range for the new plastic.

☐

The ranges of the results for the old plastic and new plastic are similar.

☐

The best estimate for the new plastic is 42 kN higher than that for the old plastic.

☐

The range of the results for the old plastic does not include the value 578.

☐

The best estimate for the old plastic is not within the range of the new plastic.

☐

Neither set of results contains an outlier.

☐

[3]

[Total: 5]

- 6 The chemical metaldehyde kills slugs and helps to protect crops from damage.**

**In the United Kingdom farmers spread about 250 tonnes of metaldehyde pellets on their land every year.**

**Water companies measure the metaldehyde concentration in drinking water.**

**The European limit for metaldehyde is 0.1 micrograms/litre.**

**Levels found are sometimes close to the European limit and, on a few occasions, are slightly above the European limit.**

- (a) Which of these statements suggest that there is very little risk to health from metaldehyde in drinking water?**

**Put ticks (✓) in the boxes next to the TWO correct statements.**

**Metaldehyde helps to protect crops.**

☐

**The European limit is set well below the level that could cause harm to people.**

☐

**It is not possible for anything to be completely safe.**

☐

**People do not drink very much water.**

☐

**Water samples are rarely above the limit.**

☐

**[2]**



**(b) Use ideas of risk and benefit to suggest why metaldehyde is used by farmers.**

---

---

---

---

---

---

---

**[3]**

**(c) A pressure group wants the UK Government to ban the use of metaldehyde on farms.**

**They think that the Government should apply the PRECAUTIONARY PRINCIPLE.**

**DORA**

**It is best to make the amount of metaldehyde we take in as low as possible.**

**ALBERT**

**It is not possible for anything to be completely safe.**

**BARBARA**

**The European permitted level of metaldehyde in drinking water is too low to cause any harm.**

**EDWARD**

**A concentration of 0.1 g/L will cause harm if the water is drunk regularly.**

**COLIN**

**We cannot be certain whether the European permitted level of metaldehyde in drinking water will do us harm.**

**FAISAL**

**Since the risk cannot be known for certain it would be better to avoid having any metaldehyde in drinking water.**

**Whose two opinions, when put together, describe how the precautionary principle could be applied to the use of metaldehyde on farms?**

\_\_\_\_\_ and \_\_\_\_\_ [2]

**[Total: 7]**

**END OF QUESTION PAPER**

## **Copyright Information**

**OCR is committed to seeking permission to reproduce all third-party content that it uses in its assessment materials. OCR has attempted to identify and contact all copyright holders whose work is used in this paper. To avoid the issue of disclosure of answer-related information to candidates, all copyright acknowledgements are reproduced in the OCR Copyright Acknowledgements Booklet. This is produced for each series of examinations and is freely available to download from our public website ([www.ocr.org.uk](http://www.ocr.org.uk)) after the live examination series.**

**If OCR has unwittingly failed to correctly acknowledge or clear any third-party content in this assessment material, OCR will be happy to correct its mistake at the earliest possible opportunity.**

**For queries or further information please contact the Copyright Team, First Floor, 9 Hills Road, Cambridge CB2 1GE.**

**OCR is part of the Cambridge Assessment Group; Cambridge Assessment is the brand name of University of Cambridge Local Examinations Syndicate (UCLES), which is itself a department of the University of Cambridge.**