

Candidate Forename		Candidate Surname	
---------------------------	--	--------------------------	--

Centre Number						Candidate Number				
----------------------	--	--	--	--	--	-------------------------	--	--	--	--

**OXFORD CAMBRIDGE AND RSA EXAMINATIONS
GENERAL CERTIFICATE OF SECONDARY EDUCATION**

A321/01

**TWENTY FIRST CENTURY SCIENCE
CHEMISTRY A**

Unit 1: Modules C1 C2 C3 (Foundation Tier)

MONDAY 18 JANUARY 2010: Morning

DURATION: 40 minutes

SUITABLE FOR VISUALLY IMPAIRED CANDIDATES

Candidates answer on the Question Paper

A calculator may be used for this paper

OCR SUPPLIED MATERIALS:

None

OTHER MATERIALS REQUIRED:

Pencil

Ruler (cm/mm)

READ INSTRUCTIONS OVERLEAF

INSTRUCTIONS TO CANDIDATES

- **Write your name clearly in capital letters, your Centre Number and Candidate Number in the boxes on the first page.**
- **Use black ink. Pencil may be used for graphs and diagrams only.**
- **Read each question carefully and make sure that you know what you have to do before starting your answer.**
- **Answer ALL the questions.**
- **Write your answer to each question in the space provided, however additional paper may be used if necessary.**

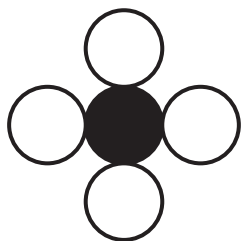
INFORMATION FOR CANDIDATES

- **The number of marks is given in brackets [] at the end of each question or part question.**
- **The total number of marks for this paper is 42.**
- **The Periodic Table is printed on the back page.**

BLANK PAGE

Answer ALL the questions.

- 1 (a) These diagrams show the atoms in six different molecules.



A



B



C



D




E



F

key



Which of the diagrams, A, B, C, D, E or F, shows a molecule of

- (i) carbon monoxide _____ [1]
(ii) nitrogen dioxide _____ [1]
(iii) a hydrocarbon _____ [1]
(iv) an element _____ [1]

(b) Nitrogen dioxide is a pollutant gas.

(i) Which of these statements describe how nitrogen oxides most commonly enter the atmosphere?

Put ticks (✓) in the boxes next to the TWO best answers.

from air breathed out by animals

from the exhaust of car engines

from oil-burning power stations

from the eruption of volcanoes

[2]

(ii) Nitrogen dioxide does not stay in the atmosphere.

Explain how nitrogen dioxide is removed from the air and why the result may be harmful.

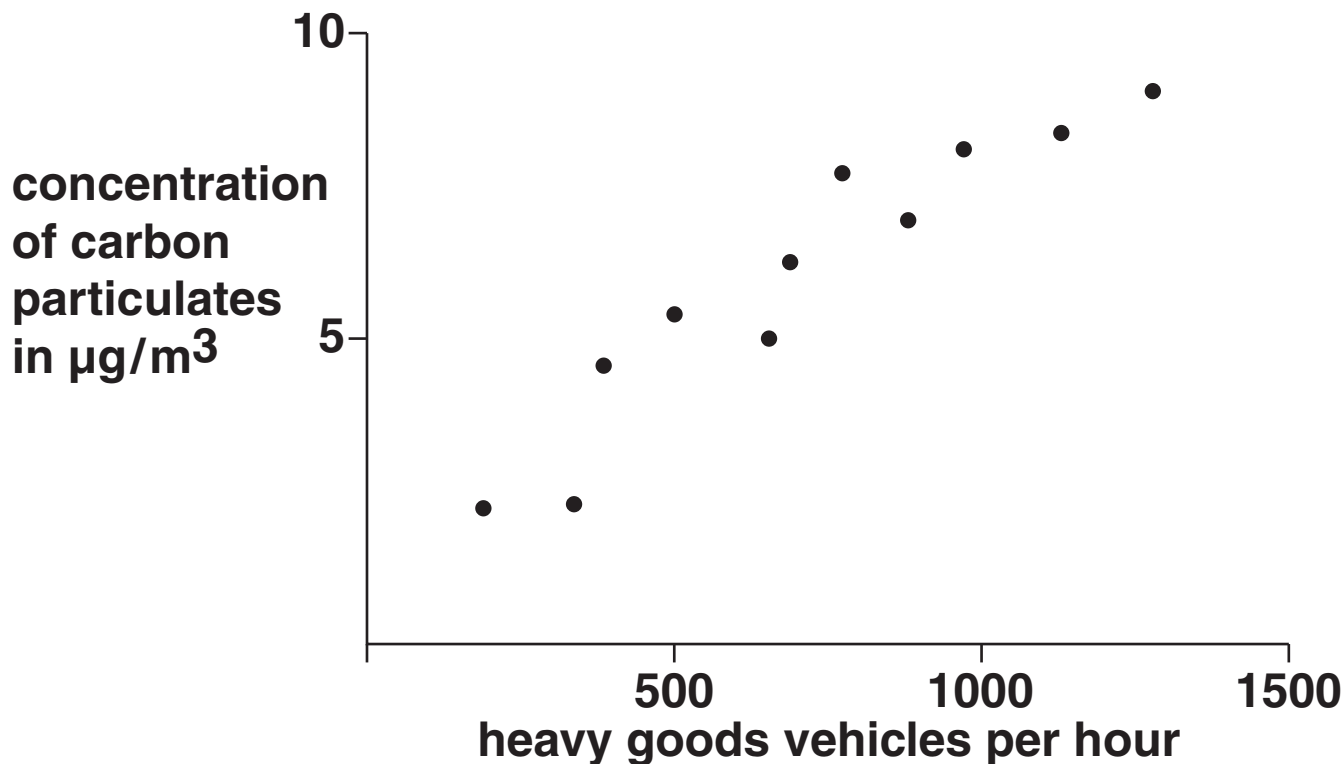
[3]

[Total: 9]

2 Black carbon pollution is caused by very small carbon particulates in the air.

Some scientists measure the concentration of carbon particulates in the air beside a motorway. They also count the number of heavy goods vehicles passing along the motorway.

Their results are shown on this scatter graph.



(a) What trend is shown by the scatter graph?

[1]

(b) (i) Why is it NOT possible to use these results to prove that the carbon particulates came from the heavy goods vehicles?

Put ticks (✓) in the boxes next to the TWO best answers.

A pattern in the results does not prove a cause.

The equipment used by the scientists may be faulty.

The scientists may have miscounted the heavy goods vehicles.

The scientists only measured particulates made of carbon.

There may be other explanations for the observed results.

[2]

- (ii) The concentration of carbon particulates in the air measured in this investigation may be affected by other factors.

Put ticks (✓) in the correct boxes to show whether each factor is LIKELY TO or is NOT LIKELY TO affect this outcome.

	LIKELY TO AFFECT CONCENTRATION OF CARBON PARTICULATES MEASURED	NOT LIKELY TO AFFECT CONCENTRATION OF CARBON PARTICULATES MEASURED
The direction of the wind.		
How close to the motorway the measurements are made.		
Whether the sun is shining.		
The number of cars passing by.		

[2]

[Total: 5]

BLANK PAGE

3 Vulcanisation is a process that has been used for many years to make natural rubber harder.

Scientists develop a new process for hardening rubber.

They test the hardness of this rubber by measuring the force needed to push a metal pin through several samples.

They use the same test on samples of natural rubber, vulcanised rubber and new process rubber.

All of the rubber samples are the same shape and size.

Their results are shown in the table opposite.

TYPE OF RUBBER	FORCE NEEDED TO PUSH PIN THROUGH SAMPLE IN kN					
	SAMPLE 1	SAMPLE 2	SAMPLE 3	SAMPLE 4	SAMPLE 5	SAMPLE 6
natural rubber	4	6	8	7	2	9
vulcanised rubber	24	21	24	23	22	24
new process rubber	28	11	24	27	26	25

- (a) The scientists decide to repeat their tests on NATURAL RUBBER.

Which statement gives the BEST reason for this?

Put a tick (✓) in the box next to the correct answer.

The results are not high enough.

The range of the results is too large.

The results contain an outlier.

The mean for the results is too low.

[1]

- (b) (i) The scientists work out the mean for NEW PROCESS RUBBER to be 26.

They use this as their best estimate for the hardness of this rubber.

They use only five of the six results to work out the mean.

Suggest which result they do NOT use.

the result for sample _____ [1]

(ii) Why do they not use this result?

Put a tick (✓) in the box next to the **BEST** answer.

They only need five results to calculate the mean.

It is easier to divide by five than by six.

This result is very different from the other results.

This result falls within the range for natural rubber.

[1]

(c) Give a best estimate for the hardness of **VULCANISED RUBBER** by working out the mean for this set of results.

mean = _____ kN [1]

(d) (i) Natural rubber is a polymer.

During vulcanisation, sulfur reacts with the polymer chains in the rubber.

Suggest how this reaction with sulfur increases the hardness of rubber.

Put a tick (✓) in the box next to the correct answer.

It makes the polymer chains shorter.

It lowers the melting point.

It pushes the polymer chains further apart.

It forms strong bonds between the polymer chains.

[1]

- (ii) The new process for making natural rubber harder works in a different way to vulcanisation.

Which of these statements could explain how the new process makes natural rubber harder?

Put a tick (✓) in the box next to the BEST answer.

It decreases the cross-linking between polymer chains.

It adds plasticizer to the polymer chains.

It increases the length of the polymer chains.

It changes the small molecules used to make the polymer chains.

[1]

[Total: 6]

4 Different materials are used to make bags to carry food.

(a) (i) What features of the Life Cycle Assessment for a paper bag are different from those for a plastic bag?

Put ticks (✓) in the boxes next to the THREE best answers.

The energy used to make the material.

The energy used to make bags from the material.

The energy used to transport the same mass of bags.

The environmental impact of using the bags.

The environmental impact of disposing of the bags.

[2]

- (ii) Plastic bags cause more harm to the environment than paper bags.

Which TWO statements explain why?

Put ticks (✓) in the boxes next to the BEST answers.

Plastic decomposes very slowly.

Plastic bags cause more harm to the environment than paper bags.

Plastic bags stretch, so they cannot be used to carry heavy objects.

Paper is attacked by bacteria and rots away.

Paper bags are large, and so hold a lot of groceries.

[2]

- (iii) In the UK, most supermarkets use plastic bags instead of paper bags.

Suggest why.

[1]

(b) A supermarket chain recently announced that it will no longer be giving its customers plastic bags.

Suggest three benefits of a ban on the use of plastic bags.

[3]

[Total: 8]

BLANK PAGE

5 Organic farming uses different methods to those used in intensive farming.

(a) Draw a line from each FARMING METHOD to the correct TYPE OF FARMING.

FARMING METHOD

TYPE OF FARMING

pull out weeds by hand

use pesticides to kill pests

use predators to kill pests

use herbicides to kill weeds

organic farming

intensive farming

[3]

(b) Organic farming methods use manure from animals as a fertiliser.

Intensive farming methods use synthetic fertiliser made using energy from fossil fuels.

Some farmers have changed from intensive farming to organic farming. These farmers think that the change is a SUSTAINABLE DEVELOPMENT.

(i) What is meant by the term sustainable development?

[2]

(ii) Suggest TWO reasons why organic farming may be more sustainable than intensive farming.

[2]

[Total: 7]

6 Sodium benzoate is added to many soft drinks, such as cola, as a preservative.

(a) Why is sodium benzoate added to soft drinks?

Put a tick (✓) in the box next to the BEST answer.

It makes the drink look more attractive.

It gives the drink a longer shelf life.

It makes the drink taste better.

[1]

(b) The Food Standards Agency (FSA) approves the use of sodium benzoate, E211, in the UK.

(i) The following statements are about the Food Standards Agency.

Put ticks (✓) in the correct boxes to show which statements are TRUE and which are FALSE.

	<u>TRUE</u>	<u>FALSE</u>
The FSA is an independent food safety watchdog.	<input type="checkbox"/>	<input type="checkbox"/>
The FSA is funded by major food manufacturers.	<input type="checkbox"/>	<input type="checkbox"/>
The FSA protects the public's health in relation to food.	<input type="checkbox"/>	<input type="checkbox"/>
The FSA was set up by an Act of Parliament.	<input type="checkbox"/>	<input type="checkbox"/>

[2]

(ii) Sodium benzoate has the number E211. What does this mean?

Put ticks (✓) in the boxes next to the TWO correct answers.

Sodium benzoate should not be used in food products.

Sodium benzoate has passed a safety test.

Sodium benzoate has been approved for use in the EU.

Sodium benzoate is safe to use at any concentration.

Sodium benzoate can only be used in drinks.

[2]

- (c) Some people are worried about soft drinks that contain sodium benzoate.

Which TWO of these statements suggest that sodium benzoate in soft drinks does not pose a significant health risk?

Put ticks (✓) in the boxes next to the TWO BEST statements.

Little research has been carried out on the effects of sodium benzoate on health.

Sodium benzoate is found naturally in some fruits.

Soft drinks contain much lower concentrations of sodium benzoate than some food.

Sodium benzoate has been added to soft drinks for many years.

You would have to drink about ten litres of soft drinks to exceed the maximum recommended dose of sodium benzoate in one litre of drinking water.

[2]

[Total: 7]

END OF QUESTION PAPER

BLANK PAGE



Copyright Information

OCR is committed to seeking permission to reproduce all third-party content that it uses in its assessment materials. OCR has attempted to identify and contact all copyright holders whose work is used in this paper. To avoid the issue of disclosure of answer-related information to candidates, all copyright acknowledgements are reproduced in the OCR Copyright Acknowledgements Booklet. This is produced for each series of examinations, is given to all schools that receive assessment material and is freely available to download from our public website (www.ocr.org.uk) after the live examination series.

If OCR has unwittingly failed to correctly acknowledge or clear any third-party content in this assessment material, OCR will be happy to correct its mistake at the earliest possible opportunity.

For queries or further information please contact the Copyright Team, First Floor, 9 Hills Road, Cambridge CB2 1GE.

OCR is part of the Cambridge Assessment Group; Cambridge Assessment is the brand name of University of Cambridge Local Examinations Syndicate (UCLES), which is itself a department of the University of Cambridge.

