

Centre Number						Candidate Number				
Surname										
Other Names										
Candidate Signature										

For Examiner's Use	
Examiner's Initials	
Question	Mark
1	
2	
3	
4	
5	
6	
TOTAL	



General Certificate of Secondary Education  
Higher Tier  
January 2011

## Additional Science

Unit Chemistry C2

CHY2H

H

## Chemistry

Unit Chemistry C2

### Written Paper

Monday 17 January 2011 9.00 am to 9.45 am

**For this paper you must have:**

- a ruler
  - the Data Sheet (enclosed).
- You may use a calculator.

**Time allowed**

- 45 minutes

**Instructions**

- Use black ink or black ball-point pen.
- Fill in the boxes at the top of this page.
- Answer **all** questions.
- You must answer the questions in the spaces provided. Do not write outside the box around each page or on blank pages.
- Do all rough work in this book. Cross through any work you do not want to be marked.

**Information**

- The marks for questions are shown in brackets.
- The maximum mark for this paper is 45.
- You are expected to use a calculator where appropriate.
- You are reminded of the need for good English and clear presentation in your answers.

**Advice**

- In all calculations, show clearly how you work out your answer.



J A N 1 1 C H Y 2 H 0 1

GK63127 6/6/6/6

CHY2H

**There are no questions printed on this page**

**DO NOT WRITE ON THIS PAGE  
ANSWER IN THE SPACES PROVIDED**



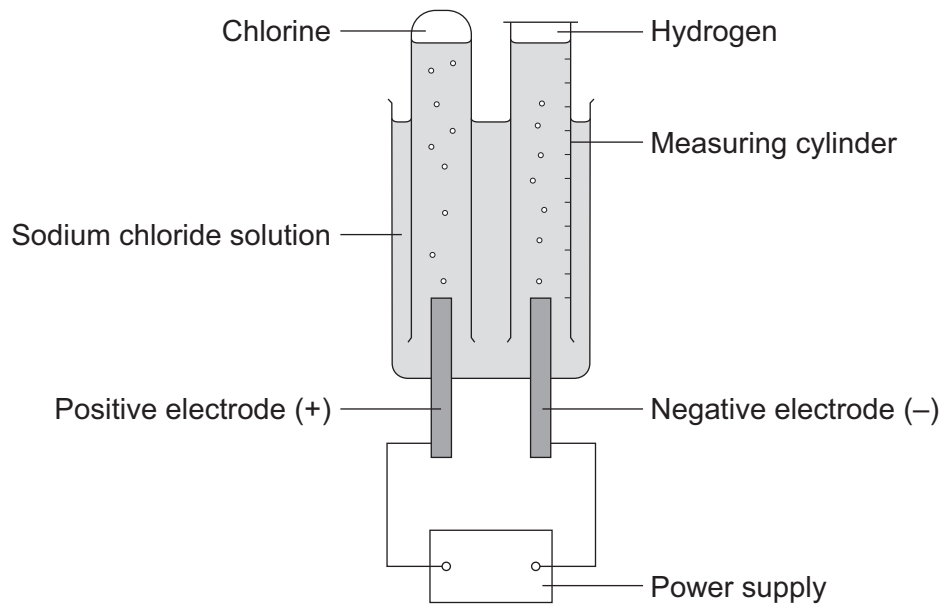
1 A student investigated the electrolysis of sodium chloride solution.

Five sodium chloride solutions were made. Each solution had a different concentration.

To make each solution the student:

- weighed the amount of sodium chloride needed
- dissolved it in water
- added more water until the total volume was one cubic decimetre ( $1 \text{ dm}^3$ ).

The solutions were placed one at a time in the apparatus shown below.



The student measured the volume of hydrogen gas produced in ten minutes.

The results are shown on the graph on the next page.

1 (a) Sodium chloride does not conduct electricity when it is solid.

Explain, in terms of ions, why sodium chloride solution conducts electricity.

.....  
 .....  
 (1 mark)

1 (b) Chlorine is produced at the positive electrode.

Why are chloride ions attracted to the positive electrode?

.....  
 (1 mark)

Question 1 continues on the next page

Turn over ►



1 (c) The solution left at the end of each experiment contains sodium hydroxide.

Draw a ring around **one** number which could be the pH of this solution.

2

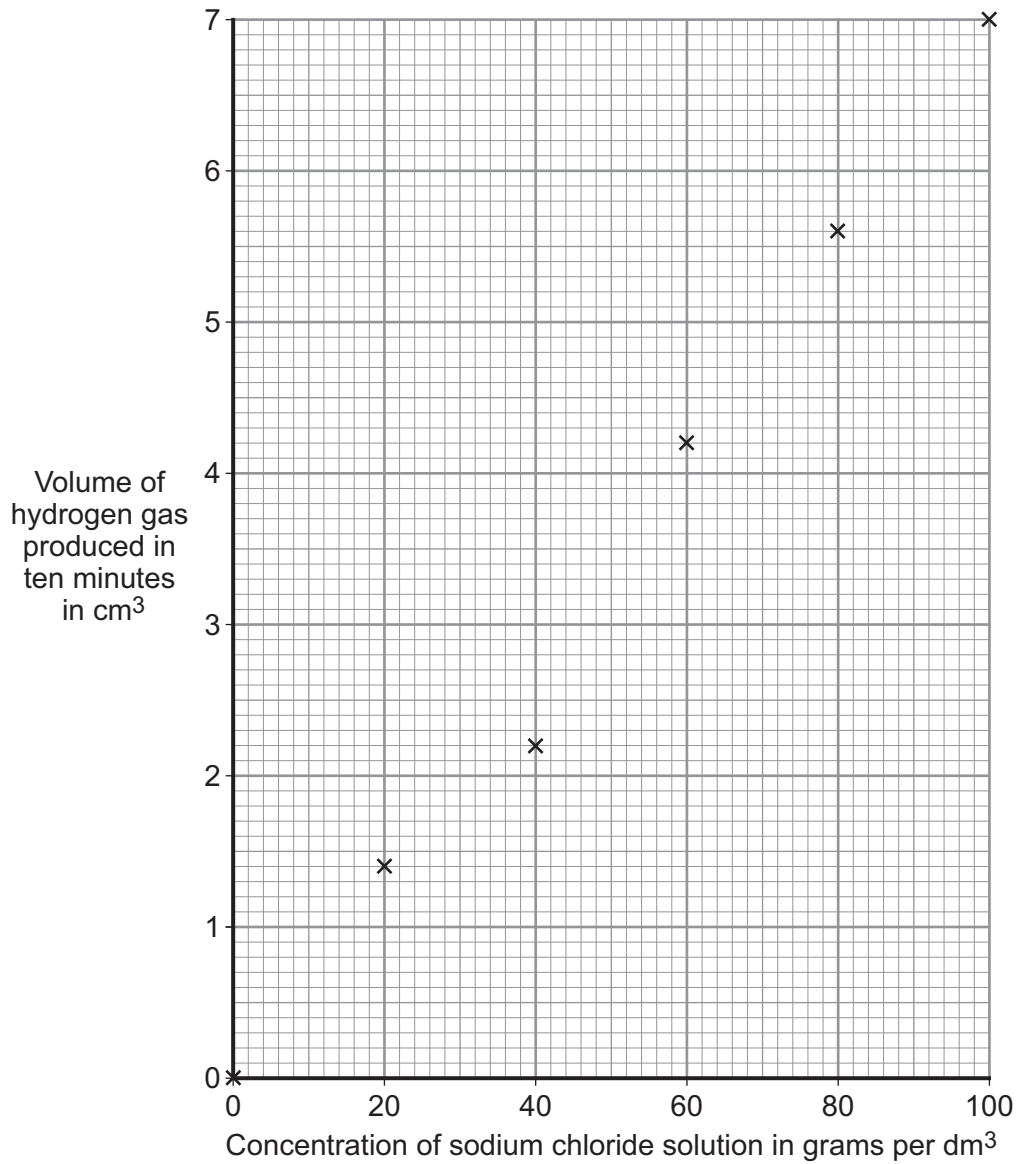
5

7

13

(1 mark)

1 (d) The results for the experiment on the previous page are shown on the graph.



1 (d) (i) Draw a line of best fit on the graph.

(1 mark)

1 (d) (ii) The result for one concentration is anomalous.  
Which result is anomalous?

The result at concentration ..... grams per dm<sup>3</sup>  
(1 mark)

1 (d) (iii) Suggest **two** possible causes of this anomalous result.

1 .....  
.....  
2 .....  
.....  
(2 marks)

1 (d) (iv) Suggest how the student could check the reliability of the results.

.....  
.....  
(1 mark)

1 (d) (v) How did an increase in the concentration of the sodium chloride solution affect the volume of hydrogen gas produced in ten minutes?

.....  
.....  
(1 mark)

9

Turn over for the next question

Turn over ►



- 2 Calamine lotion is used to treat itching. The main ingredients are two metal oxides.



- 2 (a) One of the metal oxides has a relative formula mass ( $M_r$ ) of 81.

The formula of this metal oxide is MO.  
(M is **not** the correct symbol for the metal.)

The relative atomic mass ( $A_r$ ) of oxygen is 16.

- 2 (a) (i) Calculate the relative atomic mass ( $A_r$ ) of metal M.

.....  
.....  
.....

Relative atomic mass ( $A_r$ ) = .....  
(2 marks)

- 2 (a) (ii) Use your answer to part (a)(i) and the periodic table on the Data Sheet to name metal M.

The name of metal M is .....  
(1 mark)



**2 (b)** The other metal oxide is iron(III) oxide.

This contains iron(III) ions ( $\text{Fe}^{3+}$ ) and oxide ions ( $\text{O}^{2-}$ ).

**2 (b) (i)** Explain in terms of electrons how an iron atom (Fe) can change into an iron(III) ion ( $\text{Fe}^{3+}$ ).

.....

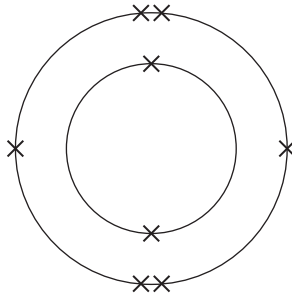
.....

.....

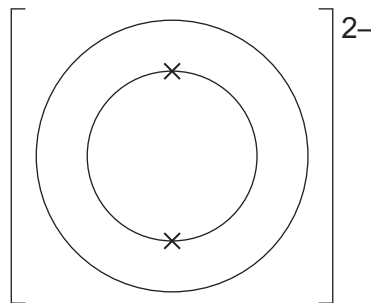
.....

(2 marks)

**2 (b) (ii)** The diagram below represents the electronic structure of an oxygen atom (O).



Complete the diagram below to show the electronic structure of an oxide ion ( $\text{O}^{2-}$ ).



(1 mark)


6
---

**Turn over for the next question**

**Turn over ►**



**3 (a)** Magnesium metal is shaped to make magnesium ribbon.



Explain why metals can be shaped.

.....

.....

.....


.....

.....

(2 marks)

**3 (b)** Magnesium sulfate is a salt of magnesium.

It can be prepared by the reaction of magnesium metal with an acid. The equation for the reaction of magnesium with this acid is:



**3 (b) (i)** Name the acid used to make magnesium sulfate.

..... acid  
(1 mark)





**3 (b) (ii)** Use the equation to help you to describe what you would **observe** when magnesium reacts with the acid.

.....

.....

.....

.....

.....

(2 marks)

**3 (b) (iii)** The magnesium sulfate is in solution.

How could you obtain solid magnesium sulfate from this solution?

.....

.....

(1 mark)

6

**Turn over for the next question**

**Turn over ►**

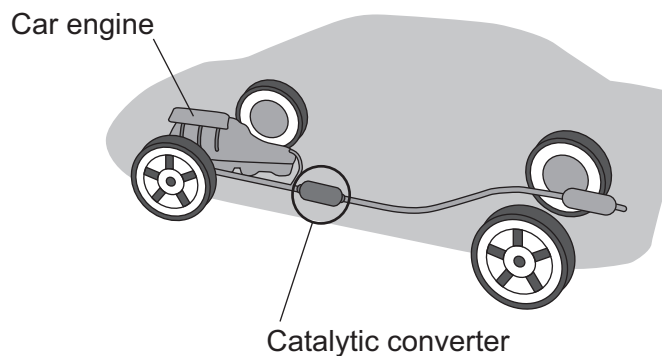


## 4 Read the information about car engines.

Burning petrol in air is an *exothermic* reaction. This reaction is used in car engines.

When petrol burns it produces harmful substances such as nitrogen oxides and carbon monoxide.

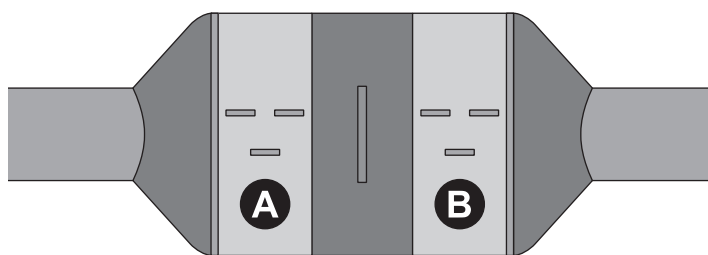
A catalytic converter stops these harmful substances being released into the air.

4 (a) The reaction is *exothermic*. What is the meaning of *exothermic*?

.....

.....

(1 mark)

4 (b) The catalytic converter has two parts shown as **A** and **B** in the diagram.

Part **A** contains a catalyst made from platinum and rhodium.

Part **B** contains a catalyst made from platinum and palladium.



4 (b) (i) Why are catalysts used in chemical reactions?

.....  
.....

(1 mark)

4 (b) (ii) One reaction in part **A** is shown by this equation.



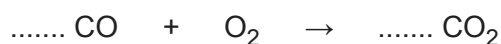
Suggest why this reaction helps the environment.

.....  
.....

(1 mark)

4 (b) (iii) The equation for one of the reactions in part **B** is shown below.

Balance this equation.



(1 mark)

4 (b) (iv) The catalytic converter works for many years without replacing the catalyst.

Explain why the catalyst does not need to be replaced.

.....  
.....

(1 mark)

4 (b) (v) Suggest why different catalysts are used in parts **A** and **B**.

.....  
.....

(1 mark)

**Question 4 continues on the next page**

**Turn over ►**



**4 (c)** Modern catalytic converters contain nanosized particles of catalyst. Using nanosized particles reduces the cost of the catalytic converter.

Suggest and explain why the use of nanosized catalyst particles reduces the cost of the catalytic converter.

Your answer should include information about the size and surface area of the particles.

.....

.....

.....

.....

.....

.....

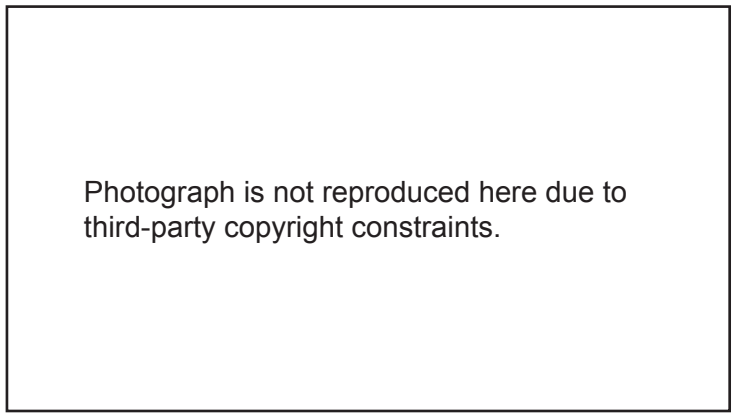
.....

(3 marks)

<b>9</b>

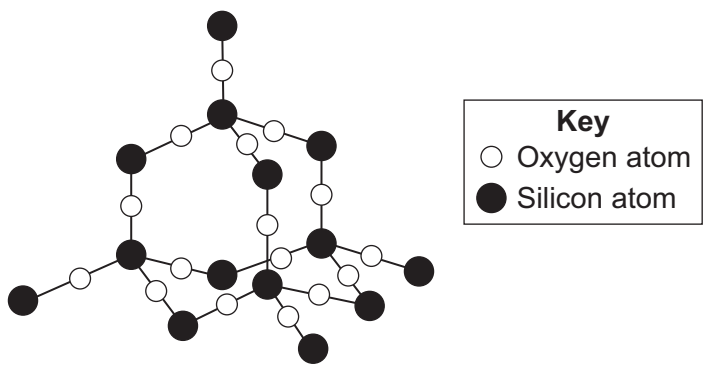


5 Welding blankets are placed under metals being welded. They protect the area under the welding.



Some welding blankets are made from silicon dioxide which does not melt when hit by sparks or molten metal.

The diagram shows a small part of the structure of silicon dioxide.



Describe the structure and bonding in silicon dioxide **and** explain why it is a suitable material for making welding blankets.

.....  
.....  
.....  
.....  
.....  
.....  
.....  
.....  
.....

(3 marks)

3

Turn over ►



- 6** The picture shows a wooden bowl.  
The pieces of wood used for this bowl were dyed different colours.



The artist who made the bowl explained why he dissolved the coloured dyes in methanol.

I use different coloured dyes dissolved in methanol.  
I use methanol because with dyes dissolved in water the wood needs to be soaked for a longer time.  
The bowl dries more quickly if I use methanol instead of water.

- 6 (a) (i)** Why is using methanol an advantage to the artist?

.....  
.....

(1 mark)

- 6 (a) (ii)** The bonds within a methanol molecule are strong, covalent bonds.

Explain why methanol has a low boiling point.

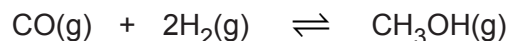
.....  
.....  
.....  
.....  
.....

(2 marks)



**6 (b)** Methanol is made by reacting carbon monoxide with hydrogen.

The equation for this reaction is:



The forward reaction is exothermic.

The best equilibrium yield of methanol is obtained when the temperature is low and when the pressure is high.

Explain why the best equilibrium yield is obtained:

**6 (b) (i)** when the temperature is low

.....  
.....

(1 mark)

**6 (b) (ii)** when the pressure is high.

.....  
.....

(1 mark)

**6 (b) (iii)** In industry a high temperature is used for this reaction. This gives a fast rate of reaction. The increase in temperature gives the particles more energy.

Explain, in terms of particles, why this makes the reaction go faster.

.....  
.....  
.....  
.....  
.....  
.....

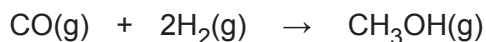
(2 marks)

**Question 6 continues on the next page**

**Turn over ►**



- 6 (c) (i) Calculate the maximum mass of methanol that could be made from 14 g of carbon monoxide.



Relative formula masses ( $M_r$ ): CO = 28; CH<sub>3</sub>OH = 32.

.....

.....

.....

.....

.....

Maximum mass of methanol = ..... g  
(2 marks)

- 6 (c) (ii) In an experiment the actual mass of methanol made from 14 g of carbon monoxide was 12 g. Use this information and your answer from part (c)(i) to calculate the percentage yield of methanol in this experiment.

(If you did not get an answer to part (c)(i) then assume that the maximum yield is 18 g. This is **not** the correct answer to part (c)(i).)

.....

.....

Percentage yield of methanol = .....%  
(2 marks)

- 6 (c) (iii) Suggest **one** reason why the yield obtained is less than the maximum yield.

.....

.....

(1 mark)

12
----

### END OF QUESTIONS

#### ACKNOWLEDGEMENT OF COPYRIGHT-HOLDERS AND PUBLISHERS

Permission to reproduce all copyright material has been applied for. In some cases, efforts to contact copyright-holders have been unsuccessful and AQA will be happy to rectify any omissions of acknowledgements in future papers if notified.

Question 5: Photograph © Wilson Industries  
Question 6: Photograph © Howard Lewin

Copyright © 2011 AQA and its licensors. All rights reserved.

