

Centre Number						Candidate Number				
Surname										
Other Names										
Candidate Signature										

For Examiner's Use	
Examiner's Initials	
Question	Mark
1	
2	
3	
4	
5	
6	
7	
TOTAL	



General Certificate of Secondary Education  
Foundation Tier  
January 2011

## Additional Science

Unit Chemistry C2

CHY2F

## Chemistry

Unit Chemistry C2

F

### Written Paper

Monday 17 January 2011 9.00 am to 9.45 am

**For this paper you must have:**

- a ruler
  - the Data Sheet (enclosed).
- You may use a calculator.

**Time allowed**

- 45 minutes

**Instructions**

- Use black ink or black ball-point pen.
- Fill in the boxes at the top of this page.
- Answer **all** questions.
- You must answer the questions in the spaces provided. Do not write outside the box around each page or on blank pages.
- Do all rough work in this book. Cross through any work you do not want to be marked.

**Information**

- The marks for questions are shown in brackets.
- The maximum mark for this paper is 45.
- You are expected to use a calculator where appropriate.
- You are reminded of the need for good English and clear presentation in your answers.

**Advice**

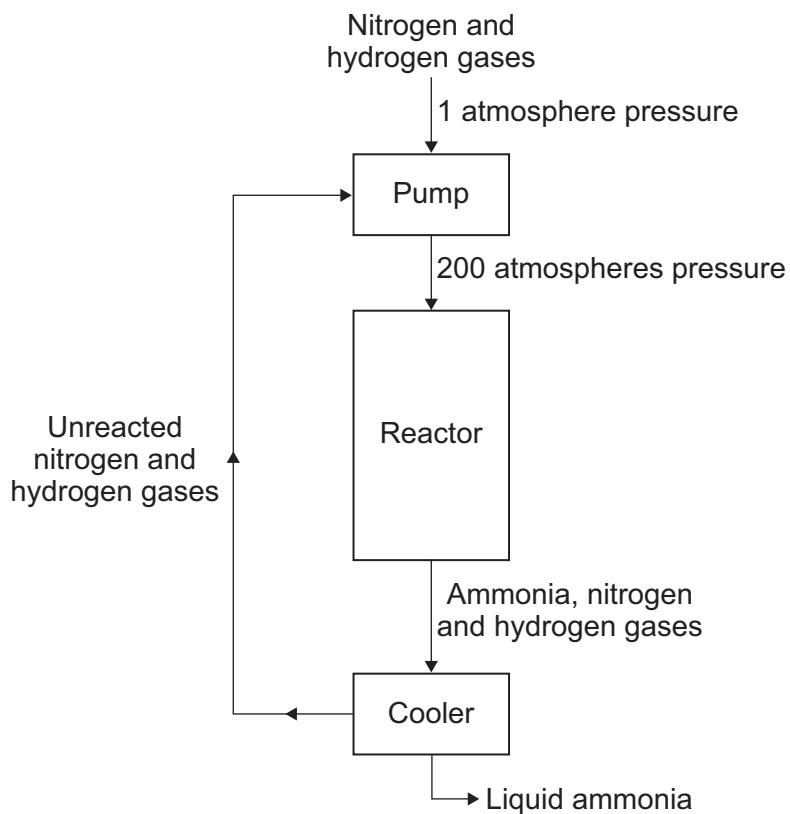
- In all calculations, show clearly how you work out your answer.



J A N 1 1 C H Y 2 F 0 1

Answer **all** questions in the spaces provided.

- 1 The flow diagram shows how ammonia is made.



- 1 (a) What effect, if any, does the **pump** have on the pressure of the nitrogen and hydrogen?

Draw a ring around the correct answer to complete the sentence.

The pump 

decreases
has no effect on
increases

 the pressure.

(1 mark)



1 (b) The word equation for making ammonia is:



In the **reactor** only a small amount of the nitrogen and hydrogen is changed into ammonia.

Tick (✓) the reason why.

Reason why	Tick (✓)
Ammonia is formed from two elements.	
Nitrogen and hydrogen are gases.	
The reaction is reversible.	

(1 mark)

1 (c) In the **cooler** the mixture of gases is cooled.

Draw a ring around the correct answer to complete the sentence.

The cooler turns the ammonia into

a liquid.

a solid.

an element.

(1 mark)

1 (d) What happens to the unreacted nitrogen and hydrogen from the **reactor**?

.....

.....

(1 mark)

4

Turn over for the next question

Turn over ►



2 The picture shows a wooden bowl.  
The pieces of wood used for this bowl were dyed different colours.



The artist who made the bowl explained why he dissolved the coloured dyes in methanol.

I use different coloured dyes dissolved in methanol.  
I use methanol because with dyes dissolved in water the wood needs to be soaked for a longer time.  
The bowl dries more quickly if I use methanol instead of water.

2 (a) The artist uses methanol instead of water.

Give **two** reasons why.

1 .....

.....

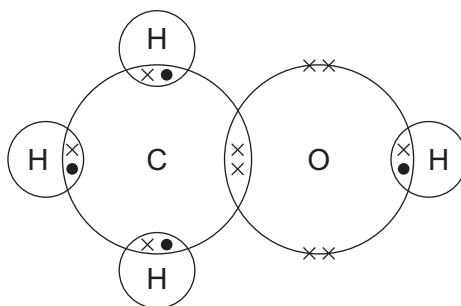
2 .....

.....

(2 marks)



**2 (b)** The diagram shows how the atoms are bonded in methanol.



Draw a ring around:

**2 (b) (i)** the formula of methanol



(1 mark)

**2 (b) (ii)** the type of bonding in methanol.

**covalent**

**ionic**

**metallic**

(1 mark)

**2 (c)** Methanol has a low boiling point.

Tick (✓) the reason why.

Reason why	Tick (✓)
It has a giant covalent structure.	
It is made of small molecules.	
It has a giant metallic structure.	

(1 mark)

5
---

**Turn over for the next question**

**Turn over ►**



- 3 (a)** A magnesium atom contains 12 protons (●), 12 neutrons (○) and 12 electrons (×).  
Which diagram, **A**, **B** or **C**, represents this magnesium atom?

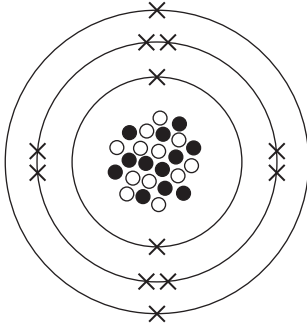


Diagram A

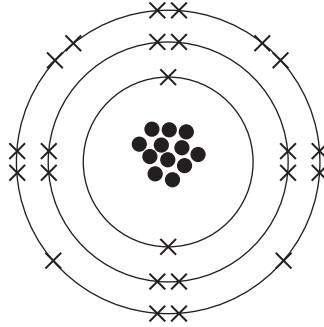


Diagram B

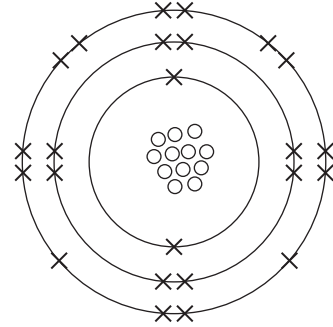



Diagram C

This magnesium atom is **Diagram**  .

(1 mark)

- 3 (b)** Magnesium metal is shaped to make magnesium ribbon.



Tick (✓) **two** reasons which explain why metals can be shaped.

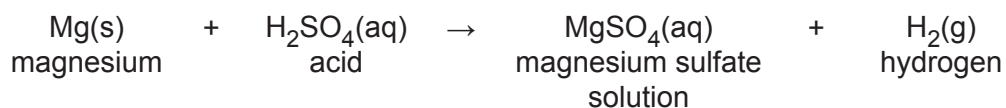
Reason why	Tick (✓)
The atoms are all joined by covalent bonds.	
The atoms can slide over each other.	
The atoms are large.	
The atoms are in layers.	

(2 marks)



**3 (c)** Magnesium sulfate is a salt of magnesium.

It can be prepared by the reaction of magnesium metal with an acid. The equation for the reaction of magnesium with this acid is:



**3 (c) (i)** Draw a ring around the name of the acid used in this reaction.

**hydrochloric**

**nitric**

**sulfuric**

(1 mark)

**3 (c) (ii)** Use the equation to help you to answer this question.

Tick (✓) **two** things that happen when this reaction takes place.

	Tick (✓)
Bubbles are produced.	
The magnesium disappears.	
A solid is formed.	
Water is formed.	

(2 marks)

**3 (c) (iii)** Draw a ring around a method to get solid magnesium sulfate from magnesium sulfate solution.

**crystallisation**

**electrolysis**

**oxidation**

(1 mark)

7
---

Turn over ►



- 4 Welding blankets are placed under metals being welded. They protect the area under the welding from hot sparks or molten metal.



Some welding blankets are made from silicon dioxide.

- 4 (a) The table lists some properties of materials.

**Two** of these are properties of materials used to make welding blankets.

Tick (✓) the **two** correct properties.

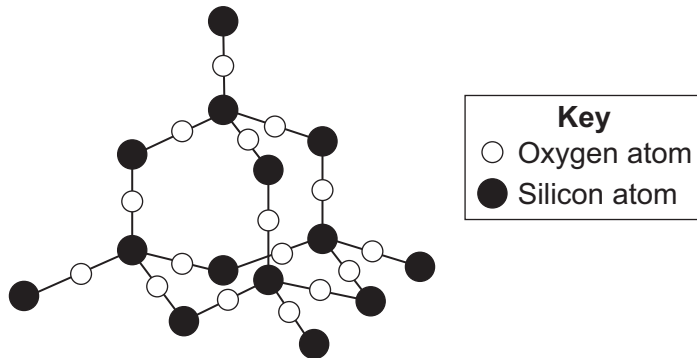
Property	Tick (✓)
High melting point	
Reacts with sparks	
Not flammable	
Low boiling point	

(2 marks)





4 (b) Silicon dioxide has a giant structure. The diagram shows a small part of this structure.



Draw a ring around the correct answer to complete each sentence.

4 (b) (i) Silicon dioxide has a high melting point because a few  
some  
all of the atoms are joined to other atoms.

(1 mark)

4 (b) (ii) Each oxygen atom is joined to two  
three  
four silicon atoms.

(1 mark)

4 (b) (iii) The bonds between the atoms are covalent.  
ionic.  
metallic.

(1 mark)

4 (b) (iv) These bonds are easily broken.  
very strong.  
weak.

(1 mark)

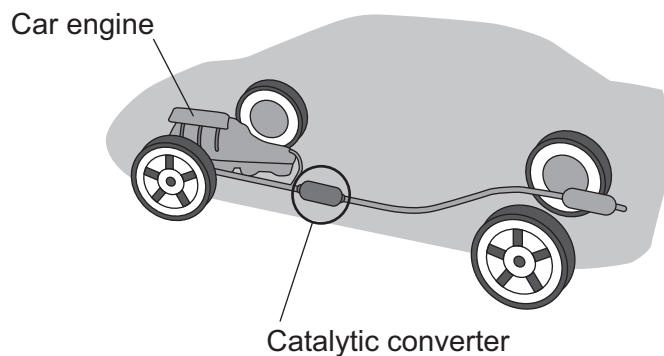


**5** Read the information about car engines.

Burning petrol in air is an exothermic reaction. This reaction is used in car engines.

When petrol burns it produces harmful substances such as nitrogen oxides and carbon monoxide.

A catalytic converter stops these harmful substances being released into the air.

**5 (a)** Draw a ring around the correct answer to complete each sentence.

**5 (a) (i)** The exothermic reaction makes the temperature of the engine

decrease.

increase.

stay the same.

(1 mark)

**5 (a) (ii)** This is because during exothermic reactions

energy is taken in from the surroundings.

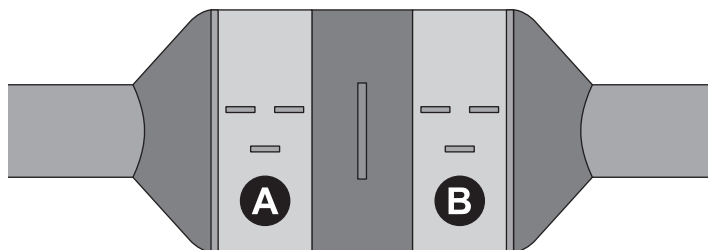
energy is given out to the surroundings.

there is no energy change.

(1 mark)



- 5 (b) The diagram shows a catalytic converter which removes harmful substances. The catalytic converter has two parts, **A** and **B**, which contain different catalysts.



- 5 (b) (i) The equation for the reaction that takes place in part **A** is:

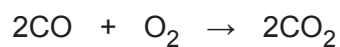


Which **one** of the substances shown in the equation is a compound?

Give the formula of this compound.

.....  
(1 mark)

- 5 (b) (ii) The equation for the reaction that takes place in part **B** is:



Why is it important to stop carbon monoxide (CO) from being released into the air?

.....  
.....  
(1 mark)

- 5 (c) The table lists some statements about catalysts. Only **two** statements are correct.

Tick (✓) the **two** correct statements.

Statement	Tick (✓)
A catalyst can speed up a chemical reaction.	
A catalyst is used up in a chemical reaction.	
Different reactions need different catalysts.	
A catalyst does <b>not</b> change the rate of a chemical reaction.	

(2 marks)

Turn over ►



**5 (d)** Modern catalytic converters contain nanosized particles of catalyst.  
Less catalyst is needed when nanosized catalyst particles are used.

**5 (d) (i)** Complete the sentence.

The size of nanosized particles is ..... than normal sized particles.  
(1 mark)

**5 (d) (ii)** The catalysts contain platinum.

Suggest why a manufacturer of catalytic converters would want to use less catalyst.

.....

.....

(1 mark)

8



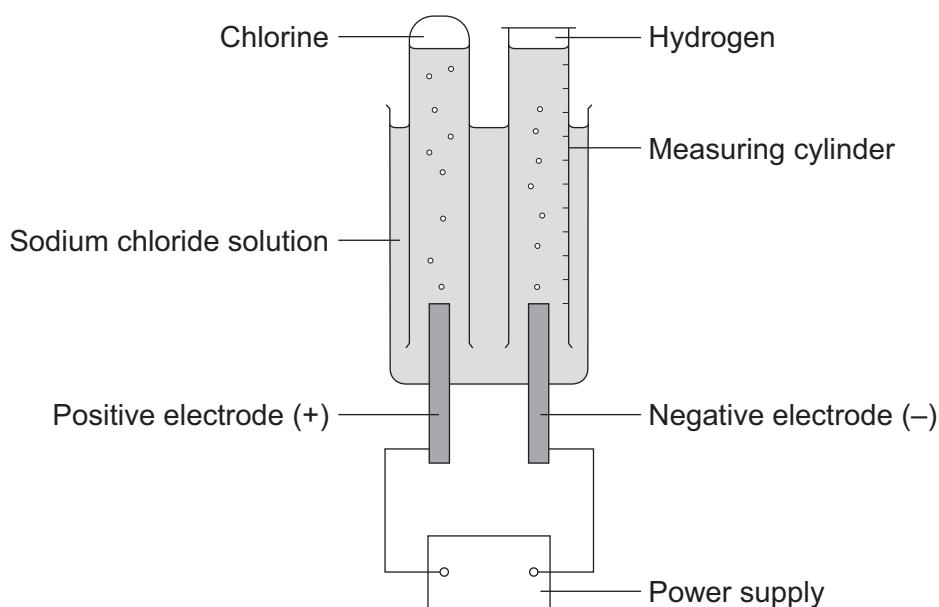
**6** A student investigated the electrolysis of sodium chloride solution.

Five sodium chloride solutions were made. Each solution had a different concentration.

To make each solution the student:

- weighed the amount of sodium chloride needed
- dissolved it in water
- added more water until the total volume was one cubic decimetre ( $1 \text{ dm}^3$ ).

The solutions were placed one at a time in the apparatus shown below.



The student measured the volume of hydrogen gas produced in ten minutes.

The results are shown on the graph on the next page.

**6 (a)** Sodium chloride does not conduct electricity when it is solid.

Explain, in terms of ions, why sodium chloride solution conducts electricity.

.....  
 .....  
 (1 mark)

**6 (b)** Chlorine is produced at the positive electrode.

Why are chloride ions attracted to the positive electrode?

.....  
 (1 mark)

**Question 6 continues on the next page**

**Turn over ►**



6 (c) The solution left at the end of each experiment contains sodium hydroxide.

Draw a ring around **one** number which could be the pH of this solution.

2

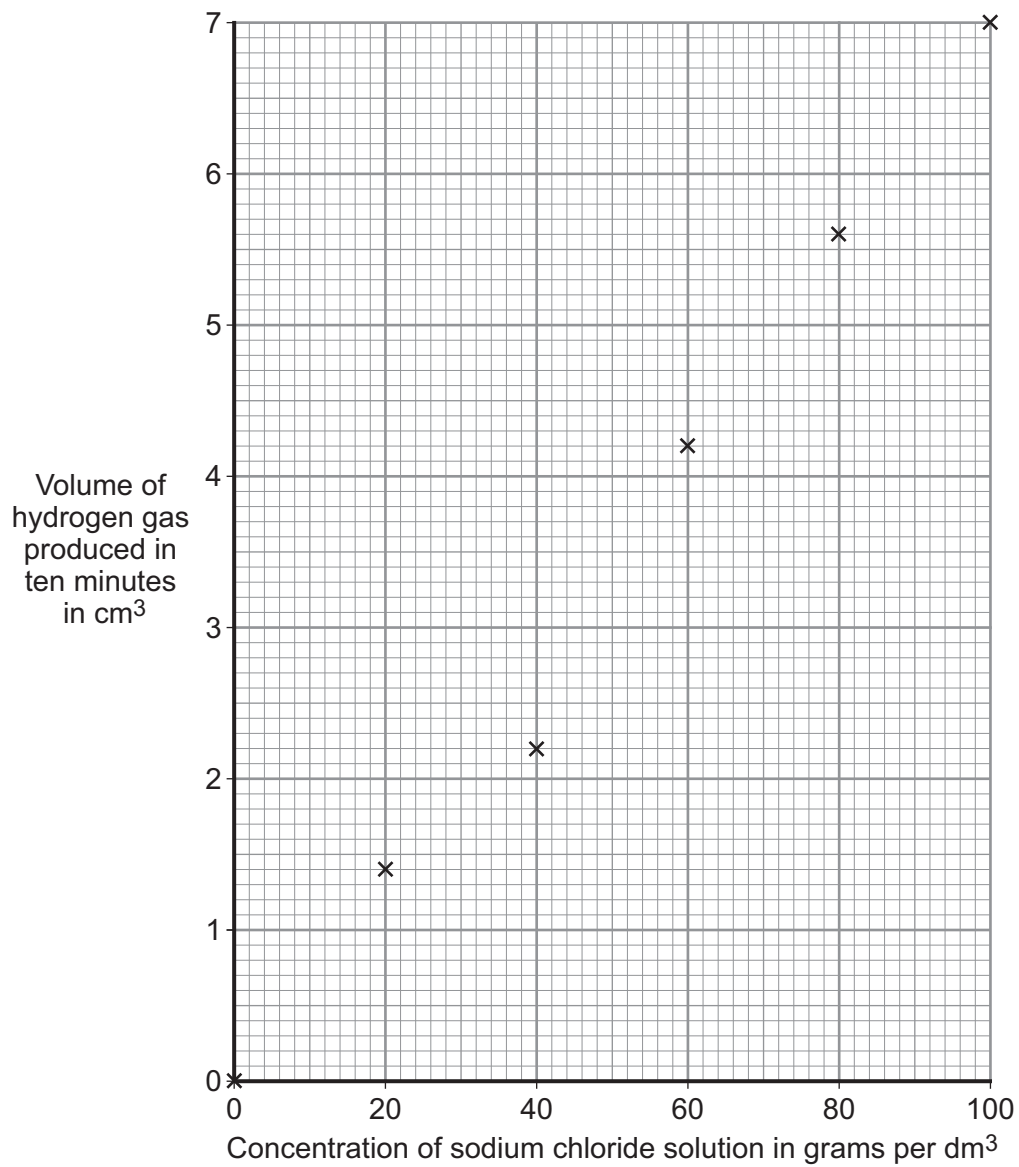
5

7

13

(1 mark)

6 (d) The results for the experiment on the previous page are shown on the graph.



6 (d) (i) Draw a line of best fit on the graph. (1 mark)

6 (d) (ii) The result for one concentration is anomalous.  
Which result is anomalous?

The result at concentration ..... grams per dm<sup>3</sup>  
(1 mark)

6 (d) (iii) Suggest **two** possible causes of this anomalous result.

1 .....

.....

2 .....

.....

(2 marks)

6 (d) (iv) Suggest how the student could check the reliability of the results.

.....

.....

(1 mark)

6 (d) (v) How did an increase in the concentration of the sodium chloride solution affect the volume of hydrogen gas produced in ten minutes?

.....

.....

(1 mark)

9
---

**Turn over for the next question**

**Turn over ►**



- 7 Calamine lotion is used to treat itching. The main ingredients are two metal oxides.



- 7 (a) One of the metal oxides has a relative formula mass ( $M_r$ ) of 81.

The formula of this metal oxide is MO.  
(M is **not** the correct symbol for the metal.)

The relative atomic mass ( $A_r$ ) of oxygen is 16.

- 7 (a) (i) Calculate the relative atomic mass ( $A_r$ ) of metal M.

.....  
.....  
.....

Relative atomic mass ( $A_r$ ) = .....  
(2 marks)

- 7 (a) (ii) Use your answer to part (a)(i) and the periodic table on the Data Sheet to name metal M.

The name of metal M is .....  
(1 mark)





**7 (b)** The other metal oxide is iron(III) oxide.

This contains iron(III) ions ( $\text{Fe}^{3+}$ ) and oxide ions ( $\text{O}^{2-}$ ).

**7 (b) (i)** Explain in terms of electrons how an iron atom (Fe) can change into an iron(III) ion ( $\text{Fe}^{3+}$ ).

.....

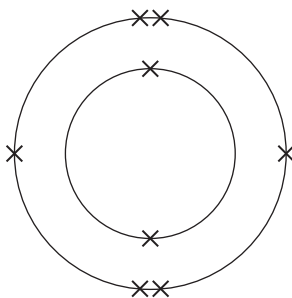
.....

.....

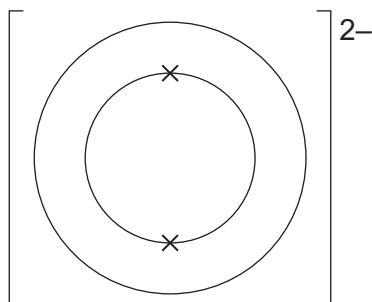
.....

(2 marks)

**7 (b) (ii)** The diagram below represents the electronic structure of an oxygen atom (O).



Complete the diagram below to show the electronic structure of an oxide ion ( $\text{O}^{2-}$ ).



(1 mark)

6
---

**END OF QUESTIONS**



**There are no questions printed on this page**

**DO NOT WRITE ON THIS PAGE  
ANSWER IN THE SPACES PROVIDED**



**There are no questions printed on this page**

**DO NOT WRITE ON THIS PAGE  
ANSWER IN THE SPACES PROVIDED**



**There are no questions printed on this page**

**DO NOT WRITE ON THIS PAGE  
ANSWER IN THE SPACES PROVIDED**

ACKNOWLEDGEMENT OF COPYRIGHT-HOLDERS AND PUBLISHERS

Permission to reproduce all copyright material has been applied for. In some cases, efforts to contact copyright-holders have been unsuccessful and AQA will be happy to rectify any omissions of acknowledgements in future papers if notified.

Question 2: Photograph © Howard Lewin  
Question 4: Photograph © Wilson Industries

Copyright © 2011 AQA and its licensors. All rights reserved.

