

Please write clearly, in block capitals.

Centre number

--	--	--	--	--

Candidate number

--	--	--	--

Surname

---

Forename(s)

---

Candidate signature

---

# GCSE BUSINESS

## Paper 2

---

Specimen 2016

Morning Time allowed: 1 hour 45 minutes

### Materials

For this paper you must have:

- a calculator.

### Instructions

- Use black ink or black ball-point pen.
- Fill in the boxes at the top of this page.
- Answer **all** questions.
- You must answer the questions in the spaces provided. Do not write outside the box, around each page or on blank pages.
- Do all rough work in this answer book. Cross through any work you do not want to be marked.

### Advice

- The marks for each question are shown in brackets.
  - The maximum mark for this paper is 90.
-

---

**Section A**

Answer **all** questions in the spaces provided

---

For questions with four responses only **one** answer per question is allowed.


For each answer completely fill in the circle alongside the appropriate answer.


CORRECT METHOD



WRONG METHODS



If you want to change your answer you must cross out your original answer as shown. 

If you wish to return to an answer previously crossed out, ring the answer you now wish to select as shown. 

**0 1** . **1** Which of the following is an example of an asset?

- A** Cash in the bank
- B** Long term bank loan
- C** Mortgage
- D** Overdraft

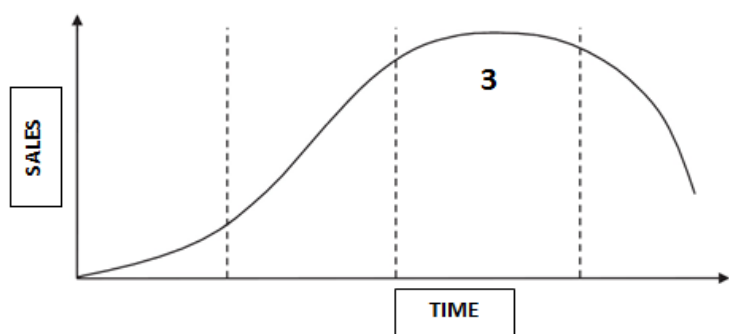
[1 mark]

**0 1** . **2** Which of the following is a method of secondary market research?

- A** Feedback from suppliers
- B** Focus groups
- C** Newspapers
- D** Telephone surveys

[1 mark]

**0 1 . 3** The product life cycle shows sales of a product over time. What is stage 3 called?



- A** Decline
- B** Growth
- C** Introduction
- D** Maturity

[1 mark]

**0 1 . 4** What are the features of a 'star' in the Boston Matrix?

- A** High market share in a fast-growth market
- B** High market share in a low-growth market
- C** Low market share in a fast-growth market
- D** Low market share in a low-growth market

[1 mark]

**Question 1 continues on the next page**

---

**0 1** . **5** Which of the following is an example of quantitative market research?

- A** A magazine article reviewing a new product
- B** Consumers' individual opinions about the tastes of a product
- C** Figures showing the sales of a product
- D** Personal views on the packaging of a product

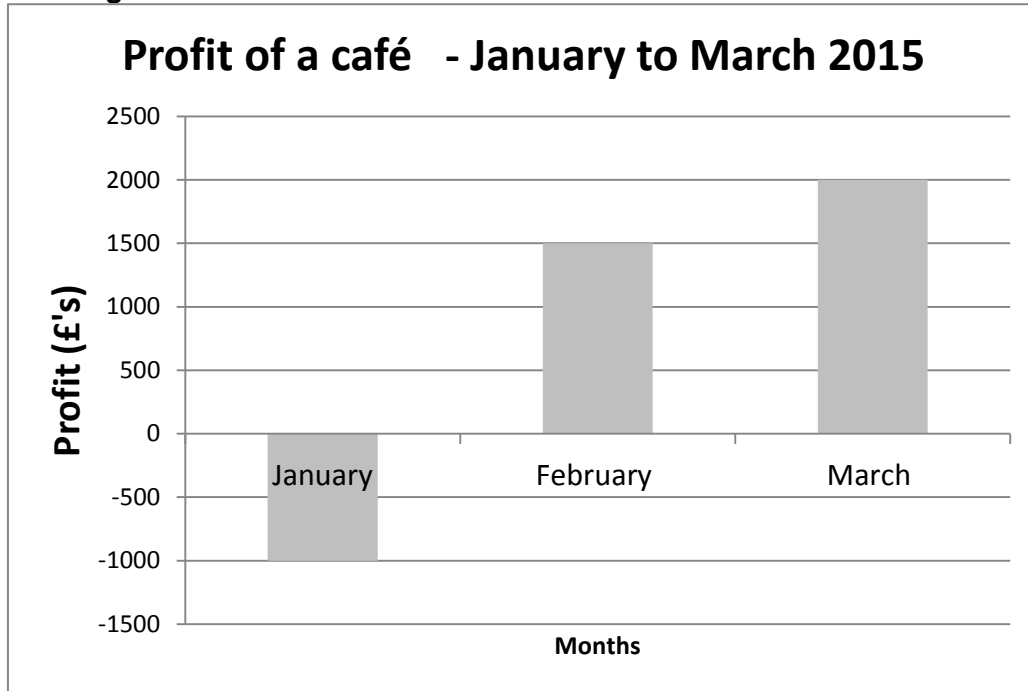
**[1 mark]**

**0 1** . **6** Which of the following is an internal source of finance?

- A** Government Grants
- B** Loan
- C** Overdraft
- D** Retained Profit

**[1 mark]**

Figure 1



0 1 . 7

Calculate the average monthly profit made by the café between January and March 2015. Show all workings. Give your answer to the nearest pound (£).

[2 marks]

---

---

---

---

---

---

---

Question 1 continues on the next page

---

**0 1** . **8**

Explain **one** way in which a business can segment the market.

**[2 marks]**

---

---

---

---

---

---

---

**0 1** . **9**

Explain **one** reason why someone might want to start up their own business.

**[2 marks]**

---

---

---

---

---

---

---

**0 1** . **10**

Explain **one** disadvantage of using an overdraft as a source of finance.

**[2 marks]**

---

---

---

---

---

---

---

---

**0 1** . **11** Explain, using **one** business example, the meaning of the tertiary sector.

**[2 marks]**

---

---

---

---

---

---

---

**0 1** . **12** Explain **one** objective which a business may set.

**[2 marks]**

---

---

---

---

---

---

---

**0 1** . **13** Explain how a business can use outsourcing.

**[2 marks]**

---

---

---

---

---

---

---

**End of Section A**

**Turn over for Section B**

### Section B

Answer **all** questions in this section.

**0 2**

#### Item A – Party planning

Sonya has been working for a large business selling party products.

She recently organised a party for her daughter. Sonya's friends were so impressed they have asked her to organise parties for their children.

Sonya visited a local play group to carry out primary market research. She asked 40 parents there to complete a survey. Sonya wanted to find out if these parents would pay her to organise a party for their children. The results of two questions are below.

**Question 1** – On average how much do you spend on your child's party.

Options	Less than £250	£251–£500	£501–£750
Number that choose the option	5	20	15

**Question 2** – Would you use a party planner?

Options	Yes	No
Number that choose the option	27	13

Sonya believes she has identified a gap in the market for organising children's parties and is planning to start her own business.

**0 2** . **1**

Analyse **one** benefit of Sonya completing primary market research.

**[6 marks]**

---



---



---



---



---



---



---



---



---













---

---

---

---

---

---

---

**End of Section B**

**Turn over for Section C**







**0 3** . **3**

Explain **two** benefits of developing new products for a business.

**[4 marks]**

Benefit 1

---

---

---

---

---

Benefit 2

---

---

---

---

---

---

---

**Question 3 continues on the next page**









---

---

---

---

---

---

---

---

---

---

**END OF QUESTIONS**

**There are no questions printed on this page**

[aqa.org.uk](http://aqa.org.uk)

Copyright © 2016 AQA and its licensors. All rights reserved.

AQA Education (AQA) is a registered charity (registered charity number 1073334) and a company limited by guarantee registered in England and Wales (company number 3644723). Registered address: AQA, Devas Street, Manchester M15 6EX

24 August 2016