



H

Tuesday 24 January 2012 – Morning

**GCSE GATEWAY SCIENCE
BIOLOGY B**

B631/02 Unit 1 Modules B1 B2 B3 (Higher Tier)


Candidates answer on the Question Paper.
A calculator may be used for this paper.

Duration: 1 hour

OCR supplied materials:
None

Other materials required:

- Pencil
- Ruler (cm/mm)



Candidate forename		Candidate surname	
--------------------	--	-------------------	--

Centre number						Candidate number				
---------------	--	--	--	--	--	------------------	--	--	--	--

MODIFIED LANGUAGE

INSTRUCTIONS TO CANDIDATES

- Write your name, centre number and candidate number in the boxes above. Please write clearly and in capital letters.
- Use black ink. HB pencil may be used for graphs and diagrams only.
- Answer **all** the questions.
- Read each question carefully. Make sure you know what you have to do before starting your answer.
- Write your answer to each question in the space provided. Additional paper may be used if necessary but you must clearly show your candidate number, centre number and question number(s).
- Do **not** write in the bar codes.


INFORMATION FOR CANDIDATES

- The number of marks is given in brackets [] at the end of each question or part question.
- The total number of marks for this paper is **60**.
- This document consists of **24** pages. Any blank pages are indicated.

Answer **all** the questions.

Section A – Module B1

- 1 This question is about smoking.



- (a) Cigarette smoke contains a drug called nicotine.

Different types of drug act in different ways.

Draw straight lines to connect each **type of drug** to the correct **action of the drug**.

One line has been drawn for you.

type of drug	action of the drug
alcohol	pain killer
aspirin	hallucinogen
LSD	stimulant
nicotine	depressant

[2]

- (b) (i) Smoking can affect the birth weight of babies born to mothers who smoke.

Look at the information in the table.

	baby born to mother who smokes	baby born to mother who does not smoke
mass at birth in kg	3.4	3.9
height at birth in m	0.50	0.52
BMI	14.4

Body Mass Index (BMI) is calculated using the formula

$$\text{BMI} = \frac{\text{mass in kg}}{(\text{height in m})^2}$$

Calculate the BMI of the baby born to the mother who smokes.

Show your working.

.....

BMI [2]

- (ii) Nicotine makes it difficult to give up smoking.

Which word best describes this effect?

Put a **ring** around the correct answer.

accumulation addiction irritation tolerance [1]

- (iii) A new nicotine patch treatment has been developed to help smokers to stop smoking.

It must be tested before it can be used on humans.

Write down **one** reason why it must be tested.

..... [1]

- (iv) Explain why some people have objections to certain forms of testing.


.....
 [1]

[Total: 7]

Turn over

2 Look at the pictures of an injured skier and a man in cold water.

Both of these people find it difficult to keep warm.



(a) (i) The normal core body temperature is 37 °C.

Why do body cells work best at this temperature?

..... [1]

(ii) Both men need to keep heat in their bodies so they do not cool down.

Changes take place to the blood flow in the skin to help keep heat in their bodies.

Describe the changes that happen and explain why they help keep heat in their bodies.

.....
.....
.....
.....
..... [2]

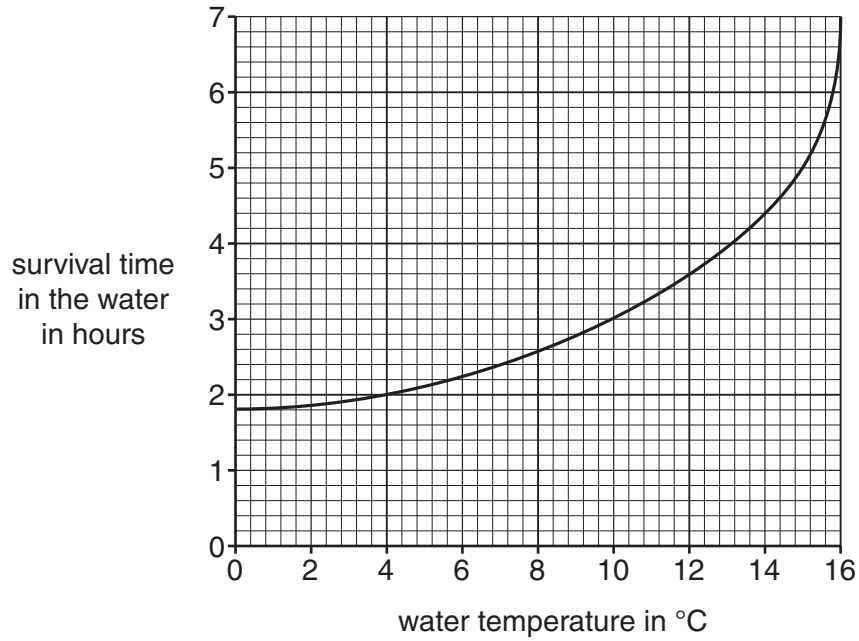
(iii) If the men do not keep enough heat in their bodies their core body temperatures will drop significantly below 37 °C.

Write down the word that describes this condition.

..... [1]

(b) Look at the graph.

It shows how long people can survive in water at various temperatures.



How many hours longer is survival time in water at 15°C than water at 10°C?

..... [1]

[Total: 5]

3 Look at Nicholas. He is a keen footballer.



(a) Nicholas eats a balanced diet which contains the right amounts of all the nutrients he needs.

Nicholas' diet would not be suitable for other members of his family.

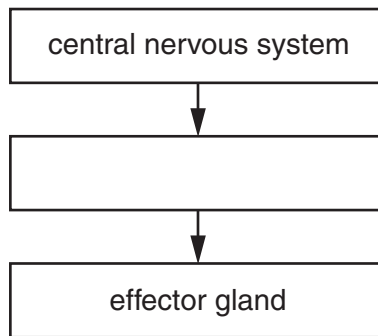
Suggest **one** reason why other members of his family will need different diets.

..... [1]

(b) (i) Enzymes are needed to digest the food Nicholas eats.

The release of digestive enzymes is controlled by a **reflex arc**.

Fill in the missing stage in this part of the reflex arc.



[1]

(ii) Synapses are gaps in a reflex arc.

Describe what happens when an impulse arrives at a synapse.

.....
.....
..... [2]

(c) Nicholas' balanced diet includes glucose which is needed for **aerobic** respiration.

Write down the balanced symbol equation for aerobic respiration.

..... + → + [2]

(d) Nicholas feels tired during a game of football.

He recovers after the game.

Describe what happens inside his body as he recovers.

.....
.....
.....
..... [2]

[Total: 8]

Section B – Module B2

4 Look at the picture.
It shows an orangutan.
Orangutans live in rainforests.



(a) Orangutans are an **endangered** species.

(i) One reason orangutans are endangered is because the rainforest is being cut down.

Suggest **one other** reason why they might be endangered.

.....
..... [1]

(ii) Stopping the rainforest being cut down may help the orangutan species to survive.

Describe **one other** way the orangutans could be helped.

.....
..... [1]

(b) The rainforest is being cut down so the land can be used to grow palm trees.

Oil from palm trees is sold for use in the food industry.

However, there are also benefits to the local community from keeping the rainforest.

Suggest **two** benefits to the local community from keeping the rainforest.

1
.....

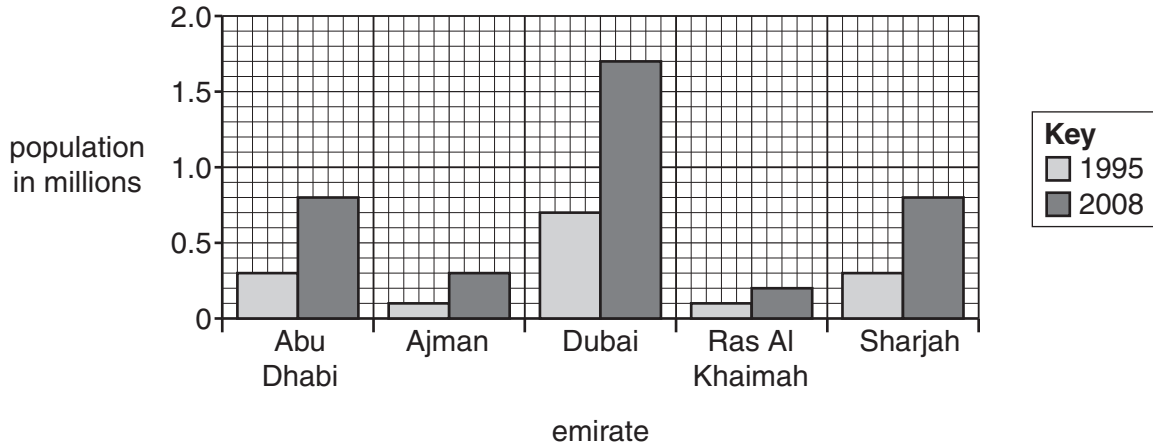
2
..... [2]

[Total: 4]

5 The UAE is a country made up of different areas called emirates.

The population of each emirate is increasing.

Look at the graph. It shows the population of five of the emirates.



(a) The graph shows the populations in 1995 and 2008.

The population of Dubai had the biggest increase during this time.

Calculate the increase in population of Dubai between 1995 and 2008.

Use your answer to calculate the **percentage increase** in population.

You should show your working.

.....

.....

answer% [2]

(b) The increase in population means that more fossil fuels are being burned.


This means more sulfur dioxide is being released.

Write down **one** effect of sulfur dioxide pollution.

..... [1]

(c) The UAE is a desert country. There are camels living in the deserts.

Look at the picture of a camel.



(i) The fat on a camel is kept in the hump. This stops the fat insulating the whole body.

Write about **other** ways the camel is adapted to live in the desert.

.....

.....

.....

.....

..... [3]

(ii) Camels produce milk for their young.














Write down the name of the group of vertebrates that produce milk for their young.

..... [1]

(d) Scientists think camels evolved from an animal that lived millions of years ago.

Look at the table.

It shows how scientists think camels evolved.

Age	Paleocene 65 million years ago	Eocene 54 million years ago	Oligocene 33 million years ago	Miocene 23 million years ago	Present
Organism					
Skull and teeth					
Limb bones					

Scientists know what these animals looked like because they have found fossils of their bones.

To become fossilised the animal remains were buried by sediment.

(i) After burial the bones gradually formed fossils.

Describe how fossils formed from the bones.

.....
 [1]

(ii) The camel has a longer neck than its ancestor.

Lamarck's theory suggests this is because the ancestor stretched its neck then passed on this change.

Why do scientists now think that Lamarck's theory is incorrect?

.....

 [2]

[Total: 10]

Turn over

6 Look at the picture of some cactus plants.



(a) Plants make food by the process of photosynthesis.

(i) Write down the word equation for photosynthesis.

..... + → + [2]

(ii) The glucose from photosynthesis is turned into starch for storage.

Why is starch better for storage than glucose?

..... [1]

(b) The cactus is adapted to live in hot dry conditions.

Look at the statements about the cactus.

Put a tick (✓) in a box next to each statement to show whether it is true or false.

	true	false
green stem for respiration	<input type="checkbox"/>	<input type="checkbox"/>
long roots to store carbon dioxide underground	<input type="checkbox"/>	<input type="checkbox"/>
rounded shape to decrease surface area to volume ratio	<input type="checkbox"/>	<input type="checkbox"/>
spines increase surface area for photosynthesis	<input type="checkbox"/>	<input type="checkbox"/>
thick cuticle to support the plant	<input type="checkbox"/>	<input type="checkbox"/>

[1]

(c) Fred lives near a population of small cactus plants.



He wants to find out the number of cactus plants in the area. He uses a quadrat to collect some data.

He places the quadrat on the ground and counts the number of cactus plants inside the quadrat.

He repeats this five times and records the number of cactus plants he finds.

Suggest **two** limitations of Fred's method for collecting data.

1

2 [2]


[Total: 6]

Section C – Module B3

7 This article appeared in a newspaper.

Read the article carefully.

A group of scientists claim to have made gametes from human stem cells.



The stem cells were taken from an embryo which had been made by cloning.

The stem cells were diploid but they were made to divide to produce sperm cells.

One of the scientists said,
“This is amazing and very exciting. The sperm cells all have a large nucleus and a tail.
Their shape is not quite normal but they contain all the proteins needed for fertilisation.”

(a) The sperm cells were produced from **stem** cells.

What is a stem cell?

.....
..... [1]

(b) The stem cells are diploid.

They can divide to make sperm cells.

What name is given to this type of cell division?

..... [1]

(c) Why is it important that sperm cells are haploid?

.....
..... [1]

(d) The stem cells were taken from embryos that had been made by cloning.

Some people think that it is wrong to make embryos to supply stem cells.

Write down **one** reason why they might think this.

.....
..... [1]

(e) A protein found in sperm cells, sp56, is needed for fertilisation.

It contains 579 amino acids.

How many DNA base pairs code for this protein?

.....
.....

answer = base pairs [1]

[Total: 5]

16
BLANK PAGE

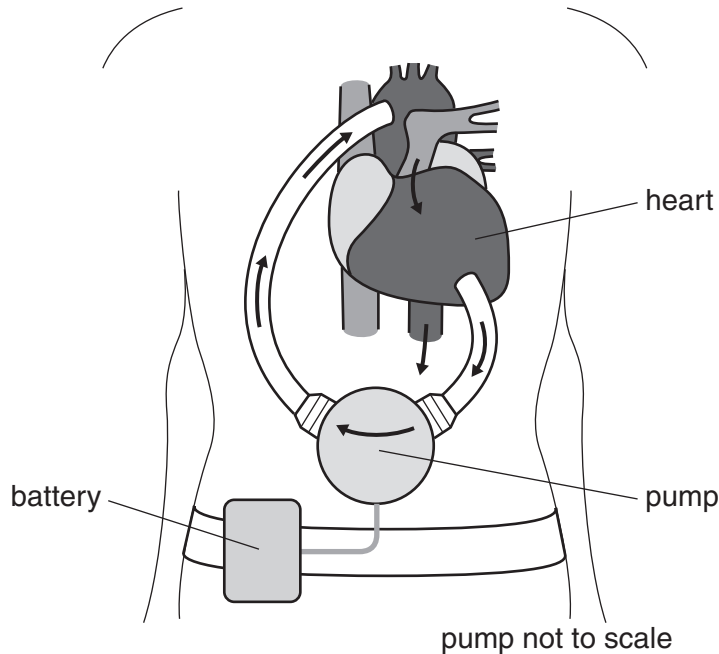
PLEASE DO NOT WRITE ON THIS PAGE

8 The heart has two ventricles that pump blood to different parts of the body.

The diagram shows a new type of artificial heart pump.

It is connected to the left ventricle.

It helps the left ventricle pump blood into a blood vessel.



(a) What is the name of the blood vessel that takes blood away from the **left** ventricle?

Put a ring around the correct answer in this list.

- aorta** **pulmonary artery** **pulmonary vein** **vena cava**

[1]

(b) The left ventricle is more likely to need the use of a pump than the right ventricle.

Suggest why.

.....
..... [1]

(c) The pump is implanted inside the body.

The pump is connected by a wire to the power supply which is outside the body.

Suggest **one** problem that this might cause.

.....
..... [1]

[Total: 3]

Turn over

9 The table shows the concentration of different substances in the blood.

The concentrations are shown for the blood of a pregnant woman and her foetus.

substance	concentration in the woman's blood in mg/100 cm ³	concentration in the foetus's blood in mg/100 cm ³
carbon dioxide	30	32
haemoglobin	12000	17000
glucose	90	63
fats	1000	600
oxygen	100	30
urea	22	25

(a) Three of the substances shown in the table will diffuse from the woman's blood to the foetus.

(i) Write down the names of these **three** substances.

..... [1]

(ii) How can you tell from the table which direction the substances diffuse?

..... [1]

(iii) The substances diffuse across the placenta.

Write down **one** way that the placenta is adapted to increase the rate of diffusion.

..... [1]

- (b) (i) Doctors can measure the mass of haemoglobin (Hb) in 100cm³ of red blood cells that are packed together.

For pregnant women this is 35 000mg (35g).

Doctors calculate the percentage of red blood cells in blood using the formula:

$$\text{percentage} = \frac{\text{mass of Hb in g per 100cm}^3 \text{ of blood}}{\text{mass of Hb in g per 100cm}^3 \text{ of packed cells}} \times 100$$

Use the table to work out this percentage for a pregnant woman.

.....
.....

answer =% [1]

- (ii) Red blood cells make up 50% of the blood in a foetus.

The foetus has to maintain a large oxygen supply to its tissues.

Explain how it does this.

Use your answer to part (i) and your knowledge of haemoglobin to help you.

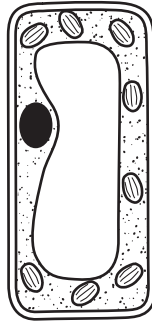
.....
.....
..... [2]

[Total: 6]

10 This question is about rice.



(a) Look at the diagram of a cell from a rice plant.



Write down two structures found in rice plant cells that are **not** found in animal cells.

..... and [1]

(b) When rice seeds start to grow, their shoots grow upwards, towards light.

What is the name given to this response?

..... [1]

(c) About 100 years ago in Japan, the rice crops often failed.

The shoots grew too quickly and then collapsed.

(i) Some scientists thought that this must be due to a mutation in the genes of the rice plant.

How could a mutation in the DNA of a plant alter how the plant grows?

.....
.....
..... [2]

(ii) Scientists then discovered that the crops failed due to a disease.

This disease was caused by a fungus.

The fungus was releasing a plant hormone.

This hormone is usually present in lower concentration in plants and enables them to grow in height.

What is the **main** way that plants gain height?

Put a tick (✓) in the box next to the correct answer.

The cells in the tip of the shoot divide.

The cells in the shoot enlarge.

The roots grow, pushing the shoot upwards.

The leaves grow.

[1]

(d) Scientists have produced a new variety of rice by putting the gene for beta-carotene from carrots into rice.

Why is this useful?

.....

..... [1]

[Total: 6]

END OF QUESTION PAPER

BLANK PAGE

PLEASE DO NOT WRITE ON THIS PAGE

BLANK PAGE

PLEASE DO NOT WRITE ON THIS PAGE

PLEASE DO NOT WRITE ON THIS PAGE



Copyright Information

OCR is committed to seeking permission to reproduce all third-party content that it uses in its assessment materials. OCR has attempted to identify and contact all copyright holders whose work is used in this paper. To avoid the issue of disclosure of answer-related information to candidates, all copyright acknowledgements are reproduced in the OCR Copyright Acknowledgements Booklet. This is produced for each series of examinations and is freely available to download from our public website (www.ocr.org.uk) after the live examination series.

If OCR has unwittingly failed to correctly acknowledge or clear any third-party content in this assessment material, OCR will be happy to correct its mistake at the earliest possible opportunity.

For queries or further information please contact the Copyright Team, First Floor, 9 Hills Road, Cambridge CB2 1GE.

OCR is part of the Cambridge Assessment Group; Cambridge Assessment is the brand name of University of Cambridge Local Examinations Syndicate (UCLES), which is itself a department of the University of Cambridge.