

Candidate forename		Candidate surname	
-----------------------	--	----------------------	--

Centre number						Candidate number				
------------------	--	--	--	--	--	---------------------	--	--	--	--

**OXFORD CAMBRIDGE AND RSA EXAMINATIONS
GENERAL CERTIFICATE OF SECONDARY EDUCATION**

B632/01

GATEWAY SCIENCE

BIOLOGY B

Unit 2 Modules B4 B5 B6 (Foundation Tier)

TUESDAY 7 JUNE 2011: Afternoon

DURATION: 1 hour

SUITABLE FOR VISUALLY IMPAIRED CANDIDATES

**Candidates answer on the question paper.
A calculator may be used for this paper.**

OCR SUPPLIED MATERIALS:

None

OTHER MATERIALS REQUIRED:

Pencil

Ruler (cm/mm)

READ INSTRUCTIONS OVERLEAF

INSTRUCTIONS TO CANDIDATES

- **Write your name, centre number and candidate number in the boxes on the first page. Please write clearly and in capital letters.**
- **Use black ink. Pencil may be used for graphs and diagrams only.**
- **Read each question carefully. Make sure you know what you have to do before starting your answer.**
- **Write your answer to each question in the space provided. Additional paper may be used if necessary but you must clearly show your candidate number, centre number and question number(s).**
- **Answer ALL the questions.**

INFORMATION FOR CANDIDATES

- **The number of marks is given in brackets [] at the end of each question or part question.**
- **The total number of marks for this paper is 60.**

BLANK PAGE

Answer ALL the questions.

SECTION A – MODULE B4

1 Cathy is investigating how plants lose water.

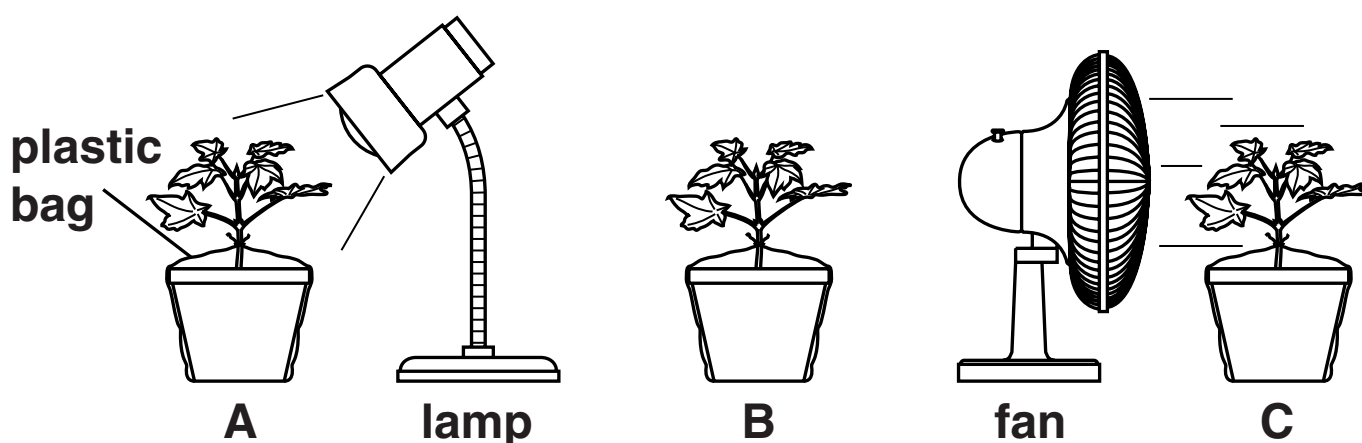
She sets up three plants as shown in the diagrams.

She waters each plant then covers each pot in a plastic bag.

She then measures the mass of each plant and its pot.

She leaves the plants on a bench for five days.

She then measures the mass of each plant again.



The table shows her results.

	plant A	plant B	plant C
mass at start in g	882	879	881
mass after five days in g	692	762	654

(a) The plants lose mass because they lose water.

(i) Look at the diagrams.

How does Cathy know that water has been lost from the plants and NOT from the soil?

_____ [1]

(ii) Which plant lost most water?

Choose A, B or C. _____

Show how you worked out your answer.

_____ [2]

(b) Describe how plants lose water.

_____ [2]

(c) Plants sometimes take in carbon dioxide.

Look at the diagrams.

Which plant would you expect to take in most carbon dioxide?

Choose A, B or C. _____

Explain your answer.

[3]

[Total: 8]

BLANK PAGE

2 In 2007 scientists discovered the completely preserved body of a woolly mammoth calf.

The body was buried in ice in Russia.

The mammoth died 37 000 years ago but had NOT decayed.

(a) Suggest TWO reasons why the mammoth had NOT decayed.

1 _____

2 _____ [2]

(b) Some other mammoth bodies have been found which have partly decayed.

Look at the list of some mammoth body parts.

Put a ring around the body part that is LEAST likely to decay.

FUR

HEART

MUSCLE

SKIN

TEETH

[1]

(c) As dead bodies decay, nitrogen compounds in the bodies break down into nitrates.

This is part of the nitrogen cycle.

Write down ONE nitrogen compound that breaks down into nitrates.

_____ [1]

(d) As dead bodies decay, gases are released.


Write down the name of ONE gas that is released.

_____ [1]

[Total: 5]

3 The diagram shows energy flow along a food chain.

The numbers show the amount of energy at each stage.



(a) By what process does energy from the Sun enter the food chain?

_____ [1]

(b) Not all the energy at one stage of the food chain is transferred to the next stage.

Write down ONE reason why some energy is lost from the food chain.

_____ [1]

(c) (i) What percentage of the energy in the corn is transferred to the chickens?

answer _____% [1]

(ii) What percentage of the energy in the corn is transferred to the humans?

answer _____% [1]

(d) As well as eating chickens, humans can also eat corn.

Explain ONE advantage to humans of eating corn compared with eating chickens.

Use information from the diagram to help you answer.

[1]

(e) As well as sunlight, corn also needs minerals to grow.

Many farmers add fertiliser to their crops to give them the minerals they need.

Look at the list of things that plants need to grow.

Put rings around TWO minerals found in fertiliser.

CARBON DIOXIDE

NITRATE

PHOSPHATE

SUGAR

WATER

[2]

[Total: 7]

SECTION B – MODULE B5

4 Winston is donating blood.

- (a) The blood Winston donates can be given to someone who has been injured in an accident.**

Write down ONE OTHER use for donated blood.

_____ [1]

- (b) To stop the donated blood from clotting a chemical is added.**

Write down the name of this chemical.

Choose from the list.

ANTIBODY

ANTI-COAGULANT

PLATELET

RHESUS

answer _____ [1]

- (c) The blood is taken from a vein in Winston's arm.**

Veins are ONE TYPE of blood vessel in a circulatory system.

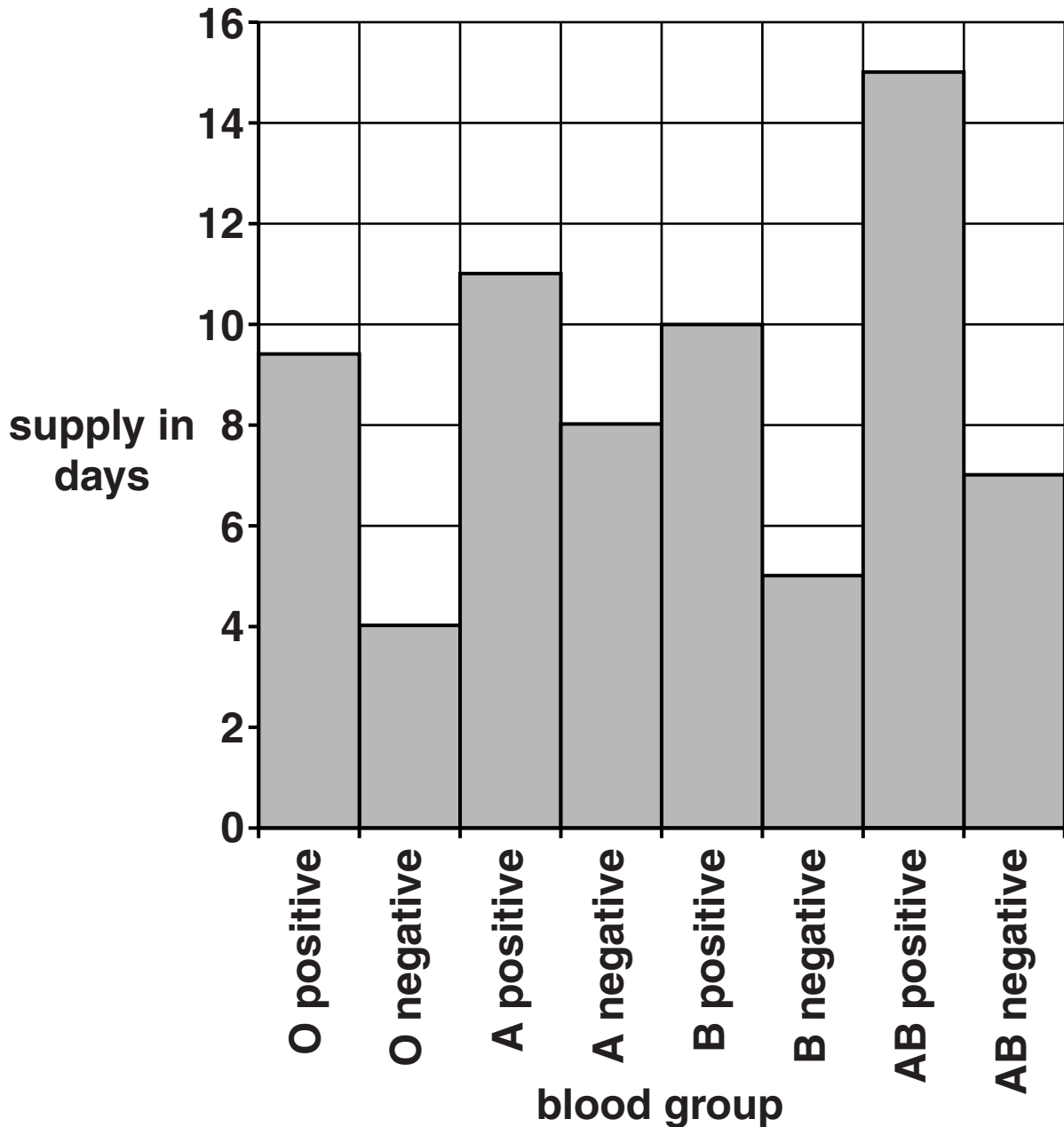
Write down ONE OTHER type of blood vessel.

_____ [1]

(d) The National Blood Service keeps a record of the blood stored in their blood banks.

Look at the graph.

It shows how many days' supply there is of each blood group.



- (i) One blood group will only last for 5 days if there are no more donations.

Write down the name of this blood group.

_____ [1]

- (ii) If there are no more donations how many days longer will AB POSITIVE last compared to AB NEGATIVE?

answer _____ days [1]

- (e) The blood banks store MORE O positive than any other blood group.

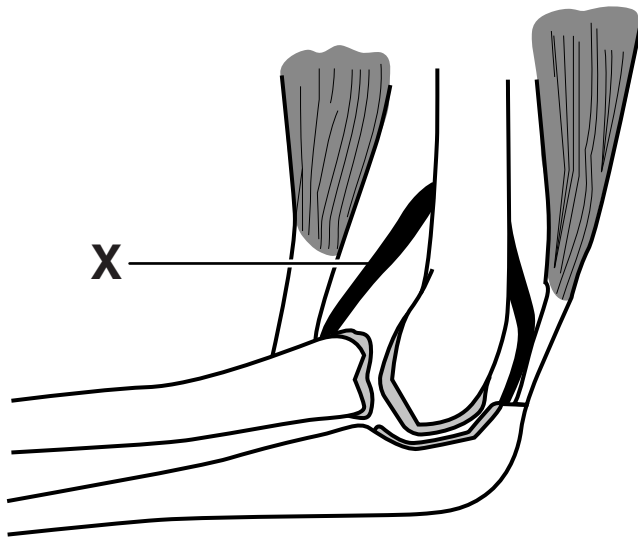
The stocks of O positive will be used up faster than any other group.

Suggest why.

_____ [1]

[Total: 6]

5 Look at the picture of an elbow joint.



(a) Part X joins two bones together.

Put a **ring** around the name of part X.

CARTILAGE

HUMERUS

LIGAMENT

TENDON

[1]

(b) Finish the sentences about the elbow joint by writing one word in each space.

The human body contains different types of joints.

The elbow joint is an example of a

_____ joint.

The joint is moved by TWO muscles called the

biceps and the _____ .

These two muscles pull the arm in opposite

directions. Muscles that pull in opposite directions

are called _____ muscles.

[3]

[Total: 4]

6 This question is about the kidney.

(a) The kidney removes waste products from the body.

(i) Write down the word used to describe removing waste products that have been MADE IN THE BODY.

_____ [1]

(ii) The kidney removes urea from the blood.

Put a tick (✓) in ONE box to show two more substances removed by the kidney.

carbon dioxide and salt

glucose and carbon dioxide

glucose and water

salt and water

[1]

(b) Urea is made in the body when a substance is broken down.

Write about how urea is made.

In your answer include

- **where urea is made**
- **which substance urea is made from.**

[2]

[Total: 4]

7 Humans have organs called lungs to take oxygen into the blood.

(a) The pike is a large fish found in fresh water.

(i) Write down the name of the organs a pike uses to take oxygen into its blood.

_____ [1]

(ii) What does a pike use oxygen for?

_____ [1]

(b) If a pike is taken out of water it cannot get oxygen into its blood.

Explain why.

_____ [1]

[Total: 3]

8 Ben and Daniel are twins.

They are NOT identical because they came from two different eggs.

Each egg was fertilised by a different sperm.

(a) What is meant by the term fertilisation?

_____ [1]

(b) Ben is much taller than Daniel.

Suggest why they are different heights.

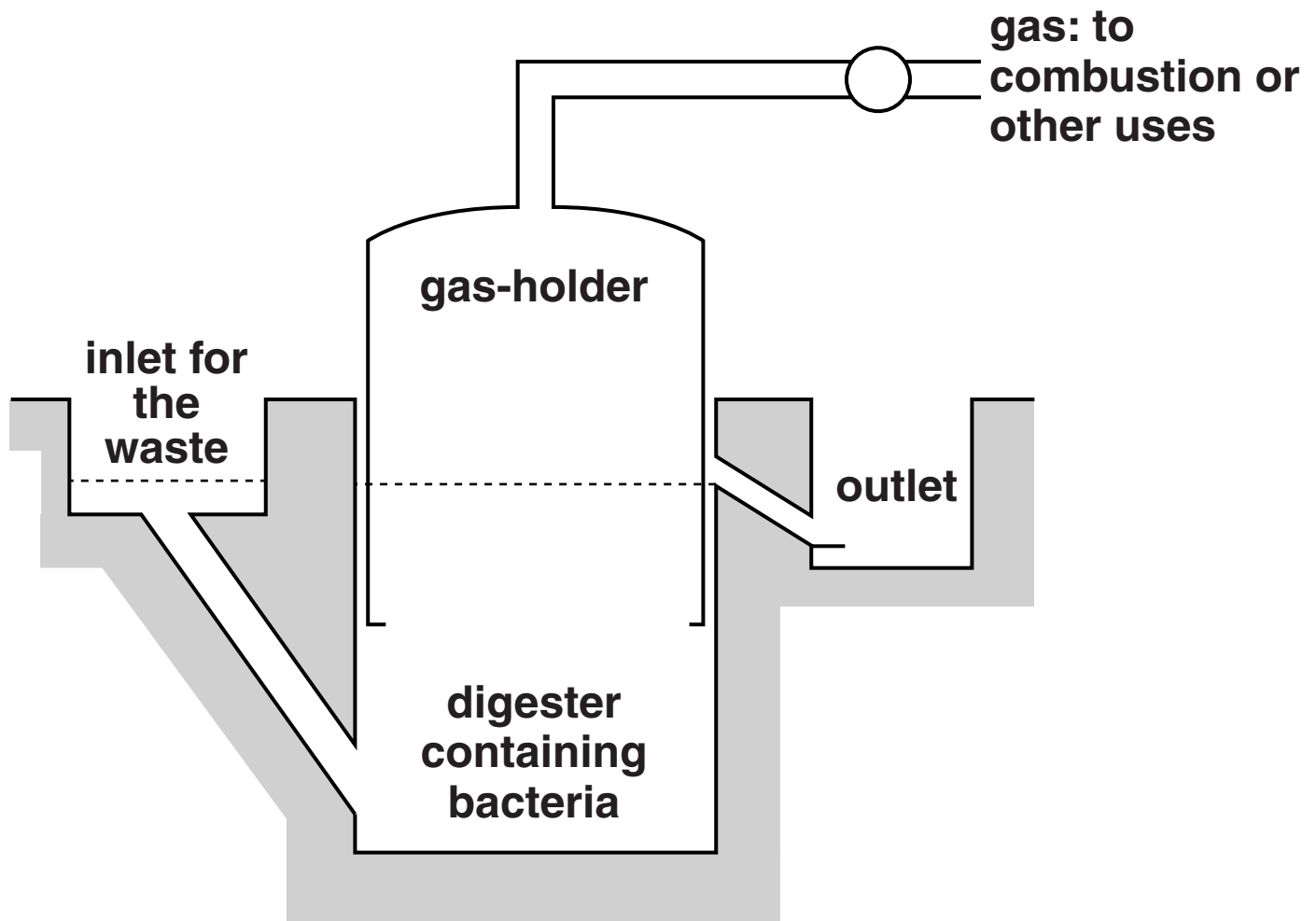
_____ [2]

[Total: 3]

SECTION C – MODULE B6

9 Look at the diagram of a digester.

The digester turns waste into fuel.



(a) What waste can be used in the digester?

Put ticks (✓) in the boxes next to the TWO types of waste that can be used.

glass bottles

plastic bottles

sewage

steel cans

vegetable peelings

[2]

(b) The digester produces a MIXTURE of gases.

The main gas in this mixture is methane.

Write down the name of this mixture of gases.

_____ **[1]**

(c) The digester contains bacteria.

Bacterial cells are different from both plant and animal cells.

Look at the table.

It shows features found in three different cells, A, B and C.

CELL A	CELL B	CELL C
cell wall	cell wall	no cell wall
chloroplasts	no chloroplasts	no chloroplasts
cytoplasm	cytoplasm	cytoplasm

Which of these three cells could be a bacterial cell?

cell _____

[1]

(d) Chicken dung is waste that is used in digesters.

On average, a chicken produces 0.15 kg of dung per day.

A fridge would use the energy from 4.5 kg of chicken dung per day to run for 24 hours.

How many chickens would be needed to make 5 fridges work for 24 hours?

Show your working out.

answer _____ [2]

[Total: 6]

10 (a) Richard owns a brewery making alcoholic drinks.

The alcoholic drinks are made by fermentation.

Fermentation uses yeast.

(i) What type of micro-organism is yeast?

_____ [1]

(ii) Different alcoholic drinks are made from different plants.

Match the alcoholic drink to the plant it is made from.

Draw three straight lines.

ALCOHOLIC DRINK

beer

cider

wine

PLANT

apples

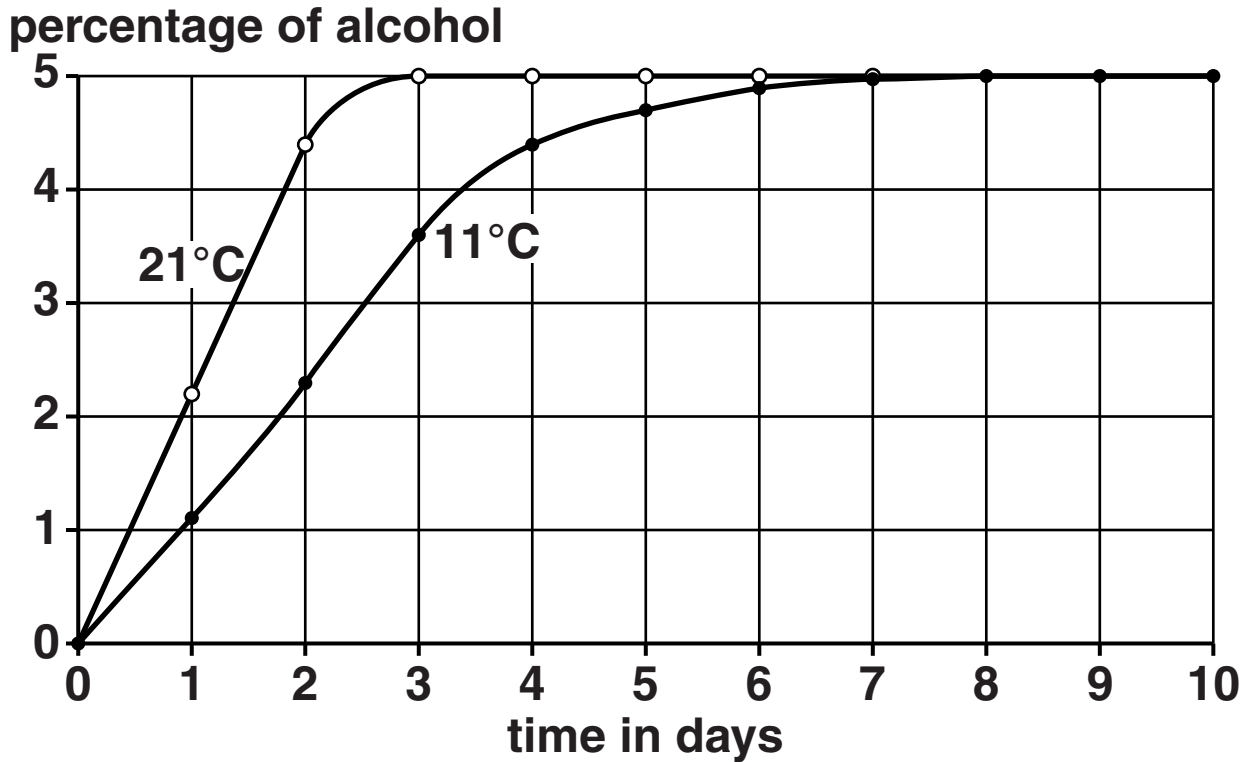
grapes

barley

[2]

(b) Look at the graph.

It shows how the percentage of alcohol changes when beer is brewed at two different temperatures.



(i) What is the alcohol content of the beer brewed at 21 °C after two days?

answer _____ % [1]

(ii) The graph shows that alcohol is produced more quickly at 21 °C than at 11 °C.

Suggest how TEMPERATURE affects yeast reproduction.

_____ [1]

(c) In Brazil, alcohol is added to petrol to make fuel for cars.

Write down the name of this fuel.

_____ [1]

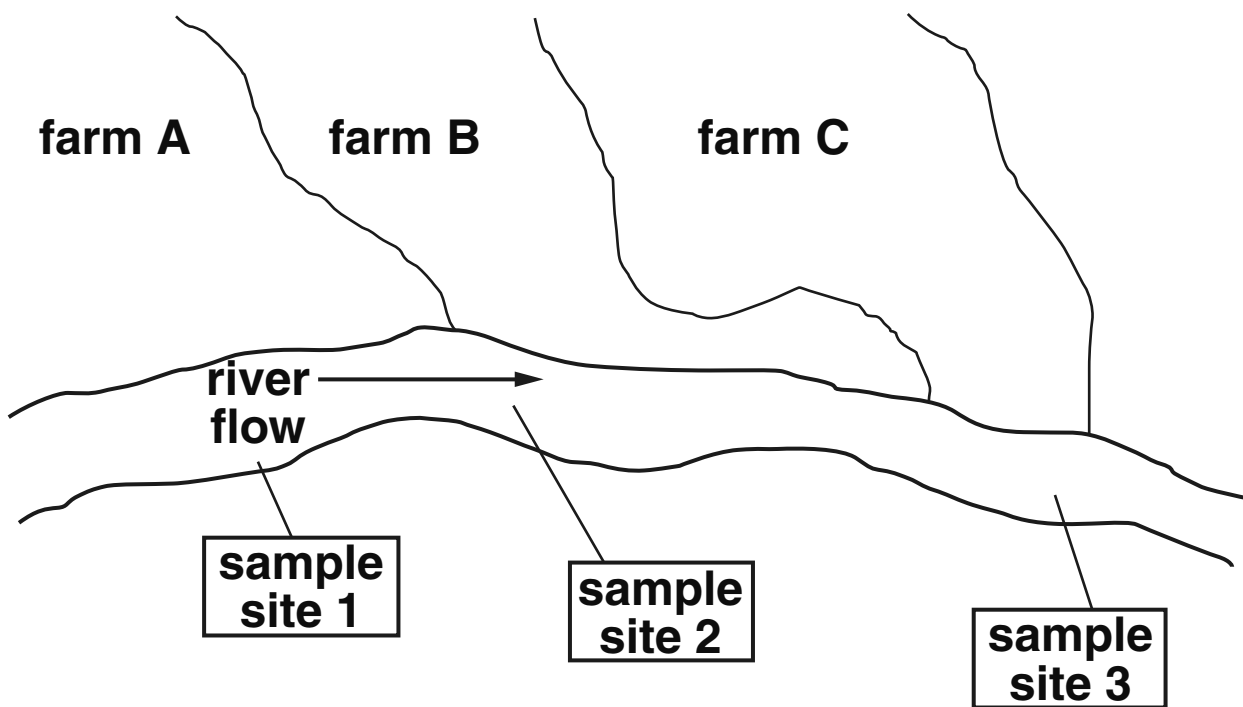
[Total: 6]

11 Cotton is a crop grown in many parts of the world.

Several types of insect can damage cotton plants.

Some farmers use insecticides to prevent damage to their crops.

Look at the diagram. It shows three neighbouring farms.



(a) Scientists measure the amount of insecticide found in the water at three sample sites, 1, 2 and 3.

Only farm B uses insecticides.

Which SAMPLE SITE would contain the highest amount of insecticide?

sample site _____

reason _____

[1]

(b) Farm A grows genetically engineered cotton to resist insect pests.

(i) Genetic engineering alters the genetic code in the nucleus of the cotton plant cells.

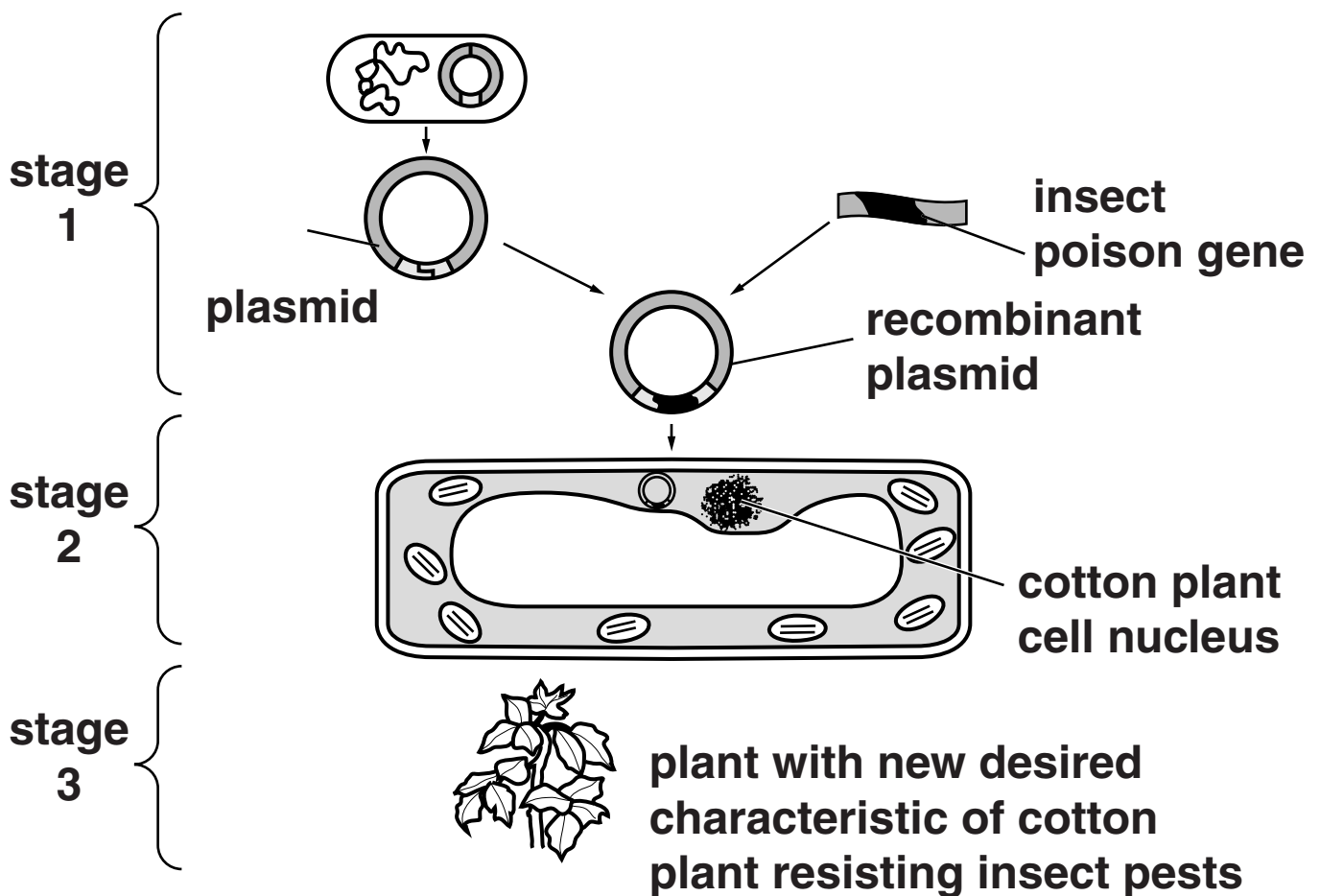
Write down the name of the chemical that forms the genetic code.

_____ [1]

(ii) The cotton plant has been genetically engineered to make a substance which is poisonous to insects.

Look at the diagram.

It shows how a genetically engineered cotton plant is produced.



How is a genetically engineered cotton plant produced?

Look at the diagram.

Describe what happens at stages 1, 2 and 3.

stage 1 _____

stage 2 _____

stage 3 _____

_____ [3]

[Total: 5]

12 (a) MRSA is a bacterial ‘superbug’.

Hospitals take strict measures to reduce the spread of MRSA.

They have antiseptic gel on each ward to use on hands.

Suggest how the MRSA bacteria might enter the body.

_____ [1]

(b) Patients who have a MRSA infection are given antibiotics.

ANTISEPTICS and ANTIBIOTICS are both used to kill micro-organisms that cause disease.

Write down TWO ways antibiotics are different from antiseptics.

1 _____

2 _____

_____ [2]

[Total: 3]

END OF QUESTION PAPER

BLANK PAGE

BLANK PAGE

BLANK PAGE

Copyright Information

OCR is committed to seeking permission to reproduce all third-party content that it uses in its assessment materials. OCR has attempted to identify and contact all copyright holders whose work is used in this paper. To avoid the issue of disclosure of answer-related information to candidates, all copyright acknowledgements are reproduced in the OCR Copyright Acknowledgements Booklet. This is produced for each series of examinations and is freely available to download from our public website (www.ocr.org.uk) after the live examination series.

If OCR has unwittingly failed to correctly acknowledge or clear any third-party content in this assessment material, OCR will be happy to correct its mistake at the earliest possible opportunity.

For queries or further information please contact the Copyright Team, First Floor, 9 Hills Road, Cambridge CB2 1GE.

OCR is part of the Cambridge Assessment Group; Cambridge Assessment is the brand name of University of Cambridge Local Examinations Syndicate (UCLES), which is itself a department of the University of Cambridge.