



H

**Monday 30 January 2012 – Afternoon**

**GCSE TWENTY FIRST CENTURY SCIENCE  
ADDITIONAL SCIENCE A**

**A215/02** Unit 1: Modules B4 C4 P4 (Higher Tier)

Candidates answer on the Question Paper.  
A calculator may be used for this paper.

**Duration:** 40 minutes

**OCR supplied materials:**  
None

**Other materials required:**

- Pencil
- Ruler (cm/mm)



Candidate forename		Candidate surname	
-----------------------	--	----------------------	--

Centre number						Candidate number				
---------------	--	--	--	--	--	------------------	--	--	--	--

**INSTRUCTIONS TO CANDIDATES**

- Write your name, centre number and candidate number in the boxes above. Please write clearly and in capital letters.
- Use black ink. HB pencil may be used for graphs and diagrams only.
- Answer **all** the questions.
- Read each question carefully. Make sure you know what you have to do before starting your answer.
- Write your answer to each question in the space provided. Additional paper may be used if necessary but you must clearly show your candidate number, centre number and question number(s).
- Do **not** write in the bar codes.

**INFORMATION FOR CANDIDATES**

- The number of marks is given in brackets [ ] at the end of each question or part question.
- The total number of marks for this paper is **42**.
- A list of physics equations is printed on page 2.
- The Periodic Table is printed on the back page.
- This document consists of **20** pages. Any blank pages are indicated.

**TWENTY FIRST CENTURY SCIENCE EQUATIONS****Useful Relationships****Explaining Motion**

$$\text{speed} = \frac{\text{distance travelled}}{\text{time taken}}$$

$$\text{momentum} = \text{mass} \times \text{velocity}$$

$$\text{change of momentum} = \text{resultant force} \times \text{time for which it acts}$$

$$\text{work done by a force} = \text{force} \times \text{distance moved in the direction of the force}$$

$$\text{change in energy} = \text{work done}$$

$$\text{change in GPE} = \text{weight} \times \text{vertical height difference}$$

$$\text{kinetic energy} = \frac{1}{2} \times \text{mass} \times [\text{velocity}]^2$$

**Electric Circuits**

$$\text{resistance} = \frac{\text{voltage}}{\text{current}}$$

$$\frac{\text{voltage across primary coil}}{\text{voltage across secondary coil}} = \frac{\text{number of turns in primary coil}}{\text{number of turns in secondary coil}}$$

$$\text{energy transferred} = \text{power} \times \text{time}$$

$$\text{power} = \text{potential difference} \times \text{current}$$

$$\text{efficiency} = \frac{\text{energy usefully transferred}}{\text{total energy supplied}} \times 100\%$$

**The Wave Model of Radiation**

$$\text{wave speed} = \text{frequency} \times \text{wavelength}$$

Answer **all** the questions.

1 Lucien runs a race.

(a) Oxygen and water move between his blood and his muscle cells.

Describe and explain the **processes** that move oxygen and water between his blood and muscle cells.

.....

.....

.....

..... [3]

(b) As Lucien runs his body loses water.

This makes his blood plasma more concentrated.

Put a **ring** around the correct words to complete each sentence.

Lucien's kidneys will now produce urine that is

**more dilute / more concentrated / the same concentration.**

This is an example of **homeostasis / evaporation / hypothermia.**

[1]

[Total: 4]

## 2 Charlotte exercises.

Her body reacts by sweating to cool her down.

(a) A **negative feedback** mechanism stops her getting too cold.

Put a tick (✓) in the box next to the correct statement about negative feedback.

Negative feedback ...

... increases rates of all chemical reactions as body temperature rises.

... works to change any steady state.

... between effectors and receptors reverses any changes that take place.

... decreases rates of all chemical reactions as body temperature rises.

[1]

(b) Charlotte's body has some effectors which cool her, and some which warm her.

What is the advantage to Charlotte of having antagonistic effectors like this?

Put a tick (✓) in the box next to the correct statement.

Antagonistic effectors ...

... cancel each other out.

... allow a sensitive response to a stimulus.

... use more energy.

... prevent a steady state.

[1]

(c) When Charlotte becomes hot, her body reacts in a number of steps.

From each pair of statements choose the correct one.

Place them in the correct order by writing one letter in each box.

- A**      The hypothalamus processes the information.
- B**      The pituitary processes the information.
- C**      Receptors in the brain detect blood temperature.
- D**      Receptors in the skin detect blood temperature.
- E**      Blood vessels in the skin vasoconstrict.
- F**      Blood vessels in the skin vasodilate.

--	--	--

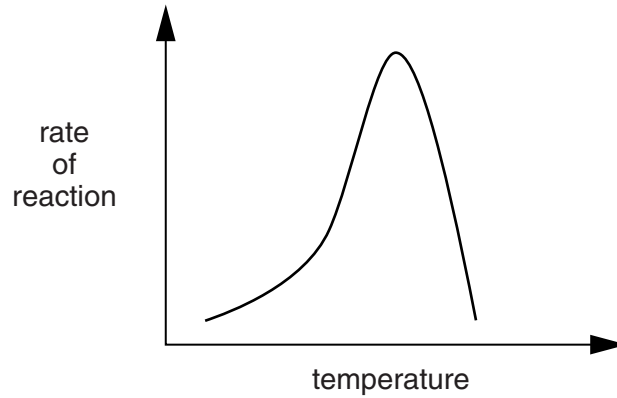
[2]

[Total: 4]

3 Jon does an experiment with an enzyme.

He changes the temperature and measures how fast the reaction is.

He records his results in a graph.



He asks some friends to explain the shape of this graph.

Which **two** give him correct answers?



**Megan**  
At low temperature the substrate is denatured.



**Harry**  
Raising the temperature increases collisions between enzyme and substrate.



**Jason**  
The enzyme only works at the optimum temperature.



**Cassie**  
At high temperature, collisions between enzyme and substrate stop.



**Philippa**  
At high temperature, the enzyme is denatured.



**Sandeep**  
Changing the temperature changes the substrate.

answers ..... and ..... [2]

[Total: 2]

- 4 (a) Urine is produced by the kidneys.

The volume and concentration of urine produced are controlled by the hormone ADH.

Put a tick (✓) in the box next to the correct choice to complete each sentence.

ADH is released by the	adrenal gland.	<input type="checkbox"/>
	hypothalamus.	<input type="checkbox"/>
	pituitary gland.	<input type="checkbox"/>

It is carried to the kidneys by the	blood.	<input type="checkbox"/>
	neurons.	<input type="checkbox"/>
	lymph.	<input type="checkbox"/>

More ADH results in urine which is more	concentrated.	<input type="checkbox"/>
	dilute.	<input type="checkbox"/>
	sugary.	<input type="checkbox"/>

[2]

- (b) The secretion of ADH is affected by the drugs alcohol and Ecstasy.

Place **two** ticks (✓) in each row of the table to show the effects.

drug	effect on ADH secretion		effect on urine volume	
	increase	decrease	increase	decrease
alcohol	<input type="checkbox"/>	<input type="checkbox"/>	<input type="checkbox"/>	<input type="checkbox"/>
Ecstasy	<input type="checkbox"/>	<input type="checkbox"/>	<input type="checkbox"/>	<input type="checkbox"/>

[2]

[Total: 4]

5 The element helium was discovered in the Sun by astronomers before it was found on Earth.  
It was discovered when astronomers used telescopes to study the Sun.

Suggest how an astronomer can use a telescope to tell what elements are in the Sun.

.....

.....

.....

.....

..... [3]

[Total: 3]



6 Tony studies the halogens.

- (a) Complete the table to show the colour and state (**solid**, **liquid** or **gas**) of each halogen at room temperature.

name	colour	state
bromine		
chlorine		
iodine		

[3]

- (b) Tony studies the reactions of sodium with the halogens.

Sodium, Na, reacts with bromine, Br<sub>2</sub>.

Write a balanced chemical equation for this reaction.

..... [2]

- (c) Tony knows that sodium chloride melts at 800 °C, and that sodium iodide melts at 660 °C.

Suggest the melting point of sodium bromide.

melting point ..... °C [1]

- (d) When a sodium atom reacts it turns into a sodium ion, Na<sup>+</sup>.

What happens during this process?

Put a tick (✓) in the box next to the correct answer.

It gains an electron.

It loses an electron.

It gains a proton.

It loses a proton.

[1]

[Total: 7]

7 Atoms are made of protons, neutrons and electrons.

(a) Which of the following is most important when deciding which element an atom belongs to?

Put a tick (✓) in the box next to the best answer.

The number of protons in the atom.

The number of neutrons in the atom.

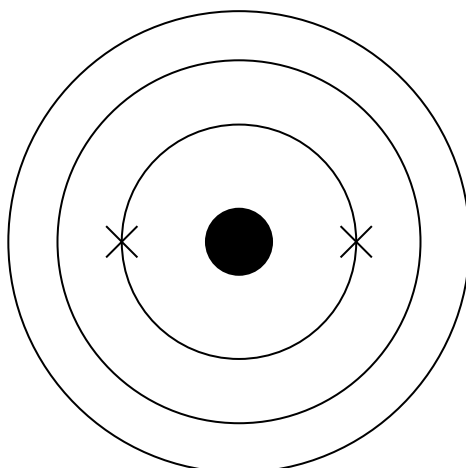
The relative atomic mass of the atom.

The size of the atom.

[1]

(b) A sulfur atom has 16 protons, 16 neutrons and 16 electrons.

Complete the diagram to show the electron arrangement of a sulfur atom.

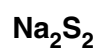


[1]

(c) Mary finds out that sulfur reacts with sodium to make sodium sulfide.

The sodium ion is  $\text{Na}^+$  and the sulfide ion is  $\text{S}^{2-}$ .

Put a ring around the formula of sodium sulfide.



[1]

(d) The element to the right of sulfur in the Periodic Table is chlorine.

Chlorine forms a chloride ion,  $\text{Cl}^-$ .

What is the difference between a chloride ion and a chlorine atom?

Put a tick (✓) in the box next to the correct answer.

The ion has one electron more than the atom.

The ion has one electron less than the atom.


The ion has one electron shell more than the atom.

The ion has one electron shell less than the atom.

[1]

[Total: 4]

8 Jack has a car accident.



He drives his car into a wall.

The seat-belt and crumple zone of the car stop Jack getting hurt.

(a) Here are some possible reasons why the crumple zone protects Jack.

Put a tick (✓) in the box next to the correct reason.

- It transfers kinetic energy from the car to Jack.
- It increases the time for which forces act on Jack.
- It provides a counter force to the force from the wall.
- It redirects the force from the wall towards the ground.

[1]

(b) The speed of the car drops from 15 m/s to zero as it collides with the wall.

This takes a time of 0.1 s. The car moves 0.75 m in that time.

Calculate the average speed of the car during its collision with the wall.

average speed = ..... m/s [1]

(c) Complete the following sentences.

Choose words from this list.

**force**

**friction**

**mass**

**momentum**

**weight**

**work**

Jack has to replace the car seat-belt after the accident.

This is because it has become permanently stretched.


During the accident, a ..... acts on the seat-belt.

This does ..... on the seat-belt.

[2]

[Total: 4]

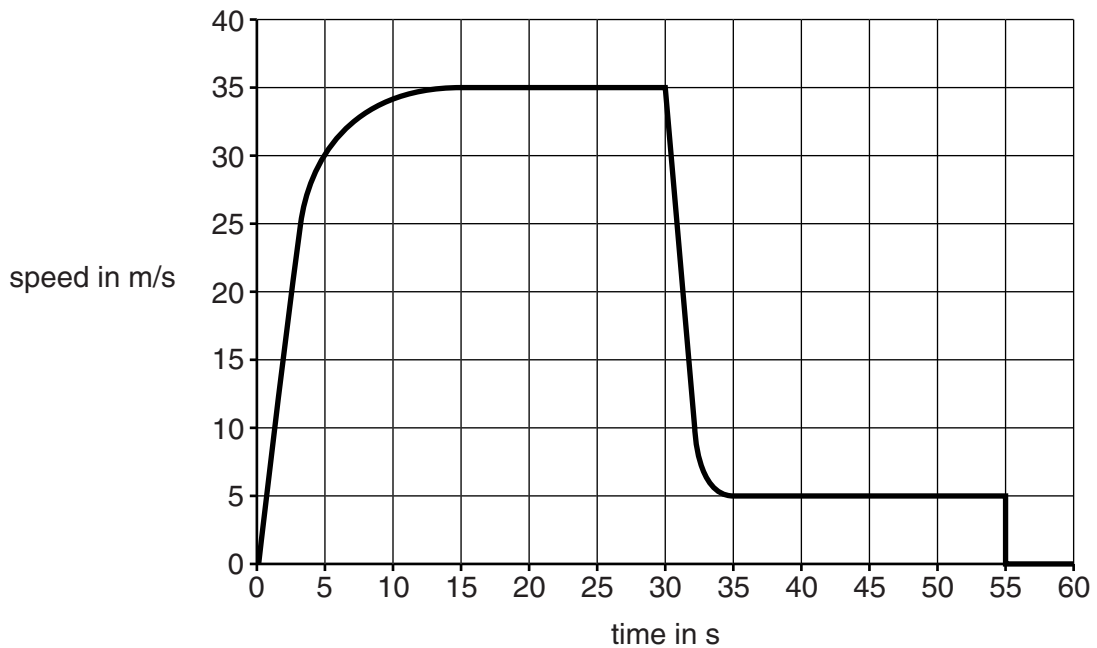
9 Jim jumps out of an aeroplane.



He opens his parachute on the way down and lands safely.

Jim uses a speed sensor to measure his speed as he falls towards the ground.

He uses the data from the sensor to draw a speed–time graph.

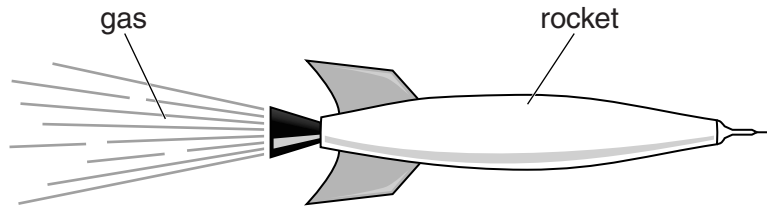


(a) Use the graph to complete this table.

event during Jim's fall	time in seconds
jumps out of the aeroplane	0
reaches his maximum speed	
opens his parachute	
lands safely on the ground	



10 A small rocket in space switches on its engine for 10 seconds.



High speed gas comes out of the engine.

This increases the momentum of the rocket in the forward direction.

(a) The gas exerts a force of 1000N on the rocket when the rocket has a speed of 50m/s.

Calculate the increase of momentum of the rocket in 10s.

momentum increase = ..... kgm/s [1]

(b) Explain **why** the momentum of the rocket increases while the engine is switched on.

.....

.....

.....

.....

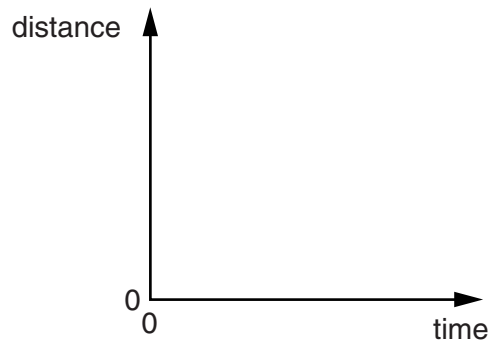
.....

.....

..... [3]



- (c) On the axes below, sketch a distance–time graph for the rocket while the engine is turned on. Assume that it starts off at zero time and zero distance.



[1]

[Total: 5]

**END OF QUESTION PAPER**

**18**  
**BLANK PAGE**

**PLEASE DO NOT WRITE ON THIS PAGE**

**PLEASE DO NOT WRITE ON THIS PAGE**



**Copyright Information**

OCR is committed to seeking permission to reproduce all third-party content that it uses in its assessment materials. OCR has attempted to identify and contact all copyright holders whose work is used in this paper. To avoid the issue of disclosure of answer-related information to candidates, all copyright acknowledgements are reproduced in the OCR Copyright Acknowledgements Booklet. This is produced for each series of examinations and is freely available to download from our public website ([www.ocr.org.uk](http://www.ocr.org.uk)) after the live examination series.

If OCR has unwittingly failed to correctly acknowledge or clear any third-party content in this assessment material, OCR will be happy to correct its mistake at the earliest possible opportunity.

For queries or further information please contact the Copyright Team, First Floor, 9 Hills Road, Cambridge CB2 1GE.

OCR is part of the Cambridge Assessment Group; Cambridge Assessment is the brand name of University of Cambridge Local Examinations Syndicate (UCLES), which is itself a department of the University of Cambridge.

