



Roll No.

Answer Sheet No. _____

Sig. of Candidate. _____

Sig. of Invigilator. _____

PHYSICS HSSC-II
SECTION – A (Marks 17)

Time allowed: 25 Minutes

NOTE:- Section-A is compulsory and comprises pages 1-2. All parts of this section are to be answered on the question paper itself. It should be completed in the first 25 minutes and handed over to the Centre Superintendent. Deleting/overwriting is not allowed. Do not use lead pencil.

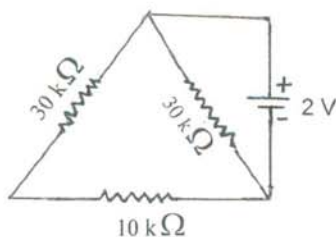
Q. 1 Circle the correct option i.e. A / B / C / . Each part carries one mark.

(i) A closed surface contains two equal and opposite charges. The net electric flux from the surface will be _____

- A. Negative
- B. Positive
- C. Infinite
- D. Zero

(ii) What will be the current in the circuit shown?

- A. $\frac{1}{45} A$
- B. $\frac{1}{10} A$
- C. $\frac{1}{5} A$
- D. $5 A$



(iii) Watt-hour measures _____.


- A. Current
- B. Electric energy
- C. Power
- D. Voltage

(iv) According to Faraday's Law, emf induced in a circuit depends on _____

- A. Maximum magnetic flux
- B. Rate of change of magnetic flux
- C. Change in magnetic flux
- D. Initial magnetic flux

(v) An electron beam is moving parallel. The nature of force between them is _____

- A. Attractive
- B. Repulsive
- C. Attractive or repulsive depends on the magnitude of velocity
- D. None of these



(vi) In Compton scattering, the change in wavelength is maximum if _____

- A. Angle of scattering is 90°
- B. Angle of scattering is 60°
- C. Angle of scattering is 180°
- D. Angle of scattering is Zero

(vii) Temperature coefficient of thermister is _____.

- A. Always negative
- B. Always positive
- C. Changing from positive to negative and vice versa
- D. May be positive or may be negative

PHYSICS HSSC-II

Time allowed: 2:35 Hours

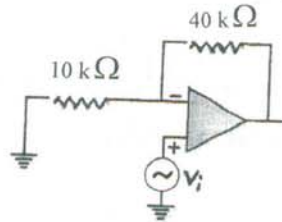
Total Marks Sections B and C: 68

NOTE:- Sections 'B' and 'C' comprise pages 1-2 and questions therein are to be answered on the separately provided answer book. Answer any fourteen parts from Section 'B' and attempt any two questions from Section 'C'. Use supplementary answer sheet i.e. Sheet-B if required. Write your answers neatly and legibly.

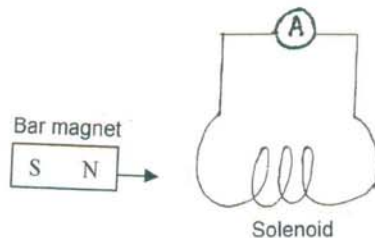
SECTION – B (Marks 42)

Q. 2 Attempt any FOURTEEN parts. The answer to each part should not exceed 3 to 4 lines. (14 x 3 = 42)

- (i) Calculate the gain of non-inverting amplifier shown in figure.



- (ii) Draw the symbolic circuit diagram for exclusive NOR (XNOR) gate.
- (iii) Write down the heating effect of current.
- (iv) State Ohm's law.
- (v) A parallel plate capacitor of capacitance C is charged using a battery of emf V_0 . After the capacitor is charged, the battery is removed and the distance between the capacitors is doubled. Find the new energy stored.
- (vi) Show graphically the phase relationship between the current and the voltage across an inductor.
- (vii) You are given a number of $2\mu F$ capacitors, each with a maximum working potential difference of $10V$. How would you construct capacitors of:
- $1\mu F$ capacitance, suitable for use upto $20V$.
 - $2\mu F$ capacitance, suitable for use upto $20V$.
- (viii) A source of light is placed at a distance of $0.1m$ from a photocell and cut-off potential (stopping potential) is found to be V_0 . If the lamp is now placed at a distance of $2m$, what will be the cut-off potential.
- (ix) Define Elastic limit.
- (x) What is a photon?
- (xi) Why ordinary silicon diodes do not emit light?
- (xii) When a magnet is pushed into the solenoid, the ammeter records a small current:
- Explain why a current is produced.
 - State what is observed:
 - When the magnet is pulled out of the solenoid.
 - When the magnet is stationary inside the solenoid.



- (xiii) Verify that an ohm times farad is equivalent to second.
- (xiv) A dry battery can deliver $3000J$ of energy to a small $2W$ electric motor before the battery is exhausted. For how many minutes does the motor run?
- (xv) When base current is changed from $30\mu A$ to $80\mu A$, the collector current changes from $1mA$ to $3.5mA$. Find the current gain in CE configuration.
- (xvi) The effects of radiation on the human body depend on the properties of the radiation. Explain why a source emitting α - particles inside the body is more dangerous than a source of the same activity emitting γ - rays inside the body.
- (xvii) What do you understand by an equipotential surface in an electric field?
- (xviii) A lamp is connected to the secondary coil of the transformer by long leads which have a resistance of 2.5 ohms. The power input to the primary coil is $40W$ and the transformer is 100% efficient. Calculate the potential drop across the resistance of the leads.
- (xix) By assuming that a hydrogen atom consists of an electron of charge e^- orbiting a proton of charge e^+ . Calculate the ratio of the electric force between the electron and proton to the gravitational force between them. (Mass of electron $m_e = 9.1 \times 10^{-31} kg$ mass of proton $m_p = 1.67 \times 10^{-27} kg$.)

SECTION – C (Marks 26)

- Note:-** Attempt any TWO questions. (2 x 13 = 26)
- Q. 3**
- a. Derive an expression for torque acting on a current carrying rectangular coil placed in a uniform magnetic field. 07
- b. A coil of $0.1m \times 0.1m$ and of 200 turns carrying a current $1.0mA$ is placed in a uniform magnetic fields of $0.1T$. Calculate the maximum torque that acts on the coil. 06
- Q. 4**
- a. What are isotopes? Explain mass spectrograph to demonstrate the existence of isotopes 2+6
- b. Find the mass defect and the binding energy for tritium, if the atomic mass of tritium is 3.016049μ . 05
- Q. 5**
- a. Define Impedance. 02
- b. What do you understand by R-C and R-L series circuit? Calculate the impedance of both the circuits by drawing their impedance diagram. 07
- c. A circuit has an inductance of $\frac{1}{\pi}H$ and resistant of 2000Ω . A $50Hz$ A.C is supplied to it. Calculate the reactance and impedance offered by the circuit. 04

— 2H A-1008 (L) —