

Candidate Name	Centre Number	Candidate Number

WELSH JOINT EDUCATION COMMITTEE
ENTRY LEVEL CERTIFICATE



CYD-BWYLLGOR ADDYSG CYMRU
TYSTYSGRIF LEFEL MYNEDIAD

705/01

Entry Level Certificate

CHILD CARE

A.M. THURSDAY, 23 March 2006

(1 Hour)

Examiner only

TOTAL MARK	
-----------------------	--

ADDITIONAL MATERIALS

In addition to this examination paper, you will need:
Coloured pens/pencils.

INSTRUCTIONS TO CANDIDATES

Write your name, centre number and candidate number in the spaces at the top of this page.

Answer **all** questions.

Write your answer in the spaces provided in this booklet.

If you have difficulty in reading a question, put up your hand and the teacher-in-charge will read it to you.

INFORMATION FOR CANDIDATES

The number of marks is given in brackets at the end of each question or part-question.

No certificate will be awarded to a candidate detected in any unfair practice during the examination.

*Answer **all** questions in the spaces provided.*

1. The following sentences may be **true** or **false**.

Underline clearly the word in brackets which you think is correct. [2]

(a) Foster parents look after other people's children. [True / False]

(b) Adoption is a temporary arrangement (only for a short time). [True / False]

(c) The government pays adults to foster children. [True / False]

(d) Adopted children are allowed to visit their natural parents. [True / False]

2. Read carefully the following ‘heads’ and ‘tails’.

Match them up correctly and **complete** the sentences below.

[2½]

Heads	Tails
(a) Most babies born in Britain are delivered by a	Paediatrician
(b) The takes over from the midwife ten (10) days after the birth of a baby and will visit for up to six (6) weeks.	G.P. (Doctor)
(c) Pregnancy tests can be done by a	Gynaecologist
(d) A specialises in the care of children from the time they are born.	Health Visitor
(e) A specialises in the functions and diseases of the female reproductive system.	Midwife

3. New-born babies show a number of movements called reflexes or reflex actions.

Underline five (5) important reflexes or reflex actions in the list below.

[2½]

Touching

Grasping

Running

Scratching

Walking

Hiding

Rooting

Falling

Sucking

Skipping

4. Complete the diagram giving **four (4)** safety points that must be followed before allowing a young child to play in the garden. [4]

One has been done for you.



Take away any poisonous plants


(i)
.....
.....

(ii)
.....
.....

(iii)
.....
.....

(iv)
.....
.....

5. (a)



The chart below is found on formula milk powder containers.

Use the information in the chart to answer the following questions.

Average weight of baby in kg.	Age of baby from:	Level scoops of formula	Amount of water in ml	Number of feeds in 24 hours
3.0kg	Birth	3	85 ml	6
4.0kg	2 weeks	4	115 ml	6
5.0kg	2 months	6	170 ml	5
6.5kg	4 months	7	200 ml	5
7.5kg	6 months	8	225 ml	4

(i) How many level scoops of formula are needed for a baby aged **four (4)** months? [½]

.....

(ii) How many feeds should be given to a **two (2)** month old baby in 24 hours? [½]

.....

(iii) How much water is needed to mix a feed for a baby aged **six (6)** months? [½]

..... ml

(iv) What is the average weight of a **two (2) week** old baby? [½]

..... kg

(b) When making up a bottle for feeding a baby, how should the scoop be used in order to obtain the correct amount of milk powder? [1]

.....

6. The following are names of voluntary organisations that help and support families.



Read the following situations and recommend the best organisation that could help the family concerned. [2½]

(a) Richard is a single parent who is very lonely and misses adult company.

Organisation:

(b) Jenny and Bill live with their four children. Bill is often violent towards Jenny. She fears for her own safety and that of her children.

Organisation:

(c) Julie is a single parent with three young children. The people who live next door thinks she neglects the children and goes out in the nights leaving the children alone.

Organisation:

(d) Mary and Colin have been arguing constantly and are finding married life very difficult.

Organisation:

(e) Michelle and Peter have just found out that their newborn baby is severely brain damaged. They are very anxious and afraid.

Organisation:

7. (a)



(i) Give **three (3)** examples of **positive** 😊 emotions in children. [1½]

1.
2.
3.

(ii) Give **three (3)** examples of **negative** ☹️ emotions in children. [1½]

1.
2.
3.

(b) Suggest **four (4)** ways that parents can encourage **positive** 😊 emotions in children. [4]

1.
.....
2.
.....
3.
.....
4.
.....

8. (a) Look at the menu of a picnic lunch for parents and their young children.

Cheese Sandwiches (wholemeal bread)
 Celery Sticks
 Raw Carrot
 Sausage Rolls
 Crisps
 Wholemeal Scones
 Strawberry Yoghurt
 Orange Juice (for the children)
 Tea (for the parents)

- (i) Name **two (2)** foods from the menu that contain dietary fibre.
1.
2.
- (ii) Name **two (2)** foods from the menu that are high in energy.
1.
2.
- (iii) Name **two (2)** foods from the menu that exercise the teeth and gums.
1.
2.
- (iv) Name **two (2)** foods from the menu that contain calcium.
1.
2.
- (v) Name **two (2)** foods from the menu that could be prepared and then frozen until required.
1.
2.

[5]

(b) (i) Name **two (2)** types of food packaging materials or containers that could be thrown away after use.

1.

2.

(ii) Name **two (2)** types of food packaging materials or containers that could be washed and re-used many times.

1.

2.

[2]

(c) List **four (4)** ways to **reduce** the risk of food poisoning when preparing food. [4]

(i)

.....

(ii)

.....



(iii)

.....

(iv)

.....

9. (a) Using the outline below, design a colourful and attractive duvet cover and pillowcase suitable for a **five (5)** year old child's bed. [2]



- (b) Suggest a suitable fabric from which the duvet set could be made. [½]
-

THIS IS THE LAST QUESTION.

10.



(a) A pregnant woman is advised not to smoke. State **two (2)** ways in which smoking can harm the new-born baby. [2]

(i)

.....

(ii)

.....

(b) Name **one (1)** harmful substance found in cigarette smoke. [1]

.....

The following references have been used in this paper:

Q.7. Minnett, P. *Child Care and Development* John Murray ISBN 0719586100