

Write your name here

Surname

Other names

Centre Number

Candidate Number

**Edexcel
Principal Learning**

| | | | | |
|--|--|--|--|--|
| | | | | |
|--|--|--|--|--|

| | | | |
|--|--|--|--|
| | | | |
|--|--|--|--|

Travel and Tourism

Level 1

Unit 1: Planning Journeys for Travel and Tourism

Tuesday 22 May 2012 – Morning

Time: 1 hour

Paper Reference

TT101/01

You do not need any other materials.

Total Marks

Instructions

- Use **black** ink or ball-point pen.
- **Fill in the boxes** at the top of this page with your name, centre number and candidate number.
- Answer **all** questions.
- Answer the questions in the spaces provided – *there may be more space than you need.*

Information

- The total mark for this paper is 40.
- The marks for **each** question are shown in brackets – *use this as a guide as to how much time to spend on each question.*

Advice

- Read each question carefully before you start to answer it.
- Keep an eye on the time.
- Try to answer every question.
- Check your answers if you have time at the end.

Turn over ►

P40587A

©2012 Pearson Education Ltd.

6/6/4/4



PEARSON

Answer ALL questions. Write your answers in the space provided.

You are employed as an assistant at the Tourist Information Centre (TIC) at King's Cross Station. Your job involves helping visitors with their travel and information needs.



- 1 As a TIC assistant you have to help people who are going on journeys for many different reasons.

Look at the information on page 3.

Link each person with the most appropriate reason to travel.

(4)

Below is an example of what to do. Note that lines may cross each other.



I enjoy relaxing by the pool.

Leisure



Person

Reason to travel



I am going to Paris to buy clothes and gifts.

Business



I am flying to Spain for two weeks to relax.

Visiting attractions



I flew to Brussels today for my meeting at 11.00 am.

Shopping



I am going to the Tower of London on Saturday.

Holiday

(Total for Question 1 = 4 marks)



(b) Heathrow airport is a gateway into the UK.

(i) What is meant by a UK gateway?

(2)

.....

.....

.....

.....

(ii) Name **one** other UK gateway.

(1)

.....

.....

(Total for Question 2 = 7 marks)



Read the following information about the Brown family before answering question 3.



The Brown family from London contact you about planning a journey to Paris by train. They wish to travel in June 2012 leaving after 9.00 am and returning before 10.00 pm.

- 3 (a) For you to be able to plan their journey you need information about their travel requirements.

Complete the table of information about their trip.

Some of the table has been completed for you.

(6)

| Information needed | Family details |
|--------------------------------|--|
| Nature of travellers | Two adults, one child under 10 and a baby. |
| Number in party | |
| Origin | |
| | Paris |
| Travel options | |
| Month and year of travel | |
| | After 9.00 am |
| Time of arrival back in London | Before 10.00 pm |



(b) During their journey the Brown family will have certain needs.

Describe **three** needs that the family might have during their trip from London to Paris by train.

(6)

1

.....

.....

.....

2

.....

.....

.....

3

.....

.....

.....

(Total for Question 3 = 12 marks)



4 Your next customer at the TIC is Mr Hardwick, from the USA. He is in London for the 2012 Olympic Games and needs help getting to the events he is attending. He is staying in a hotel close to Tottenham Court Road underground station.

He is going to attend the following events:

- the opening event at the Olympic Stadium at Stratford
- the three day horse riding event at Greenwich Park
- the football at Old Trafford in Manchester.

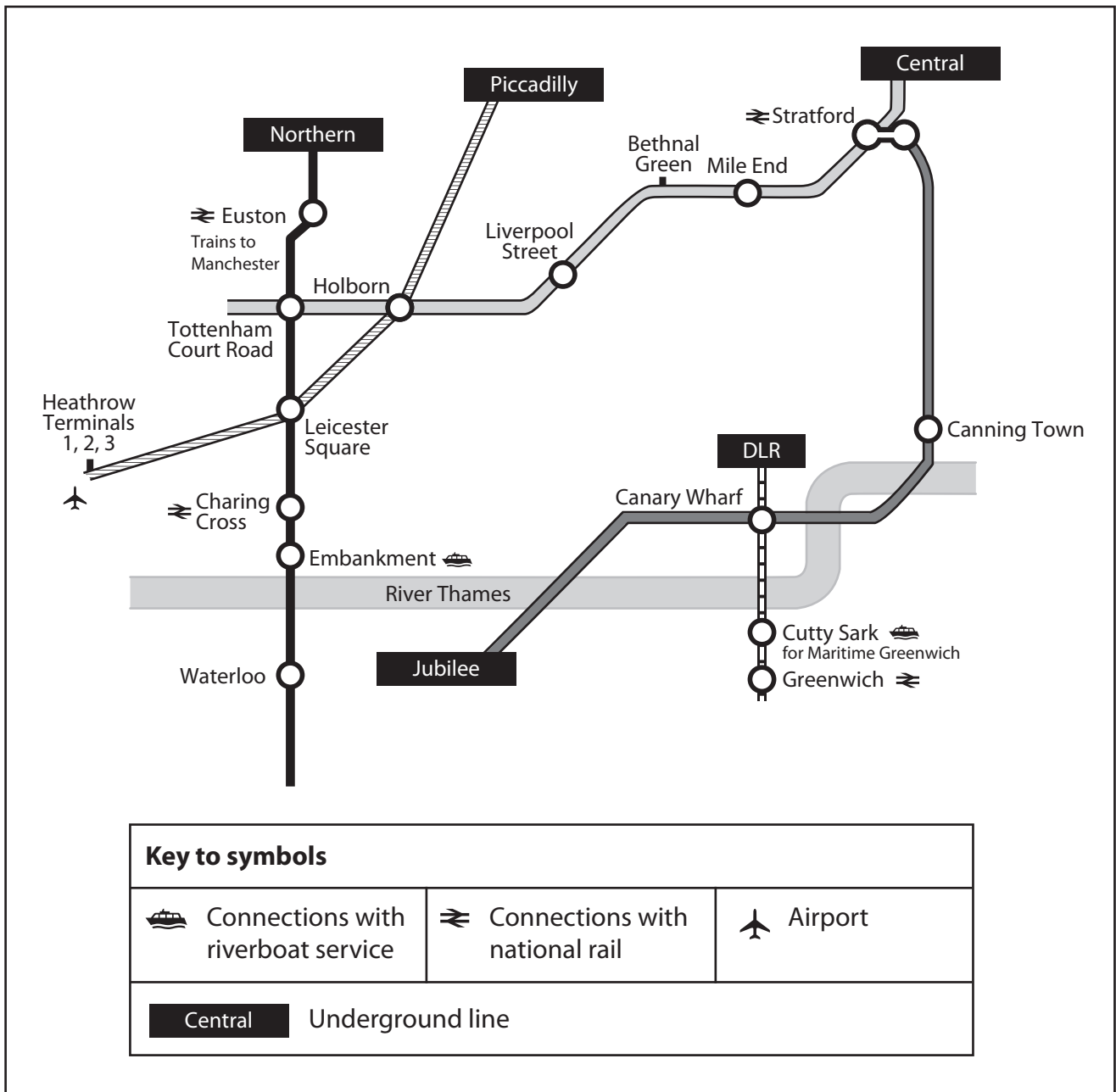


Figure 3



(a) Use the information from the map.

- (i) Identify which underground line Mr Hardwick should use to get to the Olympic Stadium.

(1)

- (ii) Mr Hardwick has decided to travel to Greenwich Park by underground and riverboat.

Identify the underground line Mr Hardwick should use to take him directly from his hotel to a station with a riverboat service.

(1)

- (iii) Identify which station allows Mr Hardwick to connect from the underground to a riverboat service.

(1)

- (iv) Mr Hardwick needs to travel to Manchester to watch a football match. He could go by train or by aeroplane.

Identify which underground line would take him to an airport.

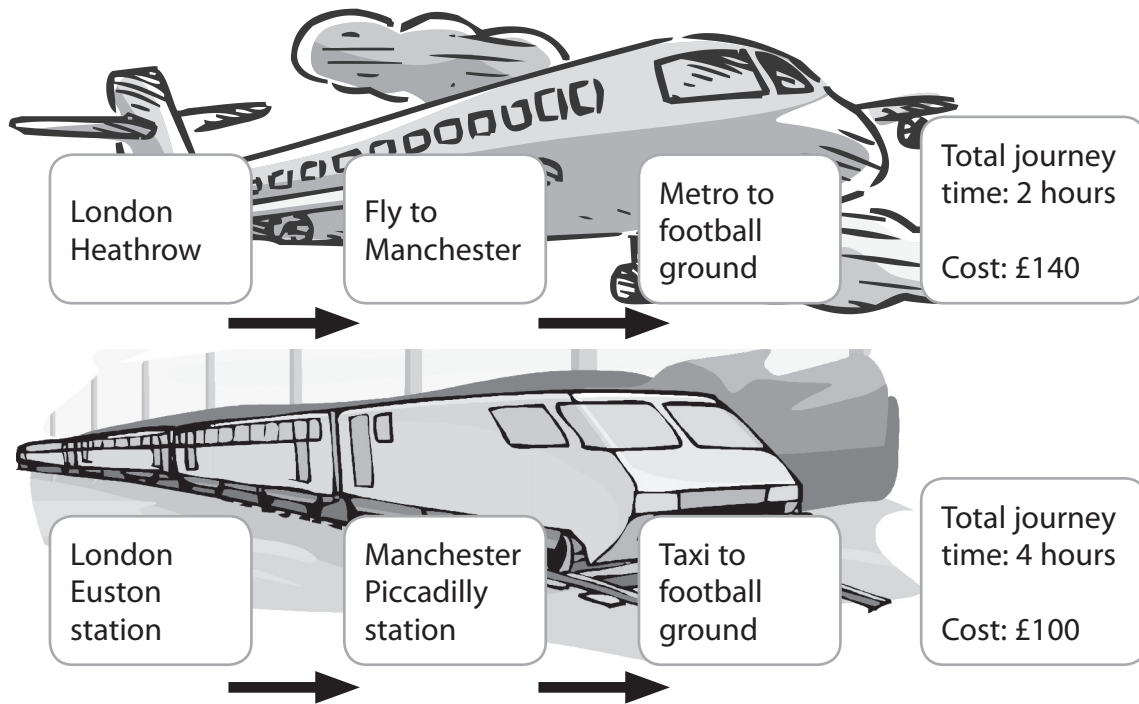
(1)

- (v) Identify which underground station has connections to a national rail station serving Manchester.

(1)



(b) Mr Hardwick asks you to plan two ways of getting to Manchester. One way is by aeroplane and the other is by train.



Explain the advantages and disadvantages of each of these journeys for Mr Hardwick.

(6)

.....

.....

.....

.....

.....

.....

.....

.....

.....

.....

.....

.....

.....

.....

.....

.....

.....

.....

.....

.....

.....

.....

.....

(Total for Question 4 = 11 marks)



5 While he is in London Mr Hardwick wants to visit other visitor attractions. Look at the following sources of information.

London Map

NEW EDITION



Covering popular tourist destinations including: Tower of London, Buckingham Palace, London Bridge, Oxford Street

File Edit View Favourites Tools Help

Back Forward Search

Address <http://www.visitthetoweroflondon.com>

Visit the Tower of London


The Tower of London is a popular tourist destination. People from all over the world visit the Tower when they are in London.

There are organised tours that you can take when you are at the Tower or else you can wander around the grounds freely.


Why not visit the Crown Jewels in the vaults or else explore the armoury.



The tower is open all year round. It can be busy during the Summer months so buy your tickets early.



Buckingham Palace St Paul's Cathedral Tower of London



Bus Timetable

Tower of London



The Official Destination Guide

Choose **two** of the sources of information.

Describe how each source of information could be useful to Mr Hardwick.

Source used

Description

.....

.....

.....

.....

.....

.....

.....

Source used

Description

.....

.....

.....

.....

.....

.....

.....

(Total for Question 5 = 6 marks)

TOTAL FOR PAPER = 40 MARKS



BLANK PAGE

